


SA2

Name : \_\_\_\_\_

3 November 2004

Class : Pr. 5 ( )



**CATHOLIC HIGH SCHOOL**  
**END-OF-YEAR EXAMINATION**

**PRIMARY FIVE**

**MATHEMATICS**  
**EM1/ EM2**

**BOOKLET A**

15 questions

25 marks

Total Time For Booklets A and B : 2 h 15 min

**INSTRUCTIONS TO CANDIDATES**

Do not open this booklet until you are told to do so.

Follow all instructions carefully.

Answer all questions.

Questions 1 to 5 carry 1 mark each. Questions 6 to 15 carry 2 marks each.  
For each question, four options are given. One of them is the correct answer.  
Make your choice (1, 2, 3 or 4). Shade the correct oval on the Optical Answer Sheet.  
( 25 marks )

1. Which one of the following has the digit 2 in the hundred thousands place?

- (1) 2 455 605
- (2) 4 677 201
- (3) 6 132 450
- (4) 8 213 370

2. What is the quotient when 124 is divided by 22?

- (1) 5
- (2) 8
- (3) 14
- (4) 110

3.  $\frac{4}{7} \div 9$  is the same as \_\_\_\_\_

- (1)  $\frac{4}{7} \times 9$
- (2)  $\frac{4}{7} \times \frac{1}{9}$
- (3)  $\frac{7}{4} \times 9$
- (4)  $\frac{7}{4} \times \frac{1}{9}$

4. Find the sum of 1.56, 4.046 and 2.68 .

- (1) 4.47
  - (2) 7.17
  - (3) 8.286
  - (4) 8.7
- 

5. Express 7 km 2 m in kilometres.

- (1) 7.2 km
  - (2) 7.02 km
  - (3) 7.002 km
  - (4) 7.0002 km
- 

6. The number of eggs carried in a lorry was 18 000 when rounded off to the nearest thousand. Which one of the following could be the actual number of eggs?

- (1) 17 459
  - (2) 17 603
  - (3) 18 521
  - (4) 18 968
- 

7. The length of 3 poles are  $\frac{5}{8}$  m,  $\frac{3}{4}$  m and  $1\frac{1}{2}$  m. The total length of the poles is \_\_\_\_\_ m.

- (1)  $1\frac{3}{8}$
  - (2)  $1\frac{7}{8}$
  - (3)  $1\frac{9}{14}$
  - (4)  $2\frac{7}{8}$
-

8. Which one of the following has the largest value?

- (1) 2.2
- (2) 2.41
- (3) 2.102
- (4) 2.368

---

9. If  $A : B = 2 : 3$  and  $B : C = 4 : 5$ , what is  $A : C$ ?

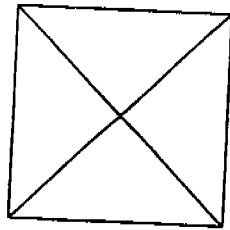
- (1) 2 : 5
- (2) 5 : 9
- (3) 3 : 10
- (4) 8 : 15

---

10.  $\frac{1}{10}$  of the marbles in a box are red. 0.35 of them are blue and the rest are green. How many percent of the marbles in the box are green?

- (1) 45%
- (2) 55%
- (3) 64%
- (4) 65%

11. The following square (not drawn to scale) has an area of  $36 \text{ cm}^2$ . It is divided into 4 identical triangles. What is the height and base of each triangle?



- (1) 2 cm and 9 cm
- (2) 3 cm and 6 cm
- (3) 4.5 cm and 9 cm
- (4) 6 cm and 6 cm

- 
12. Which of the following figures can tessellate?




Figure A




Figure B

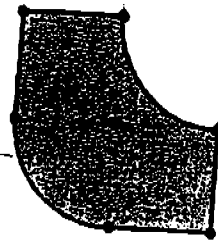


Figure C

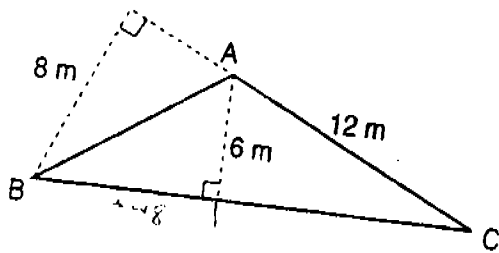
- (1) B only
- (2) A and B only
- (3) B and C only
- (4) All of the above

13. What is the maximum number of 4-cm solid cubes that can be fitted into a cuboid measuring 24 cm by 12 cm by 10 cm?
- (1) 36
  - (2) 45
  - (3) 180
  - (4) 720

14. The average of 5 numbers is 65. When a 6<sup>th</sup> number is added, the new average becomes 60. What is the 6<sup>th</sup> number?

- (1) 5
- (2) 25
- (3) 30
- (4) 35

15. The figure below is not drawn to scale. Find the length of BC.




- (1) 8 m
- (2) 9 m
- (3) 16 m
- (4) 36 m

Name : ..

Class : Pr. 5 ( )

\_\_\_\_\_ ( )

3 November 2004



**CATHOLIC HIGH SCHOOL  
END-OF-YEAR EXAMINATION**

**PRIMARY FIVE**

**MATHEMATICS  
EM1/ EM2**

**BOOKLET B**

35 questions

75 marks

Total Time For Booklets A and B : 2 h 15 min

**INSTRUCTIONS TO CANDIDATES**

Do not open this booklet until you are told to do so.

Follow all instructions carefully.

Answer all questions.

Marks obtained for Booklet A	25
Marks obtained for Booklet B	75
Total Marks	100

Questions 16 to 35 carry 1 mark each. Write your answers in the space provided.  
Give your answers in the units stated.

( 20 marks )

Do not write  
in this space

16. Find  $56 \times 87$ .

Answer: \_\_\_\_\_

17. What is the remainder of  $918 \div 46$ ?

Answer: \_\_\_\_\_

18. Find  $3\frac{1}{3} - 1\frac{5}{12}$ . (Leave your answer as a fraction in its lowest term.)

Answer: \_\_\_\_\_

SCORE



19. Arrange the following in ascending order.

$\frac{7}{4}$ , 1.3,  $\frac{5}{6}$ , 75%

Do not write  
in this space

Answer: \_\_\_\_\_

20. A chef had 2.7 kg of butter. He used 150 g to make a sandwich and another 1.5 kg to bake a cake. How many kilograms of butter did he have left?

Answer: \_\_\_\_\_ kg

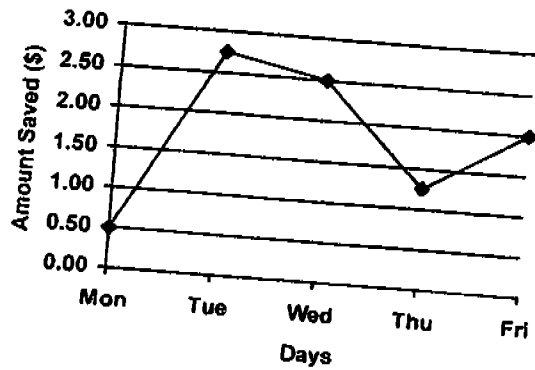
21. Find the length of a cube which has a volume of 512 cm<sup>3</sup>.

Answer: \_\_\_\_\_ cm

SCORE

The line graph below shows Jennifer's daily savings over 5 days. Use the graph to answer questions 22 and 23.

Do not write in this space



22. What was the average amount of money Jennifer saved each day over the past 5 days?

Answer: \$ \_\_\_\_\_

23. If Jennifer's pocket money is \$5 every day, how much did she spend altogether over the past 5 days?

Answer: \$ \_\_\_\_\_

24. The average weight of 5 boys is 34.5 kg. The weight of the first 4 boys are 28 kg, 25 kg, 40.2 kg and 38.6 kg respectively. Find the weight of the 5<sup>th</sup> boy.

Answer: \_\_\_\_\_ kg

SCORE: \_\_\_\_\_

25. A machine can bind 26 books in 5 minutes. How many books can it bind in 2 hours at the same rate?

Do not write  
in this space

Answer: \_\_\_\_\_

26. Find the height of a triangle with a base of 16 cm and an area of  $56 \text{ cm}^2$ .

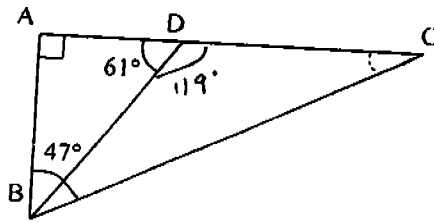
Answer: \_\_\_\_\_ cm

27. You are facing East. After turning  $135^\circ$  anti-clockwise, which direction will you be facing?

Answer: ...

SCORE

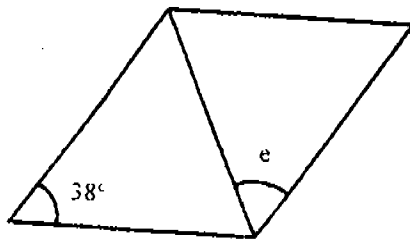
28. In the following figure (not drawn to scale), ABC is a right-angled triangle. Given that  $\angle ABC = 47^\circ$  and  $\angle ADB = 61^\circ$ , find the value of  $\angle DBC$ .



Do not write  
in this space

Answer: \_\_\_\_\_

29. The following rhombus is not drawn to scale. Find  $\angle e$ .

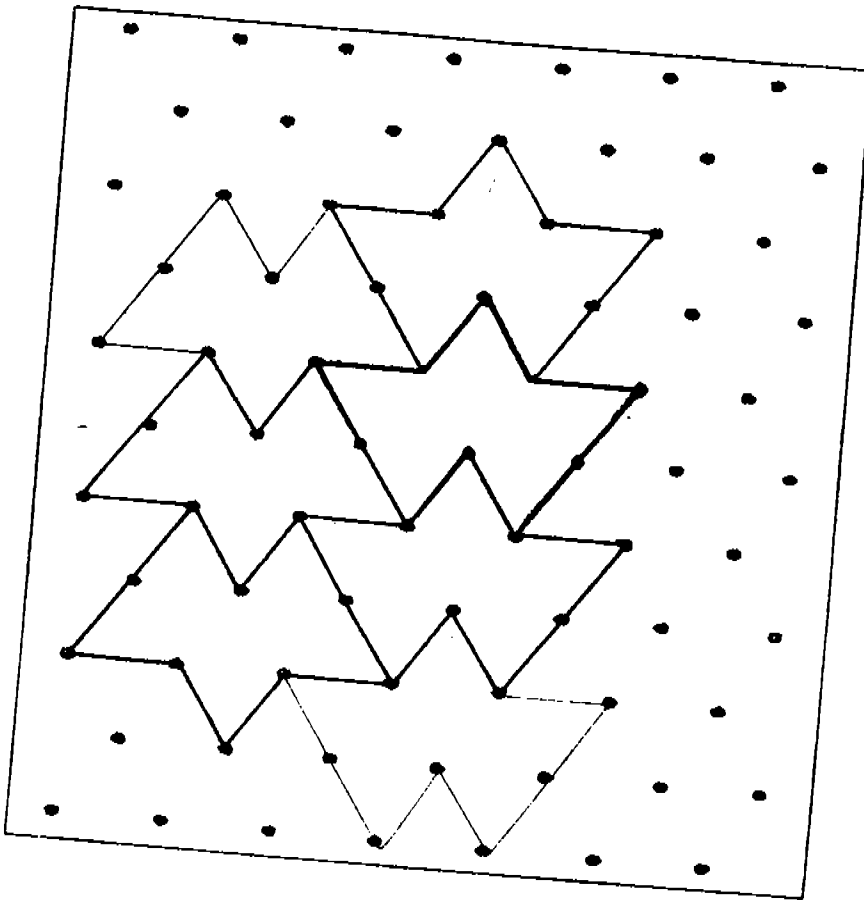


Answer: \_\_\_\_\_

SCORE:

30. The pattern in the box shows part of a tessellation. Extend the tessellation by drawing two more unit shapes in the space provided within the box.

Do not write  
in this space



SCORE

31. Mary signed up for the following handphone package. It cost \$20 per month for 100 minutes of free talktime. If her handphone usage last month was 259 minutes, how much did she have to pay?

**Handphone Package**

First 100 mins	Free talktime (for \$20 per month)
Next 100 mins	10 cents per min
Above 200 mins	25 cents per min

Do not write  
in this space

Answer: \$ \_\_\_\_\_

32. The weight of 3 parcels are in the ratio 5 : 3 : 9. If the heaviest parcel weighs 32.4 kg, find the difference in weight between the 2 lighter parcels.

Answer: \_\_\_\_\_ kg

SCORE

33. Peter and Kasim were reading a book each. The books they were reading had 300 pages each. Kasim read 16 pages more than Peter. If they had read a total of 234 pages, how many more pages must Kasim read to finish his book?

Do not write  
in this space

Answer: \_\_\_\_\_

34. A rectangular area has a length of 63 m. If  $1/7$  of paint can be used to paint  $27 \text{ m}^2$  and a total of  $28 \text{ l}$  of paint was used to paint the rectangular area, what is the width of the area?

Answer: \_\_\_\_\_ m

35. Tom, Jerry and Sally share a sum of money. Tom's share is  $\frac{3}{8}$  of the sum of money. Jerry's share is  $\frac{1}{3}$  of what Tom and Sally receive. What fraction of the sum of money is Sally's share?

Answer: \_\_\_\_\_

SCORE:

For questions 36 to 50, show your working clearly in the space below each question and write your answers in the spaces provided. The number of marks available is shown in brackets [ ] at the end of each question or part-question. ( 55 marks )

36. The table below shows the price of some books sold at a book fair.

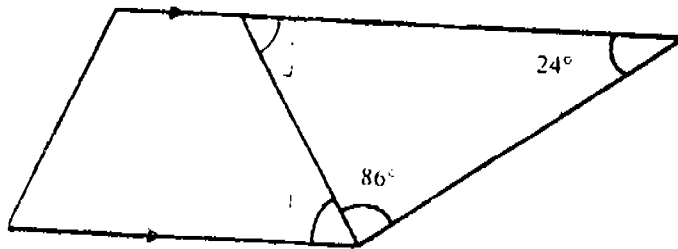
Type of books	Price (\$)
Comics	6
Children's story books	8
Adult's fiction books	12

How much did Samuel spend if he buys 3 comics, 1 children's story book and 5 adult's fiction books?

Answer: \_\_\_\_\_ [2]

Do not write in this space

37. The following trapezium is not drawn to scale. Find  $\angle j$ .

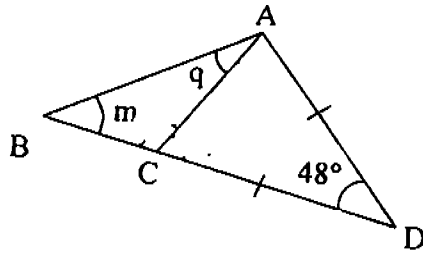


Answer \_\_\_\_\_ [2]

SCORE



38. In the following figure (not drawn to scale), find the sum of  $\angle m$  and  $\angle q$ .



Do not write  
in this space

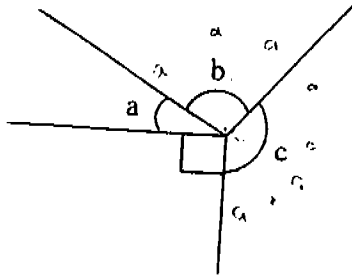
Answer: \_\_\_\_\_ [2]

39. Jeremy bought 6 writing pads and a book. He gave the cashier \$100 and received a change of \$28. If the book cost 3 times as much as a writing pad, how much does the book cost?

Answer: \_\_\_\_\_ [3]

SCORE

40. In the following figure (not drawn to scale),  $\angle a$ ,  $\angle b$  and  $\angle c$  are in the ratio  $1 : 3 : 5$ . Find the difference between the smallest and the largest angle.



Do not write  
in this space

Answer: \_\_\_\_\_ [3]

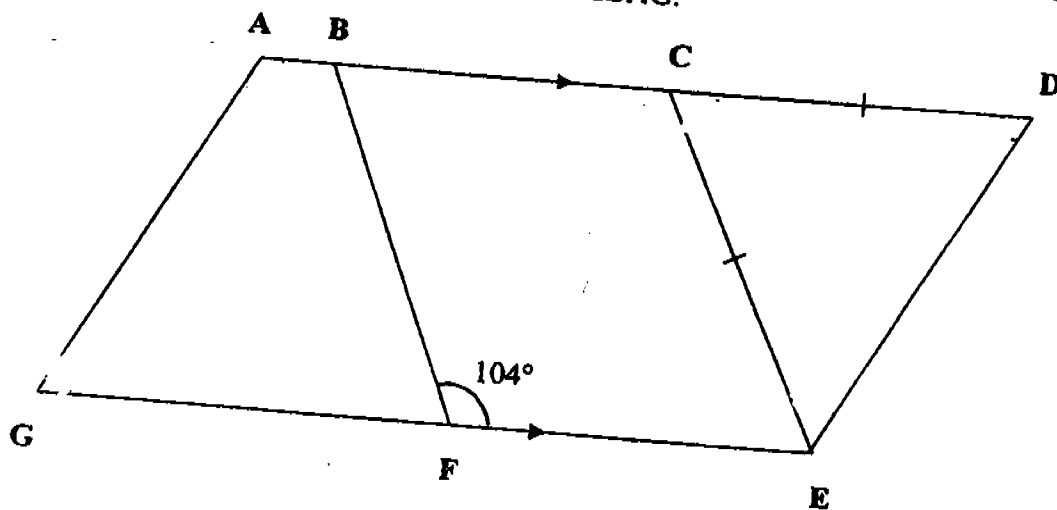
41. A rectangular tank with a capacity of  $6000 \text{ cm}^3$  was 20 cm long and 12 cm wide. It contained a stone and some water up to its brim. After the stone was removed, the water level dropped to 20 cm. How much water must be added to fill the tank to its brim after the stone was removed?

Answer: \_\_\_\_\_ [3]

SCORE \_\_\_\_\_

42. In the following figure (not drawn to scale), BCEF is a rhombus. AG is parallel to DE and  $CE = CD$ . Find  $\angle CED$  and  $\angle BAG$ .

Do not write  
in this space



Answer: \_\_\_\_\_ [4]

SCORE

43. Jim and Fatimah shared some sweets at first. Jim had 4 more sweets than Fatimah. After the number of sweets that Jim had was doubled and the number that Fatimah had was tripled, they had 98 sweets altogether. How many sweets did Fatimah have finally?

Do not write  
in this space

Answer:

[4]

SCORE

44. Draw an isosceles triangle whereby  $\angle LMN = 70^\circ$  and  $MN = LN = 8$  cm. Measure the length of LM.

Do not write in this space

M

N

Answer: \_\_\_\_\_ [4]

SCORE

45. Tap A takes 6 hours to fill up a pool measuring 25 m by 21 m by 1.2 m with water. Tap B takes 9 hours to fill up the same pool with water. How long will it take to fill up the same pool with water if both taps are turned on at the same time?

Do not write  
in this space

Answer: \_\_\_\_\_ [4]

SCORE:

46. A blouse costs 25% less than a skirt. The usual price of a skirt and 2 such blouses is \$60. How much will 2 such skirts and a blouse cost if there is a 20% discount on all three items?

Do not write  
in this space

Answer \_\_\_\_\_ [4]

SCORE

47. A jar which is  $\frac{4}{5}$  filled with water weighs  $2\frac{7}{8}$  kg. It weighs  $2\frac{1}{2}$  kg when it is  $\frac{2}{3}$  full, What is the weight of the jar?

Do not write  
in this space

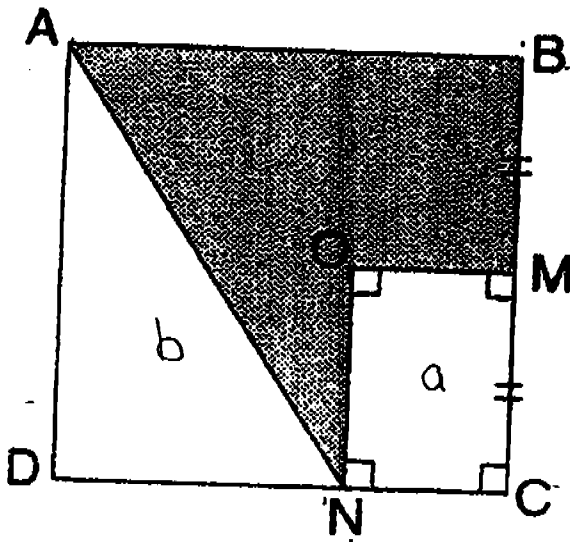
Answers \_\_\_\_\_ [5]

SCORE \_\_\_\_\_



48. In the following diagram (not drawn to scale), the perimeter of square ABCD is 120 cm. Given that DN is twice the length of NC and BM is equal in length to MC. find the area of the shaded region.

Do not write in this space



Answer:

151

SCORE

49. A book rental shop charges the following rates shown in the table below :

Duration	Rates
First 2 weeks	\$12 per book
Each subsequent day after the first 2 weeks	20¢ per book

A person who borrows 4 books or more will be charged 50¢ less per book for the first 2 weeks for all the books he or she rents. A person who returns his or her books within 2 weeks will get a refund of \$4 per book returned. No refund will be given for books returned after 2 weeks. !

What was the total amount Susan had to pay if she had borrowed 5 books and returned 2 books within 2 weeks and the rest of the books 20 days after borrowing?

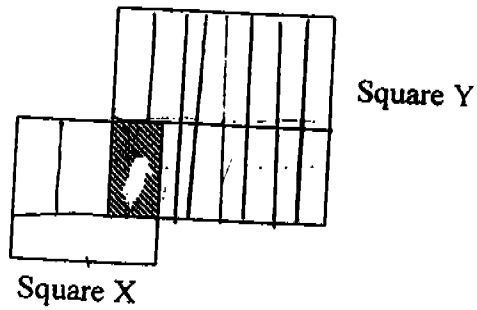
Do not write  
in this space

Answer: \_\_\_\_\_ [5]

SCORE:

50. In the following figure (not drawn to scale), the ratio of the area of Square X to the area of Square Y is 1 : 4. If the shaded area forms 25% of Square X, what percentage of the whole figure is not shaded? (Leave your answer as a fraction in its simplest form.)

Do not write  
in this space



Answer: \_\_\_\_\_ [5]

--- END ---

SCORE

CATHOLIC HIGH SCHOOL  
END OF THE YEAR EXAMINATION  
PRIMARY FIVE MATHEMATICS  
2004

SAZ

- |   |   |
|---|---|
| 1) 4  | 28) 18  |
| 2) 1  | 29) 17  |
| 3) 2  | 30)   |
| 4) 3  | 31) 44.75   |
| 5) 3  | 32) 7.2   |
| 6) 2  | 33) 175 pages   |
| 7) 4  | 34) 12  |
| 8) 2  | 35) $\frac{3}{8}$                                     |
| 9) 4  | 36) \$ 86   |
| 10) 2                                       | 37) $70^\circ$  |
| 11) 2                                       | 38) $66^\circ$  |
| 12) 4                                       | 39) \$ 24   |
| 13) 1                                       | 40) $120^\circ$                                       |
| 14) 4                                       | 41) 1.2 litres  |
| 15) 3                                       | 42) Angle CED = $52^\circ$<br>Angle BAG = $128^\circ$ |
| 16) 4872                                    | 43) 54 sweets   |
| 17) 44                                      | 44) 8 cm  |
| 18) $1 \frac{11}{12}$                       | 45) 3 hrs 36 mins                                     |
| 19) 75%, $\frac{5}{6}$ , 1.3, $\frac{7}{4}$ | 46) \$ 52.80  |
| 20) 1.05                                    | 47) 625 g   |
| 21) 8                                       | 48) $450 \text{ cm}^2$                                |
| 22) 1.80                                    | 49) \$ 54.60  |
| 23) 16                                      | 50) 94 14/19%   |
| 24) 40.7                                    |   |
| 25) 624                                     |   |
| 26) 7                                       |   |
| 27) North-West                              |   |