


SAT



**NANYANG PRIMARY SCHOOL**

**FIRST SEMESTRAL EXAMINATION  
2005**

**PRIMARY 4  
MATHEMATICS**

**TIME: 1 HOUR 45 MINUTES**

|                  |             |
|------------------|-------------|
| <b>Section A</b> | <b>/ 40</b> |
| <b>Section B</b> | <b>/ 40</b> |
| <b>Section C</b> | <b>/ 20</b> |

**Total: /100**



Name: \_\_\_\_\_ ( )

Class: Primary 4 ( )

Parent's Signature: \_\_\_\_\_

**DO NOT OPEN THIS BOOKLET UNTIL YOU ARE TOLD TO DO SO.**

**FOLLOW ALL INSTRUCTIONS CAREFULLY.**

**SHOW ALL WORKINGS IN THE SPACES PROVIDED.**

**Section A**

Questions 1 to 20 carry two marks each. For each question, four options are given. One of them is the correct answer. Make your choice (1, 2, 3 or 4). Shade the oval (1, 2, 3 or 4) on the Optical Answer sheet.

(Total: 40 marks)

1. What is the sum of the value of the digits '3' and '6' in 35 628?

- (1) 36  
(3) 3 600

- (2) 306  
(4) 30 600

( )

2. Which one of the following is the best estimate for  $2\,557 \times 688$ ?

- (1)  $2\,500 \times 600$   
(3)  $2\,600 \times 600$

- (2)  $2\,500 \times 700$   
(4)  $2\,600 \times 700$

( )

3. The least number of marbles that can be shared equally among 2, 3 or 6 boys is \_\_\_\_\_.

- (1) 6  
(3) 18

- (2) 12  
(4) 36

( )

4. Find the sum of all the odd factors of 30.

- (1) 24  
(3) 54

- (2) 48  
(4) 78

( )

5. What is the difference between the quotient and the remainder of  $4986 \div 7$ ?

(1) 698

(2) 710

(3) 712

(4) 714

( )

6. Joe saves \$ 212 every month. How much does he save in a year? Give your answer to the nearest ten dollars.

(1) \$ 2 500

(2) \$ 2 540

(3) \$ 2 544

(4) \$ 2 550

( )

7. A is  $\frac{3}{11}$ . B is  $\frac{2}{11}$  more than A.

Which one of the following statements is true?

(1) A is  $\frac{1}{11}$  more than B.

(2) The value of B is  $\frac{1}{11}$ .

(3) The sum of A and B is  $\frac{5}{11}$ .

(4) The difference between A and B is  $\frac{2}{11}$ .

( )

8.  $\frac{9}{14} - \frac{1}{7} = \frac{1}{\square}$

What is the missing denominator?

(1) 7

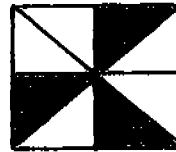


(2) 2

(3) 8

(4) 14

( )

9. Write the correct mixed number for the diagram below.



(1)  $2\frac{1}{2}$

(2)  $2\frac{7}{8}$

(3)  $3\frac{1}{8}$

(4)  $3\frac{1}{4}$

( )

10. 13 quarters is the same as \_\_\_\_\_.

(1)  $2\frac{1}{4}$

(2)  $2\frac{3}{4}$

(3)  $3\frac{1}{4}$

(4)  $3\frac{3}{4}$

( )

11. What is  $\frac{4}{9}$  of 27?

(1) 9

(2) 12

(3) 3

(4) 36

( )

12. What fraction of the following set is shaded?



(1)  $\frac{1}{3}$

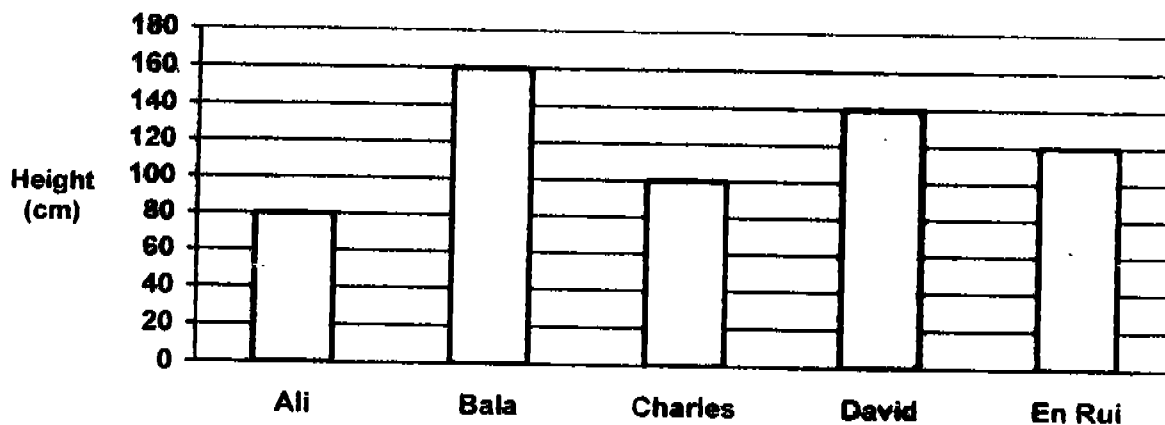
(2)  $\frac{2}{3}$

(3)  $\frac{3}{4}$

(4)  $\frac{8}{8}$

( )

13. The graph below shows the height of 5 boys. Study it carefully and answer the question below.



En Rui is 40 cm taller than \_\_\_\_\_.

(1) Ali

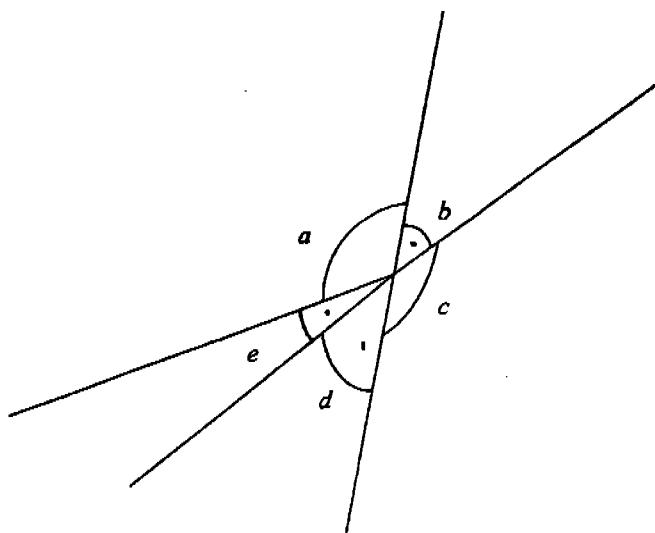
(2) Bala

(3) Charles

(4) David

( )

14. The figure below is not drawn to scale. How many angles are smaller than a right angle?



- (1) 5  
(3) 3

- (2) 2  
(4) 4

( )

15. How many right angles make  $540^\circ$ ?

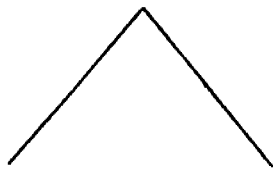
- (1) 6  
(3) 3

- (2) 9  
(4) 12

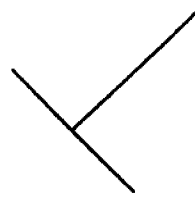
( )

16. Which of the following is a pair of perpendicular lines?

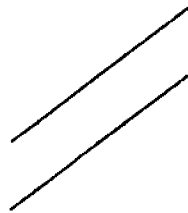
(1)



(2)



(3)



(4)



( )

17. Which of the following letters has only one pair of parallel lines?

(1) T

(2) E

(3) F

(4) L

( )

18. Find the perimeter of a square which has an area of  $36 \text{ cm}^2$ .

(1) 12 cm

(2) 18 cm

(3) 24 cm

(4) 36 cm

( )





**Section B**

Questions 21 to 40 carry 2 marks each. Write your answers in the blanks provided.

(Total: 40 marks)

21. Complete the number pattern below.

6, 18, 8, 24, 14, \_\_\_\_\_

Answer: \_\_\_\_\_

22. The sum of 3 768 and 7 509 when rounded off to the nearest hundred is \_\_\_\_\_.

Answer: \_\_\_\_\_

23. How many multiples of 3 are there between 20 and 50?

Answer: \_\_\_\_\_

24. The highest common factor of 16, 24 and 32 is \_\_\_\_\_.

Answer: \_\_\_\_\_

25. Samy made some kites from Monday to Wednesday. Each day he made twice as many kites as the previous day. Over the 3 days, he made 350 kites. How many kites did he make on the third day?

Answer: \_\_\_\_\_

26. What is the greatest 3-digit whole number you can multiply by 5 and get a product of less than 1 950?

Answer: \_\_\_\_\_

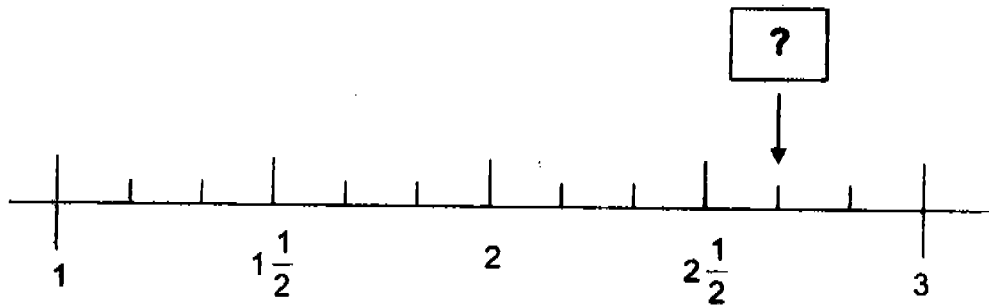
27. A red ribbon is  $\frac{1}{4}$  m long. A pink ribbon is  $\frac{1}{2}$  m longer than the red ribbon while the yellow ribbon is  $\frac{1}{8}$  m shorter than the pink ribbon. Find the length of the yellow ribbon.

Answer: \_\_\_\_\_ m

28. A bottle was  $\frac{3}{4}$  full of water. Mr Tan drank some water and the bottle became  $\frac{5}{12}$  full. What fraction of the water did Mr Tan drink? Give your answer in its simplest form.

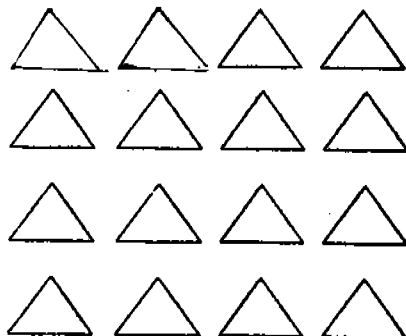
Answer: \_\_\_\_\_

29. What is the missing improper fraction in the box?



Answer: \_\_\_\_\_

30. Shade  $\frac{1}{8}$  of the following set.



31.  $\frac{5}{6}$  of a rope measures 60 cm. Find the length of the rope.

Answer: \_\_\_\_\_ cm

Study the table below carefully and answer Q32 and Q33.

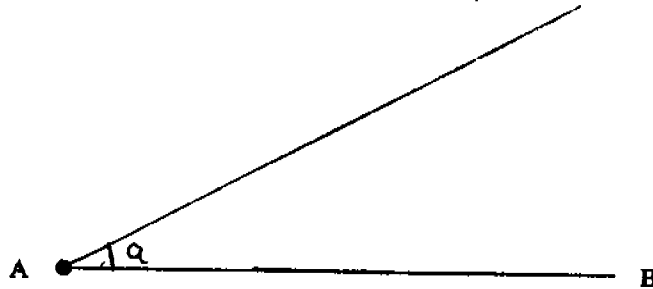
32. There are 21 boys and 19 girls in class 4B. 14 boys are swimmers and 11 girls are non-swimmers. Complete the following table by filling in the blanks (a), (b), (c) and (d).

|              | Number of boys | Number of girls | Total |
|--------------|----------------|-----------------|-------|
| Swimmers     | 14             | (b)             | (c)   |
| Non-swimmers | (a)            | 11              | (d)   |
| Total        | 21             | 19              | 40    |

33. A new girl joins the class and she is a swimmer. What will be the difference between the total number of swimmers and non-swimmers now?

Answer: \_\_\_\_\_

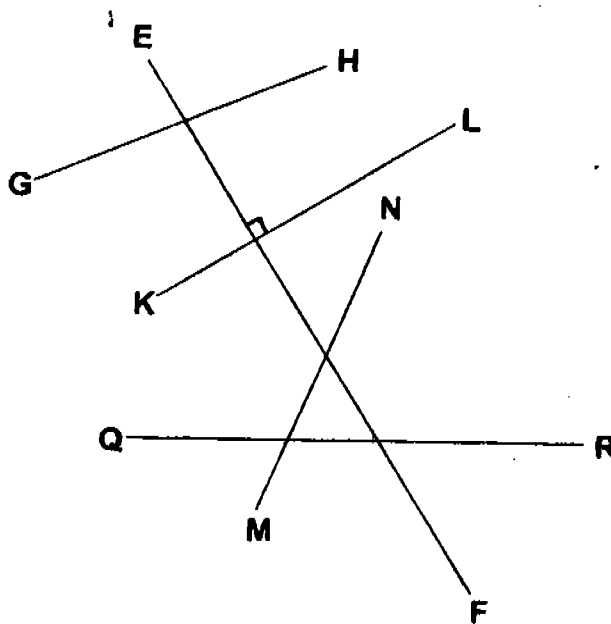
34. Using the dot on the line AB given below, draw another line to form an angle which is smaller than a right-angle. Mark and label the angle as  $\angle a$ .



35. Find the angle moved by the minute hand from 12 noon to 12.45 p.m..

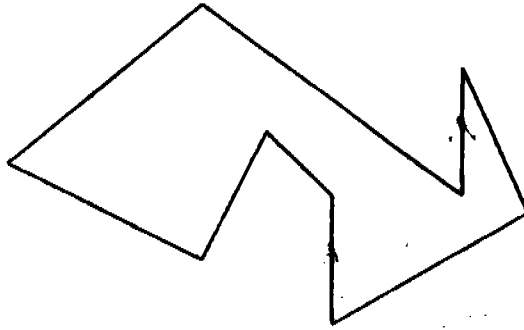
Answer: \_\_\_\_\_

36. Which one of these lines is perpendicular to EF?



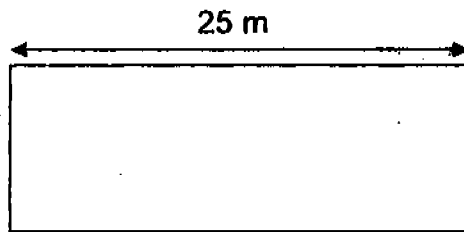
Answer: \_\_\_\_\_

37. How many pair(s) of parallel lines is/are there in this figure?



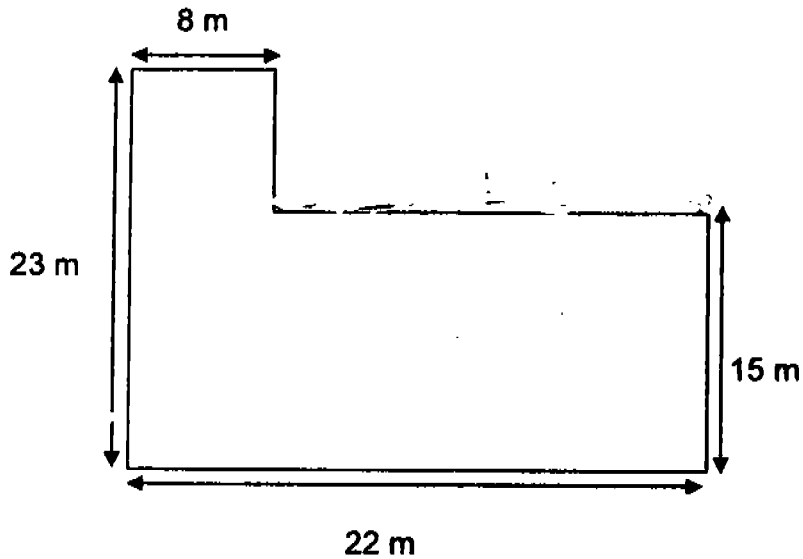
Answer: \_\_\_\_\_

38. The perimeter of this rectangle is 70 m. Find its area.



Answer: \_\_\_\_\_ m<sup>2</sup>

39. Mr Tan wants to cement the floor of his swimming pool as shown below. If it costs \$ 8 to cement  $1 \text{ m}^2$  of the floor, how much must he pay to cement the entire floor of the swimming pool?  
(All lines meet at right angles)



Answer: \$ \_\_\_\_\_

40. I have two numbers. These two numbers are between 10 and 20. When I multiply them, I get 210. When I add them up, I get 29. What are the two numbers?

Answer: \_\_\_\_\_ and \_\_\_\_\_

**Section C**

Questions 41 to 45 carry 4 marks each. Do these word problems carefully. Show your working in the space provided.

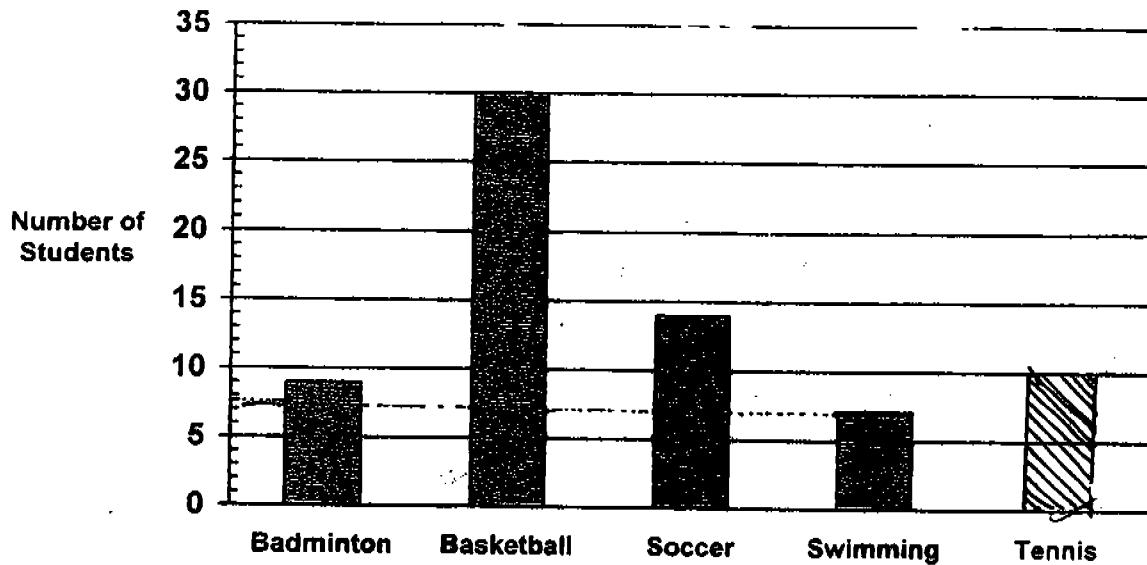
(Total: 20 marks)

41. There were some marbles in a box. Anne took  $\frac{1}{5}$  of them and Betty took  $\frac{2}{3}$  of them. There were 70 marbles left. How many marbles were there in the box at first?

42. In a farm, there was a total of 36 chickens and cows with a total of 98 legs. How many cows were there in the farm?

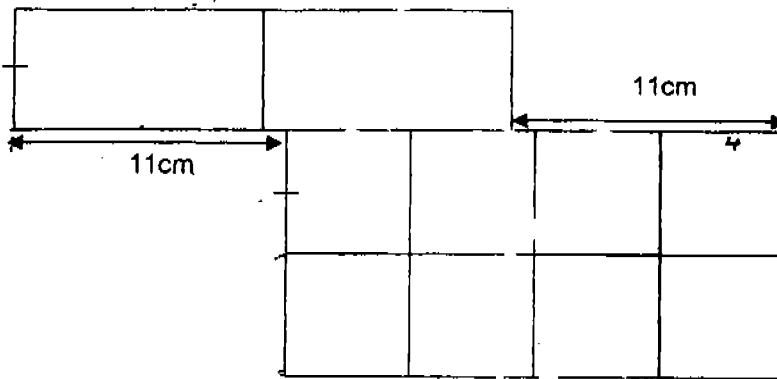


43. The bar graph below shows the favourite sports of a group of students.



- (a) The number of students who chose basketball as their favourite sport is three times as many as the number of students who chose tennis. Complete the bar graph above.
- (b) Which sport was chosen by exactly  $\frac{1}{5}$  of the total number of student.

44. Use the figure below to answer the following question.



The figure is made up of 2 identical rectangles and 8 identical squares.  
 The side of the square is equal to the breadth of the rectangle.  
 The length of the rectangle is twice its breadth.  
 The total area of the figure is  $300 \text{ cm}^2$ .  
 Find the perimeter of the figure.

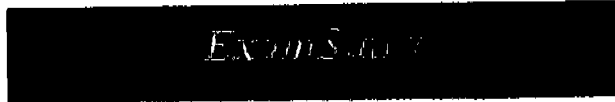
45. Box A had 90 marbles. Box B had  $\frac{7}{9}$  as many marbles as Box A. Minghua transferred  $\frac{1}{5}$  of the marbles from Box A to Box B. Then he transferred some marbles from Box B to Box A so that the 2 boxes have the same number of marbles. How many marbles did Minghua transfer from Box B to Box A?

☺ *End of Paper* ☺  
*Please Check Carefully*

Setters:  
Mdm Adelin Toh  
Ms Yee Ming Ming

SA1

Nanyang Primary School  
Primary 4 Maths SA1 Exam (2005)



Answer Sheets

|     |     |     |     |     |
|-----|-----|-----|-----|-----|
| Q1  | Q2  | Q3  | Q4  | Q5  |
| 4   | 4   | 1   | 1   | 2   |
| Q6  | Q7  | Q8  | Q9  | Q10 |
| 2   | 4   | 2   | 2   | 3   |
| Q11 | Q12 | Q13 | Q14 | Q15 |
| 2   | 2   | 1   | 3   | 1   |
| Q16 | Q17 | Q18 | Q19 | Q20 |
| 2   | 3   | 3   | 4   | 2   |

21. 42, 32

22. 11, 300

23. 10

24. 8

25. 200

26. 389

27.  $\frac{5}{8}$

28.  $\frac{1}{3}$

29.  $\frac{8}{3}$

30. 


31. 72cm

|      |      |       |
|------|------|-------|
|      | b) 8 | c) 22 |
| a) 7 |      | d) 18 |

32.

33. 5

34.



35. 270

36. KL

37. 1

38. 250m<sup>2</sup>

39. \$3152

40. 14 and 15

41. 525 marbles

42. 13 cows

34

- 43a) 14
- 43b) The sport was soccer.
  
- 44) The perimeter is 92cm
- 45) He transferred 8 marbles from Box to Box A

35