

Pei Chun Public School
Semestral Assessment 2 – 2007
Mathematics
Primary 4

Booklet A

Name: _____ () Date: 25 October 2007

Class: Primary 4 ____ Time: 2 h

Maths Teacher: _____

Questions 1 to 12 carry 2 marks each. For each question, four options are given. One of them is the correct answer. Make your choice (1, 2, 3 or 4) and write its number in the brackets provided. (24 marks)

1. In 80 079, the digit 8 is in the _____ place.

(1) tens

(2) hundreds

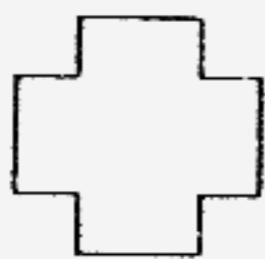
(3) thousands

(4) ten thousands

()

2. Which of the following figures has perpendicular lines?

(1)



(2)



(3)



(4)



()

3. _____ is 6000 when rounded off to the nearest hundred.

(1) 6105

(2) 6045

(3) 5949

(4) 5899

()

4. The first 2 common multiples of 6 and 8 are _____.

(1) 1 and 2

(2) 16 and 24

(3) 24 and 48

(4) 48 and 96

()

5. $\frac{30}{5} \times 4 = \square$

The fraction in the box is _____.

(1) $\frac{12}{5}$

(2) $\frac{120}{5}$

(3) $\frac{30}{20}$

(4) $\frac{120}{20}$

()

6. Express $3\frac{1}{25}$ as a decimal.

(1) 3.1

(2) 3.4

(3) 3.04

(4) 3.25

()

7. 1 thousandth more than 9.989 is _____

(1) 9.99

(2) 9.999

(3) 10

(4) 10.089

()

8. A movie lasting 2 h 35 min ended at 01 00. At what time did it start?
Give your answer in 24-hour time.

(1) 10.25 a.m.

(2) 10.25 p.m.

(3) 10 25

(4) 22 25

()

9. When I am divided by 12, the quotient is 371 with a remainder of 11.
What number am I?

(1) 1124

(2) 4441

(3) 4452

(4) 4463

()

10. At a party, there were 36 more children than adults. $\frac{1}{4}$ of the guests were adults.
How many adults were there?

(1) 9

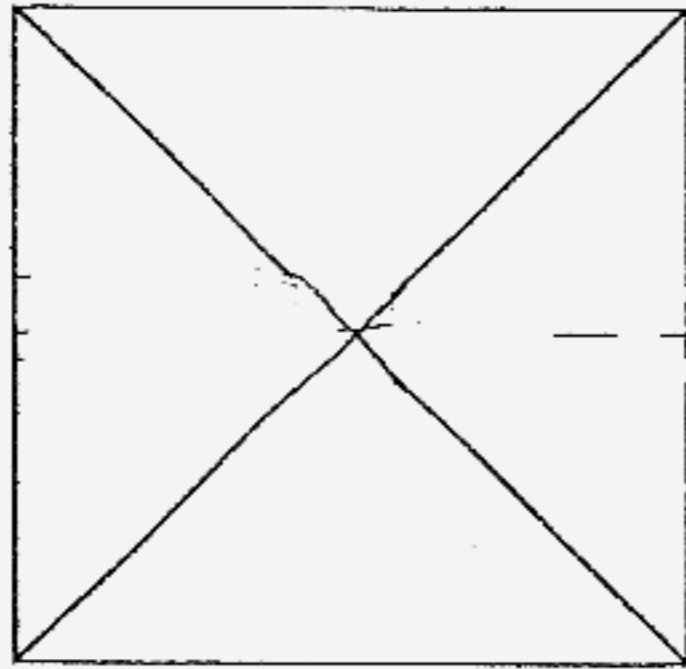
(2) 12

(3) 18

(4) 54

()


11. How many right angles are there in this figure?



- (1) 18
- (2) 12
- (3) 8
- (4) 4

()

12. Two identical squares of side 9 cm are arranged as shown in the figure below.



What is the total area of the shaded parts?

- (1) 25 cm²
- (2) 112 cm²
- (3) 137 cm²
- (4) 162 cm²

()

13. Refer to Booklet K.

14. Refer to Booklet K.

15. Refer to Booklet K.

End of Booklet A

Pei Chun Public School
 Semestral Assessment 2 – 2007
 Mathematics
 Primary 4

Booklet B

Name : _____ ()

Marks :

Class : Primary 4 _____

Date : 25 October 2007

Time : 2 h

Maths Teacher : _____

Parent's Signature : _____

Booklet A	24
Booklet B	56
Booklet K	20
TOTAL	100

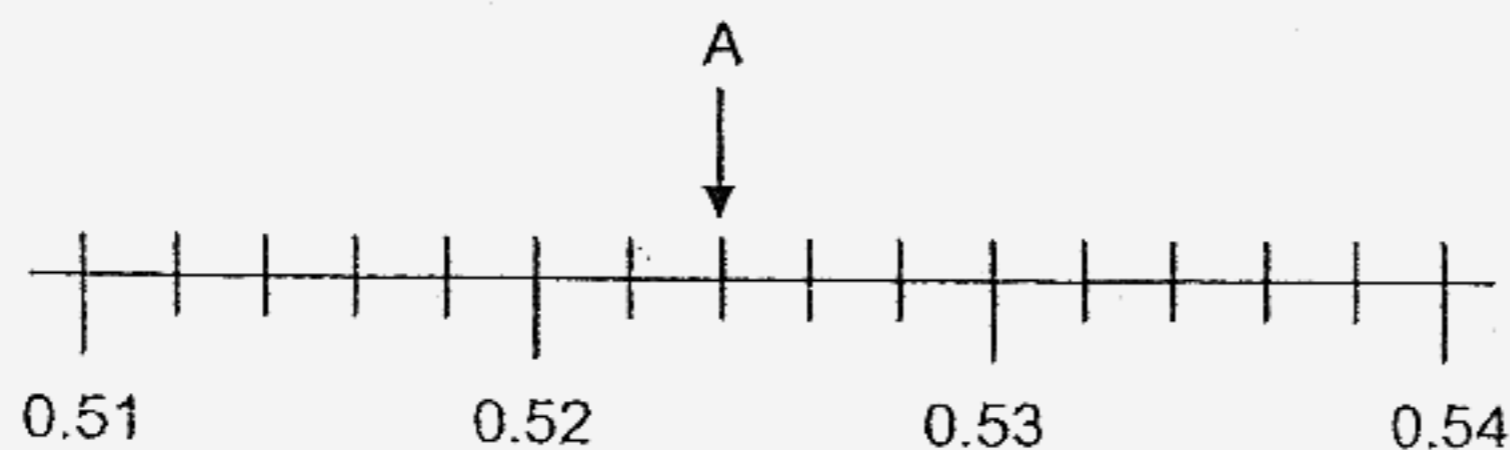
Questions 16 to 25 carry 1 mark each. Write your answers in the spaces provided.
 For questions which require units, give your answers in the units stated.

(10 marks)

Do not write
 in this space

16. Write 98 040 in words.

17. What value does the letter A represent?



Ans : _____

SCORE

18. Complete the following pattern:

53, 58, 68, 83, _____, 128

Ans : _____

19. There are _____ halves in $3\frac{2}{4}$.

Ans : _____

20. The duration from 21 35 on Sunday to 00 25 on Monday is _____.

Ans : _____ h _____ min

21. Express 6.08 as a mixed number in the simplest form.

Ans : _____

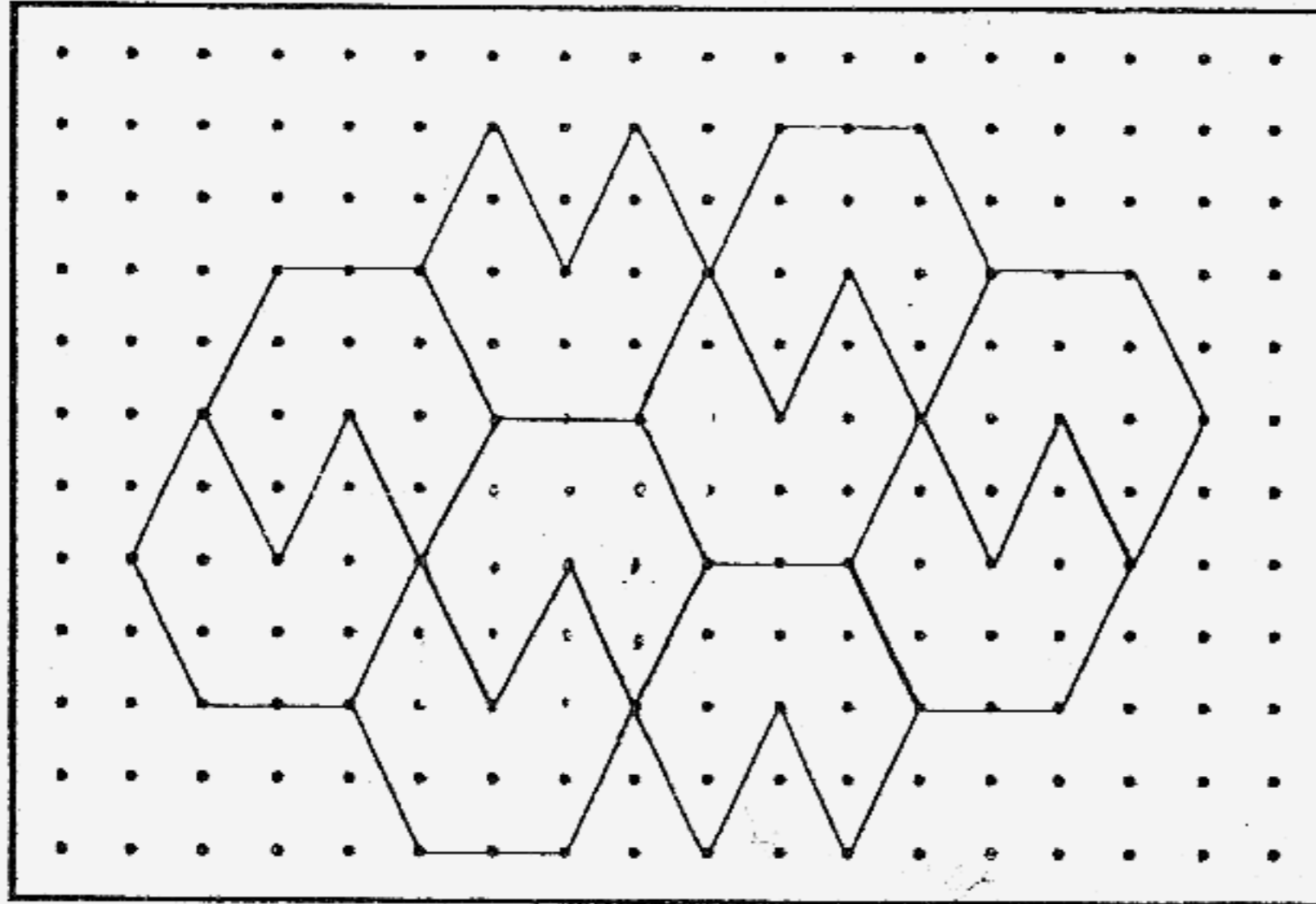
Do not write
in this space

SCORE

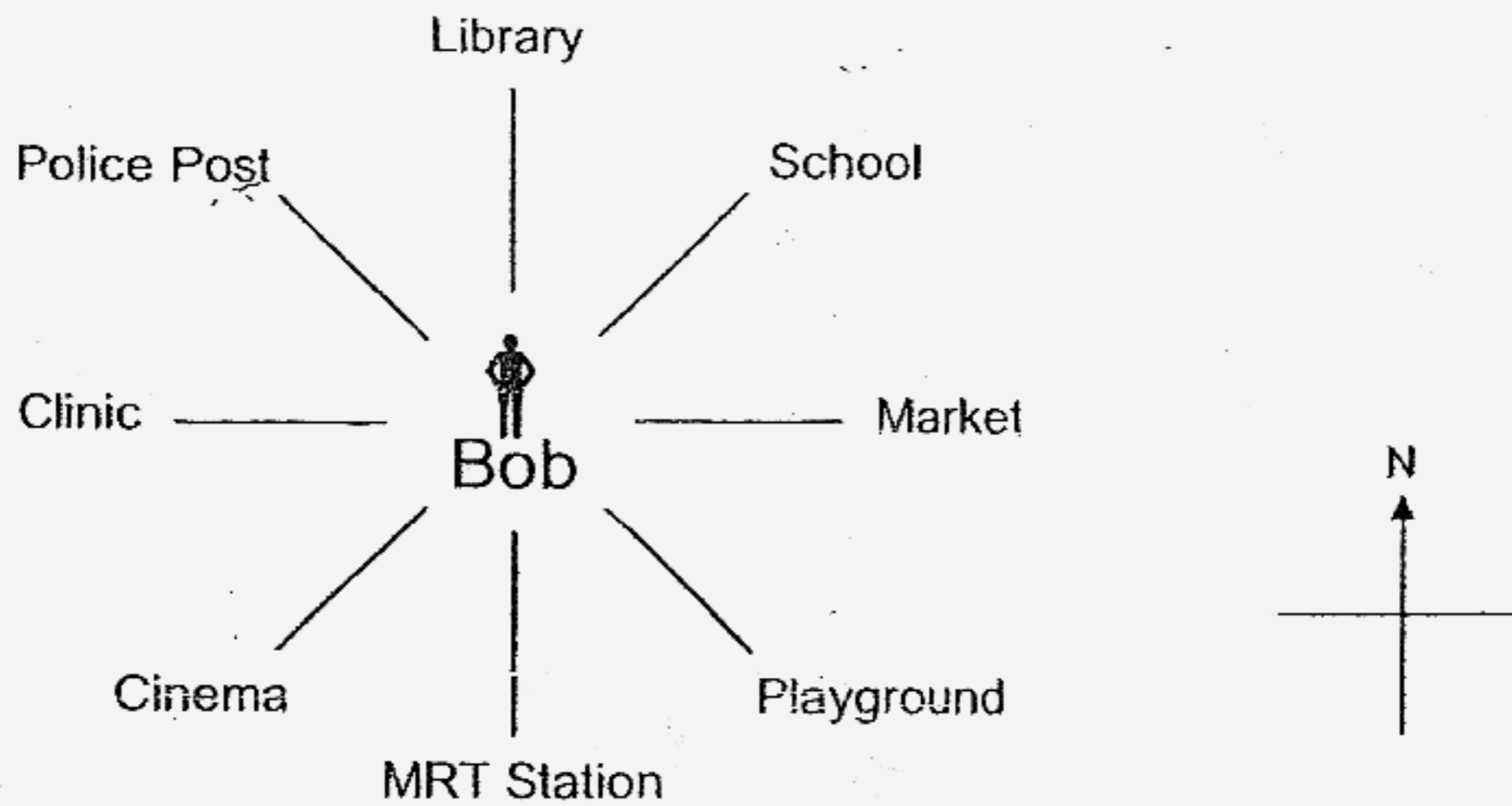
--

22. Shade a unit shape of the tessellation.

Do not write in this space



23. The diagram below shows some places in Bob's neighbourhood.



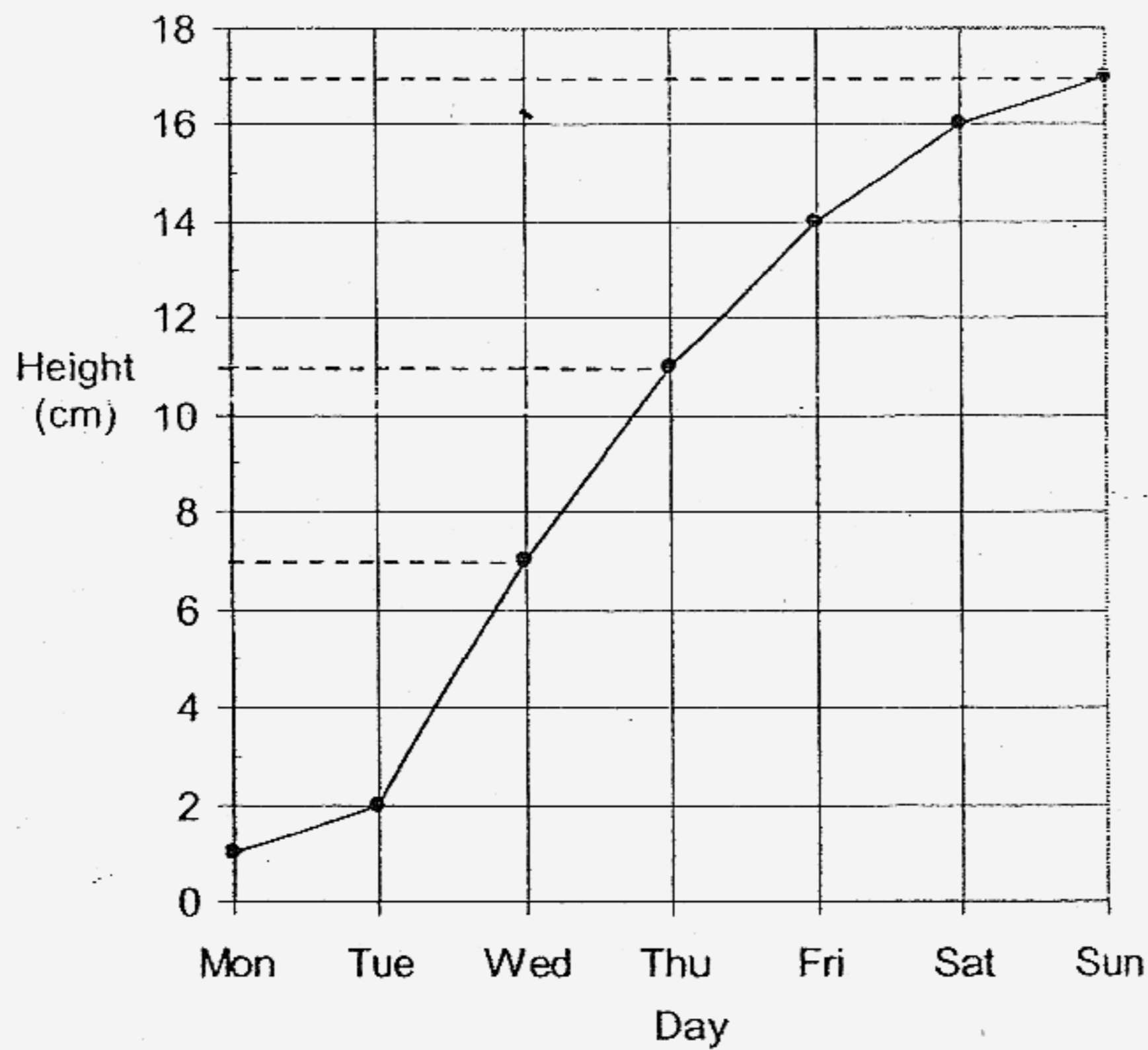
Bob was facing north-west. He made a $\frac{3}{4}$ - turn in an anti-clockwise direction. Which place is he facing now?

Ans : _____

SCORE

The graph below shows the height of a plant measured at 8 a.m. every day for 7 days. Use the graph to answer questions 24 and 25.

Do not write in this space



24. What was the height of the plant on Thursday?

Ans : _____ cm

25. Between which two days did the plant grow the most?

Ans : _____ and _____

SCORE

Questions 26 to 32 carry 2 marks each. Show your working clearly in the space below each question and write your answers in the spaces provided. For questions which require units, give your answers in the units stated. (14 marks)

Do not write in this space

26. The common factors of 24 and 32 are 1, 2, _____ and _____.

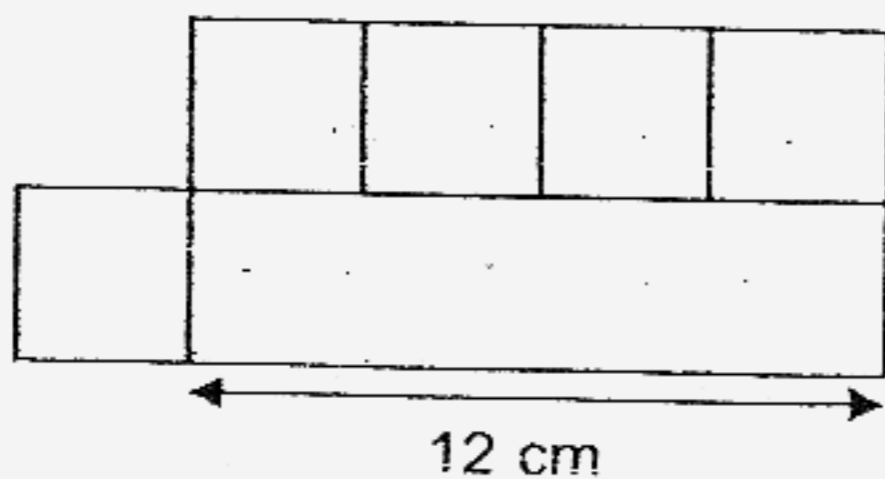
Ans : _____ and _____

27. Arrange the following fractions in order, beginning with the smallest.

$$\frac{5}{11}, \frac{1}{4}, \frac{2}{7}, \frac{1}{3}$$

Ans : _____

28. The figure below is made up of a rectangle and 5 identical squares. What is the area of the figure?



Ans : _____ cm²

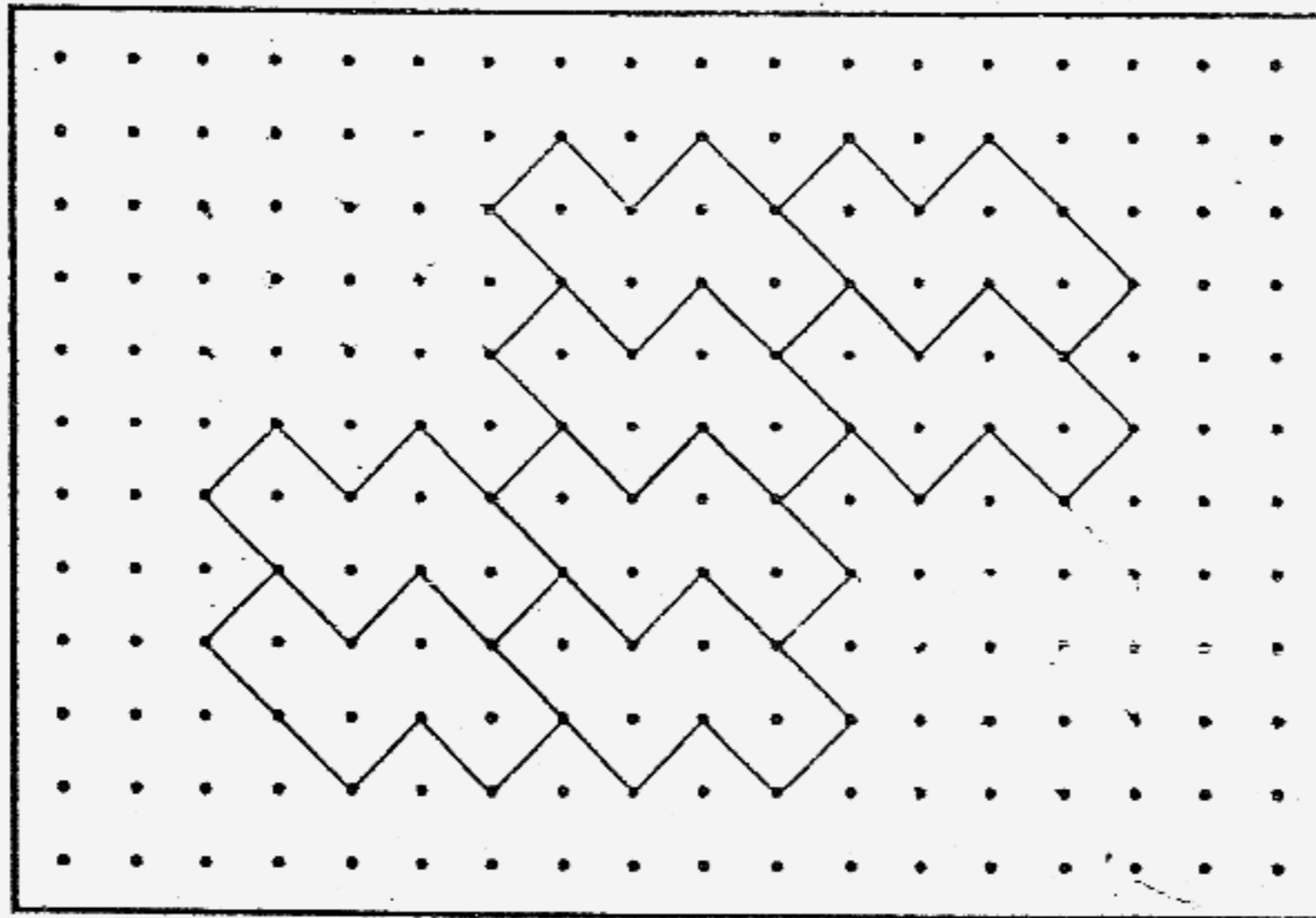
29. The angle turned through by the hour hand from 11 a.m. to 8 p.m. is _____.

Ans : _____ °

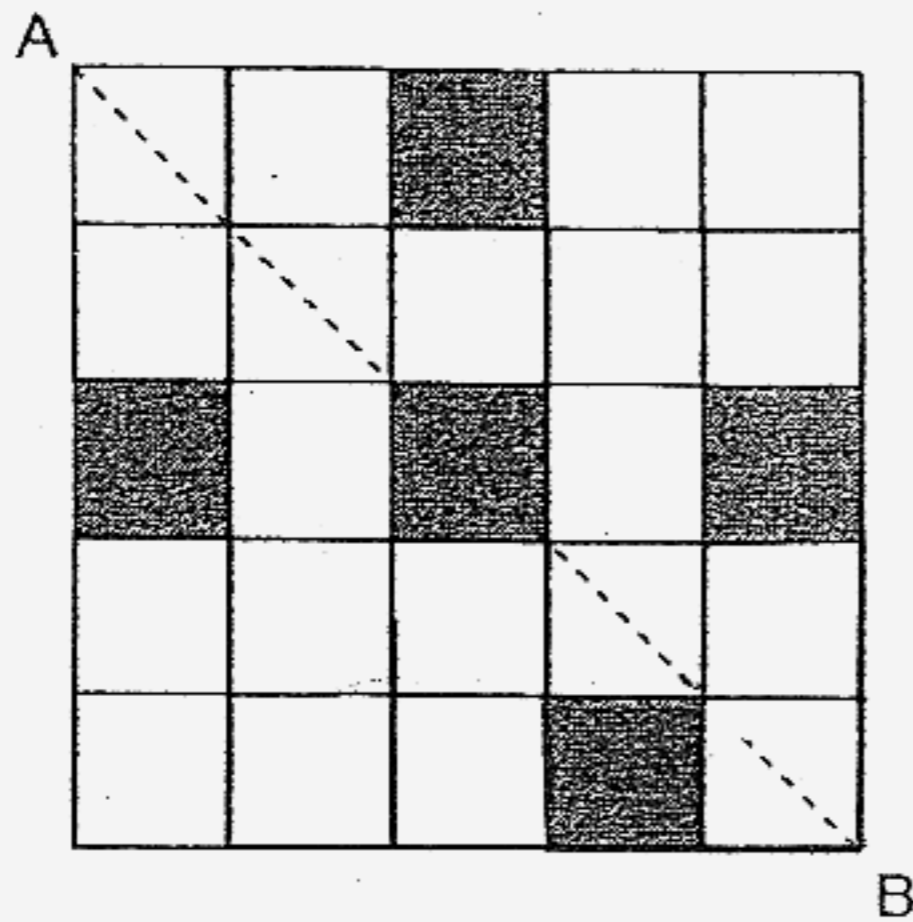
SCORE

30. The pattern in the box shows part of a tessellation. Extend the tessellation by drawing **four** more unit shapes in the space provided within the box.

Do not write in this space



31. Shade two more unit squares so that AB is the line of symmetry.



32. The sum of 2 numbers is 137.4. The value of one number is 0.2 of the other. What is the smaller number?

Ans : _____

33. Refer to Booklet K.
 34. Refer to Booklet K.
 35. Refer to Booklet K.

SCORE

Questions 36 to 43 carry 4 marks each. Show your working clearly in the space below each question and write your answers in the spaces provided. (32 marks)

Do not write
in this space

-
36. Ban Heng bought 8 cups. Each cup cost \$5.65.
- (a) How much did the cups cost?
 - (b) How much did he give the cashier if he received \$4.80 change?

Ans : (a) _____ [2]

(b) _____ [2]

SCORE

37. Fatimah had 225 cartons of canned drinks. In each carton, there were 12 canned drinks. She sold 157 cartons. How many canned drinks were left?

Do not write
in this space

Ans : _____ [4]

SCORE

38. Meng Huat had 270 stamps. He gave $\frac{4}{9}$ of the stamps to Ali and some stamps to Leela. He had 60 stamps left. What fraction of the stamps did he give to Leela? Give your answer in its simplest form.

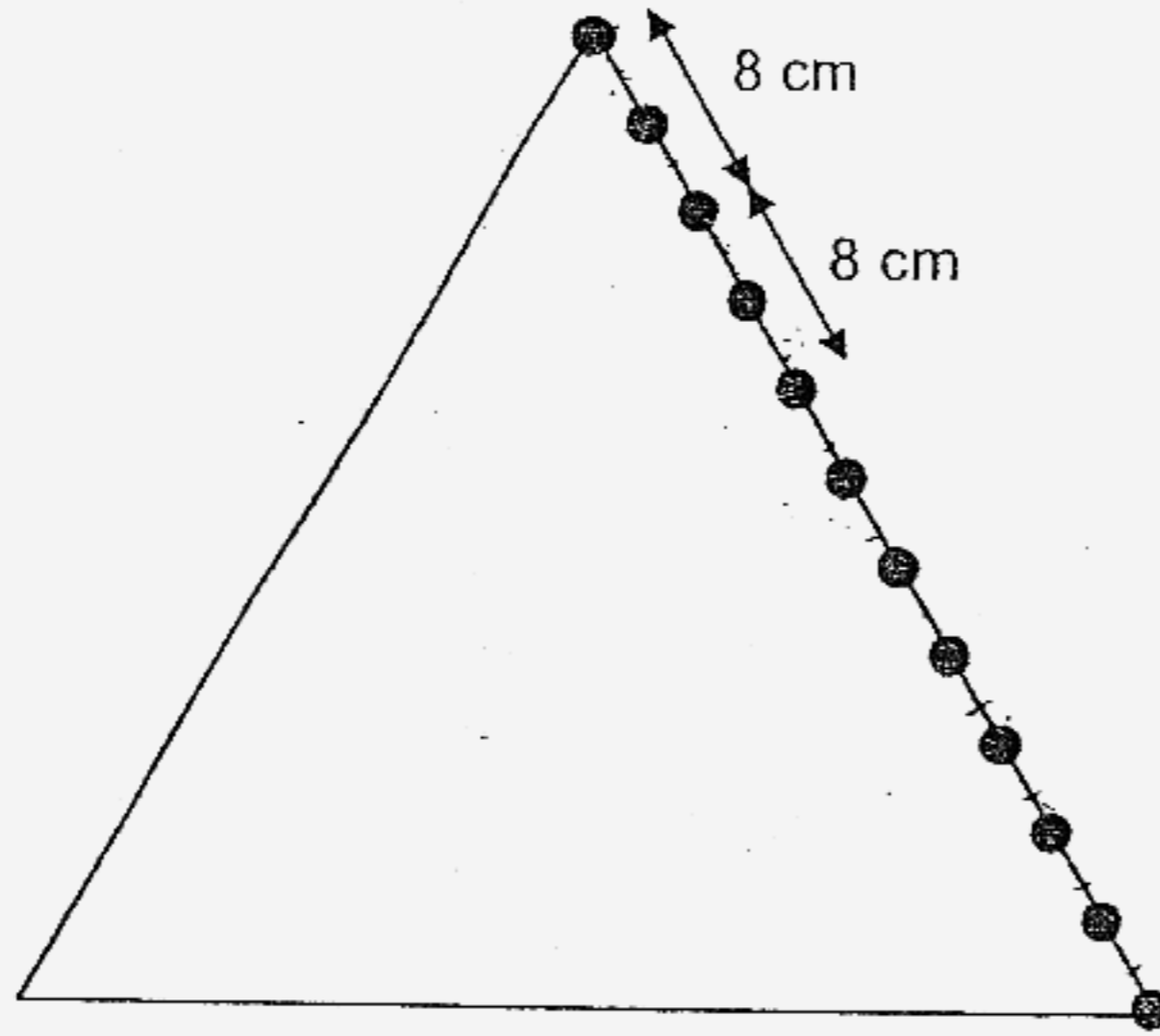
Do not write
in this space

Ans : _____ [4]

SCORE

39. Helen makes some markings on the sides of a triangular piece of cardboard. The three sides of the cardboard are of equal length. There are 12 points on each side of the cardboard. The distance between 3 points is 8 cm. What is the perimeter of the piece of cardboard?

Do not write in this space



Ans : _____ [4]

SCORE

40. The length of a string is 10.61 m. It is 1.85 m longer than a rope. The rope is 6 times as long as a thread. What is the length of the thread? Round off your answer to 1 decimal place.

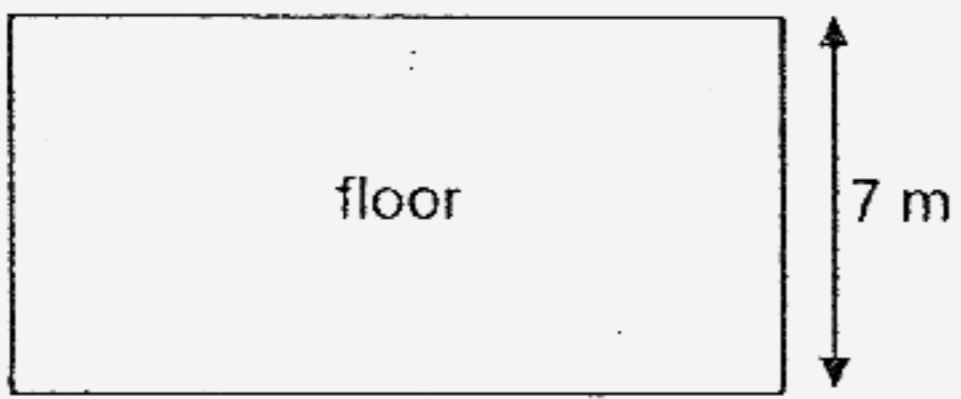
Do not write
in this space

Ans : _____ [4]

SCORE

41. The diagram below shows a rectangular floor. $\frac{3}{5}$ of the floor is painted.
 42 m² of the floor is not painted. Find the perimeter of the floor.

Do not write
 in this space



Ans : _____ [4]

SCORE

42. There are 60 more buttons than marbles in a box. 0.4 of the buttons is equal to $\frac{4}{7}$ of the marbles. How many buttons are there in the box?

Do not write
in this space

Ans : _____ [4]

SCORE

43. Deepa paid \$25 for 35 pens and pencils altogether. The pens were sold at \$2 each and the pencils were sold at 3 for \$1. How many pencils did she buy?

Do not write
in this space

Ans : _____ [4]

44. Refer to Booklet K.

45. Refer to Booklet K.

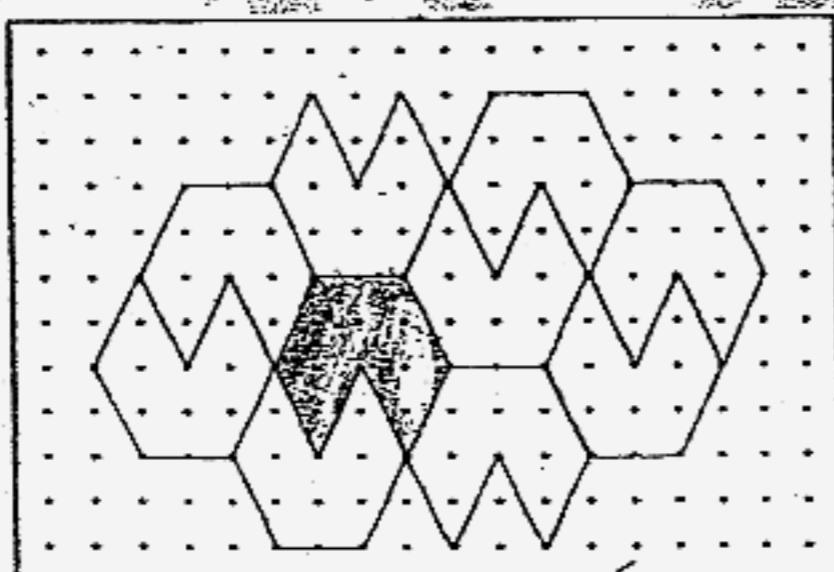
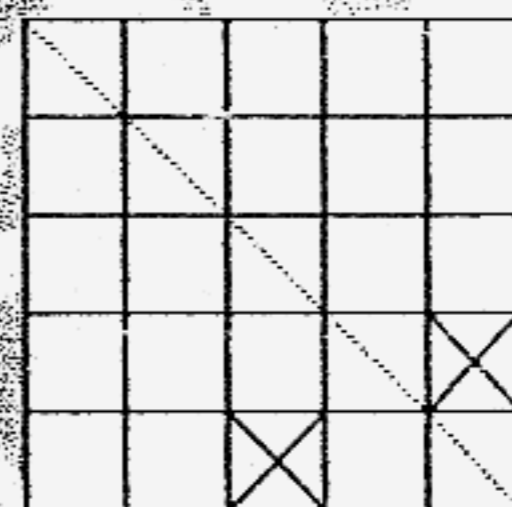

End of Booklet B

Set by : Mdm Ong Bok Hoon
Vetted by: P4 Maths Committee Teachers

SCORE

PEI CHUN PRIMARY SCHOOL - PRIMARY 4 MATHEMATICS 2007
SEMESTRAL ASSESSMENT (2)

- 1. 4
- 2. 1
- 3. 2
- 4. 3
- 5. 4
- 6. 3
- 7. 1
- 8. 4
- 9. 4
- 10. 3
- 11. 2
- 12. 2
- 13. 0
- 14. 0
- 15. 0
- 16. Ninety-eight thousand and forty
- 17. 0.524
- 18. 103
- 19. 7
- 20. 2h 50min.
- 21. $\frac{62}{25}$
- 22.
- 23) School
- 24) 11cm
- 25) Tuesday and Wednesday
- 26) 4 and 8
- 27) $\frac{1}{4}, \frac{2}{7}, \frac{1}{3}, \frac{5}{11}$
- 28) 81cm²
- 29) 270°
- 30)
- 31)



$$32) 22.9$$

$$36) a) 5.65 \times 8 = 45.20$$

The cups cost \$45.20

$$b) 45.20 + 4.80 = 50.00$$

He gave the cashier \$50

$$37) 225 - 157 = 68$$

$$68 \times 12 = 816$$

816 canned drinks were left.

$$38) 270 \div 9 = 30$$

$$30 \times 4 = 120$$

$$270 - 120 = 150$$

$$150 - 60 = 90$$

$$90 / 270 = 9 / 27$$

$$9 / 27 = 1 / 3$$

He gave $1/3$ stamps to Leela.

$$39) 8 \times 2 = 16$$

$$5 - 1 = 4$$

$$16 \div 4 = 4$$

$$4 \times 11 = 44$$

$$44 \times 3 = 132$$

The perimeter of the piece of cardboard is 132cm

$$40) 10.61 - 1.85 = 8.76$$

$$8.76 \div 6 = 1.46$$

$$1.46 \approx 1.5$$

The length of the thread is 1.5m

$$41) 1 - 3/5 = 2/5$$

$$2/5 \rightarrow 42m^2$$

$$42 \div 2 = 21$$

$$21 \times 5 = 105$$

$$105 \div 7 = 15$$

$$15 + 15 = 30$$

$$30 + 7 = 37$$

$$37 + 7 = 44$$

The perimeter of the floor is 44m.

$$42) 10 - 7 = 3$$

$$3/7 \rightarrow 60$$

$$60 \div 3 = 20$$

$$20 \times 7 = 140$$

$$140 + 60 = 200$$

There are 200 buttons in the box.

$$43) 27$$