

SA2 carries more weightage (50%) than other semesters.

SINGAPORE CHINESE GIRLS' PRIMARY SCHOOL  
SECOND SEMESTRAL ASSESSMENT 2004  
PRIMARY 3  
MATHEMATICS


Name : \_\_\_\_\_ ( ) Date : \_\_\_\_\_

Class : Primary 3 .

Duration : 1h 45min

Parent's Signature: \_\_\_\_\_

Marks



Section A ( 2 marks each )

Choose the correct answer. Shade the correct oval in the Optical Answer Sheet (OAS).

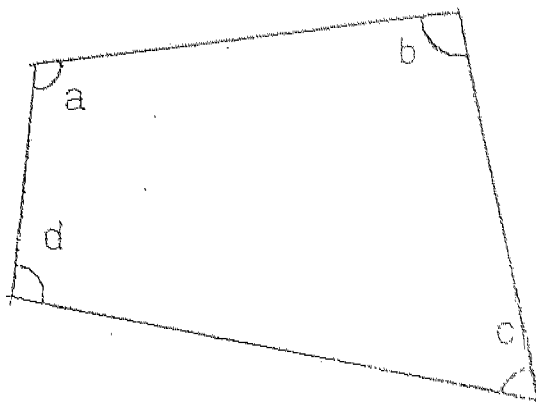
1. The value of 6 thousands, 6 hundreds and 6 ones is \_\_\_\_\_

- |          |          |
|----------|----------|
| 1) 666   | 3) 6 606 |
| 2) 6 066 | 4) 6 660 |

2. The sum of 4 001 and 1 999 is \_\_\_\_\_

- |          |          |
|----------|----------|
| 1) 2 002 | 3) 5 900 |
| 2) 3 008 | 4) 6 000 |

3. In the figure below, which angle is smaller than a right angle?



- |      |      |
|------|------|
| 1) a | 3) c |
| 2) b | 4) d |

4. The height of a door is about \_\_\_\_\_.

- 1) 20 cm
- 2) 25 m
- 3) 2 m
- 4) 2 km

5. How many tens are there in 400?

- 1) 0
- 2) 4
- 3) 40
- 4) 400

6. Subtract 60 from 72 hundreds. The answer is \_\_\_\_\_.

- 1) 1 200
- 2) 6 607
- 3) 6 600
- 4) 7 140

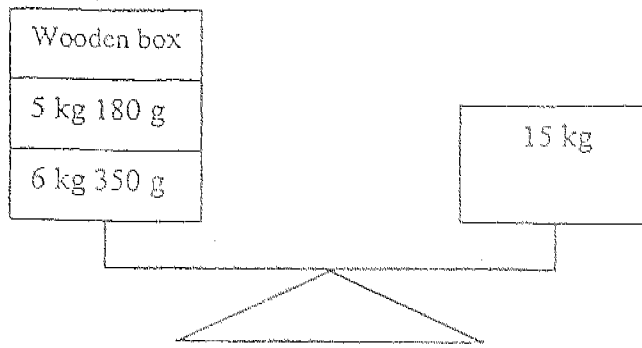
7.  $23 \times 8 = 20 \times 8 + \square \times 8$

What is the missing number in the box?

- 1) 24
- 2) 8
- 3) 3
- 4) 4

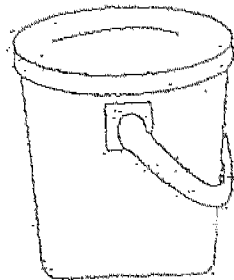
8. Pamela had 7 fifty-cent coins, 9 twenty-cent coins and 15 five-cent coins. How much did she have altogether?

- 1) \$4.05
- 2) \$5.15
- 3) \$6.05
- 4) \$6.80



9. For the weighing scale to balance, what should be the mass of the wooden box?

- 1) 3 kg 470 g                      3) 11 kg 530 g  
 2) 4 kg 570 g                      4) 26 kg 530 g



pail



jug



mug

275 ml

10. The pail can fill 8 similar jugs with water. The jug can fill 3 similar mugs with water. What is the capacity of the pail?

- 1) 825 ml                              3) 21200 ml  
 2) 11325 ml                            4) 61600 ml

11. Mrs Yong cut a mooncake into a few equal pieces. Her son ate 3 pieces and her daughter ate 2 pieces. If 1 piece was left, what fraction of the mooncake did her daughter eat?

- 1)  $\frac{1}{6}$                                       3)  $\frac{1}{3}$   
 2)  $\frac{1}{4}$                                       4)  $\frac{1}{2}$

2	4
6	8

8	16
24	32

32	64
96	A

12. The value of A is \_\_\_\_\_.

- 1) 88
- 2) 162
- 3) 128
- 4) 262

13. 4 thousands, 16 tens and 8 ones is the same as \_\_\_\_\_.

- 1) 4 024
- 2) 4 168
- 3) 4 268
- 4) 5 608

663

3 208

1 024

14. The difference between the largest and the smallest of the numbers is \_\_\_\_\_.

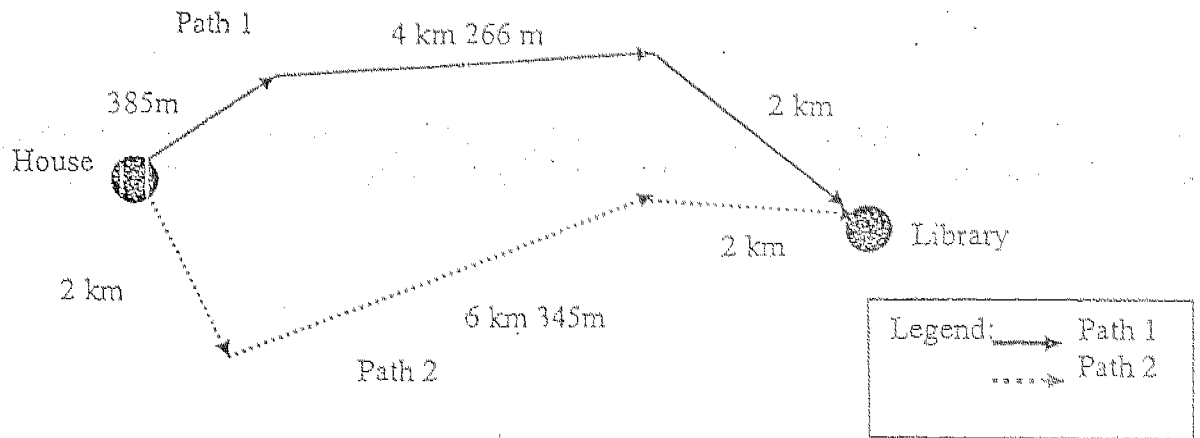
- 1) 361
- 2) 2 184
- 3) 2 545
- 4) 3 871

15. 3 boys and 4 girls shared 987 beads equally. How many beads did the 3 boys receive in total?

- 1) 564
- 2) 423
- 3) 323
- 4) 141

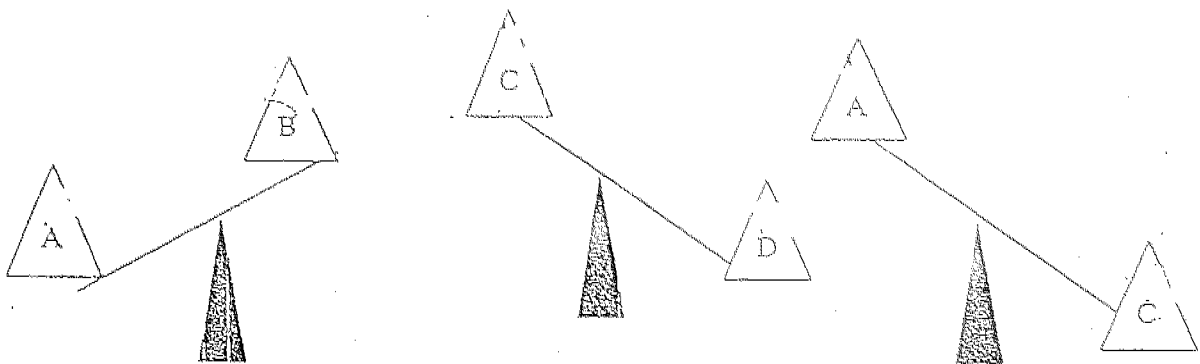
16. Mr Lim used 2 418 tiles on Monday. He used 480 more on Tuesday than on Monday and 282 fewer on Wednesday than on Monday. How many tiles did he use altogether?

- 1) 3 180
- 2) 6 492
- 3) 7 452
- 4) 8 016



17. Michael decided to go to the library from his house. He could choose to travel by either Path 1 or Path 2. What is the difference in distance between Path 1 and Path 2?

- 1) 2 km 179 m
- 2) 3 km 694 m
- 3) 3 km 804 m
- 4) 5 km 694 m



18. A, B, C and D are objects. Which is the heaviest?

- 1) A
- 2) B
- 3) C
- 4) D

19. Joanna had 12 stamps. She gave 3 stamps to her sister and 5 stamps to her brother. What fraction of the stamps did she have left?

1)  $\frac{1}{4}$

3)  $\frac{5}{12}$

2)  $\frac{1}{3}$

4)  $\frac{3}{4}$

20. The capacity of a container is 5 times that of a flask. If the total capacity of the container and the flask is  $1\text{ l } 860\text{ ml}$ , find the capacity of the flask.

1)  $240\text{ ml}$

3)  $1\text{ l } 150\text{ ml}$

2)  $310\text{ ml}$

4)  $1\text{ l } 550\text{ ml}$

Name: \_\_\_\_\_ ( )

Date: \_\_\_\_\_

Class: Primary 3

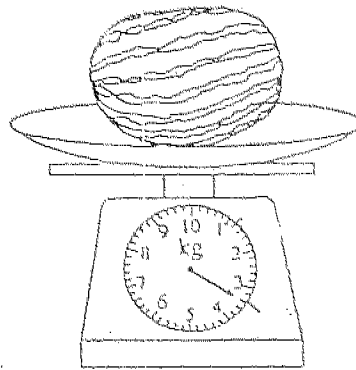
Time: 1 h 45 min

Section B ( 2 marks each )

Write your answers in the blanks provided. All working must be clearly shown.


21.  $7\,209 + 42 = 7\,000 + 200 + \underline{\hspace{2cm}}$

Ans: \_\_\_\_\_




22. The weighing scale shows the mass of one watermelon. What would be the mass of 3 such watermelons?

Ans: \_\_\_\_\_ kg \_\_\_\_\_ g



23. What fraction of the figure above is shaded?

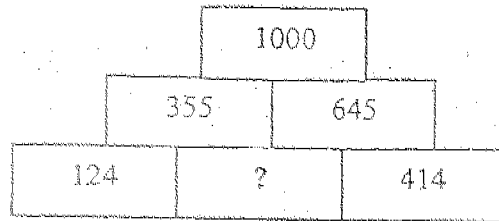
Ans: \_\_\_\_\_



24. Arrange the following set of fractions in order, beginning with the smallest?

$$\frac{3}{4}, \frac{7}{12}, \frac{2}{3}$$

Ans: \_\_\_\_\_




25. Find the missing value in the box:

Ans: \_\_\_\_\_

26. A factory worker packs 10 sweets into 1 plastic bag. If there are 8 boxes containing 120 sweets each, how many plastic bags will she need?

Ans: \_\_\_\_\_






Erasers	Pencils	Pen
4 for \$1.00	3 for \$1.50	2 for \$2.80

27. Mrs Wong bought 8 erasers, 4 pens and 6 pencils. How much change did she receive if she paid the cashier \$15?

Ans: \$ \_\_\_\_\_

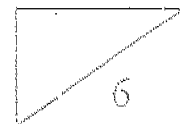


28. A trundle wheel clicks at every 1 metre it travels. How many times will a trundle wheel click when it travels half a kilometre?

Ans: \_\_\_\_\_

29. The total mass of a bag and 7 identical books is 1 kg 470 g. The mass of the bag is the same as the mass of the books. What is the mass of each book?

Ans: \_\_\_\_\_ g



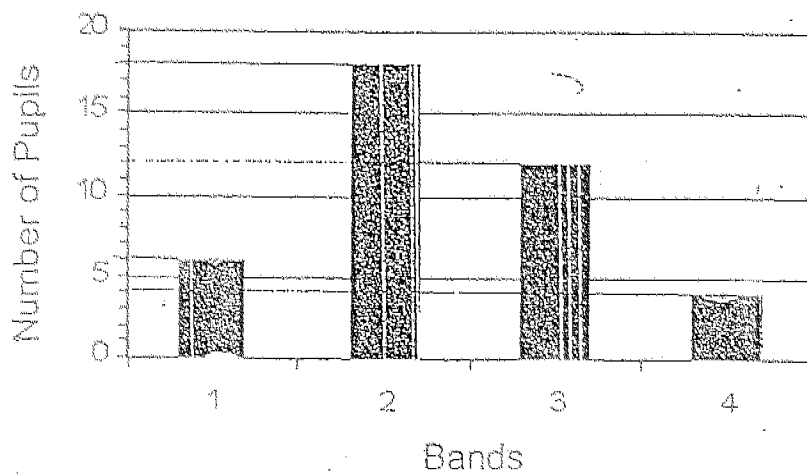
Mabel read the timetable at a bus interchange.  
Use the information below to answer question 30.

Time bus leaves the bus interchange	Time bus arrives at the airport
8.30 a.m	9.15 a.m
8.45 a.m	9.30 a.m
9.20 a.m	10.05 a.m
9.45 a.m	10.30 a.m
10.30 a.m	11.15 a.m

30. Mabel wants to be at the airport before 10.40 a.m. She does not want to leave her house before 9.30 a.m. She should board the bus that leaves the interchange at \_\_\_\_\_ a.m

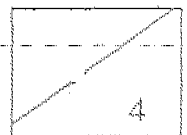
Ans: \_\_\_\_\_ a.m

Study the graph below and answer question 31.  
The graph below shows the score of 40 pupils during a recent Mathematics test.



31. The teacher will award prizes to pupils who have scored a Band 2 or better grade. How many pupils will receive prizes?

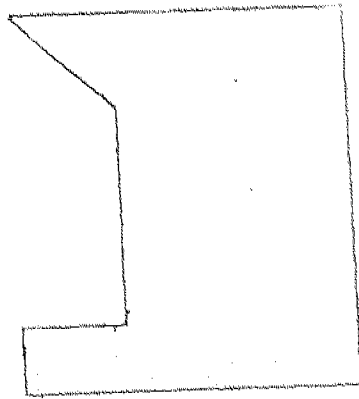
Ans: \_\_\_\_\_



32. Adam ate 2 slices of a pizza and his mother ate another 3 slices of it. If his father ate  $\frac{1}{2}$  of the remaining pizza and there were still 2 slices left, how many slices of pizza were there at first?

Ans: \_\_\_\_\_


33. In the figure below, how many of the marked angles are right angles?



Ans: \_\_\_\_\_

34. The sum of 2 numbers is 260. When you subtract one of the numbers from the other, you get 20. What are the 2 numbers?

Ans: \_\_\_\_\_, \_\_\_\_\_



35. Complete the number pattern.

2 268 , 2 280 , 2 293, \_\_\_\_\_, 2 322 \_\_\_\_\_

Ans : \_\_\_\_\_

36. The sum of 5 thousands, 9 hundreds, 12 tens and 16 ones is \_\_\_\_\_.


Ans : \_\_\_\_\_

37. Mr Li had a total of 314 cameras and calculators. There were 42 more cameras than calculators. Mr Li sold 80 cameras. How many cameras does he have now?

Ans : \_\_\_\_\_

38. John had 87 beads. Mrs Lee gave John and Ben some more beads, which were shared equally between them. If John has 105 beads now, how many beads did Mrs Lee give them?

Ans : \_\_\_\_\_



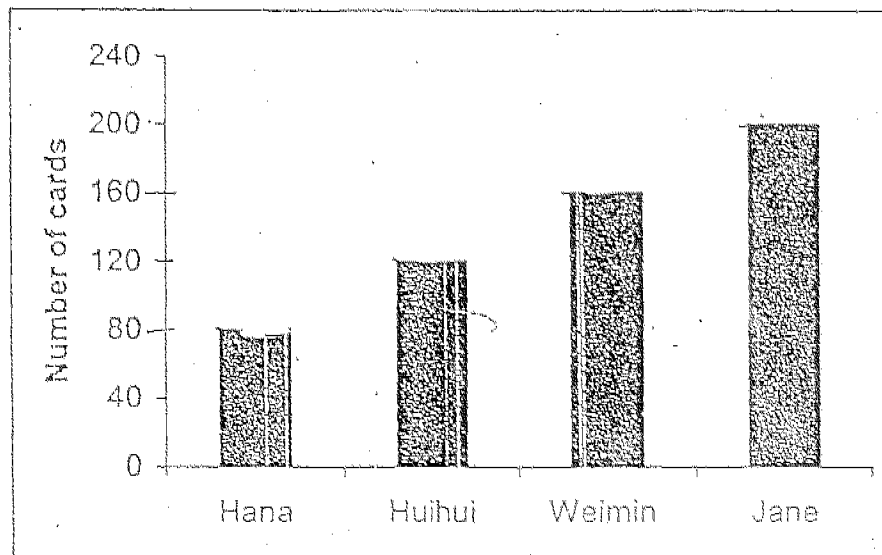
Study the table below and answer question 39.

Rides	Fare per ride.
Bumper Car	\$2.50
Roller Coaster	\$1.50
Viking	\$1.00

39. Siti wants to try all the rides at least once. What is the maximum number of rides Siti can have if she has \$10?


Ans : \_\_\_\_\_

The graph below shows the number of cards collected by 4 pupils. Study at it carefully and answer question 40.



40. How many cards must Jane give to Huihui so that they would each have an equal number of cards?

Ans : \_\_\_\_\_



Section C: (4 marks each)


All working and statements must be clearly shown.

41. School A had 200 more pupils than School B. If there were 2 200 pupils in School B, how many pupils were there in School A?

Ans : \_\_\_\_\_

42. A book has 250 pages. Jeremy read 9 pages a day for 15 days. How many days did he take to read the remaining pages if he read only 5 pages a day?

Ans : \_\_\_\_\_



43. Raju and Ali had same amount of money at first. After Raju had spent \$25 of his money, he had \$45 left. If Ali spent \$30 of his money on a book, how much money would he have left ?

Ans : \_\_\_\_\_

44. Mrs Chan boarded a bus at 2.30 p.m to go to Bugis Junction. The bus ride took 35 minutes. After shopping for 3 hours, she arrived home by taxi at 6.30 p.m. How long was the taxi ride?

Ans : \_\_\_\_\_




45. A gardener planted some rose plants along one side of a fence. Each rose plant was placed 6 cm apart.

a) What was the distance between the 1<sup>st</sup> rose plant and the 6<sup>th</sup> rose plant?

(Give your answer in metres and centimetres)

b) If the distance between the 1<sup>st</sup> rose plant and the last rose plant was 240 cm, how many rose plants did the gardener plant?



END OF PAPER  
PLEASE CHECK YOUR  
ANSWERS.



SINGAPORE CHINESE GIRLS PRIMARY SCHOOL  
SECOND SEMESTRAL ASSESSMENT 2004  
PRIMARY 3  
MATHEMATICS

SA 2

- |  |                       |
|--|-----------------------|
| 1) 3   | 26) 96 plastic bags   |
| 2) 4   | 27) 4.40              |
| 3) 3   | 28) 500 times         |
| 4) 3   | 29) 105               |
| 5) 3   | 30) 9.45              |
| 6) 4   | 31) 24 pupils         |
| 7) 3   | 32) 9 slices of pizza |
| 8) 3   | 33) 4 marked angles   |
| 9) 1   | 34) 120, 140          |
| 10) 4  | 35) 2307, 2338        |
| 11) 3  | 36) 7036              |
| 12) 3  | 37) 98 cameras        |
| 13) 2  | 38) 36 beads          |
| 14) 3  | 39) 8 rides           |
| 15) 2  | 40) 40 cards          |
| 16) 3  | 41) 2400 pupils       |
| 17) 2  | 42) 23 days           |
| 18) 4  | 43) \$ 40             |
| 19) 2  | 44) 25 minutes        |
| 20) 2  | 45) a) 30 cm          |
| 21) 51   | b) 41 rose plants     |
| 22) 10 kg 200 g                                    |                       |
| 23) $\frac{1}{2}$                                  |                       |
| 24) $\frac{7}{12}$ , $\frac{2}{3}$ , $\frac{3}{4}$ |                       |
| 25) 231  |                       |