

2007

PRIMARY 3 MATHS

1.	ACS (JUNIOR)	-	SA1	-	SA2
2.	AI TONG	CA1	SA1	CA2	SA2
3.	CATHOLIC HIGH	CA1	SA1	CA2	SA2
4.	CHIJ ST NICHOLAS	-	SA1	-	SA2
5.	HENRY PARK	-	SA1	-	SA2
6.	MAHA BODHI	CA1	SA1	CA2	SA2
7.	METHODIST GIRLS	-	SA1	-	SA2
8.	NANYANG	-	SA1	-	SA2
9.	RAFFLES GIRL	-	SA1	-	SA2
10.	ROSYTH	-	-	-	SA2
11.	TAO NAN	-	SA1	-	SA2

12. KONG HWA SA1 SA2

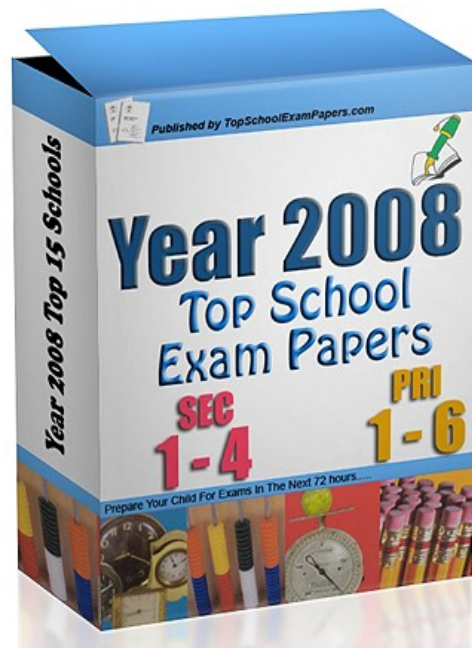
Total : 549 Pages

Guide to navigating around Year 2007 TopSchoolExamPapers

- There is a bookmark panel on the left which u can click to go to the specific school papers.
- All Answers are provided at the end of each paper

Engaging a private home tutor to go through the questions

- We provide reliable 1-to1 home tuition services to all levels/ subjects/ areas.
- Qualified tutors, teachers or lecturers can be arranged as fast as within a hour upon request.
- To find a tutor to go through the exam papers with your child , you can request for a tutor at <http://www.yestuition.sg> or call 90125150.



**TO DOWNLOAD ALL OUR EXAM
AND TEST PAPERS PLEASE VISIT
THE WEBSITE BELOW**

<http://www.TopSchoolExamPapers.com>



AI TONG SCHOOL

2007

CONTINUAL ASSESSMENT 1

PRIMARY 3

MATHEMATICS

DURATION : 1 H 30 MIN

DATE : 6 March 2007

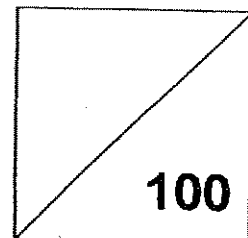
INSTRUCTIONS

Do not open the booklet until you are told to do so.
Follow all instructions.
Answer all questions.

Name : _____ ()

Class : Primary 3 _____

Marks:



Parent's Signature : _____

Date : _____

SECTION A**Question 1 to 20 carry 2 marks each.**

For each question, four options are given. One of them is the correct answer.

Make your choice (1, 2, 3, or 4). Shade the oval (1, 2, 3, or 4) on the Optical Answer Sheet. (40 marks)

1 4801 can be written as _____.

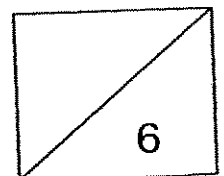
- 1) 4000 + 80 + 1
- 2) 4000 + 80 + 10
- 3) 4000 + 800 + 1
- 4) 4000 + 800 + 10

2 6930 = _____.

- 1) 60 tens + 93 ones
- 2) 60 tens + 93 tens
- 3) 600 tens + 93 ones
- 4) 600 tens + 93 tens

3 In the number 5268, which digit is in the **hundreds** place?

- 1) 5
- 2) 2
- 3) 6
- 4) 8



4 The value of digit '2' in 2461 is _____.

- 1) 20
- 2) 2
- 3) 200
- 4) 2000

5 Which one of the following is the smallest in value?

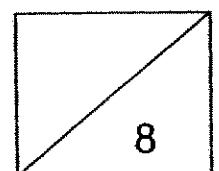
- 1) 7519
- 2) 7723
- 3) 7491
- 4) 7542

6 Which digit is in the **thousands** place when $2682 + 5958$?

- 1) 6
- 2) 7
- 3) 3
- 4) 8

7 How many tens are there in 8820?

- 1) 20
- 2) 2
- 3) 820
- 4) 882



8 90 less than 8237 is _____.

- 1) 7337
- 2) 8147
- 3) 8247
- 4) 8327

9 Find the difference between 5000 and 2584.

- 1) 2415
- 2) 2416
- 3) 3584
- 4) 7584

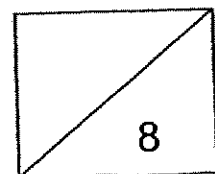
10 _____ - 1238 = 505

- 1) 733
- 2) 1333
- 3) 1733
- 4) 1743

11 6270, 6070, _____, 5670, 5470

What is the missing number?

- 1) 5770
- 2) 5870
- 3) 5970
- 4) 6170



12 7218 is 1608 more than _____.

- 1) 5610
- 2) 6418
- 3) 8426
- 4) 8826

13 Subtract 30 from the sum of 5408 and 2100.

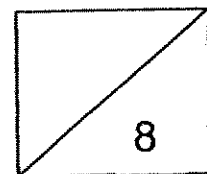
- 1) 3278
- 2) 3338
- 3) 7478
- 4) 7538

14 Which of the following is not equal to 6×9 ?

- 1) 9×6
- 2) $9 \times 9 \times 9 \times 9 \times 9 \times 9$
- 3) $9 + 9 + 9 + 9 + 9 + 9$
- 4) $6 + 6 + 6 + 6 + 6 + 6 + 6 + 6 + 6 + 6$

15 _____ $\div 6 = 9$

- 1) 45
- 2) 54
- 3) 63
- 4) 72



16 If $\clubsuit \clubsuit \clubsuit = \27 ,

then $\clubsuit \clubsuit \clubsuit \clubsuit \clubsuit = \$$ _____

- 1) 9
- 2) 18
- 3) 36
- 4) 45

17 What is the missing number in the box?

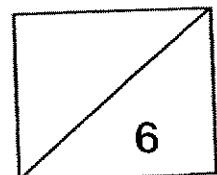
$$7 \times 8 = 56$$

$$9 \times 8 = \square + 56$$


- 1) 1×7
- 2) 1×8
- 3) 2×7
- 4) 2×8

18 What is 4 x 6 more than 100?

- 1) 24
- 2) 76
- 3) 124
- 4) 146



19 If  +  +  = 

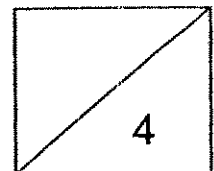
and  x 5 = 45 ,

then  = _____.

- 1) 8
- 2) 9
- 3) 3
- 4) 27

20 6 pairs of socks cost \$24. What is the cost of 8 pairs of such socks?

- 1) \$4
- 2) \$8
- 3) \$24
- 4) \$32



SECTION B

Questions 21 to 40 carry 2 marks each.

Write your answers in the spaces provided.

(40 marks)

21 8522 is 100 more than _____.

Ans: _____

22 In 2867, the digit '8' is in the _____ place.

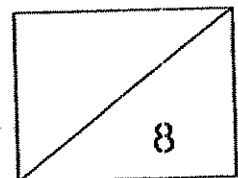
Ans: _____

23 5 thousands, 3 hundreds, 20 tens and 5 ones = _____.

Ans: _____

24 What is 993 less than the sum of 2220 and 3583?

Ans: _____



25 The digit '2' in 5241 stands for 2 x _____.

Ans: _____

26 Complete the number pattern below.

1, 3, 7, 13, 21, _____.

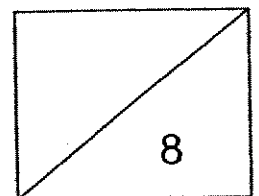
Ans: _____

27 $10\,000 - 2954 =$ _____.

Ans: _____

28 Form as many 3-digit numbers as possible with the digits 2, 4 and 8.
How many 3-digit numbers can be formed?

Ans: _____



- 29 A 4-digit number is made up of digits 0, 2, 5, 9. The digit 5 is in the tens place. What is the greatest possible number?

Ans: _____

30

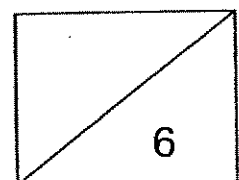


Mei Mei has 4 number cards as shown above. She arranges them to make 4-digit numbers. What is the **difference** between the largest and the smallest 4 digit number she can make?

Ans: _____

-
- 31 Kelly sold 240 stalks of flowers last Sunday. She sold 56 fewer stalks on Monday than on Sunday. How many stalks of flower did she sell on Monday?

Ans: _____



- 32 The smaller of two numbers is 1540. The greater number is 480 more than the smaller number. What is the sum of the two numbers?

Ans: _____

- 33 4×9 is the same as $6 \times$ _____.

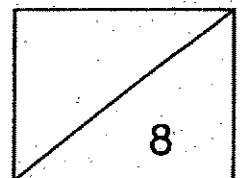
Ans: _____

- 34 $7 \times 7 = 100 -$ _____.

Ans: _____

- 35 4 boxes of lollipops cost \$28. Find the cost of 7 such boxes of lollipops?

Ans: \$ _____



- 36** Mr Cheng saves \$5831 in his bank. He puts in another \$1895 into the bank. How much money does he have in the bank altogether?

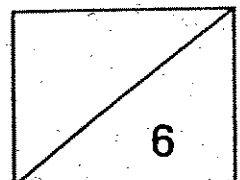
Ans: \$ _____

- 37** When 30 is added to a number, the answer is the same as multiplying the number by 7. What is the number?

Ans: _____

- 38** The total age of Mark and his mother is 64 years. If Mark's mother is 7 times as old as Mark, how old is Mark?

Ans: _____ years old

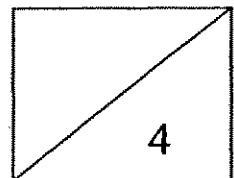


- 39 Mrs Sallah ties 7 red pens and 2 blue pens into a bundle.
There are 9 bundles altogether and there is 1 red pen left. How many pens does she have in all?

Ans: _____

- 40 Kong Lim bought 5 books at \$8 each and had \$55 left. How much did he have at first?

Ans: \$ _____



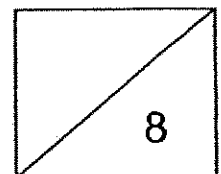
SECTION C

Questions 41 to 45 carry 4 marks each.

For questions 41-45, show your working clearly in the space provided for each question. (20 marks)

- 41** Seng Han bought 9 pictures cards. His brother has 7 times as many cards. How many more cards does his brother have?

-
- 42** There were 2831 visitors at the Zoo on Wednesday. There were 476 more visitors at the Zoo on Thursday than on Wednesday. How many visitors were at the Zoo on the two days?

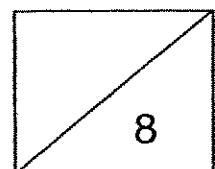


43 Jason collected 36 stamps. He has 6 times as many stamps as Benjamin. Peter collected 5 more stamps than Benjamin.

(a) How many stamps did Benjamin collect? [1 m]

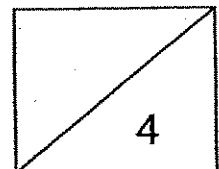
b) How many stamps did the three boys collect altogether? [3 m]


44 A pair of roller blades costs \$90. The cost of the pair of the roller blades is 9 times the cost of a pair of gloves. What is the total cost of the pair of roller blades and the gloves?



- 45 Miss Seah bought some balloons for her pupils. If she gave each of her pupils 6 balloons, she would have 2 balloons left over. If she gave each of them 8 balloons, she would be short of 2 balloons. What was the least possible number of pupils Miss Seah had?

- End of paper -
Check your work carefully





ANSWER SHEET

AI TONG PRIMARY SCHOOL - PRIMARY 3 MATHEMATICS 2007
CONTINUAL ASSESSMENT (1)

1. 3
2. 4
3. 2
4. 4
5. 3
6. 4
7. 4
8. 2
9. 2
10. 4
11. 2
12. 1
13. 3
14. 2
15. 2
16. 4
17. 4
18. 3
19. 3
20. 4
21. 8422
22. hundreds
23. 5505
24. 4810
25. 100
26. 31
27. 7046
28. 6
29. 9250
30. 6174
- 31) 184
32) 3560
33) 6
34) 51
35) \$49
36) \$7726
37) 5
38) 8
39) 82 pens
40) \$95
41) $9 \times 7 = 63$
 $63 - 9 = 54$
His brother have 54 more cards
42) $2831 + 476 = 3307$
 $2831 + 3307 = 6138$
There were 6138 visitors at
the zoo in the two days.
43) a) $36 \div 6 = 6$
He collect 6 stamps
b) $6 + 5 = 11$
 $11 + 36 + 6 = 53$
The three boys collected 53
stamps altogether
44) $\$90 \div 9 = \10
 $\$10 + \$90 = \$100$
It cost \$100
45) Miss Seah had 14 pupils.



Maha Bodhi School
2007 Continual Assessment 1
Mathematics

Name : _____ ()

Date : 27 February 2007

Class : Pr 3 _____

Duration : 1 h 45 min

BOOKLET A**Section A (40 marks)**

Questions 1 to 20 carry 2 marks each.

For each question, four options are given. One of them is the correct answer.

Make your choice (1, 2, 3 or 4). Shade the oval (1, 2, 3 or 4) on the Optical Answer Sheet.

1. In which of the following numbers does the digit 6 stand for 600?

- (1) 3476
- (2) 4763
- (3) 6743
- (4) 7634

2. $6999 = 9 + \underline{\hspace{2cm}} + 6000$

- (1) 900
- (2) 990
- (3) 90
- (4) 99

3. How many hundreds are there in 2000 ?

- (1) 2
- (2) 20
- (3) 200
- (4) 2000

4. 4 thousand and five can be written as _____.

- (1) 4050
- (2) 4005
- (3) 450
- (4) 405

5. What number is 190 tens **more** than 5500 ?

- (1) 3600
- (2) 5310
- (3) 5690
- (4) 7400

6. What is the missing number in the box ?

$$\begin{array}{r}
 4 \quad \boxed{} \quad 9 \quad 2 \\
 - \quad 1 \quad 8 \quad 9 \quad 3 \\
 \hline
 2 \quad 7 \quad 9 \quad 9
 \end{array}$$

- (1) 7
- (2) 6
- (3) 5
- (4) 4

7. Which number will you find in both the multiplication tables of 6 and 7 ?

- (1) 56
- (2) 49
- (3) 42
- (4) 36

8. Larry bought 5 similar cups.
Each cup cost \$6.
How much did Larry spend ?

- (1) \$ 11
- (2) \$ 25
- (3) \$ 30
- (4) \$ 36

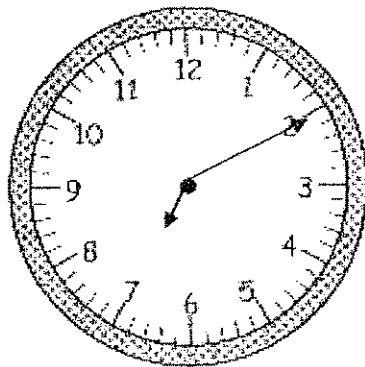
9. Florence bought 80 colour pencils.
She placed 10 colour pencils into a box.
How many boxes does she need ?

- (1) 8
- (2) 9
- (3) 70
- (4) 90

10. 24 sweets are shared equally among 4 children.
How many sweets do 3 children have ?

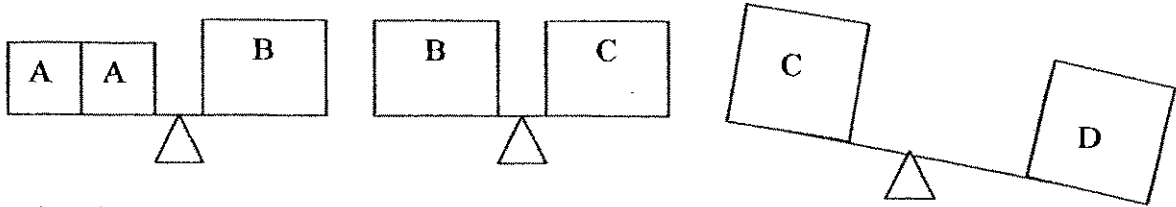
- (1) 6
- (2) 8
- (3) 18
- (4) 20

11. Look at the picture of the clock. What time is it ?



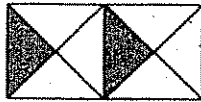
- (1) 7.02
- (2) 7.10
- (3) 10.07
- (4) 10.35

12. Look at the picture below. Which one is the heaviest ?



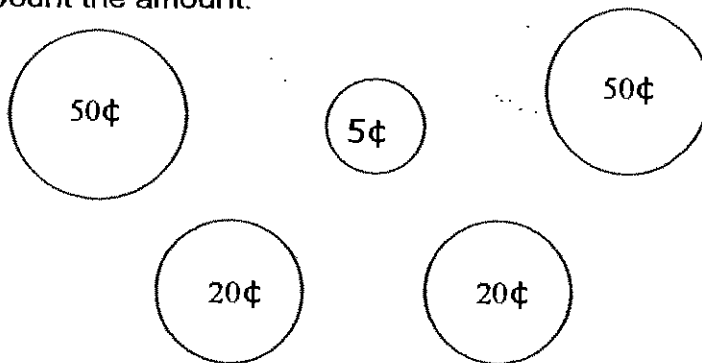
- (1) A
- (2) B
- (3) C
- (4) D

13. How many more triangles must you shade to show that $\frac{1}{2}$ of the figure is shaded ?



- (1) 1
- (2) 2
- (3) 3
- (4) 4

14. Count the amount.




- (1) \$1.40
- (2) \$1.45
- (3) \$1.50
- (4) \$1.55

15. 5 twenty-cent coins is the same as _____.

- (1) \$1
- (2) \$2
- (3) \$3
- (4) \$4

16. What is the number ?



- (1) 12
- (2) 13
- (3) 3
- (4) 52

17. Complete the number pattern.

5045 , 5057 , 5069 , _____

- (1) 5070
- (2) 5079
- (3) 5080
- (4) 5081

18. There are 23 boys and 19 girls in a classroom.
If each child is given 2 stickers, what is the total number of stickers given away ?

- (1) 42
- (2) 44
- (3) 62
- (4) 84

19. A 20 cm string is used to form a square.
Each side of the square is _____ cm long.

- (1) 20
- (2) 10
- (3) 5
- (4) 4

20. Four 5-cent coins and two 50-cent coins is _____.

- (1) \$0.20
- (2) \$0.70
- (3) \$1.00
- (4) \$1.20



2007 Continual Assessment 1

Mathematics

Name : _____ ()

Class : Pr 3 _____

Duration : 1 h 45 min

Date : 27 February 2007

Parent's Signature : _____

Section A (40 marks)	
Section B (40 marks)	
Section C (20 marks)	
Total (100 marks)	

BOOKLET B

Section B (40 marks)

Questions 21 to 40 carry 2 marks each.

Write your answers in the boxes provided. Give your answers in the units stated.

Show your working in the space provided. Marks will be awarded for correct method shown.

21. Form the largest 4-digit number with 7 , 9 , 0 , 2.

22. 3068 is 1000 less than _____.

23. There are 9 boxes and each box has 7 erasers in it.
How many erasers are there in all ?
24. $\div 5 = 8$

25. Jessie went to the beach at 4.30 p.m to sunbathe.
She finished sunbathing half an hour later.

She finished sunbathing at

26. Mary's mother has a mass of 52 kg.
Mary is 12 kg lighter than her mother.
What is the mass of Mary ?

 kg

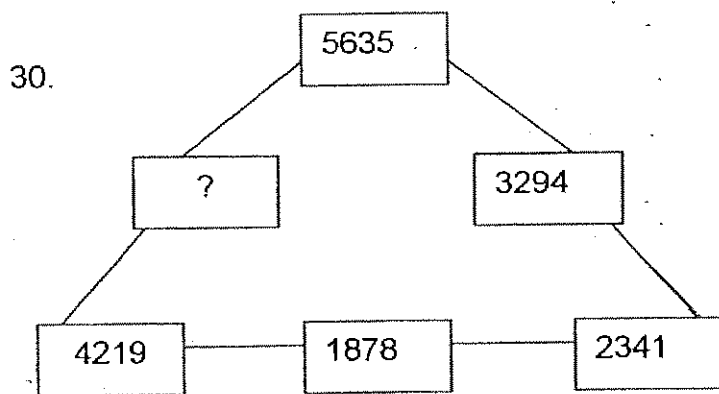
27. Arrange the fractions from the smallest to the greatest.

$$\frac{1}{2}, \frac{1}{4}, \frac{3}{4}$$

_____, _____, _____

28. $1584 + 226 = 600 + \boxed{?}$

29. There are 668 cars in a car park. 183 cars are driven out and 37 cars are driven in. How many cars are there now ?

 cars


What is the missing number ?

31. $\blacktriangle \times \blacktriangle = 49$

$\spadesuit \times \spadesuit = 100$

$\spadesuit + \spadesuit + \blacktriangle = \boxed{?}$


32. Add 25 to the product of 8 and 7 .
You will get _____.

33. $27 \div 3 =$ groups of 3.

34. There are some cows on a farm.
There are a total of 28 legs.
How many cows are there ?

cows

35.



Tom takes part in a 400-metre race.
He is 49 metres from the starting point.
How much more must he run to finish the race ?

m

36. $\frac{1}{7} + \frac{3}{7} =$

The graph below shows the favourite fruit of a group of children.
Answer questions 37 and 38.

apple	◆ ◆ ◆ ◆
durian	◆ ◆
guava	◆
mango	◆ ◆ ◆ ◆ ◆ ◆ ◆ ◆
orange	◆ ◆ ◆ ◆ ◆

Each ◆ stands for 9 children.

37. How many children chose guava and orange as their favourite fruit ?

 children

38. Twice as many children love apple than _____

39. Joe had \$20. He paid \$5 for his Maths textbook and \$9 for his workbooks.
How much money had he left ?

 \$

40. A box of sweets costs \$3.25.
A box of chocolates costs \$7.20.
How much more does the box of chocolates cost ?

 \$

Section C (20 marks)

Questions 41 to 45 carry 4 marks each.

Show your working clearly in the space below each question.

Write a statement for each step.

41. Lily has 1200 books. Alan has 294 fewer books than Lily .
How many books do Lily and Alan have altogether ?

42. There are 2610 children and twice as many adults watching a match at the stadium.
- How many adults are there ?
 - If there are 3845 men, how many women are there ?

43.

	Price
Adult	\$8
Child	\$6


Tickets to a concert cost \$8 per adult and \$6 per child.
Mrs Lim bought tickets for 8 adults and 6 children.
How much did she spend altogether ?

44. For lunch, John bought fish and chips and a packet of drink.
He paid \$8.70 and had \$1.30 left.
The packet of drink cost \$1.20.
- How much did the fish and chips cost ?
 - How much money did he have at first ?

45.



bicycle
2 wheels




tricycle
3 wheels

There are some tricycles and 14 bicycles in a shop.
If there are 61 wheels altogether, how many tricycles are there in the shop ?



***Remember to check your work!
Every mark counts.***



ANSWER SHEET

MAHA BODHI PRIMARY SCHOOL - PRIMARY 3 MATHEMATICS 2007
CONTINUAL ASSESSMENT (1)

1. 4
2. 2
3. 2
4. 2
5. 4
6. 2
7. 3
8. 3
9. 1
10. 3
11. 2
12. 4
13. 2
14. 2
15. 1
16. 2
17. 4
18. 4
19. 3
20. 4
21. 9720
22. 4068
23. 63
24. 40
25. 5.00PM
26. 40kg
27. $\frac{1}{4}$, $\frac{1}{2}$, $\frac{3}{4}$
28. 1210
29. 522 cars
30. 1416
- 31) 27
32) 81
33) 3
34) 7 cows
35) 351m
36) 4/7
37) 54
38) durian
39) \$6
40) \$3.95
- 41) $1200 - 294 = 906$
Alan has 906 books
 $1200 + 906 = 2106$
They have 2106 books altogether
- 42) a) $2610 \times 2 = 5220$
There are 5220 adults
b) $5220 - 3845 = 1375$
There are 1375 women at the match
- 43) $\$8 \times 8 = \64
8 adults pay \$64
 $\$6 \times 6 = \36
 $\$36 + \$64 = \$100$
She spend \$100 altogether
- 44) a) $\$8.70 - \$1.20 = \$7.50$
The fish and chips cost \$7.50
b) $\$8.70 + \$1.30 = \$10.00$
He had \$10.00 at first

$$45) 14 \times 2 = 28$$

14 bicycles have 28 wheels

$$61 - 28 = 33$$

The tricycles have 33 wheels

$$33 \div 3 = 11$$

There are 11 tricycles in the shop

Methodist Girls' School (Primary)

Primary 3

Continual Assessment 1 (2007)

Mathematics

Name: _____ ()

Class: Pr 3 _____

Marks: _____

Section A (10 x ½ mark)**Mental Sums**

- | | |
|----------|-----------|
| 1. _____ | 6. _____ |
| 2. _____ | 7. _____ |
| 3. _____ | 8. _____ |
| 4. _____ | 9. _____ |
| 5. _____ | 10. _____ |

Section B (5 x 2 marks)

Choose the correct answer and write its number (1, 2, 3 or 4) in the brackets provided.

11. $3\ 896 = 6 + 90 + \underline{\hspace{2cm}} + 3\ 000$

What is the missing number?

- (1) 8
- (2) 80
- (3) 800
- (4) 8 000

()

12. Which one of the followings is 200 more than 5 429?

- (1) 5 229
- (2) 5 409
- (3) 5 449
- (4) 5 629

()

13. $5 \times 5 = 5 + 5 + \underline{\hspace{2cm}}$. What is the missing number?

- (1) 5
- (2) 10
- (3) 15
- (4) 25

()

14. Mrs Tan weighs 56 kg. Her daughter is 19 kg lighter. What is their total mass?

- (1) 37 kg
- (2) 75 kg
- (3) 83 kg
- (4) 93 kg

()

15. A television set cost \$960. An oven cost \$359. What is the difference in price?

- (1) \$601
- (2) \$609
- (3) \$611
- (4) \$619

()

Section C (15 x 1 mark)

Fill in each box with the correct answer.

16. Six thousand, five hundred and eight written in numerals is

17. is 100 more than 3 682.

18. 350 is 30 less than

19. In 3 465, the value of the digit 6 is

20. Complete the number pattern.

5 620, 5 510, 5 400

21. Arrange the following numbers in order, beginning with the largest.

3 856, 3 658, 3 865, 3 685

22. Form the smallest 4-digit number with the digits 8, 4, 7, 2.

23. The difference between 6 895 and 6 985 is

24. Subtract 3 tens from 360. The answer is

25. The sum of two numbers is 32. One of the numbers is 15.
What is the other number?

26. What is the product of 38 and 4?

27. 4 children shared 23 sweets equally.
How many sweets were left?

28. A pair of shoes costs \$19. What is the cost of 3 pairs of such shoes?

29. Ali collects stamps as a hobby. He had 168 stamps. Then his uncle gave him some stamps. He now has 295 stamps. How many stamps did his uncle give him?

30. What is the missing digit in the box?

$$\begin{array}{r} 1356 \\ + 5\boxed{}49 \\ \hline 6405 \end{array}$$

Section D (5 x 4 marks)

Solve the following problems.

Show your working clearly in the space provided.

31. A farmer had 1 600 apples. 256 of the apples were rotten and he threw them away. He sold 750 apples to the fruiterer.

- a) How many apples were not rotten?**
- b) How many apples had the farmer left after selling the apples to the fruiterer?**


32. There were 700 adults at a concert.

There were 275 children and 450 women at the concert.

- a) How many men were at the concert?**
- b) How many people were at the concert altogether?**

33. Mrs Raju made 1 250 pineapple tarts on Saturday.
She made more ⁵⁰⁰ pineapple tarts on Sunday than on Saturday.
- How many pineapple tarts did she make on Sunday?
 - How many pineapple tarts did she make on both days?
34. There were 48 Chinese books and 3 times as many English books in the class library. How many books ^{were} there altogether in the library?

35. Mrs Tan paid a total of \$47 for a blouse and 5 T-shirts. If the blouse cost \$12, what was the cost of 1 T-shirt?



ANSWER SHEET

M G S PRIMARY SCHOOL - PRIMARY 3 MATHEMATICS 2007
CONTINUAL ASSESSMENT (1)

11) 3

12) 4

13) 3

14) 4

15) 1

16) 6508

17) 3782

18) 380

19) 60

20) 5730

21) 3865, 3856, 3685, 3658

22) 2478

23) 90

24) 330

25) 17

26) 152

27) 3

28) \$57

29) 127

30) 0

31) a) $1600 - 256 = 1344$

1344 apples were not rotten.

b) $1344 - 750 = 594$

The farmer still had 594 apples left.

32) a) $700 - 450 = 250$

There were 250 men at the concert.

b) $700 + 275 = 975$

There were 975 people at the concert.

33) a) $1250 + 500 = 1750$

Mrs Raju baked 1750 pineapple tarts on Sunday.

b) $1750 + 1250 = 3000$

Mrs Raju baked 3000 pineapple tart altogether.

34) a) $48 \times 3 = 144$

There are 144 English books in the class library.

b) $144 + 48 = 192$

There are 192 books altogether.

35) a) $\$47 - \$12 = \$35$

The T-shirts cost \$35 altogether.

b) $\$35 \div 5 = \7

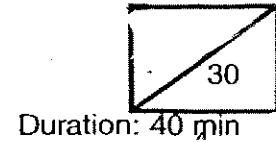
Each T-shirt cost \$7 altogether.

---end---

Rosyth School
Mathematics Topical Test 2007
Primary 3

Name: _____ ()

Class: Pr 3 -



Duration: 40 min

Date: 6 March 2007

Parent's Signature: _____

Section A (10 marks)

Question 1 to 5 carry 2 marks each.

Choose the correct answer and write its number (1, 2, 3 or 4) in the brackets provided.

1. What is the missing number in the following number pattern?

302 , _____ , 282 , 272.

(1) 202

(2) 292

(3) 312

(4) 402

()

2. What must be added to 327 to make 1 000?

(1) 673

(2) 773

(3) 1 237

(4) 1 327

()

3. What is the sum of 2 hundreds 3 tens and 12 ones?

(1) 224

(2) 242

(3) 602

(4) 620

()

4. When 5 321 is added to 2 360, which digit is in the thousands place?

(1) 1

(2) 6

(3) 7

(4) 8

()

5. How many 3-digit **odd** numbers can you make using the digits 0, 5 and 7 without repeating any of the digits?

(1) 6

(2) 2

(3) 3

(4) 4

()

Section B (14 marks)

Questions 6 to 9 carry 1 mark each. Questions 10 to 14 carry 2 marks each,
For each question, show your working clearly in the space below each question and
write your answers in the answer spaces provided.

6. What is five thousand, eight hundred and eleven in numerals?

7. What is the value of 8 in 3 284 ?

8. Rearrange the following numbers from the smallest to the biggest.

4 561 , 5 416 , 4 156 , 5 164

Ans : _____

9. Arrange the digits 2, 8, 7 and 9 to form the greatest 4-digit even number.

10. John collected 986 stamps. Sean collected 327 more stamps than him.
How many stamps do they have altogether?

stamps

11. My mother made some tarts. She sold 728 tarts on Monday and 631 tarts on Tuesday. She had 142 tarts left. How many tarts did she have at first?

tarts

12. There were 1 072 ~~tennis balls~~ ^{ping pong balls} in a box. Father gave 138 ping pong balls to James and some ping pong balls to Peter. There were 723 ping pong balls left. How many ping pong balls did Father give to Peter?

ping pong balls

13. There are 5 baskets. There are 7 oranges in each basket. How many oranges are there altogether?

oranges

14. James reads 3 pages of a storybook everyday. What is the total number of pages of the storybook he will read in 9 days?

pages

Section C (6 marks)

For questions 15 and 16, show your working clearly in the space below each question and write your answers in the spaces provided. The marks awarded for each question is given in brackets.


15. Natalie has 420 sweets.
Her sister, Megan has 125 less than Natalie.
Their sister, Sheryl has 48 more sweets than Megan.
How many sweets do they have altogether?

Answer : _____ (3 m)

16. The sum of two numbers is 19. The difference ^{between the} ~~of~~ two numbers is 5.
What is the bigger number?

Answer : _____ (3 m)


----- END OF PAPER -----




ANSWER SHEET

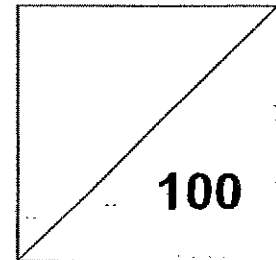
ROSYTH PRIMARY SCHOOL - PRIMARY 3 MATHEMATICS 2007
CONTINUAL ASSESSMENT ()

1. 2
2. 1
3. 2
4. 3
5. 2
6. 5811
7. 80
8. 4156, 4561, 5164, 5416
9. 9872
10. 2299
11. 1501
12. 211
13. 35
14. 27
15. 1058
16. 12





**CATHOLIC HIGH SCHOOL
PRIMARY THREE
CONTINUAL ASSESSMENT 1
MATHEMATICS**



Name : _____ ()

Class : Pr. 3 _____

Date : 27 February 2007

Duration : 1 h 30 min

Parent's Signature/Date : _____

There are 14 pages consisting of 3 sections in this paper.

Section A : Multiple Choice Questions (MCQ) 20 x 2 marks

Section B : Open-ended Questions 20 x 2 marks

Section C : Story Sums 5 x 4 marks

Section A : Multiple Choice Questions (20 x 2 marks)

For each of the question from 1 to 20, four options are given. One of them is the correct answer. Make your choice (1 , 2 , 3 or 4). Shade the correct oval (1 , 2 , 3 or 4) on the Optical Answer Sheet (OAS).

1. The value of the digit 4 in 9402 is _____.
(1) 4000
(2) 400
(3) 40
(4) 4

2. In 5276, the digit _____ is in the thousands place.
(1) 5
(2) 2
(3) 6
(4) 7

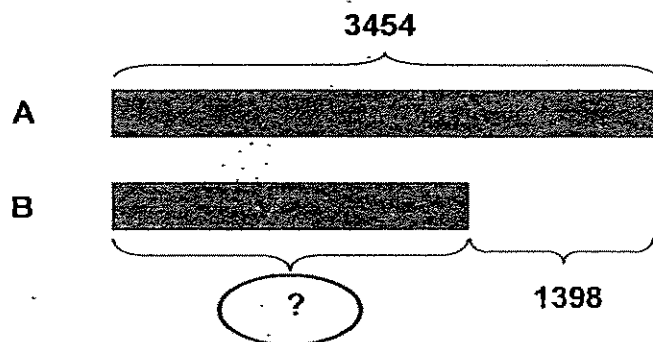
3. The sum of 1736 and 4966 is _____.
(1) 3230
(2) 6602
(3) 6702
(4) 6692

4. The difference between 4375 and 2586 is _____.
(1) 1789
(2) 2211
(3) 2389
(4) 6961

5. Subtract 3070 from 5612. The answer is _____.

- (1) 2040
- (2) 2042
- (3) 2542
- (4) 2662

6. Look at the model below. Find the missing number in the oval.



- (1) 2056
- (2) 2144
- (3) 4852
- (4) 5510

7. The product of 8 and 9 is _____.

- (1) 17
- (2) 27
- (3) 72
- (4) 81

8. Multiply 9 by 6. The answer is _____.

- (1) 45
- (2) 54
- (3) 63
- (4) 72

9. 1000 less than 8246 is _____.
- (1) 7000
 - (2) 7046
 - (3) 7246
 - (4) 9246
10. Complete the following number sequence:
3248 , _____ , 3468 , 3578 , 3688.
- (1) 3138
 - (2) 3358
 - (3) 3488
 - (4) 3598
11. Mr Pickles sold 3567 eggs on Saturday. He sold 1890 more eggs on Sunday than on Saturday. How many eggs did he sell on the two days?
- (1) 1677
 - (2) 5244
 - (3) 5457
 - (4) 9024
12. The sum of three numbers is 2178. The sum of four numbers is 4316. What is the fourth number?
- (1) 2138
 - (2) 2208
 - (3) 2262
 - (4) 6494

13. The difference between two numbers is 2947. The bigger number is 5378. What is the sum of the two numbers?
- (1) 2431
 - (2) 5378
 - (3) 7809
 - (4) 8325
14. Fadzil has 7 Pokemon stickers. Brian has thrice as many stickers as Fadzil. How many Pokemon stickers do they have in all?
- (1) 7
 - (2) 10
 - (3) 21
 - (4) 28
15. Joanne spent 63 days to finish reading 7 story books. If she took an equal number of days to read each book, how long did she take to finish reading two story books?
- (1) 9
 - (2) 2
 - (3) 14
 - (4) 18
16. I am a number that has a digit 6 in the ones place.
I have a zero in the tens place.
I am greater than 2000 but smaller than 3000.
The sum of all the digits is 9.
What number am I?
- (1) 1206
 - (2) 2016
 - (3) 2106
 - (4) 3006

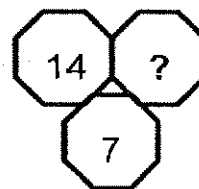
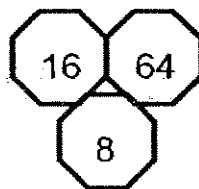
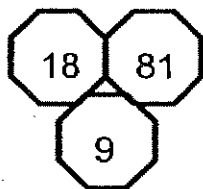
17. The difference between two numbers is 27.
The bigger number is twice the smaller number.
What is the bigger number?

- (1) 27
- (2) 2
- (3) 54
- (4) 81

18. There were 28 more marbles in Box A than Box B. John transferred 9 marbles from Box B to Box A, how many more marbles were there in Box A at the end?

- (1) 10
- (2) 18
- (3) 37
- (4) 46

19. Study the pattern of the following numbers. What is the missing number?



- (1) 21
- (2) 49
- (3) 56
- (4) 63

20. I am thinking of a number.
 It is a 2-digit number.
 It is between 65 to 80.
 It can be counted in nines.
 What number am I thinking of?

- (1) 69
- (2) 72
- (3) 75
- (4) 79

Section B : Open-ended Questions (20 x 2 marks)

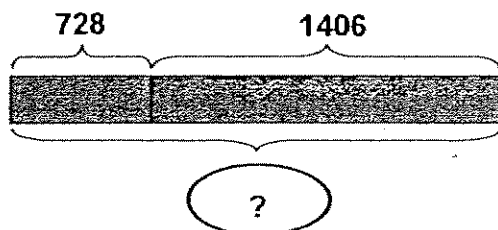
Write the correct answers in the answer boxes provided.

21. Write the following in numeral.

Five thousand and ninety-nine

22. The sum of 6258 and 1457 is _____.

23. Find the sum of the following model.

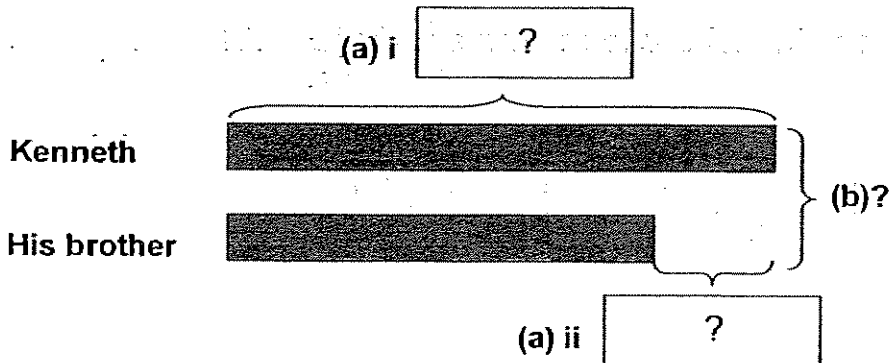


24. Find the difference between 8260 and 5512.

25. Take away 3378 from 6216. The answer is _____.

26. Kenneth has 1534 coins. His brother has 189 fewer coins than him.

(a) Find the missing number in the boxes.



(a) i

(a) ii

(b) How many coins do they have altogether?

(b) coins

27. Divide a set of 48 pineapple tarts into 6 equal groups.

There are _____ pineapple tarts in each group.

28. David had 24 more stickers than Tom. How many stickers must David give to Tom so that they will have the same number of stickers?

29. Look at the numbers below. Study the pattern carefully.
What is the next number?

Thousands	Hundreds	Tens	Ones
8	9	3	0
8	8	3	1
8	7	3	2
?	?	?	?

30. Study the number pattern below. Find the missing number.


1, 3, 7, 13, _____, 31

31. Baker Tom made 2135 apple pies in a day.
Baker Lim made 1245 more apple pies than Baker Tom.
Baker Lim made _____ apple pies.

32. Bryan and Jerry had the same number of bookmarks.
After Bryan gave 36 bookmarks to Jerry, Jerry had twice as
many bookmarks as Bryan. How many bookmarks did each of
them have at first?

33. Form the greatest odd number by using all the digits 5, 3, 2, 7.
Then subtract 1221 from the number.
What answer will you get?

34. Look at the numbers below.
Write a subtraction sentence using the numbers below and
fill in all the boxes.

 - =

35. There are 7 strings of beads. There are 6 beads on each string.
How many beads are used altogether?

beads

36. Using the clues below, fill in the missing digits.

	Thousands	Hundreds	Tens	Ones
A First number	2	2		0
B Second number	5		7	
C Third number	3	1	5	

CLUES

- ❖ The ones digit of the third number is the greatest 1-digit number.
- ❖ The sum of all the ones digit is 12.
- ❖ The tens digit of the first number is 5 less than the tens digits of the third number.
- ❖ The hundreds digit of the second number is 2 more than the hundreds digit of the first number.

37. What is the value in the blank?

$$\text{☼} + \text{☼} + \text{☼} = 18$$

$$\text{☼} + \text{☼} = 11$$

$$\text{☼} + \text{☼} = \text{☼}$$

$$\text{☼} + \text{☼} + \text{☼} = \underline{\quad ? \quad}$$

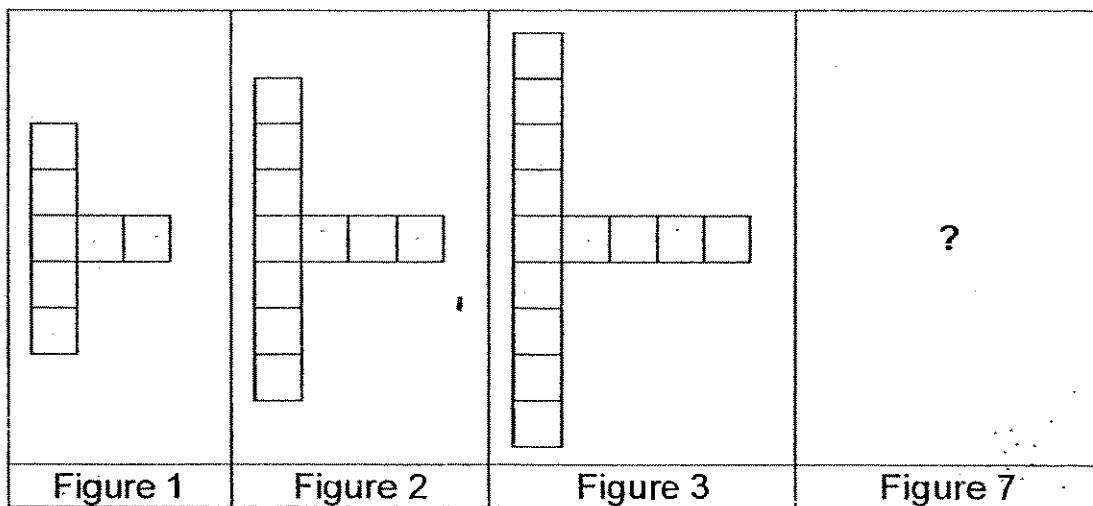
38. The missing number in the box is _____.

$$\begin{array}{r}
 5 \quad 0 \quad 0 \quad 0 \\
 - 3 \quad \boxed{?} \quad 4 \quad 1 \\
 \hline
 1 \quad 7 \quad 5 \quad 9
 \end{array}$$

39. Percy's mass is 21 kg.
 Thomas' mass is 2 kg more than Percy.
 Henry's mass is 5 kg less than Thomas.
 Edward's mass is the total mass of Percy, Thomas and Henry.
 What is Edward's mass?

 kg

40. Study the figures below. How many cubes are there in Figure 7?



cubes

Section C : Story Sums (5 x 4 marks)

Solve the following story sums. All **workings** must be shown clearly.

41. There were 1290 children at the Children's Day Carnival in the morning. 2456 children went in the early afternoon. Another 345 children went in the late afternoon. How many children were at the Children's Day Carnival?

42. Mrs Foo wants to buy a washing machine which costs \$1873. She has saved \$925. How much more does she need to save?

-
43. Mrs Lee used 100g of sugar on two days. If she used 76g more sugar on Monday than on Tuesday, how much sugar did she use on Tuesday?


44. Shumin bought 60 oranges. She packed 6 oranges into each bag.

(a) How many bags of oranges were there?

(b) If she packs the oranges into boxes of 5, how many boxes will she need?

45. Each pail can hold 7 litres of water.
How many such pails are needed to hold 56 litres of water?

-----End of Paper-----



ANSWER SHEET

CATHOLIC HIGH PRIMARY SCHOOL - PRIMARY 3 MATHEMATICS 2007
CONTINUAL ASSESSMENT (1)

- 1.2 33) 6302 37) 14
 2.1 34) $402 - 245 = 157$ 38) 2
 3.3 35) 42 beads 39) 62 kg
 4.1 36) a) 0 40) 25 cubes
 5. b) 4, 3
 6. c) 9
 7.3
 8.1 41) $1290 + 2456 = 3746$
 9.3 $3746 + 345 = 4091$
 10. 2 4091 children at the Children's
 11. 3 Day Carnival.
 12. 2
 13. 4 42) $\$1873 - \$925 = \$948$
 14. 1 She need \$948 to save.
 15. 3
 16. 4 43) 12
 17. 4
 18. 3 44) a) $60 \div 6 = 10$
 19. 3 There were 10 bags of oranges.
 20. 4 b) $60 \div 5 = 12$
 21. 2 She will need 12 boxes.
 22. 2
 23. 5099 45) $8 \times 7 = 56$
 24. 7715 8 such pails are needed to hold
 25. 2134 56 litres of water.
 26. 2748
 27. 2838
 28. a) i) 1534
 a) ii) 189
 b) 2879
- end---
- 27.8
 28.12 stickers
 29.8633
 30.21
 31.3380
 32.108



AI TONG SCHOOL

2007

SEMESTRAL ASSESSMENT 1

PRIMARY 3

MATHEMATICS

DURATION : 1 H 30 MIN

DATE : 11 May 2007

INSTRUCTIONS

Do not open the booklet until you are told to do so.

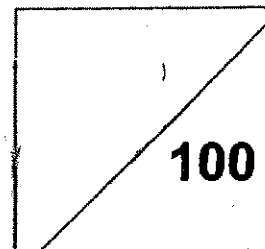
Follow all instructions.

Answer all questions.

Name : _____ ()

Class : Primary 3 _____

Marks:



Parent's Signature	: _____
Date	: _____

SECTION A**Question 1 to 20 carry 2 marks each.**

For each question, four options are given. One of them is the correct answer.

Make your choice (1, 2, 3, or 4). Shade the oval (1, 2, 3, or 4) on the Optical Answer Sheet. (40 marks)

1 Which of the following has the same value as 5604?

- 1) $560 + 4$
- 2) $500 + 600 + 4$
- 3) $5000 + 600 + 4$
- 4) $5000 + 600 + 40$

2 7 thousands and 6 hundreds = _____.

- 1) 760
- 2) 7006
- 3) 7060
- 4) 7600

3 How many hundreds are there in 8200?

- 1) 82
- 2) 2
- 3) 200
- 4) 820

4 In 9453, what is the value of digit 4?

- 1) 4×1
- 2) 4×10
- 3) 4×100
- 4) 4×1000

5 A fruit seller had 1005 apples and 410 durians. He sold 765 fruits. How many fruits were left?

- 1) 650
- 2) 750
- 3) 1415
- 4) 2810

6 What is the sum of 26 hundreds and 5 ones?

- 1) 260
- 2) 265
- 3) 2605
- 4) 2650

7 4569 is 10 tens less than _____.

- 1) 4469
- 2) 4559
- 3) 4579
- 4) 4669

- 8** Mrs Tay baked 2537 buns on Saturday. She baked 186 more buns on Sunday than on Saturday. How many buns did she bake on Sunday?
- 1) 2413
 - 2) 2423
 - 3) 2613
 - 4) 2723
- 9** John has 40 stickers. Mary has thrice as many stickers as he. How many stickers does Mary have?
- 1) 80
 - 2) 120
 - 3) 160
 - 4) 180
- 10** When a number is divided by 6, the quotient is 72. What is the number?
- 1) 12
 - 2) 78
 - 3) 432
 - 4) 522
- 11** 62×3 is the same as $6 \times$ _____
- 1) 31
 - 2) 186
 - 3) 372
 - 4) 1116

- 12** What is the product of 852 and 6?
- 1) 846
 - 2) 858
 - 3) 5112
 - 4) 8526
- 13** Weiming had 268 marbles. He put them in groups of 7. How many extra marbles would there be?
- 1) 38
 - 2) 2
 - 3) 261
 - 4) 1876
- 14** How many 10 cents are there in \$8.80?
- 1) 8
 - 2) 88
 - 3) 880
 - 4) 8800
- 15** Mrs Tan bought a blouse and a skirt. She gave the cashier \$100 and got back \$23.70. If the skirt cost \$48.90, how much was the blouse?
- 1) \$25.20
 - 2) \$27.40
 - 3) \$72.60
 - 4) \$76.30

16 If 2 pencils cost \$1, how much will 16 such pencils cost?

- 1) \$8.00
- 2) \$9.00
- 3) \$16.00
- 4) \$32.00

17 What is 152 g less than 2 kg?

- 1) 48 g
- 2) 848 g
- 3) 1848 g
- 4) 2152 g

18 The mass of a packet of onions is 500 g. A packet of rice is twice as heavy as the packet of onions. What is the total mass?

- 1) 1000 g
- 2) 1500 g
- 3) 2000 g
- 4) 2500 g

19 Liming ran round the playground 4 times. If she ran 600 m altogether, what was the distance she ran in one round?

- 1) 15 m
- 2) 150 m
- 3) 240 m
- 4) 2400 m

20 The length of a tennis court is about 30 _____.

- 1) m
- 2) cm
- 3) km
- 4) mm

SECTION B**Questions 21 to 40 carry 2 marks each.**

Write your answers in the spaces provided.

(40 marks)

21 Write one hundred and forty-eight dollars and five cents in figures.

Ans: \$ _____

22 $600 + \underline{\hspace{2cm}} = 3000 - 400$

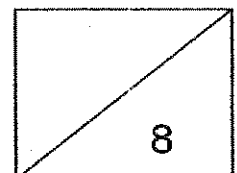
Ans: _____

23 $504 \div 8$ is the same as $7 \times \underline{\hspace{2cm}}$

Ans: _____

24 Benson is 12 years old now. He is 25 years younger than his father. How old will his father be in 10 years' time?

Ans: _____ years old



25



What is the start number ?

Ans: _____

26 Complete the number pattern below.

1268 , 1248 , 1208 , 1148, _____

Ans: _____

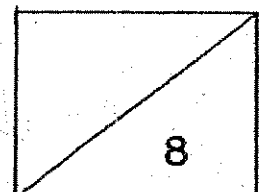
27 How many wheels do 12 cars and 9 motorcycles have altogether?

Ans: _____ wheels

28 What is the difference between 9000 and 2989?

Ans: _____

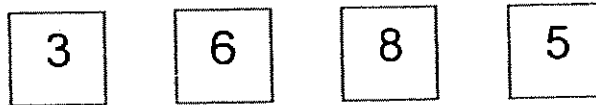
8



- 29 Ming Hwa had 94 cm of ribbon. She cut it into 5 equal pieces and had 14 cm of it left. What was the length of each piece of ribbon?

Ans: _____ cm

30

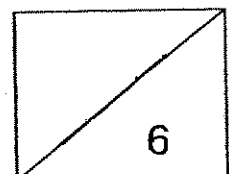


Form the largest **even** number. What is the digit in the hundreds place?

Ans: _____

- 31 2551 adults visited the zoo. There were 1352 fewer children than adults. How many children were there?

Ans: _____ children



32 If $\square + \triangle + \star = 32$,

$$\square + \triangle = 22,$$

$$\square + \star = 17,$$

what is $\triangle + \star$?

Ans: _____

33 A toy plane costs \$16.75. A toy train cost \$4.80 less than the toy plane. How much does the toy train cost?

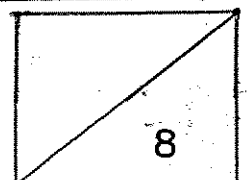
Ans: \$ _____

34 Write 3097 g in kilograms and grams.

Ans: _____ kg _____ g

35 When I divide a number by 8, its quotient is also 8 and its remainder is 6. What is the number?

Ans: _____



- 36 Mrs Lee used 2500 g of flour to bake some cakes. She had 3400 g of flour left. How much flour had she at first?

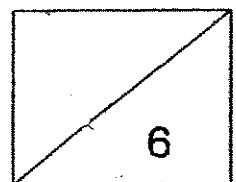
Ans: _____ kg _____ g

- 37 I am thinking of a number between 36 and 46. When I divide it by 7, its remainder is 5. When I divide it by 9, its remainder is 4. What is the number?

Ans: _____

- 38 Ribbon A is 36 cm long. Ribbon B is 15 cm longer than ribbon A. The total length of ribbon B and ribbon C is 79 cm. How long is ribbon C?

Ans: _____ cm

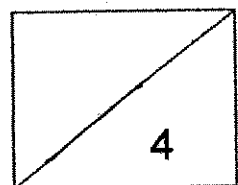


- 39 A florist sold 962 flowers. She sold 256 more roses than sunflowers. How many sunflowers did she sell?

Ans: _____

- 40 Mr Singh worked 9 days and was paid \$882 in all. If he was paid the same amount a day, how much was he paid a day?

Ans: \$ _____



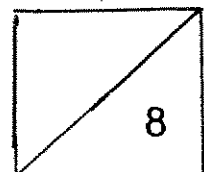
SECTION C

Questions 41 to 45 carry 4 marks each.

For questions 41-45, show your working clearly in the space provided for each question . (20 marks)

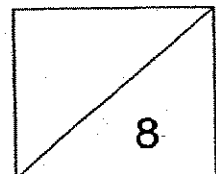
- 41** The total length of 2 pencils is equal to the total length of 3 markers.
Each marker is 18 cm long.
How much longer is a pencil than a marker?

-
- 42** Alex has 66 more coins than Ben. Ben has 22 fewer coins than Charles. They have 724 coins altogether. How many coins does Ben have?



- 43 Mr. Fu bought 8 boxes of chocolates. There were 97 chocolates in one box. He then repacked them into packets of 6. How many chocolates were left?

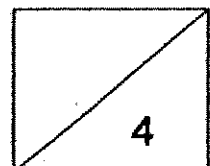
- 44 A radio costs twice as much as a calculator. 4 radios cost \$280. How much does a calculator cost?




- 45** There are 27 ducks and goats in a farm. They have 76 legs in all.
How many ducks are there? How many goats are there?

- End of paper -

Check your work carefully





ANSWER SHEET

AI TONG PRIMARY SCHOOL - PRIMARY 3 MATHEMATICS 2007
SEMESTRAL ASSESSMENT (1)

1. 3
2. 4
3. 1
4. 3
5. 1
6. 3
7. 1
8. 4
9. 2
10. 3
11. 1
12. 3
13. 2
14. 2
15. 2
16. 1
17. 3
18. 2
19. 2
20. 1
21. \$148.05
22. 2000
23. 9
24. 47
25. 114
26. 1068
27. 42
28. 6011
29. 16cm
30. 5
- 31) 1199 children
32) 25
33) \$11.95
34) 3kg 97g
35) 70
36) 5kg 900g
37) 40
38) 28cm
39) 353 sunflowers
40) \$98
41) $18 \times 3 = 54$
 $54 \div 2 = 27$
 $27 - 18 = 9$
It is 9cm longer.
42) $724 - 66 - 22 = 636$
 $636 \div 3 = 212$
Ben have 212 coins.
43) $97 \times 8 = 776$
 $776 \div 6 = 129R2$
2 chocolates were left.
44) $\$280 \div 4 = \70
 $\$70 \div 2 = \35
It cost \$35
45) There are 16 ducks and 11 goats.

3. Which one of the following has the smallest value ?

- (1) $80 - 10$
- (2) $80 + 10$
- (3) 80×10
- (4) $80 \div 10$

4. When Jessie plays hide-and-seek, she counts, " 145, 140, 135, 130 ...". Which of the following statement is true ?

- (1) Jessie is counting forward in fives.
- (2) Jessie is counting forward in tens.
- (3) Jessie is counting backwards in fives.
- (4) Jessie is counting backwards in tens.

5. $9 + 9 + 9 + \square = 5 \times 9$.

The missing value is _____.

- (1) 9
- (2) 18
- (3) 27
- (4) 36

6. If $\blacklozenge + \blacklozenge + \text{☺} = 24$

And $\blacklozenge + \text{☺} = 20$

Then $\text{☹} + \text{☹} = ?$

- (1) 32
- (2) 16
- (3) 8
- (4) 4

7. What must be added to 486 and 726 to make 2000 ?

- (1) 788
- (2) 1212
- (3) 1274
- (4) 1514

8. 4 hundreds less than 4444 is _____ .
- (1) 4440
 - (2) 4404
 - (3) 4044
 - (4) 4000
9. Which of the following numbers can be divided by 5 without leaving a remainder ?
- (1) 152
 - (2) 501
 - (3) 554
 - (4) 925
10. 48 marbles are shared equally among 3 boys.
How many marbles do 2 boys have ?
- (1) 8
 - (2) 12
 - (3) 24
 - (4) 32
11. I am an odd number between 30 and 50. I am not divisible by 5
but I am divisible by 7. What number am I ?
- (1) 28
 - (2) 35
 - (3) 42
 - (4) 49

12. Study the pattern below:

2	4
6	8

8	16
24	A



32	64
96	128

The value of A is _____.

- (1) 24
- (2) 32
- (3) 48
- (4) 64

13. Mary bought 5 pears altogether. How much did she have to pay ?

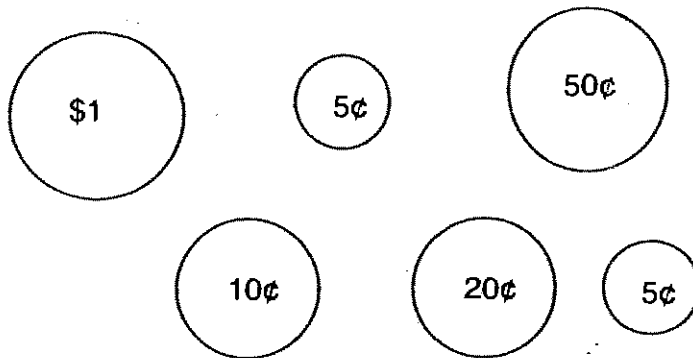
- (1) \$2.50
- (2) \$3.20
- (3) \$3.00
- (4) \$3.50



14. 8 fifty-cent coins is the same as _____.

- (1) \$5
- (2) \$2
- (3) \$8
- (4) \$4

15. What is the total value of the coins shown below ?




- (1) \$1.80
- (2) \$1.85
- (3) \$1.90
- (4) \$1.95

16. The length of the classroom floor is about _____.

- (1) 12 cm
- (2) 120 cm
- (3) 12 m
- (4) 12 km


17.



What fraction of the above figure is shaded ?

- (1) $\frac{2}{8}$
- (2) $\frac{3}{8}$
- (3) $\frac{4}{8}$
- (4) $\frac{5}{8}$

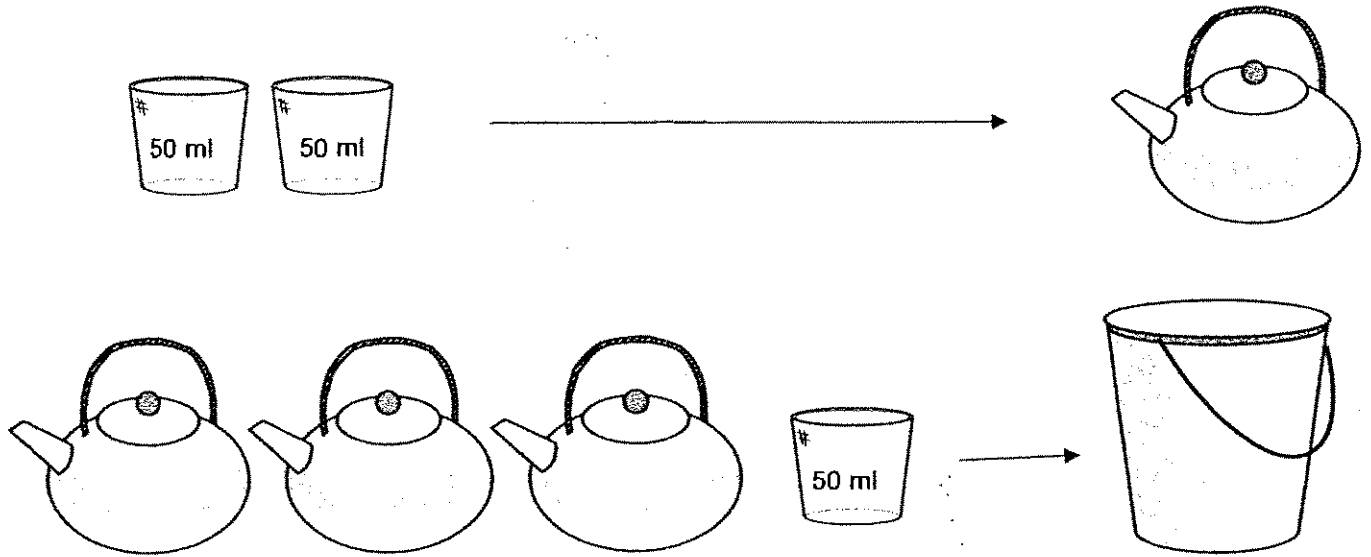
18.



The mass of the pineapple is 840g .
What is the mass of each apple ?

- (1) 105 g
- (2) 140 g
- (3) 168 g
- (4) 210 g

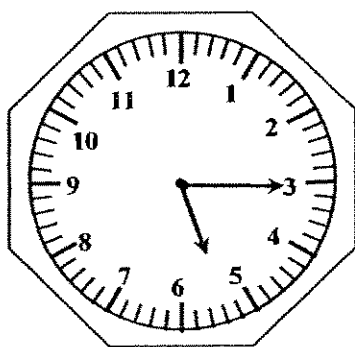
19.



How much water can the pail hold ?

- (1) 100 ml
- (2) 150 ml
- (3) 300 ml
- (4) 350 ml

20. What is the time shown on the clock below ?



- (1) 3.25
- (2) 3.50
- (3) 5.15
- (4) 6.15



Maha Bodhi School
2007 Semestral Assessment 1
Mathematics

Name : _____ ()

Class : Pr 3 _____

Duration : 1 h 45 min

Date : 9 May 2007

Parent's Signature : _____

Section A (40 marks)	
Section B (40 marks)	
Section C (20 marks)	
Total (100 marks)	

BOOKLET B
Section B (40 marks)

Questions 21 to 40 carry 2 marks each.

Write your answers in the boxes provided. Give your answers in the units stated.

Show your working in the space provided. Marks will be awarded for correct method shown.

21. Write 9844 in words.

22. $3506 = 2000 + \underline{\hspace{2cm}} + 6$

23. Form the smallest even number with the digits 8 , 7 , 2 , 9 .

24. Complete this number pattern

3975 , _____ , 3905 , 3870

25. Divide 54 by 4. The remainder is _____

26. Mr.Lim has 932 oranges. He sold 234 of them and threw away 74 rotten ones.
How many oranges has he left ?

27. John bought 48 marbles. He shared them with 2 friends.
How many marbles did each of them have ?

28. $81 \times 8 = \square \times 9 \times 8$


The missing number in the box is _____

29. A fish tank contains 6 litres of water. It is only half filled with water. What is the capacity of the fish tank ?

30. The sum of two numbers is 508. If the first number is 239, find the second number.

31. 333 added to the product of 9 and 6 is _____.

32. The time shown on the clock below is 20 minutes faster than the actual time. The actual time is _____ p.m.



33. At Eunos MRT station, 15 passengers alighted from the train and 19 passengers boarded it. There were 158 passengers in the train after that. How many passengers were in the train at first ?

passengers

34. Arrange the fractions in order. Begin with the greatest .

$$\frac{1}{8}, \frac{3}{8}, \frac{3}{7}$$

_____ , _____ , _____

35. $\frac{6}{7} - \frac{2}{7} =$

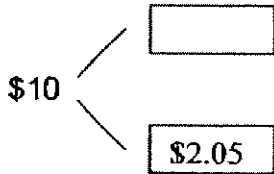
36. String A is 6 cm long. String B is 10 cm longer than String A. String C is twice as long as String B. The total length of the 3 strings is _____ .

cm

37. Jeremy placed a packet of rice on the weighing scale and it showed 250 g.
How many packets of rice had to be placed on the weighing scale
so that it would show 2 kg ?

packets

38.



What is the missing amount in the box ?

\$

39. Mr Lee bought a shirt. He gave the cashier \$20 and received
a change of \$10.10 . How much did the shirt cost ?

\$

40. Mr Sammy gives \$ 2.50 to each of his 3 sons for their pocket money.
What is the total amount of pocket money given ?

\$

Section C (20 marks)

Questions 41 to 45 carry 4 marks each.

Show your working clearly in the space below each question.

Write a statement for each step.

41. Miss Tan has some stickers. If she gives 3 stickers to each of the 37 children in her class, she has 10 stickers left. How many stickers does Miss Tan have at first ?

42. Jeremy's mother is 28 years older than Jeremy. If Jeremy is 11 years old in 2 years' time, how old is Jeremy's mother now ?

43. Mindy has 8 boxes of flowers. Each box contains 6 flowers. She takes all the flowers and puts them into 4 equal bunches. How many flowers are there in each bunch ?


44. Bala planted 6 seedlings in a row . The seedlings were planted at the same distance apart . The distance between the first and the third seedlings was 12 cm . What was the distance between the first and the sixth seedlings ?



45. A television set and 2 Mickey handphones cost as much as 5 Mickey handphones. If the television set costs \$570, what is the cost of 5 Mickey handphones ?



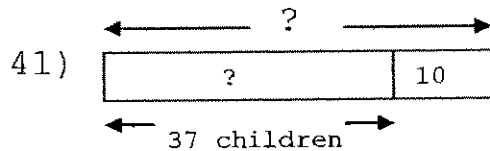
*Remember to check your work!
Every mark counts.*



ANSWER SHEET

MAHA BODHI PRIMARY SCHOOL - PRIMARY 3 MATHEMATICS 2007
SEMESTRAL ASSESSMENT (1)

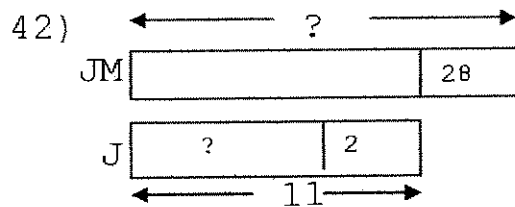
1. 4 33) 154
2. 3 34) $3/7, 3/8, 1/8$
3. 4 35) $4/7$
4. 3 36) 54
5. 2 37) 8
6. 1 38) \$7.95
7. 1 39) \$9.90
8. 3 40) \$7.50
9. 4
10. 4
11. 4
12. 2
13. 2
14. 4
15. 3
16. 3
17. 2
18. 4
19. 4
20. 3
21. Nine thousand, eight hundred and forty-four
22. 1500
23. 2798
24. 3940
25. 2
26. 624
27. 16
28. 9
29. 12
30. 269
31. 387
32. 1.25



Miss Tan gave 111 stickers to her class.

$$111+10=121$$

Miss Tan had 121 stickers at first.



$$11-2=9$$

Jeremy is 9 years old

$$28+9=37$$

Jeremy's mother is 37 years.

43) $8 \times 6 = 48$

Mindy had 48 flowers

$$48 \div 4 = 12$$

There are 12 flowers in each bunch.

44) $12 \text{cm} \div 2 = 6 \text{cm}$

Distance between 1st and 2nd is 6cm.

$$6 \times 5 = 30 \text{cm}$$

Distance between 1st and 6th seedling is 30cm.

45) $3 \text{ Mickey HP} \rightarrow \570

$$\$570 \div 3 = \$190.$$

$$1 \text{ Mickey HP} \rightarrow \$190$$

$$\$190 \times 5 = \$950$$

Cost of 5 Mickey HP is \$950.

---end---

Methodist Girls' School (Primary)

Mid-Year Examination 2007

Primary Three

Mathematics

Name : _____ ()

Class : Pr 3 _____

Marks : _____

Section A (20 x 2 marks)

Read each question carefully. Choose the correct answer and write its number in the brackets provided.

1. In 17 283, what is the value of the digit 7 ?

- (1) 7
 - (2) 70
 - (3) 700
 - (4) 7 000
- ()

2. Which one of the following is the same as 5 410 ?

- (1) five thousand and forty-one
 - (2) fifty-four hundreds and one ten
 - (3) $5\ 000 + 400 + 1$
 - (4) $5\ 010 + 40$
- ()

3. Which one of the following numbers has the digit 8 in the hundreds place ?

- (1) 7 980
 - (2) 8 970
 - (3) 9 708
 - (4) 9 807
- ()

4. What is the sum of 25 tens and 14 hundreds ?

- (1) 165
 - (2) 390
 - (3) 1 650
 - (4) 3 900
- ()

5. What is the difference between 3 985 and 7 124 ?

- (1) 3 139
 - (2) 3 241
 - (3) 4 139
 - (4) 4 861
- ()

Section B (20 x 2 marks)

Write your answers in the boxes provided. Show your working.

21. What is the missing number in the number pattern ?

1 625, 1 735, 1 845, _____

22. Arrange the numbers in order. Begin with the smallest number.

3 624
3 246
3 426
3 264

23. Using all the digits given, what is the largest even number that can be formed, with the digit 3 in the tens place ?

2
3
5
0

24. 200 less than is 2 815.

What is the number in the box ?

25. What is the missing number in the box ?

$$\begin{array}{r} 7529 \\ - 23\boxed{ }1 \\ \hline 5188 \end{array}$$

26. There were 40 passengers in a big bus and 12 passengers less in a small bus. What was the total number of passengers in the two buses ?

27. The sum of two numbers is 120. If one number is twice the other number, what is the smaller number ?

28. Ravi needs 2 000 raisin buns for a party. He has 1 126 raisin buns. How many more raisin buns does he need?

29. Mother bought 4 trays of eggs. Each tray had 10 eggs. How much money did Mother pay for all the eggs if each egg cost 10 cents ?

\$

30. What is the quotient when 700 is divided by 5 ?

31. What is the remainder when 156 is divided by 7 ?

32. My father can take a maximum of 4 people in his car. What is the least number of trips he has to make to take 21 people to the Singapore Zoological Gardens in his car ?

33. I think of a number. When I divide it by 3 and add the quotient to 16, the answer is 25. What is the number ?

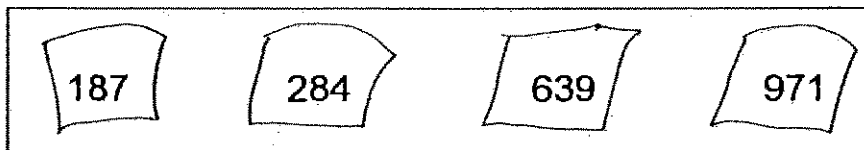
34. $A = 2 \text{ sevens} + 6 \text{ sevens}$
 $A + B = 100$
 What is B ?

35. $\triangle + \triangle + \star = 38$
 $\star + \star + \star = 36$
 $\triangle + \star = ?$


What is the missing number ?

36. What is the sum of the value of the digit 6 in 6 029 and 1 356 ?

37. Which number in the box is the odd one out ?



38. How many twenty-cent coins have the same value as 6 fifty-cent coins ?



39. Mrs Tan earns \$8 an hour. How many hours must she work to earn \$808 ?

 hours

40. How many cents are there in \$12 ?

 cents

Section C (5 x 4 marks)

Solve the following problems. Show your working clearly.

41. A laptop cost \$2 110. A computer cost \$386 less than the laptop. How much would Ahmad have to pay if he bought both the laptop and the computer ?


42. Maya has 35 Malaysian stamps. She has 8 times as many Singapore stamps as Malaysian stamps. How many stamps does she have in all ?

43. Suresh wanted to buy a motorcycle from Ali. It cost \$9 000. He had only \$8 055.
- a) How much more money did he need ?
 - b) He took 7 months to pay the rest of the money to Ali. If he paid the same amount of money each month, how much would he have to pay each month ?

44. Mdm Rafiah bought 9 boxes of tarts. Each box contained 18 tarts. She distributed the tarts equally to all her pupils. Each pupil received 6 tarts. How many pupils were there in her class?

45. James has 10 books more than Tom and 16 books less than Ahmad. Ahmad has 56 books.
- (a) How many books has Tom ?
 - (b) If James sold his books at \$3 each to a second-hand bookshop, how much money would he get ?

End of paper
12



ANSWER SHEET

M G S PRIMARY SCHOOL - PRIMARY 3 MATHEMATICS 2007
SEMESTRAL ASSESSMENT (1)

- 1. 4
- 2. 2
- 3. 4
- 4. 3
- 5. 1
- 6. 1
- 7. 4
- 8. 3
- 9. 4
- 10. 2
- 11. 2
- 12. 4
- 13. 2
- 14. 4
- 15. 1
- 16. 2
- 17. 2
- 18. 1
- 19. 2
- 20. 4
- 21. 1955
- 22. 3246, 3264, 3426, 3624
- 23. 5230
- 24. 3015
- 25. 4
- 26. 68
- 27. 40
- 28. 874
- 29. \$4.00
- 30. 140
- 31. R2
- 32. 6
- 33. 27

41) L	\$2110	
C	?	\$386

} ?

$$\$2110 - \$386 = \$1724$$

The computer cost \$1724

$$\$2110 + \$1724 = \$3834$$

He would have to pay \$3834.

42) M	35							
S	35	35	35	35	35	35	35	35

} ?

$$35 \times 8 = 280$$

She has 280 Singapore stamps.

$$35 + 280 = 315$$

Maya has 315 stamps altogether.

43) a) $\$9000 - \$8055 = \$945$

He will need \$945 more.

b) $\$945 \div 7 = \135

He would have to pay \$135 each month.

44) $18 \times 9 = 162$

She bought 162 tarts altogether.

$$162 \div 6 = 27$$

There are 27 pupils in her class.

45) a) A	56
J	16
T	?

10

$$56 - 16 = 40$$

James has 40 books.

Tom has 30 books.

b) $40 \times \$3 = \120

James will get \$120

---end---



Get a Tutor to go through the Papers

RAFFLES GIRLS' PRIMARY SCHOOL

SEMESTRAL ASSESSMENT 1 2007

<http://www.yestuition.sg>

Your
Score
Out of
100
marks

Class Level

Highest
score

Average
score

Parent's
Signature

Name: _____ () Class: P3__

MAY 2007 MATHEMATICS ATT: 1h 45 min

SECTION A (40 marks)

Question 1 to 20 carry 2 marks each. For each question, four options are given. One of them is the correct answer. Make your choice (1, 2, 3 or 4). Write your answer (1, 2, 3 or 4) in the brackets provided.

1. In 5803, the digit 0 is in the _____ place.

- (1) ones
- (2) tens
- (3) hundreds
- (4) thousands

()

2. Nine thousand and eighty-one is the same as _____.

- (1) 9018
- (2) 9081
- (3) 9801
- (4) 9810

()

3. $2047 + 997 =$ _____.

- (1) 2934
- (2) 2944
- (3) 3044
- (4) 3047

()

4. Find the value of $6918 - 519$.

- (1) 6389
- (2) 6399
- (3) 6401
- (4) 7437

()

- (1) 41
- (2) 240
- (3) 1276
- (4) 1476


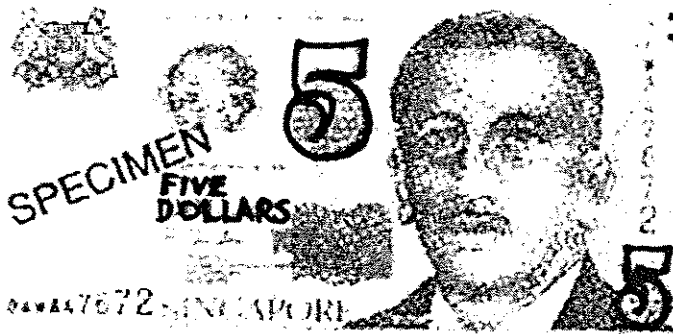

()

6. When 60 is divided by 8, what is the remainder ?

- (1) 68
- (2) 52
- (3) 6
- (4) 4

()

7. What is the total amount of money shown below ?



- (1) \$ 13.05
- (2) \$ 13.50
- (3) \$ 14.05
- (4) \$ 14.50

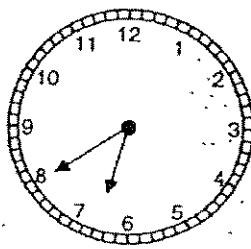
()

8. Which one of the following measurements is the **shortest** ?

- (1) 429 cm
- (2) 4 m 10 cm
- (3) 4 m
- (4) 4 m 95 cm

()

9. Mary started her ballet lesson at 5.10 p.m. and ended at the time shown below. How long was Mary's ballet lesson ?



- (1) 1 h 30 min
- (2) 2 h 10 min
- (3) 2 h 30 min
- (4) 3 h 50 min

()

10. Complete the number pattern.

81, 91, 191, 201, _____, 311

- (1) 101
- (2) 211
- (3) 301
- (4) 310

()

11.

$$\begin{array}{r}
 \begin{array}{cccc}
 | & | & | & \\
 3 & 7 & 2 & 6 \\
 + & 5 & \boxed{?} & 8 & 4 \\
 \hline
 9 & 1 & 1 & 0
 \end{array}
 \end{array}$$

What is the missing number ?

- (1) 6
- (2) 8
- (3) 3
- (4) 4

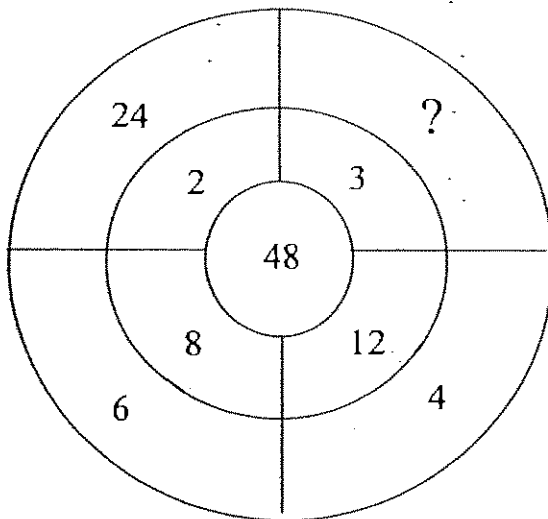
()

12. $8060 = \boxed{} + 600.$

- (1) 2060
- (2) 7460
- (3) 8000
- (4) 8660

()

13. What is the missing number in the diagram ?



- (1) 16
- (2) 45
- (3) 51
- (4) 144

()

14. How many groups of 4 must be added to 12 to make 36 ?

- (1) 6
- (2) 8
- (3) 20
- (4) 24

()

15. Beatrice bought the following items from a shop.
How much did she spend altogether ?



Note Book
\$3.85 each



Pen
\$1.45 each



Eraser
80¢ each

- (1) \$5.38
- (2) \$6.00
- (3) \$6.10
- (4) \$13.30

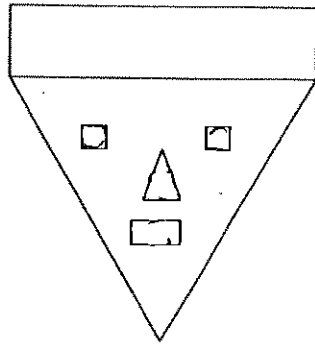
()

16. Mr Tan bought 4 pizzas at \$18 each. He paid the cashier two \$50 notes. How much change did he receive ?

- (1) \$22
- (2) \$28
- (3) \$32
- (4) \$72

()

17.



The above figure is made up of _____.

- (1) 1 rectangle, 2 squares and 1 triangle
- (2) 1 rectangle, 2 squares and 2 triangles
- (3) 2 rectangles, 2 squares and 2 triangles
- (4) 2 rectangles, 2 squares and 1 triangle

()

18. A box contains some red and blue marbles. There are 480 red marbles and 220 more blue marbles than red marbles. How many marbles are there in the box altogether ?

- (1) 700
- (2) 920
- (3) 1080
- (4) 1180

()

19. Annie has 25 stamps. Ben has 5 times as many stamps as Annie. How many stamps must Ben give to Annie so that both of them have equal number of stamps ?

- (1) 50
- (2) 75
- (3) 125
- (4) 150

()

20. Lily went to a sports shop with \$90.40. She bought a racket for \$30.90. She also bought a bag that cost \$12 less than the racket. How much money had she left ?

- (1) \$16.60
- (2) \$40.60
- (3) \$42.90
- (4) \$47.50

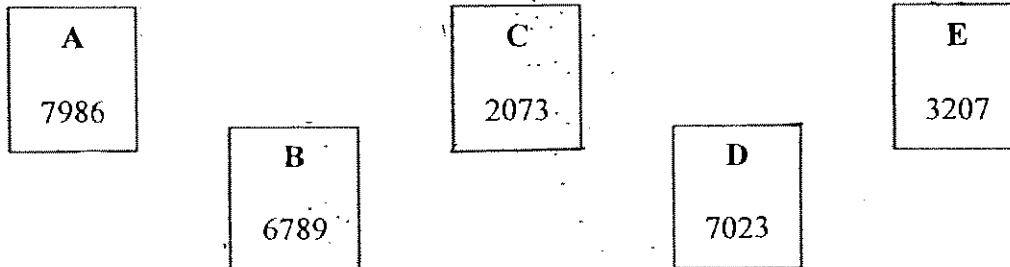
()

SECTION B (40 marks)

Question 21 to 40 carry 2 marks each. Write your answers in the spaces provided. For questions which require units, give your answers in the units stated. All diagrams are not drawn to scale. Answers in fractions must be expressed in the simplest form. Marks will be awarded for relevant working.

21. Write the numeral 6940 in words.

22.



In a Math quiz, participants need to pick 2 cards from the above to get a sum of 9996. Which 2 cards must they pick ?

Ans: Card _____ and Card _____

23. Find the difference between 5566 and 6655

Ans: _____

24. Multiply 537 by 8.

Ans: _____

25. What is the quotient of $393 \div 4$?

Ans: _____

26. "One hundred and two dollars and five cents."
Express the above amount in numeral.

Ans: \$ _____



27. Glenn bought 150 cm of ribbon. He used 85 cm of it to tie a birthday present. The remaining ribbon was cut into pieces of length 5 cm each. How many pieces could he get ?





Ans: _____

28. When 456 is added to 1420, the digit _____ is in the hundreds place.

Ans: _____

29.

If  +  = 180 pens

then  +  +  +  = _____ pens

Ans: _____

30. $7 + 14 + 28 = \square \times 7$

Ans: _____

31. When I divide the sum of all even numbers between 20 and 30 by 6, I will get a remainder of _____.

Ans: _____

32. Complete the pattern.

$\triangle \square \square \circ \circ$, $\circ \triangle \square \square \circ$, $\circ \circ \triangle \square \square$, _____ , $\square \square \circ \circ \triangle$

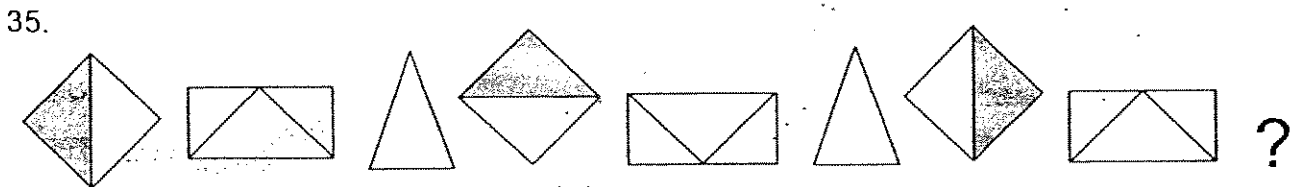
Ans: _____

33. Mr Simon reached a coffee shop at 11.50 a.m. to have his lunch. He stayed there for 1 h 15 min. What time did he leave the coffee shop ?

Ans: _____

34. In order to form a complete circle, Ali will need

semicircle/s or quarter-circle/s.



What comes next ? Draw the correct shape.

Ans: _____

36. Anna went to a shop to exchange one \$5 note for one \$2 note, three 50¢ coins, three 10¢ coins and some 20¢ coins. How many 20¢ coins did she get ?

Ans: _____ 20¢ coins

37. The diagram below is a magic square. All the numbers going across, down and diagonally added up to the same total.

Find the number in the shaded square.

		8
	6	7
4		

Ans: _____

38. If the pattern below continues until it reaches the number 0. Find the answer.

$$20 - 19 + 18 - 17 + 16 - 15 + \dots + 6 - 5 + 4 - 3 + 2 - 1 + 0 = \underline{\hspace{2cm}}$$

Ans: _____

39. A bakery shop sells cup cakes in packets of 6. It is giving three free cup cakes for every two packets sold. How many cup cakes will Mary have in all if she buys 8 packets of cup cakes ?

Ans: _____ cup cakes

40. A cafeteria sells 8 cartons of drinks each day. If there are 24 packets of drinks in a carton, how many packets of drinks does the cafeteria sell in 5 days ?

Ans: _____ packets

SECTION C (20 marks)

For question 41 to 46, show your working clearly in the space provided below each question and write your answer with suitable units in the spaces provided. All diagrams are not drawn to scale. Answers in fractions must be expressed in the simplest form. Marks will be awarded for relevant working. The number of marks available is shown in brackets [] at the end of each question or part-question.

41. The sum of two numbers is 8400. If the bigger number is 6600,

(a) Find the smaller number

(b) Find the difference between the two numbers.

Ans: a) _____ [1m]

Ans: b) _____ [2m]

42. At a wholesaler, cranberry juice was imported in cartons of 8 bottles each. The wholesaler wanted to repack his 82 cartons of cranberry juice into gift packages of 3 bottles each. How many gift packages would he have ?

Ans: _____ [3m]

43. Peter and Hannah had 256 stickers altogether. After receiving 48 stickers from Hannah, Peter had 28 stickers fewer than her. How many stickers did Hannah have at first ?

Ans: _____ [3m]

44. Mrs Lee gave Jamie the exact amount of money to buy 12 files. Jamie bought 8 files instead and had \$20 left. How much money did Mrs Lee give Jamie ?

Ans: _____ [3m]

45. There were 36 bicycles and tricycles in a rental shop. If there were 97 wheels altogether, how many bicycles were there in the shop ?

Ans: _____ [4m]

46. Ada bought an equal number of red and blue pens. Each red pen cost \$3 and each blue pen cost \$5. If she paid a total of \$824, how many pens did she buy altogether ?

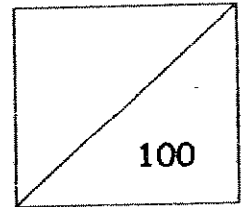
Ans: _____ [4m]

-End of Paper-

Please check your work carefully ☺

Setters: Ho Kai Huat
Clara Chin
Leong Oon Ho

HENRY PARK PRIMARY SCHOOL
MID-YEAR EXAMINATION 2007
MATHEMATICS
PRIMARY 3



NAME: _____ (

Date: _____

CLASS: PRI 3 _____

Duration: 1hr 30 min

Section A: (20 x 2 marks = 40 marks)

Choose the correct answer and write its number in the brackets provided.
You are required to shade the OAS at the end of the examination.

1. In 5690, the digit 9 stands for _____.

- (1) 9 ones
- (2) 9 tens
- (3) 9 hundreds
- (4) 9 thousands

()

2. Look at the following number pattern.

5216, 5228, 5240, _____, 5264, 5276.

The missing number in the pattern is _____.

- (1) 5238
- (2) 5242
- (3) 5252
- (4) 5260

()

3. What is the difference between 545 and 2380?

- (1) 1835
- (2) 1845
- (3) 2835
- (4) 2925

()

- (1) 2277
- (2) 2727
- (3) 2853
- (4) 2881

()

5. The sum of 4213 and 2786 is _____.

- (1) 1427
- (2) 2573
- (3) 6999
- (4) 7009

()

6. There are 8 groups of 7 pupils in a camp. How many pupils are there in the camp altogether?

- (1) 48
- (2) 49
- (3) 54
- (4) 56

()

7. Divide 568 by 3. The quotient is _____.

- (1) 167
- (2) 169
- (3) 187
- (4) 189

()

8. What is the product of 379×9 ?

- (1) 3072
- (2) 3348
- (3) 3411
- (4) 3501

()

9. Which of the following has the same value as 5600?

- (1) 56 ones
- (2) 56 tens
- (3) 56 hundreds
- (4) 56 thousands

()

10. 60 less than 4610 is _____.

- (1) 4540
- (2) 4550
- (3) 4650
- (4) 4670

()

11. The table below shows the number of apples Mr Tan sold over three days. How many apples were sold on Wednesday?

Day	Number of apples sold
Tuesday	420
Wednesday	?
Thursday	234
Total	985

- (1) 331
- (2) 565
- (3) 654
- (4) 751

()

$$\begin{array}{r} 6489 \\ - 4\boxed{}87 \\ \hline 1802 \end{array}$$

- (1) 6
- (2) 2
- (3) 8
- (4) 4

()

13. 700 more than 2045 is _____.

- (1) 1345
- (2) 1750
- (3) 2745
- (4) 3150

()


14. Halim had a box of pencils. He put 6 pencils in a row as shown below.



He managed to make 4 such rows of pencils.
How many pencils were in the box at first?

- (1) 10
- (2) 16
- (3) 24
- (4) 30

()

15.  represents a number.


$$\text{star} + \text{star} + \text{star} = 105$$

What does $\text{star} + \text{star} + \text{star} + \text{star} + \text{star} + \text{star}$ represent?

- (1) 108
- (2) 116
- (3) 180
- (4) 210

()

16. A tortoise moves 4 metres every 5 minutes. How many minutes would it take to move 24 metres?



- (1) 29 minutes
- (2) 30 minutes
- (3) 33 minutes
- (4) 44 minutes

()

17. Mr Tan cycled a distance of 1600 m. Mr Lim cycled 400 m further than Mr Tan. What was the total distance covered by the two men?

- (1) 1200 m
- (2) 2000 m
- (3) 3600 m
- (4) 4000 m

()

18. 12 hundreds + 13 tens = _____
What is the missing number?

- (1) 133
- (2) 250
- (3) 1330
- (4) 2500

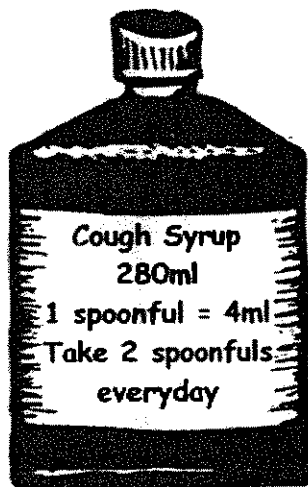
()

19. _____ \div 6 = 14 R 9
What is the missing number?

- (1) 68
- (2) 93
- (3) 138
- (4) 143

()

20. Mary was given a bottle of cough syrup as shown below.



How many days would Mary take to finish the whole bottle of cough syrup?

- (1) 35 days
- (2) 70 days
- (3) 90 days
- (4) 140 days

()

Section B: Open-Ended (20 x 2 marks = 40 marks)


Read the following questions carefully and write your answers in the boxes provided.
Show all your workings clearly.

21. In the number 5486, the value of the digit 8 is _____.

22. The whole number between 639 and 641 is _____.

23. Use the digits given below to form the greatest 4-digit number.
Each digit can only be used once.


24. The difference between two numbers is 320. If the greater number is 2980, what is the smaller number?



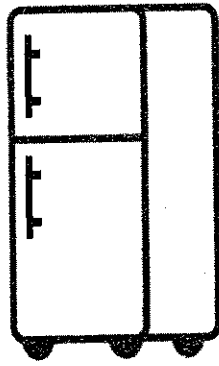
25. How many different odd numbers are there between 11 to 20?

26. A box contains 35 chocolate muffins. How many chocolate muffins will John have if he buys 9 such boxes?

27. Mr Wong won a \$1500 voucher during his company lucky draw. Which were the items he should buy if he wanted to spend as close to \$1500 as possible?



TV Set
\$1200



Refrigerator
\$850



Radio
\$150



Fan
\$75

28. Find the value of P and Q in the following pattern?

657, 647, P, 597, 557, 507, Q

P =


Q =

29. Fill in the blank.

_____ ÷ 8 = 69

30. A farmer had 4320 chickens. He sold 1000 chickens and gave 220 chickens to Mr Ali. How many chickens had he left?


31. Mr Tan had an elephant, a cow and a pig.
What is the total mass of the three animals?



205kg



165kg

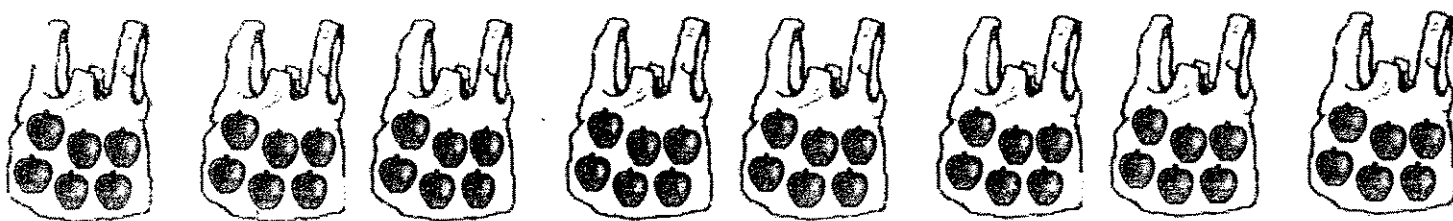


109 kg

 kg

32. The total number of adults and children who visited a funfair was 6349. If there were 1340 children at the funfair, how many adults were there?

33. Write a multiplication sentence and a division sentence based on the illustration below.




(a) × =

(b) ÷ =

34. A group of 12 girls shared a box of erasers. After they had taken 5 erasers each, there were 4 erasers left in the box. How many pencils were there at first?

35. Chee Meng's class sold T-shirts at a school funfair.

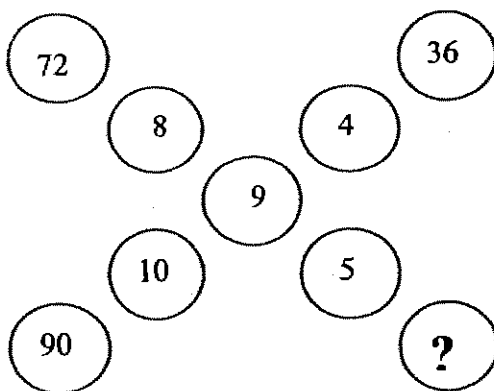


T-shirts
\$5 each

They sold 5 T-shirts every hour. How much money did they receive in 4 hours?

36. After buying 6 chairs at \$89 each, Dylan had \$450 left. How much money did he have at first?

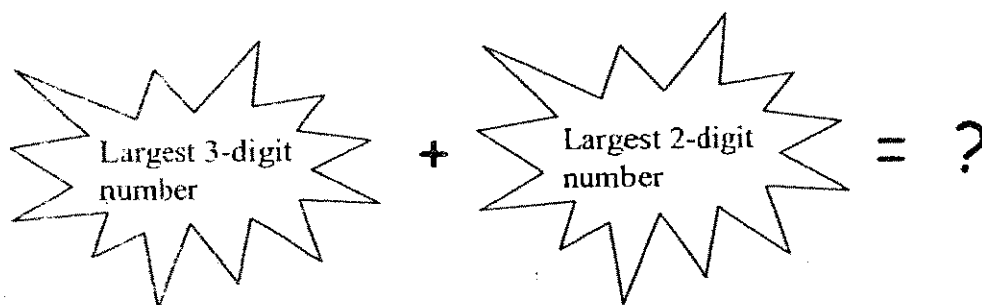
37. Study the diagram carefully.




What is the missing number in the circle?

38. There are 3 boxes labelled A, B and C.
 The mass of Box A is 1500 kg.
 Box B is 320 kg lighter than Box A.
 Box C is 208 kg heavier than Box B.
 What is the mass of Box C?

39. Add the largest 3-digit number to the largest 2-digit number. What is the answer?




40. Sandy arranged some grey and white beads as shown below. Following the pattern, how many grey beads would she have if she had 8 white beads?



Read the problem sums carefully before solving it.
Show all your workings clearly.


41. Jayden had 1680 marbles. After giving Adrian and Johnny some marbles, he had 890 marbles left. If 254 marbles were given to Johnny, how many marbles were given to Adrian?

42. There were 356 passengers on a train. 82 passengers got down and 53 people got up the train at Happy Avenue. How many people were on the train after Happy Avenue?



43. John had 9 bags of candies. He gave 5 bags of candies away. He then had 304 candies left. If each bag contained the same number of candies, how many candies did he have at first?

44. Peter had some five-dollar notes. After buying a pair of roller blades for \$411, he had \$239 left. How many five-dollar notes did he have at first?



45. Xiaomei wants to save up for a car. She saved \$578 in January, \$857 in February, \$1336 in March and \$2015 in April and so on. How much would she have saved in July?

Month	January	February	March	April	May
Amount saved	\$578	\$857	\$1336	\$2015	...


The End

Have you checked your work?

Setters:

Ms Elaine Ng

Ms Tan YH



ANSWER SHEET

HENRY PARK PRIMARY SCHOOL - PRIMARY 3 MATHEMATICS 2007
SEMESTRAL ASSESSMENT (1)

1. 2
 2. 3
 3. 1
 4. 2
 5. 3
 6. 4
 7. 4
 8. 3
 9. 3
 10. 2
 11. 1
 12. 1
 13. 3
 14. 3
 15. 4
 16. 2
 17. 3
 18. 3
 19. 2
 20. 1
 21. 80
 22. 640
 23. 8420
 24. 2660
 25. 4
 26. 315
 27. TV set, Radio and Fan
 28. P=627
Q=447
 29. 552
 30. 3100
- 32) 5009
- 33) a) $6 \times 8 = 48$
b) $48 \div 8 = 6$
- 34) 64
- 35) \$100
- 36) \$984
- 37) 45
- 38) 1388kg
- 39) 1098
- 40) 12
- 41) 536 marbles
- 42) 327 passengers
- 43) 684 candies
- 44) 130
- 45) \$5252

Tao Nan School
Primary 3 Mathematics Mid-Year Examination - 2007

Name: _____ ()

Date: 11 May 2007

Class: Pr 3 ()

Time: 7.45 a.m. – 9.15 a.m.

Parent's Signature: _____

Marks: _____ / 100

Section A (20 marks)

Questions 1 to 10 carry 1 mark each. Questions 11 – 15 carry 2 marks each. For each question, four options are given. One of them is the correct answer. Make your choice (1, 2, 3, 4). Shade the correct answer on the Optical Answer Sheet (OAS).

1. 9300 = _____

- (1) 93 ones
- (2) 93 tens
- (3) 93 hundreds
- (4) 93 thousands

2. In 7653, the digit _____ is in the hundreds place.

- (1) 5
- (2) 6
- (3) 3
- (4) 7

3. 2095¢ = _____

- (1) \$ 2.95
- (2) \$ 20.95
- (3) \$209.05
- (4) \$ 209.50

4. Find the difference between 6006 and 404.

- (1) 5566
- (2) 5602
- (3) 6402
- (4) 6410

5. 8 groups of 5 is the same as _____.

- (1) $8 + 8 + 8 + 8 + 8 + 8 + 8 + 8$
- (2) $5 + 5 + 5 + 5 + 5 + 5 + 5 + 5$
- (3) $8 + 8 + 8 + 8 + 8$
- (4) $5 + 5 + 5 + 5 + 5$

6. Five thousand, four hundred and fourteen is the same as _____.

- (1) 5400
- (2) 5404
- (3) 5414
- (4) 5440

7. Divide 73 by 7. The remainder is _____.

- (1) 10
- (2) 2
- (3) 3
- (4) 7

8. Find the product of 524 and 7.

- (1) 3528
- (2) 3568
- (3) 3648
- (4) 3668

9. 152 stickers were shared equally among 8 children. How many stickers would each child get?

- (1) 10
- (2) 18
- (3) 19
- (4) 20

10. $6800 + 2300 + 3 =$ _____

- (1) 6803
- (2) 6830
- (3) 8303
- (4) 9103

11. Subtract 401 from 2130.
In the answer, the digit _____ is in the **tens** place.

- (1) 1
- (2) 2
- (3) 7
- (4) 9

12. $42 \div 6$ is the same as $? + 3$

The missing number is _____.

- (1) 7
- (2) 6
- (3) 5
- (4) 4

15. $\heartsuit \heartsuit \heartsuit \heartsuit = \star$

$\star \star = 24$

The value of \heartsuit is _____.

- (1) 12
- (2) 6
- (3) 3
- (4) 4

Tao Nan School
Primary 3 Mathematics Mid-Year Examination – 2007

Name: _____ ()

Class: Pr 3()

Section B	40
Section C	40
Total	80

Section B (40 marks)

Each question carries 2 marks. Write your answers in the boxes provided. For answers which require units, give your answers in the units stated.

16. Write 8019 in words.

17. 5×3 is the same as $3 + 3 + 3 +$?

The missing number is _____.

Ans:

18. $400 \times 6 =$ _____

Ans:

19. $87 \div 3 = \underline{\hspace{2cm}}$

Ans:

20. Solve the following:

$$\begin{array}{r} 963 \\ \times 7 \\ \hline \\ \hline \end{array}$$

Ans:

21. A stool has 3 legs. How many stools are there if there are 33 legs?

Ans:

22. Solve the following:

$$\begin{array}{r} \boxed{?} 3 12 \\ - 2449 \\ \hline 6933 \\ \hline \end{array}$$

The missing digit is .

Ans:

23. $\$11.00 - \$0.65 = \underline{\hspace{2cm}}$

Ans:

\$

24. What is the smallest 4-digit **even** number that can be formed with the digits 1, 5, 0, and 8?

Ans:

25. Complete the number pattern.

72, 67, _____, 57, 52

Ans:


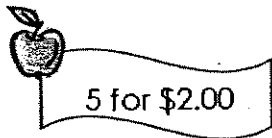
26. What is the quotient of $299 \div 4$?

Ans:

27. In 4065, the digit 4 is in the _____ place.

Ans:

28.



I have \$7.50. After buying 15 apples, how many pears can I buy with the remaining amount of money?

Ans:

29. Ben has eight 50¢ coins and four 20¢ coins. He needs to buy a book that costs \$5. How much more money does he need?

Ans:

30.

is the same as

The missing number is _____.

Ans:

Arrange the digits **1**, **2** and **4** in the boxes to make the greatest product.
Each number can only be used once.

31.

Greatest Product	
\times	

32. How many 20-cent coins can be exchanged with \$5?

Ans:

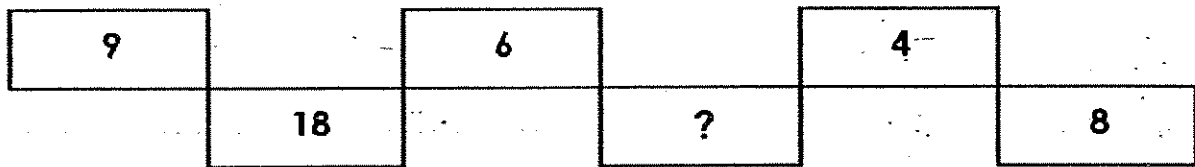
33. The product of two numbers is 30. The difference between the two numbers is 1. What are the numbers?

Ans:

34. Jack has 144 marbles. Billy has 3 times as many marbles as Jack. How many marbles do they have altogether?

Ans:

35. What is the missing number?



Ans:

Section C (10 X 4 marks)

Each question carries 4 marks. Show your working and statement clearly in the spaces provided.

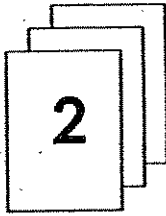
36. Isabel collected 435 seashells. Her sister collected 169 less seashells than her. How many seashells did her sister collect?

Ans: _____

37. There are 63 books on 7 shelves. There is an equal number of books on each shelf. How many books are there on each shelf?

Ans: _____

38. Alice has three cards. The number on the second card is twice that of the first card.
The third card is twice that of the second card.
What is the number on the third card?



Ans: _____

39. Kenneth has 24 stamps. Ryan has 6 more stamps than Kenneth.
How many stamps must Ryan give to Kenneth so that they will each have the same number of stamps?



Ans: _____

40. Mr and Mrs Wee and their 3 children went to 'Happy Wonderland.'

Happy Wonderland
Admission charges
Adults: \$4.50
Children: \$2.00

Mr Wee gave the cashier a \$50 note.
How much change did he receive?

Ans: _____

41. Fiona had twice as much money as Kelly. Mary had twice as much money as Fiona. If Mary had \$400, how much did the three girls have?

Ans: _____

42. When Bala adds 56 to a number, the sum is less than 70. What is the number if the sum is also divisible by 9?

Ans: _____

43. Winston bought 5 boxes of T-shirts. Each box contains 12 T-shirts. He repacked the T-shirts equally into 8 bags.
(a) How many T-shirts did Winston buy?
(b) How many T-shirts were left?

Ans: (a) _____

(b) _____

44. 48 pupils were divided into 8 groups of equal size. In each group, there were 2 more boys than girls. How many girls were there in each group?


Ans: _____

45. Ling Ling recorded her sales of bags as below.

Month	Number sold
January	55 more than in February
February	276
March	2 times as many as in January

How many bags were sold in all?

Ans: _____



ANSWER SHEET

TAO NAN PRIMARY SCHOOL - PRIMARY 3 MATHEMATICS 2007
SEMESTRAL ASSESSMENT (1)

1. 3
2. 2
3. 2
4. 2
5. 2
6. 3
7. 3
8. 4
9. 3
10. 4
11. 2
12. 4
13. 3
14. 3
15. 3
16. Eight thousand and nineteen
17. 6
18. 2400
19. 29
20. 6741
21. 11
22. 9
23. \$10.35
24. 1058
25. 62
26. 74
27. thousands
28. 3
29. \$0.20
30. 25

$$31) 21 \times 4 = 84$$

$$32) 25$$

$$33) 6, 5$$

$$34) 576$$

$$35) 12$$

36) $435 - 169 = 266$

Her sister collected 266 seashell.

37) $63 \div 7 = 9 = 9$ books are on each shelf.

38) $2 \times 2 = 4$

$4 \times 2 = 8$

The number on the third card is 8

39) $6 \div 2 = 3$

Ryan must give Kenneth 3 stamps so that they will each have the same number of stamps.

40) $450 \times 2 = 900$

$200 \times 3 = 600$

$600 + 900 = 1500$

$5000 - 1500 = 3500$

He received \$35.00 change.

41) $400 \div 2 = 200$

$200 \div 2 = 100$

$200 + 100 = 300$

$300 + 400 = 700$

The three girls had \$700

42) $9 \times 7 = 63$

$63 - 56 = 7$

The number is 7

43) a) $12 \times 5 = 60$

Winston bought 60 T-shirts

b) $60 \div 8 = 7R4$

4 T-shirts were left.

44) $48 \div 8 = 6$

$6 - 4 = 2$

2 girls were in each group.

45) $276 + 55 = 331$

$331 \times 2 = 662$

$662 + 331 = 993$

$993 + 276 = 1269$

1269 bags were sold in all.

Name : _____

Class : Primary 3 _____

CHIJ ST NICHOLAS GIRLS' SCHOOL



Primary 3

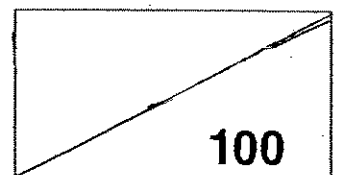
First Semestral Assessment – 2007

Mathematics

7 May 2007

Parent's signature: _____

Score :



Duration of Paper: 1 h 45 min

Do not open the booklet until you are told to do so
Follow all instructions carefully

For each question, four options are given.
One of them is the correct answer. Make your choice (1, 2, 3 or 4).
Write the correct answer in the brackets provided.

Do not
write in
this
space

1. In 8564 the digit 5 is in the _____ place.

- 1) ones 2) tens
3) hundreds 4) thousands

()

2. Find the number missing in the box.

$$\begin{array}{r} 3474 \\ + 232\boxed{} \\ \hline 5800 \end{array}$$

- 1) 4 2) 6
3) 8 4) 9

()

3. Subtract 3550 from 5000.

- 1) 1150 2) 1250
3) 1450 4) 1550

()

4. Find the sum of 1490 and 1618.


- 1) 3258 2) 3150
3) 3000 4) 3108

()

5. Use the digits 7, 5, 2 to form the smallest
3 - digit number. Find the difference between
8000 and the 3 - digit number.

- 1) 7725 2) 7743
3) 7753 4) 7835

()



6. Add 1000 to the difference between 5590 and 780.

1) 3810

2) 5810

3) 5370

4) 7370

()

Do not
write in
this
space

7. What is the product of 40 and 2?

1) 80

2) 81

3) 82

4) 90

()

8. A farmer sold 210 carrots every week. How many carrots did he sell in 21 days?

1) 840

2) 630

3) 420

4) 231

()

9. Subtract 5230 from the sum of 7820 and 1180.

1) 1410

2) 1670

3) 3770

4) 3860

()

10. Find the number in the blank.

$$4 \times 7 = 32 - ?$$

1) 60

2) 28

()

3) 11

4) 4

11. What is the missing number?

$$6 \times 9 = 2 \times ?$$


1) 27

2) 36

3) 52

4) 54

()



12. Find the missing number in the blank.

$$9 \text{ tens} \times 5 \text{ ones} = \underline{\quad}$$

- 1) 45 2) 95
3) 450 4) 955

()

Do not
write in
this
space

13. Gabrielle had 18 stickers. Yuki had 4 times as many as Gabrielle. Jane had half as many stickers as Yuki. How many stickers did Jane have?

- 1) 11 2) 36
3) 38 4) 44

()

14. Find the missing digit in the box.

$$\begin{array}{r} 2 \quad \square \quad 4 \\ \times \quad \quad \quad 3 \\ \hline 7 \quad 3 \quad 2 \end{array}$$

- 1) 1 2) 3
3) 4 4) 6


()

15. Complete the given number sequence.

$$8, \underline{\quad}, \underline{\quad}, 20, \underline{\quad}, 32$$

- 1) 4, 6, 22 2) 10, 12, 24
3) 10, 12, 22 4) 12, 16, 24

()



Do not
write in
this
space

16. Samantha received \$68 from Mrs Lee. Her younger brother received half the amount. How much did they receive altogether?
- 1) \$ 34 2) \$ 92
3) \$ 102 4) \$ 204
- ()
17. What is 250 divided by 4?
- 1) 61R6 2) 62R2
3) 64R4 4) 68R7
- ()
18. A salesman had 284 television sets. He sold them equally to 4 shops. How many sets did he sell to each shop?
- 1) 64 2) 69
3) 71 4) 72
- ()
19. Damien had 56 books, Fatimah had 3 times as many books as Damien. They donated their total number of books equally among Xiao Ling and Ahmad. How many books did Ahmad receive?
- 1) 56 2) 84
3) 106 4) 112
- ()
20. Miss Raihan had 578 buttons. She sewed 3 buttons on every T –shirt. How many buttons had she left after sewing 192 T-shirts?
- 1) 5 2) 4
3) 3 4) 2
- ()



Do not
write in
this
space

SECTION B: (20 x 2 marks)
Show all workings and steps clearly.

21. Using the digits 7, 3, 9, 6, form the greatest 4-digit odd number that is not greater than 7 thousands.

Ans: _____

22. What is 547 more than 7060?

Ans: _____

23. In 6824, find the difference between the values of the digits in the thousands place and the ones place.

Ans: _____



24. In $8 \times 7 = 3 \times 7 + ? \times 7$, what is the missing number in the blank?

Do not
write in
this
space

Ans: _____

25. Mrs. Thong put 25 pies in each of the 9 boxes. She gave her neighbour 2 such boxes. How many pies had she left?

Ans: _____

26. What is the missing digit in the box?

$$\begin{array}{r} 8 \boxed{?} 5 2 \\ - 2 8 5 4 \\ \hline 5 7 9 8 \end{array}$$

Ans: _____

Do not
write in
this
space

27. Selvam arranged 972 seashells equally into 6 rows. How many seashells were there in each row?

Ans: _____

28. Jermaine reads 11 pages of a book daily.
How many pages will she read in a week?

Ans: _____

29. Fatimah travelled 4755m to school on Monday.
She travelled 2313m less on Tuesday than on Monday.
How far did she travel on both days?

Ans: _____ m



Do not
write in
this
space

30. Sharon had some sweets. She packed the sweets into 7 packets, each containing 215 sweets. How many sweets did Sharon have?

Ans: _____

31. There were 7815 boys and girls at a camp altogether. 3789 of them were girls. How many more boys than girls were at the camp?

Ans: _____

32. Mei Ling spent \$864. Thomas spent \$2677 more than Mei Ling. How much did they spend altogether?

Ans: \$ _____



Do not
write in
this
space

33. When a number is divided by 6, it gives a quotient of 26 and a remainder of 3. What is the number?

Ans: _____

34. Ming Jie shared 56 beads equally with his parents and 5 friends. How many beads did each of them receive?

Ans: _____




Do not
write in
this
space



35. How many sixes are there in the product of 4 and 234?


Ans: _____

36. Raja had 5 times as many red stickers as green stickers.
If he had 275 red stickers, how many green stickers did he have?

Ans: _____

37. If  = 9,

 X $\frac{\mathbf{P}}{\text{_____}}$ = 

 = 3 X 243

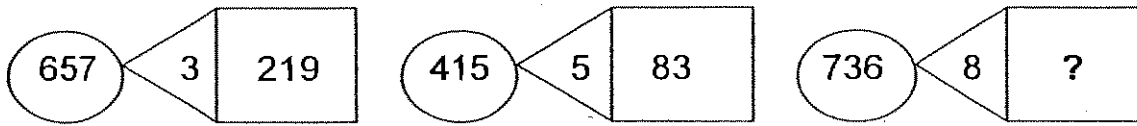
What does P represent?

Ans: P = _____



Do not
write in
this
space

38. Study the pattern below and find the missing number.



Ans: _____

39. The mass of 6 identical erasers is 252g. 1 eraser weighs as much as 8 paper clips. What is the mass of 4 paper clips?

Ans: _____ g

40. Ai Ling spent \$568 in each of the first 4 months of the year. She spent \$4819 in the remaining months of the year. Find the total amount of money she spent in the whole year.

Ans: \$ _____



SECTION C: (5 x 4 marks)

Solve **ALL** of the following problems.

All mathematical workings and statements must be shown clearly.

Do not
write in
this
space

41. Joseph put 237 white ribbons and 465 yellow ribbons into 5 bags equally. How many ribbons were left over?




42. Muthu had 4947 eggs. He sold 2158 of them and threw away 2154 rotten eggs.

(a) How many eggs were left?

(b) If he packed the remaining eggs equally into trays of 5 each, how many eggs would there be in each tray?

Do not
write in
this
space




Do not
write in
this
space

43. Martha has 7 times as many foreign stamps as local stamps.
Jane has half the number of stamps that Martha has.
If Martha has 87 local stamps, how many stamps does Jane have?



Do not
write in
this
space

44. A table costs \$6986 more than the total cost of a chair and a stool. Each chair costs twice as much as a stool. How much does a table cost if a stool costs \$375?



45. 359 oranges are packed into three boxes. The first box has 73 more oranges than the second box. The third box has 32 fewer oranges than the second box. How many oranges were there in the third box?

Do not
write in
this
space

END OF PAPER

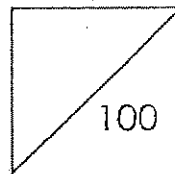
44) $375 \times 3 = 1125$
 $1125 + 6986 = 8111$
A table costs \$8111

45) $73 + 32 + 32 = 137$
 $359 - 137 = 222$
 $222 \div 3 = 74$
There were 74 oranges in the third box.

KONG HWA SCHOOL
SEMESTRAL ASSESSMENT ONE 2007
MATHEMATICS
Primary Three

Name: _____ ()

Marks:

Class : Primary 3 ()Date : 9 May 2007Duration: 1 h 30 min

Parent's Signature: _____

Section A (15 x 2 marks)

For each question, four options are given but only one is correct. Choose the correct answer and shade its number (1, 2, 3 or 4) on the Optical Answer Sheet (OAS) provided.

1. Five thousand, five hundred and two written as a numeral is

_____.

(1) 520

(2) 552

(3) 5502

(4) 5520

()

2. How many tens are there in 2021?

(1) 21

(2) 2

(3) 200

(4) 202

()

3. What is the missing number in the number pattern below?

5682, 5693, , 5715, 5726

- (1) 5695
- (2) 5703
- (3) 5704
- (4) 5714

()

4. 5480 is 12 hundreds less than _____.

- (1) 4280
- (2) 5468
- (3) 5492
- (4) 6680

()

5. The sum of 72 tens and two thousand five hundred and twenty-six is _____.

- (1) 2572
- (2) 2598
- (3) 3246
- (4) 9726

()

6. What must be added to 3640 to make 5000?

- (1) 1360
- (2) 1460
- (3) 2640
- (4) 8640

()

7. Shuhan has 2640 marbles.
Huiwen has 340 more marbles than Shuhan.
How many marbles do they have altogether?

- (1) 2300
- (2) 2980
- (3) 4940
- (4) 5620

()

8. What is the greatest 4-digit odd number that can be formed with the digits 4, 2, 5 and 3?

- (1) 5432
- (2) 2345
- (3) 3542
- (4) 5423

()

9. How many threes are there in 33?

(1) 11

(2) 33

(3) 44

(4) 132

()

10. A spider has 8 legs while an ant has 6 legs. If there are 8 spiders and 2 ants, how many legs are there altogether?

(1) 12

(2) 14

(3) 64

(4) 76

()

11. Mr Johnson purchased a computer. He paid \$800 for the first month and \$255 monthly for the next 3 months. How much did he pay altogether?

(1) \$ 765

(2) \$ 1565

(3) \$ 2400

(4) \$ 3165

()

12. 135 apples were used to bake some apple pies. If 3 apples were used to bake a pie, what was the number of apple pies that were baked?

- (1) 41
(2) 45
(3) 138
(4) 405

()

-
13. 3 boxes of candles cost \$15. How much will 9 boxes of candles cost?

- (1) \$ 5
(2) \$ 12
(3) \$ 45
(4) \$ 135

()

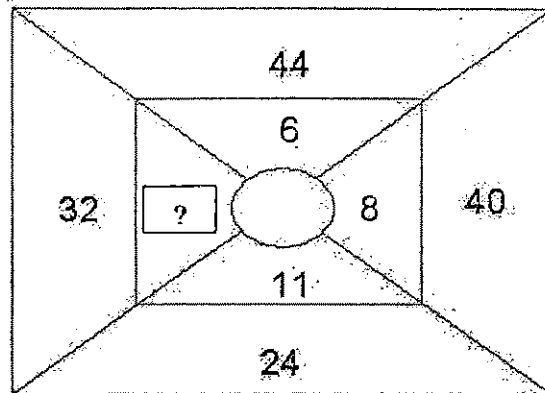
14. $7 \times 25 = 7 \times 20 + 7 \times \boxed{?}$

What is the missing number in the box?

- (1) 5
(2) 25
(3) 100
(4) 175

()

15.



What is the missing number in the box?

- (1) 8
- (2) 10
- (3) 20
- (4) 66

()

16. Yi Hui has twice as many beads as Hui Hui. Yi Hui has 248 beads. How many beads does Hui Hui have?

- (1) 124
- (2) 248
- (3) 372
- (4) 496

()

17. There were 5 groups of boys. In each group, there were 5 boys. If each boy spent \$2, how much did they spend in all?

- (1) \$11
- (2) \$12
- (3) \$50
- (4) \$100

()

18. What is the place value of the digit 3 when 924 is divided by 4?

- (1) Ones
- (2) Tens
- (3) Hundreds
- (4) Thousands

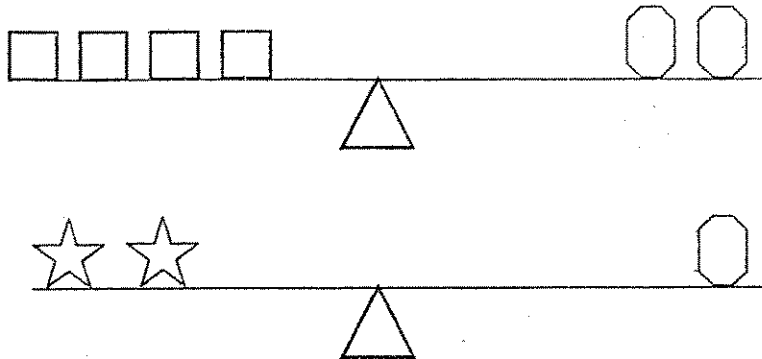
()





19. Divide 1272 by 6. The answer is _____.

- (1) 212
- (2) 616
- (3) 1266
- (4) 7632

()

20. The figures below show the items on a balance scale.



If  = 24, what is  +   ?

- (1) 12
- (2) 36
- (3) 48
- (4) 72

()

End of Section A

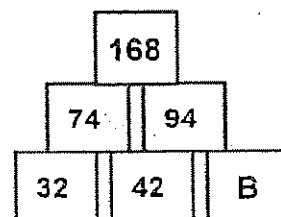
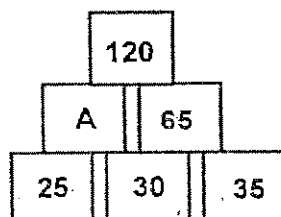
Section B (20 x 2 marks)

For each question, show your working clearly in the space below and write your answer in the box provided. Give your answer in the unit stated.

21. Write 1859 in words.

22. Find the sum of all the even numbers between 41 and 49.

- 23.



What is the value of A and B?

A =

B =

24. What is the sum of 4473 and 4476?

25. 1 thousand 6 hundreds and 5 ones + 8 hundreds 4 tens and 2 ones = _____

26. In the following problem, what is the missing number in the box?

$$\begin{array}{r} 10\ 000 \\ - 4\ \square\ 85 \\ \hline 5715 \\ \hline \end{array}$$

27. Arrange the number cards

3

5 ⁴

9

2

 to form the smallest 4-digit **even** number.

-
28. $7 + 7 + 7 + 7 + 7 + 7 = \underline{\quad} \times 7.$

-
29. Mr Gopal has 75 comic books. He wants to give 9 pupils each 9 comic books. How many **more** comic books does he need?



books

30. How much did John pay for buying 2 T-shirts and a pair of jeans?



\$

31.

Given that, $\text{😊} \times 5 = \text{♥}$


and $50 - \text{♥} = 5$,

What is $\text{😊} \times \text{😊} = ?$

32. Amy is 7 years old now.
Her grandfather is 8 times as old as her.
How old will her grandfather be next year?

years old

33. A train set costs \$60. This is 10 times the cost of a toy car.
What is the total cost of the train set and the toy car?




\$

34. The product of two numbers is 468. If one of the numbers is 6,
what is the other number?

35. Jasmine sold 135 bottles of sugarcane juice in 1 day. If she sold the same number of bottles everyday, how many bottles of sugarcane juice did she sell in 1 week?

bottles

36. John is given a 20-cent coin, three 10-cent coins and two 5-cent coins. Find the most number of ways he can make up a sum of \$0.40.



ways

37. Oranges are sold at 3 for \$2. What is the greatest number of oranges I can buy with \$15?

oranges

38. Divide the difference of 329 and 419 by 5.

39. ♣♣♣♣ stand for \$36.
♣♣♣♣♣♣♣♣♣ stand for \$_____.

\$

40. Jackson shared 72 Pokemon cards equally among his 2 brothers, John and Jeff. How many cards would each boy get?

cards

Section C (5 x 4 marks)

For each word problem, write down the working steps and answers clearly in the space provided.

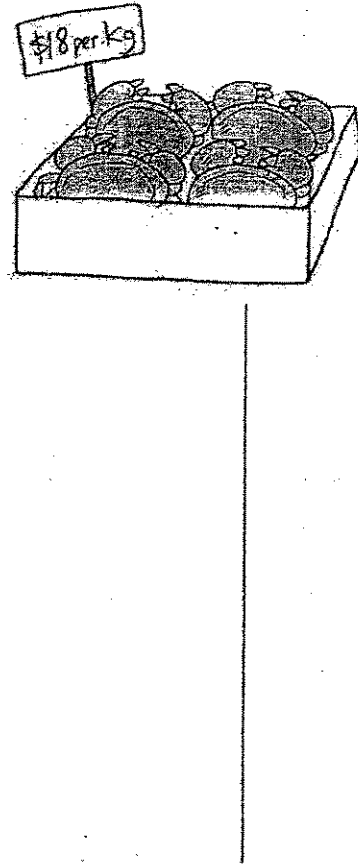
41. On Saturday, there were 3458 visitors at the fun fair. There were 956 fewer visitors at the fun fair on Sunday than on Saturday. How many visitors were at the fun fair during the weekend?

-
42. Leanna bought a television set and a VCD player for \$5308. The VCD player cost \$657.
- a) What was the cost of the television set?
 - b) What was the difference in price between the two items?


43. At a cake shop, fruit tarts were sold at 6 in a box for \$4.
Jayne wanted to buy 48 fruit tarts.
- a) How many boxes of fruit tarts would Jayne have to buy?
 - b) How much did Jayne have to pay for all the fruit tarts?

-
44. 5 classes and 10 teachers are going on an excursion to Pulau Ubin. Each class has 40 pupils. If one ferry can only carry 7 people on each trip, how many trips are needed to take all the pupils and teachers over to Pulau Ubin?

45. Mrs Lim bought 6 kg of crabs and had \$28 left. How much money did she have at first?



End-of-Paper
Please check your work.



ANSWER SHEET

Kong Hwa Pri 3 SA1/2007 MATHS

- 1)3 2)4 3)3 4)4 5)3 6)1
- 7)4 8)4 9)1 10)4 11)2 12)2
- 13)3 14)1 15)2 16)1 17)3 18)2
- 19)1 20)2 21)one thousand, eight hundred and fifty-nine
- 22)180 23)A=55 B=52 24)8949 25)2447 26)2
- 27)2394 28)6 29)6 30)\$109 31)81 32)57
- 33)\$66 34)78 35)945 bottles 36)3 ways 37)21 oranges
- 38)18 39)\$90 40)24 cards 41)5960 visitors 42)\$3994
- 43)a. 8 boxes b.\$32 44)30 trips 45)\$136



NANYANG PRIMARY SCHOOL
FIRST SEMESTRAL EXAMINATION
2007

PRIMARY 3
MATHEMATICS

DURATION: 1 HOUR 45 MINUTES

Section A	/ 40
Section B	/ 40
Section C	/ 20

Total:	/ 100
---------------	--------------

Name: _____ ()

Class: Primary 3 ()

Date: 10 May 2007

Parent's Signature: _____

DO NOT OPEN THIS BOOKLET UNTIL YOU ARE TOLD TO DO SO.

FOLLOW ALL INSTRUCTIONS CAREFULLY.

ANSWER ALL QUESTIONS.

Section A

Questions 1 to 20 carry 2 marks each. For each question, four options are given. One of them is the correct answer. Make your choice (1, 2, 3 or 4). Shade the oval (1, 2, 3 or 4) on the Optical Answer Sheet.

(Total: 40 marks)

1. In 4398, the digit 3 has a value of _____.

- | | |
|-------------|------------------|
| (1) 3 ones | (2) 3 tens |
| (3) 30 tens | (4) 300 hundreds |

2. 5 thousands, 17 hundreds, 7 tens is the same as _____.

- | | |
|----------|----------|
| (1) 5087 | (2) 5177 |
| (3) 5240 | (4) 6770 |

3. 5032 is 240 more than _____.

- | | |
|----------|----------|
| (1) 4792 | (2) 4812 |
| (3) 5272 | (4) 7432 |

4. The sum of 1433 and 1254 is _____.

- | | |
|----------|----------|
| (1) 2687 | (2) 2677 |
| (3) 221 | (4) 179 |

5. The difference between 6909 and 2405 is _____.

- | | |
|----------|----------|
| (1) 9314 | (2) 4504 |
| (3) 4405 | (4) 4404 |

6. What is the missing number in the following number pattern?

1, 1, 2, 6, ? , 120, 720

(1) 8
(3) 18

(2) 12
(4) 24

7. Find the product of 710 and 8.

(1) 718
(3) 5680

(2) 5608
(4) 7108

8. Express \$22.95 in cents.

(1) 295¢
(3) 2259¢

(2) 925¢
(4) 2295¢

9. What is the missing digit in the box?

$$\begin{array}{r} 9938 \\ - 6\boxed{?}26 \\ \hline 3512 \end{array}$$

(1) 1
(3) 3

(2) 2
(4) 4

15. Sakina bought a doll for \$52 and a clip for \$7. She had \$37 left. How much did she have at first?

(1) \$96
(2) \$59
(3) \$45
(4) \$22

16. Carol bought two cups of tea for 55 cents each. She gave the cashier \$5. How much change should she get?

(1) \$1.10
(2) \$3.90
(3) \$4.45
(4) \$5.55

17. Using **all** the digits given below, form the largest and smallest 3-digit numbers. Find the sum of these 2 numbers.

1, 6, 2

(1) 423
(2) 495
(3) 747
(4) 783

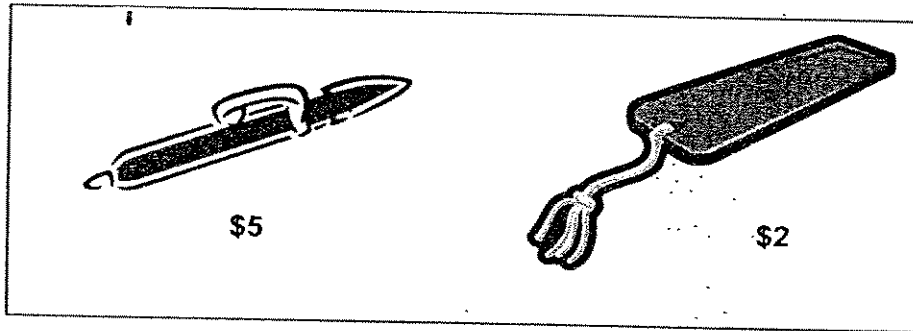
18. Eliza has 1278 beads. She has 237 fewer beads than Susan. How many beads do the two girls have?

(1) 1041
(2) 1515
(3) 2319
(4) 2793

19. Mr Lim sold 134 packets of oranges on Saturday. He sold 12 packets fewer on Sunday than on Saturday. Each packet contained 4 oranges. How many **oranges** did he sell on Sunday?

- (1) 122 (2) 146
(3) 488 (4) 536

20.



Mariah bought 4 bookmarks and a pen. How much did she pay for her purchase?

- (1) \$1 (2) \$7
(3) \$8 (4) \$13

Section B

Questions 21 to 40 carry 2 marks each. Show your working clearly in the space below each question and write your answers in the spaces provided. For questions which require units, give your answers in the units stated.

(Total: 40 marks)

21. Write in figures.

Eight thousand and fifteen

Answer : _____

22. What is the missing number in the box?

$$\boxed{?} + 1276 = 1625$$

Answer : _____

23. The product of two numbers is 642. If one of the numbers is 6, what is the other number?

Answer : _____

24. Multiply 212 by 9.
In your answer, which digit is in the tens place?

Answer : _____

25. Clarence had \$98.70. He spent \$39.50. How much had he left?

Answer : \$ _____

26. Hong Tat achieved the following scores in a video game.
Pick out his top 3 scores and arrange them in **ascending** order.

2914, 2149, 2491, 2941

Answer : _____, _____, _____

27. Find the value of $1788 + 141$.

Answer : _____

28. A school library has 2367 English books and 1277 Chinese books. How many English and Chinese books are there in the library?

Answer : _____

29. Alice made 1899 cookies to sell at the funfair. She managed to sell 1172 cookies. How many cookies has she left?

Answer : _____

30. Stall A sold 2220 magazines in a week. Stall B sold 1109 magazines in the same week. How many **more** magazines were sold by Stall A than Stall B in that week?

Answer : _____

31. When I divide a number by 8, the quotient is 211. What is this number?

Answer : _____

32. Find the missing number in the box.

$$375 \times 6 = 10 \times \boxed{?}$$

Answer : _____


33. Mrs Wong baked 407 pineapple tarts. She put them equally into 9 containers and found that she had a few left. How many pineapple tarts were left?

Answer : _____

34. A fruiterer has 18 boxes of mangoes. Each box contains 40 mangoes. He repacks all the mangoes into bags of 5. How many **bags of mangoes** will he get?

Answer : _____

35. Meimei has \$4.99 at first. Her mother gives her some more coins as shown below:



How much does Meimei have now?

Answer : \$ _____

36. $\$16.50 - \$5.68 =$ _____

Answer : \$ _____

37. The difference between two numbers is 47. One of the numbers is 138. What is the sum of these two numbers?

Answer : _____

38. Sean and Ahmad have 509 marbles. Sean has 89 marbles fewer than Ahmad. How many marbles does Sean have?

Answer : _____

39. What is the value of A?

$$\boxed{A} \div 7 = 407 \text{ R } 4$$

Answer : _____

40. Using **all** the digits given below, form the largest four-digit **odd** number.

$\boxed{0, 5, 7, 2}$

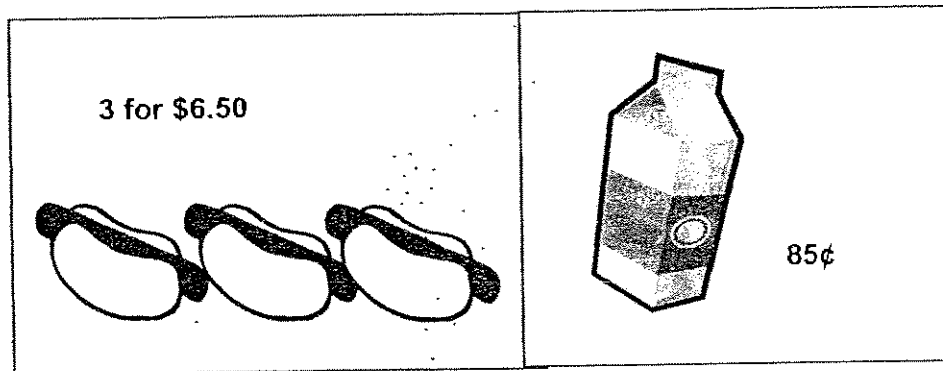
Answer : _____

Section C

Questions 41 to 45 carry 4 marks each. Do these word problems carefully.
Show your working clearly in the space provided below each question.

(Total: 20 marks)

41. Maggie bought 3 packets of milk and 6 hotdog buns for her family.
Each packet of milk cost 85¢.
The hotdog buns were on offer at 3 for \$6.50.
(a) What is the cost of 3 packets of milk?
(b) How much did she pay altogether?



42. Matthew had some marbles at first.
After he gave his brother 90 marbles and his three friends 80 marbles each, he still had 150 marbles left.
How many marbles did Matthew have at first?


43. A total of 4500 movie tickets were sold in three days.
783 more tickets were sold on the first day than on the second day.
The same number of tickets were sold on the second and third day.
How many tickets were sold on the first day?

44. Some people visited an exhibition.
The entrance fees are priced at \$2 per child and \$3 per adult.
A total of \$201 were collected from the sale of the adults' tickets.
3 times as many children as adults visited the exhibition.
(a) How many adults visited the exhibition?
(b) How much was collected from the sale of the children's tickets?

45. Lily uses 4 tablespoons of sugar for every 6 cups of water to make a bowl of jelly.
- (a) How many tablespoons of sugar does Lily need if she uses 18 cups of water to make some jelly?
 - (b) How many cups of water does Lily need if she uses 10 tablespoons of sugar?

☺ *End of Paper* ☺
Please check your work carefully


Setters: Mrs Anne Kor
Ms Asfalinda



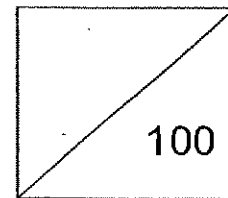
ANSWER SHEET

NANYANG PRIMARY SCHOOL - PRIMARY 3 MATHEMATICS 2007
SEMESTRAL ASSESSMENT (1)

- | | | |
|----------------------|-------------|--------------------------------|
| 1. 3 | 31) 1688 | 41) a) $85¢ \times 3 = \$2.55$ |
| 2. 4 | 32) 225 | The 3 packets of milk |
| 3. 1 | 33) 2 | cost \$2.55 |
| 4. 1 | 34) 144 | b) $\$6.50 \times 2 = \13 |
| 5. 2 | 35) \$6.04 | $\$13 + \$2.55 = \$15.55$ |
| 6. 4 | 36) \$10.82 | She paid \$15.55 |
| 7. 3 | 37) 229 | altogether. |
| 8. 4 | 38) 210 | |
| 9. 4 | 39) 2853 | 42) $3 \times 80 = 240$ |
| 10. 1 | 40) 7205 | $240 + 90 + 150 = 480$ |
| 11. 1 | | Matthew had 480 at first |
| 12. 4 | | |
| 13. 4 | | 43) $4500 - 783 = 3717$ |
| 14. 2 | | $3717 \div 3 = 1239$ |
| 15. 1 | | $1239 + 783 = 2022$ |
| 16. 2 | | 2022 ticket were sold |
| 17. 3 | | on the first day. |
| 18. 4 | | |
| 19. 3 | | 44) a) $201 \div 3 = 67$ |
| 20. 4 | | 67 adults visited |
| 21. 8015 | | the exhibition. |
| 22. 349 | | b) $67 \times 3 = 201$ |
| 23. 107 | | $201 \times \$2 = \402 |
| 24. 0 | | \$402 was collected. |
| 25. \$59.20 | | |
| 26. 2491, 2914, 2941 | | 45) a) $18 \div 6 = 3$ |
| 27. 1929 | | $3 \times 4 = 12$ |
| 28. 3644 | | Lily needs 12 tablespoons |
| 29. 727 | | of sugar. |
| 30. 1111 | | b) $10/4 \times 6 = 60/4$ |
| | | =15 |
| | | Lily needs 15 cups of |
| | | water. |



Catholic High School
Mid-Year Examination 2007
Mathematics
Primary 3



Name: _____ ()

Class: Primary 3 _____

Date: 9th May 2007

Duration: 1 h 30 min

Parent's Signature : _____

There are 3 sections consisting of 13 pages in this paper.

Section A: Multiple-Choice Questions (MCQ) 20 x 2 marks

Section B: Open-Ended Questions 20 x 2 marks

Section C: Story Sums 5 x 4 marks

SECTION A: Multiple-Choice Questions (20 x 2 marks)

For each of the question from 1 to 20, four options are given. One of them is the correct answer. Make your choice (1, 2, 3 or 4). Shade the correct oval (1, 2, 3 or 4) on the Optical Answer Sheet (OAS).

1. In 9876, which digit is in the hundreds place?

- (1) 6
- (2) 7
- (3) 8
- (4) 9

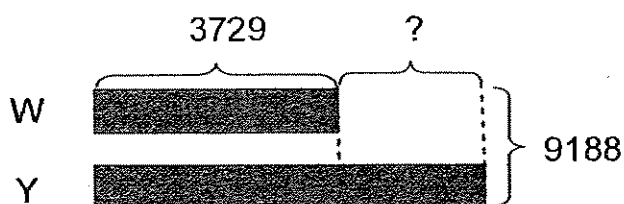
2. What is the sum of 2589 and 4476?

- (1) 6955
- (2) 6965
- (3) 7055
- (4) 7065

3. What is the difference between 8684 and 2790?

- (1) 5890
- (2) 5894
- (3) 5910
- (4) 6114

4. Look at the model below. What is the missing value?



- (1) 1730
- (2) 2330
- (3) 5459
- (4) 6661

5. Which of the following has the same value as 4×8 ?
- (1) $4 + 4 + 4 + 4$
 - (2) $4 \times 4 \times 4 \times 4$
 - (3) $8 + 8 + 8 + 8$
 - (4) $8 \times 8 \times 8 \times 8$
6. What is the remainder when 857 is divided by 5?
- (1) 1
 - (2) 2
 - (3) 3
 - (4) 4
7. Mr Lee paid \$247 for his new handphone. Mr Samuel paid thrice as much money as Mr Lee for a new handphone. How much did Mr Samuel pay for the new handphone?
- (1) \$250
 - (2) \$494
 - (3) \$721
 - (4) \$741
8. Aunty Amos baked a total of 387 cookies. She baked 8 times as many lemon cookies as cocoa cookies. How many cocoa cookies did she bake?
- (1) 43
 - (2) 48
 - (3) 344
 - (4) 379
9. 2200 is _____ hundreds less than 7400.
- (1) 52
 - (2) 500
 - (3) 520
 - (4) 5200

10. The digits in the two boxes are the same. What is the missing digit in each box?

$$\begin{array}{r}
 2 \quad 4 \quad \square \quad 3 \\
 + \quad \quad 5 \quad \square \quad 7 \\
 \hline
 3 \quad 0 \quad 3 \quad 0
 \end{array}$$

- (1) 5
 (2) 6
 (3) 7
 (4) 8
11. Subtract the smallest 4-digit even number from the greatest 4-digit odd number. What is the answer?
- (1) 999
 (2) 8000
 (3) 8997
 (4) 8999
12. Which of the following number is not a product in the multiplication table of 7?



- (1) 35
 (2) 48
 (3) 56
 (4) 63
13. Clara and her five friends each folded 124 paper hearts. How many paper hearts did they fold in all?
- (1) 600
 (2) 620
 (3) 724
 (4) 744

14. Madam Lee wants to pack 965 candy bars into 8 plastic bags. How many candy bars are left unpacked?

- (1) 0
- (2) 5
- (3) 3
- (4) 8

15. Look at the numbers. What is the missing number?

Thousands	Hundreds	Tens	Ones
9	2	8	6
7	3	6	7
5	4	4	8
?	?	?	?

- (1) 3519
 - (2) 3529
 - (3) 3629
 - (4) 3929
16. Arrange the digits 8, 6, 5, 0 to form the smallest odd number. Then add 436 to it. What is the answer?

- (1) 6494
- (2) 6521
- (3) 7016
- (4) 7241

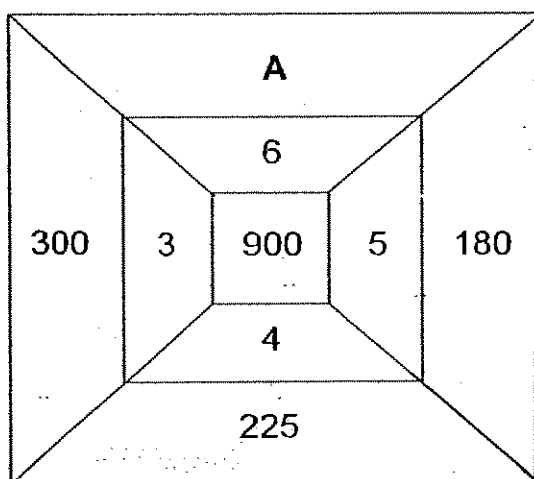
17. I am thinking of a number. When 825 is added to the number and 528 is subtracted from it, the answer is 3467. What is the number I am thinking of?

- (1) 2642
- (2) 3170
- (3) 3764
- (4) 3995_x

18. Charles has a certain number of pencils. The number of pencils he has is less than 100. They can be packed into bundles of 7 or bundles of 9. How many pencils does Charles have?

- (1) 45
- (2) 56
- (3) 63
- (4) 72

19. What is the value of **A** ?



- (1) 150
- (2) 200
- (3) 250
- (4) 350

20. Timothy and Gregory had 192 stickers altogether. After Timothy gave 30 stickers to Gregory, Timothy had thrice as many stickers as Gregory. How many stickers did Gregory have at first?

- (1) 18
- (2) 34
- (3) 48
- (4) 54

SECTION B: Open-ended Questions (20 x 2 marks)**Write the correct answers in the answer boxes provided.**

21. The sum of 933 and 35 tens 46 ones is _____.

22. Take away 1779 from 5357. The answer is _____.

23. 8 groups of 8 is the same as _____.

24. Multiply 758 by 4. The answer is _____.

25. When 637 is divided by 3, what is the quotient?

26. Mrs Yeo earns \$750 each month.
Mrs Lok earns 4 times the amount Mrs Yeo earns each month.
How much does Mrs Lok earn each month?

27. Complete the number pattern.

7, 14, 23, 34, _____, 62

28. Study the pattern in the table below. Find the missing number.

104	108	110	322
108	114	122	344
113	121	127	361
119	?	132	381

29. Mr Kwok bought a digital camera that cost \$599 and a television set that cost \$1899. He also bought a refrigerator. He paid \$4517 for the three items. How much did the refrigerator cost?

30. Vincent has 60 marbles. He wants to share them with 5 of his friends. How many marbles will each of his friends get?

31. I am a two-digit number. I am more than 40 but less than 70. I can count in sixes. Divide my ones digit by 2 and you will find my tens digit. What number am I?

32. 523 visitors visited the Science Centre on Friday. Twice the number of visitors visited the Science Centre on Saturday than on Friday. How many visitors visited the Science Centre on both days?

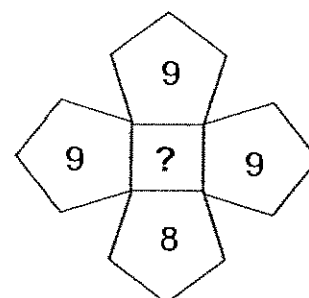
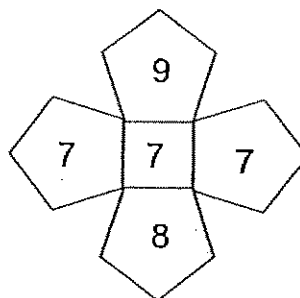
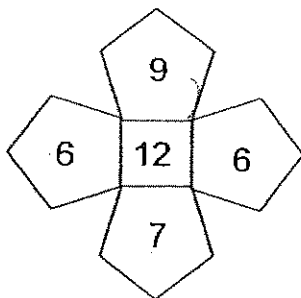
visitors

33. When a number is divided by 6, it gives a quotient of 87 and a remainder of 3. What is the number?

34. Container A and Container B had the same number of beads. After Lily had taken 27 beads from Container B to put into Container A, there are now twice as many beads in Container A as Container B. How many beads did each container have at first?

beads

35. Find the missing number in the square.



36. Lily wanted to buy 6 hairclips but she was short of \$2. She bought 5 hairclips instead and had \$1 left. How much money did she have at first?

\$

37. Use all the digits 2, 3, 4 and 5 to fill in the boxes to obtain the smallest product. What is the smallest product you can get?

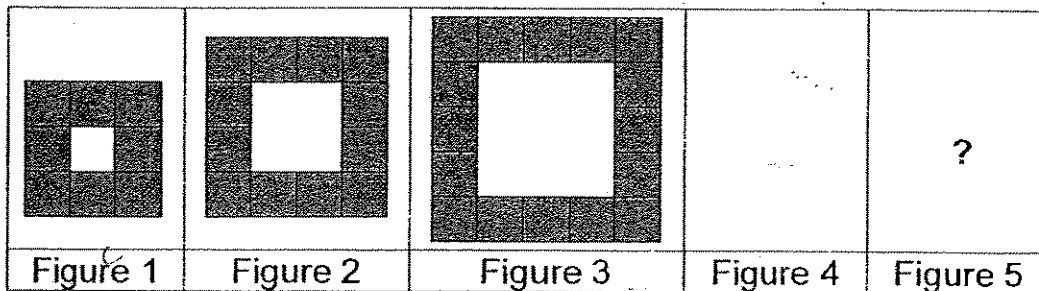
$$\begin{array}{r}
 \begin{array}{|c|} \hline ? \\ \hline \end{array} \begin{array}{|c|} \hline ? \\ \hline \end{array} \begin{array}{|c|} \hline ? \\ \hline \end{array} \\
 \times \qquad \qquad \begin{array}{|c|} \hline ? \\ \hline \end{array} \\
 \hline
 \qquad \qquad \qquad ? \\
 \hline
 \end{array}$$

38. Alvin and Ben had the same number of story books. After Ben had donated 56 story books to the Children's Home, Alvin had 5 times as many story books as Ben. How many story books did Ben have in the end?

39. Anna has some meatballs.
 The number of meatballs is fewer than 50 but more than 30.
 She will have 3 meatballs left if she wants to pack the meatballs equally into 9 packets.
 She will have 4 meatballs left if she packs the meatballs equally into 5 packets.
 How many meatballs does Anna have?
 (Use the table below to help you solve the above problem.)

Number of meatballs	Divide among 9 packets	Divide among 5 packets	Check

40. Study the figures below. How many shaded squares are needed to form Figure 5?



SECTION C: Story Sums (5 x 4 marks)

Solve the following story sums. All workings must be shown clearly.

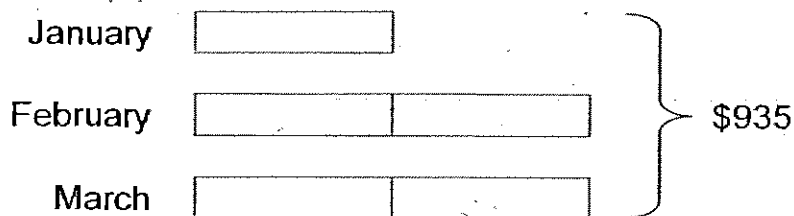
Draw models if necessary.

41. There were 2177 women watching a basketball match. There were 4331 more men watching a basketball match than women. How many adults were watching the basketball match?

42. 1456 visitors visited the Zoo on Tuesday. 250 fewer visitors visited the Zoo on Wednesday than on Tuesday. 298 more visitors visited the Zoo on Thursday than on Wednesday. How many visitors visited the Zoo on Thursday?

43. Helen baked 300 pineapple tarts on both days.
 If she baked 56 more pineapple tarts today than yesterday,
 how many pineapple tarts did she bake yesterday?


44. The following model shows the amount of money saved for three months. If the total amount of money saved was \$935, how much money was saved in March?



45. Miss Lim bought 7 packets of badges. Each packet contained 45 badges. The badges were shared equally among 9 children. How many badges did each child receive?

END OF PAPER

☺ *Please check your work.* ☺



ANSWER SHEET

CATHOLIC PRIMARY SCHOOL - PRIMARY 3 MATHEMATICS 2007
SEMESTRAL ASSESSMENT (1)

1. 3
2. 3
3. 1
4. 1
5. 3
6. 2
7. 4
8. 1
9. 1
10. 2
11. 4
12. 2
13. 4
14. 2
15. 2
16. 2
17. 2
18. 3
19. 1
20. 1
21. 1329
22. 3578
23. 64
24. 3032
25. 212
26. \$3000
27. 47
28. 130
29. \$2019
30. 10
- 31) 48
- 32) 1569 visitors
- 33) 525
- 34) 54
- 35) 9
- 36) 16
- 37) 690
- 38) 14
- 39) 39
- 40) 24
- 41) $2177+4331=6508$
 $6508+2177=8685$
The are 8685 adults watching a basketball match.
- 42) $1456-250=1206$
 $1206+298=1504$
1504 visitors visited the zoo on Thursday.
- 43) $300-56=244$
 $244 \div 2=122$
Helen baked 122 pineapple tarts yesterday.
- 44) $5u=\$935$
 $1u=\$935 \div 5=\187
 $2u=2 \times \$187=\374
\$374 was saved in March.
- 45) $45 \times 7=315$
 $315 \div 9=35$
Each child received 35 badges.



**Anglo-Chinese School
(Primary)**

**MID-YEAR EXAMINATION 2007
MATHEMATICS**

Booklet A

Name: _____ ()

Class: Primary 3 _____

Date: 8 May 2007

Duration of Booklet A & B: 1 h 45 min

**THIS BOOKLET CONTAINS PAGES 1 to 3.
DO NOT OPEN THIS BOOKLET UNTIL YOU ARE TOLD TO DO SO.
FOLLOW ALL INSTRUCTIONS CAREFULLY.**

Section A

Questions 1 to 10 carry 2 marks each. For each question, four options are given. One of them is the correct answer. Choose the correct answer and shade the corresponding oval (1, 2, 3, or 4) on the Optical Answer Sheet. All diagrams are not drawn to scale unless otherwise stated. (20 marks)

1. Which one of the following numbers has the digit '8' in the **hundreds** place?

- (1) 1853
- (2) 3185
- (3) 5318
- (4) 8513

2. 30 hundreds, 43 tens and 55 ones is the same as _____.

- (1) 118
- (2) 785
- (3) 3 098
- (4) 3 485

3. Find the difference between 2 357 and 6 248.

- (1) 3 891
- (2) -4 011
- (3) 4 891
- (4) 8 605

4. The sum of two numbers is 7 056. If the smaller number is 2 639, find the bigger number.

- (1) 4 417
- (2) 5 417
- (3) 5 623
- (4) 9 695

5. Joe had \$1 200. He had \$200 less than Mark. How much do they have altogether?

- (1) \$1 000
- (2) \$1 400
- (3) \$2 200
- (4) \$2 600

6. $28 \times 7 = \boxed{20 \times 7} + \boxed{\quad ? \quad \times 7}$

- (1) 4
- (2) 8
- (3) 20
- (4) 48

7. The product of 204 and 6 is _____.

- (1) 34
- (2) 210
- (3) 1 224
- (4) 1 324

8. _____ $\div 10 = 50 \text{ R } 6$

- (1) 56
- (2) 506
- (3) 560
- (4) 5 600

9. A taxi can take 4 passengers. How many taxis are needed to transport 91 passengers?

- (1) 22
- (2) 23
- (3) 87
- (4) 95

10. Mary has 5 notes altogether. They consists of 2-dollar and 5-dollar notes. Which one of the following cannot be the total amount of money Mary has?

- (1) \$13
- (2) \$16
- (3) \$22
- (4) \$25



**Anglo-Chinese School
(Primary)**

**MID-YEAR EXAMINATION 2007
MATHEMATICS**

Booklet B

Name: _____ ()

Class: Primary 3 ___

Date: 8 May 2007

Duration of Booklet A & B: 1 h 45 min

Section	Contents	Marks	Marks Obtained
A	Multiple Choice Questions	20	
B	Short Answers	40	
C	Problem Sums	40	
Total Marks		100	
Parent's signature			

**THIS BOOKLET CONTAINS PAGES 4 to 16.
DO NOT OPEN THIS BOOKLET UNTIL YOU ARE TOLD TO DO SO.
FOLLOW ALL INSTRUCTIONS CAREFULLY.**

Section B

Questions 11 to 30 carry 2 marks each. Write your answers in the spaces provided. Give your answers in the units stated. All diagrams are not drawn to scale unless otherwise stated. All answers must be expressed in the simplest form. (40 marks)

11. Write 7 849 in words.

12. Form the **smallest 4-digit even number** using all the digits

5, 0, 2, 9

Answer : _____

13. Arrange the following numbers in **ascending order**.

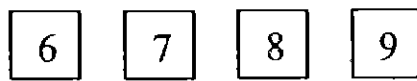
7 890	7 809	7 908	7 980
-------	-------	-------	-------

Answer : _____

14. The difference between 2 numbers is 984. If the larger number is 5 000, what is the smaller number?

Answer : _____

15. This is a game which requires you to use four cards below to make an addition problem.
Each card can only be used once.



Here is the addition problem.

$$\begin{array}{r} \square \quad \square \\ + \square \quad \square \\ \hline \\ \hline \end{array}$$

What would be the largest answer?

Answer : _____

16. Find the value of 13 ones, 24 tens, 8 hundreds and 2 thousands.

Answer : _____

17. Aaron bought 3 boxes of sweets. There were 6 packets of sweets in each box. If each packet contained 10 sweets, how many sweets did he have altogether?

Answer : _____

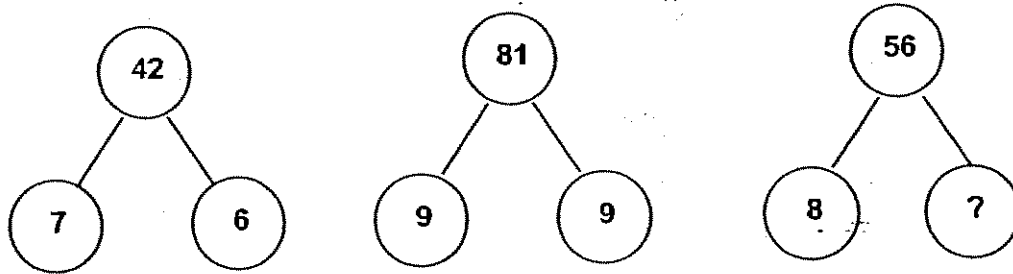
18. 9 children bought a present for their friend.
They shared the cost of the present equally.
If each child paid \$7, how much did the present cost?

Answer : \$ _____

19. A spider has 8 legs. An ant had 6 legs. How many legs do 3 spiders and 5 ants have altogether?


Answer : _____

20. The missing number in the circle is _____.



Answer : _____

21. Look at the pattern. What is the missing number?



Answer : _____

22. Ben has 5 times as many coins as Kenneth.
They have 30 coins altogether.
How many coins does Ben have?

Answer : _____

23. In a fancy dress contest, the number of girls who took part was four times as many as the number of boys. If 28 girls took part in the contest, find the number of boys who took part in the contest?

Answer : _____

24. 5 classes of pupils went on an excursion.
Each class had 35 pupils and was accompanied by two teachers.
What was the total number of people who went for the excursion?

Answer : _____

25. For every 6 stickers that Daniel collects, he can exchange for a notebook. What is the maximum number of notebooks Daniel can get if he has 32 stickers?

Answer : _____

26. James has 25 one-dollar coins, 6 fifty-cent coins and 7 twenty-cent coins in his piggy bank. How much money has James saved altogether?

Answer : \$ _____

27. Mrs Tan bought a T-shirt at a store. She paid the cashier \$50 and received a change of \$17.25. How much did the T-shirt cost?

Answer : \$ _____

28. A shirt costs \$8 less than a pair of pants. If 2 similar shirts cost \$58, what is the cost of a pair of pants?

Answer : \$ _____

29. The printer prints 8 copies of photographs in 5 minutes.
How many copies of photographs can it print in 25 minutes?
(Hint: Make a table)

Answer : _____

30. Ms Lee wants her pupils to use only the digits

7 , 6 , 9

to form 3-digit **odd** numbers. How many possible 3-digit odd numbers can her pupils form?

Answer : _____

Section C

For questions 31 to 40, show your working and statements clearly in the space provided for each question and write your answers in the spaces provided. The number of marks available is shown in brackets [] at the end of each question or part-question. All diagrams are not drawn to scale unless otherwise stated. All answers must be expressed in the simplest form. (40 marks)

31. Joshua collected 517 ice-cream sticks.

Nicholas collected 230 more ice-cream sticks than Joshua.

- a) How many ice-cream sticks did Nicholas collect? (2 marks)
- b) How many ice-cream sticks did they collect altogether? (2 marks)

32. Jason has 249 more stamps than Mitchell. If Jason gives Mitchell 45 of his stamps, how many more stamps will Jason have than Mitchell?

33. Mark, Samuel and Zack had 49 marbles altogether. Mark had twice as many marbles as Samuel, while Samuel had twice as many marbles as Zack. How many marbles does Mark have?

34. Peter is 57 kg. He is 3 times as heavy as Alex. What is their total mass?

35. There are 118 children waiting for their football coach.
If each football coach can have only 8 children, how many coaches are needed?

36. There are 89 magazines arranged in 3 piles. The first pile has 19 more magazines than the second pile. The number of magazines in the second pile is twice the number of magazines in the third pile. How many magazines are there in the second pile?

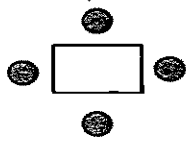
37. Tom and Jerry spent a total of \$90.50 at a shop. Tom spent \$29.65. How much more did Jerry spend than Tom?

38. If John buys 7 pens, he would be short of \$2. If he buys 6 pens, he would have \$1 left. How much money does John have?

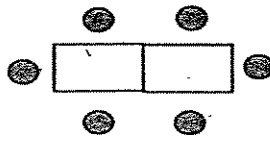
39. There were 14 cars and bicycles in a car park.
John counted 40 wheels altogether.
How many cars were there?



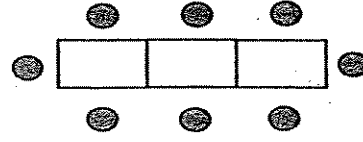
40. The tables and chairs are arranged at a restaurant as shown below.



Pattern 1



Pattern 2




Pattern 3

a) Complete the table by looking at the pattern in the arrangement

Pattern	No of tables	No of chairs
1	1	4
2	2	6
3	(i) _____	8
4	4	(ii) _____
7	7	(iii) _____

b) How many tables are there if there are 22 chairs?

Setters : Mrs Mona Tan, Mr Ang CP, Ms Jasmine Tan



ANSWER SHEET

A C S PRIMARY SCHOOL - PRIMARY 3 MATHEMATICS 2007
SEMESTRAL ASSESSMENT (1)

1. 1
2. 4
3. 1
4. 1
5. 4
6. 2
7. 3
8. 2
9. 2
10. 2
11. Seven thousand, eight hundred and forty-nine
12. 2590
13. 7809, 7890, 7908, 7980
14. 4016
15. $97+86=183$
16. 3053
17. 180
18. \$63
19. 54
20. 7
21. 28
22. 25
23. 7
24. 185
25. 5
26. \$29.40
27. \$32.75
28. \$37
29. 40
30. 4

31) a) $517 + 230 = 747$

He collect 747 ice-cream stick.

32) $249 - 45 = 204$

$204 - 45 = 159$

Jason will have 159 more than Mitchell.

33) $49 \div 7 = 7$

$4 \times 7 = 28$

Mark has 28 marbles.

34) $57 \div 3 = 19$

$19 + 57 = 76$


Their total mass is 76kg.

35) $118 \div 8 = 14R6$

$14 + 1 = 15$

15 coaches are needed.

36) 1st

2nd3rd

$5u = 89 - 19 = 70$

$1u = 70 \div 5 = 14$

$2u = 2 \times 14 = 28$

There are 28 magazines in the second pile.

37) $\$90.50 - \$29.65 = \$60.85$

$\$60.85 - \$29.65 = \$31.20$

Jerry spent \$31.20 more than Tom.

38) 1 pen = $\$2 + \$1 = \$3$

7 pens = $7 \times \$3 = \21

$\$21 - 2 = \19

John has \$19

39) $14 \times 2 = 28$

$40 - 28 = 12$

$4 - 2 = 2$

$12 \div 2 = 6$ cars

There were 6 cars

40) a) i) 3

ii) 10

iii) 16

b) $22 - 2 = 20$

$20 \div 2 = 10$ tables

There are 10 tables.



AI TONG SCHOOL

2007

CONTINUAL ASSESSMENT 2

PRIMARY 3

MATHEMATICS

DURATION : 1 h 30 min

DATE : 28 August 2007

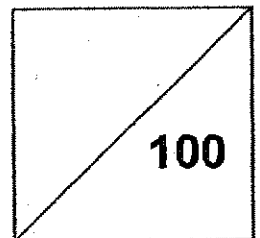
INSTRUCTIONS

Do not open the booklet until you are told to do so.
Follow all instructions.
Answer all questions.

Name : _____ ()

Class : Primary 3 _____

Marks:



Parent's Signature : _____

Date : _____

Section A**Questions 1 to 20 carry 2 marks each.**

For each question, four options are given. One of them is the correct answer.

Make your choice (1, 2, 3 or 4). Shade the oval (1, 2, 3 or 4) on the Optical Answer Sheet.

(40 marks)

1. What is the value of the digit 9 in 9425?

- (1) 9
- (2) 90
- (3) 900
- (4) 9000

2. What number is 500 more than 8050?

- (1) 8055
- (2) 8100
- (3) 8505
- (4) 8550

3. How many **hundreds** are there in 10 000?

- (1) 10 000
- (2) 1000
- (3) 100
- (4) 10

4. Subtract 589 from 8000.

- (1) 2110
- (2) 7411
- (3) 8521
- (4) 8589

5. The difference between two numbers is 16. The smaller number is 8.
What is the greater number?

- (1) 2
- (2) 16
- (3) 24
- (4) 128

6. The sum of all the odd numbers between 10 and 16 is _____.

- (1) 6
- (2) 26
- (3) 36
- (4) 39

7. What is the quotient when 56 is divided by 5?

- (1) 1
- (2) 11
- (3) 51
- (4) 61

8. Fill in the missing number.

$$8 \times 7 = 35 + \boxed{?}$$

- (1) 15
- (2) 21
- (3) 56
- (4) 91

9. What is the product of 6 and 7?

- (1) 1
- (2) 13
- (3) 35
- (4) 42

10. How many ^{50¢}20¢ coins can Mr Singh exchange for ten ⁵⁰⁰50¢ coins?

- (1) 4^x
- (2) 10^s
- (3) 20^s
- (4) 25

11. 5 apples cost \$2. How much is an apple?

- (1) 20¢
- (2) 30¢
- (3) 40¢
- (4) 50¢

12. Mr Lim bought a book. He received \$23.10 as change after giving the cashier \$50.
What was the cost of the book?

- (1) \$22.60
- (2) \$26.90
- (3) \$27.90
- (4) \$73.10

13. What is 2 m 5 cm in centimetres?

- (1) 25 cm
- (2) 205 cm
- (3) 2005 cm
- (4) 2050 cm

14. Mr Lim drives 8085 m from his home to his office. What is the distance he travels in km and m?

- (1) 0 km 885 m
- (2) 8 km 85 m
- (3) 8 km 850 m
- (4) 80 km 85 m

15. Mrs Lim used 250 ml of paint to paint a window. How much paint did she use to paint 5 windows?

- (1) 50 ml
- (2) 245 ml
- (3) 255 ml
- (4) 1250 ml

16. If ♥♥♥♥ represent 36 sweets,

how many sweets do ♥♥♥♥♥ | ♥♥♥♥♥ / ♥♥ represent?

- (1) 9
- (2) 18
- (3) 72
- (4) 90

17. Which of the following is the simplest form of $\frac{3}{12}$?

(1) $\frac{1}{6}$

(2) $\frac{1}{4}$

(3) $\frac{1}{3}$

(4) $\frac{1}{2}$

18. Tom read $\frac{1}{4}$ of his book on Monday and $\frac{1}{8}$ of it on Tuesday. What fraction of his book did he read?

(1) $\frac{1}{12}$

(2) $\frac{2}{12}$

(3) $\frac{3}{8}$

(4) $\frac{5}{8}$

19. In $\frac{6}{15} = \frac{?}{5}$, what is the missing numerator?

(1) 1

(2) 2

(3) 10

(4) 18

20. Find the difference between $\frac{2}{3}$ and $\frac{5}{12}$.

(1) $\frac{1}{4}$

(2) $\frac{3}{4}$

(3) $\frac{1}{3}$

(4) $\frac{7}{15}$

Name: _____ ()

Class: Primary 3 ()

Section B**Questions 21 to 40 carry 2 marks each.**

Write your answers in the spaces provided. For questions which require units, give your answers in the units stated (40 marks)

21. Fill in the missing number.

1030, 1020, 1010, 1000, _____, 980

Ans: _____

22. I am a number with the digits 7, 8, 9 and 0.

I am the **greatest possible number** between 8500 and 9500.

What number am I?

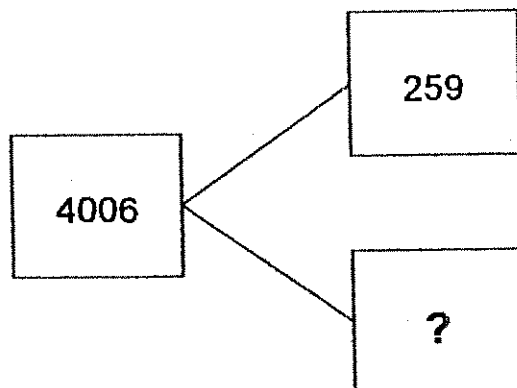
Ans: _____

23. Write in figures.

7 ones, 8 hundreds and 5 thousands.

Ans: _____

24. What is the missing number in the box?



Ans: _____

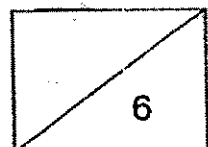
25. Johnny has 218 stamps. He has twice as many stamps as Mary.
How many stamps do Johnny and Mary have?

Ans: _____

26. $\square + \square + \square + \square = 180$

$\square + \square + \square = ?$

Ans: _____



27. There are 8 bean seeds planted in a row.
How many bean seeds are planted in 9 rows?

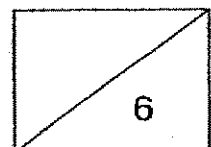
Ans: _____

28. Jim saved \$60. He saved 4 times as much as his sister. How much did his sister save?

Ans: \$ _____

29. Mr Lee gave 48 sheets of coloured paper to his pupils.
Each pupil received 3 sheets of paper.
How many pupils were there?

Ans: _____



30. If 2 kg of prawns cost \$14, what is the cost of 6 kg of prawns?

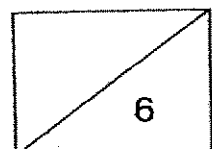
Ans: \$ _____

31. The usual price of a fan was \$15.
At a sale, Mrs Ravi bought the fan for \$9.45.
How much were her savings?

Ans: \$ _____

32. Margaret trained hard for a competition one morning.
She swam 500 m, ran 1500 m and cycled 2400 m.
What was the total distance covered by her that morning?
(Give your answer in km and m)

Ans: _____ km _____ m



33. Mr Tan cuts a ribbon into 4 equal pieces. The ribbon is 1 m long.
What is the length of each piece?

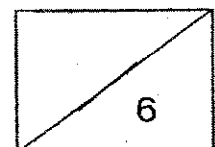
Ans: _____ cm

34. Ali walked 200 m to the bus stop from his house. Then he travelled to a shopping centre by bus, which was 7 times the distance from his house to the bus stop.
What was the total distance travelled by Ali from his house to the shopping centre?

Ans: _____ km _____ m

35. A hawker had 6 bottles of cooking oil. Each bottle contained 550 ml of oil.
How much cooking oil had he? (Express your answer in l and ml)

Ans: _____ l _____ ml



36. A jug has only 1090 ml of water.
 Its capacity is 3 l.
 How much more water is needed to fill the jug up to 3 l?

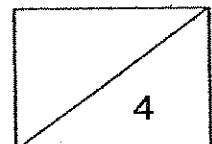
Ans: _____ l _____ ml

37. The picture graph below shows the number of books a class of pupils read during the holidays.
 Study the graph and answer the question that follows.

0 books	☺
1 book	☺ ☺
2 books	☺ ☺ ☺
3 books	☺ ☺ ☺ ☺ ☺
4 books	☺ ☺ ☺ ☺ ☺ ☺
5 books	☺ ☺
Each ☺ stands for 2 pupils	

How many pupils read more than 1 book but fewer than 5 books?

Ans: _____

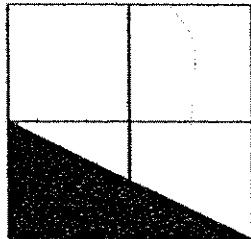


38. Arrange this set of fractions in order.
Begin with the smallest.

$$\frac{2}{3}, \frac{2}{9}, \frac{2}{5}$$

Ans: _____

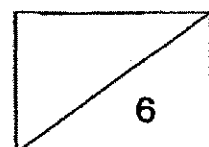
39. What fraction of the square below is shaded?



Ans: _____

40. Jenny cut a cake into 10 pieces. She gave 3 pieces to her neighbour and ate 1 piece. What fraction of the cake had she left?
(Express your answer in its simplest form)

Ans: _____

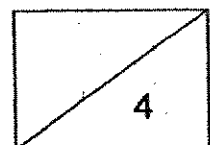


Section C**Questions 41 to 45 carry 4 marks each.**

Show your working clearly in the space below each question and write your answers in the spaces provided. (20 marks)

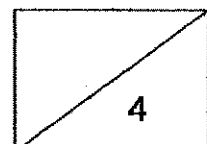
41. Alice collected some picture cards.
Bala collected three times as many picture cards as Alice.
Both Alice and Bala collected 72 picture cards altogether.
How many picture cards did Bala collect?

Ans: _____ [4]



42. Mother pours 5 cans of coke and 500 ml of lime juice into a jug.
Each can of coke contains 330 ml of coke.
What is the total volume of the mixed drink of coke and lime juice in the jug?
(Express your answer in l and ml)

Ans: _____ [4]

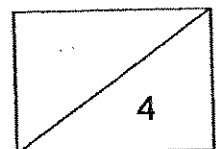


43. Kelly bought a pizza. She ate $\frac{1}{6}$ of the pizza and gave $\frac{1}{2}$ of it to her friend.

What fraction of the pizza had she left?

(Express your answer in its simplest form)

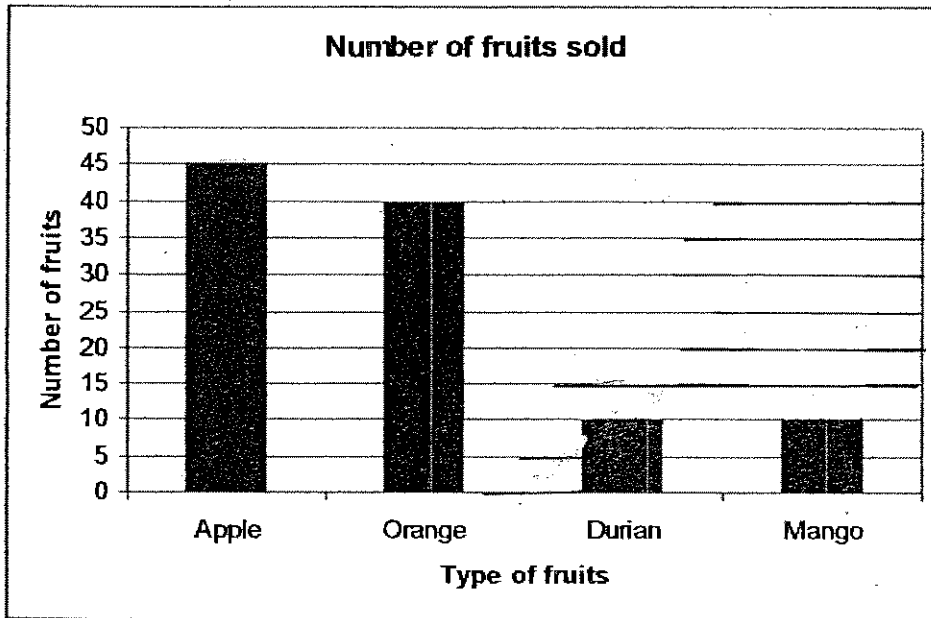
Ans: _____ [4]



44. The table below shows the number of fruits sold by Mrs Lee in a day.

Number of fruits sold			
Apple	Orange	Durian	Mango
45	40	15	30

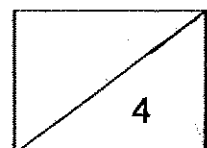
a) Using the table above, complete the bar graph below to show the correct number of durians and mangoes sold.



b) If a durian cost \$8 and a mango cost \$3, how much money did Mrs Lee collect for the durians and mangoes sold on that day?

Answer: a) _____ [2]

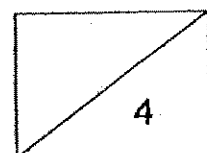
b) _____ [2]




45. There were some houses along Ai Tong Street. Each house was built 9 m apart. If the distance between the first and the last house was 126 m, how many houses were there along Ai Tong Street?

Answer: _____ [4]

End of Paper





ANSWER SHEET

AI TONG PRIMARY SCHOOL - PRIMARY 3 MATHEMATICS 2007
CONTINUAL ASSESSMENT (2)

1. 4
2. 4
3. 3
4. 2
5. 3
6. 4
7. 2
8. 2
9. 4
10. 4
11. 3
12. 2
13. 2
14. 2
15. 4
16. 4
17. 2
18. 3
19. 2
20. 1
21. 990
22. 9087
23. 5807
24. 3747
25. 327 stamps
26. 135
27. 72 bean seeds
28. \$15
29. 16 pupils
30. \$42.00
- 31) \$5.55
- 32) 4km 400m
- 33) 25cm
- 34) 1km 600m
- 35) 3L 300ml
- 36) 1L 910ml
- 37) 28 pupils
- 38) $\frac{2}{9}, \frac{2}{5}, \frac{2}{3}$
- 39) $\frac{1}{4}$
- 40) $\frac{3}{5}$


41) Alice }
 Bala } 72

$72 \div 4 = 18$ picture cards
 $18 \times 3 = 54$ picture cards
 Bala collected 54 picture cards.

42) $330\text{ml} \times 5 = 1650\text{ml}$
 $1650\text{ml} + 500\text{ml} = 2\text{L } 150\text{ml}$
 The total volume is 2L 150ml

43) $1 - 1/6$
 $= 6/6 - 1/6$
 $= 5/6$
 $5/6 - 1/2$
 $= 5/6 - 3/6$
 $= 2/6$
 $= 1/3$

She had left $1/3$ fraction of the cake.



b) $15 \times \$8 = \120
 $30 \times \$3 = \90
 $\$120 + \$90 = \$210$

Mrs Lee collected \$210 on that day.

45) $126\text{m} \div 9 = 14$ houses
 $14 + 1 = 15$
 There were 15 houses along Ai tong street.



Maha Bodhi School
2007 Continual Assessment 2
Mathematics

Name : _____ ()

Date : 21 August 2007

Class : Pr 3 _____

Duration : 1 h 45 min

BOOKLET A

Section A : Multiple-Choice Questions (34 marks)

Questions 1 to 17 carry 2 marks each.

For each question, four options are given. One of them is the correct answer.

Make your choice (1, 2, 3 or 4). Shade the oval (1, 2, 3 or 4) on the Optical Answer Sheet.

1. In 5619, the digit '6' stands for _____
 - (1) 6
 - (2) 60
 - (3) 600
 - (4) 6000

2. The odd number between 4913 and 4917 is _____
 - (1) 4911
 - (2) 4914
 - (3) 4915
 - (4) 4916

3. 9285 ones = _____
 - (1) 9 ones 2 tens 8 hundreds 5 thousands
 - (2) 9 thousands 28 hundreds 5 ones
 - (3) 92 tens 85 ones
 - (4) 928 tens 5 ones

4. 3240 is 1000 more than _____.
- (1) 2240
 - (2) 3140
 - (3) 3340
 - (4) 4240
5. Harry collected 20 stickers. Raymond collected thrice as many stickers as Harry. How many stickers did they collect altogether ?
- (1) 80
 - (2) 60
 - (3) 30
 - (4) 40
6. Find the difference between 5300 and 281.
- (1) 5581
 - (2) 5181
 - (3) 5129
 - (4) 5019
7. _____ $- 45 = 5 + 517$.
- (1) 562
 - (2) 567
 - (3) 522
 - (4) 477
8. During the mooncake festival, Mr Baker received orders for 8200 mooncakes. He baked 1180 mooncakes on the first day. How many more mooncakes must he bake ?
- (1) 9380
 - (2) 7020
 - (3) 7180
 - (4) 7200

9. If $8 = 20 - \text{☀}$

$$\text{☀} + \text{☾} = 30,$$

then $\text{☾} = \underline{\hspace{2cm}}$.

- (1) 12
- (2) 18
- (3) 22
- (4) 42

10. What is the quotient when we divide 788 by 5?

- (1) 157
- (2) 38
- (3) 3
- (4) 5

11. The product of two numbers is 549.
If one of the numbers is 9, the other number is .

- (1) 558
- (2) 540
- (3) 270
- (4) 61

12. $6 \times \underline{\hspace{2cm}} = 12 \times 7$

- (1) 504
- (2) 93
- (3) 84
- (4) 14

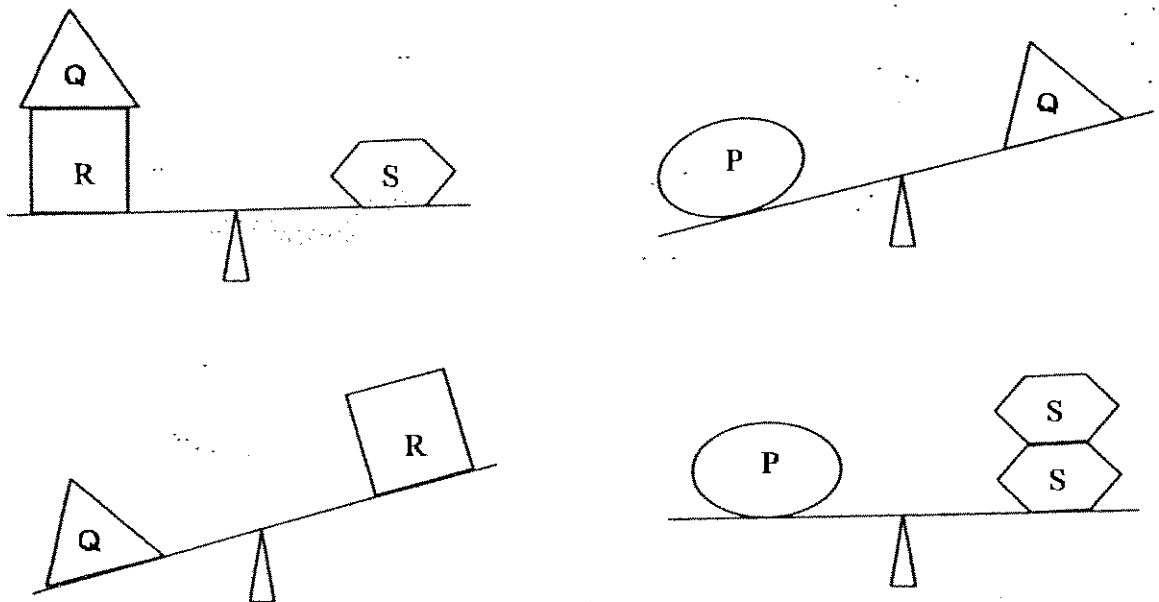
13. Tim has 3 fifty-cent coins, 9 twenty-cent coins and 15 five-cent coins.
How much does he have altogether ?

- (1) \$3.15
- (2) \$3.45
- (3) \$4.05
- (4) \$4.80

14. Suresh gets \$2.00 as pocket money every day. If he spends \$1.20 and saves the rest each day, how much will he save in 3 days ?

- (1) \$0.80
- (2) \$2.40
- (3) \$3.60
- (4) \$6.00

15.



Arrange the mass of the objects P, Q, R and S in decreasing order.

- (1) PSQR
- (2) QRPS
- (3) RQSP
- (4) SPQR

16. 10 identical pails filled completely with water are needed to fill up an 8-litre tank. What is the capacity of each pail ?

- (1) 8 ml
- (2) 80 ml
- (3) 800 ml
- (4) 8000 ml

17. Which one of the following fractions is the greatest ?

- (1) $\frac{2}{5}$
- (2) $\frac{2}{7}$
- (3) $\frac{2}{9}$
- (4) $\frac{2}{11}$

Maha Bodhi School**2007 Continual Assessment 2****Mathematics**

Name : _____ ()

Class : Pr 3 _____

Duration : 1 h 45 min

Date : 21 August 2007

Parent's Signature : _____

Math Alive! (10 marks)	
Section A (34 marks)	
Section B (36 marks)	
Section C (20 marks)	
Total (100 marks)	

BOOKLET B**Section B: (36 marks)**

Questions 18 to 35 carry 2 marks each.

Write your answers in the boxes provided. Give your answers in the units stated.

Show your working in the space provided. Marks will be awarded for correct method shown.

18. Complete the number pattern:

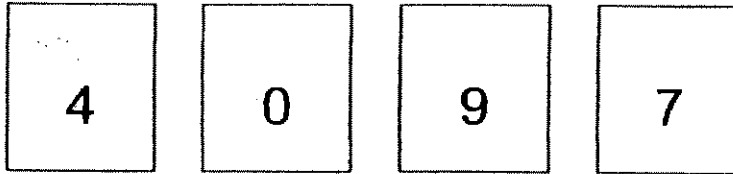
1976, 1996, _____, 2036

Answer:

19. I am a two-digit number. My digits add up to 12.
Both my digits are the same.
What am I?

Answer:

20. You are given 4 number cards.



Use these cards to form the smallest 4-digit even number.

Answer:

21. Find the missing number in the box.

$$\begin{array}{r} 9035 \\ - \square 65 \\ \hline 8770 \end{array}$$

Answer:

22. How many sevens are there in the sum of 511 and 182 ?

Answer:

23. $7 + 14 + 21 = \underline{\hspace{2cm}} \times 7$

Answer:

24. Sean had 6 packets of paper plates.
There were 35 paper plates in each packet.
163 paper plates were used for a party.
How many paper plates were left ?

Answer:

paper plates

25. Julian has 23 toy cars.
If Julian buys another toy car, he will have twice as many toy cars as his brother.
How many toy cars does Julian's brother have ?

Answer:

toy cars

26. Ninety dollars and five cents can be written as \$_____.

Answer:

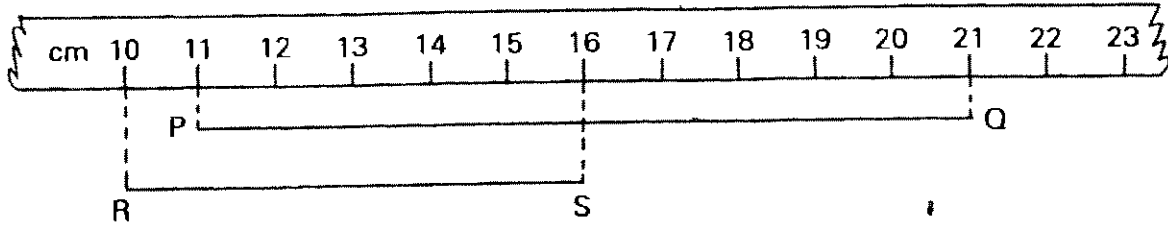
\$

27. Alice exchanged 10 twenty-cent coins for fifty-cent coins. How many fifty-cent coins would she get ?

Answer:

fifty-cent coins

28. Line RS is _____ cm shorter than line PQ.



Answer: cm

29. Suresh's mass is 48 kg. Jean is 13 kg lighter than Suresh. What is their total mass ?

Answer: kg

30.



Mug
230 ml



Pail
3 l

The pail can hold _____ ml more water than the mug.

Answer: ml

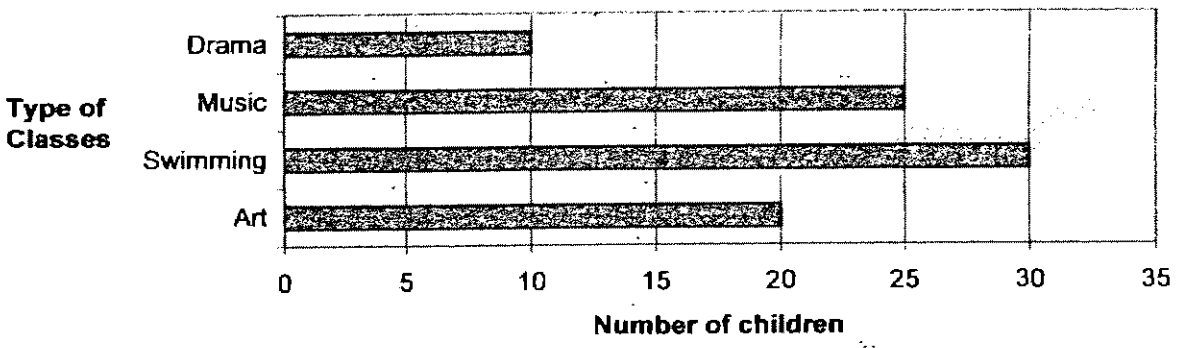
31. Francis ate $\frac{1}{5}$ of a pizza. His sister ate $\frac{1}{10}$ of the same pizza.
 What fraction of the pizza was left ?

Answer:

32. $\frac{3}{4} = \frac{\square}{12}$. The missing numerator in the fraction is _____.

Answer:

The graph below shows the different classes that some children attended last Saturday from 9 a.m. to 10 a.m.
 Study the graph and answer questions 33 and 34.



33. Which class had 20 fewer children attending it than those from the Swimming class ?
34. If one child could attend only one class, how many children attended the classes on Saturday altogether ?

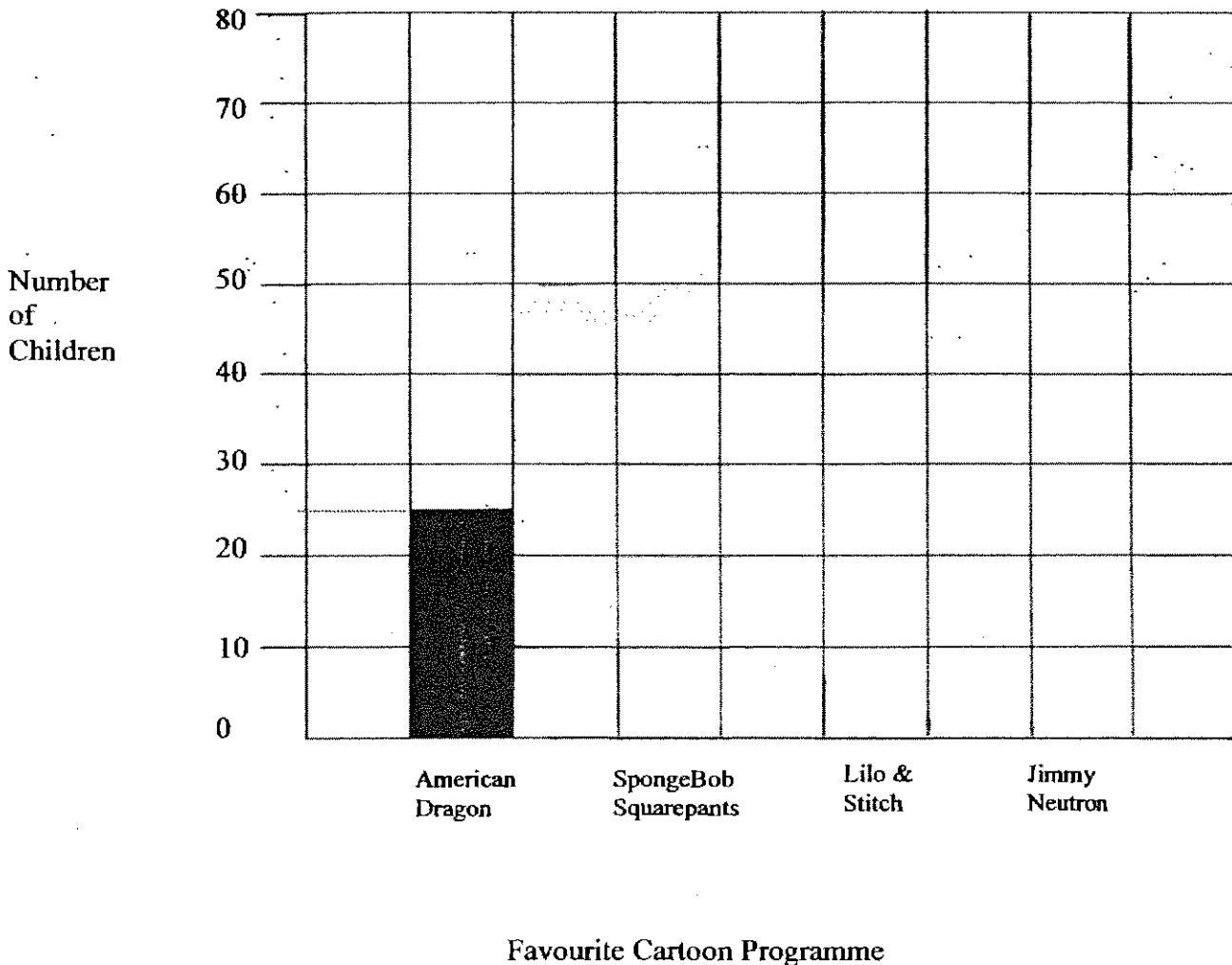
Answer:

Answer: children

35.

A group of children completes a survey about their favourite television cartoon programme.
 25 children watch 'American Dragon'.
 Twice as many children watch 'SpongeBob Squarepants' than 'American Dragon'.
 35 children watch 'Lilo & Stitch'.
 25 more children watch 'Jimmy Neutron' than 'Lilo & Stitch'.

Use the information above to complete this bar graph.
 (Shade the graph using pencil or colour pencil)



Section C: (20 marks)

Questions 36 to 40 carry 4 marks each.

Show your working clearly in the space below each question.

Write a statement for each step.

36. Rose is 13 years older than Mary.
If Mary is 21 years old in 10 years' time, how old is Rose now ?


37. Mrs Heng put 7 piles of exercise books on the table.
There were 39 exercise books in each pile.
Ali took away 15 exercise books from each of the 7 piles.
How many exercise books were left on the table ?

38. Amy and Sally had the same amount of money at first.
After Sally spent \$15.30, she had \$8.90 left.
If Amy spent \$20.80, how much money would she have left ?
39. The total mass of 5 packets of beans and 8 packets of nuts is 1 kg 93 g.
The mass of each packet of beans is 65 g. What is the mass of each packet of nuts ?

40. Mike, Dillon, Eddie and Anson took part in a swimming race.
Anson was 7 m behind Dillon.
Dillon was 4 m ahead of Eddie.
Mike was 3 m ahead of Dillon.
- a) Who was the first swimmer ?
 - b) Who was the last swimmer ?
 - c) What was the difference in distance between the first and the last swimmers ?



Remember to check your work!
Every mark counts.
–End of Paper –



ANSWER SHEET

MAHA BODHI PRIMARY SCHOOL - PRIMARY 3 MATHEMATICS 2007
CONTINUAL ASSESSMENT (2)

- 1. 3
- 2. 3
- 3. 4
- 4. 1
- 5. 1
- 6. 4
- 7. 2
- 8. 2
- 9. 2
- 10. 1
- 11. 4
- 12. 4
- 13. 3
- 14. 2
- 15. 1
- 16. 3
- 17. 1
- 18. 2016
- 19. 6
- 20. 4790
- 21. 2
- 22. 99
- 23. 6
- 24. 47
- 25. 12 toy cars
- 26. \$90.05
- 27. 4 fifty-cent coins
- 28. 4cm
- 29. 83kg
- 30. 2770ml


31) 7/10

32) 9

33) Drama

34) 85 children

35)



36) $21 - 10 = 11$

Mary is 11 years old.

$$11 + 13 = 24$$

Rose is 24 years old.

37) $39 \times 7 = 273$

There are 273 exercise books in the 7 piles.

$$15 \times 7 = 105$$

Ali took away 105 exercise books altogether.

$$273 - 105 = 168$$

168 exercise books were left.

38) $\$15.30 + \$8.90 = \$24.20$

Sally and Amy had \$24.20 each.

$$\$24.20 - \$20.80 = \$3.40$$

Amy had \$3.40 left.

39) $65 \text{g} \times 5 = 325 \text{g}$

5 packet of beans is 325g

$$1093 \text{g} - 325 \text{g} = 768 \text{g}$$

8 packet of nuts is 768g.

$$768 \div 8 = 96 \text{g}$$

The mass of a packet of nuts is 96g.

40) a) $4 \text{m} + 7 \text{m} = 11 \text{m}$

Dillion swam 11m

$$11 \text{m} + 3 \text{m} = 14 \text{m}$$


Mike swam 14m and was the first.

b) $11 \text{m} - 7 \text{m} = 4 \text{m}$

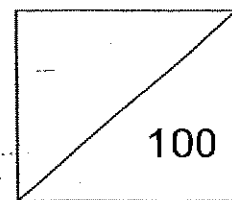
Anson swam 4m and was the last.

c) $14 \text{m} - 4 \text{m} = 10 \text{m}$

The difference is 10m



Catholic High School
Continual Assessment 2
Mathematics
Primary 3



Name: _____ ()

Class: Primary 3 _____

Date: 21st August 2007

Duration: 1 h 30 min

Parent's Signature : _____

There are 3 sections consisting of 17 pages in this paper.

Section A: Multiple-Choice Questions (MCQ) 20 x 2 marks

Section B: Open-Ended Questions 20 x 2 marks

Section C: Story Sums 5 x 4 marks

SECTION A: Multiple-Choice Questions (20 x 2 marks)

For each of the question from 1 to 20, four options are given. One of them is the correct answer. Make your choice (1, 2, 3 or 4). Shade the correct oval (1, 2, 3 or 4) on the Optical Answer Sheet (OAS).

1. Which of the following has the digit "5" in the hundreds and tens place?

- (1) 5958
- (2) 8595
- (3) 9558
- (4) 9855

2. Add 563 and 2719. What is the answer?

- (1) 1956
- (2) 2272
- (3) 3272
- (4) 3282

3. What must be added to 3468 to give 5000?

- (1) 1532
- (2) 1542
- (3) 1632
- (4) 8468

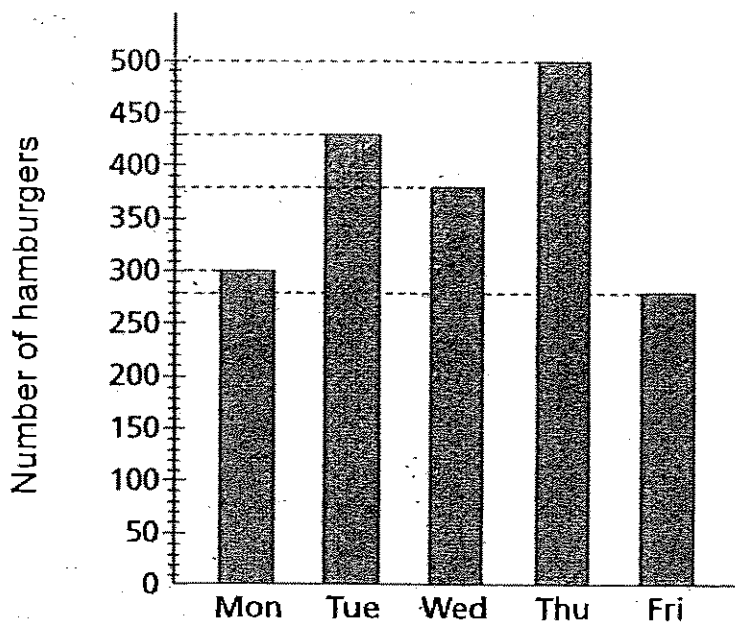
4. Multiply 654 by 6. What is the answer?

- (1) 109
- (2) 3624
- (3) 3904
- (4) 3924

5. 6 km 5 m = _____ m

- (1) 65
- (2) 605
- (3) 6005
- (4) 6500

6. The bar graph below shows the number of hamburgers sold from Monday to Friday.

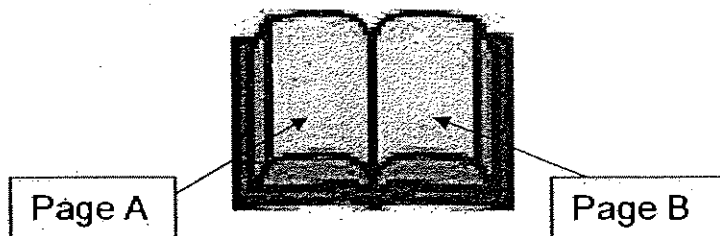


How many hamburgers were sold from Wednesday to Friday?

- (1) 380
(2) 660
(3) 1110
(4) 1160
7. 80 tens more than 8 thousands is _____

- (1) 880
(2) 8008
(3) 8080
(4) 8800

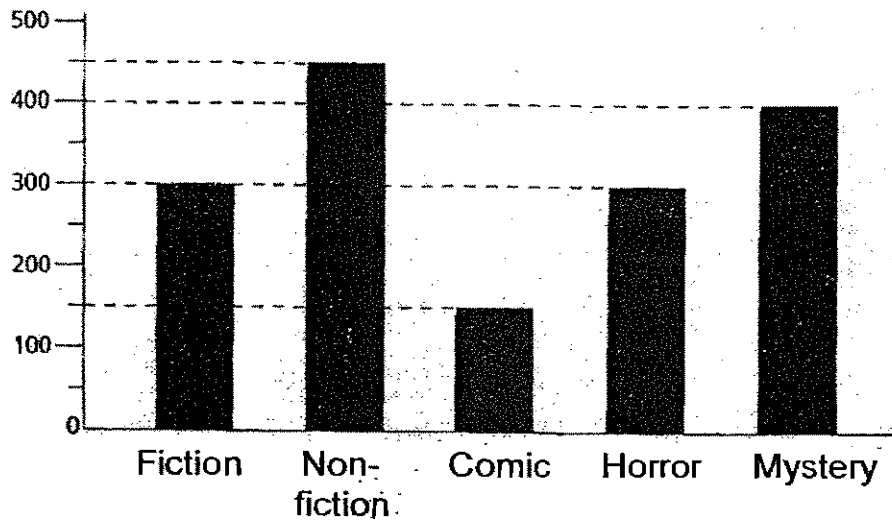
8. Alex turned the pages of a book he was reading. The number on Page A was the greatest 3-digit even number. What was the sum of the numbers on Page A and Page B?



- (1) 201
(2) 999
(3) 1097
(4) 1997
9. The difference between two numbers is 823. If the bigger number is 1000, what is the smaller number?
- (1) 177
(2) 223
(3) 277
(4) 1823
10. A farmer has 128 ducks and twice as many chickens as ducks. How many chickens does he have?
- (1) 64
(2) 256
(3) 284
(4) 384
11. Joan wanted to pack 218 sweets into packets of 4. What was the maximum number of packets of 4 she would have?
- (1) 54
(2) 2
(3) 55
(4) 872


12. The total mass of a table and a bicycle is 108 kg.
The mass of the table is twice the mass of the bicycle.
What is the mass of the bicycle?
- (1) 36 kg
 - (2) 72 kg
 - (3) 304 kg
 - (4) 324 kg
13. James is thinking of a fraction.
The denominator is thrice that of the numerator.
The difference between the numerator and denominator is 4.
What fraction is he thinking of?
- (1) $\frac{1}{3}$
 - (2) $\frac{2}{6}$
 - (3) $\frac{3}{9}$
 - (4) $\frac{4}{12}$
14. When a tank is filled with 33 litres of water, it is only $\frac{1}{3}$ full.
The capacity of the tank is _____ litres.
- (1) 11
 - (2) 44
 - (3) 66
 - (4) 99


15. The bar graph below shows the types of books adults read.



How many more non-fiction book readers than comic book readers are there?

- (1) 150
- (2) 300
- (3) 450
- (4) 600

16. Look at the figure below. How many more  do you need to shade so that $\frac{3}{4}$ of the figure is shaded?



- (1) 1
- (2) 2
- (3) 3
- (4) 5

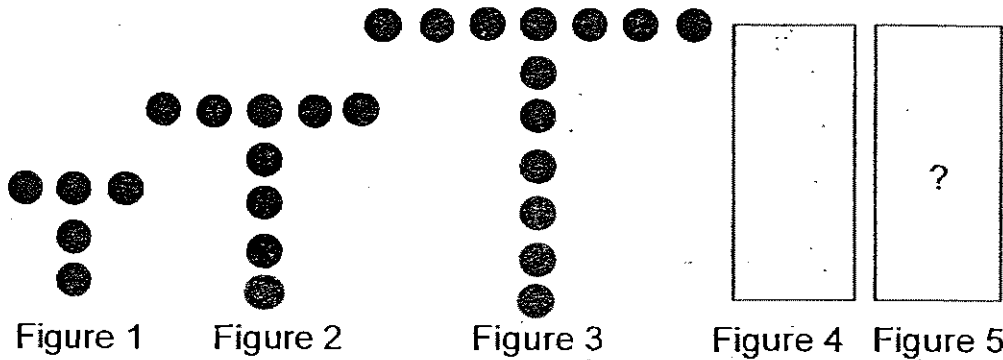
17. In a swimming competition, John was 3 m behind Peter.
 Kyle was 4 m ahead of John.
 Daryl was 2 m behind Kyle.
 How far apart was Daryl from John?

- (1) 1 m
- (2) 2 m
- (3) 3 m
- (4) 4 m

18. Alan had just enough money to buy 8 toy cars but he only bought 6 toy cars and had \$4 left.
 How much money did he have at first?

- (1) \$12
- (2) \$16
- (3) \$24
- (4) \$32

19. Study the figures below carefully.



How many counters are there in Figure 5?

- (1) 11
- (2) 14
- (3) 17
- (4) 21

20. Simon was a stamp collector.
In Week 1, he collected 6 stamps.
In Week 2, he collected 7 stamps.
In Week 3, he collected 9 stamps.
In Week 4, he collected 12 stamps.
Following the pattern above, how many stamps would he be able to collect from Week 5 to Week 8?
- (1) 16
 - (2) 34
 - (3) 64
 - (4) 98

Please turn over to the next page.

SECTION B: Open-ended Questions (20 x 2 marks)

Show your working clearly in the space provided and write the correct answers in the answer boxes provided.

21. Subtract 3468 from 6129. The answer is _____.

22. What is the product of 235 and 8?

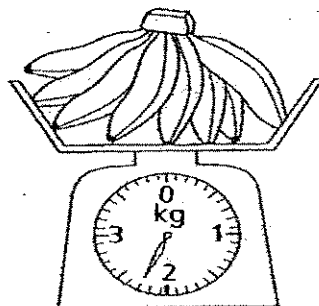
23. When 864 is divided by 8, the quotient is _____.

24. Kenny bought a toy aeroplane and gave the cashier \$50. How much change did he receive?




\$24.50

25. What is the mass of the bananas?



26. Find the sum of $\frac{3}{4}$ and $\frac{1}{8}$.

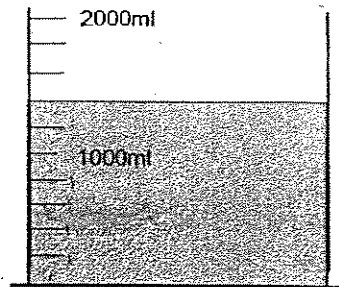
27. The bar graph below shows the amount of money earned in a month by 4 people.



(a) What is Andrew's salary?

(b) How much money do Alex and Peter earn?

28. What is the volume of water in the container?


 ml

29. Ming Shen has 295 stickers.
 He has 48 fewer stickers than Guo Hua
 Guo Hua has 73 fewer stickers than Tim.
 How many stickers does Tim have?

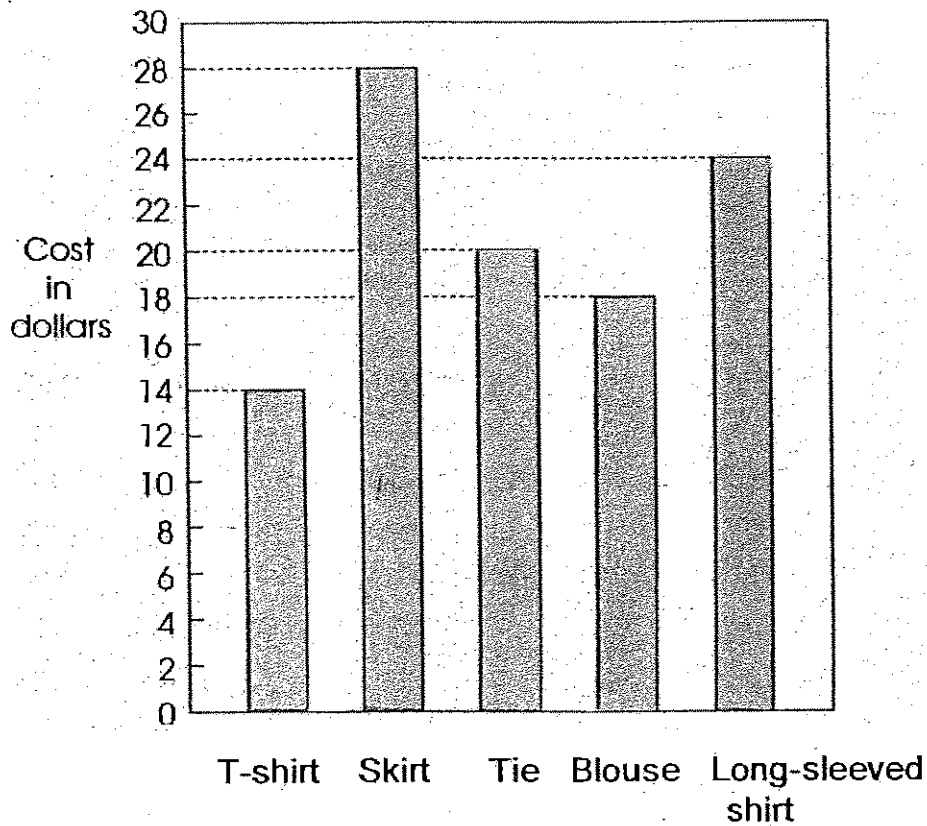
 stickers

30. Valerie spilled some ink on her assessment book.
 Each letter represents a different one-digit number.
 What is the value of "B"?

$$\begin{array}{r}
 \text{C} \quad 6 \quad \text{A} \\
 + \quad 1 \quad \text{B} \quad 9 \\
 \hline
 9 \quad 2 \quad 3 \\
 \hline
 \end{array}$$

31. There were 20 trees planted along a straight road. The distance between each tree and the next was equal for all the trees. The distance between the first tree and the third tree was 50 m. What was the distance between the first tree and the fifth tree ?

32. The bar graph below shows the cost of 5 items.



The total cost of the blouse, tie and the long-sleeved shirt is \$ _____ more than the cost of the skirt.

33. A car needs 260 ml of petrol to travel each kilometre.
If it travels 7 km, how many millilitres of petrol does it need in all?

34. Using any of the digits from 1 to 9 once, form the largest 4-digit odd number that has 8 as one of its digits.

35. Jane has a striped blouse and a spotted blouse.
She has white, red and pink skirts.
She can wear black or yellow shoes.
How many different outfit combinations can she make?

36. Jeremy gave 18 cookies to each of 4 friends and had 3 cookies left. How many cookies did he have at first?

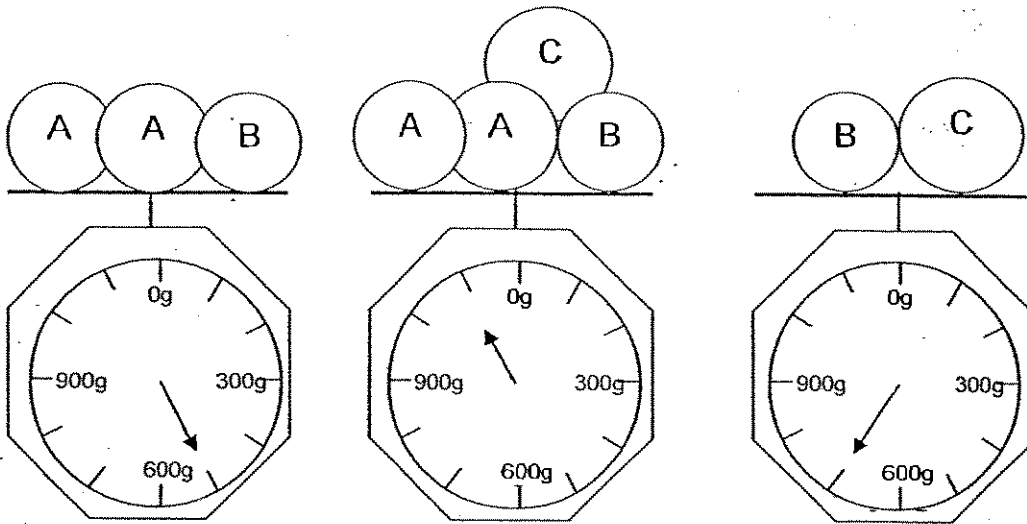
37. A shop sells 480 apples on Monday, 240 apples on Tuesday, 120 apples on Wednesday and so on. On which day did the shop sell 30 apples?

38. The table below shows a menu of a restaurant.

Menu	
Chicken Chop	\$17.50
Pork Chop	\$12.50
Fish and Chips	\$11.80
Potato Salad	\$6.90


Mr Tham and family ordered 3 different types of food from the menu. What was the largest amount of money he would have to pay?

39. Look at the pictures carefully. Find the mass of object B.



g

40. Study the pattern carefully. Find the missing number.



SECTION C: Story Sums (5 x 4 marks)

Solve the following story sums. All workings must be shown clearly.

Draw models if necessary.

41. Mrs Ng had 6 packets of biscuits. Each packet had 36 biscuits. The biscuits were shared equally among her 4 children. How many biscuits did each child receive?


42. The total cost of a fan and a table was \$324. The table cost \$80 more than the fan. What was the cost of 2 similar fans?

43. Adrian ran thrice as far as Benny.
Benny ran 240 m lesser than Danny.
Danny ran 360 m lesser than Adrian
How far did Benny run?
44. The mass of a box with 4 identical books is 780 g.
The same box with 2 identical books is 400 g.
What is the mass of each book?

45. Cathy and Daniel had an equal amount of money. After Cathy received ~~twice the amount of~~ money of what she had at first and Daniel spent \$8, Cathy had 4 times as much as Daniel. How much money did Daniel have at first?

END OF PAPER

☺ *Please check your work.* ☺



ANSWER SHEET

CATHOLIC HIGH PRIMARY SCHOOL - PRIMARY 3 MATHEMATICS 2007
CONTINUAL ASSESSMENT (2)

1. 3
2. 4
3. 1
4. 4
5. 3
6. 4
7. 4
8. 4
9. 1
10. 2
11. 1
12. 1
13. 2
14. 4
15. 2
16. 4
17. 2
18. 2
19. 4
20. 4
21. 2661
22. 1880
23. 108
24. \$25.50
25. 2kg 300g
26. 7/8
27. a) \$2000 b) \$3500
28. 1400ml
29. 416 stickers
30. 5

41) $36 \times 6 = 216$

$216 \div 4 = 54$

Each child receive 54 biscuits.

42) $\$324 - \$80 = \$244$

$\$244 \div 2 = \122

$\$122 \times 2 = \244

The cost of two similar fan is \$244.

43) 2unit $\rightarrow 360 + 240 = 600\text{m}$

Benny(1unit) $\rightarrow 600 \div 2 = 300$

Benny run 300m.

44) Wt. of two books $\rightarrow 780 - 400 = 380$

Mass of 1 book is $380 \div 2 = 190\text{g}$

Each book is 190g.

45) 1unit $\rightarrow 8 \times 3 = \24

Daniel had $\$24 + \$8 = \$32$ at first.



AI TONG SCHOOL

2007

SEMESTRAL ASSESSMENT 2

PRIMARY 3

MATHEMATICS

DURATION : 1 h 30 min

DATE : 25 OCTOBER 2007

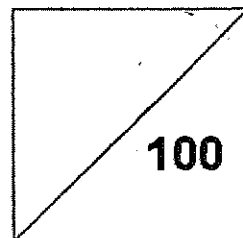
INSTRUCTIONS

Do not open the booklet until you are told to do so.
Follow all instructions.
Answer all questions.

Name : _____ ()

Class : Primary 3 _____

Marks:



Parent's Signature : _____

Date : _____

SECTION A**Question 1 to 20 carry 2 marks each.**

For each question, four options are given. One of them is the correct answer.

Make your choice (1, 2, 3 or 4). Shade the oval (1, 2, 3 or 4) on the Optical

Answer Sheet.

(40 marks)

1 Form the smallest four-digit even number with 5, 3, 0 and 8.

- 1) 3058
- 2) 3085
- 3) 3580
- 4) 3850

2 What is 100 more than 4948?

- 1) 4848
- 2) 4958
- 3) 5048
- 4) 5948

3 What is 10 less than 10×8 ?

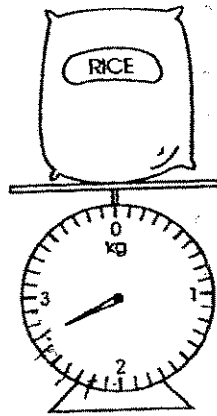
- 1) 8
- 2) 70
- 3) 80
- 4) 90

4 What is the quotient of $76 \div 6$?

- 1) 12
- 2) 2
- 3) 6
- 4) 4

- 5 What is the total value of 3 two-dollar notes and 5 ten-cent coins?
- 1) \$2.05
 - 2) \$2.50
 - 3) \$3.05
 - 4) \$6.50
- 6 Tammy ran 2346 km. Timmy ran 1458 km further than Tammy. How far did Timmy run?
- 1) 888 km
 - 2) 1458 km
 - 3) 2346 km
 - 4) 3804 km
- 7 What is 6 cm shorter than 708 cm?
- 1) 108 cm
 - 2) 702 cm
 - 3) 714 cm
 - 4) 1308 cm
- 8 Jim bought 36 kg of lychees. He packed them equally into 9 baskets. He sold 6 baskets of the lychees. Find the mass of lychees sold.
- 1) 36 kg
 - 2) 24 kg
 - 3) 6 kg
 - 4) 4 kg
- 9 Clare bought 6 l of orange juice. She drank 2 l 68 ml. How much orange juice had she left?
- 1) 3932 ml
 - 2) 4042 ml
 - 3) 4068 ml
 - 4) 8068 ml

10 How heavy is the bag of rice?



- 1) 2 kg 700 g
- 2) 2 kg
- 3) 3 kg
- 4) 2 kg 350 g

11 If ☺☺☺ stand for \$45,


then ☺☺☺☺☺ stand for \$ _____.

- 1) \$15
- 2) \$45
- 3) \$75
- 4) \$90

12 Dawn cuts a pizza into 6 equal slices. She gives 2 slices to her brother and eats the rest. What fraction of the pizza does she eat?

- 1) $\frac{2}{6}$
- 2) $\frac{3}{6}$
- 3) $\frac{4}{6}$
- 4) $\frac{5}{6}$

13 What fraction of this figure is shaded



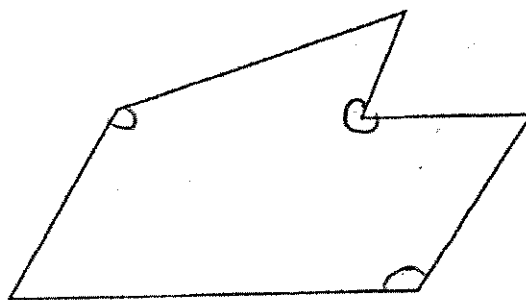
1) $\frac{3}{8}$

2) $\frac{3}{5}$

3) $\frac{5}{8}$

4) $\frac{3}{4}$

14 How many angles inside this figure are bigger than a right angle?



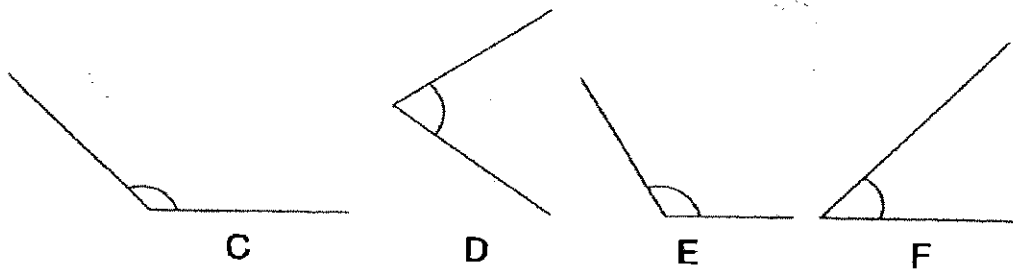
1) 1

2) 7

3) 3

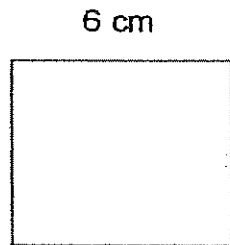
4) 4

- 15 Arrange the angles from the smallest to the biggest.



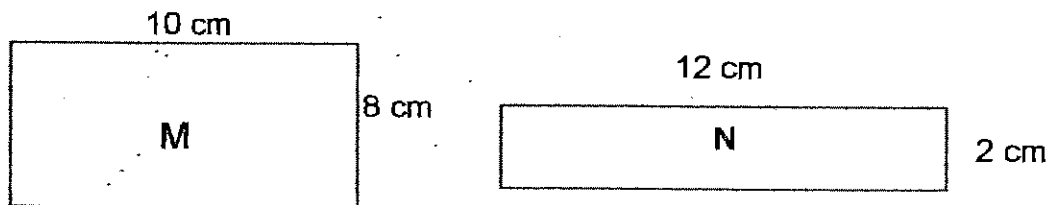
- 1) C, D, E and F
 - 2) F, E, D and C
 - 3) F, D, E and C
 - 4) C, E, D and F
- 16 Mrs Loo reached the supermarket at 8 a.m. She took 1 h 40 min to buy her groceries. What time did she leave the supermarket?
- 1) 7.40 a.m.
 - 2) 8.40 a.m.
 - 3) 9.00 a.m.
 - 4) 9.40 a.m.
- 17 What is 175 min in hours and minutes?
- 1) 1 h 15 min
 - 2) 1 h 75 min
 - 3) 2 h 25 min
 - 4) 2 h 55 min

18 The area of the square below is _____ cm^2 .




- 1) 6
- 2) 12
- 3) 24
- 4) 36

19 What is the difference between the areas of Rectangles M and N?



- 1) 8 cm^2
- 2) 4 cm^2
- 3) 56 cm^2
- 4) 104 cm^2

20 Which of the following pairs of lines are parallel?



25 If $\star \times \hexagon = 18$ and
 $\star - \hexagon = 7$, what is \hexagon ?

Ans: _____

26 Mrs Fields makes 326 muffins each day.
How many muffins does she make in one week?


Ans: _____

27 A watch costs 5 times as much as a necklace. If the necklace costs \$145, find the cost of 4 similar watches.

Ans: \$ _____

28 How many 20 cents coins can I exchange with \$6?

Ans: _____



29 What is $8 \text{ kg } 60 \text{ g} - 2 \text{ kg } 385 \text{ g}$?

Ans: _____ kg _____ g

30 $560 \text{ cm} + 755 \text{ cm} =$ _____.

Express your answer in m and cm.

Ans: _____ m _____ cm

31 John is 12 cm shorter than Sam.


Roy is 25 cm taller than Sam.

Find the difference in height between Roy and John.

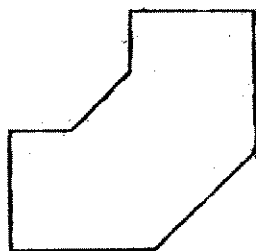
Ans: _____ cm

32 A glass has a capacity of 30 ml. How many such glasses are needed to fill a 1 l container?

Ans: _____



33



How many sides and angles are there in the above shape?

Ans: _____ sides _____ angles

34 Find the sum of the smallest and greatest fractions.


$$\frac{1}{6} \quad \frac{1}{2} \quad \frac{2}{3}$$

Ans: _____

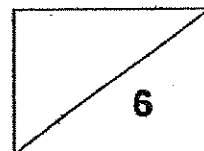
35 The figure below is not drawn to scale.

What is the fraction of the unshaded part of the square shown below.

(Leave your answer in the simplest form)



Ans: _____



36 If the perimeter of a square is 40 m, what is the area of the square?

Ans: _____ m²

37 The length of a rectangle is twice its breadth. If its perimeter is 60 cm, find its length.

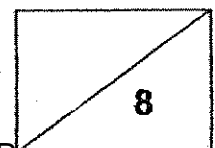
Ans: _____ cm

38 How many minutes is 2 h 25 min?

Ans: _____ min

39 A coffee shop opens at 6.30 a.m.
It opens 16 h 30 min each day.
At what time does the coffee shop close?

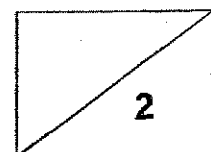
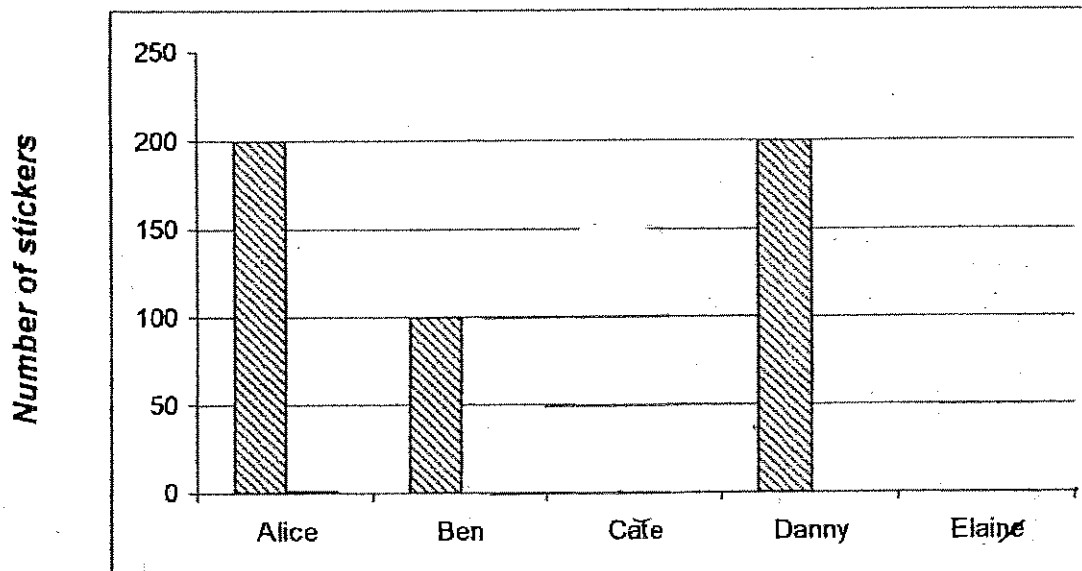
Ans: _____ p.m.



- 40 The graph shows the number of stickers collected by a group of children.
 With the given information, complete the graph by drawing the bars for Cate and Elaine.

Name	Number of stickers collected
Alice	200
Ben	100
Cate	50 stickers more than Ben
Danny	200
Elaine	150 stickers less than Alice

Number of stickers collected by a group of children



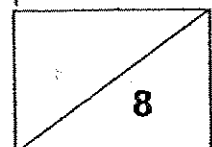
SECTION C**Questions 41 to 45 carry 4 marks each.**

Show your working clearly in the space provided for each question .

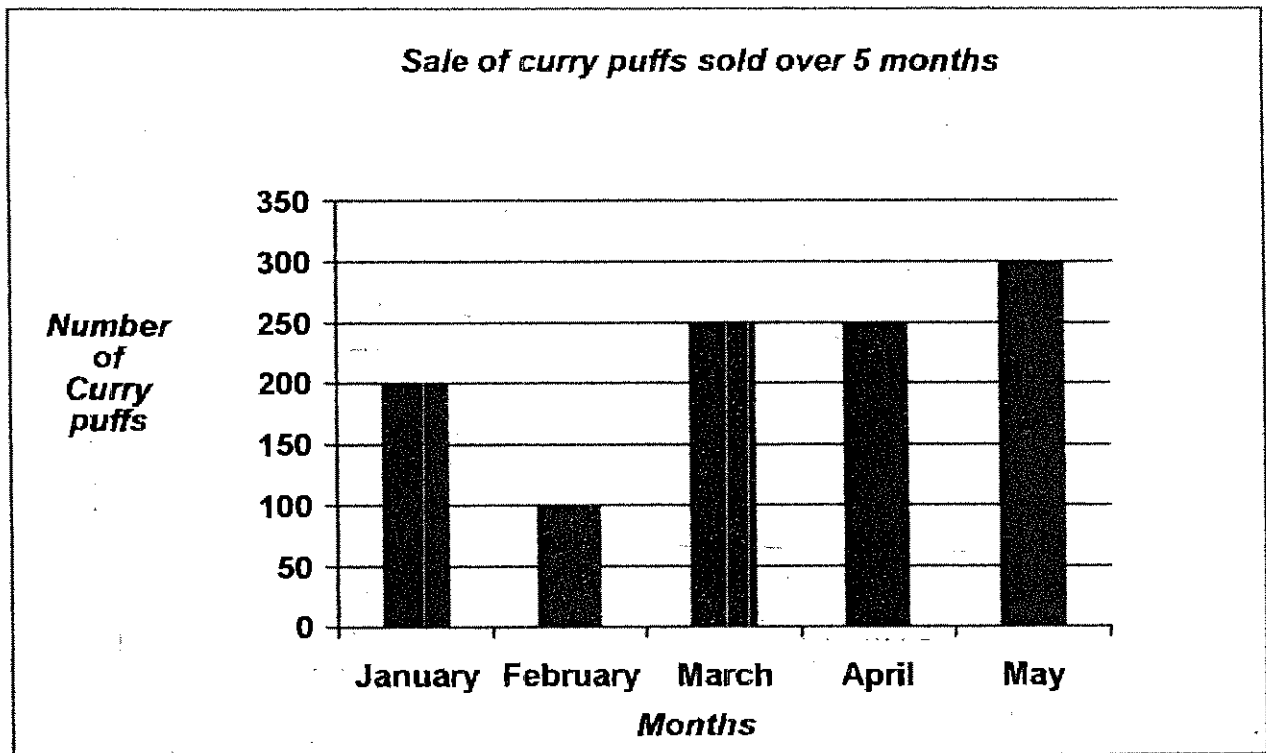
(20 marks)

- 41 May has \$8 less than Amy and \$16 less than Cindy.
They have a total of \$45. How much does May have?

- 42 Mrs Cheng had some erasers and she bought 10 more. She then gave her 2 daughters 3 erasers each. She had 8 erasers left for herself. How many erasers did she have at first?

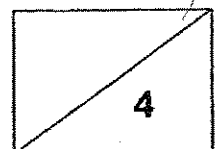


- 43 The graph shows the number of curry puffs sold by Ahmad in 5 months. Study the picture carefully and answer questions 43a and 43b..

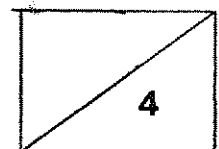
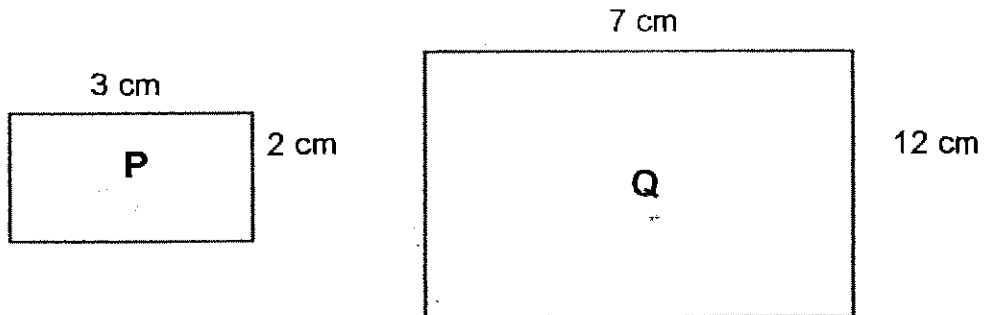


- 43a Which month has 3 times as much sale as February?
(Show your working clearly)

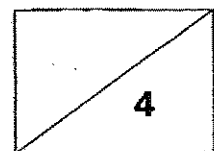
- 43b If each curry puff is sold at \$2 each, how much will Ahmad collect from the sales of the curry puffs over the 5 months?



- 44 The figures below are not drawn to scale. Find how many times the area of Rectangle Q is as big as the area of Rectangle P.




45 Mei spent $\frac{1}{2}$ of her money on a bag and $\frac{1}{4}$ of the remaining money on books. She had \$30 left. How much money did she have at first?



~ End of paper~

~ Check your work carefully ~

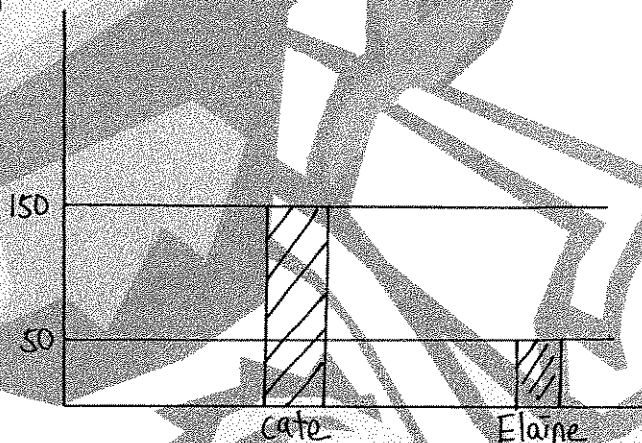


ANSWER SHEET

AI TONG PRIMARY SCHOOL - PRIMARY 3 MATHEMATICS 2007
SEMESTRAL ASSESSMENT (2)

1. 1
2. 3
3. 2
4. 1
5. 4
6. 4
7. 2
8. 2
9. 1
10. 1
11. 3
12. 3
13. 4
14. 3
15. 3
16. 4
17. 4
18. 4
19. 3
20. 2
21. 3400
22. 26
23. 2012
24. 90
25. 2
26. 2282 muffins
27. \$2900
28. 30 twenty cents coins
29. 5kg 675g
30. 13m 15cm

- 31) 37cm
- 32) 34 glasses
- 33) 8 sides 8 angles
- 34) $\frac{5}{6}$
- 35) $\frac{1}{2}$
- 36) 100m²
- 37) 20cm
- 38) 145min
- 39) 11p.m.
- 40)



41) $\$16 + \$8 = \$24$
 $\$45 - \$24 = \$21$
 $\$21 \div 3 = \7
May have \$7

42) $2 \times 3 = 6$ erasers
 $6 + 8 = 14$ erasers
 $14 - 10 = 4$ erasers
She had 4 erasers at first.

43) a) $100 \times 3 = 300$ curry puffs
= May
It is May.
b) $200 + 100 + 250 + 250 + 300 = 1100$ curry puffs
 $1100 \times \$2 = \2200
He will collect \$2200

44) $12 \text{ cm} \times 7 \text{ cm} = 84 \text{ cm}^2$
 $3 \text{ cm} \times 2 \text{ cm} = 6 \text{ cm}^2$
 $84 \text{ cm}^2 \div 6 \text{ cm}^2 = 14 \text{ cm}^2$
It is 14 cm^2 times more.

45) $3u \rightarrow \$30$
 $1u \rightarrow \$30 \div 3 = \10
 $8u \rightarrow \$10 \times 8 = \80
She had \$80 at first.



Maha Bodhi School
2007 Semestral Assessment 2
Mathematics

Name : _____ ()

Date : 29 October 2007

Class : Pr 3 _____

Duration : 1 h 45 min

BOOKLET A

Section A (40 marks)

Questions 1 to 20 carry 2 marks each.

For each question, four options are given. One of them is the correct answer.

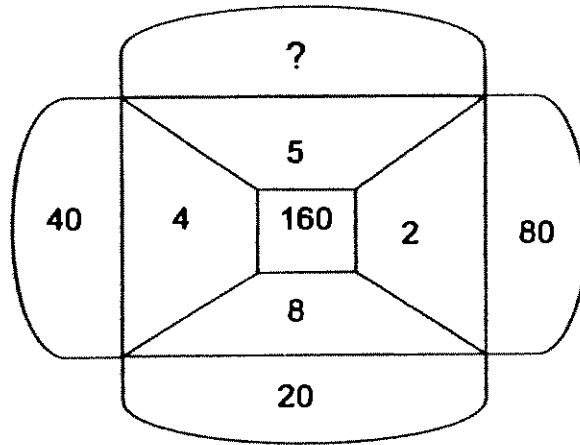
Make your choice (1, 2, 3 or 4). Shade the oval (1, 2, 3 or 4) on the Optical Answer Sheet.

1. The value of digit '9' in 9057 is _____.
 - (1) 9 x 1
 - (2) 9 x 10
 - (3) 9 x 100
 - (4) 9 x 1000

2. How many 5's are there in 10 tens ?
 - (1) 20
 - (2) 105
 - (3) 200
 - (4) 500

3. The difference between two numbers is 65.
If the bigger number is 4055 , what is the smaller number ?
 - (1) 3990
 - (2) 4120
 - (3) 4185
 - (4) 4990

4.



What is the missing number ?

- (1) 32
- (2) 40
- (3) 60
- (4) 165

5. The quotient of $1813 \div 9$ is _____.

- (1) 225
- (2) 201
- (3) 21
- (4) 4

6.

$$\begin{aligned} \blacklozenge + \blacklozenge + \blacklozenge &= 138 \\ \clubsuit + \clubsuit + \clubsuit + \clubsuit + \clubsuit &= 25 \end{aligned}$$

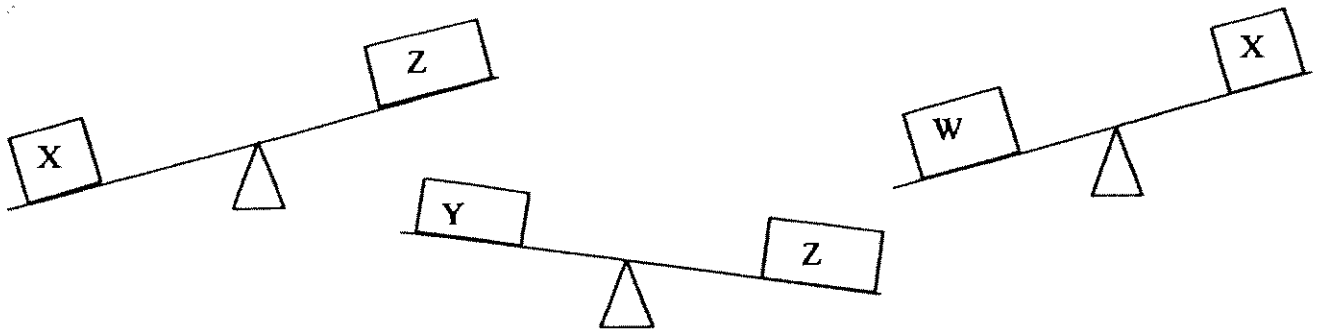
Study the information above.

What is the product of \blacklozenge and \clubsuit ?

- (1) 113
- (2) 163
- (3) 230
- (4) 690

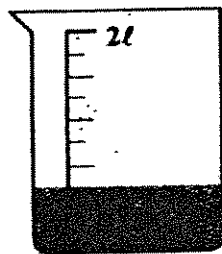
7. Which one of the following has the greatest value ?
- (1) 385 cents
 - (2) 20 fifty-cent coins
 - (3) 60 ten-cent coins
 - (4) 40 twenty-cent coins
8. The total cost of 9 similar bags is \$549.
How much does 4 such bags cost ?
- (1) \$61
 - (2) \$244
 - (3) \$536
 - (4) \$2196
9. The height of the classroom's cupboard is about _____.
- (1) 16 m
 - (2) 16 cm
 - (3) 160 m
 - (4) 160 cm
10. The length of rope A is 2 m 27 cm. It is 37 cm longer than rope B.
What is the total length of both ropes ?
- (1) 1 m 90 cm
 - (2) 2 m 64 cm
 - (3) 4 m 17 cm
 - (4) 4 m 91 cm
11. A packet of green tea has a mass of 250 g.
How many such packets would have a mass of 4 kg ?
- (1) 8
 - (2) 12
 - (3) 14
 - (4) 16

12. Arrange the blocks from the lightest to the heaviest .



- (1) W, X, Z, Y
- (2) X, W, Y, Z
- (3) Y, W, Z, X
- (4) Y, Z, X, W

13. How much more water is needed to fill up to the 2l mark ?



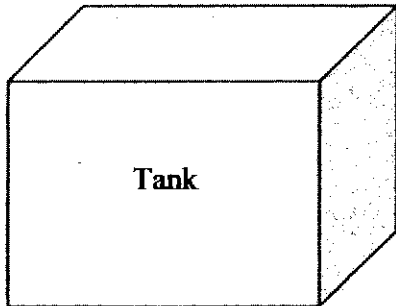
- (1) 300 ml
- (2) 600 ml
- (3) 1400 ml
- (4) 1700 ml

14. What is the missing numerator ?

$$\frac{6}{9} = \frac{\square}{12} = \frac{16}{24}$$

- (1) 10
- (2) 9
- (3) 8
- (4) 4

15. Donavan needs 24 jugs of water to fill up the tank.
How many pails of water does he need to fill up the same tank ?



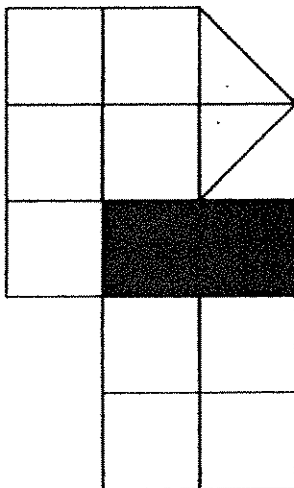
4- litre pail



2-litre Jug

- (1) 6
- (2) 12
- (3) 48
- (4) 60

16. What fraction of the figure below is shaded ?



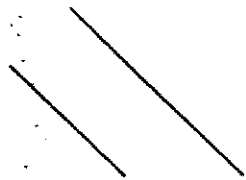
- (1) $\frac{1}{3}$
- (2) $\frac{1}{4}$
- (3) $\frac{1}{5}$
- (4) $\frac{1}{6}$

17. Mr Muthu took half an hour to vacuum the inside of his car.
Then he took 195 minutes to wash and polish his car.
How much time did Mr Muthu spend on his car ?


- (1) 3 h 5 min
- (2) 2 h 5 min
- (3) 3 h 45 min
- (4) 2 h 45 min

18. Which one of the following pairs are parallel lines ?

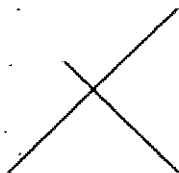
(1)



(2)



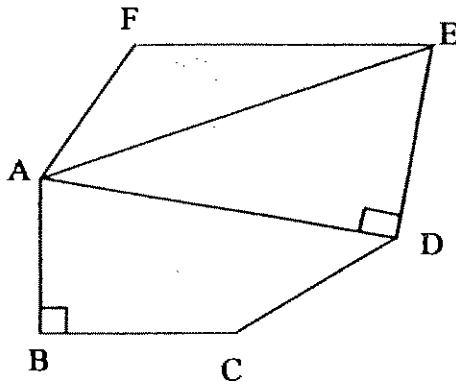
(3)



(4)



19. Which line is \perp to AD ?



- (1) AE
- (2) ED
- (3) AB
- (4) EF

20. Janice had $\frac{1}{3}$ kg of sugar and some flour.

She used all of the flour and only $\frac{1}{12}$ kg of sugar to bake some cookies.

How much sugar was left ?

- (1) $\frac{1}{4}$ kg
- (2) $\frac{3}{4}$ kg
- (3) $\frac{5}{12}$ kg
- (4) $\frac{7}{12}$ kg



Name : _____ ()

Class : Pr 3 _____

Duration : 1 h 45 min

Date : 29 October 2007

Parent's Signature : _____

Section A (40 marks)	
Section B (40 marks)	
Section C (20 marks)	
Total (100 marks)	

BOOKLET B**Section B (40 marks)**

Questions 21 to 40 carry 2 marks each.

Write your answers in the boxes provided. Give your answers in the units stated.

Show your working in the space provided. Marks will be awarded for correct method shown.

21. What is ten thousand, one hundred and eleven in numerals?

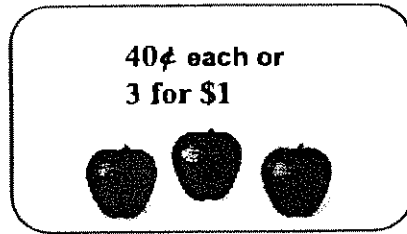
22. $364 \text{ tens} - \square = 1426$

What is the number in the box ?

23. $976 + 8 = \square + 3$

What is the number in the box ?

24.




Rosie wants to buy 15 apples.

What is the least amount of money that she could have spent on the apples?

\$


25. How many two-dollar note can the amount below be changed to ?



26. The total cost of a T-shirt and a pair of pants is \$54.90.
The pair of pants costs \$6.10 more than the T-shirt.
What is the cost of the T-shirt?

\$

27. After buying 8 kg of prawns, Mrs Lim had \$64 left.
How much money did she have at first ?



\$


28. 3 l 60 ml – 1 l 970 ml = _____ ml .

ml

29. What is the missing denominator in the box?

$$\frac{2}{7} = \frac{6}{\square}$$

30. How many more square units must be shaded to show $\frac{3}{4}$ of the figure ?



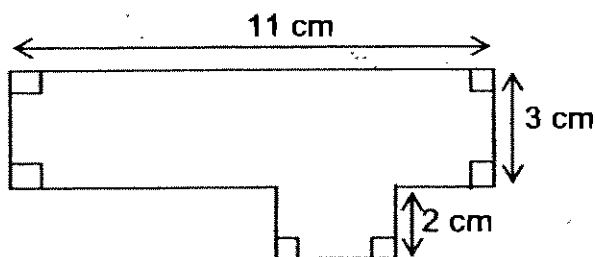
Squares

31. Give a fraction (in the simplest form) that is greater than $\frac{1}{2}$ but less than $\frac{7}{8}$.

32. Rachael took 35 minutes to travel to school by bus.
If she reached her school at 7.10 a.m., what time did she start her journey by bus?

33. A kettle can hold 4 times as much water as a teapot. If the kettle has a capacity of 2 l, how much **more** water can the kettle hold than the teapot?

34. Find the perimeter of the figure shown?



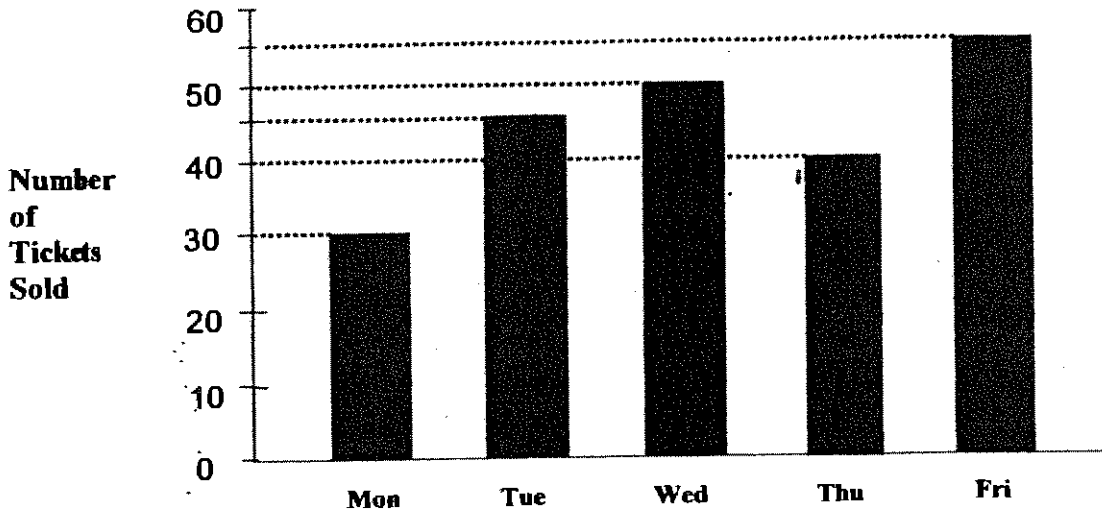
35. The perimeter of a rectangle is 24 cm .
If the breadth of the rectangle is 4 cm, what is its area ?

cm²

36. Jazer took 3 h 15 min to complete a jigsaw puzzle while
Edward took only 1 h 48 min to complete the same jigsaw puzzle .
How much longer did Jazer take ?

h min

The bar graph below shows the number of tickets sold at a ~~fanfare~~ from Monday to Friday.
 Study the graph and answer Questions 37 and 38.



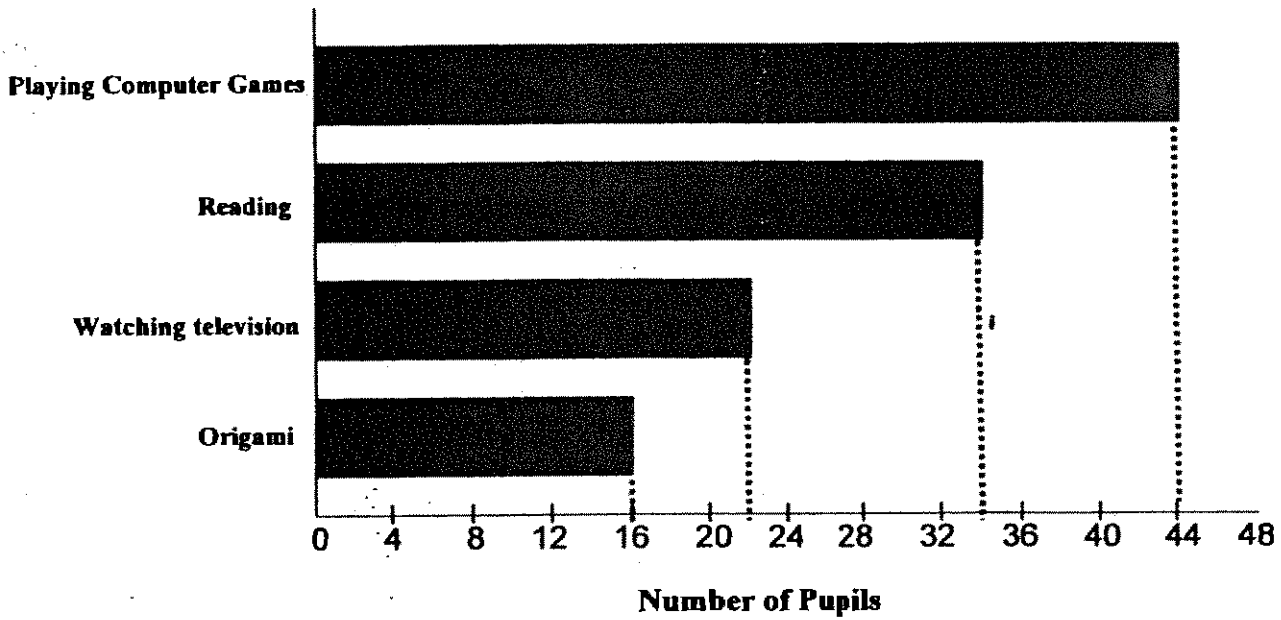
37. How many more tickets were sold on Friday than on Monday ?

more tickets

38. Find the total number of tickets sold for the five days .

tickets

The table and bar graph below shows the favourite hobbies by a group of pupils .
Study the graph and answer Questions 39 and 40 .



39. How many pupils like reading as their favourite hobby ?

40. Which activity has twice less than the number of pupils playing computer games ?

Section C (20 marks)

Questions 41 to 45 carry 4 marks each.

Show your working clearly in the space below each question.

Write a statement for each step.

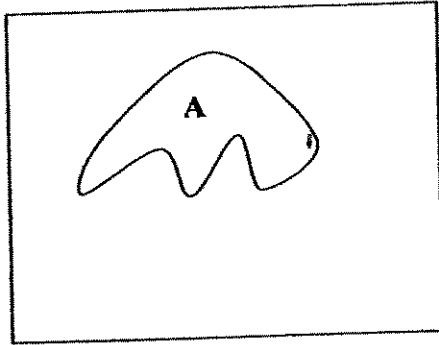
41. A group of 8 girls shared some beads. After they had taken 179 beads each, there were 6 beads left. How many beads were there at first?

42. Janelle paid \$13.50 for 2 flasks and 3 glasses. Each flask cost three times as much as each glass. How much did he pay for the glasses altogether?


43. Mrs Bala made 1200 ml of lemonade. She drank 250 ml of it and poured the rest equally into 5 glasses. How much lemonade was there in each glass ?

44. Uncle Donald's farm had 39 cows and some ducks. Altogether they had 198 legs. How many ducks were there in the farm ?

45. Area A is $\frac{1}{4}$ of the area of the square .
Find the perimeter of the square if area A is 36 cm^2 .



***Remember to check your work!
Every mark counts.***



ANSWER SHEET

MAHA BODHI PRIMARY SCHOOL - PRIMARY 3 MATHEMATICS 2007
SEMESTRAL ASSESSMENT (2)

1. 4
2. 1
3. 1
4. 1
5. 2
6. 3
7. 2
8. 2
9. 4
10. 3
11. 4
12. 4
13. 3
14. 3
15. 2
16. 4
17. 3
18. 1
19. 2
20. 1
21. 10111
22. 2214
23. 366
24. \$5
25. 11
26. \$24.40
27. \$200
28. 1090ml
29. 21
30. 7 Squares
- 31) $5/8$
32) 6.35 a.m.
33) 1500ml
34) 32cm
35) 32cm^2
36) 1h 27min
37) 25 more tickets
38) 220 tickets
39) 24 pupils
40) Watching television
41) $179 \times 8 = 1432$
Altogether they have 1432 beads
 $1432 + 6 = 1438$
There were 1438 beads at first
42) 3 glasses + 2 flasks =
 $\$13.50 \div 9 = \1.50
1 glass cost \$1.50
 $\$1.50 \times 3 = \4.50
The 3 glasses cost \$4.50
43) $1200\text{ml} - 250\text{ml} = 950\text{ml}$
There were 950 of lemonade left
after Mrs Bala drank poured
 $950\text{ml} \div 5 = 190\text{ml}$
44) $39 \times 4 = 156$
The cows has 156 legs altogether
 $198 - 156 = 42$
The ducks has 42 legs altogether
 $42 \div 2 = 21$

45) Area of square $\rightarrow 36 \times 4 = 144 \text{cm}$

$$144 \div 12 = 12$$

Length of square is 12cm

Perimeter of square $\Rightarrow \rightarrow 12 \text{cm} \times 4 = 48 \text{cm}$

The perimeter of the square is 48cm

Methodist Girls' School (Primary)

Primary 3

End-of-Year Examination (2007)

Mathematics

Name: _____ ()

Class: Pr 3 _____

Marks: _

Section A (20 x 2 marks)

For each of the following questions, choose the correct answer and write its number in the brackets provided.

1. $3\ 642 = 3\ 000 + 600 + 4 \times \square + 2$.
What is the missing number in the box?
- (1) 1
(2) 10
(3) 100
(4) 1 000 ()

2. $\heartsuit + \heartsuit + \star + \star + \star = 185$.
If each \heartsuit stands for 40, what is the value of each \star ?
- (1) 35
(2) 37
(3) 80
(4) 105 ()

3. There were 1 200 concert tickets. Mrs Tan sold 345 tickets on Monday. She sold 60 more tickets on Tuesday than on Monday. How many tickets were left?
- (1) 405
(2) 450
(3) 750
(4) 795 ()

4. Which of the following will complete the sequence ?
1, 3, 9, 27, _____
- (1) 45
(2) 54
(3) 72
(4) 81 ()

5. What is the sum of \$1.65, \$4.50 and 45 cents?

- (1) \$5.55
- (2) \$5.60
- (3) \$6.55
- (4) \$6.60

()

6. Which one of the following is the shortest?

- (1) 140 cm
- (2) 1 004 cm
- (3) 1 m 4 cm
- (4) 10 m 4 cm

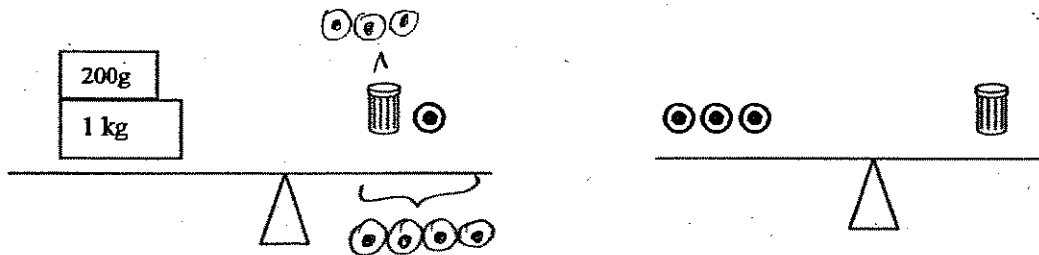
()

7. Ali used 70 cm of ribbon to tie a parcel. What would be the length of ribbon needed to tie 8 such parcels?

- (1) 56 cm
- (2) 56 m
- (3) 5 m 6 cm
- (4) 5 m 60 cm

()

8. Look at the figures below. What is the mass of one \odot ?



- (1) 120 g
- (2) 300 g
- (3) 400 g
- (4) 1 200 g

()

9. Express 8 080 g in kg and g.

- (1) 8 kg 8 g
- (2) 8 kg 80 g
- (3) 80 kg 8 g
- (4) 80 kg 80 g

()

10. A jug of coffee is able to fill 4 cups. If 400 ml of coffee can fill 5 such cups, how much coffee can the jug hold?

- (1) 80 ml
- (2) 100 ml
- (3) 320 ml
- (4) 1600 ml

()

11. Express 2 h 35 min in minutes.

- (1) 95 min
- (2) 125 min
- (3) 155 min
- (4) 235 min

()

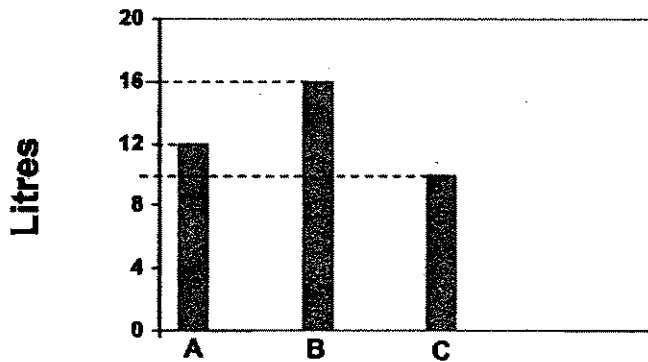
12. Lisa started working on her project at 2.45 p.m. She finished it at 5.05 p.m. How long did she take to complete her project?

- (1) 2 h 20 min
- (2) 2 h 30 min
- (3) 3 h 40 min
- (4) 3 h 50 min

()

Study the graph below and answer questions 13 and 14.

The graph below shows the amount of water in 3 containers.



13. What is the total amount of water in containers A and B?

- (1) 22 l
- (2) 26 l
- (3) 28 l
- (4) 30 l

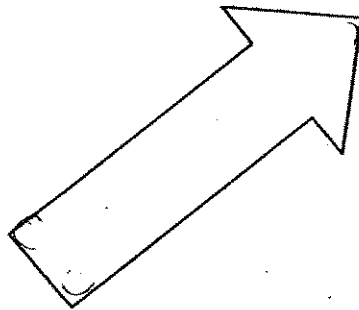
()

14. How much water should be poured from container B into container C so that both containers would have the same amount of water?

- (1) 13 l
- (2) 2 l
- (3) 3 l
- (4) 26 l

()

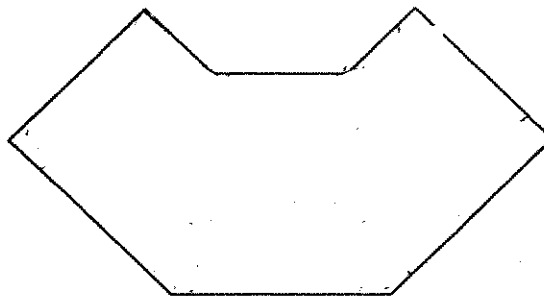
15. How many right angles are there inside the figure below?



- (1) 1
- (2) 2
- (3) 3
- (4) 4

()

16. How many angles are there inside the figure below?



- (1) 10
- (2) 8
- (3) 6
- (4) 4

()

17. Which one of the following figures shows that $\frac{1}{3}$ of it is shaded?

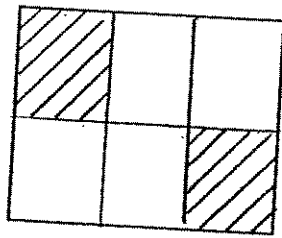


Figure 1

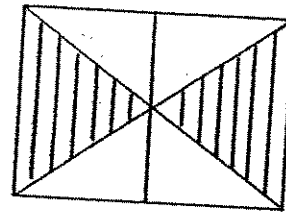


Figure 2

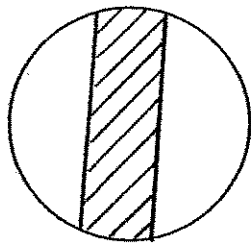


Figure 3

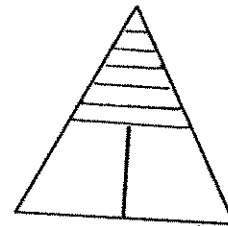


Figure 4

- (1) Figure 1
- (2) Figure 2
- (3) Figure 3
- (4) Figure 4

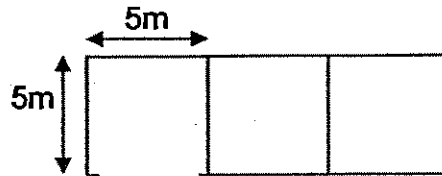
()

18. Which one of following is the equivalent of $\frac{3}{4}$?

- (1) $\frac{4}{8}$
- (2) $\frac{8}{12}$
- (3) $\frac{13}{16}$
- (4) $\frac{15}{20}$

()

19. The figure below is made up of three 5m-square. What is the area of the figure?



- (1) 25 m²
(2) 40 m²
(3) 50 m²
(4) 75 m² ()

20. The perimeter of the rectangle below is 90cm. The length of the rectangle is twice as long as its breadth. What is the breadth of the rectangle?



- (1) 15 cm
(2) 22 cm
(3) 30 cm
(4) 45 cm ()

Section B (20 x 2marks)

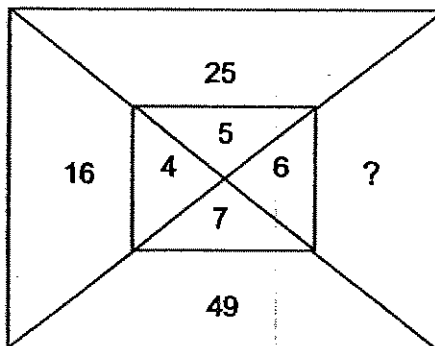
For each of the following questions, write your answers in the boxes provided. Give your answers in the units stated. Show your working clearly.

21. $13 + 14 + 25 + 26 = \square \times 3$
 What is the missing number in the box?

22. Gopal bought 18 bags of rice. Each bag of rice weighed 5 kg. He then repacked them into bags of 2 kg each. How many bags would he have?

23. Betty and her sister had 36 marbles altogether. Both of them had the same number of marbles after Betty had given her sister 8 marbles. How many marbles did Betty's sister have at first?

24. What is the missing number?




25. Jenny has 2 ten-dollar notes, some \$5 notes and some \$2 notes. She has \$50, how many \$5 notes and \$2 notes has Jenny?

_____	\$5-notes and
_____	\$2-notes

26. May has \$5. She wants to buy a book which costs \$6.40. If she saves 50 cents each week, how long will it take her to save enough money to buy the book?

_____	weeks
-------	-------

Look at the diagram below and answer question 27.

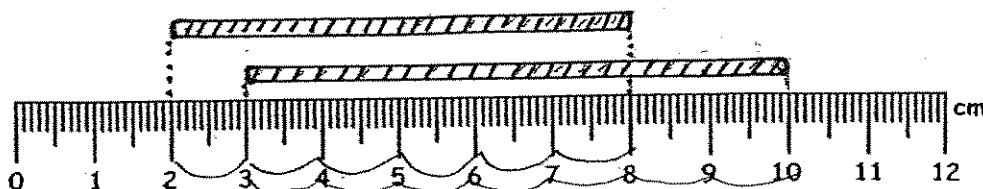


27. Ali cycled to the bus interchange from his house and then to the library. What was the distance he had cycled?

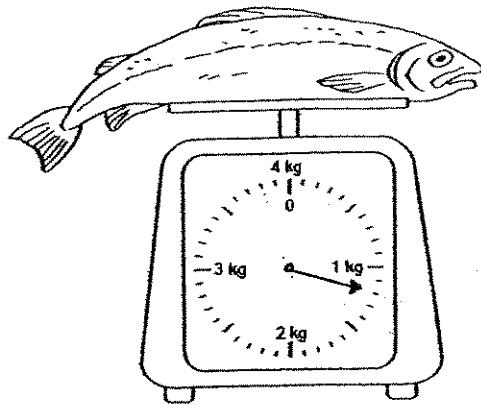
_____	m
-------	---

28. Look at the figure below. What is the total length of the 2 rods?





_____	cm
-------	----



29. Look at the weighing scale below. What is the mass of the fish?



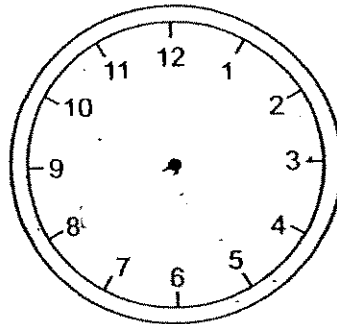
30. The capacity of a pail is 3 l. It has 1 l 200 ml of water in it. How much more water is needed to fill it to its brim?

31. If    represent 27 dogs, how many  must Samy draw if he wants to represent 54 dogs?


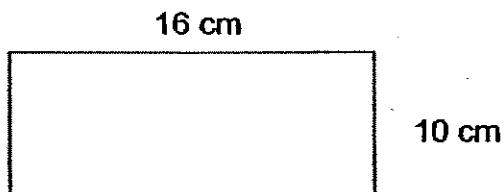
32. The musical 'Three Little Pigs' ended at 9.30 p.m. The show was 1 hour 45 minutes long. At what time did the show begin?



33. The time is 20 minutes to 7. Draw the hands of the clock to show the time.



34. What is the most number of 4-cm squares that can be cut from the rectangle below?




35. Arrange the following fractions beginning with the greatest.

$$\frac{4}{8}, \frac{4}{6}, \frac{4}{7}$$

36. Mrs Tan cut her cake into 15 equal pieces. At the end of the party, 3 pieces of cake were left. What fraction of the cake was left? (Give your answer in the simplest form)

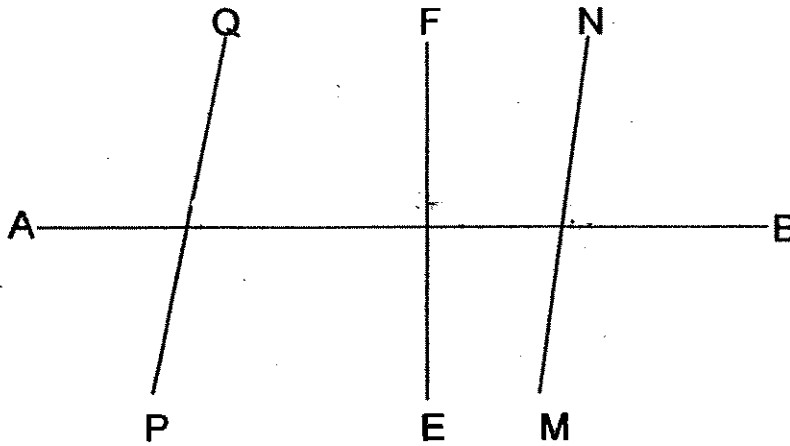
37. The cake below was cut into 12 equal slices. Ahmad ate $\frac{2}{3}$ of the cake. Shade to show the number of slices eaten by Ahmad.



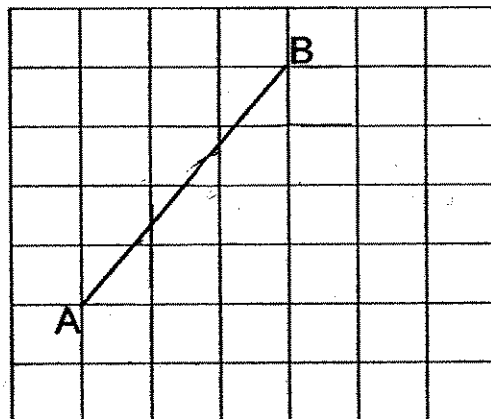
38. The area of a rectangular field is 126 m². If the breadth of the field is 7 m, what is the length of the field?

m

39. Look at the figure below and name the pair of perpendicular lines.



40. In the grid below, draw a line CD parallel to line AB.



Section C (5 x 4 marks)


Solve the following problems. Show all your workings clearly,

41. Mr Lim had \$1 000. He bought a sofa set for \$399 and a television for \$240. How much would he have left?

42. 210 children were grouped equally into 3 teams. There were 4 times as many girls as boys in each team.
a) How many children were there in each team?
b) How many boys were there in each team?


43. Mrs Raju had 1 m of cloth. She used $\frac{1}{2}$ m to make a pillow case and $\frac{3}{10}$ m to make a dress for her daughter's Barbie doll. What was the length of the cloth left? Give your answer in its simplest form.

44. The figure below is made up of 3 similar rectangles.
a) What is the total shaded area?
b) What is the perimeter of the shaded figure?



45. At 2.30 p.m., Ali and his brother, Ahmad began working on their jig-saw puzzles. Ali took 1 h 45 min to complete his puzzle while his brother took 100 minutes.
- a) Who completed his puzzle first?
 - b) What was the difference in the time taken?
 - c) At what time did Ali complete his puzzle?

End of Paper

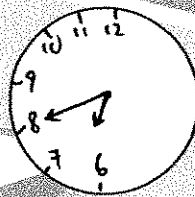


ANSWER SHEET

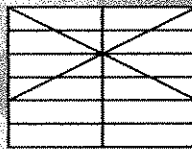
M G S PRIMARY SCHOOL - PRIMARY 3 MATHEMATICS 2007
SEMESTRAL ASSESSMENT (2)

1. 2
2. 1
3. 2
4. 4
5. 4
6. 3
7. 4
8. 2
9. 2
10. 3
11. 3
12. 1
13. 3
14. 3
15. 3
16. 2
17. 1
18. 4
19. 4
20. 1
21. 26
22. 45bags
23. 10 marbles
24. 36
25. 4, 5
26. 3
27. 1890m
28. 13cm
29. 1kg 200g
30. 1800ml

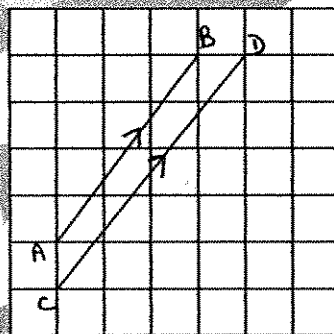
- 31) 6
- 32) 7.45pm
- 33)



- 34) 84cm squares
- 35) $\frac{4}{6}, \frac{4}{7}, \frac{4}{8}$
- 36) $\frac{1}{5}$
- 37)



- 38) 18m
- 39) $FE \perp AB$
- 40)



41) $\$240 + \$399 = \$639$

The television and sofa was \$639

$\$1000 - \$639 = \$361$

Mr Lim would have \$361 left.

42) a) $210 \div 3 = 70$

There were 70 children in each team.

b) G

B

$70 \div 5 = 14$

There were 14 boys in each team.

43) $1 - \frac{5}{10} - \frac{3}{10} = \frac{2}{10}$

$\frac{2}{10} = \frac{1}{5}$

The length of cloth was left was $\frac{1}{5}$ m

44) a) $8\text{m} \times 3\text{m} = 24\text{m}^2$

The total area the shaded part in 24m^2

b) $4\text{m} + 5\text{m} + 4\text{m} + 4\text{m} + 4\text{m} + 5\text{m} = 26\text{m}$

The perimeter of the shaded part is 26m

45) a) $100\text{min} = 1\text{h } 40\text{min}$

Ahmad completed the puzzle first

b) $1\text{h } 45\text{min} - 1\text{h } 40\text{min} = 5\text{min}$

The difference in the time taken is 5min



Ali completed his puzzle at 4.15p.m.



RAFFLES GIRLS' PRIMARY SCHOOL

SEMESTRAL ASSESSMENT 2 2007

Your Score Out of 100 marks		
	Class	Level
Highest score		
Average score		
Parent's Signature		

Name : _____ () Class: P3__

24 Oct 2007 MATHEMATICS Att: 1 h 45 min

SECTION A (40 marks)

Question 1 to 20 carry 2 marks each. For each question, four options are given. One of them is the correct answer. Make your choice (1, 2, 3 or 4). Write your answer (1, 2, 3 or 4) in the brackets provided.

1. Study the number pattern below.
What is the missing number in the box?

6599, ?, 6799, 6899

- (1) 6499
(2) 6589
(3) 6609
(4) 6699

()

2. The sum of 1654 and 323 is _____.

- (1) 1331
(2) 1977
(3) 1986
(4) 4884


()

3. Express 4 metres and 4 centimetres in centimetres.

- (1) 44
(2) 404
(3) 440
(4) 4400

()

4. The diagram below shows a box on a weighing scale.
What is the mass of the box in grams?




- (1) 250 g
(2) 750 g
(3) 1 250 g
(4) 1 750 g

5. A container has a capacity of 2 litres.
1750 ml of water is poured into it.
How much more water must be added to fill the container completely?

- (1) 500 ml
(2) 950 ml
(3) 3 500 ml
(4) 3 050 ml

6. What is the total amount of money shown below?



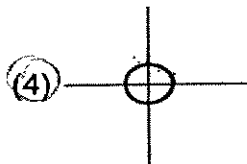
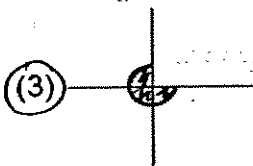
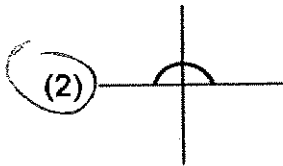
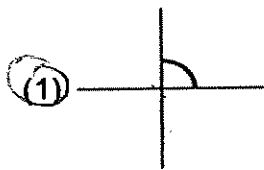
- (1) \$1.75
(2) \$2.50
(3) \$3.50
(4) \$4.25

7. How many quarters are there in 7 wholes?

- (1) 26
- (2) 28
- (3) 30
- (4) 35

()

8. Which of the following marked angles is equal to 3 right angles?



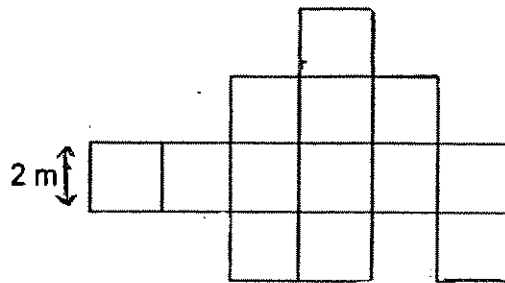
()

9. 4 h 5 min = _____ min

- (1) 45
- (2) 245
- (3) 405
- (4) 450

()

10. The figure below is made up of identical squares.
What is the perimeter of the figure?



- (1) 22 m
 (2) 26 m
 (3) 44 m
 (4) 52 m. ()
11. Hassan had some marbles at first.
 He bought another 60 marbles and had thrice as many marbles as he had at first.
 How many marbles has he at first? ..

- (1) $30 + 60 = 90$
 (2) 60
 (3) 90
 (4) 120 ()

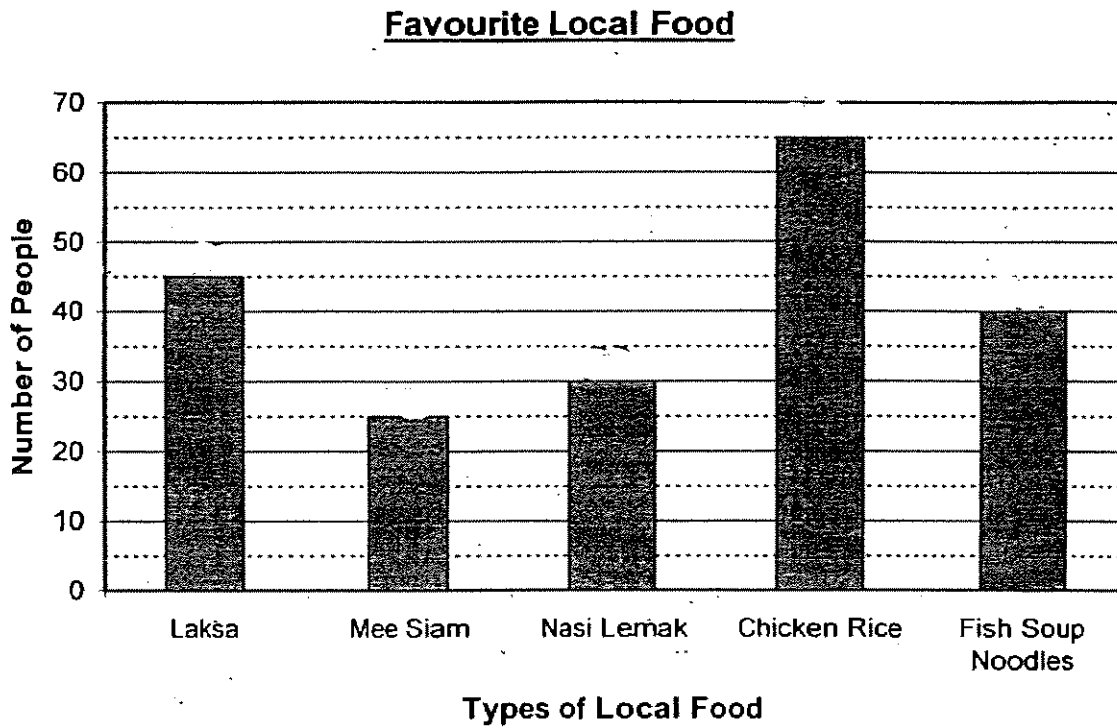
12. How many 8 grams made up 880 g?

- (1) 10
 (2) 11
 (3) 100
 (4) 110 ()

13. Ashley bought a dress for \$52.50 and a scarf for \$20.
 She gave the cashier \$100, how much change would she receive?

- (1) \$27.50
 (2) \$32.50
 (3) \$47.50
 (4) \$72.50 ()

14. 205 people did a survey on the favourite local food they liked. The graph below showed the result of the survey.



How many **more** people liked Fish Soup Noodles than Mee Siam?

- (1) 10
- (2) 15
- (3) 20
- (4) 25

()

15. Given that:

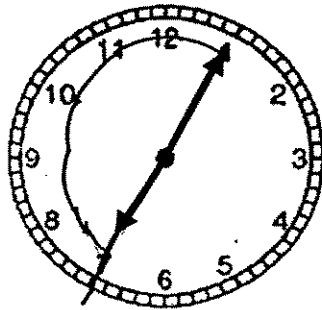
$$\frac{6}{\text{Symbol}} = \frac{9}{12}$$

What number does the symbol "Symbol" represent?

- (1) 8
- (2) 9
- (3) 10
- (4) 15

()

16. The clock below shows the time now.
Half an hour ago, the time was _____.



- (1) 5 min to one
- (2) 5 min past one
- (3) 25 min to seven
- (4) 25 min past seven

()

17. In the diagrams below, Figure A and Figure B are made up of similar squares.
How many more squares must be shaded in Figure B so that both figures have the same area?
shaded




Figure A

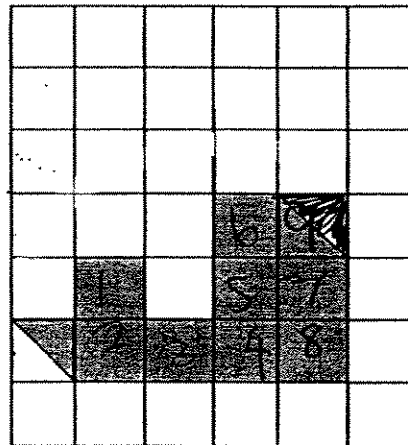


Figure B

- (1) 9
- (2) 10
- (3) 18
- (4) 20

()

18. When $503 \div 4$, the quotient is _____.

(1) 3

(2) 13

(3) 125

(4) 126

()

19. Jane started her piano lesson at 3.05 p.m..
However, the lesson lasted 30 minutes longer than usual and ended
at 5.15 p.m..
What was the usual duration of the piano lesson?

(1) 1 h 30 min


(2) 1 h 40 min

(3) 2 h 10 min

(4) 2 h 40 min

()

20. The figure below is made up of 5 identical rectangles.
Find the perimeter of the figure.



(1) 180 cm

(2) 210 cm

(3) 225 cm

(4) 240 cm

()

End of Section A

SECTION B (40 marks)

Question 21 to 40 carry 2 marks each. Write your answers in the spaces provided. For questions which require units, give your answers in the units stated. All diagrams are not drawn to scale. Answers in fractions must be expressed in the simplest form. Marks will be awarded for relevant working.

21. In the number 8 461, the digit _____ is in the hundreds place.

Ans: _____

22. Find the difference between 753 and 303.

Ans: _____

23. The product of 549 and 6 is _____.

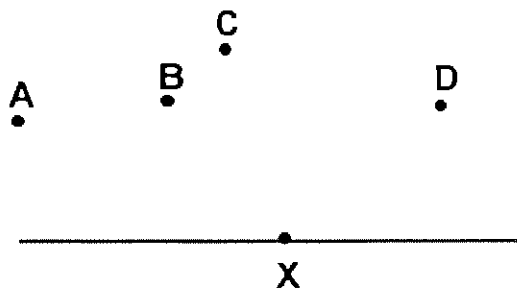
Ans: _____

24. Arrange the following fractions beginning with the largest.

$$\frac{1}{5} \quad \frac{7}{8} \quad \frac{1}{4} \quad \frac{1}{2}$$

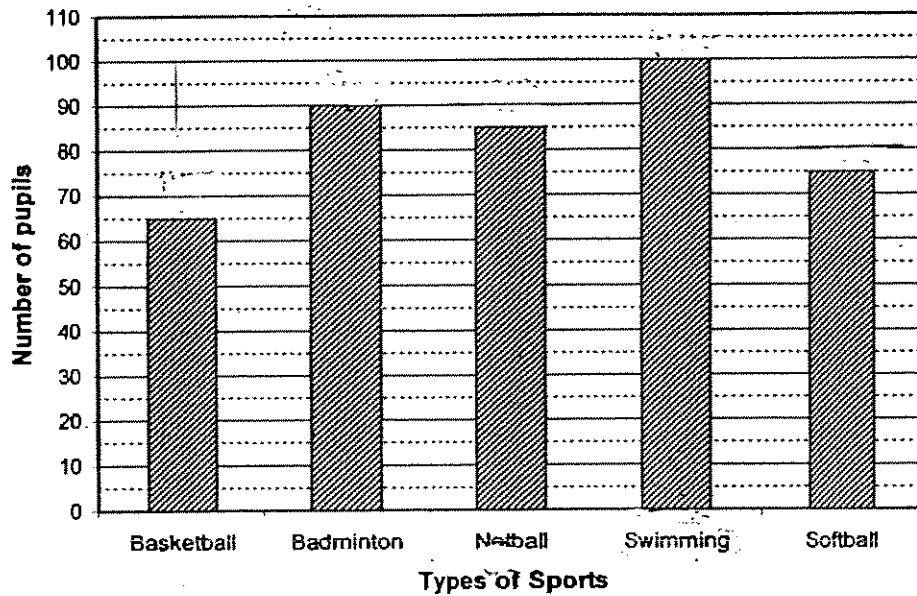
Ans: _____, _____, _____, _____
largest

25. Which **two** points (A, B, C and D) will form a right angle when joined to point X?



Ans: Point _____ and Point _____

26. A group of pupils were asked to choose a sport for their CCA. The graph below showed the result of the selection.



- (a) Which sport was the most popular choice?

Ans: (a) _____

- (b) How many pupils chose basketball and netball as their CCA?

Ans: (b) _____

27. Express 3 010 ml in litres and millilitres.

Ans: _____ l _____ ml

28. The sum of \$3.55 and \$81.65 is _____.

Ans: \$ _____

29. Given that:

$$\triangle + \text{Sun} = 110$$

$$\triangle + \text{Sun} + \text{Sun} = 200$$

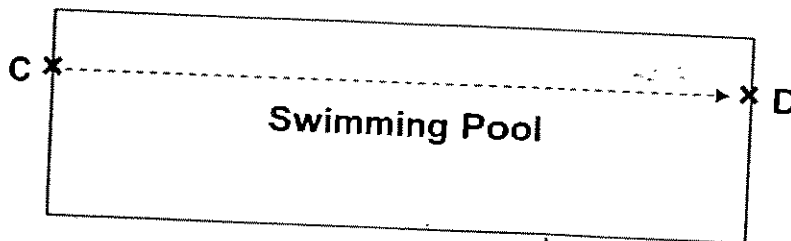
Find the value of \triangle and Sun

Ans: $\triangle =$ _____
 $\text{Sun} =$ _____

30. Find the value of 85 hundreds + 2 tens + 4 ones.

Ans: _____

31. The diagram below shows a swimming pool



Swimming a lap from point C to point D is 50 m.
 How many laps must Meiling swim in order to complete 450 m?

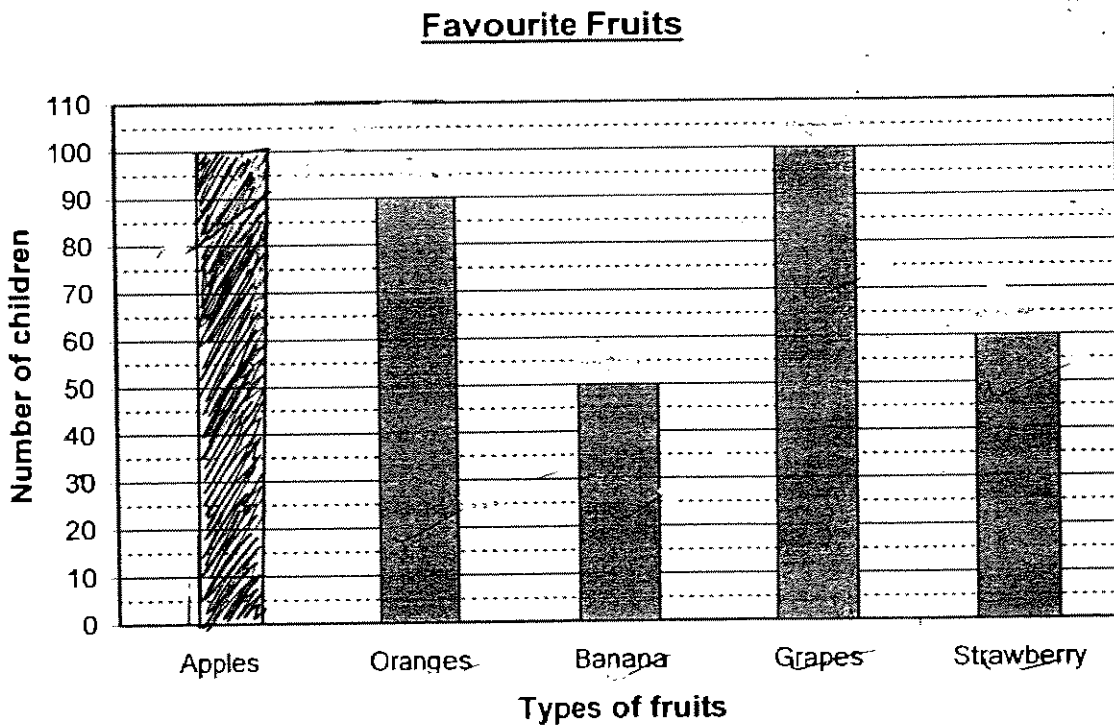
Ans: _____

32. Mary cut a pizza into 6 equal slices and ate 2 slices.
 When her brother came home, she cut the remaining pizza into 8 equal pieces
 and gave him 1 piece.
 What fraction of the pizza was left?

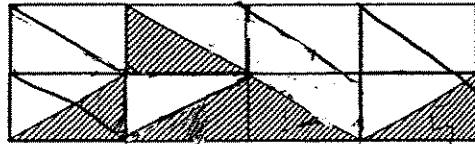
Ans: _____

33. A group of children were asked to choose their favourite fruits.
 The total number of children who liked oranges, banana, grapes and
 strawberry were thrice as many as the number of children who liked apples.

Complete the graph below by drawing the bar that represents the number of
 children who liked apples.

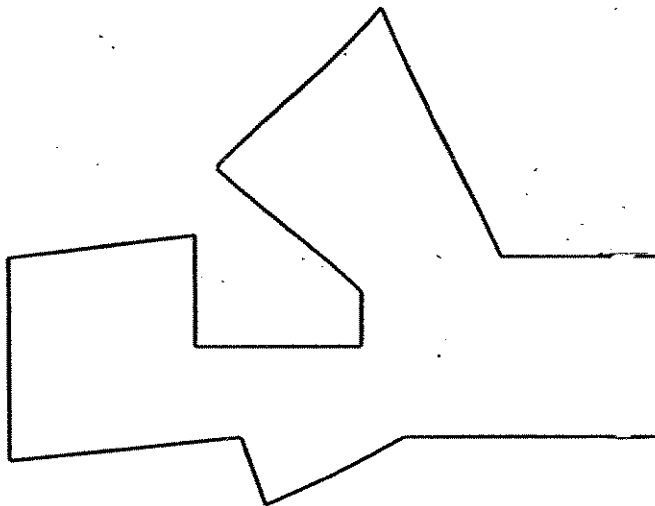


34. The figure below is made up of 8 identical rectangles. What fraction of the figure is shaded?



Ans: _____

35. How many right angles are there in the figure below?



Ans: _____

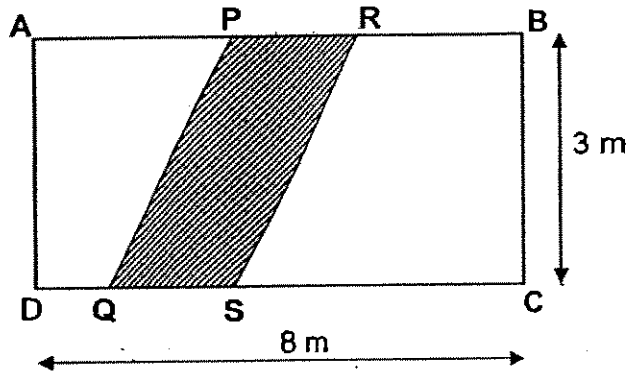
36. Study the number pattern below carefully. What is the value of "S" and "T"?

14	23	2	T
	37	25	S
	62	28	
	90		

Ans: S = _____

T = _____

37. In the diagram below, ABCD is a rectangle.
Line PQ is parallel to line RS.
Given that $PR = 1$ m, find the unshaded area of the rectangle.



Ans: _____ m²

38. Mrs Tan baked 560 cookies.
She packed the cookies into packets of 8.
How many packets of cookies would she have?

Ans: _____

39. An eraser, a mechanical pencil and 2 pens cost \$9.
A mechanical pencil and a pen cost \$6, while an eraser cost \$0.50.
What is the cost of a pen?

Ans: \$ _____

40. Jenny painted $\frac{3}{5}$ of the stick in red and $\frac{1}{10}$ of it in white.
What fraction of the stick was not painted?

Ans: _____

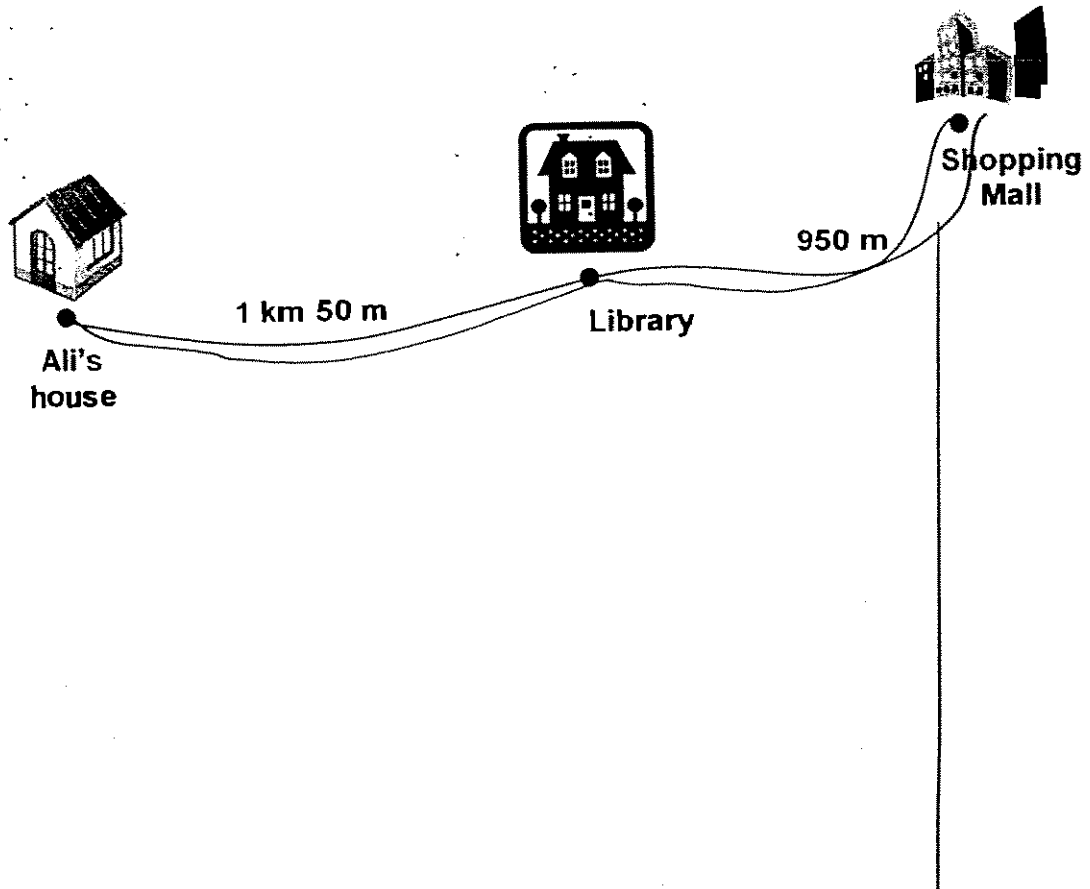
End of Section B

Page 13 of 17

SECTION C (20 marks)

For question 41 to 46, show your working clearly in the space provided below each question and write your answer with suitable units in the spaces provided. All diagrams are not drawn to scale. Answers in fractions must be expressed in the simplest form. Marks will be awarded for relevant working. The number of marks available is shown in brackets [] at the end of each question or part-question.

41. Ali walked from his house to the library and then to the shopping mall for lunch. After his lunch, he walked home using the same route. What was the total distance he had travelled? (Express your answer in metres)

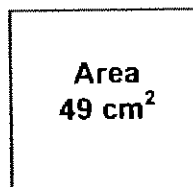


Ans: _____ [3]

42. Jun Wen and Tanya started to do their English homework at 3.50 p.m.
Jun Wen took 1 h 25 min to complete her work.
Tanya completed hers 35 min earlier than Jun Wen.
What time did Tanya complete her English homework?

Ans: _____ [3]

43. The diagrams below show a square and a rectangle.
The perimeter of the rectangle is twice that of the square.
Find the perimeter of the rectangle.



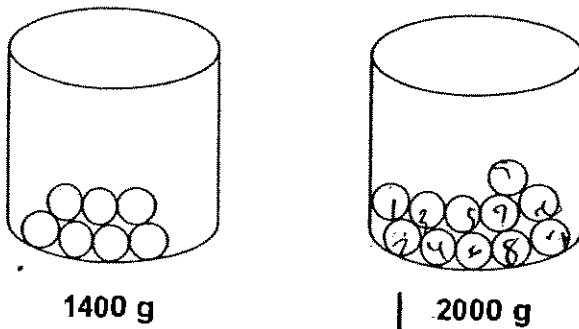
Ans: _____ [3]

44. During a charity funfair, Susan, Mary and Alice sold 540 stickers altogether. Susan sold 3 times as many stickers as Mary while Mary sold twice as many stickers as Alice.

How many more stickers did Susan sell than Alice?

45. The diagram below shows the mass of 2 similar containers with identical marbles in it.





- a) Find the mass of one marble.
b) Find the mass of the empty container.



Ans: (a) _____ [2]

Ans: (b) _____ [2]

46. Amy used identical squares to form the pattern below.

Pattern 1	
Pattern 2	
Pattern 3	
Pattern 4	

- (a) How many squares would she use to form pattern 5?
- (b) How many squares would she use to form pattern 7?
- (c) How many unshaded squares would she use to form pattern 9?

Ans: (a) _____ [1]


(b) _____ [1]

(c) _____ [2]

-End of Paper-

Please check your work carefully ☺

Setters: Mr Johnson Ong, Ms Leong Oon Ho, Mrs Clara Chin



ANSWER SHEET

RAFFLES GIRLS PRIMARY SCHOOL - PRIMARY 3 MATHEMATICS 2007
SEMESTRAL ASSESSMENT (2)

- 1. 4
- 2. 2
- 3. 2
- 4. 4
- 5. 2
- 6. 3
- 7. 2
- 8. 3
- 9. 2

31) 9 laps

32) $7/12$

33)



10. 3

11. 1

12. 4

13. 1

14. 2

15. 1

16. 3

17. 1

18. 3

19. 2

20. 4

21. 4

22. 450

23. 3294


24. $7/8, 1/2, 1/4, 1/5$

25. B, D

26. a) Swimming b) 150

27. 3L10ml

28. \$85.20

29. $\triangle = 20$  $= 90$

30. 8524

34) $5/16$

35) 2

36) $S=3$ $T=1$

37) 21m²

38) 70

39) \$2.50

40) $3/10$

41) $1\text{km } 50\text{m} = 1050\text{m}$

$1050\text{m} + 950\text{m} = 2000\text{m}$


$2000\text{m} + 2000 = 4000\text{m}$

The total distance he traveled is 4000m.

42) Jun Wen =



Tanya =



Tanya completed her English homework at 4.40pm.

43) $\boxed{7} \times \boxed{7} = 49\text{cm}^2$

$\boxed{?} = 7\text{cm}$

Perimeter = $7 \times 4 = 28\text{cm}$

Rectangle = $28 \times 2 = 56\text{cm}$

The perimeter of the Rectangle is 56cm.

44) 9 units = 540

1 unit = $540 \div 9 = 60$

$A = 60$

$S = 60 \times 6 = 360$

$360 - 60 = 300$

Susan sold 300 stickers more than Alice.

45) a) $7 = 1400\text{g}$

$11 = 2000\text{g}$

$4 = 2000 - 1400 = 600\text{g}$

$1 = 600 \div 4 = 150$

The mass of one marble is 150g.

b) $7 = 150 \times 7 = 1050$

$\boxed{?} = 1400 - 1050 = 350\text{g}$

The mass of the empty container is 350g.

46) a) 25

b) 49

c) 72

Tao Nan School
Primary 3 End-of-Year Mathematics Examination 2007

Name: _____ () Date: 26 October 2007
Class: Primary 3 () Time: 8.00 a.m. – 9.30 a.m.

Parent's Signature: _____ Marks: _____ / 80

Section A (20 marks)

Questions 1 to 10 carry 1 mark each. Questions 11 to 15 carry 2 marks each. For each question, four options are given. One of them is the correct answer. Make your choice (1, 2, 3, or 4). Shade the correct oval on the Optical Answer Sheet (OAS).

1. The difference between 5821 and 1738 is _____.

- 1) 7559
- 2) 6559
- 3) 4083
- 4) 4117

2. 79 m 6 cm = _____ cm

- 1) 79006
- 2) 7960
- 3) 7906
- 4) 796

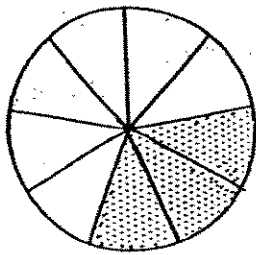
3. Express 3 km 20 m in metres.

- 1) 302 m
- 2) 320 m
- 3) 3020 m
- 4) 3200 m

4. In 4209, the digit 0 is in the _____ place.

- 1) ones
- 2) tens
- 3) hundreds
- 4) thousands

5. What fraction of the figure is shaded?



- 1) $\frac{1}{3}$
- 2) $\frac{2}{3}$
- 3) $\frac{3}{7}$
- 4) $\frac{3}{10}$

6. Mary and Tina weigh 80 kg. Tina weighs 4 kg less than Mary. What is Tina's mass?

- 1) 38 kg
- 2) 40 kg
- 3) 42 kg
- 4) 76 kg

7. How many minutes are there from 8.20 p.m. to 9.05 p.m.?

- 1) 15 minutes
- 2) 25 minutes
- 3) 40 minutes
- 4) 45 minutes

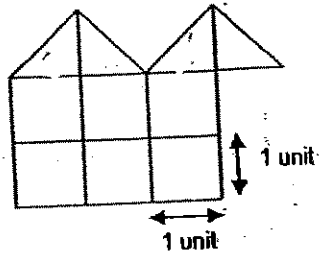
8. $\frac{2}{12}$ is equivalent to _____.

- 1) $\frac{1}{6}$
- 2) $\frac{2}{6}$
- 3) $\frac{3}{6}$
- 4) $\frac{4}{6}$

9. _____ $\div 5 = 71R2$

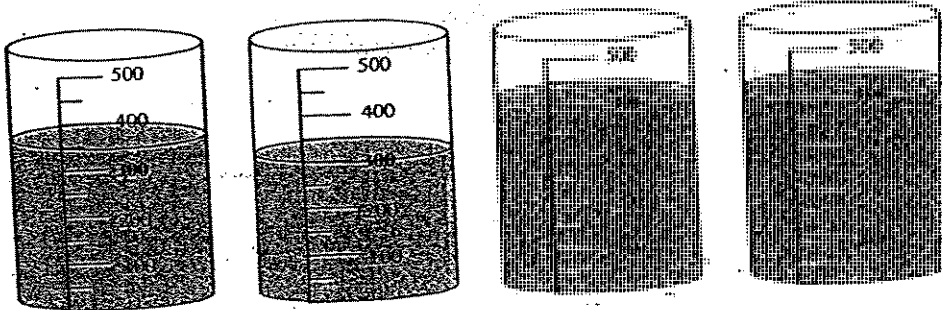
- 1) 353
- 2) 355
- 3) 357
- 4) 365

10. What is the area of the shape in square units?




- 1) 6 square units
- 2) 7 square units
- 3) 8 square units
- 4) 10 square units

11. What is the total amount of water in the cylinders?



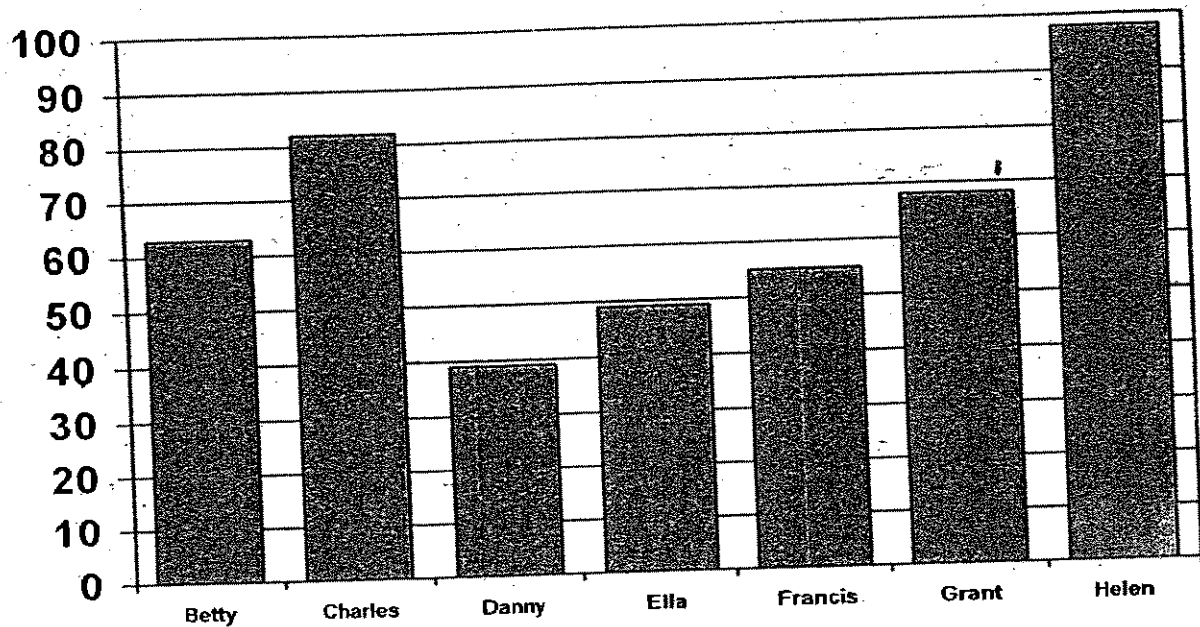
- 1) 1400 ml
- 2) 1450 ml
- 3) 1600 ml
- 4) 1650 ml

12. The figure below has _____ angle(s) that is/are more than 90° .



- 1) 1
2) 2
3) 3
4) 4
13. Ann has 4 times as much money as Betty. If Ann has \$120, how much money do they have altogether?
- 1) \$30
2) \$150
3) \$480
4) \$600
14. May takes 10 minutes to fold a paper frog. She needs to fold 4 of them. If she starts at 2.30 p.m., at what time will she complete folding all 4 paper frogs?
- 1) 2.40 p.m.
2) 2.50 p.m.
3) 3.00 p.m.
4) 3.10 p.m.

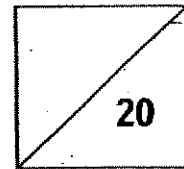
15. The bar graph shows the Science test marks of 7 children. The pass mark for the test is 45. How many children passed the test?



- 1) 6
- 2) 5
- 3) 3
- 4) 4

Name: _____

Class: Pr 3()



Section B (20 marks)

Each question carries 1 mark. Write your answers in the boxes provided.

16. Write 2 hundreds 10 tens 5 ones in numbers.

Ans:

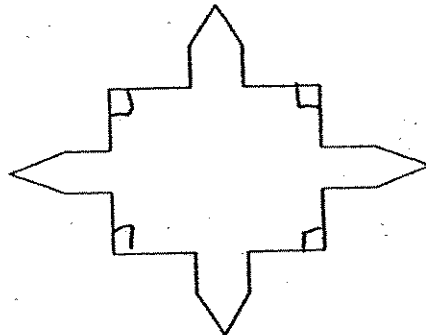
17. What is the smallest 3-digit even number that can be formed from the digits 2, 4 and 7?

Ans:

18. What is the remainder of $79 \div 7$?

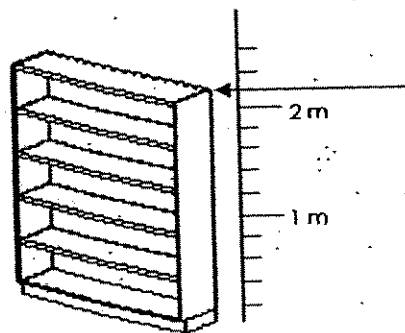
Ans:

19. How many right angles are there inside the figure shown below?



Ans:

20. What is the height of the bookshelf?




Ans: cm

21. The library is open from 9.15 a.m. to 9.30 p.m.
How long is it open each day?
Give your answer in hours and minutes.

Ans: min

22. The time shown on the clock is about a quarter to _____.



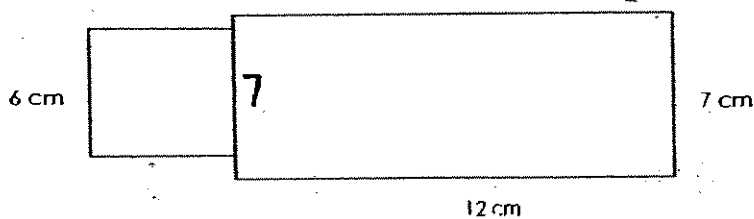
Ans:

23. Arrange the following in ascending order.

$$\frac{3}{4}, \frac{1}{6}, \frac{2}{3}$$

Ans:

24. The figure, not drawn to scale, is made up of a square and a rectangle. Find the area.

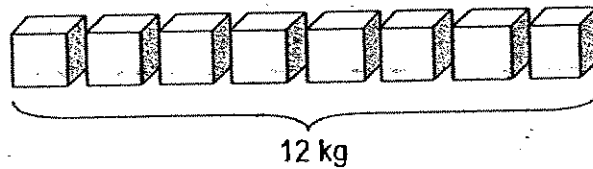


Ans: cm²

25. 3 h 25 min = _____ min


Ans: min

26. The mass of 8 similar boxes is 12 kg. What is the mass of 4 such boxes?



Ans: kg

27. Halim wants to shade $\frac{3}{5}$ of the figure. How many more parts must he shade?



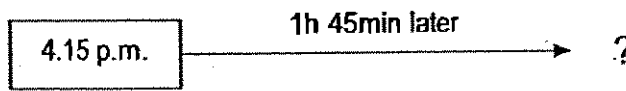
Ans:

28. If $\star \times \ominus = 54$
 and $\ominus \times \ominus = 36$
 then $\star \times \star = \boxed{?}$

The missing number is _____.

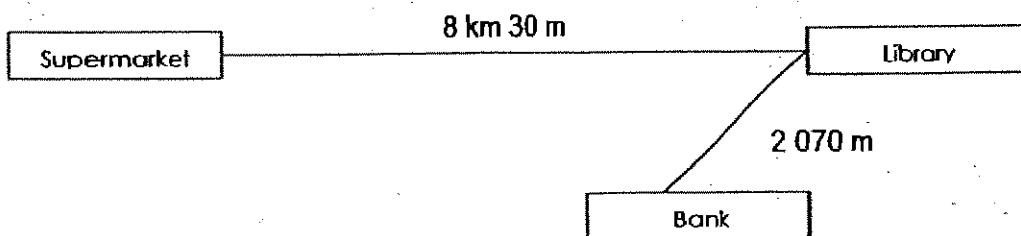
Ans:

29. Jack watched a TV programme at 4.15 p.m. The programme lasted 1h 45min. At what time did it end ?



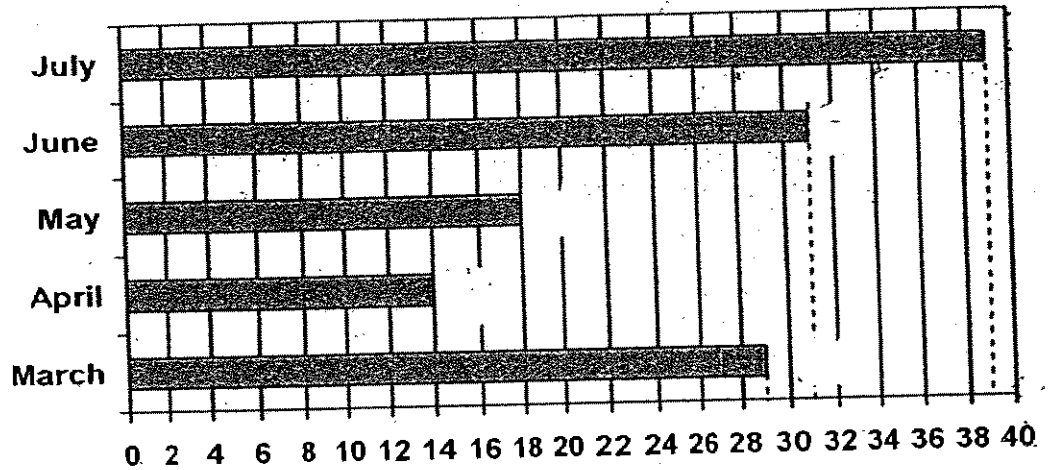
Ans: p.m.

30. Mrs Mohan drove from the supermarket to the library and then to the bank. What is the total distance travelled ?



Ans: km m

The bar graph below shows the number of goldfish sold by Ramu in the last 5 months. Use the graph to answer questions 31 and 32.




31. Ramu sold the least number of goldfish in the month of _____.

Ans:

32. Ramu sold _____ more goldfish in March and May than in July.

Ans:

33. A 3-cm square has a perimeter of _____ cm.



Ans:

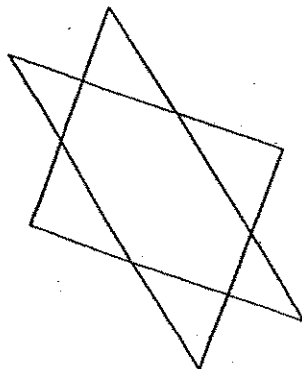
34. Jaya wants to buy 10 oranges from the supermarket. What is the minimum amount of money needed to pay for the oranges ?



Oranges
3 for \$2
1 for 90¢

Ans: \$

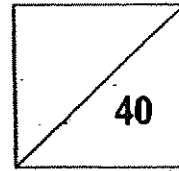
35. How many pair(s) of parallel lines are there in the figure below.



Ans:

Name: _____ ()

Class: Pr 3()

**Section C (40 marks)**

For each of the following problems, show all your working clearly and write your answers in the spaces provided.

36. Lily saved \$180 in March. She saved \$40 more in April.
How much money did she save in the two months?

Answer: _____

37. Mrs Phan bought 28 m of ribbon. She used $\frac{1}{4}$ of it to tie a present.
How many metres of ribbon had she left?



Answer: _____

38. A container has 800 ml of water. When 900 ml of water is added, 350 ml of water overflowed. What is the capacity of the container?

Answer : _____

39. A, B and C are containers. A can hold twice as much water as B. B can hold four times as much water as C. If the capacity of B is 44l, find the total capacity of A and C.


Answer : _____

40. Kim went shopping and bought some items. She paid the cashier \$100 and received a change of \$13.50. She accidentally tore the receipt below. How much did the dress cost?

Girl's Paradise	
Receipt No. 26159	
Necklace	\$12.80
Shoes	\$34.20
Dress	\$3
Total	

Answer : _____

41. Some trees are planted at equal distance from each other. The distance between the 2nd tree and the 5th tree is 12 m. Find the distance between the 1st and 6th tree?

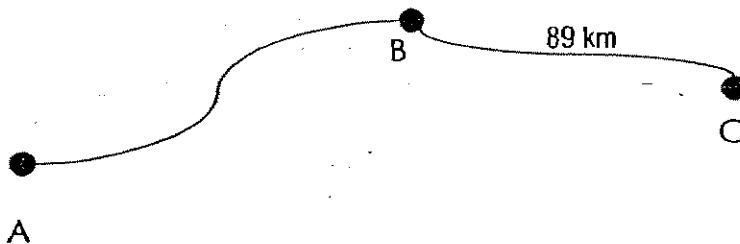


Answer: _____

42. Audrey had some stamps. Rachel had 90 more stamps than Audrey. When all the stamps were shared equally between them, each of them got 190 stamps. How many stamps did Audrey have at first?

Answer: _____

43. Study the figure below. The total distance between A and C is 194 km. How much nearer is B to C than B to A?

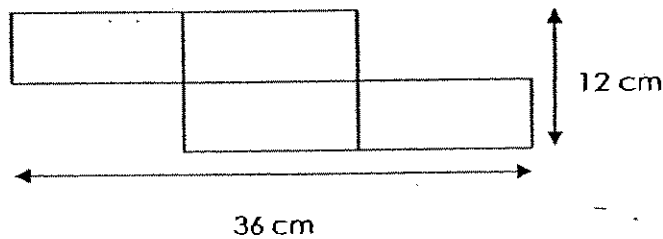


Answer: _____

44. When three girls stood on a weighing scale together, it read 104 kg. One of the girls stepped off and the scale moved down to 74 kg. Another girl jumped off and the scale showed 35 kg. What was the mass of the heaviest girl?

Answer: _____

45. The figure below is made up of 4 identical rectangles. Find the area of one of the rectangles.



Answer: _____

End-of-Paper

41) $12 \div 3 = 4$

$4 \times 5 = 20$

The distance between the 1st and 6th tree is 20m.

42) $190 \times 2 = 380$

$380 - 90 = 290$

$290 \div 2 = 145$

Audrey had 145 stamps at first.

43) $194 - 89 = 105$

$105 - 89 = 16$

B to C is 16km nearer than B to A.

44) $104 - 74 = 30$

$30 + 35 = 65$

$104 - 65 = 39$

The mass of the heaviest girl is 39kg.

45) $36 \div 3 = 12$

$12 \div 2 = 6$

$12 \times 6 = 72$

The area of one of the rectangles is 72cm²

Name : _____ ()

Class : Primary 3 _____

CHIJ ST NICHOLAS GIRLS' SCHOOL



Primary 3

Second Semestral Assessment – 2007

Mathematics
Booklet A

11 October 2007

Score :

~~100~~ 40

Parent's signature : _____

Duration of Paper : 1 h 45 min

Do not open the booklet until you are told to do so
Follow all instructions carefully

SECTION A: (20 X 2 marks)

For each question, four options are given. One of them is the correct answer.

Make your choice (1, 2, 3 or 4).

Shade the correct oval (1, 2, 3 or 4) on the Optical Answer Sheet.

1. $3000 + 3 + 40 = \underline{\hspace{2cm}}$

- | | |
|----------|----------|
| (1) 3034 | (2) 3043 |
| (3) 3340 | (4) 3403 |

2. 9 thousands 5 ones written in figures is $\underline{\hspace{2cm}}$.

- | | |
|----------|----------|
| (1) 5009 | (2) 5090 |
| (3) 9005 | (4) 9500 |

3. In the number 8157, the digit 1 is in the $\underline{\hspace{2cm}}$ place.

- | | |
|--------------|---------------|
| (1) ones | (2) tens |
| (3) hundreds | (4) thousands |

4. Find the sum of 685 and 2469.

- | | |
|----------|----------|
| (1) 1784 | (2) 1884 |
| (3) 3144 | (4) 3154 |

5. $\square + \bigcirc = 11$

$\square + \bigcirc + \bigcirc = 18$

$\bigcirc + \triangle = 12$

$\triangle + \square = \underline{\hspace{2cm}}$

Find the missing value.

- | | |
|--------|--------|
| (1) 9 | (2) 17 |
| (3) 19 | (4) 31 |

11. The capacity of a jar is $1500\text{m}\ell$. It is 4 times the capacity of a mug. Susan poured 3 mugs of juice into an empty beaker. How much juice is there in the beaker?

- (1) $180\text{m}\ell$ (2) $750\text{m}\ell$
(3) $1\text{ l } 125\text{m}\ell$ (4) $4\text{ l } 500\text{m}\ell$

12. Which one of the following fractions is greater than $\frac{3}{5}$?

- (1) $\frac{1}{2}$ (2) $\frac{10}{15}$
(3) $\frac{4}{10}$ (4) $\frac{11}{20}$

13. Find the sum of $\frac{1}{3}$ and $\frac{7}{12}$

- (1) $\frac{3}{4}$ (2) $\frac{8}{15}$
(3) $\frac{5}{9}$ (4) $\frac{11}{12}$

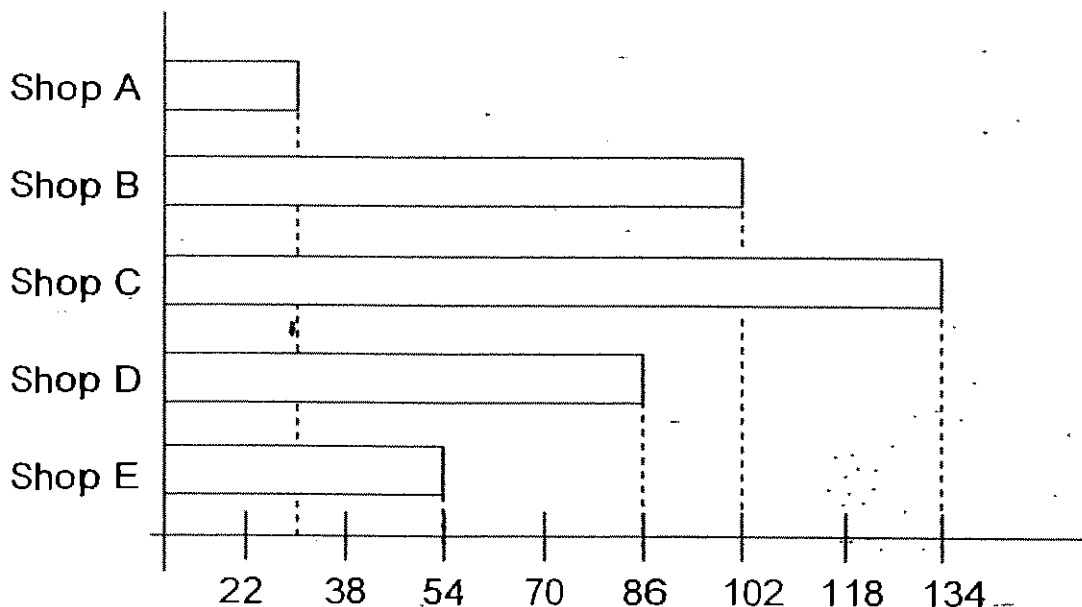
14. Nathan jogs round a 400m track 3 times a day. What is the distance he jogs a day?

- (1) 1200 km (2) $1\text{ km } 33\text{ m}$
(3) $1\text{ km } 200\text{ m}$ (4) $11\text{ km } 33\text{ m}$

15. Which one of the fractions is equivalent to $\frac{2}{3}$?

- (1) $\frac{2}{6}$ (2) $\frac{8}{12}$
(3) $\frac{6}{8}$ (4) $\frac{8}{16}$

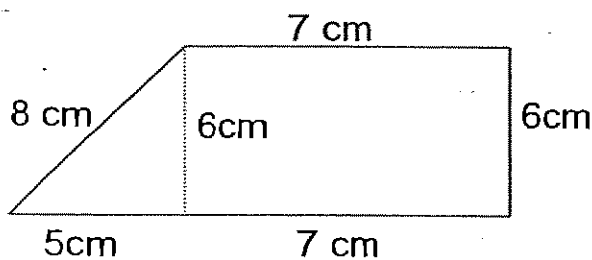
16. The graph below shows the number of cakes 5 shops sold.



Which 2 shops sold a total of 116 cakes?

- (1) Shop D and E
- (2) Shop A and B
- (3) Shop A and D
- (4) Shop B and E

17. Find the perimeter of the figure below.



- (1) 26 cm
- (2) 28 cm
- (3) 33 cm
- (4) 39 cm

18. Which one of the following is the heaviest?

- (1) 4 kg 3 g
- (2) 4 kg 30 g
- (3) 4 kg 33 g
- (4) 4 kg 303 g

19. Jay has 3 times as much money as Morgan. Jay has \$64 more than Morgan. How much money do they have altogether?

(1) \$32

(2) \$48

(3) \$96

(4) \$128

20. Sandy started doing her homework at 2.40p.m. and Alison started doing hers at 2.55 p.m. Alison took 10 min less than Sandy to complete her homework. If Sandy finished her homework at 5.05 p.m., at what time did Alison finish hers?

(1) 5.10 p.m.

(2) 5.15 p.m.


(3) 5.20 p.m.

(4) 5.30 p.m.

Name : _____ ()

Class : Primary 3 _____

CHIJ ST NICHOLAS GIRLS' SCHOOL



Primary 3

Second Semestral Assessment – 2007

Mathematics
Booklet B

11 October 2007

Score :

100

Parent's signature : _____

Duration of Paper : 1 h 45 min

Do not open the booklet until you are told to do so
Follow all instructions carefully.

Do not
write in
this
space

Write your answers in the blanks provided.
Show all your mathematical working clearly in the space provided.

21. What is the total number of fifty-cent coins that can be exchanged for 25 twenty-cent coins?

Ans: _____

22. $9 \times 9 = \square \times 9 + 4 \times 9$

The missing number in the box is _____

Ans: _____

23. Elyssa has 7 times as many beads as Elicia.
If the 2 girls have 984 beads altogether, how many more beads does Elyssa have than Elicia?

Ans: _____

24. 284 boys and 418 girls are divided into groups of 9.
How many groups were there altogether?

Ans: _____

25. Faith took 1 h 30 min to complete her school work.
She finished at 2.15 p.m.
At what time did she start doing it?

Ans: _____ p.m.

26. Apples were sold at 6 for \$4 and pineapples were sold at 2 for \$3. Sally bought 3 apples and some pineapples and paid a total of \$14. How many pineapples did she buy?

Ans: _____

27. Write 41m 8cm in centimetres.

Ans: _____ cm

28. Find the quotient of $905 \div 8$.

Ans: _____



29. Z and Y are both whole numbers.
The product of the two numbers is 36.
What are the two numbers if the difference
between the 2 of them is 16?

Ans: _____ and _____

30. Express $\frac{18}{24}$ in its simplest form.

Ans: _____

31. Mrs Chan gave $\frac{1}{3}$ of her cookies to Susan and $\frac{5}{12}$ to
Alice. What fraction of the cookies had she left?
(Give your answer in the simplest form.)

Ans: _____

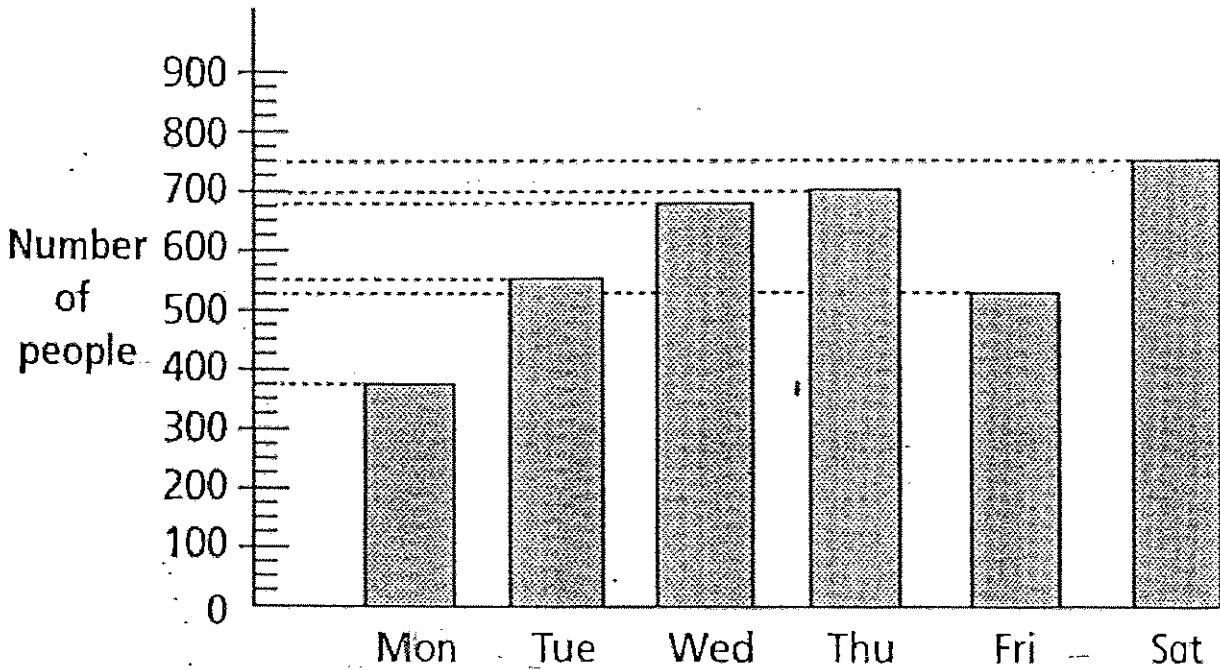
32. What is the total mass of 5 birds which weigh 775g each?
(Give your answer in kg and g.)

Ans: _____ kg _____ g

Use the graph below to answer questions 33 and 34.

The graph shows the number of people who visited the school library during a week.

Do not write in this space



33. The total number of people who visited the school library on Monday and Thursday is the same as the total number of people who visited on Friday and _____.

Ans: _____

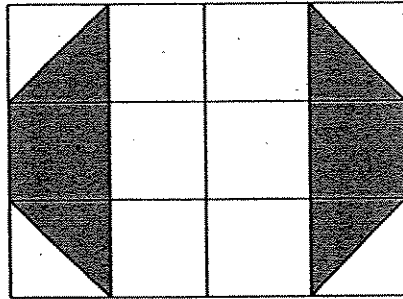
34. There were 125 adults at the school library on Saturday. This was 20 fewer than the number of girls who were there on the same day. How many boys visited the library on that day?

Ans: _____ boys



Do not write in this space


35. What fraction of the figure is shaded?
(Give your answer in its simplest form.)



Ans: _____

36. What is the area and perimeter of the square below?

7m



Ans: Area: _____ m²

Perimeter: _____ m

37. 4 pupils drink a total of 2 l of juice every day.
Each pupil drinks an equal amount of juice.
How much juice does each pupil drink every day?

Ans: _____ ml

Do not
write in
this
space

38. A rectangular field has sides 86 m and 9 m.
Find the area of the field.

Ans: _____ m²

39. (a) 10 kg = _____ g

(b) 2005 ml = _____ l _____ ml

Ans: (a) _____ g

(b) _____ l _____ ml

40. Arrange the fractions in decreasing order: $\frac{2}{3}$, $\frac{1}{2}$, $\frac{5}{6}$

Ans: _____

SECTION C: (5 x 4 marks)

Solve the following problems.

All mathematical working and statements must be shown clearly.

Do not
write in
this
space

41. The total mass of a dog and a cat is 9 kg 890 g.
The dog is heavier than the cat by 240 g.
What is the mass of the cat?
(Give your answer in kg and g.)

42. Vani took part in a 2400 m race.
She took a rest after running 835 m.
She continued running for another 258 m before giving up.
(a) What was the distance she ran in all?
(b) How far away was she from the finishing point?

Do not
write in
this
space

Do not
write in
this
space

43. Fatimah saved \$539 each month during the first eight months of the year.
She saved \$650 each month for the rest of the year.
How much did she save in total for the whole year?

44. A metal container can hold 8400 m^{ℓ} of water altogether. Eight identical pails are needed to fill up the metal container completely.
How much more water can the metal container hold than one pail?
(Give your answer in ℓ and m^{ℓ} .)


Do not write in this space




45. Mr Kumar left home at 2.15 p.m. and reached the stadium half an hour later.
He trained for three hours and took a taxi home.
When he reached home, it was already 6.20 p.m.
How long did it take him to reach home?
(Draw and label the time-line.)

Do not
write in
this
space

End of Paper





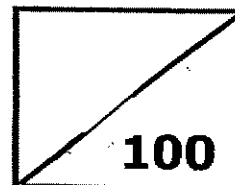
ANSWER SHEET

CHIJ PRIMARY SCHOOL - PRIMARY 3 MATHEMATICS 2007
SEMESTRAL ASSESSMENT (2)

1. 2
2. 3
3. 3
4. 4
5. 1
6. 4
7. 3
8. 2
9. 1
10. 3
11. 3
12. 2
13. 4
14. 3
15. 2
16. 3
17. 3
18. 4
19. 4
20. 1
21. 10
22. 5
23. 738
24. 78
25. 12.45.
26. 8
27. 4108cm
28. 113
29. 18 and 2
30. $\frac{3}{4}$
- 31) $\frac{1}{4}$
32) 3kg 875g
33) Tuesday
34) 480 boys
35) $\frac{1}{3}$
36) Area: 49m²
Perimeter: 28m
37) 500ml
38) 774m²
39) a) 10000g
b) 2L 5mL
40) $\frac{5}{6}$, $\frac{2}{3}$, $\frac{1}{2}$
41) 9kg 890g - 240g = 9kg 650g
9650g \div 2 = 4825g
The mass of the cat is 4kg 825g
42) a) 835m + 258m = 1093m
She ran 1093m in all.
b) 2400m - 1073m = 1307
She was 1307m away from the
finishing point.
43) 12 - 8 = 4
\$650 \times 4 = \$2600
\$4312 + \$2600 = \$6912
Fatimah save \$6912 for the whole
year.
44) 8400ml \div 8 = 1050ml
8400ml - 1050ml = 7350ml
7L 350ml is the amount it can
hold.
- 45) 15 + 20 = 35min



Rosyth School
Semestral Assessment 2 2007
Mathematics
Primary 3



Name: _____

Class: Pr 3-_____ Register No. _____ Duration: 1h 45 min

Date: 30th October 2007 Parent's Signature: _____

Instructions to Pupils:

1. Do not open this booklet until you are told to do so.
2. Follow all instructions carefully.
3. This paper consists of 3 parts, Sections A, B and C.
4. For questions 1 to 20 in Section A, shade the correct ovals on the Optical Answer Sheet (OAS).

	Maximum	Marks Obtained
Section A	40	
Section B	40	
Section C	20	
Total	100	

* This paper consists of 18 pages altogether.

This paper is not to be reproduced in part or whole without the permission of the Principal.

Section A (40 marks)

Questions 1 to 20 carry 2 marks each.

For each question, four options are given. One of them is the correct answer. Make your choice (1, 2, 3, or 4). Shade the correct oval (1, 2, 3, or 4) on the Optical Answer Sheet.

1. What is the missing number in the box?

$$1\ 678 = 1\ 000 + \boxed{} + 70 + 8$$

- (1) 6
- (2) 60
- (3) 600
- (4) 6 000

2. In 9 432, the digit 3 is in the _____ place.

- (1) ones
- (2) tens
- (3) hundreds
- (4) thousands

3. Sue exchanges a \$5 note for 10 coins. All the coins have the same value. What is the value of each coin?

- (1) 5¢
- (2) 10¢
- (3) 20¢
- (4) 50¢

4. Express 1 890 g in kilograms and grams.

- (1) 1 kg 89 g
- (2) 1 kg 890g
- (3) 18kg 9 g
- (4) 18 kg 90 g

5. Which one of the following fractions does not have the same value as $\frac{4}{8}$?

(1) $\frac{1}{2}$

(2) $\frac{2}{4}$

(3) $\frac{6}{10}$

(4) $\frac{8}{16}$


6. What fraction of the rectangle below is not shaded?

(1) $\frac{1}{4}$

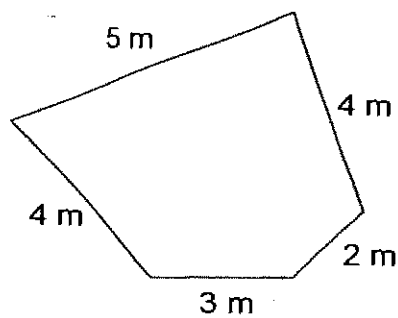
(2) $\frac{2}{6}$

(3) $\frac{4}{6}$

(4) $\frac{3}{4}$



7. The perimeter of the figure is _____ m.



(1) 13

(2) 15

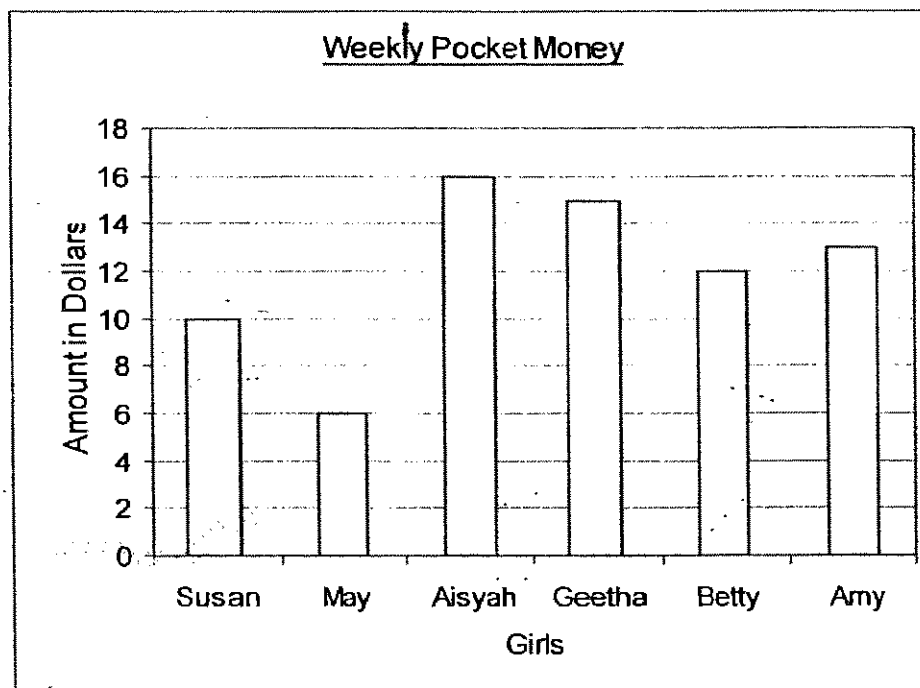
(3) 16

(4) 18

8. 1 h 50 min ago, the time was 3.50 p.m. The time now is _____ p.m.

- (1) 2.00
- (2) 4.40
- (3) 5.00
- (4) 5.40

The following bar graph represents the amount of weekly pocket money of 6 girls. Study it carefully and answer question 9.



9. How much more pocket money does Geetha have than May?

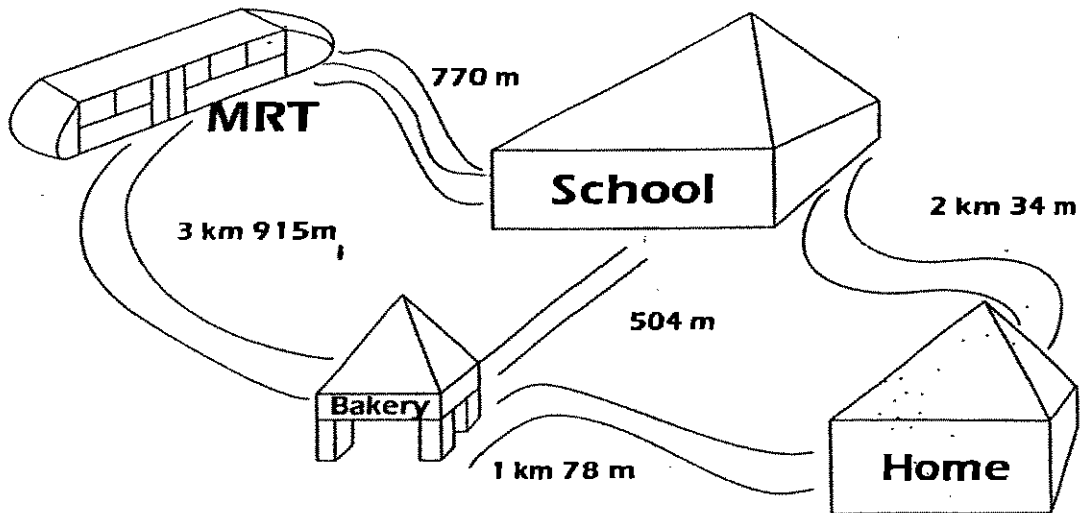
- (1) \$ 6
- (2) \$ 8
- (3) \$ 9
- (4) \$ 15

10. The numeral for 3 thousands, 12 hundreds, 6 tens and 10 ones is _____.

- (1) 3 121
- (2) 3 190
- (3) 4 181
- (4) 4 270

11. Which of the following has the smallest value?
- (1) $8\,000 - 8$
 - (2) $7\,900 + 20$
 - (3) $8\,008$
 - (4) 800×9
12. Muthu has 580 marbles. He shares them among his 4 friends. How many marbles does each friend get?
- (1) 145
 - (2) 576
 - (3) 584
 - (4) 2 320
13. Siti scored 92 marks in Mathematics. She scored 6 marks more in Mathematics than in Science. How many marks did she score in Science?
- (1) 84
 - (2) 86
 - (3) 96
 - (4) 98
14. Mr Lim went shopping with some money. He bought a watch for \$73.45 and had \$17.55 left. How much did he bring along for shopping?
- (1) \$55.90
 - (2) \$64.10
 - (3) \$90.90
 - (4) \$91.00
15. Mdm Tay wants to pay her maid \$360. She finds that she is short of \$65. How much money does Mdm Tay have?
- (1) \$295
 - (2) \$305
 - (3) \$325
 - (4) \$425

Study the diagram below and answer Question 16.


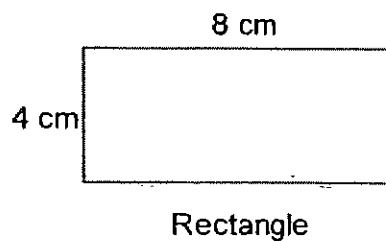


16. Mrs Tay drives from the MRT station to the school to fetch her son. She then drops by at the bakery before she heads back home. What is the total distance travelled by Mrs Tay if she takes the shortest possible route?
- (1) 1 km 452 m
(2) 2 km 352 m
(3) 3 km 54 m
(4) 8 km 301 m
17. If there are 660 *ml* of orange juice in a bottle, how many more millilitres of orange juice are needed to make up 2 *l* ?
- (1) 1240 *ml*
(2) 1280 *ml*
(3) 1340 *ml*
(4) 1360 *ml*

18. John cuts a cake equally into 5 pieces. He eats 2 pieces and gives the rest to his sister. What fraction of the pie does his sister get?

- (1) $\frac{1}{3}$
(2) $\frac{2}{5}$
(3) $\frac{3}{5}$
(4) $\frac{2}{3}$

19.



The square shown has the same perimeter as the rectangle shown.
What is the length of the square?

- (1) 6 cm
(2) 8 cm
(3) 3 cm
(4) 16 cm
20. Mrs Lim has 28 chicken pies. She packs all of them into boxes.
Each box can hold up to 5 pies.
Which of the following **cannot** be the total number of boxes she uses?
- (1) 5
(2) 6
(3) 7
(4) 8

Section B (40 marks)

Questions 21 to 40 carry 2 marks each.

For each question, show your working clearly in the space below each question.

Write your answers in the spaces provided. Give your answers in the units stated.

21. Find the product of 364 and 5.

22. Divide 781 by 8.
What is the remainder?

23. Find the value of $\$21.35 + \15.85


 \$

24. Sam bought a pen and an exercise book for a total of \$1.60.
He only has some twenty-cent coins with him.
How many twenty-cent coins did he use to pay for what he had bought?

25. A pail has $6\ell\ 335m\ell$ of water.
 $1\ell\ 780m\ell$ more water are needed to fill up the pail.
What is the capacity of the pail?
Express your answer in litres and millilitres.

26. The sum of $\frac{1}{3}$, $\frac{1}{6}$ and $\frac{1}{12}$ is _____.

27. Find the area of the square shown below.



28. Express 4 h 16 min in minutes.

29. $1 + 2 + 3 + 4 + 5 + 6 + 7 + 8 + 9$

When the first 9 numbers are added up, what is the digit in the ones place of this total?

30. The chairs in the hall are arranged in rows of 9.
There are 126 rows of chairs.
How many chairs are there altogether?

31. $21 = 3 \times 3 + \square \times 3$

What is the missing number in the box?

32. 100 less than 2 083 is _____.

33. Vani was given \$5 to spend during an outing.
She spent \$1.20 on a chicken wing and 90¢ on an ice-cream.
How much had she left?

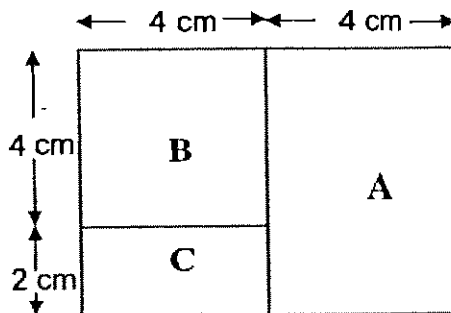
34. The length of a rope is 3 times the length of a ribbon.
 If the length of the ribbon is 72 cm, what is the length of the rope?

cm

35. $\frac{2}{5} + \frac{3}{10} = \frac{\square}{10}$

What is the missing number in the \square ?

36. The figure is made up of two rectangles, A and C, and a square, B.
 Calculate the perimeter of Rectangle A.



cm

37. Study the signboard which is placed on the door of Rocky Café.

Opening Hours: 10 am --- 9 pm Daily
Closed on Sunday.

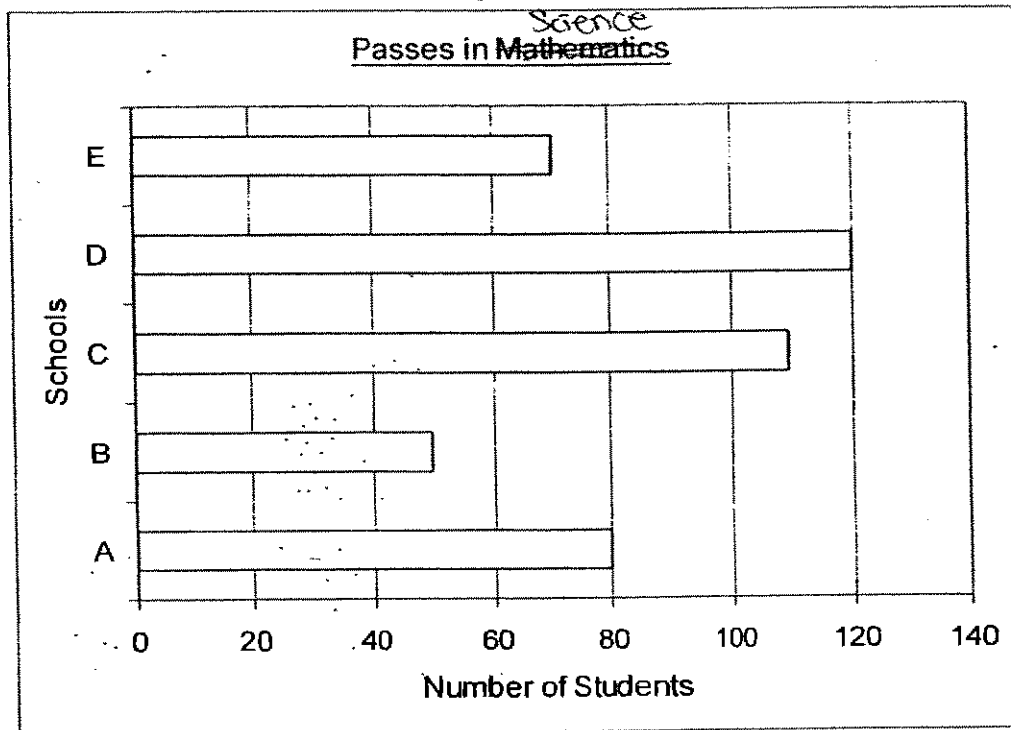
The café is open for _____ hours a week.

38.

3, 5, 6, 8

Using any **three** numbers in the box above,
form the **largest** three-digit **even** number.

The bar graph below shows the number of students in 5 schools (A, B, C, D and E) who passed a Science examination. Study the graph carefully and answer Questions 39 and 40.



39. If 25 female students in School C passed the examination, how many boys passed the same examination in School C?

40. Students who passed the examination in School D were given 2 pencils each by the Principal. How many pencils did the Principal give away altogether?

Section C (20 marks)

For questions 41 to 45, show your working clearly in the space below each question and write your answers in the spaces provided.

The number of marks for each question is shown in brackets [].

41. A box contains blue and yellow buttons. There are 68 blue buttons.
There are 32 more yellow buttons than blue buttons.
(a) How many yellow buttons are there?
(b) How many buttons are there in the box altogether?

Answer : (a) _____ [2m]

(b) _____ [2m]

42. 40 children attended a party.
Each boy ate 3 cookies and each girl ate 4 cookies.
If there was an equal number of boys and girls, how many cookies
did they eat altogether?

Answer : _____ [4m]

43. A total of 5 100 people took part in a walkathon.
1 200 of them were girls.
There were 56 fewer boys than girls.
The rest were adults.
(a) How many boys were there?
(b) How many adults were there?

Answer : (a) _____ [2 m]

(b) _____ [2 m]

44. Mrs Siva bought 10 bunches of rambutans.
There were 66 rambutans in each bunch.
If she shared the rambutans with 5 friends, how many rambutans did each friend get?

Answer : _____ [4 m]

45. Peter has 12 pets which consist of birds and hamsters.
All the hamsters have 36 **more** legs than all the birds.
How many of his pets are birds?

Answer : _____ [4 m]

--- END OF PAPER ---
Have you checked your work?



ANSWER SHEET

ROSYTH PRIMARY SCHOOL - PRIMARY 3 MATHEMATICS 2007
SEMESTRAL ASSESSMENT (2)

-
- A large, semi-transparent watermark illustration of a graduation cap and books is centered on the page, behind the list of answers.
1. 3
 2. 2
 3. 4
 4. 2
 5. 3
 6. 1
 7. 4
 8. 4
 9. 3
 10. 4
 11. 4
 12. 1
 13. 2
 14. 4
 15. 1
 16. 2
 17. 3
 18. 3
 19. 1
 20. 4
 21. 1820
 22. 5
 23. \$37.20
 24. 8 twenty cents
 25. 8L115ml
 26. $\frac{7}{15}$
 27. 64cm^2
 28. 256min
 29. 5
 30. 1134
- 31) 4
- 32) 1983
- 33) \$2.90
- 34) 216cm
- 35) 7
- 36) 20cm
- 37) 66
- 38) 856
- 39) 85 boys
- 40) 240 pencils

41)a)Number of yellow buttons $\rightarrow 68+32=100$ buttons.

The are 100 yellow buttons.

b) $100+68=168$ buttons.

There are 168 buttons in the box altogether.

42)Number of boys $\rightarrow 40 \div 2=20$ boys

Number of girls $\rightarrow 40 \div 2=20$ girls

Number of cookies that the girls ate $\rightarrow 20 \times 4=80$ cookies.

The girls ate 80 cookies.

Number of cookies that the boys ate $\rightarrow 20 \times 3=60$ cookies

The boys ate 60 cookies

Number of cookies that the children ate $\rightarrow 80+60=140$ cookies

The children ate 140 cookies altogether.

43)a)Number of boys $=1200-56=1144$ boys

There were 1144 boys

b)Number of adults $=1200+1144=2344$

$5100-2344=2756$

There were 2756 adults.

44) $66 \times 10=660$ rambutans

$660 \div 6=110$ rambutans

Each friends gets 110 rambutans.


45) 2 of his pets are birds.

**HENRY PARK PRIMARY SCHOOL
END-OF-YEAR EXAMINATION 2007
MATHEMATICS
PRIMARY 3**

NAME: _____ ()

CLASS: PRIMARY 3 _____

DURATION: 1 h 30 min



Section A: (2 marks each)

Choose the correct answer for each question and write its number (1,2,3,or 4) in the brackets provided. You are required to shade the OAS at the end of the examination.

1) 640 is _____ less than 7380.

- 1) 6340
- 2) 6740
- 3) 7340
- 4) 7740

()

2) What is the product of 876×8 ?

- 1) 6478
- 2) 6968
- 3) 7008
- 4) 7288


()

3) 3 km 75 m is equal to _____ m.

- 1) 375
- 2) 3 075
- 3) 3 705
- 4) 3 750

()

4)



What is the mass of the pineapple on the weighing scale?

- 1) 2 kg 50g
- 2) 2 kg 200g
- 3) 2 kg 250g
- 4) 2 kg 500g

()

5) Pail A can hold 3 878 ml of water. Pail B can hold 59 ml lesser water than Pail A. How much water can Pail B hold?

- 1) 3 811 ml
- 2) 3 819 ml
- 3) 3 829 ml
- 4) 3 937 ml

()

6) Which of the following is **not** an equivalent fraction of $\frac{3}{12}$?

1) $\frac{1}{4}$

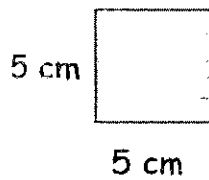
2) $\frac{2}{6}$

3) $\frac{2}{8}$

4) $\frac{4}{16}$

()

7) Each side of the square is 5 cm long. What is the area of the square?



1) 5 cm^2

2) 10 cm^2

3) 20 cm^2

4) 25 cm^2

()

8) Look at the following number pattern.

65	108	A
35	78	236
15	58	216
5	48	206

A is _____.

- 1) 246
- 2) 256
- 3) 266
- 4) 276

()

9) Use the digits 7, 6, 4, and 0 to form the smallest possible 4-digit even number.

- 1) 4706
- 2) 4607
- 3) 4076
- 4) 4067

()

- 10) What is the missing digit in the box?

$$\begin{array}{r} 7564 \\ - 2\boxed{}89 \\ \hline 5475 \end{array}$$

- 1) 1
2) 0
3) 8
4) 9

()

- 11) Tom has 8 albums which contain 7 pages of stickers in each album. If there are 24 stickers in each album, how many stickers does Tom have in all?

- 1) 39
2) 192
3) 360
4) 1344

()

- 12) How much does Irene have if she is given 6 fifty-cent coins, 7 twenty-cent coins and 5 ten-cent coins?

- 1) \$ 1.93
2) \$ 2.20
3) \$ 4.90
4) \$ 6.75

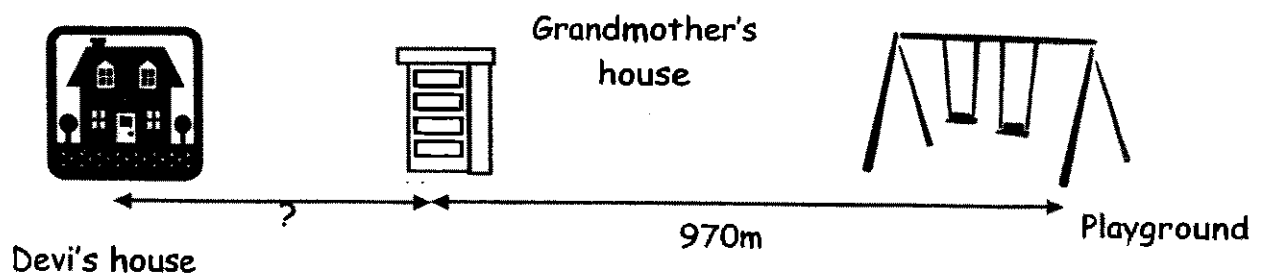
()

- 13) The time shown on Ahmad's watch is 2.15 p.m. His watch is 25 minutes slow. The correct time on his watch should be _____ p.m.

- 1) 1.50
- 2) 1.55
- 3) 2.30
- 4) 2.40

()

- 14) The diagram shows the route taken by Devi to walk from her house to her grandmother's house and then to the playground. The total distance covered by Devi was 2020 m. What was the distance she walked from her house to her grandmother's house?



- 1) 1 km 50 m
- 2) 1 km 190 m
- 3) 1 km 500 m
- 4) 2 km 990 m

()

- 15) The mass of an apple is 132 g. The mass of a durian is 3 095 g. The total mass of the 2 fruits is _____.

- 1) 2 kg 963 g
- 2) 3 kg 227 g
- 3) 4 kg 082 g
- 4) 4 kg 127 g

()

16) What is the sum of $\frac{1}{4}$, $\frac{1}{8}$ and $\frac{1}{2}$?

1) $\frac{3}{8}$

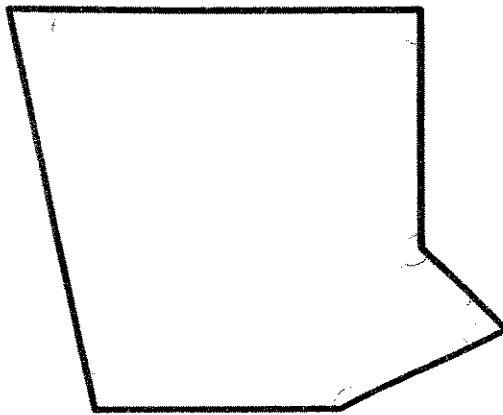
2) $\frac{7}{8}$

3) $\frac{4}{10}$

4) $\frac{3}{14}$

()

17) How many angles are there inside the figure shown below?



1) 4

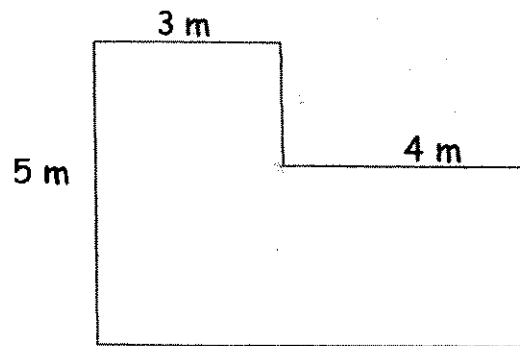
2) 5

3) 6

4) 7

()

18)



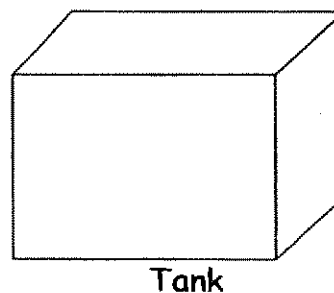

Mr Phua wants to build a fence around his garden as shown above. What is the length of fencing he needs to buy?

- 1) 21 m
- 2) 22 m
- 3) 24 m
- 4) 25 m

()

19) Cup A contains 240 ml of water and Cup B contains 180 ml more water than Cup A. The water in both cups is emptied into an empty tank as shown below. Find the volume of water in the tank.

- 1) 300 ml
- 2) 420 ml
- 3) 600 ml
- 4) 660 ml



()

- 20) The table below shows the marks of 3 students. Part of the marks obtained by Francis and George has been covered. What could George's marks be?

Eddie	38
Francis	4
George	3
Total Marks	122

- 1) 30
- 2) 32
- 3) 34
- 4) 37

()

Section B: (2 marks each)

Answer the following questions. Write your answers in the boxes provided.


- 21) Fill in the missing signs so that the number sentence is correct.

$$8 \quad \boxed{} \quad 3 \quad = \quad 96 \div 4$$

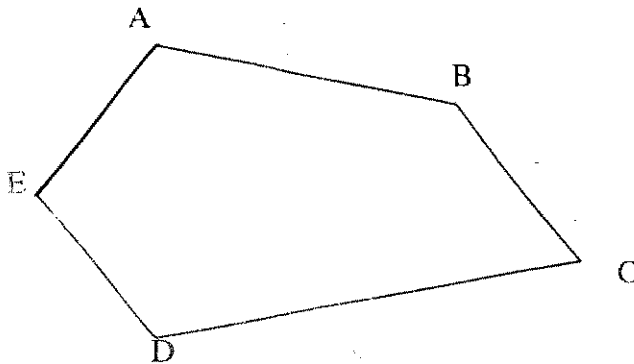
- 22) Mr Tan gave \$ 35.00 to his son and \$ 46.50 to his daughter. How much more money did his daughter receive than his son?

- 23) Bala's mass is 48 kg. He is twice as heavy as Sulin. What is their total mass?

- 24) Lily wants to shade the figure below to show the answer for the difference between $\frac{1}{4}$ and $\frac{1}{12}$. How many rectangles should he shade?



- 25) Name the pair of parallel lines in the figure below.



- 26) How many times does the digit 8 appear in the numbers from 1 to 80?

- 27) A delivery man loaded 780 eggs onto his truck. During the delivery, 200 eggs got broken. He delivered the remaining eggs equally to 5 bakeries. How many eggs did each bakery get?

- 28) A packet of biscuits cost \$ 1.20. Mary bought 2 packets of biscuits. She gave the shopkeeper \$ 5.00. How much change did she receive?

- 29) Sam took 2h 20min to paint his room. He started at 8.45 a.m. He finished painting his room at _____ a.m.

- 30) A rope is 6 m long. Siti cuts the rope into 2 pieces. The shorter piece is 250 cm long. What is the length of the longer piece?

cm

- 31) Ali pours some orange juice from a jug into 2 identical glasses. Each glass contains 300 ml of orange juice. There is 500 ml of orange juice left in the jug. What is the capacity of the jug?

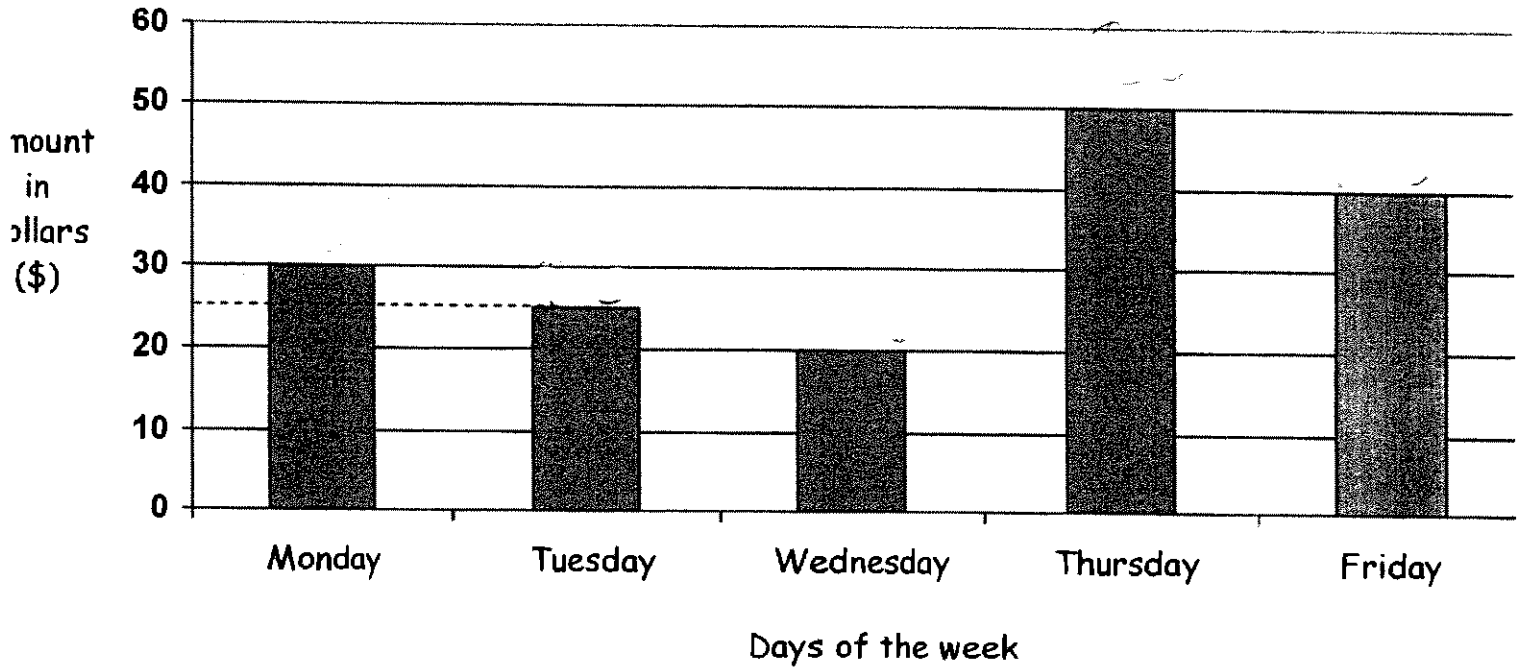
ml

- 32) Arrange the fractions in order, beginning with the smallest.

$$\frac{2}{3}, \frac{7}{12}, \frac{5}{6}$$

The graph below shows the amount of money earned by Mrs Brown last week. Use the graph to answer question 33 and 34.

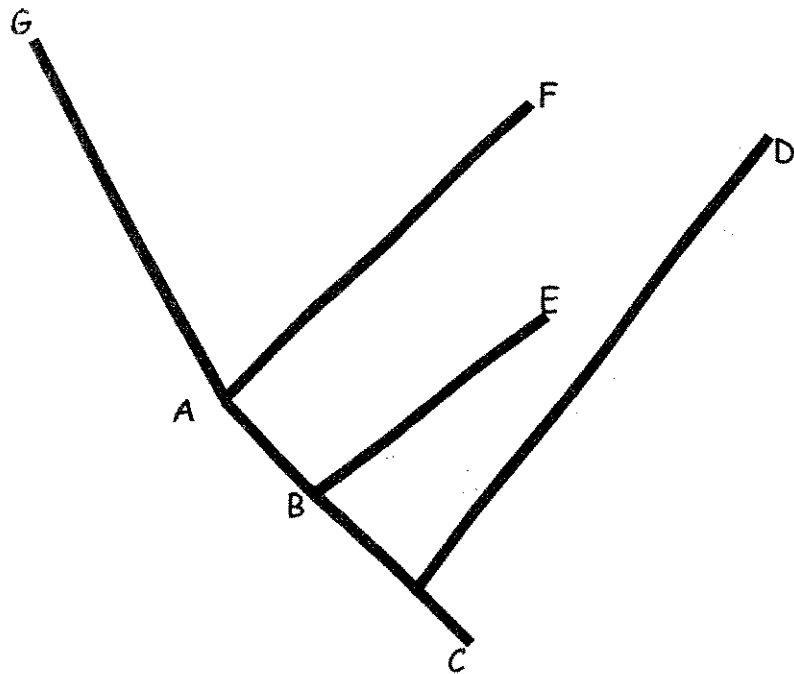
Mrs Brown's earnings



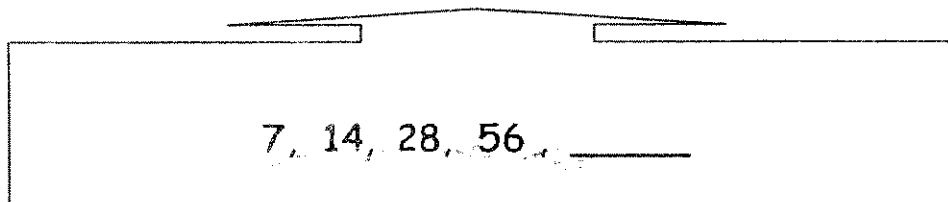
33) How much more did she earn on Thursday than on Wednesday?

34) On which day did she earn twice as much money as Wednesday?

35) Which line is perpendicular to line AF?



36) What is the missing number in the number pattern below ?



- 37) Koko earns \$50 an hour for a storytelling session at a library. The time table below shows the amount of time she spends conducting the storytelling sessions in a week.

Mon	1 h
Tue	30 min
Wed	1 h 30 min
Thu	1 h

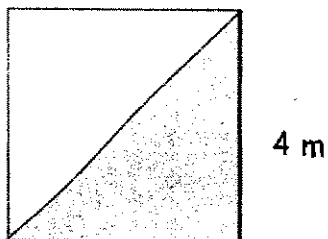
How much does she earn from conducting the storytelling sessions in a week?

- 38) Rope A is 31 cm shorter than Rope B. Rope C is 24 cm longer than Rope B. Find the difference in length between Rope A and Rope C.

- 39) Jane is half as old as Tom. Tom is half as old as Dick. Their ages add up to 112 years old. How old is Dick?

_____ years

- 40) The length of 1 side of a square room is 4 m. Mr Li covered the floor of the room with carpet as shown in the shaded portion of the figure below. What area of the floor was covered with carpet?



_____ m²

Section C: (4 marks each)

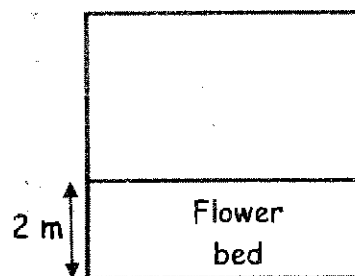
Do these problem sums. Show your working clearly in the space provided.

41) Jane has 20 marbles less than Mary. Lucy has the same number of marbles as Jane. If they have 290 marbles in all, how many marbles does Mary have?


42) Amos bought a packet of marbles. He gave half of the packet of marbles to his cousin and gave Tim and Sam 4 marbles each. He found that he had 6 marbles left. How many marbles did Amos buy?

- 43) Sam bought a shirt and a wallet for a total cost of \$72. The wallet cost thrice as much as the shirt. What is the cost of the wallet?


- 44) The area of a square plot of land is 64 m^2 . If the breadth of the rectangular flower bed is 2 m, what is the perimeter of the rectangular flower bed on this plot of land ?



45) The prices of two sizes of candles at a shop are shown below.

	Small candle \$1 each
	Large candle \$2 each

Jack bought 4 more small candles than large candles. He spent \$28 altogether. How many small candles did he buy?



ANSWER SHEET

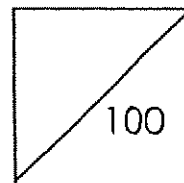
Henry Park Pri 3 SA2/2007 MATHS

- 1)2 2)3 3)2 4)4 5)2 6)2
- 7)4 8)3 9)3 10)2 11)4 12)3
- 13)4 14)1 15)2 16)2 17)3 18)3
- 19)4 20)4 21)x 22)\$11.50 23)72kg 24)2
- 25)ED & BC 26)9 27)116 egg 28)\$2.60 29)11.05am 30)350cm
- 31)1100ml 32) $\frac{7}{12}, \frac{2}{3}, \frac{5}{6}$ 33)\$30 34)Friday 35)AB 36)112
- 37)\$200 38)5cm 39)64 40)8m² 41)110 marbles
- 42)28 marbles 43)\$54 44)20m 45)12 small candles

KONG HWA SCHOOL
SEMESTRAL ASSESSMENT TWO 2007
MATHEMATICS
Primary Three

Name: _____ ()

Marks:

Class : Primary 3 ()Date : 25 October 2007Duration: 1 h 30 min

Parent's Signature: _____

Section A (15 x 2 marks)

For each question, four options are given but only one is correct. Choose the correct answer and shade its number (1, 2, 3 or 4) on the Optical Answer Sheet (OAS) provided.

1. In 8975, the digit _____ is in the hundreds place.

(1) 5

(2) 7

(3) 8

(4) 9

()

2. Which set of numbers is arranged from the greatest to the smallest?

(1) 1612, 1621, 6812, 6821

(2) 1621, 1612, 6812, 6821

(3) 6812, 6821, 1621, 1612

(4) 6821, 6812, 1621, 1612

()

3. When Alex added 2347 to 5134, his answer was 7581. He made a mistake in the _____ place.

(1) ones

(2) tens

(3) hundreds

(4) thousands

()

4. 568 less than 100 hundreds is _____.

(1) 432

(2) 668

(3) 9412

(4) 9432

()

5. There are 24 hours in a day.
How many hours are there in 1 week?

(1) 120

(2) 144

(3) 168

(4) 240

()

6. What is the quotient when 2000 is divided by 5?

- (1) 10000
- (2) 400
- (3) 40
- (4) 4

()

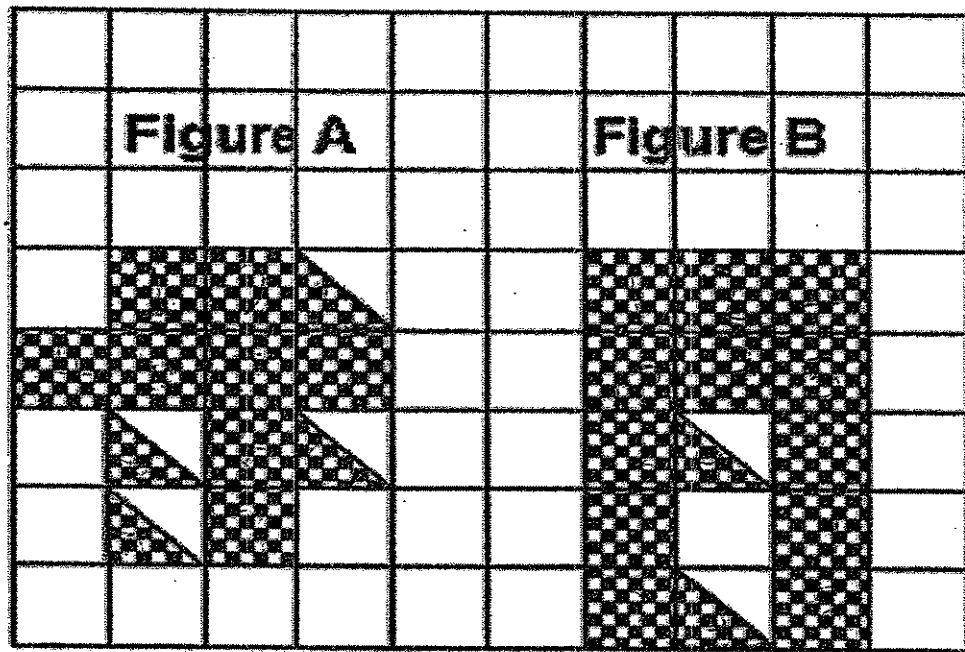
7. I can exchange \$26 for ten \$2 notes and _____ 50¢ coins.



- (1) 52
- (2) 13
- (3) 12
- (4) 4

()

Based on the figures given below, answer Questions 8 and 9.



8. The total area of the shaded parts in Figure A and Figure B is _____ square units.

- (1) 20
- (2) 23
- (3) 26
- (4) 33


()

9. Figure A is _____ squares units smaller than Figure B.

- (1) 1
- (2) 2
- (3) 3
- (4) 4

()

10. The bar graph shows the total number of marks Aloysius, Joshua and Gabriel scored in an English test.



If the 3 boys scored a total of 205 marks, how many marks did Aloysius score more than Joshua?

- (1) 10
(2) 20
(3) 30
(4) 55 ()

-
11. What is the sum of 2 kg 50 g and 300 g ?

- (1) 1750 g
(2) 2080 g
(3) 2350 g
(4) 2800 g ()

12. If the capacity of each cup is 80 ml, what is the volume of the water left in the beaker after filling the 3 cups?



- (1) 20 ml
(2) 240 ml
(3) 760 ml
(4) 920 ml

()

-
13. What is the possible height of the Kong Hwa School's flag pole?

- (1) 5 cm
(2) 5 m
(3) 50 m
(4) 5 km

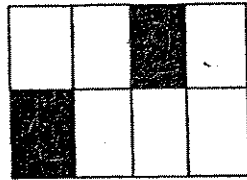
()

14. $\frac{1}{3} + \frac{1}{6} =$

- (1) $\frac{1}{9}$
(2) $\frac{2}{9}$
(3) $\frac{1}{3}$
(4) $\frac{1}{2}$

()

15. What fraction of the figure is shaded?



(1) $\frac{1}{4}$


(2) $\frac{2}{6}$

(3) $\frac{1}{2}$

(4) $\frac{3}{4}$

()

-
16. What is the time shown on the clock below?



- (1) Five minutes past five
(2) Five minutes to five
(3) Twenty-five minutes past one
(4) Twenty-five minutes to one


()

17. Johnny practised his violin for 104 minutes. Express your answer in terms of hours and minutes.

- (1) 1 h 4 min
- (2) 1 h 40 min
- (3) 1 h 44 min
- (4) 10 h 4 min

()

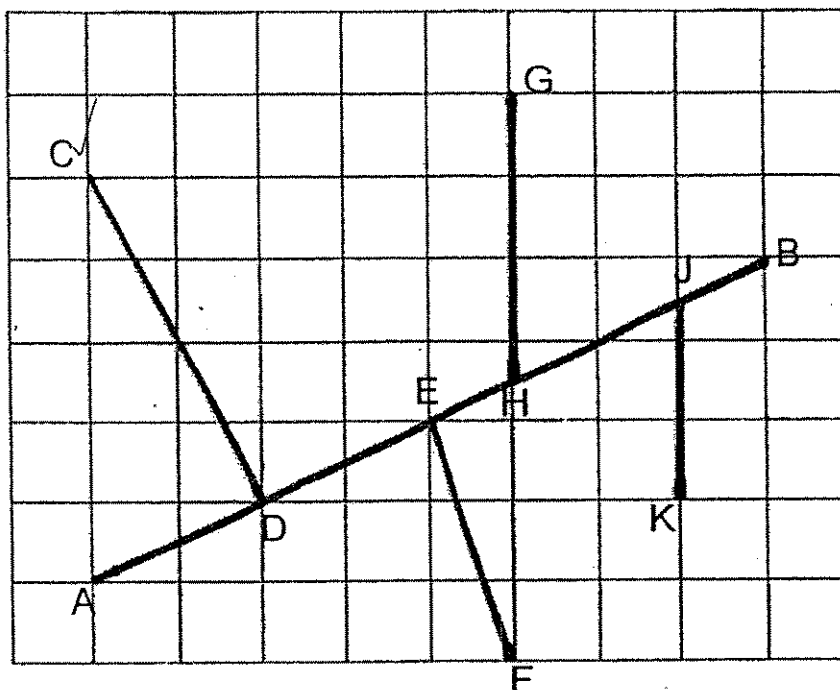
-
18. Which of the following angles shown in the following figure is smaller than a right angle?



- (1) $\angle a$ and $\angle b$
- (2) $\angle b$ and $\angle c$
- (3) $\angle c$ and $\angle d$
- (4) $\angle a$ and $\angle d$

()

19. Which line is perpendicular to line AB?



- (1) Line CD
- (2) Line EF
- (3) Line GH
- (4) Line JK ()



20. There are 4 boxes on the table. Box A is heavier than Box B. Box C is lighter than Box D. Box A is lighter than Box D. Which is the heaviest Box?

- (1) Box A
- (2) Box B
- (3) Box C
- (4) Box D ()

End of Section A

Section B (20 x 2 marks)

For each question, show your working clearly in the space below and write your answer in the box provided. Give your answer in the unit stated.

21.  +  = 1500


 x 3 = 

What is the value of  ?

22. Each insect has 6 legs.
How many legs do 9 insects have?

 legs

23. If each athlete drinks 2 bottles of water during a marathon, how many bottles of water are needed for 1328 athletes?


 bottles

24. Shade the number which has a digit 5 in the hundreds place and the digit in the tens place is 2 more than the digit in the ones place.

5137

7513

7525

7531

-
25. What is the largest 4-digit odd number that can be formed with the given digits below?

5

1

0

7

-
26. Xinle gave 595 beads equally to her 7 cousins. How many beads did each of her cousins receive?

beads

27. Johnny has 20 toy cars and toy bicycles. These toy cars have 32 wheels altogether. How many toy bicycles does he have?

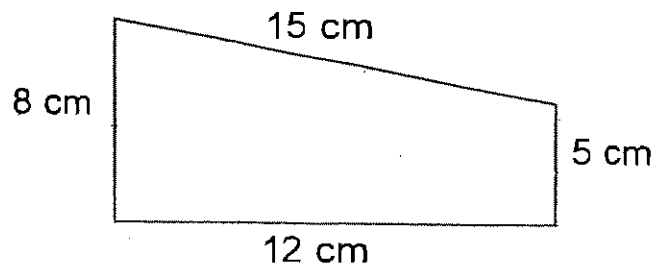


toy bicycles

28. At a fruit stall, apples are only sold in packets of 5. Each packet is sold at \$1.20. How many apples can Mrs Toh buy **at most** if she has only \$5?

apples

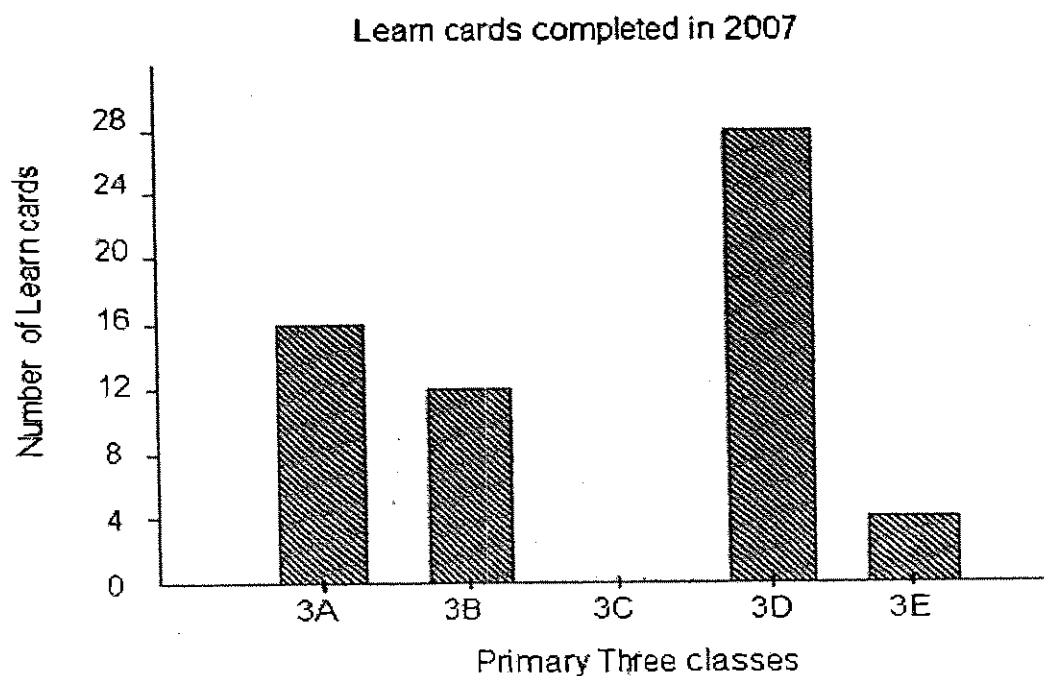
29. Find the perimeter of the figure below.



cm

30. Study the table and bar graph carefully. Then complete the bar graph.

Classes	Number of Learn Cards completed
Class 3A	16
Class 3B	12
Class 3C	8
Class 3D	28
Class 3E	4
Total number of cards	68



31. John had 2 m 30 cm of ribbon and Mary had 145 cm of ribbon. What was the total length of the ribbon?

 cm

-
32. A jug holds 468 ml of water. All the water is poured equally into 6 similar cups. How much water is there in each cup?

 ml

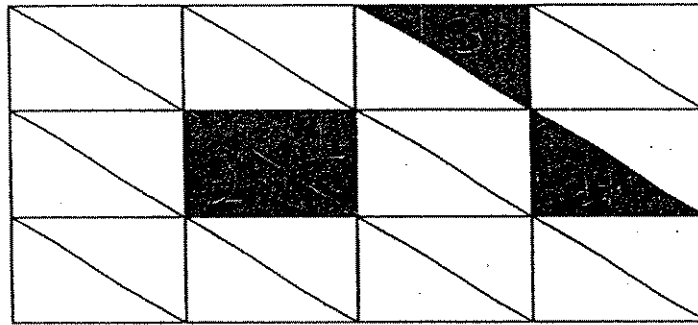
-
33. Lionel jogged 2 km 50 m on Saturday. He jogged 150 m more on Sunday than on Saturday. What was the total distance jogged by Lionel for the two days?

 m

-
34. Arrange the fractions in order, beginning with the greatest.

$$\frac{1}{3}, \frac{1}{2}, \frac{3}{4}$$

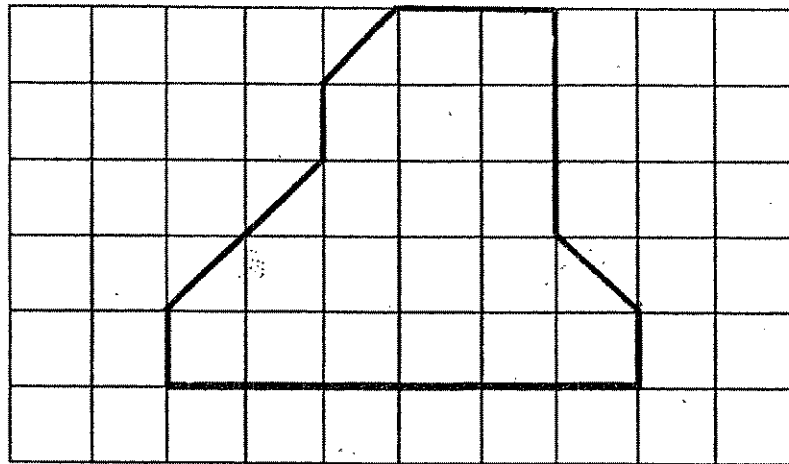
35. John has already shaded some units in the figure below. How many more units must he shade if he wants to shade $\frac{1}{4}$ of the figure?



units

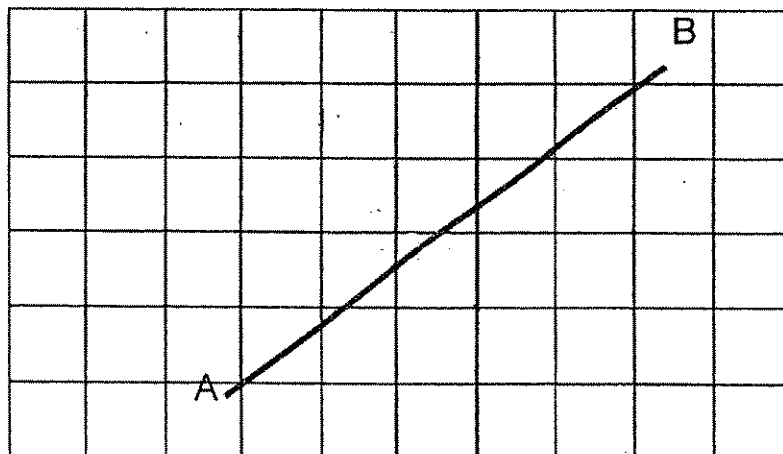
36. A cake was cut into 10 equal pieces. Sam ate 2 pieces and Danny ate 4 pieces. What fraction of the cake was left? Give your answer in its simplest form.

37. How many right angles are there in the figure below?

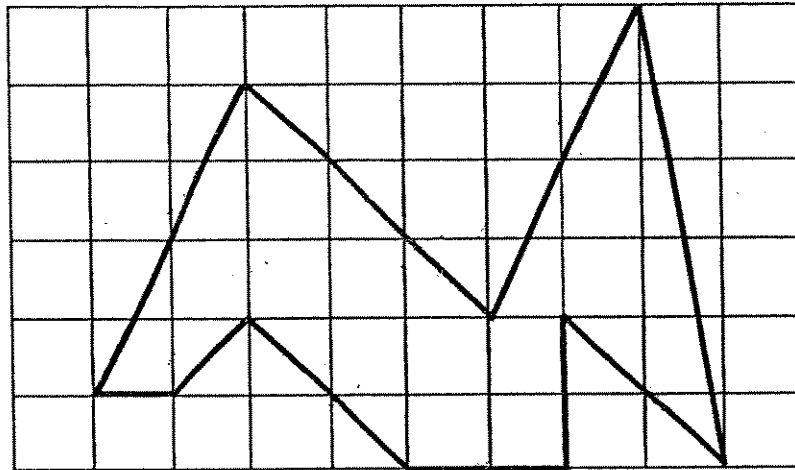


right angles

38. Draw a perpendicular line to the line AB.



39. How many pairs of parallel lines are there in the figure below?



pairs

40. Harry woke up at 6.05 a.m. He took 10 min to brush his teeth and 20 min to eat his breakfast. He then left for school and took 35 min to reach school. What time did Harry reach school?

a.m.

Section C (5 x 4 marks)

For each word problem, write down the working steps and answers clearly in the space provided.

41. During a toy sale, 5230 toys were sold on Sunday and 2340 toys were sold on Monday.


- (a) How many more toys were sold on Sunday than on Monday?
- (b) What was the total number of toys sold on both days?

42. There were 9 classes of Primary Three pupils who visited the Hay Dairy goat farm. There were 5 classes of 35 pupils and 4 classes of 37 pupils. How many pupils visited the farm altogether?


43. A book and 6 pens cost as much as 15 pens.
The book costs \$18.
- (a) What is the cost of 1 pen?
(b) What is the total cost of the book and the 6 pens?

-
44. Mrs Lee bought some donuts. She kept 12 for her family and gave the rest to her 2 neighbours. If each neighbour received 8 donuts each, how many donuts did Mrs Lee have at first?

45. From the diagrams given below, find the mass of an apple.




1 pineapple and an apple



2 pineapples and an apple

End-of-Paper
Please check your work.



ANSWER SHEET

Kong Hwa Pri 3 SA2/2007 MATHS

- 1)4 2)4 3)3 4)4 5)3 6)2
 7)3 8)2 9)3 10)1 11)3 12)3
 13)2 14)4 15)1 16)1 17)3 18)3
 19)1 20)4 21)2250 22)54 legs 23)2656 bottles
 24)7531 25)7501 26)85 beads 27)12 toy bicycles 28)20 apples

- 29)40cm 30) 31)375cm 32)78ml

- 33)4250m

- 34) $\frac{3}{4}, \frac{1}{2}, \frac{1}{3}$

- 37)3

- 39)5 pairs

- 40)7.10am

- 41)a. 2890 toys

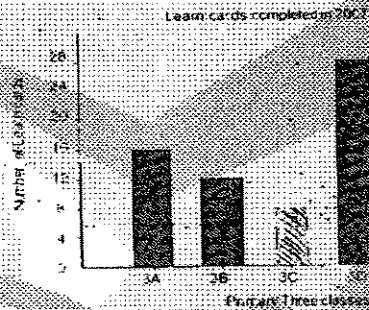
- b. 7570

- 42)323 pupils

- 43)530

- 44)28 donuts

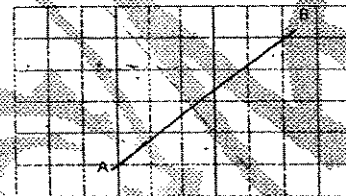
- 45)150g



- 35)1

- 36) $\frac{2}{5}$

- 38)





NANYANG PRIMARY SCHOOL
SECOND SEMESTRAL EXAMINATION
2007

PRIMARY 3
MATHEMATICS

DURATION: 1 HOUR 45 MINUTES

Section A	/ 40
Section B	/ 40
Section C	/ 20

Total:	/ 100
---------------	--------------

Name: _____ ()

Class: Primary 3 ()

Date: 31 October 2007

Parent's Signature: _____

DO NOT OPEN THIS BOOKLET UNTIL YOU ARE TOLD TO DO SO.

FOLLOW ALL INSTRUCTIONS CAREFULLY.

ANSWER ALL QUESTIONS.

Section A

Questions 1 to 20 carry two marks each. For each question, four choices are given. One of them is the correct answer. Make your choice (1, 2, 3 or 4). Shade the oval (1, 2, 3 or 4) on the Optical Answer Sheet.

(Total: 40 marks)

1. 84 hundreds is the same as _____
 - (1) 8 hundreds and 4 tens
 - (2) 8 thousands and 4 ones
 - (3) 8 thousands and 4 tens
 - (4) 8 thousands and 40 tens

2. What is the value of $\$1.40 + 45¢$?
 - (1) \$0.95
 - (2) \$1.85
 - (3) \$95.00
 - (4) \$185.00

3. Andy bought a box of chocolates at \$14 and a pack of candy at \$4.85. If he gave the cashier a 50-dollar note, how much change would he get?
 - (1) \$31.15
 - (2) \$40.85
 - (3) \$59.15
 - (4) \$68.85

4. Which of the following is not an equivalent fraction of $\frac{2}{3}$?
 - (1) $\frac{4}{6}$
 - (2) $\frac{6}{8}$
 - (3) $\frac{6}{9}$
 - (4) $\frac{8}{12}$

5. A group of pupils made a total of 3018 paper cranes in 3 weeks. If they made 708 paper cranes in the first week and 1265 paper cranes in the second week, how many paper cranes did they make in the third week?
 - (1) 1045
 - (2) 1065
 - (3) 1145
 - (4) 1973

6. Express $\frac{12}{15}$ in its simplest form.

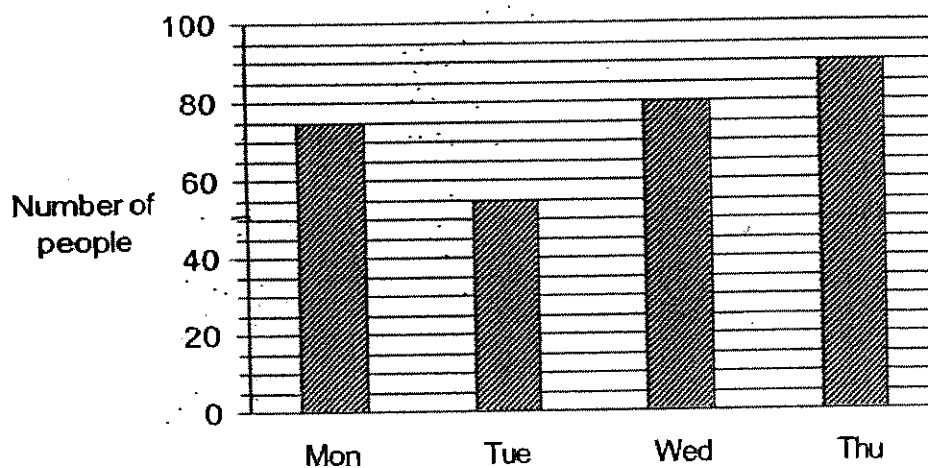
(1) $\frac{2}{3}$

(2) $\frac{2}{5}$

(3) $\frac{3}{5}$

(4) $\frac{4}{5}$

7. The graph below shows the number of people who visited a museum on four days.



How many people visited the museum on Tuesday?

(1) 43

(2) 50

(3) 55

(4) 58

8. A bottle and a container have a total capacity of $3\frac{1}{500}$ ml. If the container can hold 600 ml more water than the bottle, what is the capacity of the container?

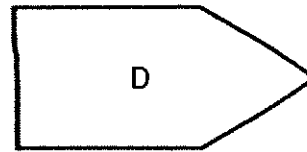
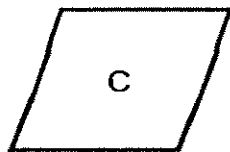
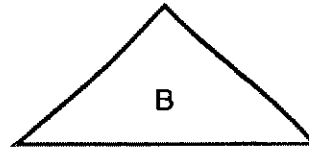
(1) 1450 ml

(2) 2050 ml

(3) 2900 ml

(4) 4100 ml

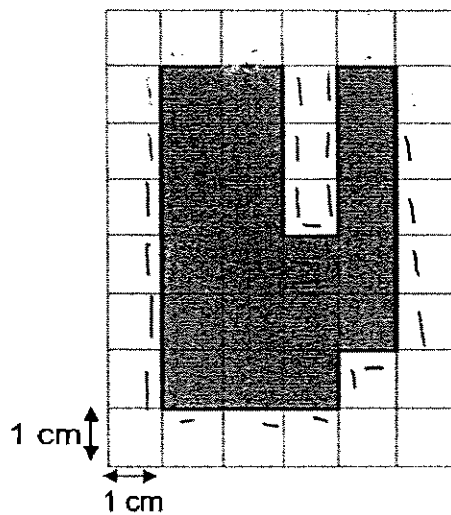
9. Which of the following figure contains **only** a pair of parallel lines and 2 pairs of perpendicular lines?



- (1) A
(3) C

- (2) B
(4) D


10. What is the perimeter of the shaded figure below?



- (1) 20 cm
(3) 26 cm

- (2) 24 cm
(4) 28 cm





16. Study the picture below.



If the mass of each orange is 150 g, what is the mass of the cake?

- | | |
|------------|------------|
| (1) 800 g | (2) 900 g |
| (3) 1050 g | (4) 1200 g |

17. Which of the following clock faces shows the hour hand and minute hand making a right angle?



- | | |
|-------|-------|
| (1) A | (2) B |
| (3) C | (4) D |

18. Elvis started climbing a hill at 9.50 a.m. If he took 75 minutes to climb to the top of the hill, what time did he reach the top of the hill?

- (1) 8.35 a.m. (2) 10.05 a.m.
 (3) 10.25 a.m. (4) 11.05 a.m.

19. Which of the following statements is true about A and B?

$$\begin{array}{r}
 \quad 4 \quad 5 \quad 2 \quad \boxed{B} \\
 - \quad 3 \quad 8 \quad \boxed{A} \quad 3 \\
 \hline
 \quad 6 \quad 3 \quad 8 \\
 \hline
 \end{array}$$

- (1) B is greater than A.
 (2) The sum of A and B is 9.
 (3) A and B are both even numbers.
 (4) The difference between A and B is 6.
20. Margaret has 250 stickers left after giving 6 of her friends 89 stickers each. How many stickers did Margaret have at first?

- (1) 484 (2) 534
 (3) 734 (4) 784

Section B

Questions 21 to 40 carry 2 marks each.

Write your answers in the blanks provided.

(Total: 40 marks)

21. Write 5 thousands, 4 tens and 43 ones in figures.

Answer : _____

22. Use all the digits 7, 5, 2 and 0 to form the smallest four-digit even number.

Answer : _____

23. Arrange the following numbers in descending order.

5124 , 5412 , 5214 , 5421

Answer : _____

24. Last year, the library bought 3460 English books and 550 fewer Chinese books than English books. What was the total number of books bought?

Answer : _____

25. What is the missing number in the box?


$$24 \times 7 = 3 \times \square$$

Answer : _____

26. Hubert had 757 sweets. He packed them into bags of 9 sweets. How many sweets were left over?

Answer : _____

27. Express the following sum of money in cents.



Answer : _____¢

28. Ali had \$100. He bought 2 books at \$35.90 each and a calculator at \$15.50. How much money had he left?

Answer : \$__

29. The distance between every 2 lamp posts is 200 m. Calculate the distance between the first and tenth lamp post. Give your answer in km and m.

Answer : _____ km _____ m

30. A jar containing flour weighs 6 kg 459 g. If the flour weighs 3 kg 50 g, what is the mass of the empty jar?

Answer : _____ g

31. To make lemonade, Marie used 850 ml of lemon syrup and twice as much water as the lemon syrup. How much lemonade would Marie get?

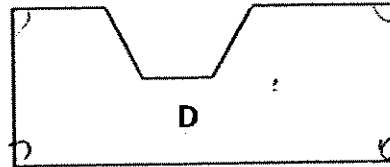
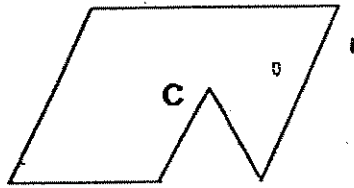
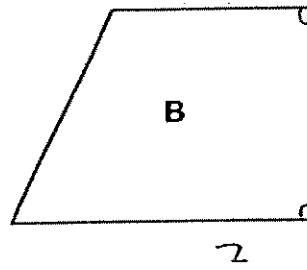
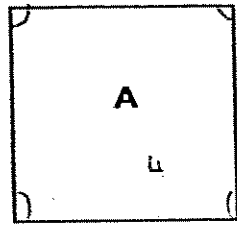
Answer : _____ ml

32. Arrange the following fractions in order, beginning with the smallest.

$$\frac{4}{5}, \frac{4}{9}, \frac{4}{7}$$

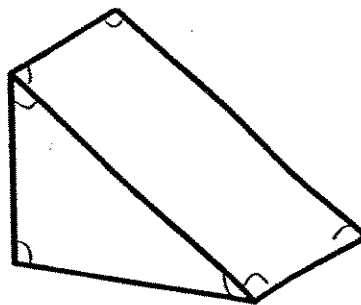
Answer : _____

33. Which of the following 2 figures have the same number of right angles in them?



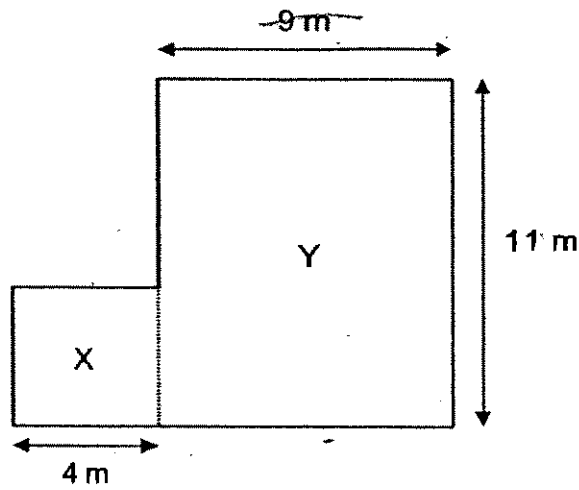
Answer : _____ and _____

34. How many angles are there in the object below?



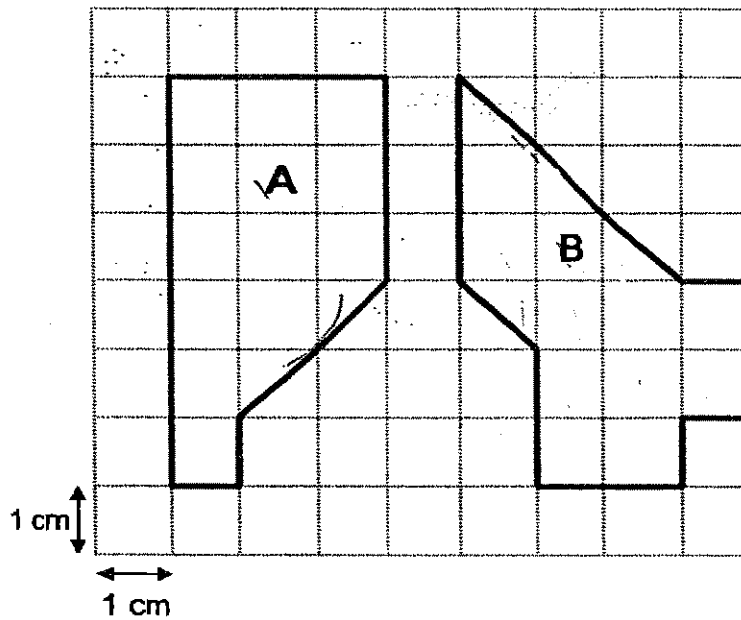
Answer: _____

35. The figure below is made up of Square X and Rectangle Y. Find the perimeter of the figure.



Answer : _____ m

36. Study Figures A and B carefully.



Which figure has a greater area?

Answer : Figure _____

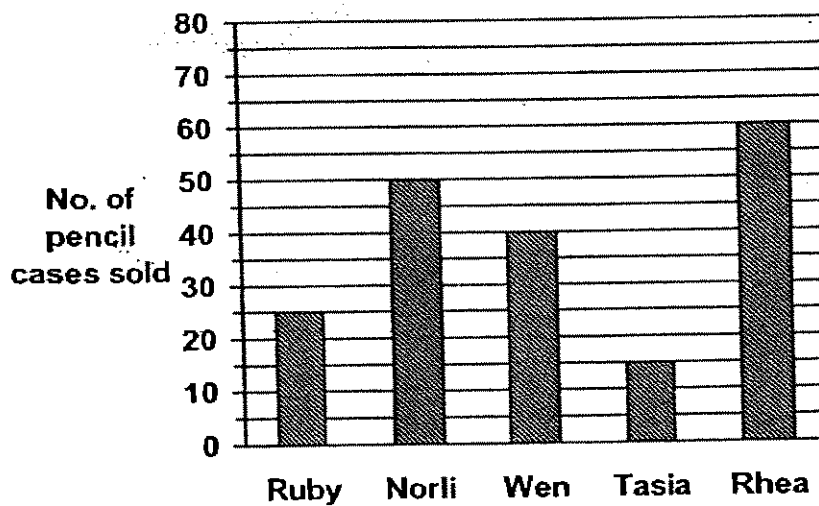
37. Miss Loh had 2136 roses and 6722 tulips in the shop. After selling 3455 tulips, how many more tulips than roses did she have left?

Answer :

38. Subtract $\frac{1}{4}$ from the sum of $\frac{2}{3}$ and $\frac{1}{6}$. Give your answer in its simplest form.

Answer : _____

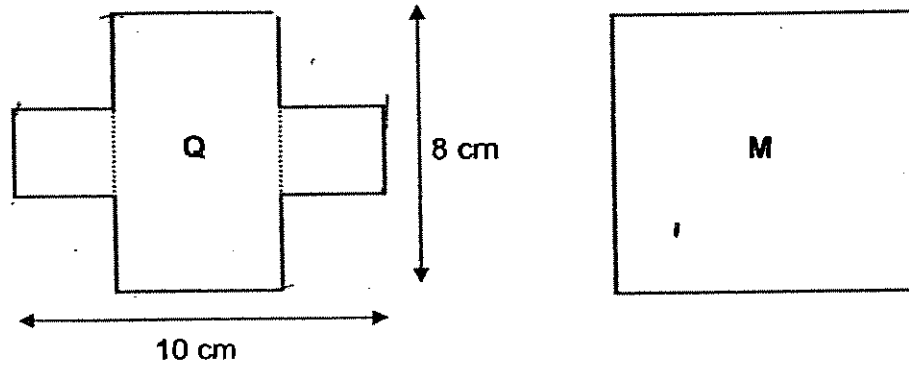
39. The graph below shows the number of pencil cases sold by 5 girls in a fund raising event.



If each pencil case was sold for \$4, how much was collected by Rhea and Tasia altogether?

Answer : \$ _____

40. Figure Q is made up of a rectangle and 2 identical squares. Find the area of Square M if it has the same perimeter as Figure Q.



Answer : _____ cm²

Section C

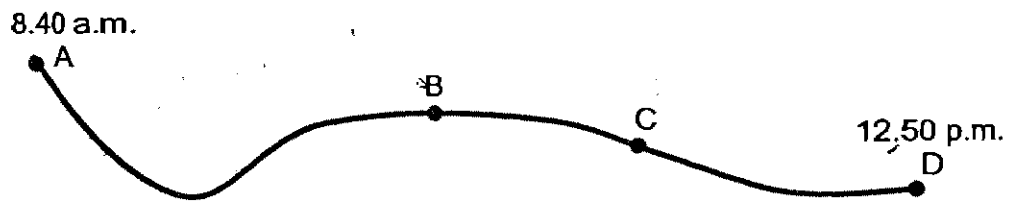
Questions 41. to 45 carry 4 marks each. Do these word problems carefully.
Show your working in the space provided.

(Total: 20 marks)

41. Three similar pairs of soccer boots cost \$120. 1 pair of soccer boots and 2 pairs of track shoes cost \$240. How much does 1 pair of soccer boots and 1 pair of track shoes cost in total?

42. Mr Tan spent \$190.60 in a boutique. He bought a shirt, a pair of pants and 2 similar ties. He bought the shirt at \$49.90. If the pair of pants cost \$12.80 more than the shirt, how much was the cost of each tie?

43. At 8.40 a.m., Aryan boarded a train at Town A to travel to Town D. It took him 2 h 15 min to reach Town B. From Town C to Town D, it took him 1 h 5 min.



If Aryan reached Town D at 12.50 p.m.,


- what was the total time taken for him to travel from Town A to Town D?
- how long did the train take to travel from Town B, Town C?

44. Jake had 160 more marbles than Ling at first. After Jake gave away 230 marbles, Ling had twice as many marbles as Jake. How many marbles did Jake have at first?

45. Abigail, Benny and Cathy have 550 marbles altogether. Abigail has thrice as many marbles as Benny. Cathy has 40 more marbles than Benny. How many more marbles does Abigail have than Cathy?

☺ **End of Paper** ☺
Please Check Carefully

Setters:
Mr Azman



ANSWER SHEET

NANYANG PRIMARY SCHOOL - PRIMARY 3 MATHEMATICS 2007
SEMESTRAL ASSESSMENT (2)

1. 4
2. 2
3. 1
4. 2
5. 1
6. 4
7. 3
8. 2
9. 4
10. 3
11. 1
12. 4
13. 1
14. 3
15. 2
16. 2
17. 2
18. 4
19. 2
20. 4
21. 5083
22. 2570
23. 5421, 5412, 5214, 5124
24. 6370
25. 56
26. 1
27. 5660
28. \$12.70
29. 1KM 800M
30. 3409g
- 31) 2 l 550ml
- 32) $\frac{4}{9}, \frac{4}{7}, \frac{4}{5}$
- 33) A and D
- 34) 18
- 35) 48m
- 36) A
- 37) 1130
- 38) $\frac{7}{12}$
- 39) \$300
- 40) 81cm²


41) $\$120 \div 3 = \40
 $\$240 - \$40 = \$200$
 $\$200 \div 2 = \100
 $\$100 + \$40 = \$140$
It cost \$140

42) $\$49.90 + \$12.80 = \$62.70$
 $\$62.70 + \$49.90 = \$112.60$
 $\$190.60 - \$112.60 = \$78$
 $\$78 \div 2 = \39
Each tie cost \$39

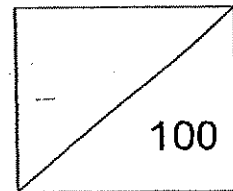
43) $12.50 - 8.40 = 4\text{h } 10\text{min}$
The total time taken was 4h 10min.
 $2\text{h } 15\text{min} + 1\text{h } 5\text{min} = 3\text{h } 20\text{min}$
 $4\text{h } 10\text{min} - 3\text{h } 20\text{min} = 50\text{min}$
It took 50min to travel from Town B to Town C

44) $230 - 160 = 70$
 $70 + 230 = 300$
Jake had 300 marbles at first

45) $550 - 40 = 510$
 $510 \div 5 = 102$
 $102 + 40 = 142$
 $102 \times 3 = 306$
 $306 + 102 + 142 = 550$
 $306 - 142 = 164$
Abigail has 164 more marbles than Cathy.



Catholic High School
End-Of-Year Examination 2007
Mathematics
Primary 3



Name: _____ ()

Class: Primary 3 _____

Date: 25th October 2007

Duration: 1 h 30 min

Parent's Signature: _____

There are 3 sections consisting of 19 pages in this paper.

Section A: Multiple-Choice Questions (MCQ) 20 x 2 marks

Section B: Open-Ended Questions 20 x 2 marks

Section C: Story Sums 5 x 4 marks

SECTION A: Multiple-Choice Questions (20 x 2 marks)

For each of the question from 1 to 20, four options are given. One of them is the correct answer. Make your choice (1, 2, 3 or 4). Shade the correct oval (1, 2, 3 or 4) on the Optical Answer Sheet (OAS).

1. How many tens are there in 5348?
 - (1) 48
 - (2) 348
 - (3) 534
 - (4) 4

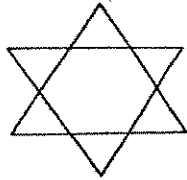
2. 3762 is 985 more than _____.
 - (1) 2777
 - (2) 2877
 - (3) 4647
 - (4) 4747

3. Find the product of 492 and 6.
 - (1) 82
 - (2) 498
 - (3) 2952
 - (4) 3056

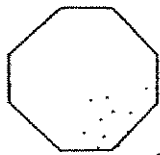
4. Express 175 minutes in hours and minutes.
 - (1) 2 h 25 min
 - (2) 2 h 45 min
 - (3) 2 h 55 min
 - (4) 3 h 15 min

5. Which one of the following diagrams has 3 pairs of parallel lines only?

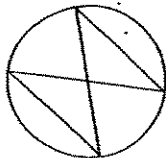
(1)



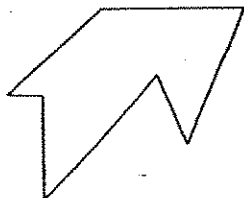
(2)



(3)



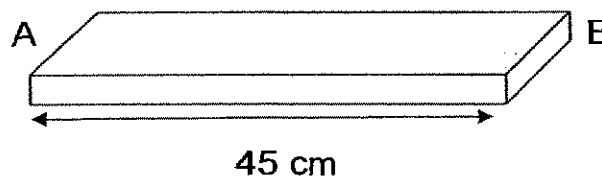
(4)



6. A fruit seller had 45 more durians than watermelons. After selling 168 watermelons, he had 23 watermelons left. How many durians did he have?


- (1) 146
- (2) 191
- (3) 213
- (4) 236

7. A bakery had 95 apple tarts and some egg tarts. After selling 286 tarts, there were 47 tarts left. How many egg tarts were there at first?
- (1) 142
(2) 238
(3) 239
(4) 333
8. Mr. Tan wanted to pack some potatoes into packets of 6-potatoes each. After packing the potatoes, he had 9 packets and was left with 5 potatoes. How many potatoes did he have in all?
- (1) 39
(2) 49
(3) 54
(4) 59
9. The length of the wooden plank AB is 45 cm. John wants to make cuts on the wooden plank at 9-cm intervals. How many cuts will he have made from A to B?



- (1) 5
(2) 36
(3) 54
(4) 4

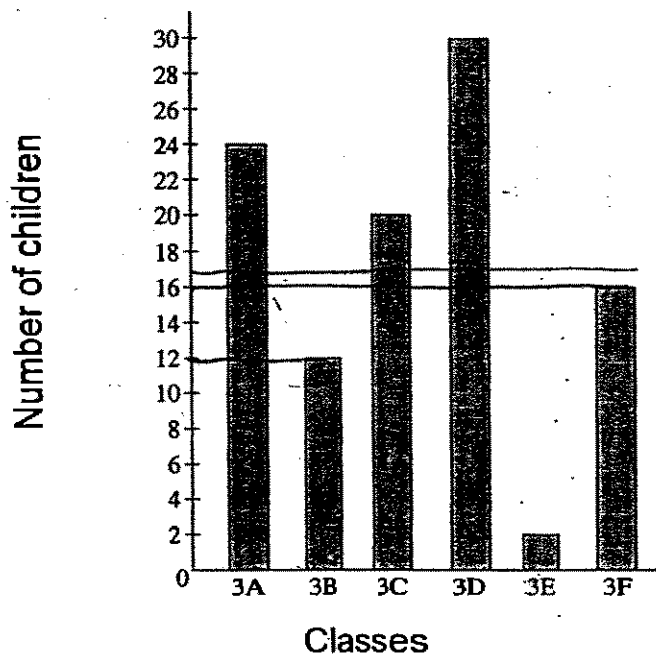
10. Look at the picture below.



Given that the mass of both jars of peanut butter is the same, find the mass of 1 jar of peanut butter.

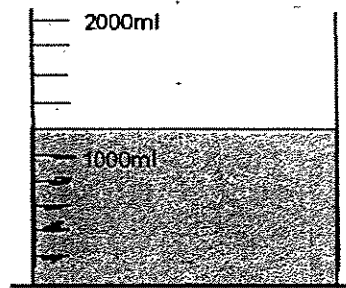
- (1) 320 g
 - (2) 325 g
 - (3) 640 g
 - (4) 650 g
11. Mrs. Ng spent $\frac{5}{12}$ h on mopping the floor and $\frac{1}{4}$ h on doing the laundry. How much time did she spend on both chores?
- (1) $\frac{1}{6}$ h
 - (2) $\frac{1}{3}$ h
 - (3) $\frac{1}{2}$ h
 - (4) $\frac{2}{3}$ h

The graph below shows the number of children who keep pets in some classes. Use it to answer questions 12 and 13.



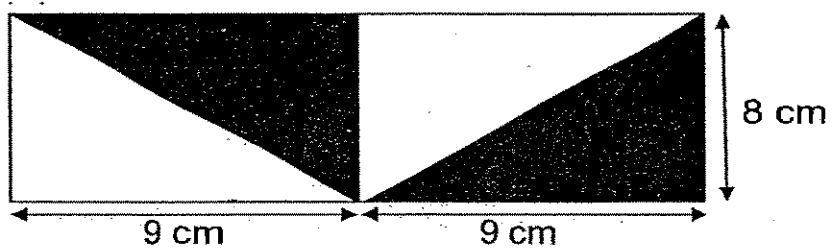
12. If there are 37 children in class 3F, how many children do not keep pets?
- (1) 16
(2) 21
(3) 35
(4) 53
13. Which class has half as many children keeping pets as class 3A?
- (1) 3B
(2) 3C
(3) 3D
(4) 3E

14. The beaker shown below contains some water.



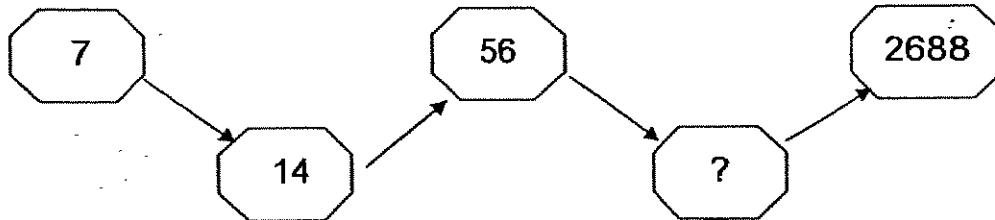
280 ml of water is added to the water in the beaker, how much water will there be in the beaker now?

- (1) 920 ml
 - (2) 1250 ml
 - (3) 1380 ml
 - (4) 1480 ml
15. Find the shaded area of the figure below.



- (1) 36 cm^2
- (2) 52 cm^2
- (3) 72 cm^2
- (4) 144 cm^2

16. Study the pattern carefully. Find the missing number.



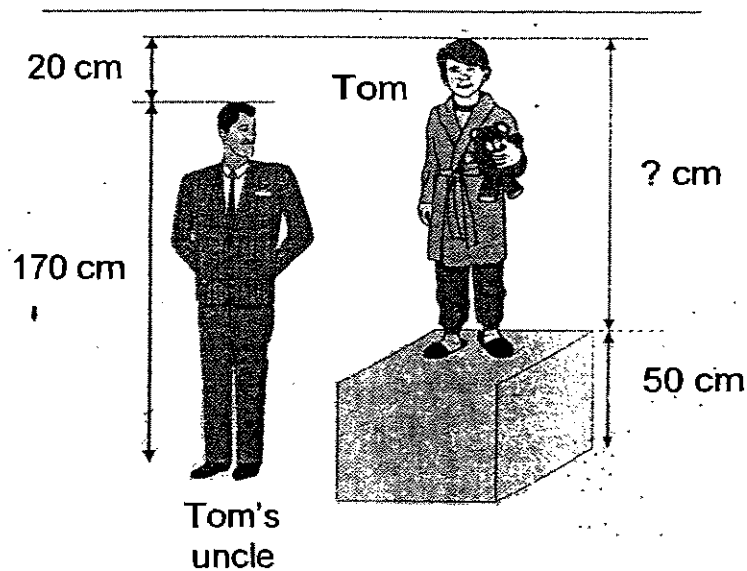
- (1) 21
- (2) 28
- (3) 56
- (4) 336

17. Li Da spilled some ink on a receipt.
What was the greatest total possible amount on the receipt?

<u>Receipt</u>	
Toothpaste	--- \$3.50
Detergent	--- \$6.80
Toilet Roll	--- \$4. [blacked out]
Total	\$15. [blacked out] 5

- (1) \$15.05
- (2) \$15.15
- (3) \$15.25
- (4) \$15.95

18. What is the height of Tom?



- (1) 50 cm
- (2) 120 cm
- (3) 140 cm
- (4) 190 cm

19. The mass of a beaker of water filled to the brim was 650 g. When half of the amount of water was poured out, the total mass of the beaker of water became 410 g. What was the mass of the empty beaker?

- (1) 140 g
- (2) 170 g
- (3) 240 g
- (4) 1060 g

20. Terrence had some toys.

$\frac{1}{2}$ of the total number of toys were guns.

$\frac{1}{4}$ of the total number of toys were cars.

The rest were aeroplanes.

Given that there were 5 toy cars, how many toys did he have in all?

- (1) 5
- (2) 10
- (3) 15
- (4) 20

Please turn over to the next page.

SECTION B: Open-ended Questions (20 x 2 marks)

Show your working clearly in the space provided and write the correct answers in the answer boxes provided.

21. $\$18.90 + \$43.55 = \underline{\hspace{2cm}}$

\$

22. Fill in the blanks with "m" or "km".

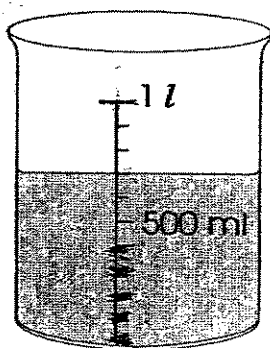
a) Joe cycles 6 _____ to school every day.

(a)


b) The height of a tree is 10 _____ tall.

(b)

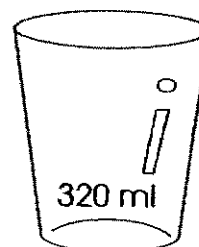
23.



Beaker



Packet

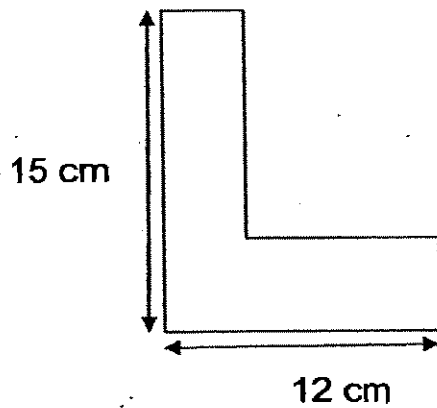


Glass

The beaker contains some milk while the packet and the glass are empty. How much milk will be left in the beaker after filling some milk into the packet and the glass completely?

ml.

24. Find the perimeter of the figure below.



25. How many odd numbers are there between 2356 and 2368?

26. A bottle can hold 426 ml of tomato juice. How much tomato juice can 8 such bottles hold?
Express your answer in litres and millilitres.

27. Arrange the fractions in order, beginning with the greatest.

$$\frac{1}{3}, \frac{5}{6}, \frac{3}{4}$$

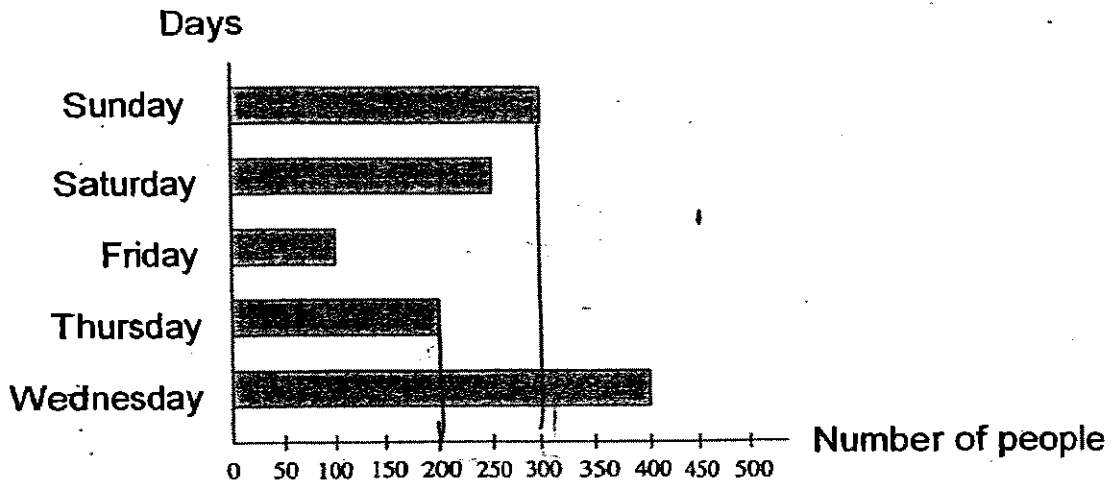
Greatest

28. The table below shows the number of curry puffs sold by five shops in a week. Which three shops sold a total of 990 curry puffs?

	Number of curry puffs sold
Shop A	125
Shop B	865
Shop C	399
Shop D	466
Shop E	373


29. Benny left his house for work at 8.50 a.m. He took 45 min to travel to work. At what time did he reach his office?

30. The graph below shows the number of people at a swimming complex over five days.

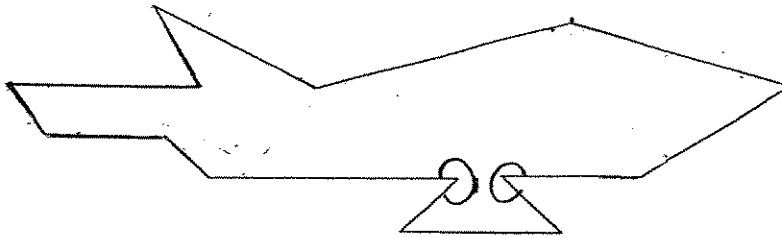


There were 100 fewer people who went to the swimming complex on Sunday than on _____.

31. By using all the digits as shown below, find the greatest difference.
Use all the digits once only.



32. Look at the figure below. How many angles are greater than a right angle inside the figure?

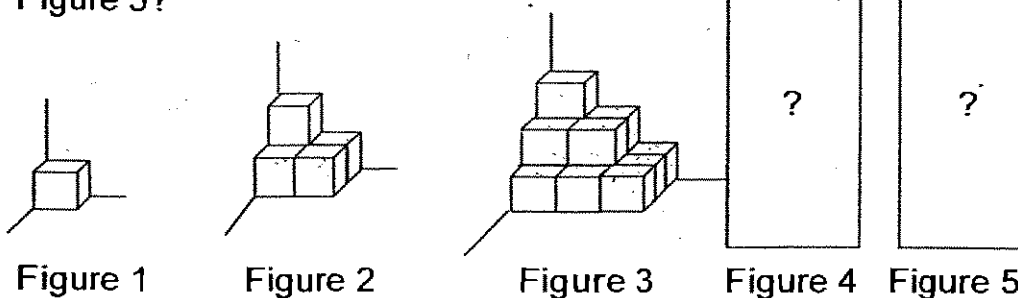


angles

33. Evan cycled once around a rectangle field with a perimeter of 500 m. If the length of the field is 180 m, find its breadth.

m

34. Study the pattern carefully. How many cubes will there be in Figure 5?



cubes

35. There are 6 teams playing in a badminton tournament. Each team is scheduled to play against every other team once. How many games are scheduled for the tournament?

36. 960 adults were watching a soccer match at a stadium. There were 3 times as many men as women at the stadium. How many women were watching the soccer match?

37. The area of square ABCD is 81 m^2 . Find the area of BEFC if the length of BE is twice the length of AB.

38. Amy had 10 equal slices of cake. She gave $\frac{3}{5}$ of the total number of slices of the cake to her neighbour.

How many slices of cake did she give to her neighbour?

39. Five trains leave the train station at equal intervals. The first train leaves at 7.20 a.m. and the last train leaves at 10.20 a.m. How long is each interval?

40. Danny had some money. He spent half of the money in the first week. He spent half of what was left in the second week and had \$34 left. How much money did Danny have at first?

SECTION C: Story Sums (5 x 4 marks)

Solve the following story sums. All workings must be shown clearly.

Draw models if necessary.

41. Grace, Eunice and Beautrice shared \$240.
Grace had twice as much money as Eunice.
Eunice had thrice as much money as Beautrice.
How much money did Beautrice have?
42. Bruce had twice as many picture cards as Evan.
After Bruce had lost 180 picture cards, Evan had thrice as many picture cards as Bruce.
How many picture cards did Bruce have at first?

43. The total mass of a bottle of chilli sauce and a bottle of tomato sauce is 450 g. The mass of the bottle of chilli sauce is 80 g heavier than the bottle of tomato sauce.
What is the mass of the bottle of tomato sauce?

44. Mark and Spencer had \$246 and \$150 respectively. How much money must Mark give to Spencer so that both of them would have the same amount of money?

45. Amanda finished her work at 3.20 p.m. according to her watch. Her watch was 25 minutes fast.
She worked for 3 h 15 min.
- (a) What was the actual time she finished her work?
 - (b) What was the actual time she started her work?

END OF PAPER

☺ *Please check your work.* ☺

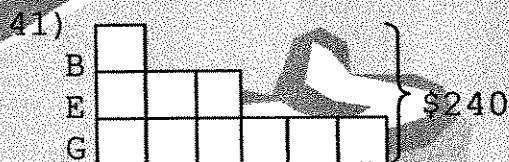


ANSWER SHEET

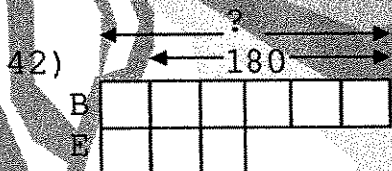
CATHOLIC HIGH PRIMARY SCHOOL - PRIMARY 3 MATHEMATICS 2007
SEMESTRAL ASSESSMENT (2)

1. 3
2. 1
3. 3
4. 3
5. 1
6. 4
7. 2
8. 4
9. 4
10. 1
11. 4
12. 2
13. 1
14. 4
15. 3
16. 4
17. 3
18. 3
19. 2
20. 4
21. \$62.45
22. a) km b) M
23. 140ml
24. 54cm
25. 6
26. 3L408ml
27. $\frac{5}{6}, \frac{3}{4}, \frac{1}{3}$
28. C, D, A
29. 9.35a.m.
30. Wednesday


40) $\$34 \times 2 = \68
 $\$68 \times 2 = \136



$10u \rightarrow \$240$
 $1u \rightarrow \$240 \div 10 = \24
 Beaurtrice had \$24




$5u \rightarrow 180$
 $1u \rightarrow 180/5 = 36$
 $6u \rightarrow 36 \times 6 = 216$
 Bruce had 216 picture cards at first



$45g - 80g = 370g$
 $370g \div 2 = 185g$
 The mass of the tomato sauce is 185g.

44) $\$246 - \$150 = \$96$
 $\$96 \div 2 = \48
 Mark must give \$48 to Spencer.

- 45) a) The actual time is 2.55pm.
 b) The actual time she started work is 11.40a.m



Anglo-Chinese School (Primary)

P3 MATHEMATICS 2007

END-OF-YEAR EXAMINATION

BOOKLET A

Name: _____ () Class: Primary 3 ____

Date: 30 October 2007

Duration of paper: 1 h 45 min

THIS BOOKLET CONTAINS 1 PAGE.
DO NOT OPEN THIS BOOKLET UNTIL YOU ARE TOLD TO DO SO.
FOLLOW ALL INSTRUCTIONS CAREFULLY.

SECTION A - Multiple Choice Questions (20 MARKS)

Questions 1 to 10 carry 2 marks each.

For each question, four options are given. One of them is the correct answer.

Make your choice (1, 2, 3 or 4). Shade the correct oval (1, 2, 3 or 4) on the Optical Answer Sheet (OAS).

1. The digit 3 in 6 327 stands for _____.
 - (1) 3
 - (2) 30
 - (3) 300
 - (4) 3 000

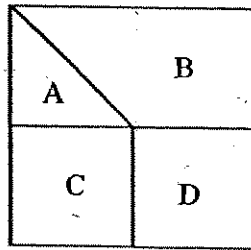
2. What is the value of 9 thousands, 4 hundreds, 6 tens and 1 one?
 - (1) 9 164
 - (2) 9 416
 - (3) 9 461
 - (4) 9 641

3. Joe has 30 stickers. He has three times as many stickers as Farhan. How many stickers do they have in all?
 - (1) 10
 - (2) 15
 - (3) 30
 - (4) 40

4. Mary has 8 stamps altogether. Some are 10-cent stamps and others are 50-cent stamps. Which one of the following **cannot** be the total value of stamps Mary has?
 - (1) \$1.20
 - (2) \$2
 - (3) \$2.40
 - (4) \$3.10

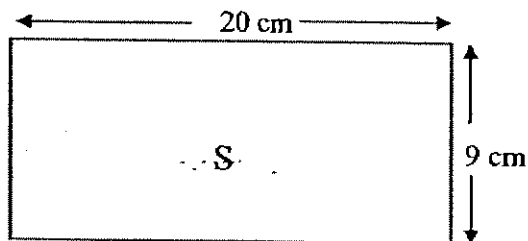
5. In a race, a participant cycles 6 km and runs 4 000 m. What is the total distance covered in this race?
- (1) 10 km
 - (2) 64 km
 - (3) 4 006 km
 - (4) 10 000 km
6. 8 030 g is the same as _____.
- (1) 8 kg 3 g
 - (2) 8 kg 30 g
 - (3) 80 kg 3 g
 - (4) 80 kg 30 g
7. A bottle contains 1.5 l of water. Mother pours out 2 glasses of 350 ml of water from it. How much water is left in the bottle?
- (1) 700 ml
 - (2) 800 ml
 - (3) 850 ml
 - (4) 1 l 150 ml
8. A movie started at 10.45 a.m. The movie lasted for 2 hours and 20 minutes. What time did the movie end?
- (1) 11.05 a.m.
 - (2) 12.45 a.m.
 - (3) 12.45 p.m.
 - (4) 1.05 p.m.

9. The figure below is a square made up of four parts, A, B, C and D. C and D are squares and each is $\frac{1}{4}$ of the figure.



Which of the following two parts will add up to form $\frac{5}{8}$ of the figure?

- (1) A and B
 - (2) B and C
 - (3) C and D
 - (4) D and A
10. What is the area of Figure S?



- (1) 18 cm^2
- (2) 29 cm^2
- (3) 58 cm^2
- (4) 180 cm^2

SECTION B - Short Answers (40 MARKS)

Questions 11 to 30 carry 2 marks each. Show all workings clearly. Write your answer in the space provided. Give your answers in the units stated and in its simplest form whenever possible.

11. What is the smallest 4-digit even number that can be formed using the digits 2, 5, 8 and 9?

12. The sum of two numbers is 340. If the bigger number is 210. What is the value of the smaller number?

13. Part of the table below was accidentally torn off. The table shows the salaries of the employees from T SQUARE company.

Employee Name	Salary
Daniel	\$2 095
Mark	\$2 785
Timothy	\$2 560
Peter	

If T SQUARE company has to pay out a total amount of \$9 800 as salary to the 4 employees, what is Peter's salary?

14. Melvin has twice as many pencils as Ali. Zachary has four times as many pencils as Ali. If Ali has 3 pencils, how many pencils do the three boys have in all?

15. Find the quotient when 16 tens and 18 ones is divided by 6.

16. Li Wen bought some lollipops. He gave 4 lollipops to his friend. He then put the rest of the lollipops equally into 3 bags. There were 5 lollipops in each bag. How many lollipops did Li Wen buy?

17. Henry paid \$5.60 for 7 similar notebooks. He bought a pencil which cost half as much as a notebook. How much did he pay for the notebooks and the pencil altogether?

\$ _____

18. The table shows the lengths of 4 types of ribbon. Which type of ribbon is the longest?

Types of Ribbon	Length
A	200 m
B	3 000 cm
C	1 km
D	1 600 m

Ribbon _____

19. The mass of Parcel A is 3 035 g. The mass of Parcel B is 280 g lighter than Parcel A. What is the mass of Parcel B? Write your answer in kg and g.

_____ kg _____ g


20. There are 3 packets of sugar. The total mass of packets A and C is 25 kg. The total mass of packets B and C is 30 kg. If C has a mass of 16 kg, what is the total mass of packets A and B?

_____ kg

21. Arrange the following fractions in descending order.

$$\frac{2}{3}, \frac{2}{9}, \frac{3}{4}$$

22. How many **more** rectangles must be shaded so that $\frac{2}{3}$ of the figure is shaded?

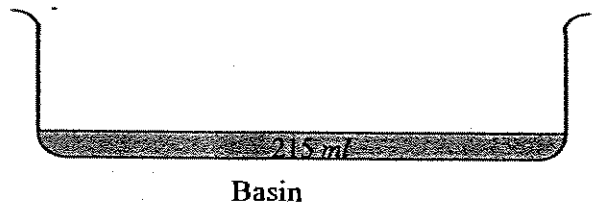
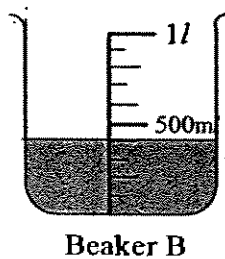
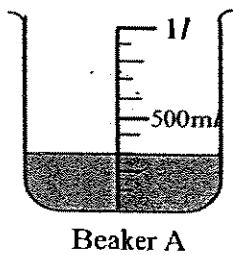


_____ more rectangles

23. A bottle holds 260 ml of fruit juice when it is a quarter full. How much fruit juice can it hold when it is completely full?

_____ ml

24. What is the total volume of water in the basin when the water in the two beakers are poured into the basin?

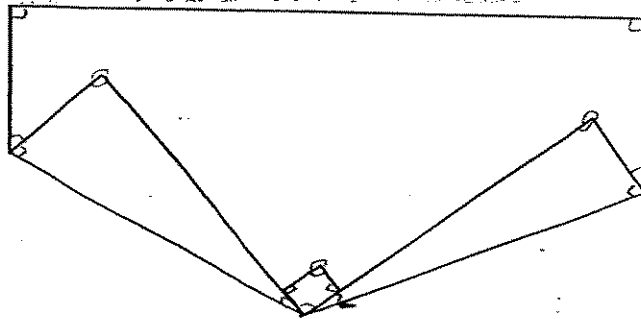


_____ ml

25. The breadth of a rectangle is 8 cm. Its length is twice of its breadth. Find the perimeter of the rectangle.

_____ cm

26. A rectangular piece of paper is folded at two of its corners. How many right angles can be observed in the figure formed?



This graph shows the different number of stickers 4 children have. Each ▼ represents a certain number of stickers.
For questions 27 and 28, refer to the following graph.

	▼		
	▼		
	▼		
	▼		
	▼		▼
▼	▼		▼
▼	▼		▼
▼	▼	▼	▼
James	Polly	David	Jay

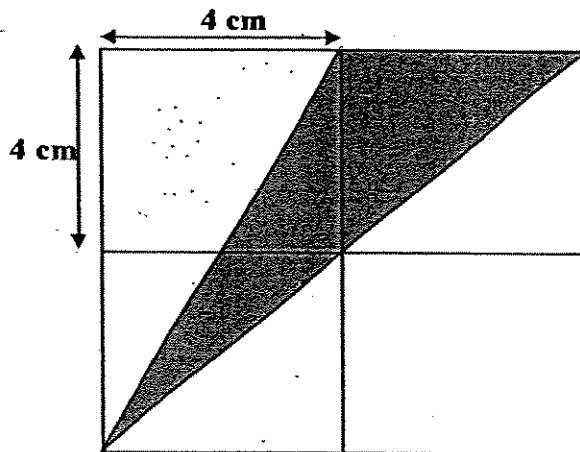
27. James has 15 stickers. How many stickers does David have?

28. Who has 20 stickers less than Polly?


29. Five years ago, Eric was 16 years old. How old will he be in 2 years' time?

_____ years old

30. The figure is made up of 4 identical squares of side 4 cm. Find the area of the shaded figure.



_____ cm²



Anglo-Chinese School (Primary)

P3 MATHEMATICS 2007

END-OF-YEAR EXAMINATION

BOOKLET B

Name: _____ () Class: Primary 3 ____

Date: 30 October 2007

Duration of paper: 1 h 45 min

Parent's/Guardian's signature

Section	Maximum Marks	Marks Obtained
A. Multiple Choice Questions	20	
B. Short Answers	40	
C. Problem Sums	40	
Total Marks	100	
Parent's/Guardian's signature		

THIS BOOKLET CONTAINS 12 PAGES.
DO NOT OPEN THIS BOOKLET UNTIL YOU ARE TOLD TO DO SO.
FOLLOW ALL INSTRUCTIONS CAREFULLY.

SECTION C - Problem Sums (40 MARKS)

For each question from 31 to 40, show your working and mathematical statements clearly in the space below each question. Write your answer in the answer space provided. Give your answers in the units stated and in its simplest form whenever possible. Marks awarded are shown in the brackets.

31. Kaven has \$1 498 in his savings. He has \$529 more than Albert. How much do they have altogether? (4 marks)

32. Peter has 45 marbles more than Mark. Tom has 20 marbles less than Mark. If the three boys have a total of 175 marbles, how many marbles does Tom have? (4 marks)

33. Mr Tan bought 4 similar T-shirts and a pair of trousers. He paid \$150 to the cashier and received \$9 change. If the pair of trousers costs \$69, find the cost of each T-shirt. (4 marks)

34. Mary has a ribbon, 12 metres longer than Alice's ribbon. If Mary gives 4 metres of her ribbon to Alice, how much longer will Mary's ribbon be than Alice's? (4 marks)

35. Mark sat on a chair in the concert hall. There were 4 chairs to his right and 7 chairs to his left. There were 5 rows in front of him and 4 rows behind him. If there were same number of chairs in each row, how many chairs were there in the concert hall? (4 marks)
(Hint: Draw a diagram)

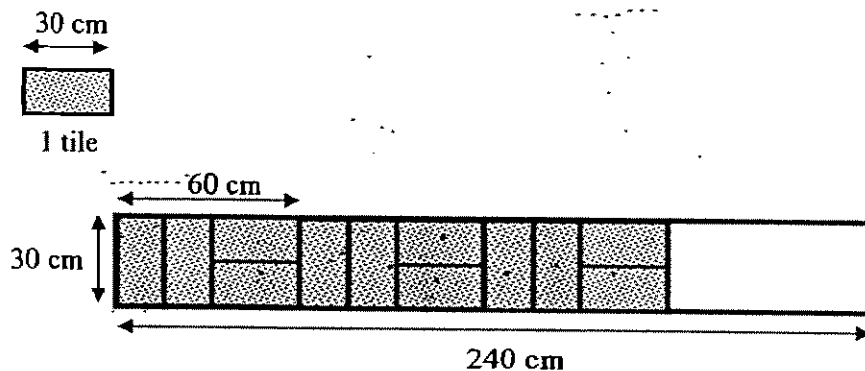
36. Mr Lim is five times as old as Phillip. He is 52 years older than Phillip. How old will Phillip be in 8 years' time? (4 marks)

37. A bus driver transporting workers to work at Tuas started his journey from Ang Mo Kio at 7.15 a.m. He took 1 h 20 min to pick up all the workers. Then he took another 35 min to reach Tuas. At what time, did he arrive at Tuas? (4 marks)

38. A jug of orange juice can fill 4 large mugs. A large mug can fill 5 small cups. How many jugs of orange juice are needed to fill 140 small cups? (4 marks)


39. Mother has some money to buy beef. She will have \$15 left if she buys 3 kg of beef. However, she will need \$3 more if she wants to buy 4 kg of beef instead. How much money does Mother have? (4 marks)

40. Mr Lee has to cover a rectangular path, 240 cm long by 30 cm wide, with identical rectangular tiles by using the tiling pattern shown below.



- a) What is the breadth of 1 tile? (2 marks)
- b) How many tiles did he use altogether to cover the rectangular path? (2 marks)

~ End of Paper ~



ANSWER SHEET

A C S PRIMARY SCHOOL - PRIMARY 4 MATHEMATICS 2007
SEMESTRAL ASSESSMENT (2)

1. 3
2. 3
3. 4
4. 4
5. 1
6. 2
7. 2
8. 4
9. 2
10. 4
11. 2598
12. 130
13. \$2360
14. 21
15. 29
16. 19
17. 6
18. D
19. 2kg 755g
20. 23kg
21. $\frac{1}{4}, \frac{2}{3}, \frac{2}{9}$
22. 4
23. 1L 40ml
24. 915ml
25. 48cm
26. 5
27. 5
28. Jay
29. 23
30. 16cm²
- 31) $1498 - 529 = 969$
 $969 + 1498 = 2467$
They have \$2467 altogether.
- 32) $175 - 20 = 155$
 $155 - 45 = 110$
 $110 - 20 = 90$
 $90 \div 3 = 30$
Tom has 30 marbles
- 33) $\$150 - \$9 = \$141$
 $\$141 - \$69 = \$72$
 $\$72 \div 4 = \18
The cost of each T-shirt is \$18
- 34) $12 - 4 - 4 = 4$
Mary's ribbon will be 4cm longer than Alice
- 35) $4 + 7 + 1 = 12$
 $12 \times 10 = 120$
There were 120 chairs.
- 36) $52 \div 4 = 13$
 $13 + 8 = 21$
Phillip will be 21 years old in 8 years time.
- 37) 7.15am 8.15am 8.45am 9.10am
|-----|-----|-----|-----|
13 20min 35min

He arrive at Tuas at 9.10am

38) $140 \div 5 = 28$

$28 \div 4 = 7$

7 jugs are needed to fill up 140 small cups

39) $15 + 3 = 18$

$18 \times 3 = 54$

$54 + 15 = 69$

Mother has \$69

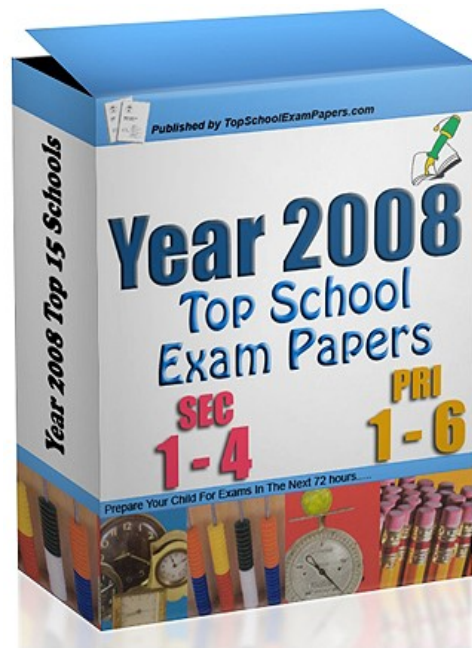
40) a) $30 \div 2 = 15$

The breath of 1 tile is 15cm

b) $240 \div 60 = 4$

$4 \times 4 = 16$

He used 16 tiles altogether to cover the rectangular path.



**TO DOWNLOAD ALL OUR EXAM
AND TEST PAPERS PLEASE VISIT
THE WEBSITE BELOW**

<http://www.TopSchoolExamPapers.com>