

**Primary Two
Mathematics
Semestral Assessment One**

Section A

Choose the correct answer for each question and write its number in brackets provided. (20 x 2 marks)

1. The value of the digit "6" in 867 is _____.

- (1) 6 ones (2) 60 ones
(3) 60 tens (4) 6 hundreds

2. 982 is the same as _____

- (1) $98 + 2$ (2) $900 + 82$
(3) $902 + 8$ (4) $920 + 8$

3. 6 hundreds 30 tens 10 ones is the same as _____ ones.

- (1) 810 (2) 910
(3) 830 (4) 900

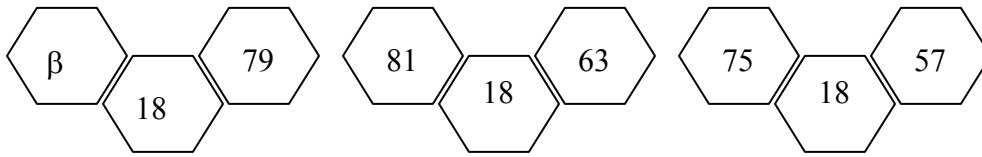
4.

Name of pupils	Mass (kg)
Alice	30
Betty	22
Catherine	36
Derrick	25

What is the difference in mass between the heaviest pupil and the lightest pupil?

- (1) 3 kg (2) 5 kg
(3) 8 kg (4) 14 kg

5.



The value of β is _____.

- (1) 162 (2) 97
(3) 81 (4) 61

6.

$$\begin{array}{r} 432 \\ - \boxed{} \\ \hline 333 \\ \hline \end{array}$$

What is the missing number in the box?

(1) 765

(2) 701

(3) 199

(4) 99

7.

$$\boxed{} + 496 = 1000$$

What is the missing number in the box?

(1) 804

(2) 704

(3) 604

(4) 504

8. After giving away 278 blue stickers, Peter had 199 green stickers left. How many stickers had he at first?

(1) 79 stickers

(2) 121 stickers

(3) 476 stickers

(4) 477 stickers

9. A tiger has 4 legs. How many legs do 3 tigers have?

(1) 6 legs

(2) 7 legs

(3) 8 legs

(4) 12 legs

10. There are _____ tens in 550.

- (1) 550 (2) 55
(3) 50 (4) 5

11. The table below shows the height of the Tan family.

Family Members	Mr. Lim	Mrs. Lim	Eric Lim
Height (cm)	175	169	100

What is the total height of the family members in the Tan family?

- (1) 444 cm (2) 434 cm
(3) 344 cm (4) 269 cm

12. Aunt Mary bought 16 mangoes. 4 mangoes were bad. The rest were shared among Aunt Mary and her 2 nephews. How many mangoes did each of them get?

- (1) 4 mangoes (2) 8 mangoes
(3) 10 mangoes (4) 11 mangoes

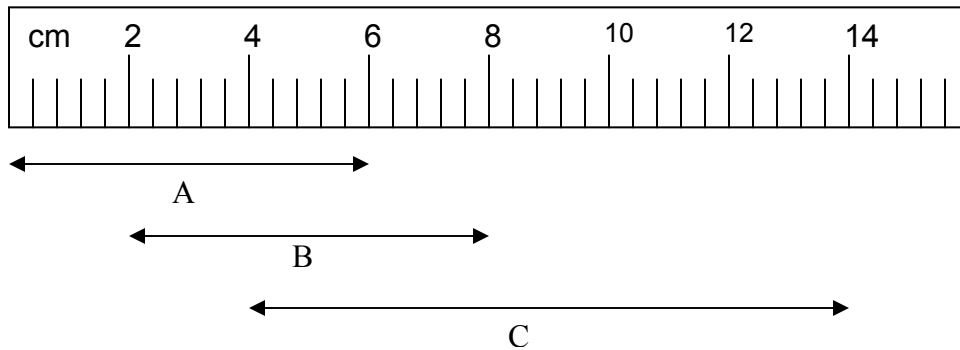
13.

$$\star + \text{Crescent} = 530$$

If \star stands for 298, Crescent stands for _____.

- (1) 828 (2) 248
 (3) 241 (4) 232

14.



The total length of the three lines is _____ cm.

- (1) 18 (2) 20
 (3) 22 (4) 26

15.

$$5 \times \text{Flower} = 15$$

$$2 \times \text{Flower} = \boxed{}$$

What is the number in the box?

- (1) 3 (2) 6
 (3) 9 (4) 15

16. Alice, Betty and Catherine have the same number of apples. Their total number of apples is 24. How many apples has Alice?

- (1) 24 apples (2) 12 apples
(3) 8 apples (4) 6 apples

17. Dasiy was 7 years old in the year 2002. Her brother was 3 times her age then. How old is her brother in the year 2003?

- (1) 10 years old (2) 11 years old
(3) 22 years old (4) 24 years old

18. What is the value of subtracting 129 from 500? The answer is

_____.

- (1) 629 (2) 429
(3) 371 (4) 271

19. Find the sum of 412 and 99.

- (1) 511 (2) 501
(3) 487 (4) 313

20. Study the table carefully.

0	8	12
5	10	?
15	2	3

What is the missing number in the box?

(1) 10

(2) 6

(3) 5

(4) 4

Section B

Write the correct answers in the boxes provided.

21. Write 3 hundreds 9 tens in numeral.

The answer is

22. $369 + 421$ is the same as Hundreds Tens

23. Add 225 to 305 and write the answer in words.

24. Find in the missing numbers.

862 882 922 942

25.
$$\begin{array}{r} 265 \\ + 249 \\ \hline \end{array}$$

26.
$$\begin{array}{r} 973 \\ - 456 \\ \hline \end{array}$$

27. Subtract 7 tens from 410.


The answer is

28. $\times 3 = 18$

29. Divide 40 by 4. The answer is

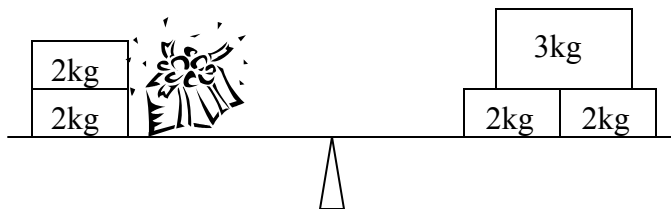
30. $850 = 80 \text{ tens } \text{ ones}$

31. If  stand for 9 stamps.

Then  stand for stamps.

32. 855 is less than 900.

33.



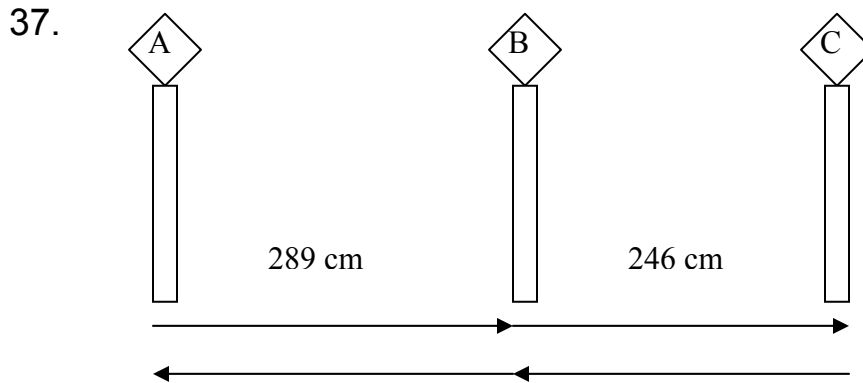
The mass of the present is kg.

34. There are 339 red umbrellas, 254 blue umbrellas and 196 green umbrellas in a basket. How many umbrellas are there in all?

35. A butcher sold a total of 945 kg of meat in August and September. He sold 597 kg of meat in September. How much meat did he sell in August?

 kg

36. $800 - \boxed{} = 580$



Peter walked from lamp post A to lamp post C and then walked back to lamp post A again. How far did he walk altogether?

 m

38. There are 8 durians in a basket. How many durians are there in 3 such baskets?

39. 3 girls shared 27 stamps equally. How many stamps would two girls get?

40. Pat has \$8. Wince has 3 times as much as Pat. How much money does Wince have?

Section C

Do the following sums. Show your working clearly. (5 x 4 marks)

41. There are 267 goldfishes in a fish tank. 194 more goldfishes were put into the fish tank. How many goldfishes are there in the fish tank now?

42. Anthony has 597 sweets. David has 289 fewer sweets than Anthony. How many sweets does David have?

43. Alice, Betty and Daisy bought 12 erasers and shared them equally. How many erasers does each person get?

44. There are 4 blue balls and 5 red balls in a box. How many balls are there in 3 such boxes?

45. The total mass of a box of erasers and a box of pens is 997 kg.
If the box of pens has a mass of 644 kg.
- (a) what is the mass of the box of erasers?
 - (b) how much lighter is the box of erasers than the box of pens?