

SAM

Nan Hua Primary School
Mid-Year Examination – 2005
Mathematics
Primary 2

Name : _____ ()

Marks :

| |
|-----|
| 100 |
|-----|

Class : Primary 2 ____

Date : 10 May 2005

Duration : 1h 30min

Parent's Signature

Section A (2 marks each)

1. Write in numerals.

Seven hundred and eight. →

| |
|--|
| |
|--|

2. Write in words.

543 →

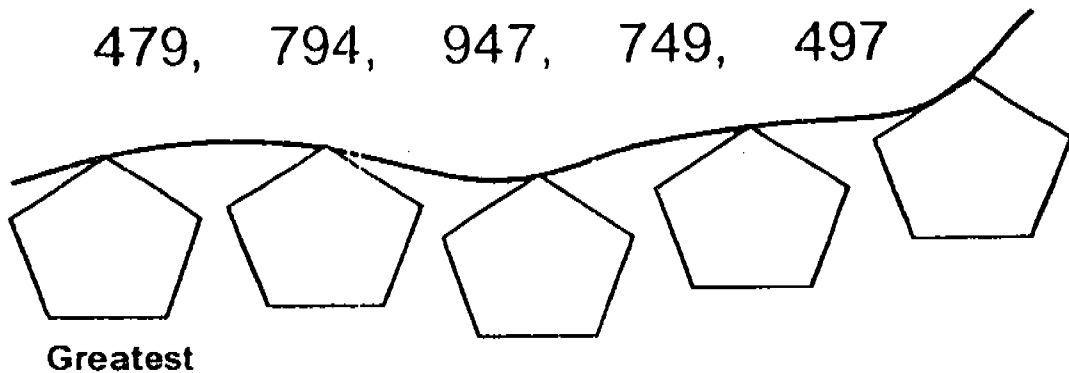
| |
|--|
| |
|--|

3. Look at the diagram below and fill in the boxes with the correct answers.

tens ones =

4. Arrange the numbers from the **greatest** to the **smallest**.

479, 794, 947, 749, 497



Greatest

5. Colour the two boxes which have the **same** answer


$$800 - 32$$

$$8 \text{ hundreds } 2 \text{ ones}$$

$$9 \text{ hundred } - 7 \text{ tens } 7 \text{ ones}$$

$$900 - 100 + 23$$

6. Complete the number line.



7. The number that comes just **before** 579 is

8. 670 is **between** and 671.

Section B (2 marks each)

9. Xinhui arranged the number cards below from the **smallest** to the **greatest** number.

smallest

If the two **numbers** behind **the** number cards are **even** numbers, the greater number would be

Match the following to the correct answer by drawing lines.

10. The number that is 100 less than 543

343

11. Add 34 to 400

443

12. Three hundred and thirty-four

334

13. $300 + 40 + 3$

434

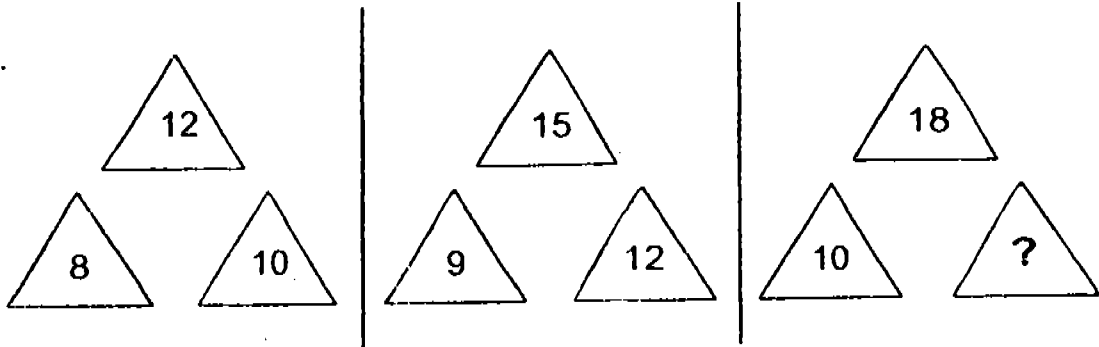
14. Subtract 96 from 500

404

Section C (2 marks each)

Study the number pattern and guess the missing number.

15.



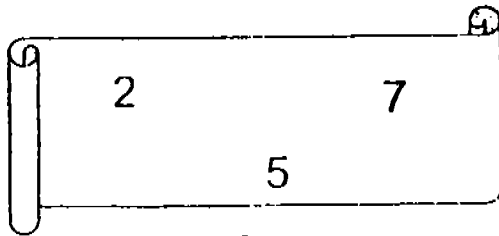
The missing number is

16. Tianle has a number of marbles.

He has more than 500 marbles

but less than 570 marbles.

(**Clue** : Use the digits from the banner to form the number.)



Tianle has marbles.

Section D (2 marks each)

Fill in the correct number sentences for questions 17 & 18.

17.



=

There are cherries in all.

18.



=

There are cherries in all.

19. 7 threes is the **same** as

20. 4×2 is more than 3×2 .

21. $2 + 2 + 2 + 2 + 2 + 2 + 2 + 2 = \square \times 2.$

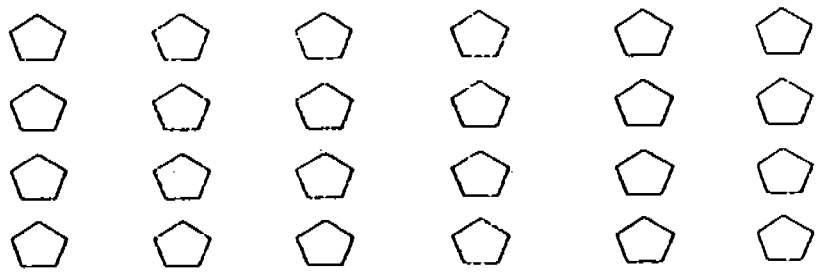
22. A beetle has 6 legs.

4 beetles have legs.

Section E (2 marks each)

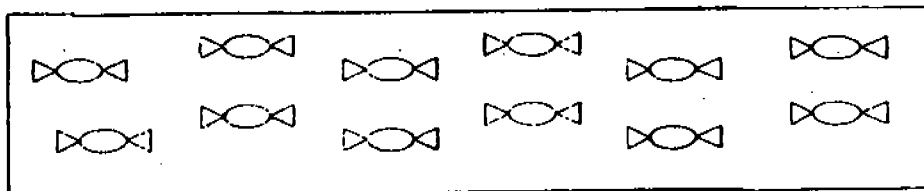
23.

Circle the shapes into groups of 2.



There are groups of 2.

24. Look at the picture below.

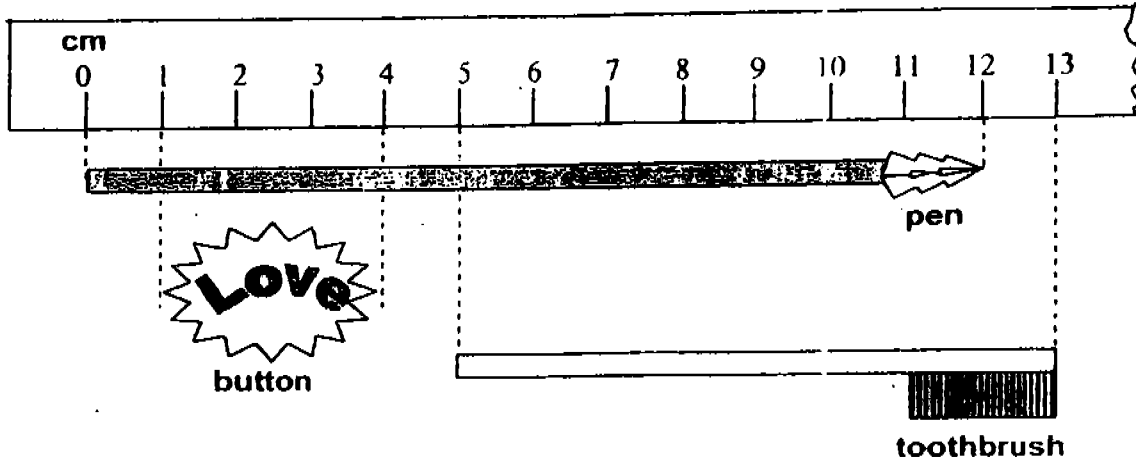


If Jang Ein packs the sweets into 3 bags,

there will be sweets in each bag.

Section F (2 marks each)

Look at the diagram below and answer questions 25 to 27.



25. The pen is about cm long.

26. The button is cm shorter than the toothbrush.

27. The total length of the three objects is cm.

Section G (1 mark each)

Fill in the blanks with the units in the box below.

| | | | |
|----|---|---|----|
| kg | g | m | cm |
|----|---|---|----|

28. Miss Ong's belt is about 93 long.
29. Mr Faizal used 7 of cloth to make banners for the Green House cheer team.
30. The mass of the school bag is about 4
31. The mass of a peach is about 260

Section H (1 mark each)

Do the following sums.

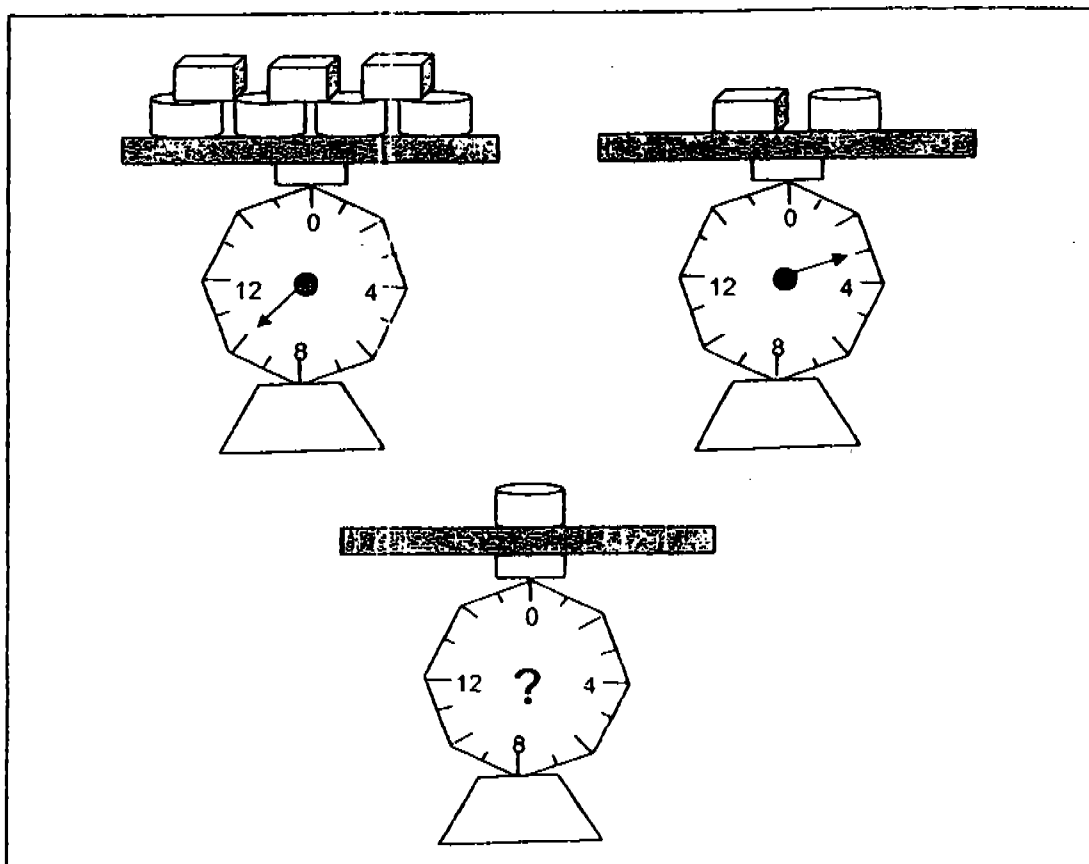
32.
$$\begin{array}{r} 243 \\ + 323 \\ \hline \hline \end{array}$$

33.
$$\begin{array}{r} 576 \\ - 272 \\ \hline \hline \end{array}$$

34.
$$\begin{array}{r} 438 \\ + \square \\ \hline \hline 1000 \end{array}$$

35.
$$\begin{array}{r} 713 \\ - 238 \\ \hline \hline \end{array}$$

Section I (2 marks each)



36. The mass of the  is kg.

37. 4 groups of 4 is the same as

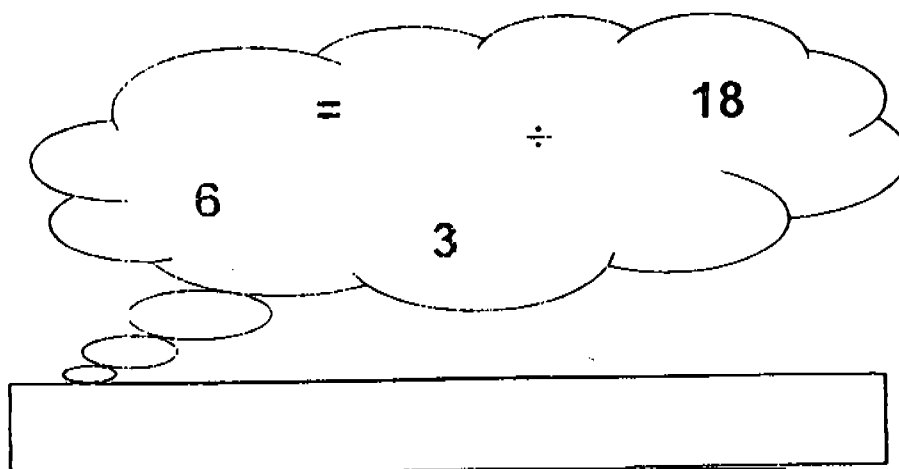
38. Write + or - in each circle to complete the number sentence.

$$23 \bigcirc 4 \bigcirc 8 = 19$$

39. Write \times or \div in each circle to complete the number sentence.

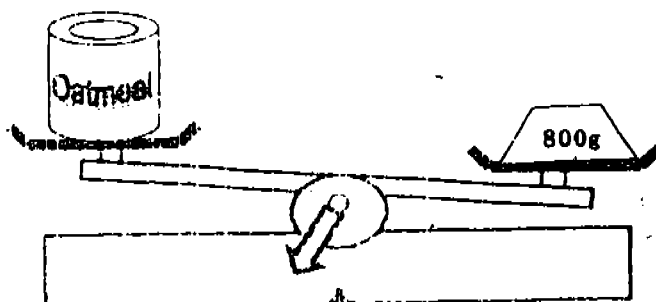
$$10 \bigcirc 2 \bigcirc 3 = 15$$

40. Write a division sentence using the numbers and signs given.




41. Fill in the box with 'more' or 'less'.

The mass of the tin of oatmeal is than 800g.

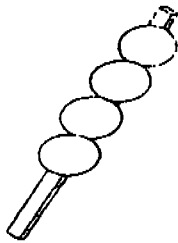


Section J (2 marks each)

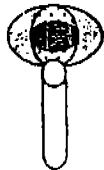
Mdm Norhazlinah is planning a party for her son and five of his friends. Help Mdm Norhazlinah complete her shopping list as she needs to buy food and drinks for 6 children.



2 cans of carrot juice
for each child.



4 fishballs
for each child.



1 lollipop
for each child.

Mdm Norhazlinah's Shopping List

42. cans of carrot juice.

43. fishballs.

44. lollipops.

Section K(4 marks each)

Read the story sums carefully.

Show your workings clearly and write the statements.

45. The length of the blue ribbon is 150 cm long.
The length of the red ribbon is 72 cm longer than the blue ribbon.

- (a) Find the length of the red ribbon.
- (b) Find the total length of the blue and red ribbons.

46. Fangyi collected 18 seashells.
She glued 3 seashells on one photo frame.
How many photo frames would she need for all seashells?

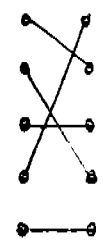
47. The mass of a tray of eggs is 450 g.
The mass of the eggs is 325 g.
Find the mass of the empty tray.
48. Bernice had 5 cookies on a plate and 3 packets of cookies. There were 4 cookies in each packet.
- (a) How many cookies were there in the 3 packets?
(b) How many cookies did she have altogether?

49. Mingrou had 8 stickers and 15 buttons.
She lost 7 of her buttons and bought 3 more stickers.
How many more stickers than buttons does Mingrou
have now?

SAT

NAN HUA PRIMARY SCHOOL
PRIMARY 2 MATHEMATICS 2005
SEMESTRAL ASSESSMENT (1)

- 1) 708 2) five hundred and forty-three 3) 9 ten 4 one =94
- 4) 947, 794, 749, 497, 479. 5) 900-100+23, 9hundreds-7tens7ones.
- 6) 529, 547 7) 578 8) 669 9) 80 10 to 14 →
- 15) 14 16) 527 17) 3+2+3=8 18) 4x3=12
- 19) 21 20) 2 21) 8 22) 24 23) 12 24) 4
- 25) 12 26) 5 27) 23 28) CM 29) M 30) KG
- 31) g 32) 566 33) 304 34) 562 35) 475 36) 1kg
- 37) 4x4 38) +, - 39) /, x 40) 18/6=3 41) less
- 42) 12 43) 24 44) 6



45) 150+72=222
222+150=372

The length of the red and blue ribbon is 372cm long

46) 18/3=6
She can make 6 photo frames for all seashells

47) 450-325=125
The mass of the empty tray is 125g

48) a) 3x4=12
There are 12cookies in each packet
b) 5+12=17
He have 12cookies altogether

49) He has 8 buttons left 15-7=8

He has 11 stickers now 8+3=11

There are 3 more stickers than buttons 11-8=3