



NAN HUA PRIMARY SCHOOL

PRIMARY TWO SEMESTRAL ASSESSMENT 2 2007

MATHEMATICS

Time : 1 h 30 min

INSTRUCTIONS TO CANDIDATES

1. Write your name, register number and class in the blanks provided.
2. Do not turn over this page until you are told to do so.
3. Follow all instructions carefully.
4. Answer all questions.
5. Write your answers in this booklet.

---

Marks Obtained

Total Marks:

|  |       |
|--|-------|
|  | / 100 |
|--|-------|

Name : \_\_\_\_\_ ( )

Class : P 2 \_\_\_\_\_

Date : 25 October 2007

Parent's Signature : \_\_\_\_\_

**Section A ( 40 × 2 marks )**

Fill in each box with the correct answer.

1. Write in words.

|     |  |
|-----|--|
| 819 |  |
|-----|--|

2. Write in numerals.

|  |                |
|--|----------------|
|  | 20 tens 5 ones |
|--|----------------|

3. Rearrange the following numbers in order. Begin with the smallest.

548
453
905
536

|  |  |  |  |
|--|--|--|--|
|  |  |  |  |
|--|--|--|--|

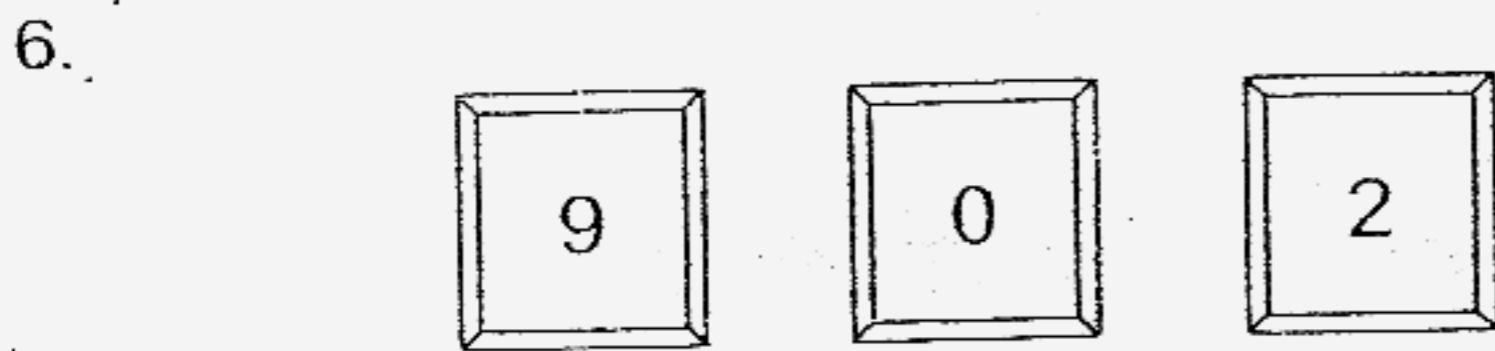
**smallest**

4.

$$\begin{array}{r}
 262 \\
 + 409 \\
 \hline
 \boxed{\phantom{000}} \\
 \hline
 \end{array}$$

5.

$$\begin{array}{r}
 \boxed{\phantom{000}} \\
 - 361 \\
 \hline
 628 \\
 \hline
 \end{array}$$



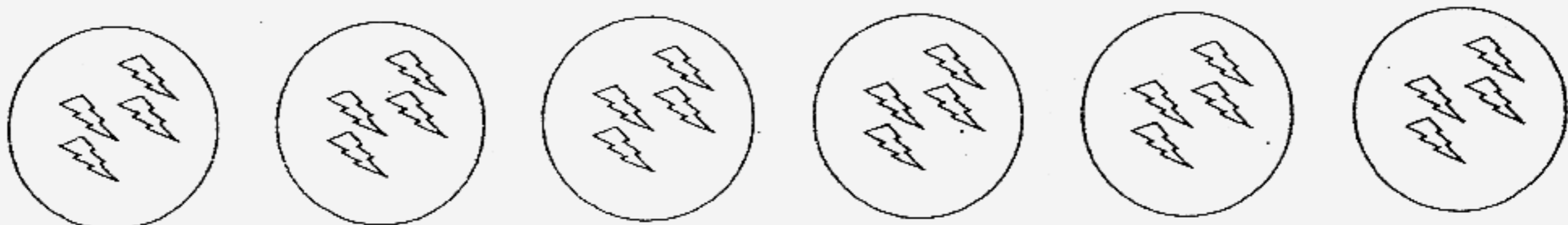
Given the number cards above, use each number card **once** only,

(a) (i) form the greatest 3-digit number,

(ii) form the smallest 3-digit number.

(b) Find the **difference** between the greatest and smallest 3-digit numbers.

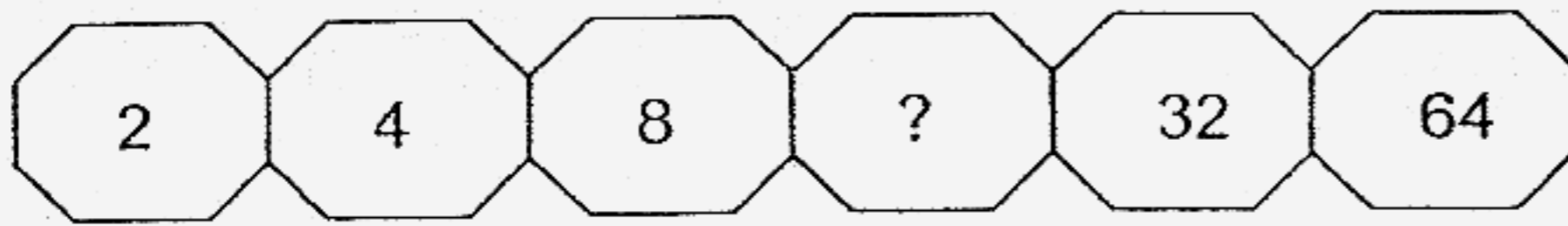
7. Write one **multiplication** and one **division sentence** for the picture below.



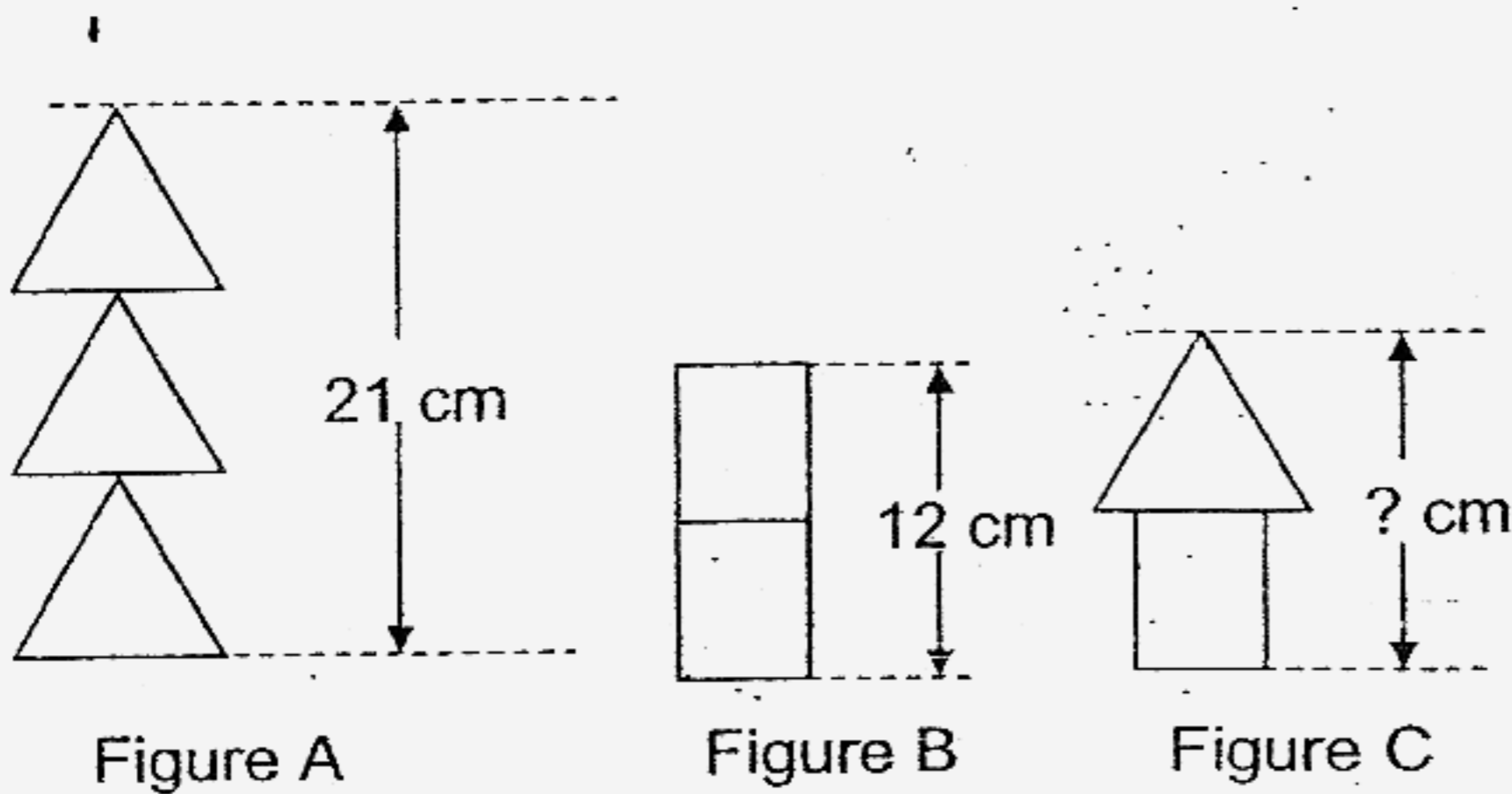
$$\boxed{\phantom{00}} \times \boxed{\phantom{00}} = \boxed{\phantom{000}}$$

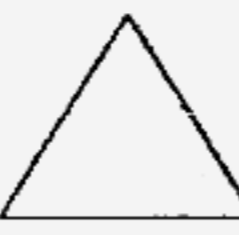

$$\boxed{\phantom{000}} \div \boxed{\phantom{00}} = \boxed{\phantom{00}}$$

8. Study the number pattern and then fill in the missing number.




9.

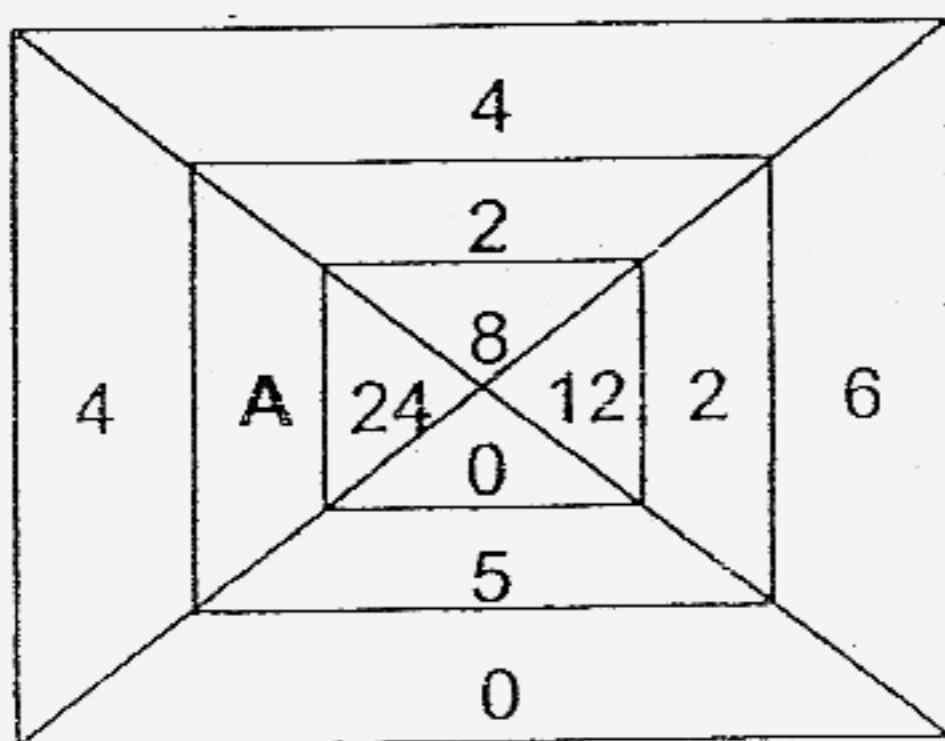


The figures above are made up of identical  and/ or .

What is the height of Figure C?

 cm

10. Study the diagram carefully. How many is A?



A:

11. There are 362 girls and 234 boys in a cinema.

There are  children altogether.

12. Subtract 45 from 920. The answer is

13. I am an even number. I am made up of 2 digits.

The sum of the 2 digits is 9.

The difference between the digits is 5.

What number am I?

14.   $\times 4 = 36$

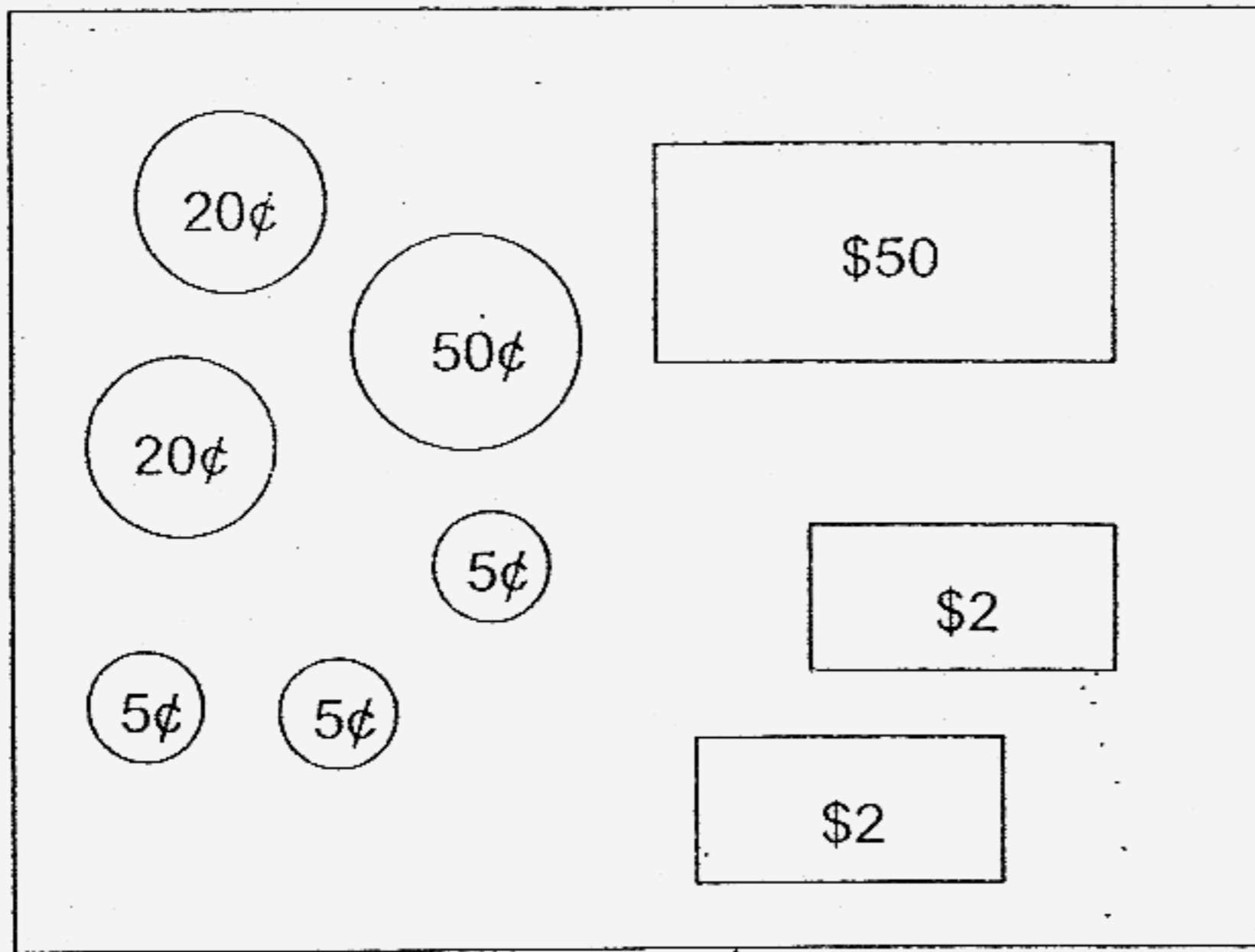
15. Lisa has 12 hair clips.

She has twice as many hair clips as Sally.

How many hair clips does Sally have?

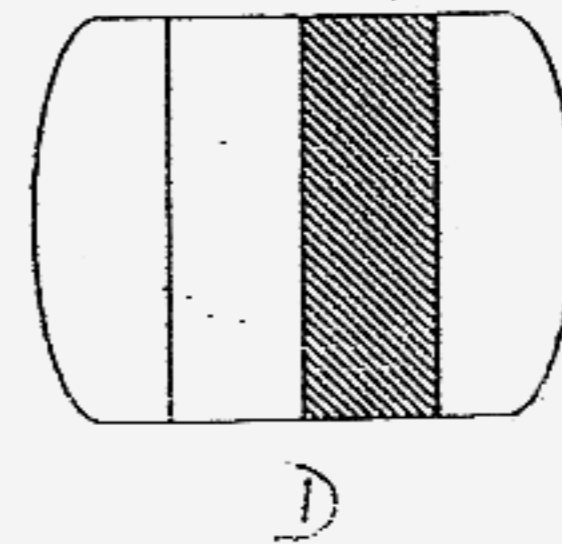
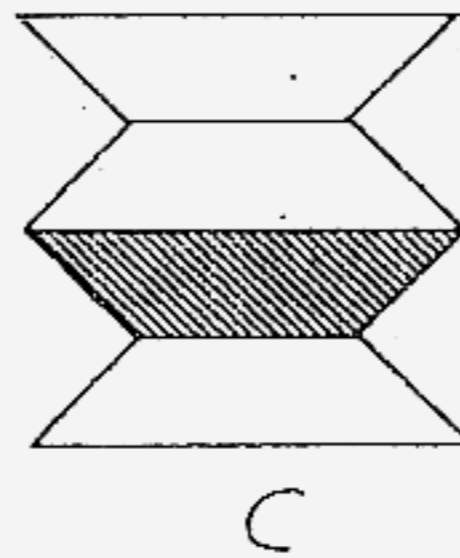
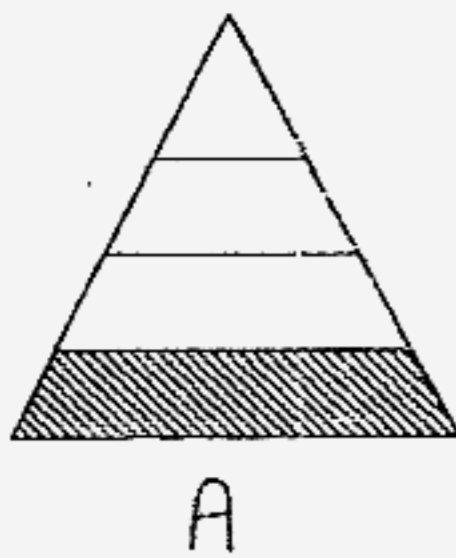
 hair clips

16. Count the amount of money and write its total value in the box provided.

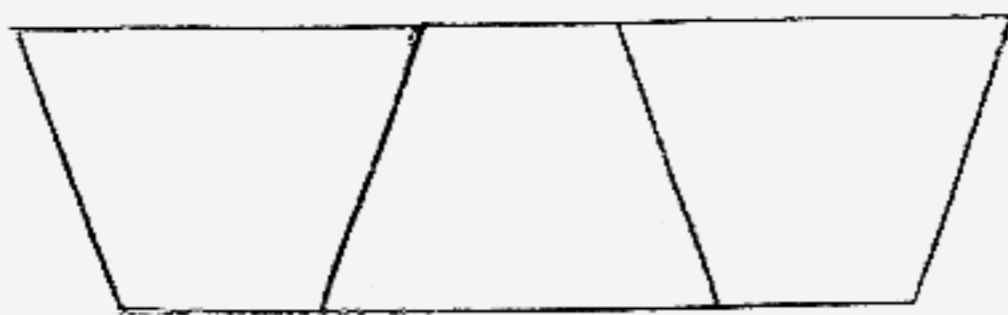


17. Which of the following shapes show that  $\frac{1}{4}$  of it is shaded?

Ring them.



18. Colour  $\frac{1}{3}$  of the following shape.



19. Arrange the following fractions in order. Begin with the **greatest**.

$$\frac{1}{7}, \frac{1}{3}, \frac{1}{12}, \frac{1}{9}$$

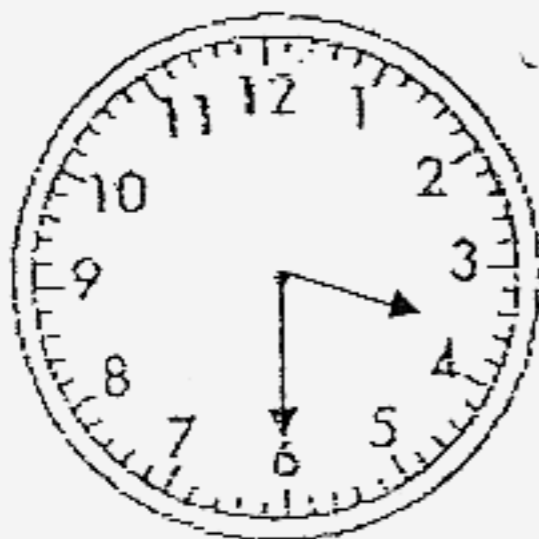
|  |  |  |  |
|--|--|--|--|
|  |  |  |  |
|--|--|--|--|

greatest

20.  $\frac{2}{5} + \boxed{\phantom{000}} = 1$

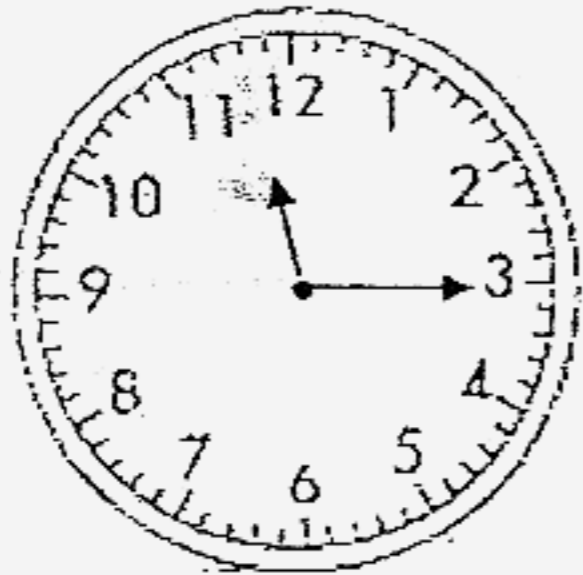
21.  $\frac{5}{6} - \frac{3}{6} = \boxed{\phantom{000}}$

22. Jerry went to school for Wushu lesson. The lesson started at 3.30 p.m. and ended at 4.15 p.m. How long was the lesson?



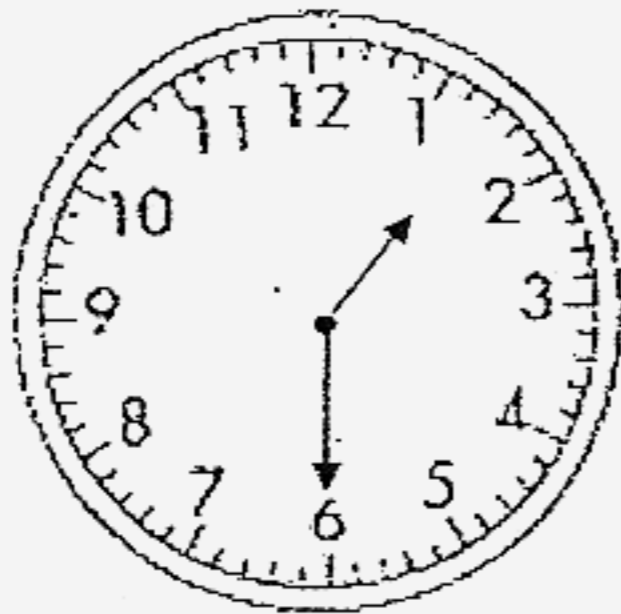
min

23. Mother baked some tarts in an oven. She set the timer to bake the tarts for 30 min. When would the tarts be baked if she started the timer at 11.15 a.m.?



a.m.

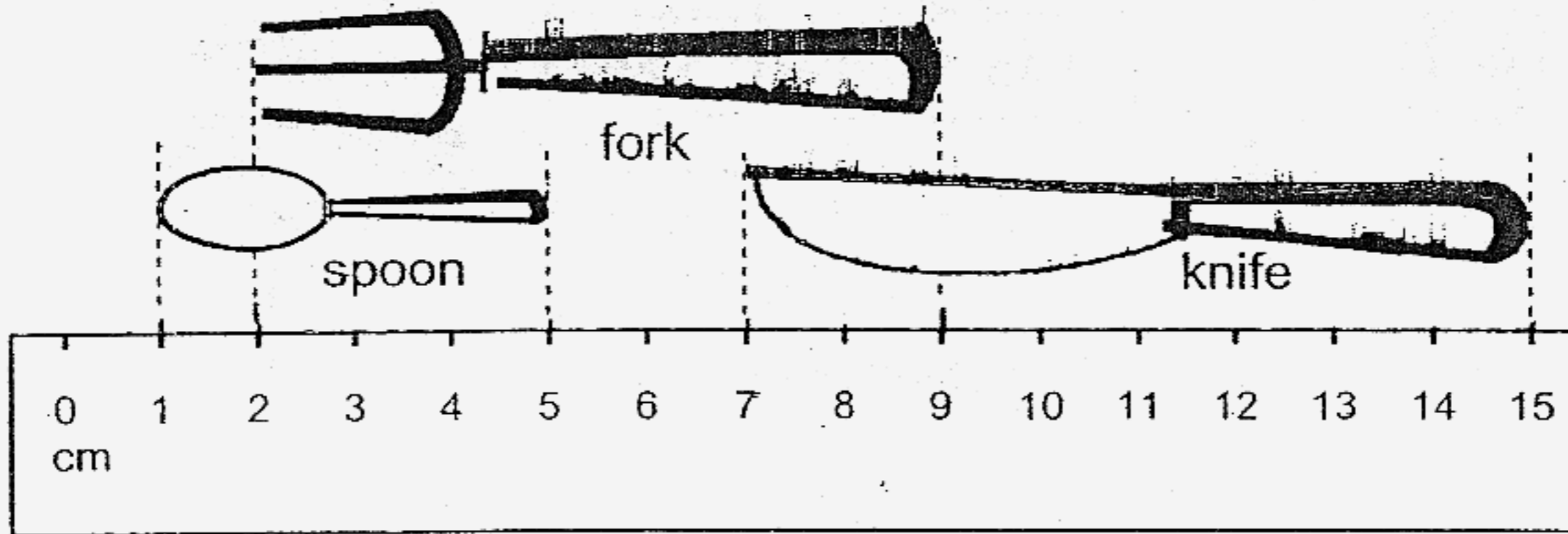
- 24.



1.30 is 30 minutes after



Study the diagram below carefully. Then answer questions 25 to 27.

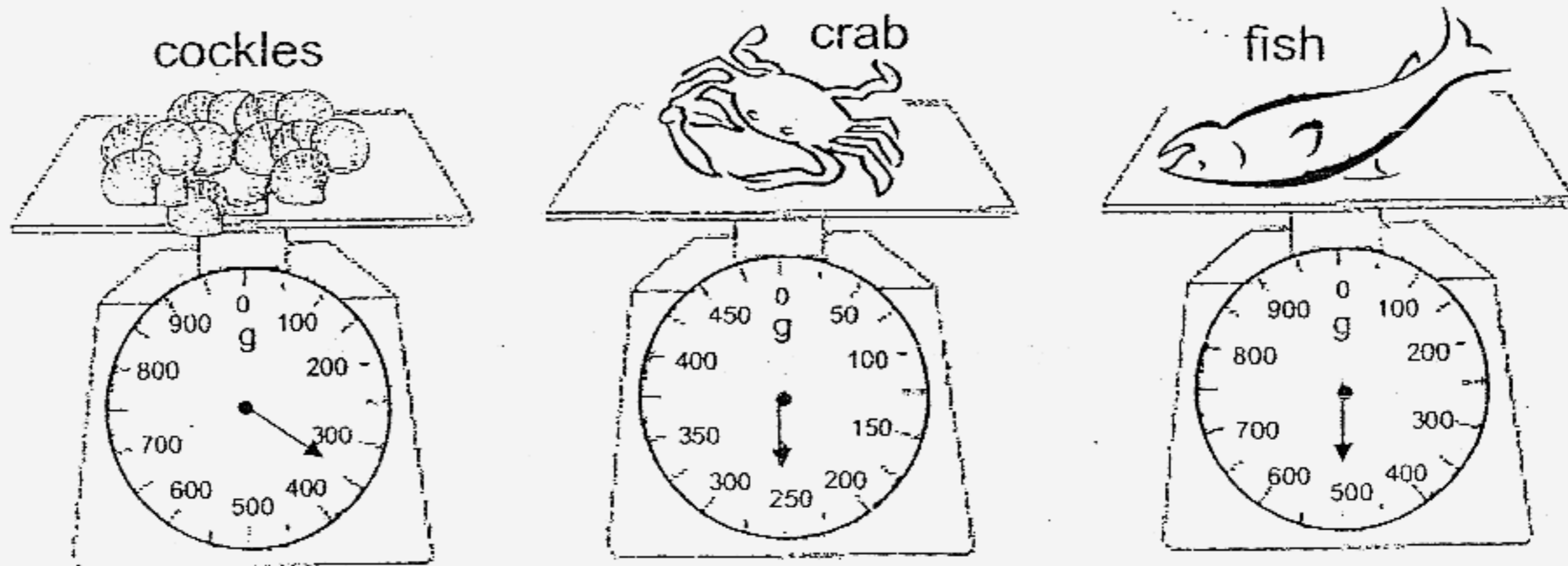


25. The length of the fork is  cm long.

26. The knife is  cm longer than the spoon.

27. The total length of the spoon, fork and knife is  cm long.

28.

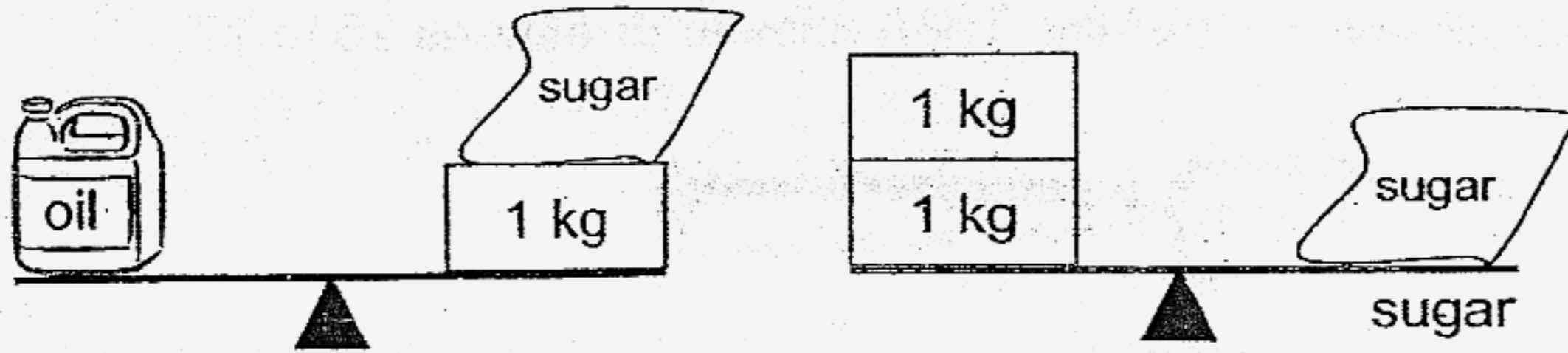


Arrange the masses of the above items in order.

Begin with the heaviest item.

,  ,   
 heaviest

29.



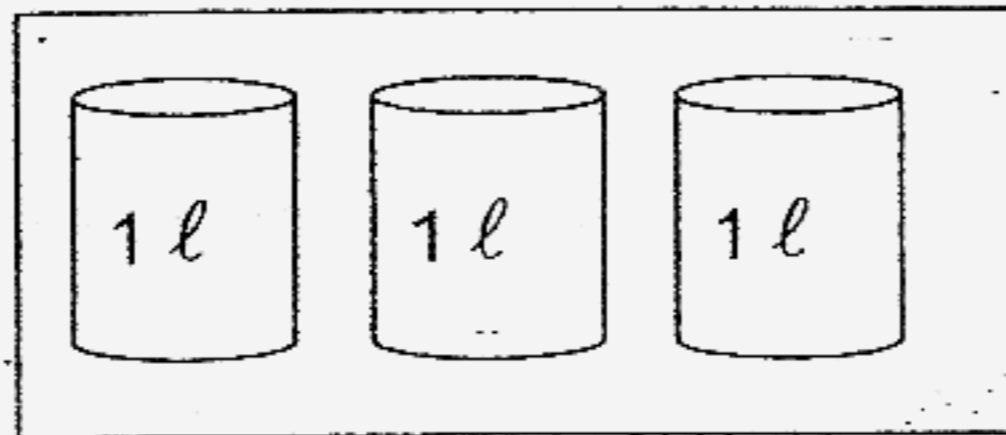

What is the mass of 2 bottles of oil?

kg


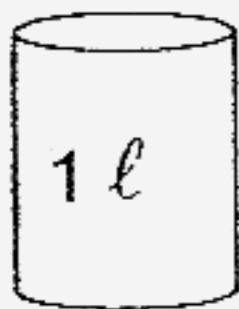
Study the following diagram carefully and answer questions 30 and 31.



jug



litres of orange juice



glasses of orange juice


30.

litres of orange juice can fill up 2 jugs.

31.



jug




glasses of orange juice

32. Karen and Kathy drink a total of 4 ℓ of water a day.

How many litres of water do they drink in a week?

 ℓ

33.

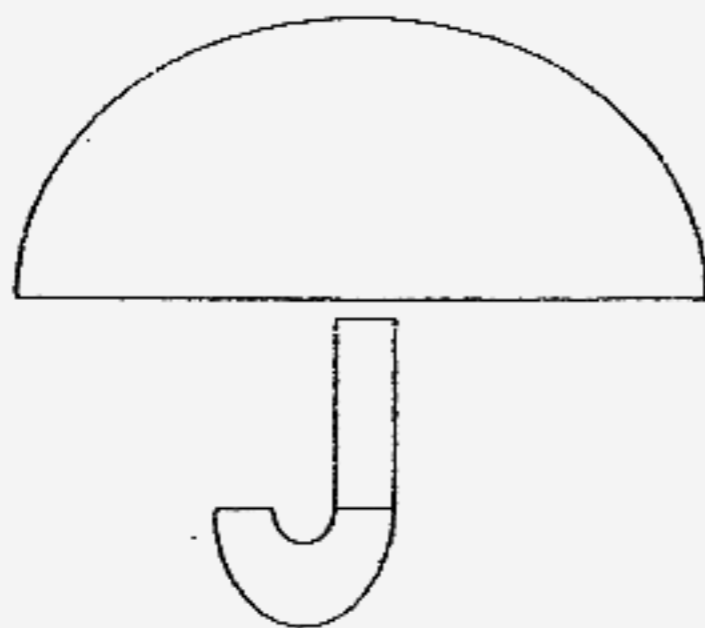


The above solid figure has

flat surface(s) and

curved surface(s).

34.



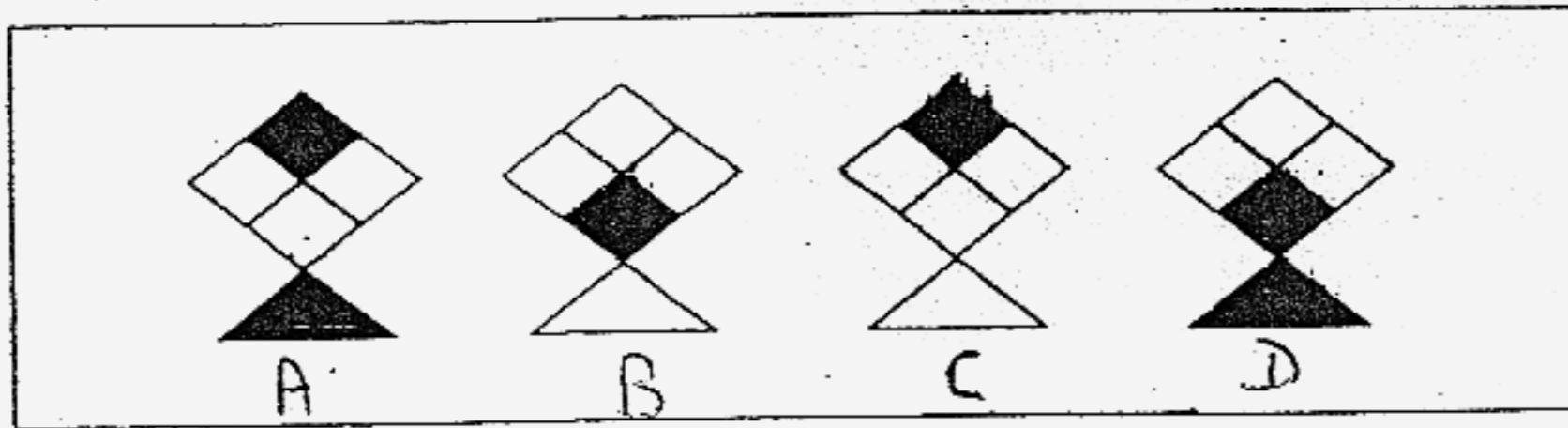
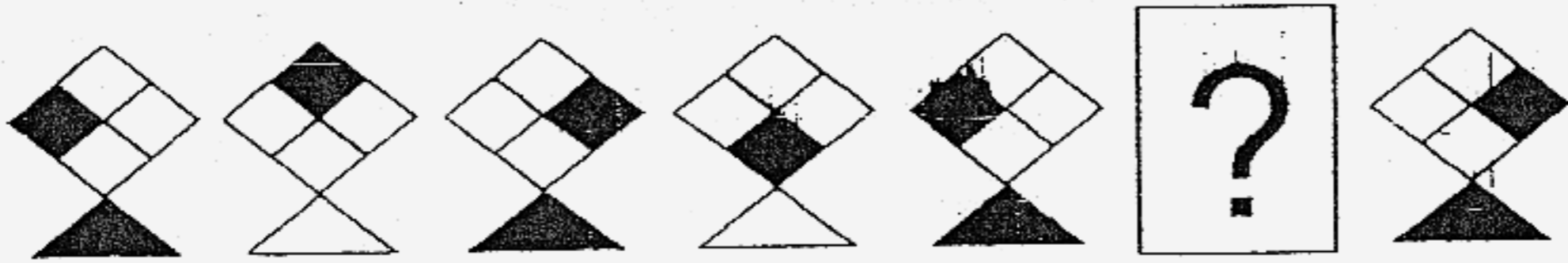
The above picture is formed by

curved lines and

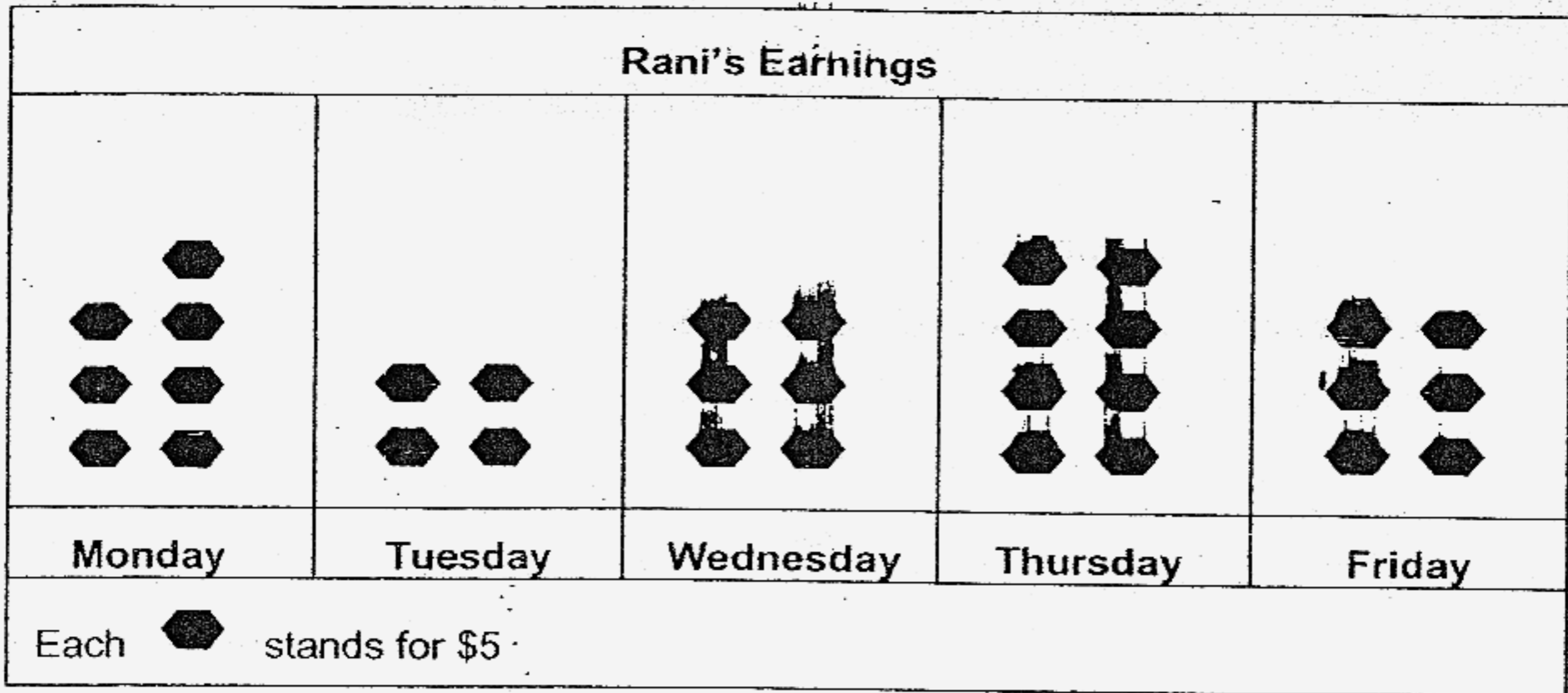
straight lines.

35. What is the missing shape in the following pattern?

Circle the correct shape in the box.



Study the graph shown below carefully. Then answer questions 36 to 40.



36. Rani earned the least amount of money on

37. Rani earned \$40 on

38. Rani earned a total of \$  on Tuesday and Thursday.

39. Rani earned the same amount of money on  and

40. Rani earned \$  more on Monday than on Tuesday.

**Section B: ( 5 × 4 marks )**

Read the story sums carefully.

Show all your workings clearly and write the statements.

41. Jessica has 362 story books.  
She has 58 fewer story books than Reena.  
How many story books does Reena have?
42. A fruit seller had 159 kg of durians,  
He sold 105 kg of durians.  
How many kilograms of durians had he left?

43. Mrs Lee bought some fruit to share equally among 10 children.  
Each child got 5 fruit from Mrs Lee.  
How many fruit did Mrs Lee buy altogether?
44. Mrs Ravi bought 9 trays of eggs. There were 10 eggs in each tray.  
If she used 36 eggs to bake some cakes, how many eggs had she left?

45. A school bag costs \$36.  
A dictionary is \$5 cheaper than the school bag.  
What is the total cost of the school bag and the dictionary?

End - of - paper



NAN HUA PRIMARY SCHOOL - PRIMARY 2 MATHEMATICS 2007  
 SEMESTRAL ASSESSMENT (2)

---

1. eight hundred and nineteen.

2. 205

3. 453, 536, 548, 905

4. 671

5. 989

6. a) i) 920      ii) 209      b) 711

7.  $6 \times 4 = 24$

$24 \div 6 = 4$

8. 16

9. 13cm

10. 6

11. 596

12. 875

13. 72

14. 9

15. 6

16. \$55.05

17. B, C

18.



19.  $\frac{1}{3}, \frac{1}{7}, \frac{1}{9}, \frac{1}{12}$

20.  $\frac{3}{5}$

21.  $\frac{2}{6}$

22. 45min

23. 11.45a.m.

24. 1.00

25. 7

26. 4

27. 19

28. fish, cockles, crab

29) 6kg

30) 6

31) 12

32) 28

33) 2, 1

34) 3, 6

35) C

36) Tuesday

37) Thursday

38) \$60

39) Wednesday, Friday

40) \$15

41) Jessica 

|  |
|--|
|  |
|--|

 58  
 Reena 

|  |
|--|
|  |
|--|

$362 + 58 = 420$   
 Reena has 420 books.

42)  $\longleftarrow 159 \longrightarrow$   

|     |   |
|-----|---|
| 105 | ? |
|-----|---|

$159 - 105 = 54$   
 He had 54 kilograms of durians left.

43)  $\longleftarrow ? \longrightarrow$   

|   |   |   |   |   |   |   |   |   |   |
|---|---|---|---|---|---|---|---|---|---|
| 5 | 5 | 5 | 5 | 5 | 5 | 5 | 5 | 5 | 5 |
|---|---|---|---|---|---|---|---|---|---|

$5 \times 10 = 50$   
 Mrs Lee bought 50 fruit to share among 10 children.

44)  $\longleftarrow ? \longrightarrow$   

|    |    |    |    |    |    |    |    |    |    |
|----|----|----|----|----|----|----|----|----|----|
| 10 | 10 | 10 | 10 | 10 | 10 | 10 | 10 | 10 | 10 |
|----|----|----|----|----|----|----|----|----|----|

$9 \times 10 = 90$   
 $90 - 36 = 54$   
 She had 54 eggs left.

45)  $\$36 - \$5 = \$31$   
 $\$36 + \$31 = \$67$   
 The total cost of the school bag and the dictionary is \$67.