

Tao Nan School

Primary Two Mathematics Practice Paper 1 2007

Name: \_\_\_\_\_ ( ) Date: \_\_\_\_\_

Class: P2 ( ) Duration: 1 hour

Parent's Signature: \_\_\_\_\_ Marks: \_\_\_\_\_ /50

---

Section A (10 x 1 mark)

Choose the correct answer and write its number in the brackets provided.

1. Seven hundred and thirteen is the same as \_\_\_\_\_

- (1)  $700 + 130$
- (2)  $700 + 10 + 3$
- (3)  $700 + 10 + 30$
- (4)  $700 + 30 + 1$  ( )

2.  $820 =$  \_\_\_\_\_

- (1) 82 tens
- (2) 8 tens 2 ones
- (3) 8 tens 20 ones
- (4) 80 tens 2 ones ( )

3. Which of the following sets has all numbers greater than 139?

(1) 159, 163, 129

(2) 171, 169, 113

(3) 120, 140, 160

(4) 141, 152, 170

( )

4.  $26 + 594 =$  \_\_\_\_\_

(1) 510

(2) 568

(3) 620

(4) 854

( )

5. 6 hundreds + 5 tens = \_\_\_\_\_

(1) 11

(2) 65

(3) 110

(4) 650

( )

6. 15 and \_\_\_\_\_ makes 115.

- (1) 100
- (2) 120
- (3) 130
- (4) 265

(     )

7. Which number is 1 less than 1000?

- (1) 90
- (2) 99
- (3) 990
- (4) 999

(     )

8. \_\_\_\_\_ is 20 more than 495.

- (1) 475
- (2) 497
- (3) 515
- (4) 695

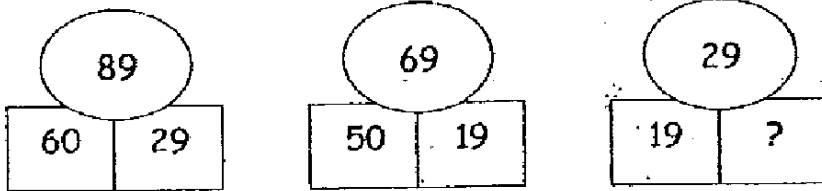
(     )

9. 20 subtracted from 500 is \_\_\_\_\_.

- (1) 300
- (2) 480
- (3) 520
- (4) 700

( )

10. Look at the pattern carefully.



What is the missing number?

- (1) 10
- (2) 20
- (3) 30
- (4) 40

( )

Section B (15 x 1 mark)

Write in words.

11. 845

---

12. 312

---

Write in numerals.

13. Nine hundred and eleven

---

14. Four hundred and one

---

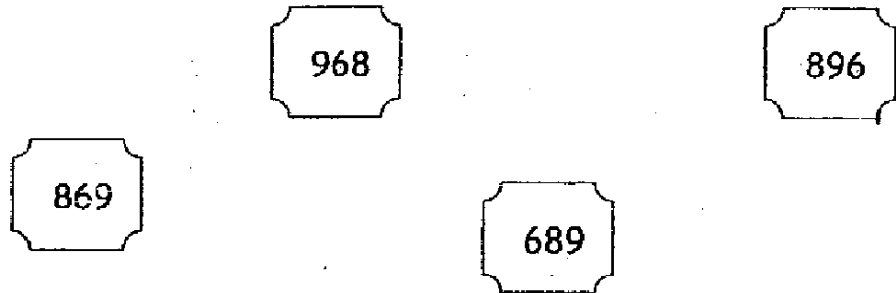
Complete the number pattern.

15. 220, 160, 110, \_\_\_\_\_, 40, 20, 10

Arrange the numbers in order.

Begin with the greatest.

16.



---

greatest

Write your answers in the blanks provided.

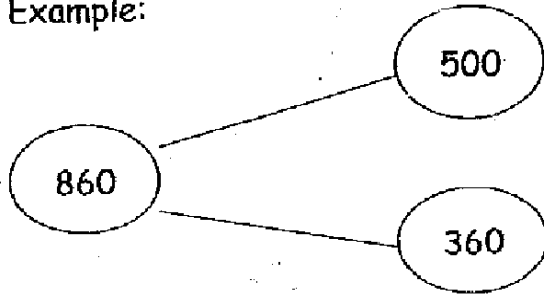
17. 846 is \_\_\_\_\_ more than 546.

18. 19 tens + 90 = \_\_\_\_\_

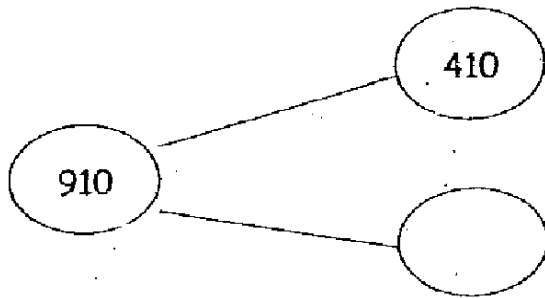
19. \_\_\_\_\_ is 100 less than 336.

Study the number bond in the example below. Fill in the correct answer for Questions 20 and 21.

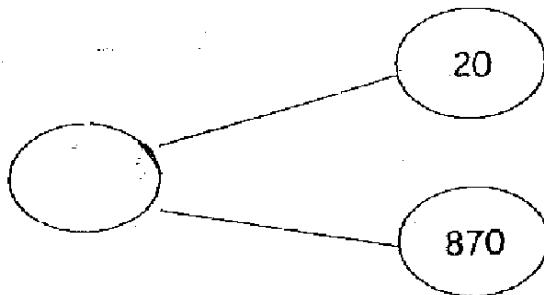
Example:



20.



21.



For Questions 22 and 23, write "more" or "less" in the blanks provided.

22. The length of the class whiteboard is \_\_\_\_\_ than 1m.

23. The length of my pencil is \_\_\_\_\_ than 1m.



24.




$$\star + \star + \star = 60$$



$$\triangle + \triangle = 20$$

The value of  $\star + \triangle =$  \_\_\_\_\_



25.  and  represent 2 different numbers.

If  =  + , which is the bigger number?

Circle the bigger number:  

**Section C (10 x 1 mark)**

Do these sums carefully.

26. 
$$\begin{array}{r} 607 \\ + 292 \\ \hline \\ \hline \end{array}$$

27. 
$$\begin{array}{r} 485 \\ - 152 \\ \hline \\ \hline \end{array}$$

28.

$$\begin{array}{r} \phantom{0}89 \\ + \phantom{0}31 \\ \hline \phantom{0} \phantom{0} \phantom{0} \\ \hline \phantom{0} \phantom{0} \phantom{0} \end{array}$$

29.

$$\begin{array}{r} \phantom{0}876 \\ + \phantom{0}118 \\ \hline \phantom{0} \phantom{0} \phantom{0} \\ \hline \phantom{0} \phantom{0} \phantom{0} \end{array}$$

30.

$$\begin{array}{r} \phantom{0}205 \\ - \phantom{0}24 \\ \hline \phantom{0} \phantom{0} \phantom{0} \\ \hline \phantom{0} \phantom{0} \phantom{0} \end{array}$$

31.

$$\begin{array}{r} \phantom{0}820 \\ - \phantom{0}316 \\ \hline \phantom{0} \phantom{0} \phantom{0} \\ \hline \phantom{0} \phantom{0} \phantom{0} \end{array}$$

32.

$$\begin{array}{r} 4 \quad 6 \quad 0 \\ + \quad \boxed{\phantom{000}} \\ \hline 6 \quad 6 \quad 0 \\ \hline \end{array}$$

33.

$$\begin{array}{r} 5 \quad 4 \quad 3 \\ 2 \quad 1 \quad 5 \\ + \quad 3 \quad 1 \\ \hline \\ \hline \end{array}$$

34.

$$\begin{array}{r} 7 \quad 0 \quad 0 \\ - 6 \quad 0 \quad 8 \\ \hline \\ \hline \end{array}$$

35.

$$\begin{array}{r} \boxed{\phantom{000}} \\ - 1 \quad 5 \quad 5 \\ \hline 8 \quad 2 \\ \hline \end{array}$$

Section D (5 x 3 marks)

Do these sums. Write your number sentences and answers.

Show your working clearly.

36. Ali lost 27 marbles in a game. He had 351 marbles left.  
How many marbles did Ali have at first?

Working

\_\_\_\_\_

Ali had \_\_\_\_\_ marbles at first.

37. Tom collected 488 stamps. His sister collected 130 stamps  
fewer than him. How many stamps did Tom's sister collect?

Working

\_\_\_\_\_

She collected \_\_\_\_\_ stamps.

38. 478 children visited the zoo on Saturday.  
512 more children visited the zoo on Sunday than on Saturday.  
How many children visited the zoo on Sunday?

Working

\_\_\_\_\_ children visited the zoo on Sunday.

39. Jack wants to collect 291 marbles.  
He has collected 86 marbles.  
How many more marbles must he collect?

Working

He must collect \_\_\_\_\_ more marbles.

40. Mrs Lim made a necklace with 25 red beads, 44 blue beads and 60 white beads.

How many beads did she use in all?

Working

\_\_\_\_\_

She used \_\_\_\_\_ beads in all.

End of Paper

# ANSWER SHEET

TAO NAN PRIMARY SCHOOL - PRIMARY 2 MATHEMATICS 2007  
CONTINUAL ASSESSMENT (I)

1. 2                    31) 504                    36)  $351+27=378$
2. 1                    32) 200                    Ali had 378 marbles at first
3. 4                    33) 789
4. 3                    34) 092
5. 4                    35) 237                    37)  $488-130=358$
6. 1                    She collected 358 stamps.
7. 4
8. 3
9. 2
10. 1
11. Eight hundred and forty five
12. Three hundred and twelve
13. 911
14. 401
15. 707                    38)  $512+478=990$
16. 968, 896, 869, 689                    990 children visited the zoo on Sunday.
17. 300
18. 280
19. 236                    39)  $291-86=205$
20. 500                    He must collect 205 more marbles.
21. 890
22. more
23. less                     $25+44+60=129$
24. 30                    She used 129 beads in all.
25. ♥
26. 899
27. 333
28. 120
29. 994
30. 181