

Methodist Girls' School (Primary)  
Continual Assessment 1  
2005

Primary Two


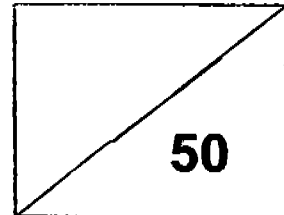
**Mathematics**

Name: \_\_\_\_\_ ( )

Class: Primary 2. \_\_\_\_\_

Date: 28 February 2005

Marks Obtained:



## Section A

### Mental Sums (6 x ½ m)

Write the correct answer in the blank.

1. \_\_\_\_\_

2. \_\_\_\_\_ tens

3. \_\_\_\_\_

4. \_\_\_\_\_ cm

5. \_\_\_\_\_


6. \_\_\_\_\_

**Section B (32 x 1m)**

Match the following.

7.  $400 + 2$  • • ~~42~~
8. 4 tens + 2 ones • • 402
9. 4 hundreds + 2 tens • • 60
10. 4 tens + 2 tens • • 420

11. Complete the number pattern.



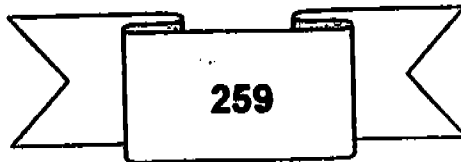
12. Write 312 in words.

---

13. Colour the shape with the <sup>smaller</sup> number.



For questions 14 and 15, refer to the number given.



14. What number is 100 less? \_\_\_\_\_

15. What number is 1 more? \_\_\_\_\_

Do the following.

16.

$$\begin{array}{r} 368 \\ + 231 \\ \hline \\ \hline \end{array}$$

17.

$$\begin{array}{r} 503 \\ + 169 \\ \hline \\ \hline \end{array}$$

18.

$$\begin{array}{r} 477 \\ + 324 \\ \hline \\ \hline \end{array}$$

19.

$$\begin{array}{r} 729 \\ - 204 \\ \hline \\ \hline \end{array}$$

20.

$$\begin{array}{r} 541 \\ - 480 \\ \hline \\ \hline \end{array}$$

21.

$$\begin{array}{r} 1000 \\ - 365 \\ \hline \\ \hline \end{array}$$



22.  $740 - 45 = \underline{\quad\quad} + 200$

23. Joanne has 40 more stickers than Angeline. Angeline has 685 stickers. How many stickers does Joanne have?  
\_\_\_\_\_

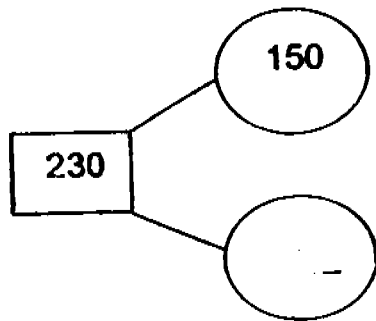
24. What numbers do the shapes stand for?

$$\begin{array}{r} \text{Cylinder} - 2 = \text{Lightning Bolt} \\ \text{Lightning Bolt} + \text{Lightning Bolt} = 14 \end{array}$$

$$\begin{array}{r} \text{Cylinder} = \underline{\hspace{2cm}} \\ \text{Lightning Bolt} = \underline{\hspace{2cm}} \end{array}$$

Fill in the blanks.

25.



26.  $\underline{\hspace{1cm}} \underline{\hspace{1cm}} + 50 + 3 = 853$

27.  $\underline{\hspace{1cm}} \underline{\hspace{1cm}}$  hundred 2 tens 7 ones = 127

For questions 28 to 30, write + or - in the circles.

28.  $46 \bigcirc 76 - 22 = 100$

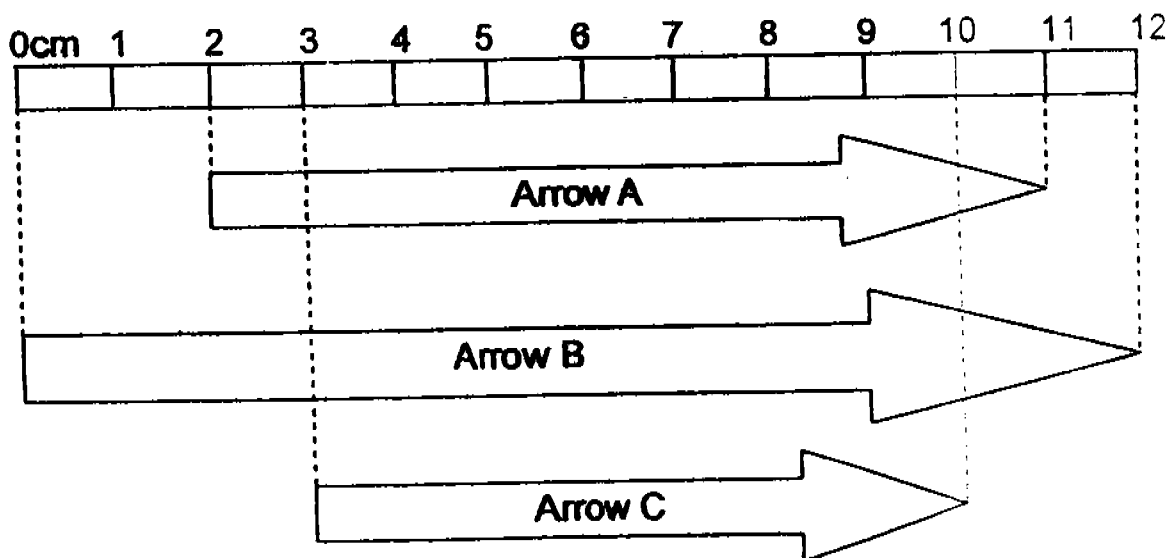
29.  $89 \bigcirc 12 + 34 = 135$

30.  $93 \bigcirc 32 + 12 = 73$

Match the following.

31. My handspan is about  4 cm
32. The length of the teacher's table is about  140 cm
33. The length of my big toe is about  14 cm

Look at the pictures carefully and answer questions 34 to 38.



34. Arrow  is the longest.
35. Arrow  is the shortest.
36. Arrow B is  cm longer than Arrow C.
37. Arrow  is 3cm longer than Arrow .
38. The total length of all the arrows is  cm.

**Section C (5 x 3m)**

Solve these problems. Show your working clearly.

39. Mr Lim baked 689 buns on Monday. He baked 177 buns less on Tuesday. How many buns did Mr Lim bake on Tuesday?

Mr Lim baked \_\_\_\_\_ buns on Tuesday.

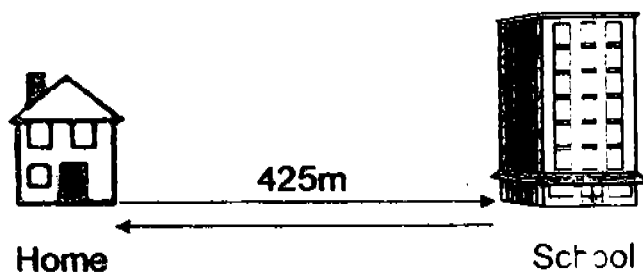
40. There are 345 boys and 298 girls at a funfair. How many children are there altogether?

There are \_\_\_\_\_ children altogether.

41. Jolene had 100m of ribbon. She used 38m to tie some presents. What is the length of ribbon left?

The length of ribbon left is \_\_\_\_\_ m.


42. Stephanie's school is 425m from her home. How far does she travel in a day if she walks to school and back every day?



She travels \_\_\_\_\_ m every day.



43. A shop had 770 sticks of ice-cream. 232 sticks were chocolate-flavoured, 137 sticks were strawberry-flavoured and the rest were vanilla-flavoured. How many sticks of vanilla ice-cream were there?



There were \_\_\_\_\_ sticks of vanilla ice-cream.

End of Paper

Have you checked your work?



# ANSWER SHEET

## Methodist Girls' School / Pri 2 CA1/2005 Maths

- |            |                              |         |          |        |
|------------|------------------------------|---------|----------|--------|
| 1)106      | 2)9                          | 3)cm    | 4)140cm  | 5)66   |
| 6)90       | 7)402                        | 8)42    | 9)420    | 10)60  |
| 11)507,527 | 12) three hundred and twelve |         |          | 13)860 |
| 14)159     | 15)260                       | 16)599  | 17)672   | 18)801 |
| 19)525     | 20)61                        | 21)635  | 22)495   | 23)725 |
| 24)9,7     | 25)80                        | 26)800  | 27)1     | 28)+   |
| 29)+       | 30)-                         | 31)14cm | 32)140cm | 33)4cm |
| 34)B       | 35)C                         | 36)5    | 37)B , A | 38)28  |
| 39)512     | 40)643                       | 41)62   | 42)850   | 43)401 |