

Methodist Girls' School (Primary)

Continual Assessment 1  
2007

Primary Two

Mathematics

Name: \_\_\_\_\_ (       )

Class: Primary 2. \_\_\_\_\_

Date: \_\_\_\_\_

Parent's Signature: \_\_\_\_\_

Marks Obtained	50
----------------	----

Section A

Mental Sums (6 x ½ m)

Fill in each blank with the correct answer.

1. \_\_\_\_\_

2. \_\_\_\_\_

3. \_\_\_\_\_

4. \_\_\_\_\_

5. \_\_\_\_\_

6. \_\_\_\_\_

## Section B (32 x 1m)

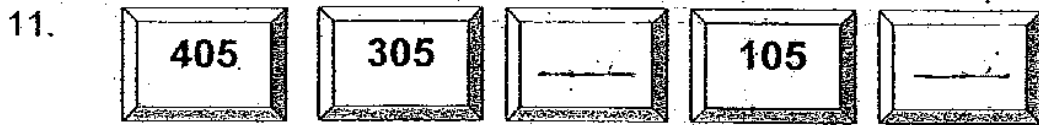
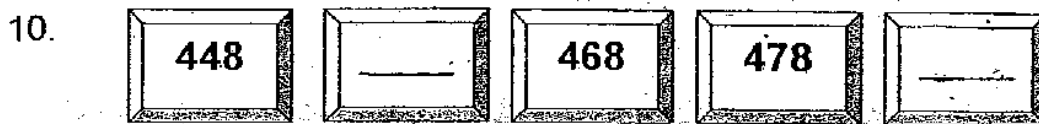
Match the following.

7.  $2 \times 6$       9

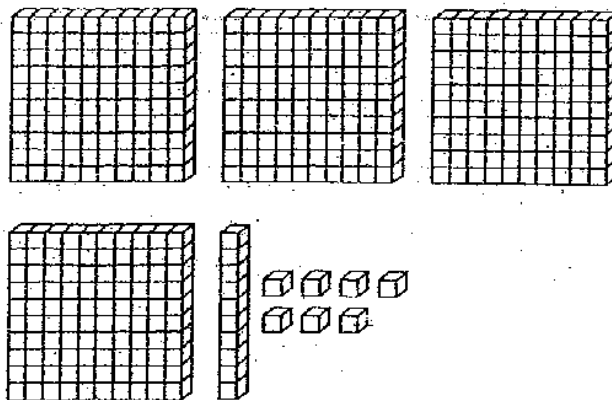
8.  $3 \times 7$       12

9.  $18 \div 2$       21

Fill in the missing numbers in the number patterns.



12. Count and write the correct number in each box.



\_\_\_\_\_ Hundred(s)      \_\_\_\_\_ Ten(s)      \_\_\_\_\_ One(s)

Fill in each blank with the correct answer.

13. The digit \_\_\_\_\_ in 385 is in the hundreds place.

14. 473 is \_\_\_\_\_ more than 463.

15. \_\_\_\_\_ is 100 less than 390.

16. 100 tens is the same as \_\_\_\_\_.

Do the following sums.

17. 
$$\begin{array}{r} 652 \\ + 137 \\ \hline \end{array}$$

18. 
$$\begin{array}{r} 546 \\ + 129 \\ \hline \end{array}$$

19. 
$$\begin{array}{r} 745 \\ - 308 \\ \hline \end{array}$$

20. 
$$\begin{array}{r} 400 \\ - 157 \\ \hline \end{array}$$

Write the greatest and the smallest 3-digit numbers using all the digits given below:

7, 2, 5
---------

21. The greatest number is \_\_\_\_\_

22. The smallest number is \_\_\_\_\_

Fill in each blank with the correct number.

23. 4 hundreds + 6 tens = \_\_\_\_\_

24. 8 hundreds + 7 ones = \_\_\_\_\_

25. Study the pattern below.

	5	
200	265	60

	9	
300	389	80

	7	
?	427	20

The missing number is \_\_\_\_\_

26. Mother bought 3 bags of pears.  
There were 6 pears in each bag.  
How many pears did she buy altogether?

\_\_\_\_\_ pears

27. **Circle** the books into groups of 3 and fill in each blank with the correct number.



\_\_\_\_\_ ÷ 3 = \_\_\_\_\_

Fill in each blank with the correct number.

28.  $3 \times \underline{\hspace{2cm}} = 6 + 9$

29.  $\underline{\hspace{2cm}} + \underline{\hspace{2cm}} = 2 \times 10$

30.  $3 + 3 + 3 + 3 + 3 + 3 + 3 + 3 = \underline{\hspace{2cm}}$  groups of 3.

For Q31 and Q32, use each number once to complete the number sentence.

31.



$\underline{\hspace{2cm}} \times \underline{\hspace{2cm}} = \underline{\hspace{2cm}}$

32.



$\underline{\hspace{2cm}} \div \underline{\hspace{2cm}} = \underline{\hspace{2cm}}$


33. Mrs Lee baked 16 chicken pies.  
She put 2 chicken pies on 1 plate.  
How many plates did she use?

$\underline{\hspace{2cm}}$  plates

34. Study the pattern and fill in the blank.

$$\star + \star = 20$$



$$\text{⚡} + \text{⚡} + \star = 28$$

 stands for \_\_\_\_\_

35. 2 boys and 3 girls ate all the cookies on a plate.  
Each child ate 2 cookies.  
How many cookies were on the plate?

\_\_\_\_\_ cookies

36. If        stand for 14 envelopes,

then   would stand for \_\_\_\_\_ envelopes.

37. Study the pattern below.

90	40	50	?	64
		25		
		75		

The missing number is \_\_\_\_\_

38. Study the pattern below.

60		
10	20	30

80		
10	30	40

?		
20	40	60

The missing number is \_\_\_\_\_



Section D (5 x 3m)

Solve these problems. Show your working clearly.

39. There were 275 books in Box A.  
There were 87 more books in Box B than in Box A.  
How many books were there in Box B?

There were \_\_\_\_\_ books in Box B.

40. Mr Lee had 350 durians.  
Some of them were rotten and only 148 were good.  
How many durians were rotten?

\_\_\_\_\_ durians were rotten.

41. Jane has 9 stamps.  
Her brother has 3 times as many stamps as she.  
How many more stamps does Jane's brother have?

Jane's brother has \_\_\_\_\_ more stamps.

42. Rachel sewed some blouses.  
She used 2 pink buttons and 3 blue buttons on each blouse.  
How many buttons did she use if she sewed 3 blouses?

She used \_\_\_\_\_ buttons.

43. After packing 10 curry puffs into each of the 3 boxes, Sally had 48 curry puffs left.  
How many curry puffs did she have at first?

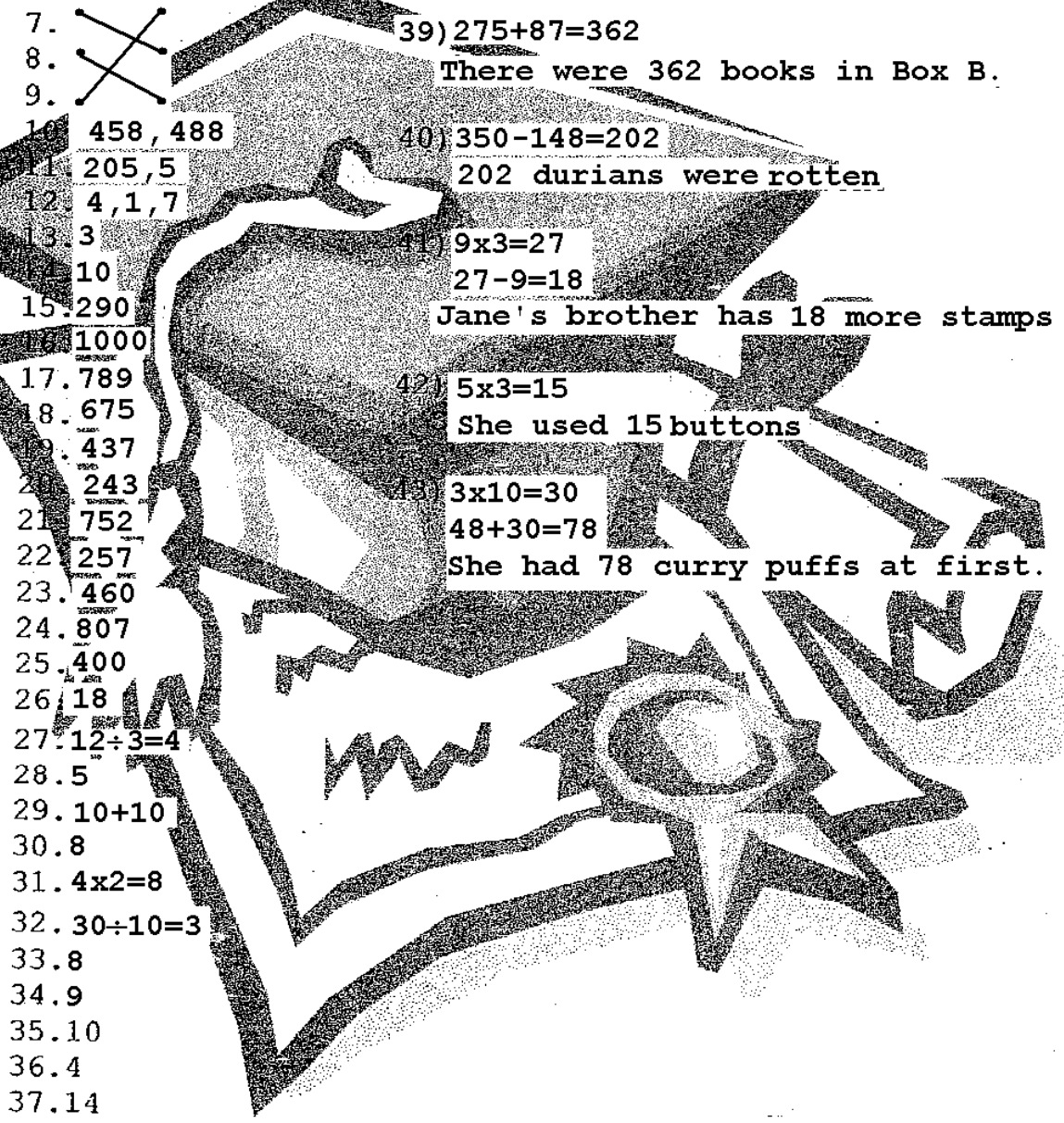
She had \_\_\_\_\_ curry puffs at first.

☞ End of Paper ☞

Please check your work carefully.

# ANSWER SHEET

M G S PRIMARY SCHOOL - PRIMARY 2 MATHEMATICS 2007  
CONTINUAL ASSESSMENT (1)

- 
7. ~~XXXX~~
8. ~~XXXX~~
9. ~~XXXX~~
10. 458,488
11. 205,5
12. 4,1,7
13. 3
14. 10
15. 290
16. 1000
17. 789
18. 675
19. 437
20. 243
21. 752
22. 257
23. 460
24. 807
25. 400
26. 18
27.  $12 \div 3 = 4$
28. 5
29.  $10 + 10$
30. 8
31.  $4 \times 2 = 8$
32.  $30 \div 10 = 3$
33. 8
34. 9
35. 10
36. 4
37. 14
38. 120
- 39)  $275 + 87 = 362$   
There were 362 books in Box B.
- 40)  $350 - 148 = 202$   
202 durians were rotten
- 41)  $9 \times 3 = 27$   
 $27 - 9 = 18$   
Jane's brother has 18 more stamps
- 42)  $5 \times 3 = 15$   
She used 15 buttons
- 43)  $3 \times 10 = 30$   
 $48 + 30 = 78$   
She had 78 curry puffs at first.