




SA2

Rosyth School  
Second Semestral Assessment 2004  
Mathematics  
Primary 1



Total

Name: \_\_\_\_\_

Class: Pr 1- \_\_\_\_\_ Register No. \_\_\_\_\_

Duration: 1h 30 min

Date: 1 November 2004

Parent's Signature: \_\_\_\_\_

Instructions to Pupils:

1. Do not open this booklet until you are told to do so.
2. Follow all instructions carefully.
3. This paper consists of 2 parts, Sections A and B.
4. ANSWER ALL THE QUESTIONS.
5. Check all answers carefully.

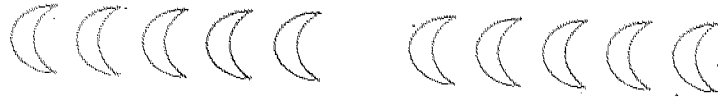
	Maximum	Marks Obtained
Section A	84	
Section B	16	
Total	100	

\* This paper consists of \_\_\_\_\_13\_\_\_\_\_ pages altogether.

Section A : ( 84 marks )

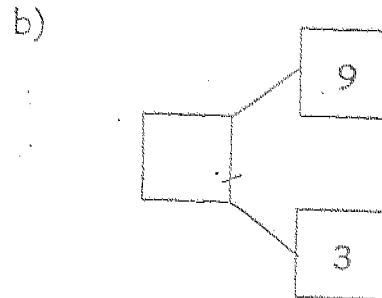
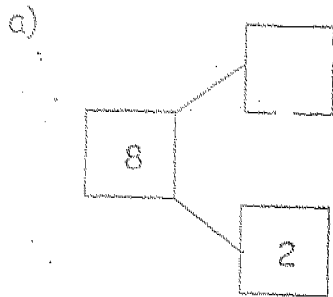
Questions 1 to 42 carry 2 marks each. For each question, write your answer in the space provided.

1. Write the correct number in the box.





$5 + 10 =$

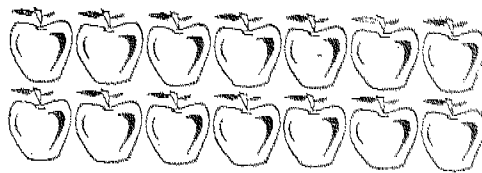
2. Fill in the boxes with the correct answer.



3. Complete the number patterns.



4. 7 children share 14 apples equally.



Each child gets  apples.

5.  $45 + 4 =$

6.  $70 - 25 =$

7.  $83 - 30 =$

8. Colour two stars to make 9.



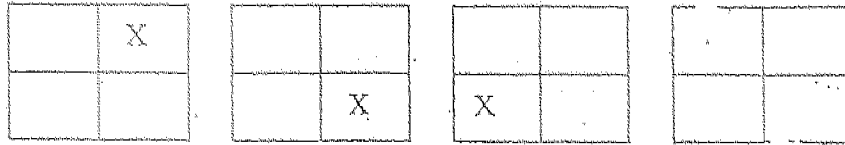
9. 6 threes =  $3 + 3 + 3 + 3 + 3 + 3 =$

10. E ~~X~~ E P H A N T

a) Ring the 4<sup>th</sup> letter.

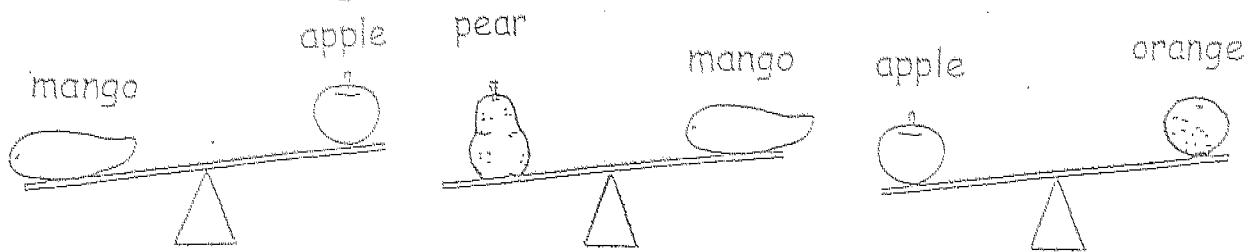
b) Put a cross on the 7<sup>th</sup> letter.

11. Draw an "X" in the last figure to complete the pattern.



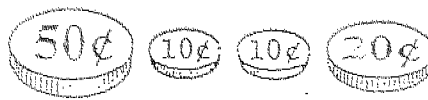
last figure

12.



The lightest fruit is

13.



The total amount of all the coins is

¢

14.  $67 + 10 =$   tens  ones

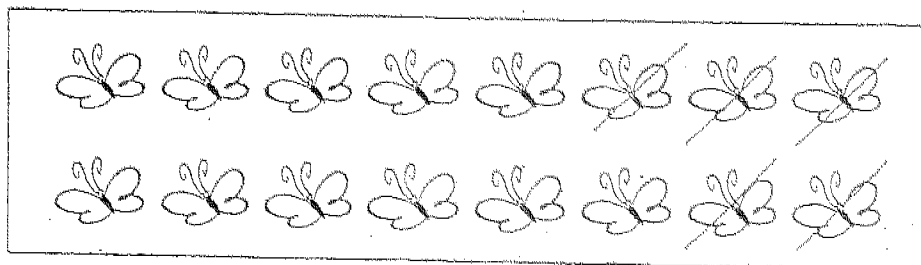
15. Arrange the numbers from the greatest to the smallest.

Smallest

16. Mrs Li bought 30 eggs. She used 12 eggs to bake a cake. How many eggs were left?


eggs were left.

17. Study the picture below and write a subtraction sentence.



18. Write the answer in the box.

$$\heartsuit + 2 + \heartsuit = 10$$


Each  is

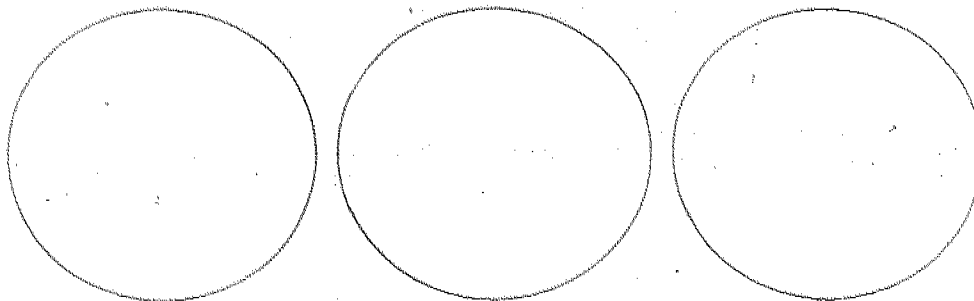
19.



Devi, Helen and Siti bought 12 cupcakes. They shared the cupcakes equally among themselves. How many cupcakes did each girl get?

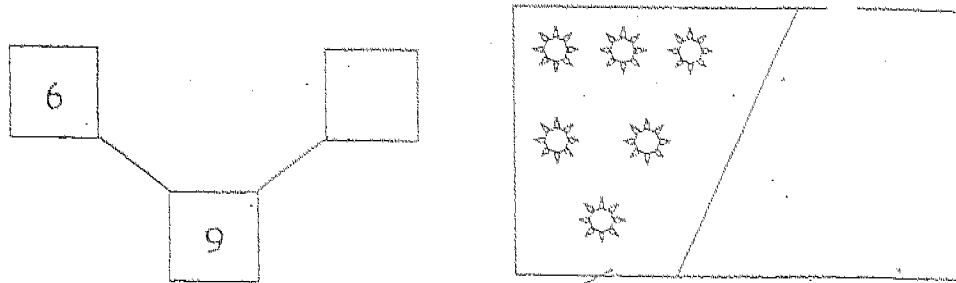
Each girl got  cupcakes.

20. Draw the correct number of  in each circle.

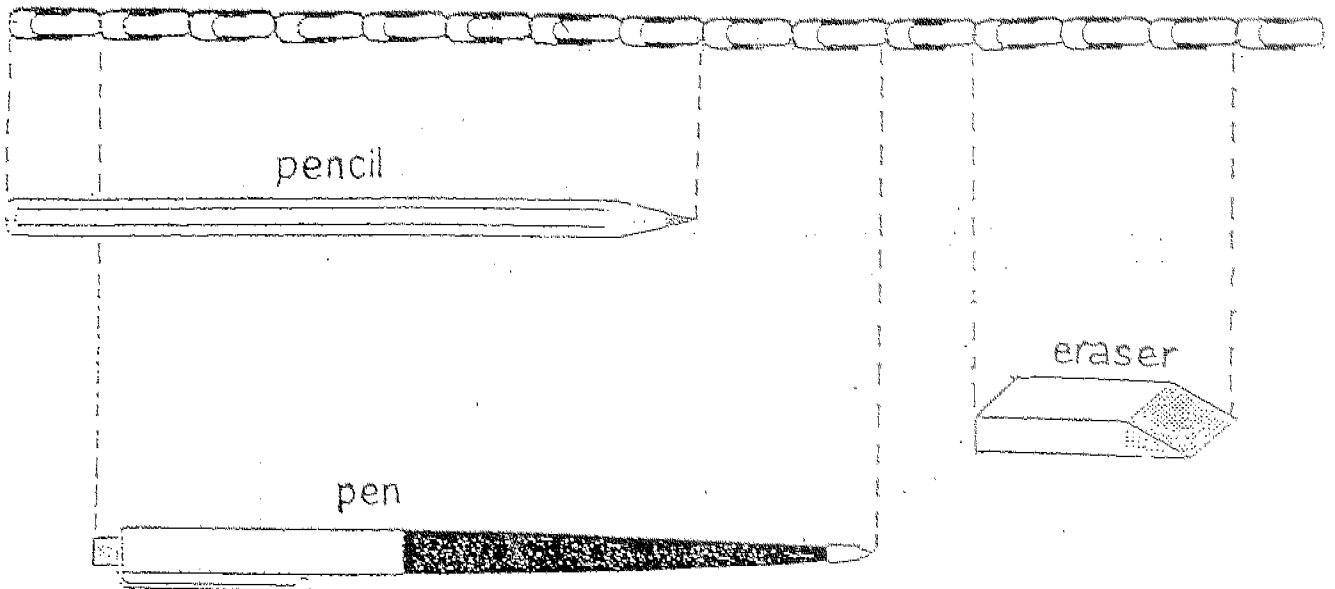


3 groups of 6 =

21. Fill in the missing number and draw the missing part.




Look at the picture below and answer Question 22 and 23.



22. The pencil is  longer than the eraser.

23. The total length of all the objects is .

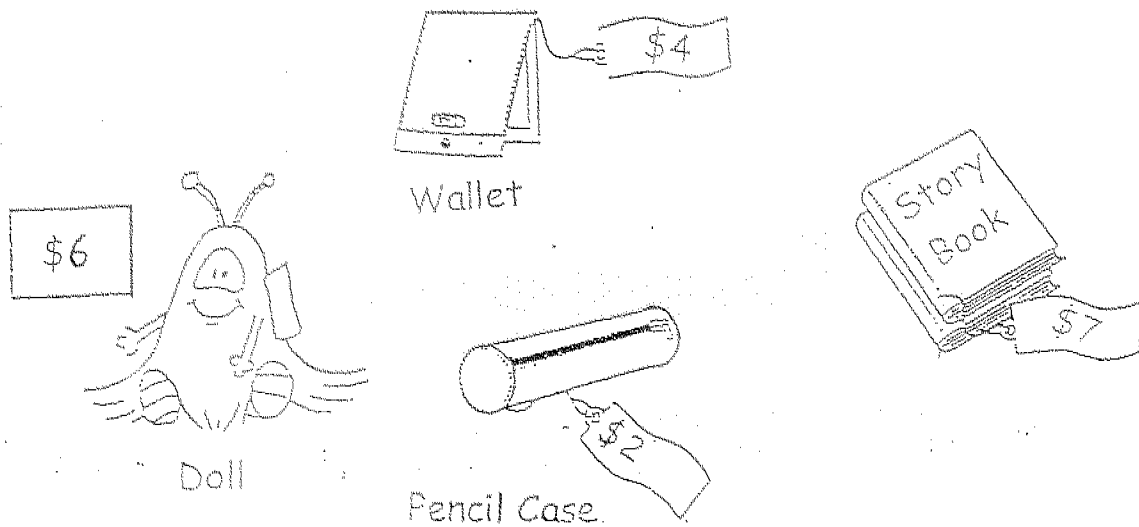
24.



a) There are  triangles in the picture.

b) There are  more triangles than circles.


25. Mary was given \$10 to buy her birthday gift. What are the two items that she could buy if she had to use all her money?




The two items are  and



The picture graph below shows the number of cups of different drinks sold in the school canteen. Use the graph to answer Question 26 & 27.



Each  stands for 1 cup.

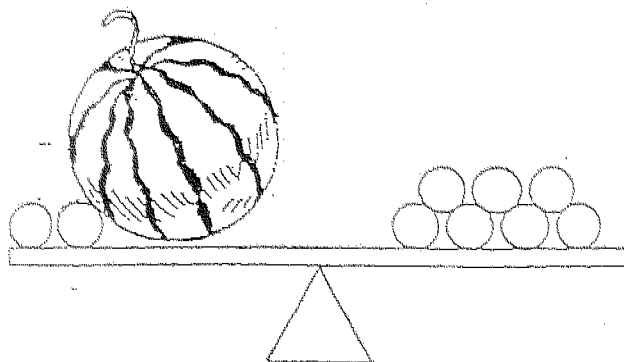
26. The most popular drink was

27.  more cups of Ribena than Milk were sold.

28. Zoogol left his house at 10 o'clock and reached the park half an hour later. What time did he reach the park?

He reached the park at

29.



The watermelon weighs

30.  $7 \times 5 = 5 + 5 + 5 + 5 + 5 + 5 + 5 =$   tens  ones

31. 23 boys and 45 girls are in the hall. How many more girls than boys are there?

There are  more girls.

32.  $10 -$    $= 3 + 3$

33.   $- 7 = 54$

34.  $18 \xrightarrow{+7} \boxed{\phantom{00}} \xrightarrow{+4} = \boxed{\phantom{00}}$

35.  $\boxed{\phantom{00}}$  is 3 less than 85.

36. 10 more than 64 is  $\boxed{\phantom{00}}$

37. Mdm Siti arranged 15 stalk of roses equally into 3 vases.  
How many roses were there in each vase?



There were  $\boxed{\phantom{00}}$  roses in each vase.

38. Fill in the missing number in the box.

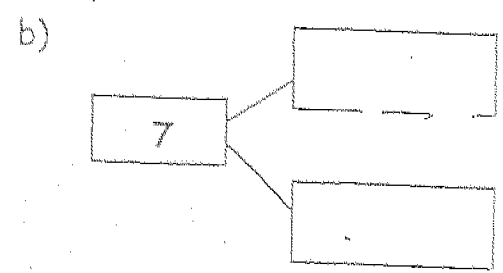
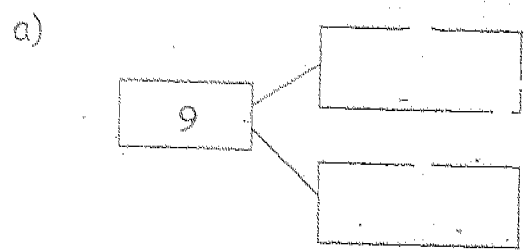



39. Colour the apple which is 2<sup>nd</sup> from the left and 4<sup>th</sup> from the right.




40. 19 is between  and 20.


41. Use the numbers in the box to complete the number bonds.




42. Ooogol has \$12 in his wallet. He bought the three items below. He has \$  left in his wallet.



\$1



\$3



\$2

Section B : ( 16 marks )

Questions 43 to 46 carry 4 marks each. For each question, show your number sentence clearly in the space provided and write your answer in the given box.

43. Tim has 13 goldfish. 4 of his goldfish died. How many goldfish does Tim have now?

He has  goldfish now.

44. Kim has 8 stickers and May has 7 stickers. Lily has 2 more stickers than May.

- a) How many stickers does Lily have?

Lily has  stickers.

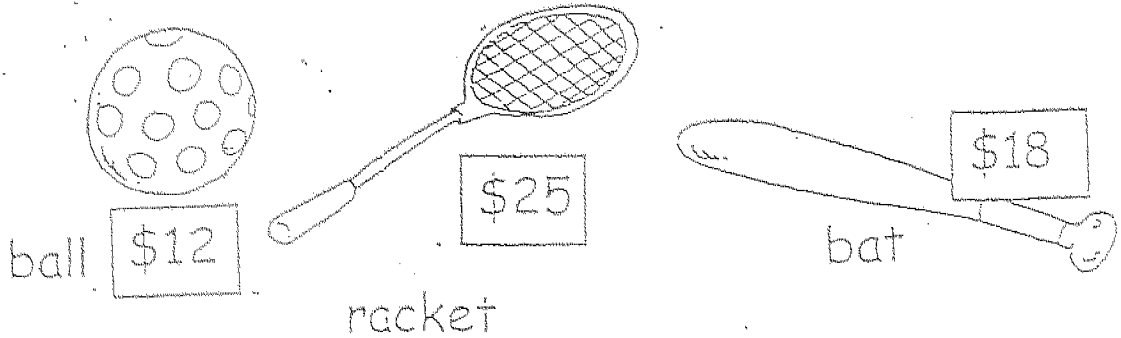
- b) How many stickers do the three girls have altogether?

The three girls have  stickers altogether.

45. A spider has 8 legs. How many legs do 4 spiders have?

4 spiders have  legs.

46.



Noogol had some money. He bought a ball and a bat.

a) How much money did he spend?

Noogol spent \$  altogether.

b) How much more does the racket cost than the ball?

The racket cost \$  more than the ball.

\*\*\* END OF PAPER \*\*\*

