

Methodist Girls' School (Primary)

2006 Semestral Assessment 1

Primary 1

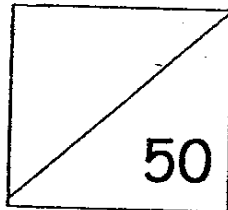
Mathematics

Name : _____ ()

Class : _____

Date : _____

Marks :



Parent's Signature : _____

Section A

Mental Sums (6 x ½ marks)

1. _____

2. _____

3. _____

4. _____

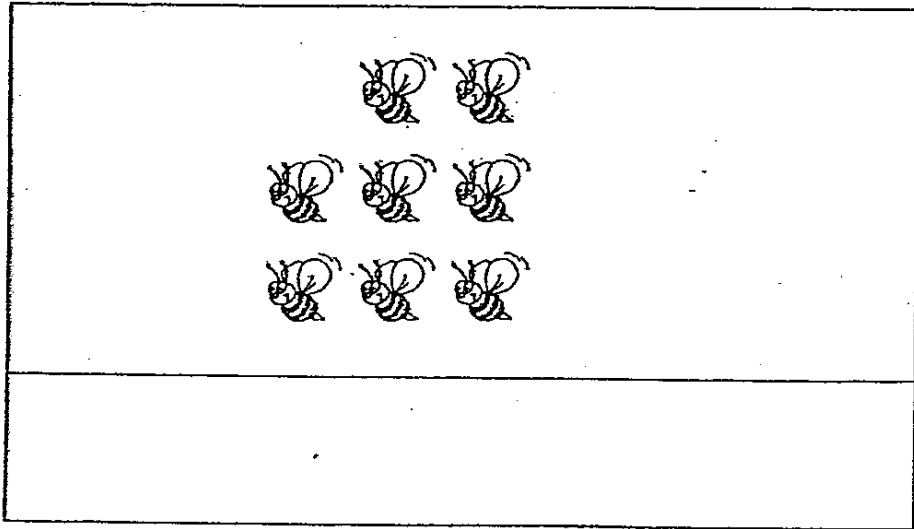
5. _____

6. _____

Section B (32 X 1 mark)

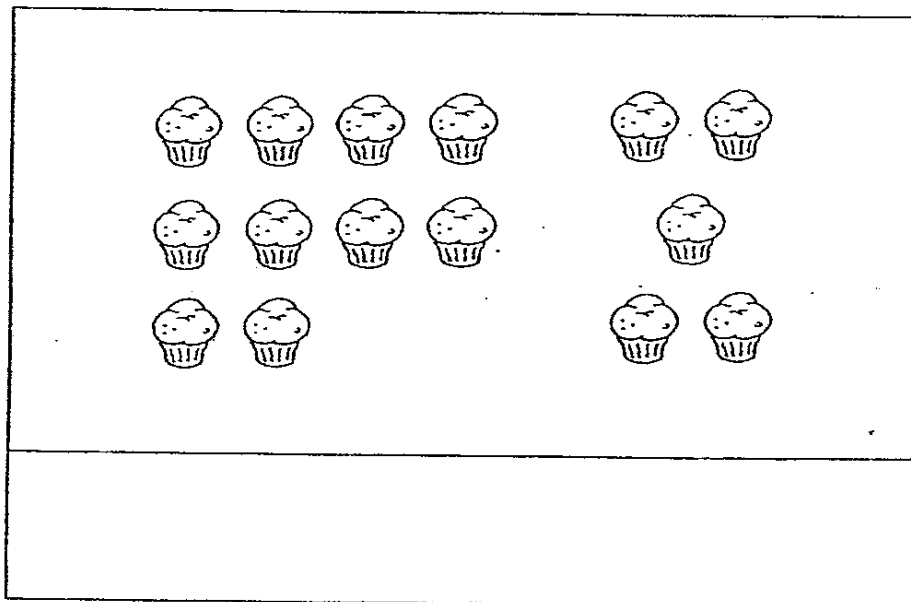
Count and write the numbers in words in the boxes below .

7.



A rectangular box containing 8 bees arranged in three rows: two in the top row, three in the middle row, and three in the bottom row. Below the box is a horizontal line, and the area below that line is empty for writing.

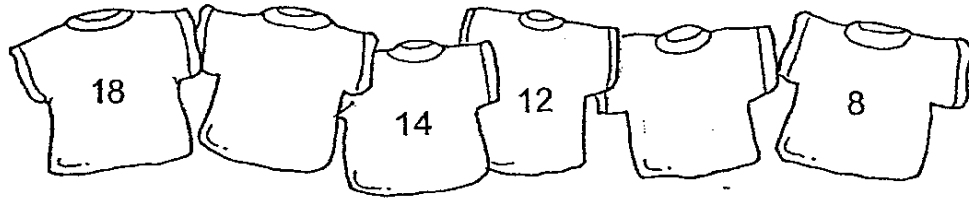
8.



A rectangular box containing 15 cupcakes arranged in two groups. The left group has 10 cupcakes in three rows (4, 4, 2). The right group has 5 cupcakes in three rows (2, 1, 2). Below the box is a horizontal line, and the area below that line is empty for writing.


Fill in the missing numbers.

9.




Look at the pictures and fill in the missing numbers.

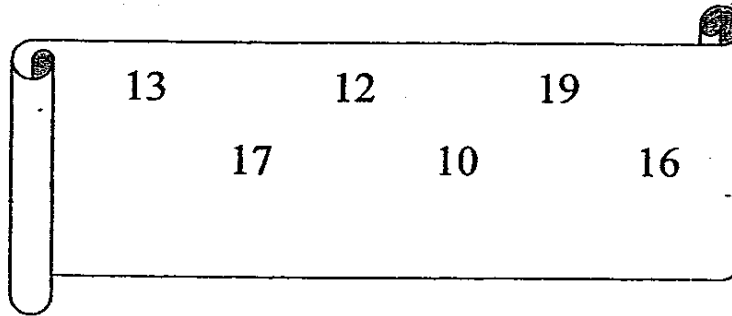
10.



11.



For questions 12 and 13, look at the following numbers and fill in the boxes with the correct answers.




12. 17 is smaller than





13.

is greater than 12 but smaller than 16.

14. Colour the two numbers that make 20.



Use the numbers below to write 2 number sentences.



15.

$$\square + \square = \square$$

16.

$$\square - \square = \square$$

Match.

17.

$$\square \bullet 8 + 9$$

$$\bullet \square 15 - 4$$

18.

$$\square \bullet 3 + 8$$

$$\bullet \square 20 - 3$$

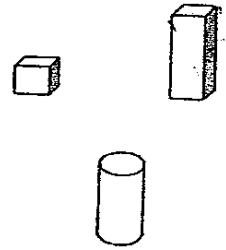
19.

$$\square \bullet 2 + 8$$

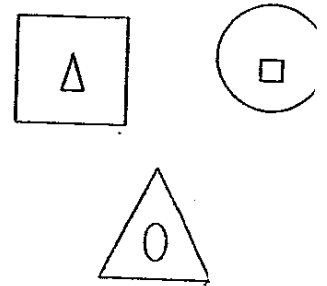
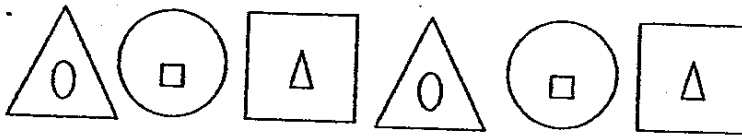
$$\bullet \square 19 - 9$$

Circle the shape that comes next.

20.




21.



22. 1 more than 9 is

23. 16 is 1 less than

Look at the picture and fill in the boxes below.



24. There are circles .

25. There are squares.

26. There are more triangles than rectangles.

Look at the pictures below.



Left

Right


27. Colour the 3rd crab from the right.

28. Cross out the 4th crab from the left.

29. Colour the 6th letter.

HAMBURGERS


10th



30. The snail is in the position.

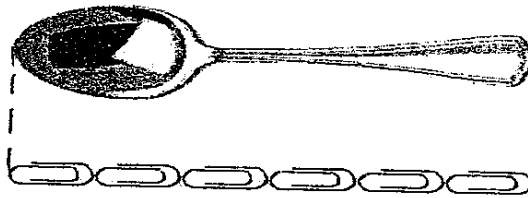
31. The is in the 2nd position.


Look at the picture and fill in the boxes with the correct answers.



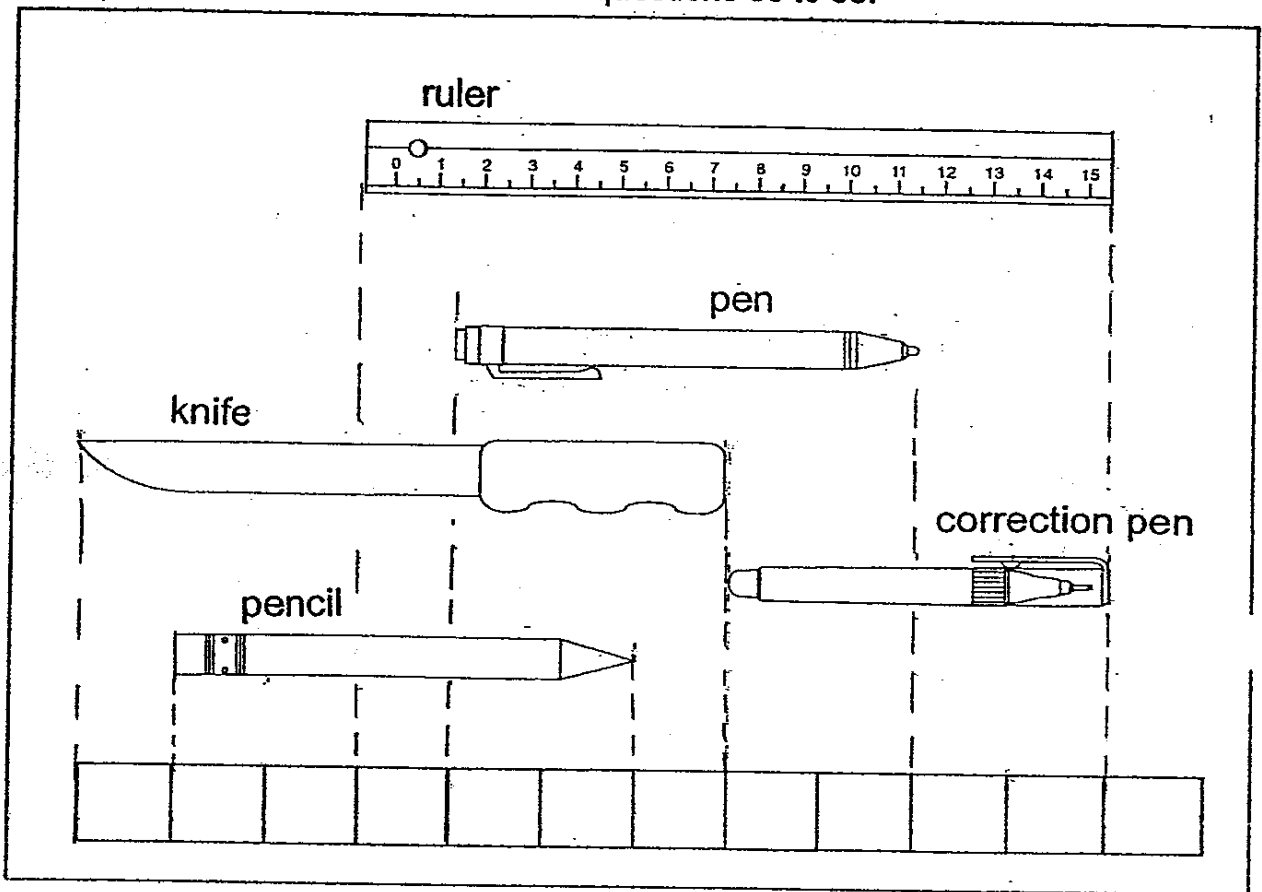
32. The giraffe is \triangle tall.

33. The tree is taller than the giraffe by \triangle .



34. The spoon is  long.

Look at the picture below and answer questions 35 to 38.



1 stands for 1 unit

35. The pencil is units long.
36. The pen is shorter than the ruler by units.
37. The knife is units longer than the correction pen.
38. The is as long as the


Section C (5 x 3 marks)

Do the sums carefully. Show your working clearly.

39. Mother bakes 11 cakes in the morning.

She bakes 7 cakes in the afternoon.

How many cakes does Mother bake altogether?



$$\square \bigcirc \square = \square$$

Mother bakes _____ cakes altogether.

40. Pamela has 13 books.

She gives 6 books away.

How many books has she left?

$$\square \bigcirc \square = \square$$

Pamela has _____ books left.

12

41. Raju uses 17 shapes to make a picture.
 His picture has 9 shapes more than Ali's.
 How many shapes does Ali use for his picture?

$$\square \quad \bigcirc \quad \square = \square$$

Ali uses _____ shapes for his picture.

42. Jennifer buys 8 stamps at the Philatelic Museum.
 She buys 7 stamps fewer than Susan.
 How many stamps does Susan buy?

Jennifer



8 stamps

Susan



?

$$\square \quad \bigcirc \quad \square = \square$$

Susan buys _____ stamps.

43. Kelly has 9 stickers.

She buys 2 more stickers.

Mother gives her 5 more.

How many stickers does Kelly have in the end?

$$\square \bigcirc \square \bigcirc \square = \square$$

Kelly has _____ stickers in the end.

Answer Sheets

Methodist Girls' Pri 1 SA1 / 2006 Mathematics

Mental Sums

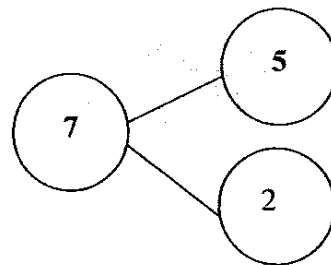
1. twelve 2. 17 3. 10 4. 12 5. 13 6. 8

7. 8

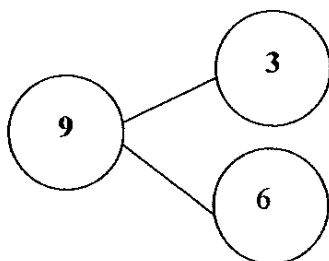
8. 15

9. 18, 16, 14, 12, 10, 8

10.




11.



12. 17 is smaller than 19

13. 13 is greater than 12 but smaller than 16

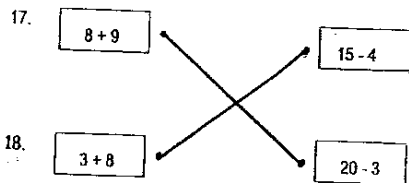
14.



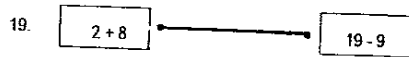
$$6 + 14 = 20$$

15. $9 - 4 = 13$

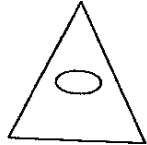
16. $13 - 9 = 4$



20.



21.



22. $1 + 9 = 10$

23. $17 - 1 = 16$

24. Circles = 8

25. Squares = 2

26. Triangles = 8 Rectangles = 5
 $8 - 5 = 3$

27.



28.



29.

HAMBURGERS

30. Snail = 5th position

31. The elephant is in the 2nd position.

32. Giraffee = 10 Δ

33. Tree = 12 Giraffee = 10
 $12 - 10 = 2\Delta$

34. The spoon is 6 \curvearrowright

35. Pencil = 5 \square

36. Pen = 5 Ruler = 8
 $8 - 5 = 3\square$

37. Knife = 7 Correction pen = 4
 $7 - 4 = 3\square$

38. The pencil is as long as the pen

39. $11 + 7 = 18$ cakes
Mother bakes 18 cakes altogether.
40. $13 - 6 = 7$ books
Pamela has 7 books left.
41. $17 - 9 = 8$
Ali uses 8 shapes for his picture.
42. $8 + 7 = 15$ stamps
Susan buys 15 stamps.
43. $9 + 2 + 5 = 16$
Kelly has 15 stickers in the end.