

Tao Nan School

Primary One Mathematics Continual Assessment - 2004

Name: _____ ()

Date: 25 August 2004

Class : P1 ()

Duration: 1h 15 min

Parent's Signature: _____

Marks: _____ / 50

Section A

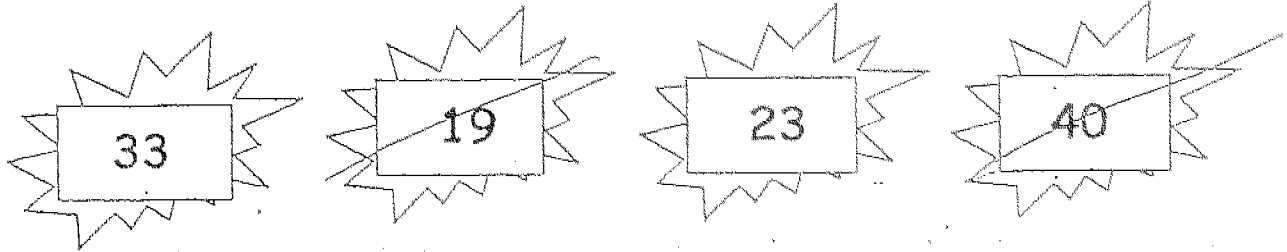
Write the following numerals in words. (3 x 1 mark)

1) 11 _____

2) 29 _____

3) 38 _____

Fill in the blanks. Use the numbers given below. (4 x 1 mark)



4) The smallest number is _____.

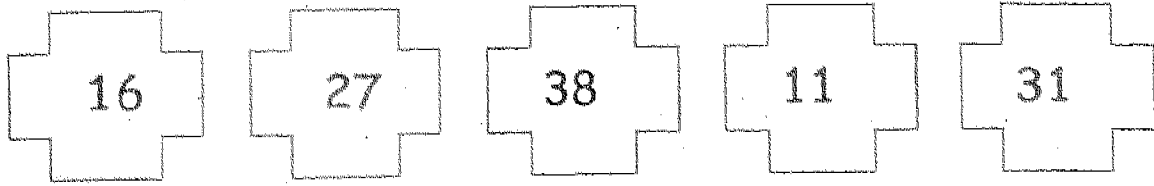
5) The greatest number is _____.

6) _____ is 10 more than 23.

7) _____ is greater than 19 but less than 33.

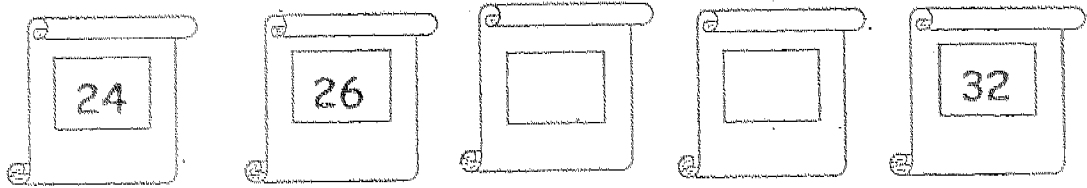
8) Arrange the numbers from the smallest to the greatest.

(1 mark)

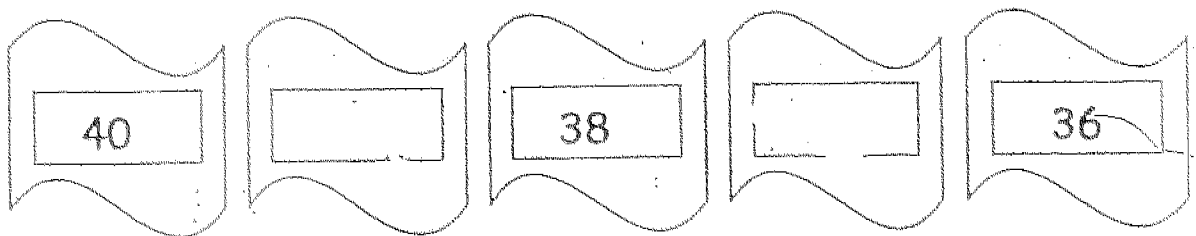


Complete the following number patterns. (2 x 1 mark)


9)



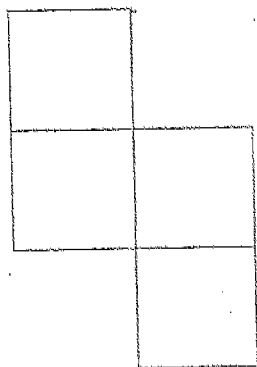
10)



11) Ring to show 5 groups of 3. (1 mark)



12) Google wants to form a big square. Which square must be moved to form the big square? Colour it. (1 mark)



Do these sums. (10 x 1 mark)

1	2	3	4	5	6	7	8	9	10
11	12	13	14	15	16	17	18	19	20
21	22	23	24	25	26	27	28	29	30
31	32	33	34	35	36	37	38	39	40

13) $5 + 7 + 8 = \underline{\hspace{2cm}}$

14) $23 + 7 = \underline{\hspace{2cm}}$

15) $\underline{\hspace{2cm}} + 6 = 30$

16) $26 - \underline{\hspace{2cm}} = 19$

17) 10 more than 27 is $\underline{\hspace{2cm}}$

18) 5 less than 33 is $\underline{\hspace{2cm}}$

19) $7 + 7 + 7 = \underline{\hspace{2cm}}$ sevens

20) 23 and $\underline{\hspace{2cm}}$ make 40.

21) $24 + 8 = \underline{\hspace{1cm}} \underline{\hspace{1cm}}$ tens 2 ones

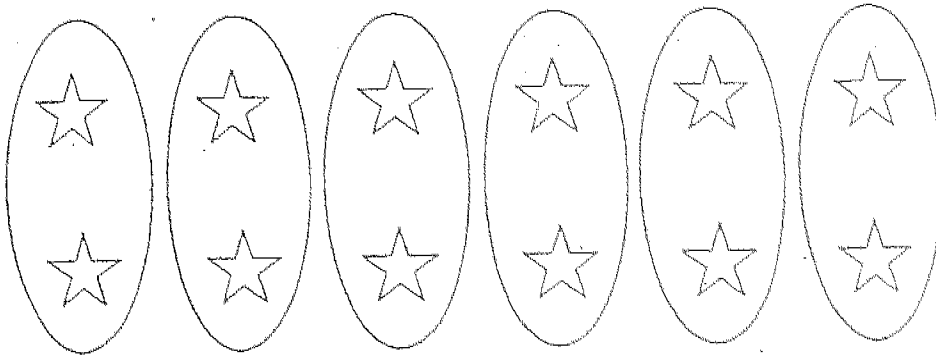
22) $\underline{\hspace{2cm}}$ is between 29 and 31.

Section B

23 to 25

Look at the pictures to answer Questions 19 to 21

Fill in the blanks with the correct answers (3 x 1 mark)

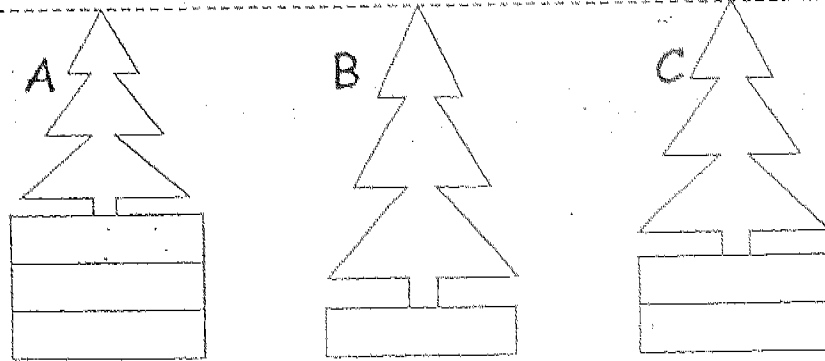


23) There are _____ groups of stars.

24) There are _____ stars altogether.

25) 6 twos is the same as $6 \times$ _____

26) Fill in the blanks. (1 mark)



Tree _____ is the shortest.

27)

Match the correct pairs.

There are only 3 correct pairs. (1 x 3 marks)

$8 + 8 + 8 + 8$

2 tens 8 ones

$2 + 2 + 3 + 3$

2 groups of 8

3 twos

2×8

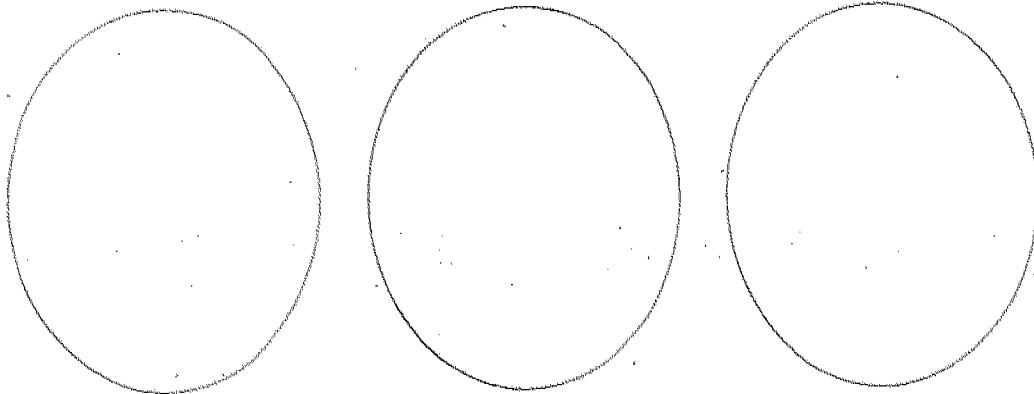
32

2×3

28)

Draw \triangle to show 3 groups of 7. (1 x 2 marks)

Then complete the multiplication sentence.



3


\times

\square







$=$


\square

The picture graph below shows the number of tickets sold for 'Barney on Ice'. Study it carefully. Then fill in the blanks. (4 x 1 mark)

Each  stands for 1 ticket.

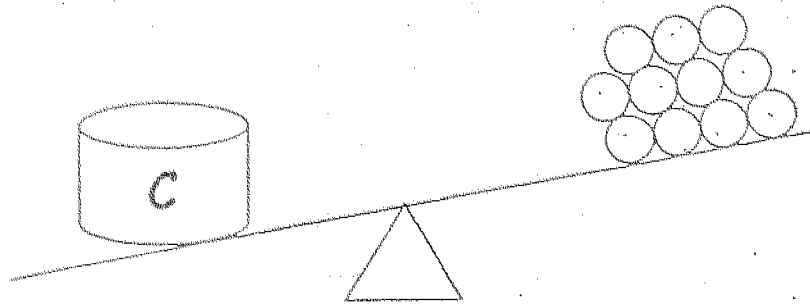
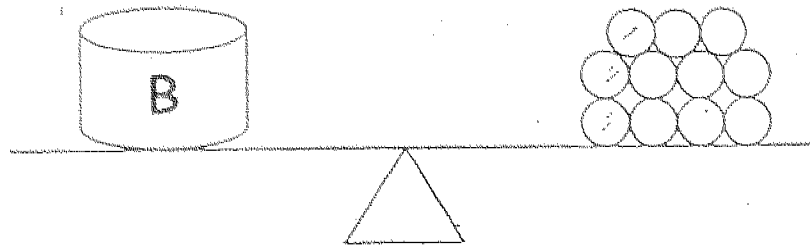
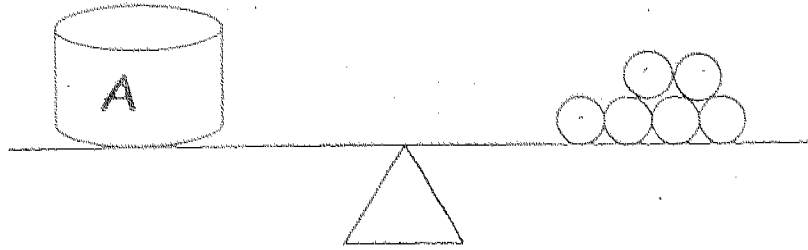
Number of Tickets Sold

Monday	
Tuesday	
Wednesday	
Thursday	
Friday	
Saturday	
Sunday	

- 29) There were _____ tickets sold on Friday.
- 30) Draw  to show 5 tickets sold on Monday.
- 31) There were _____ fewer tickets sold on Thursday than on Tuesday.
- 32) There were _____ tickets sold from Friday to Sunday.

Fill in the blanks (3 x 1 mark)

Each ○ stands for 1 unit.



33) The mass of Container A is _____ units.

34) Container B is heavier than Container A by _____ units.

35) Container _____ is the heaviest.

Section C

Read the story sums carefully. Write down the number sentences and answers. (4 x 3 marks)

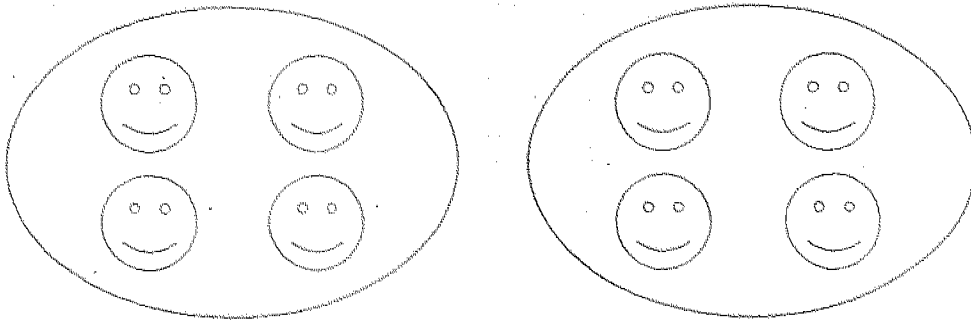
- 36) There are 8 tigers, 3 lions and 5 elephants in a zoo. How many animals are there altogether?

There are _____ animals altogether.

- 37) Jane has 35 dolls. She has 9 more dolls than Nicole. How many dolls does Nicole have?

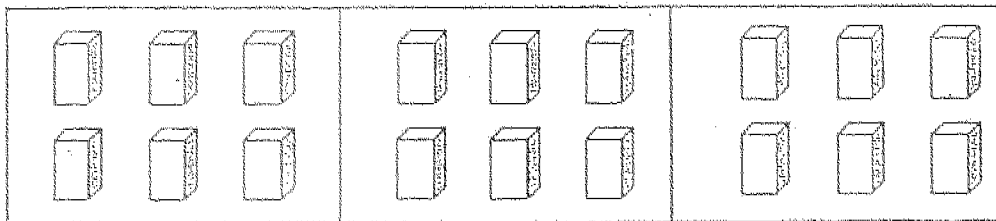
Nicole has _____ dolls.

38) Mr Lee wants to form 2 teams. He needs 4 pupils in each team. How many pupils does he need?



He needs _____ pupils.

39) I went shopping with 2 friends. Each of us bought 6 boxes of crayons. How many boxes did we buy altogether?


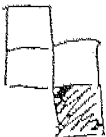





We bought _____ boxes of crayons altogether.

~ End of Paper ~

CA2

TAY NAN SCHOOL
 PRIMARY ONE MATHEMATICS CONTINUAL ASSESSMENT 2004

- 1) eleven
- 2) twenty-nine
- 3) thirty-eight
- 4) 19
- 5) 40
- 6) 33
- 7) 23
- 8) 11 16 27 31 38
- 9) 28 30
- 10) 39 37
- 11) circle 3 
- 12) 
- 13) 20
- 14) 30
- 15) 24
- 16) 7
- 17) 37
- 18) 28
- 19) 3
- 20) 17
- 21) 3
- 22) 30
- 23) 6
- 24) 12
- 25) 2
- 26) A
- 27) 
- 28) 
3 9
- 29) 3
- 30) 
- 31) 3
- 32) 12
- 33) 6
- 34) 5
- 35) C
- 36) $8 + 3 + 5 = 16$
16
- 37) $35 - 9 = 26$
26
- 38) $2 \times 4 = 8$
8
- 39) $3 \times 6 = 18$
18