

RED SWASTIKA SCHOOL
CONTINUAL ASSESSMENT - 2004
MATHEMATICS

PAR

Name: _____

Marks: _____ / 100

Class: Pr 1 / _____ ()

Date: 24 - 08 - 2004

Time: 1 h 30 min

Parent's Signature: _____

Section A: 80 marks (2marks each)


1a) Write the number in words.

19 : _____

1b) Write the word in numerals.

thirty-seven : _____

2) Count and write the number of toy cars in the box.



3) Circle the biggest number in the set.

32	3 ⁷ tens 7 ones	23	39 ones ;
----	----------------------------	----	-----------

4) Use the numbers in the box to answer Questions 4(a) and 4(b).


34	21	19	38
----	----	----	----

a) What number comes just after 20? _____

b) What number comes before 37? _____

5) Write down the numbers in order. Begin with the greatest number.

17	36	22	37
----	----	----	----



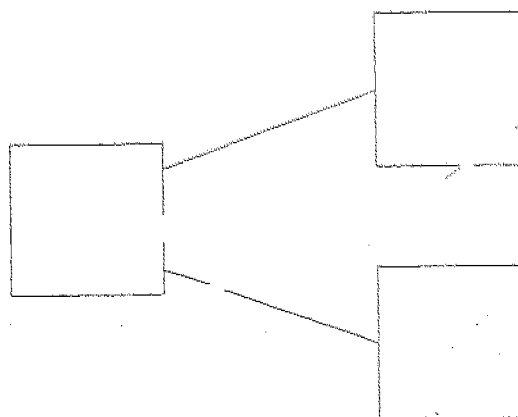

6) Study the number sentence carefully and write the correct number in the boxes provided.

$$30 + 8 = \boxed{}$$

$$= \boxed{} \text{ tens } \boxed{} \text{ ones}$$



7) Look at the picture below and write a number bond for it.



8) Colour the ovals that match the answer in the rectangle on the left.

$$6 + 6 + 6$$

$$3 \times 6$$


$$2 \times 6$$

$$3 \times 4$$

$$2 \times 9$$




- 9) Circle the bells in groups of tens and fill in the answer in the blanks below.



_____ tens + _____ ones = _____

- 10) Paul bought 19 chocolate bars.
He gave 7 chocolate bars to Yongde.
How many chocolate bars had he left?

He had _____ chocolate bars left.



Fill in the correct answers in the spaces provided.

11) $18 + \boxed{} = 29$

12) $27 - 18 = \boxed{}$

13) 1 ten 2 ones + 4 = $\boxed{}$

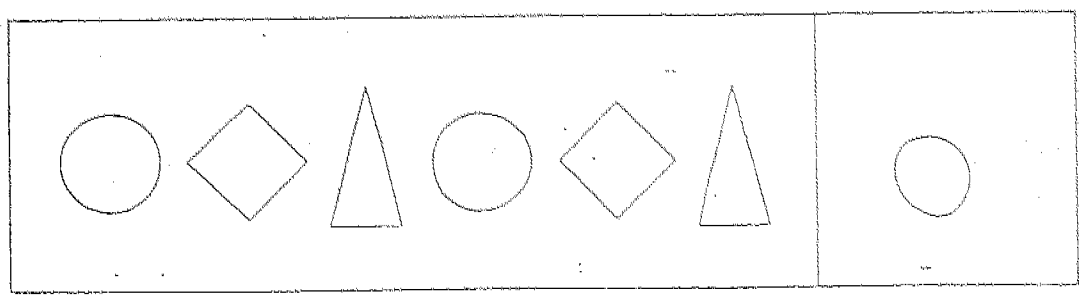
14) 5 sixes = $\boxed{}$

15) 4 ones \times 7 ones = $\boxed{}$

16) $\boxed{}$ tens + 8 ones = 38

17) $20^{\text{tens}} - 7 = \boxed{}$

18) Draw the shape that comes next in the box provided.



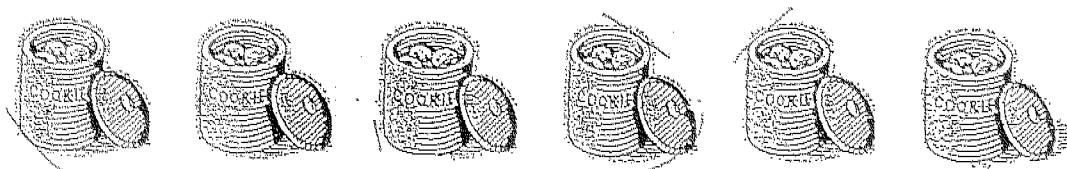
Look at the stars below and answer Questions 19(a) and 19(b).



19a) _____ is more than 21 but less than 30.

19b) _____ is 4 more than 12 and it is between 14 and 18.


20) Circle the correct number of groups and complete the number sentence.





3 groups of 2 cookie jars



= ~~6~~

6



21) Each of the symbols,  & , represents a number.

$$\text{sun symbol} \times 3 = \text{crescent moon symbol}$$

If  = 12, what number does the symbol  represent?

$$\text{sun symbol} = \boxed{}$$

Write the correct answers in the boxes provided.

22) threes is the same as 15.

23) 33 is between 32 and .

24) is more than 17 but less than 19.

25) $10 = \text{input} \text{ ten} \times 1 \text{ one.}$

26) \times = 2 tens

Look at the picture below carefully and answer Questions 27(a) and 27(b).



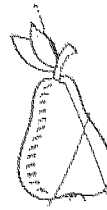
watermelon



banana



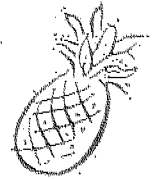
pumpkin



pear



apple



pineapple

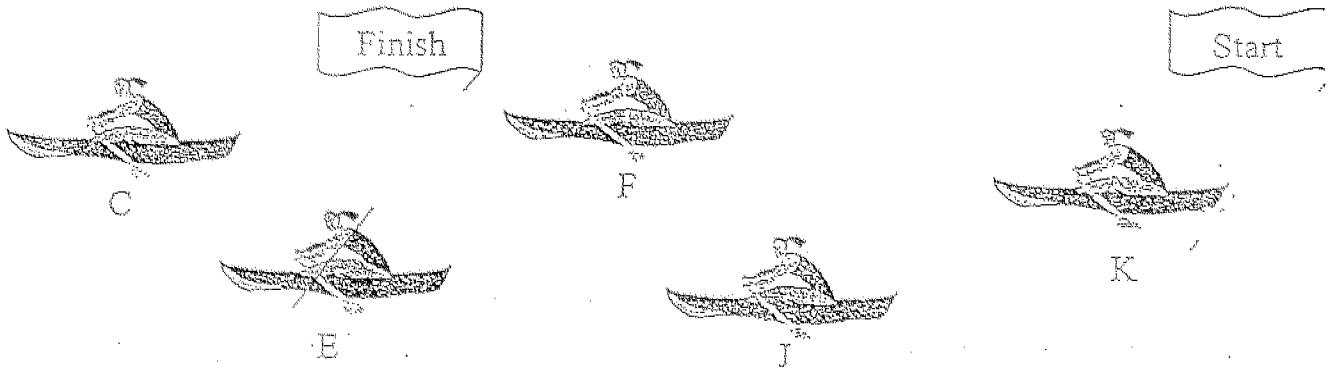
Left

Right

27a) Cross out the 4th fruit from the left.


27b) If the apple is eaten, draw a star on the 3rd fruit from the right.

28) Five boats took part in a competition and are crossing the finishing line as shown below. Look at the picture carefully and answer questions 28(a) and 28(b).

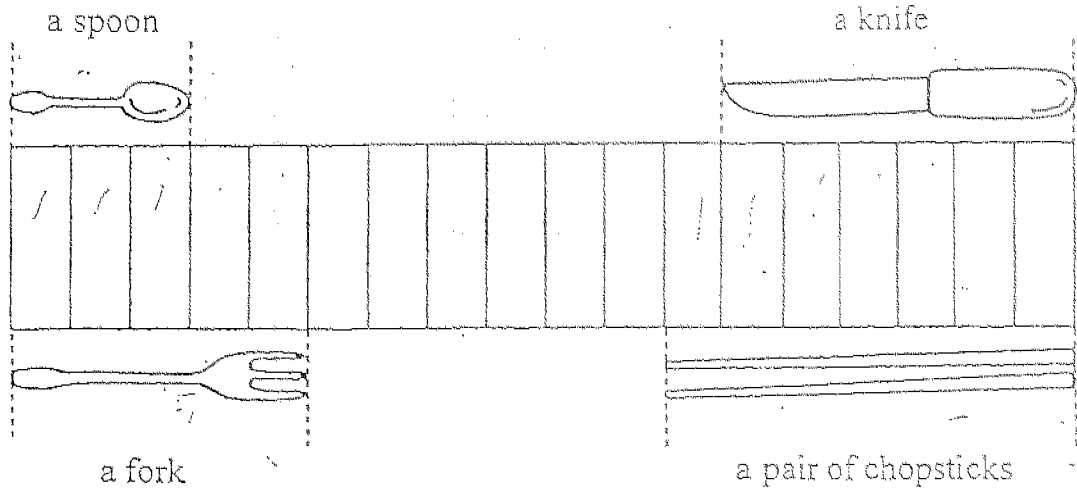



a) Boat C is the _____ boat.

b) If Boat J comes before Boat F, Boat J is the _____ boat.



Look at the picture and answer Questions 29 to 31.




Each  stands for 1 unit.


29) The _____ is the shortest item.

30) The _____ is shorter than the pair of chopsticks but longer than the fork.

31) The total units for the pair of chopsticks and the knife are _____ units.



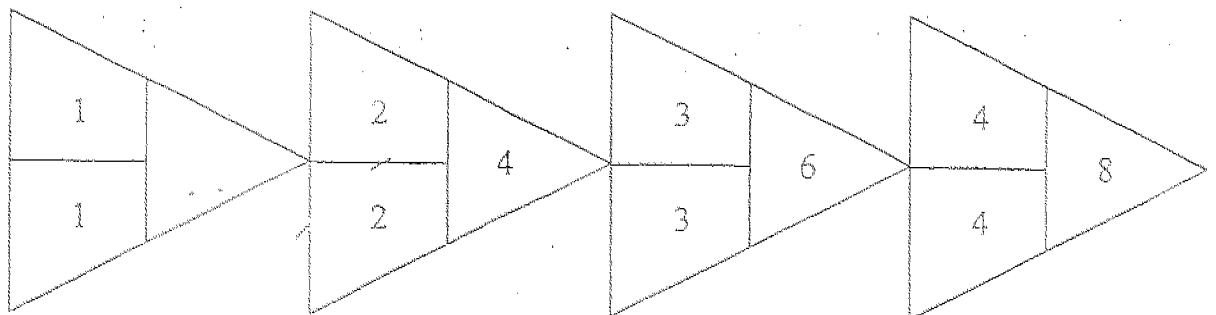
Look at the picture below carefully and use it to answer Questions 32 to 34.



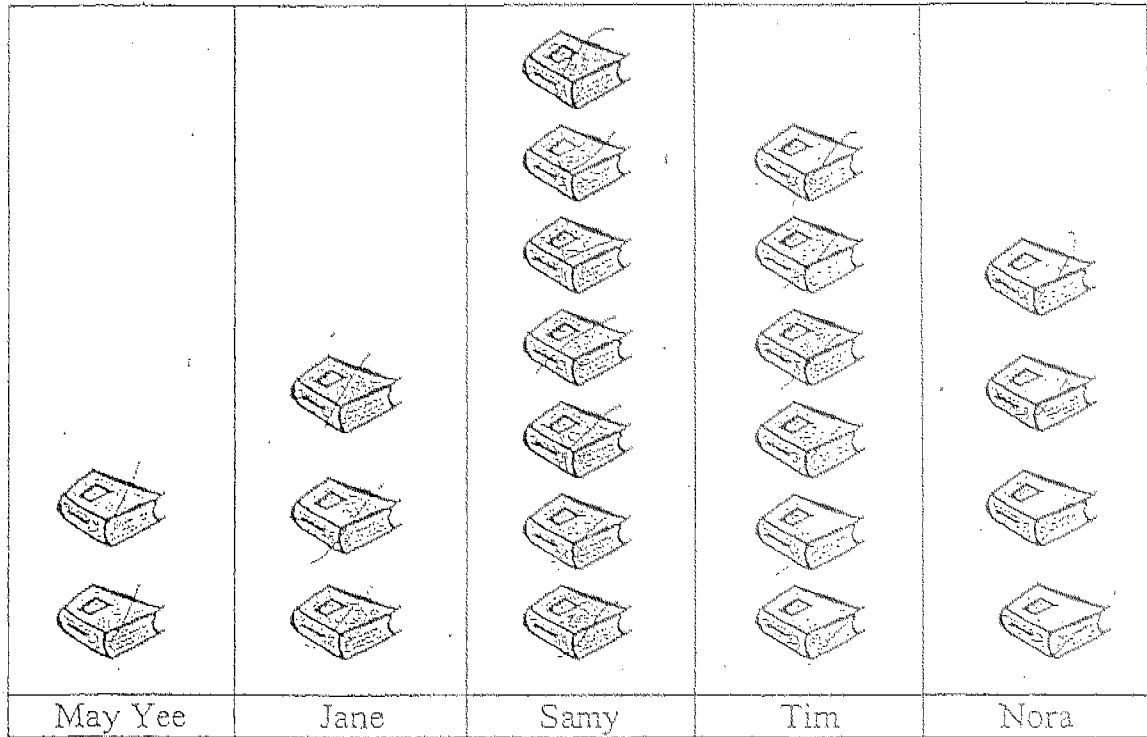
- 32) The mass of the pumpkin is _____ strawberries.
- 33) The mass of the pear is _____ strawberries fewer than the mass of the pumpkin.
- 34) The total mass of the pear and the pumpkin is _____ strawberries.

Fill in the correct answer in the space provided.


35)



Study the picture graph below and use it to answer Questions 36 to 40. The picture graph below shows the number of storybooks read by 5 pupils in a month.



- 36) Samy read 4 more books than _____.
- 37) Jane read _____ books fewer than Tim.
- 38) _____ and _____ altogether read the same number of books as Samy.
- 39) Nora read 1 more book than _____.
- 40) _____ read 4 books more than May Yee but 1 book fewer than Samy.



Section B: 20 marks (4marks each)


Read the story sums and do them carefully. Show your workings clearly.

- 41) Mother bought 19 eggs from the supermarket.
Grandmother bought another 7 eggs from the market.
How many eggs are there altogether?

There are _____ eggs altogether.

- 42) Huiyin had 31 charity tickets at first.
She sold 17 charity tickets to her friends and kept the rest.
How many charity tickets did she keep?

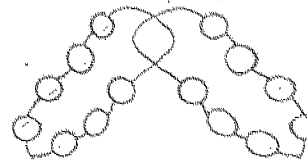
She kept _____ charity tickets.



43) One frog has 4 legs. How many legs do 6 frogs have?

6 frogs have _____ legs.

44) There are 7 beads in a necklace. Dolly has 2 such necklaces.
How many beads does she have altogether?



Dolly has _____ beads altogether

45) Mrs Toh baked 17 butter cookies and raisin cookies altogether.
She ate 4 of them.

(a) How many cookies were left?

There were _____ cookies left.

(b) If there were 9 butter cookies, how many raisin cookies were there
at first?

There were _____ raisin cookies at first.

*** END OF PAPER ***



I am checking my work.
What about you?

