

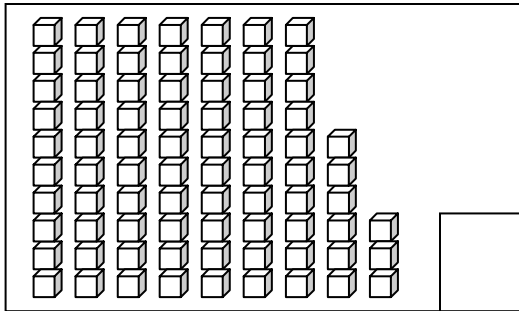
**Primary One
Mathematics
Continual Assessment Two**

Section A

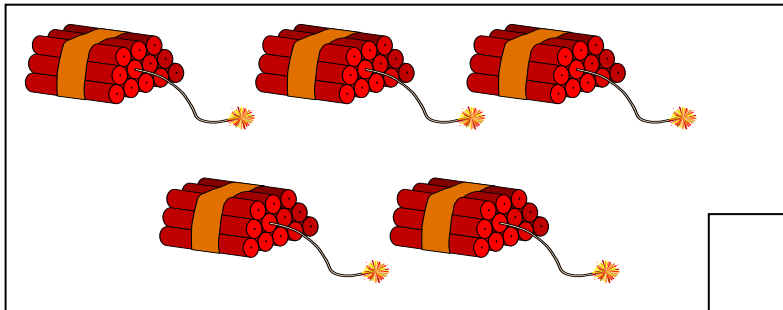
I. Read each question carefully before answering it. (41 x 2 Marks)

Count and write the correct number in the box.

1.



2.



Write in numbers.

3. forty-nine

4. seventy-one

Write in words.

5. 56

6. 99

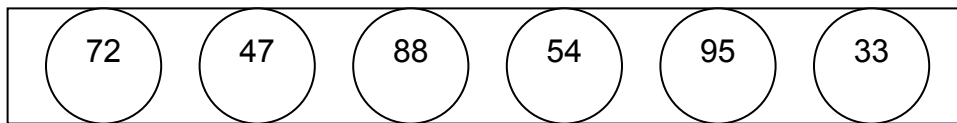
7. Draw 8 more ♥.



13 is _____ more than 5.

Fill in the blanks.

Use the numbers in the box for questions 8 to 11.




8. The smallest number is _____.

9. The greatest number is _____.


10. _____ is between 72 and 95.

11. 54 is greater than _____ and _____.

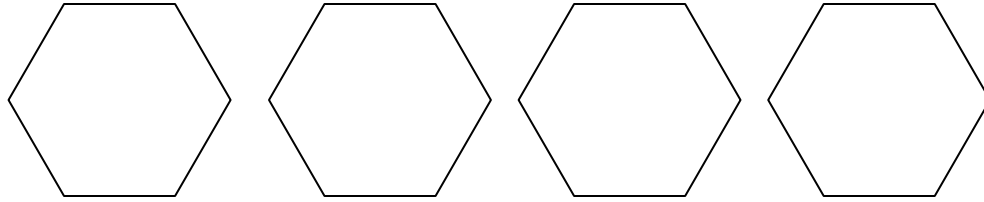
Fill in the blanks.



13. Draw ☾ in the circles to show 5×5 .




14. Draw 6 \triangle in each group.



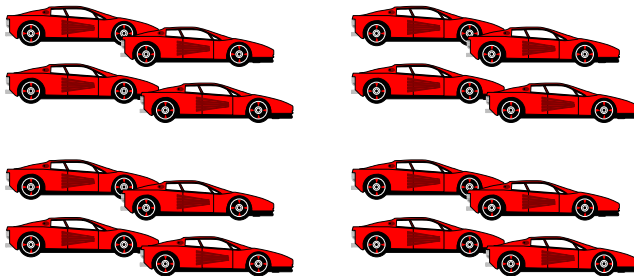
4 groups of 6 = _____

15. Circle the magnifying glasses into groups of 8.



There are _____ groups of 8.

16.



There are _____ groups of 4.

There are _____ cars altogether.

17. Draw a line to match the correct answer.

4 sixes	4×4
	4×6
	6×6

18. If $40 + \star = 75$
Then \star is _____.

19. Colour three numbers that make 30.

6	9	5	11	8	15	12
---	---	---	----	---	----	----

20. Cross out the set that has a different answer.

$44 + 7$	$60 - 9$	$25 + 27$	$16 + 35$
----------	----------	-----------	-----------

21. Circle the number that is 12 more than 30.

32	18	22	42	52
----	----	----	----	----

Fill in the missing numbers.

22. 50 and _____ make 57.

23. $200 =$ _____ tens _____ ones

24. _____ = 8 tens and 2 ones

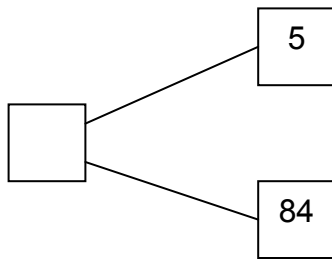
25. 9 less than 66 is _____.

26. 6 is _____ less than 16.

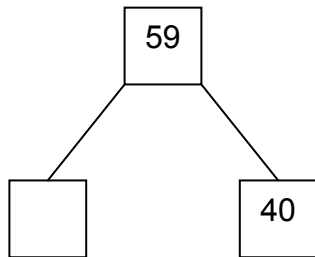
27. 44 is _____ more than 38.

28. _____ is 7 less than 26.

29.



30.



31. 75 = _____ tens and _____ ones

32. 23 + 10 = _____ + 20

33. 56 - 3 tens = _____ ones

34. 5 x 8 = 28 + _____

35. 3 + 3 + 3 + 3 + 3 + 3 = _____ x 3

36. $4 + 7 + 9 =$ _____

37. $60 - 60 =$ _____

38. $43 - 6 =$ _____

39. $70 - 5 =$ _____

40. $49 + 9 =$ _____

41. $8 + 9 +$ _____ $= 27$

Section B

II. Read each story sum carefully before answering it. (6 x 3 Marks)

42. Bernard has 27 stamps.
He gives 8 stamps to his brother.
How many stamps does Bernard have now?

Bernard has _____ stamps now.

43. Catherine has 5 books.
Faith has 8 books and Helen has 10 books.
How many books do they have altogether?

They have _____ books altogether.

44. Stanley has 50 stickers.
He has 10 more stickers than Mary.
How many stickers does Mary have?

Mary has _____ stickers.

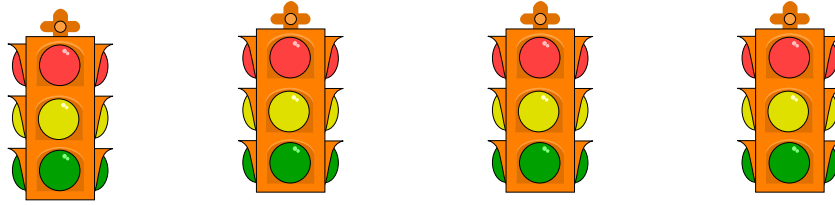
45. Father had 68 bags of fruits.
He gave some to his friends.
He had 25 bags of fruits left.
How many bags did he give to his friends?

They have _____ bags of fruits to his friends.

46. There are 20 beans in a bowl.
11 of them are red beans.
The rest are green.
How many beans are green?

_____ beans are green.

47.



There are _____ traffic lights.

There are _____ colour lights on each traffic light.

There are _____ colour lights altogether.