

**FORM 3**

**GEOGRAPHY (GENERAL)**

**TIME: 1h 30min**

**Name:** \_\_\_\_\_

**Class:** \_\_\_\_\_

**Question A**

Features can be **physical**, **human** or **environmental**.

Give three examples for each type in the table given below.

Physical	Human	Environmental

9 marks

**Question B**

i. Write '**True**' or '**False**' at the end of each sentence.

- Latitudes are drawn as horizontal lines on maps. \_\_\_\_\_
- The Arctic Circle is the longest line of latitude. \_\_\_\_\_
- There are 90 lines of latitude from the equator to the North Pole. \_\_\_\_\_
- The Tropic of Capricorn lies at  $23\frac{1}{2}^{\circ}$  North. \_\_\_\_\_
- The North Pole lies at  $90^{\circ}$  North. \_\_\_\_\_
- The Greenwich Meridian is also called the International Meridian. \_\_\_\_\_
- Longitudes are marked as vertical lines on maps. \_\_\_\_\_
- The longitudes are parallel to each other for they never meet. \_\_\_\_\_
- Exactly opposite the  $0^{\circ}$  longitude there is the  $180^{\circ}$  longitude. \_\_\_\_\_
- There are 360 lines of longitude divided into 180 lines to the east and west of the Greenwich Meridian. \_\_\_\_\_

10 marks

- ii. Correct the false statements in the exercise above.

---

---

---

---

4 marks

### Question C

Fill in the blanks of the following sentences with the names of the **five types of rock** found in Malta:

1. The \_\_\_\_\_ is the only impermeable rock found in Malta.
2. The \_\_\_\_\_ is the hardest rock found in Malta.
3. The \_\_\_\_\_ breaks easily to form the golden sands found in some of the Maltese bays.
4. The \_\_\_\_\_ is the youngest rock for it is the top layer in areas where there are all the five layers.
5. The \_\_\_\_\_ is the rock used for building in Malta.

10 marks

### Question D

The picture shows a lowland area which has been flooded.



Give **four** causes of flooding.

---

---

---

---

---

---

---

---

8 marks

### Question E

Draw a labelled diagram of the water cycle using **five** geographical terms.



10 marks

### Question F

Settlements can be **dispersed**, **nucleated** or **linear**.

Explain the meaning of these settlement patterns.

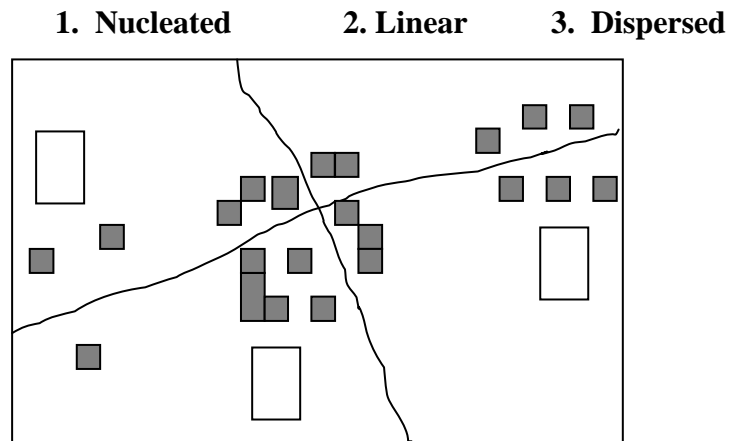
Dispersed \_\_\_\_\_

Nucleated \_\_\_\_\_

Linear \_\_\_\_\_

6 marks

- ii. On the diagram, in the given boxes, write the numbers **1, 2** and **3** to show the three types of settlement patterns:



6 marks

### Question G

Give the main characteristics of the Central Business District with the help of the given points.  
See example given.

Points	Main Characteristics
The accessibility of the CBD	The main roads of the town lead to the CBD so there is easy access to this central part of the town.
The cost of the land in the CBD	
The traffic	
The space	
New construction	
The services provided	

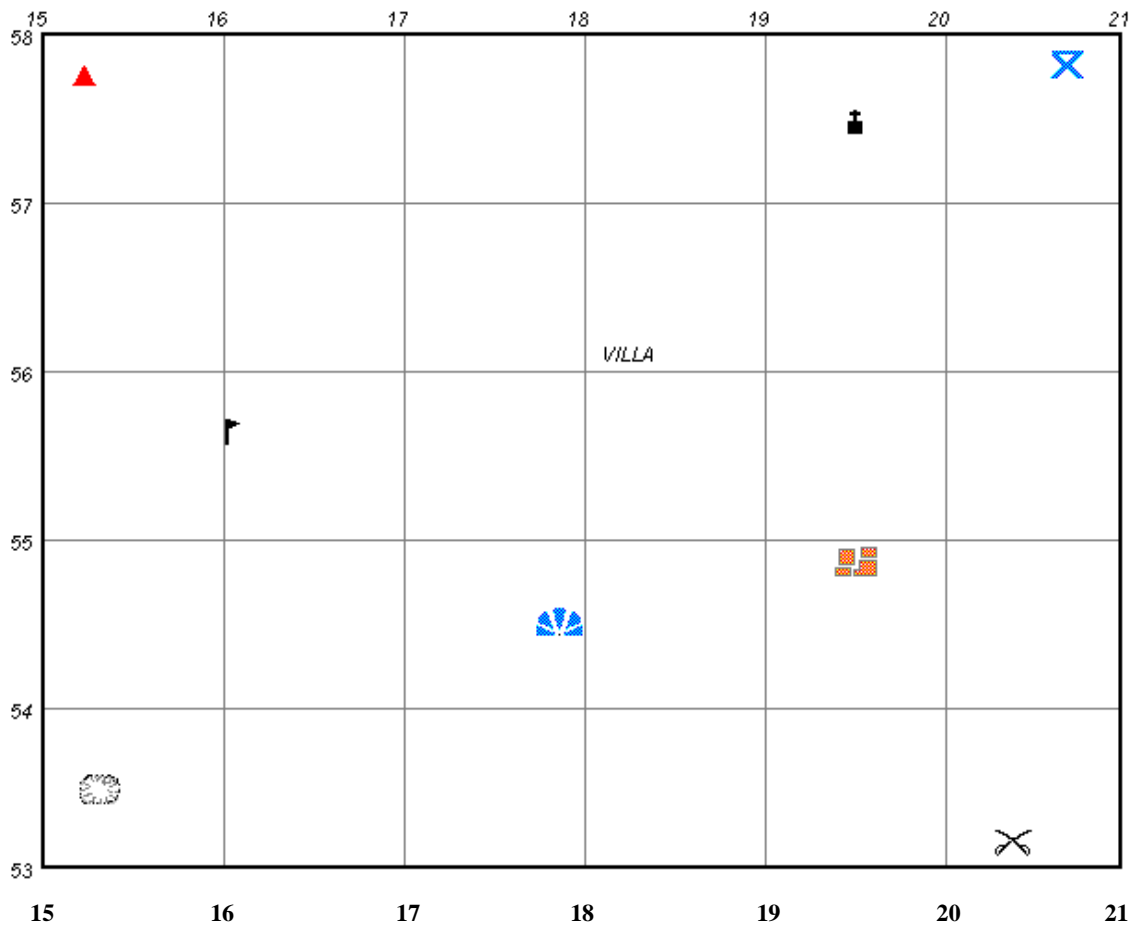
10 marks

### Question H

Nine map symbols are given below.

The names of six symbols are given in the table below.

Give their six-figure grid reference as in the example given.

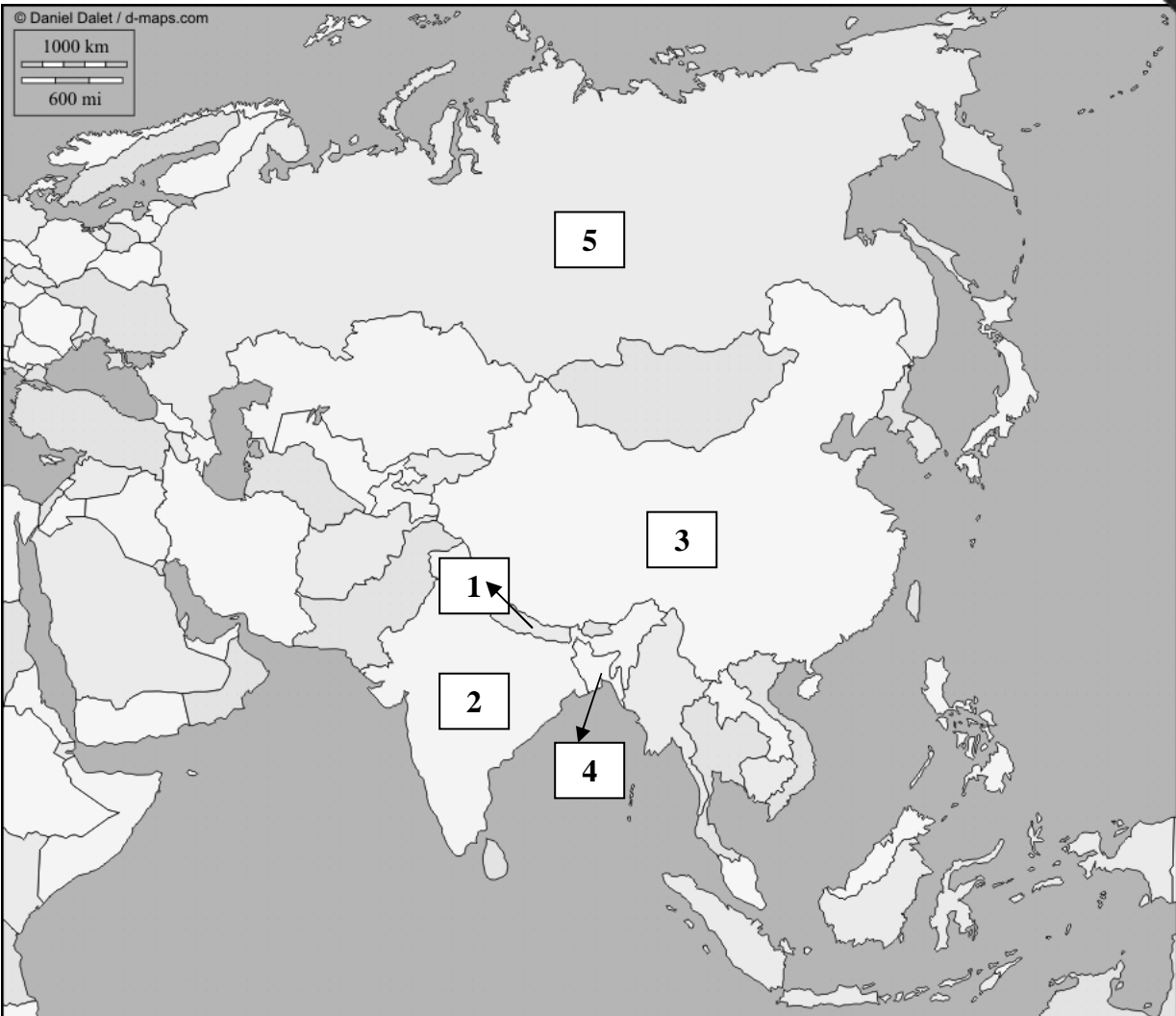


Map Symbols	The Six Figure Grid Reference
1. Buildings	195549
2. Golf course	
3. Youth hostel	
4. Picnic site	
5. Viewpoint	
6. Battlefield	

10 marks

# Question I

Examine the outline map of Asia and then work out the exercise below:



Write the correct name of the country near each number from 1 to 5.

Numbers on Map of Asia	Countries
1	
2	
3	
4	
5	

10 marks

### Question J

Write a paragraph about **one** of the following:

- i. The main problems caused by the recent developments in transport
- ii. How can we produce new objects from discarded things?

---

---

---

---

---

---

---

---

---

---

---

---

---

---

---

7 marks