

FORM 2

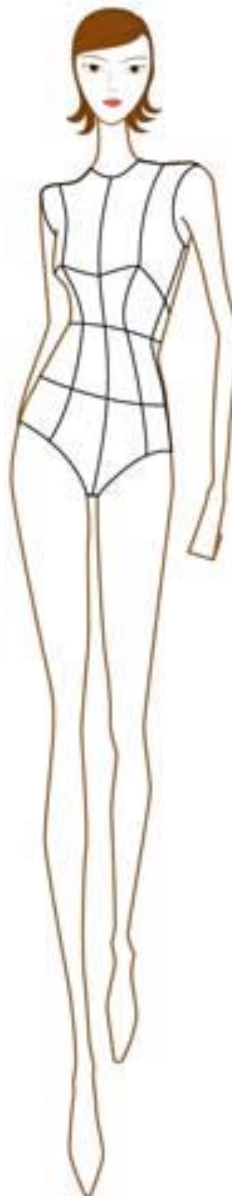
TEXTILES STUDIES

TIME: 1h 30min

Name: _____


Class: _____

1. Anne Westphal, a young designer, created these fashion drawings at www.fashion-era.com/.
- a. Using Anne's sketches for inspiration, draw fashionable items (skirts, trousers and tops), that you would like to sew for yourself. (2, 2, 2, 2 marks)
- b. Draw **two** accessories for each figure. (2, 2 marks)
- c. Colour your designs. (3 marks)



This is a sample of fabric suitable for this skirt.

- d. Draw **one** fabric sample suitable for **one** of your designs. (3 marks)



2a. Name the equipment in the picture below.

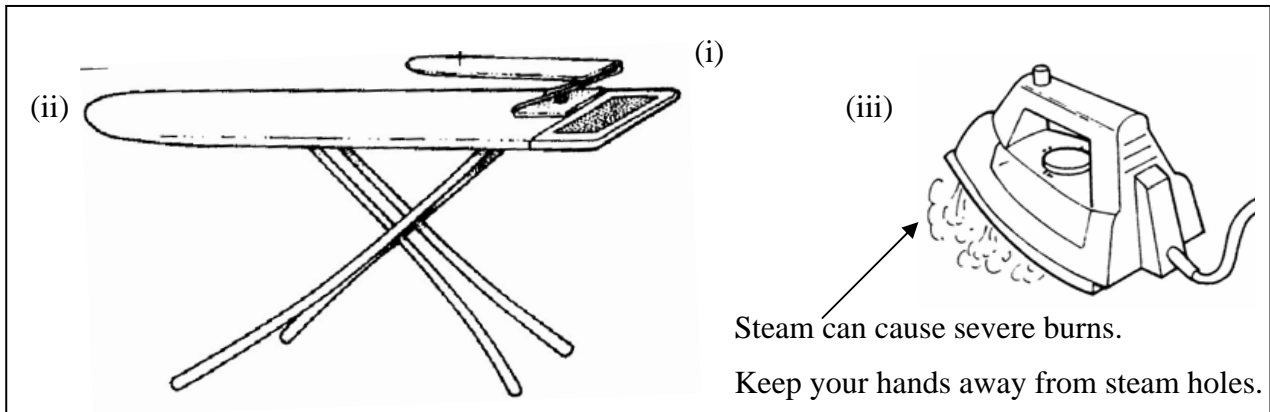
(i) _____ (ii) _____ (iii) _____ (3 marks)

b. Name **two** hazards (*dangers*) that are possible when using the equipment in the picture.


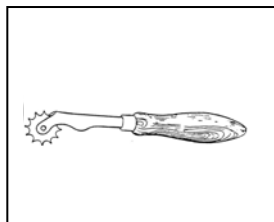
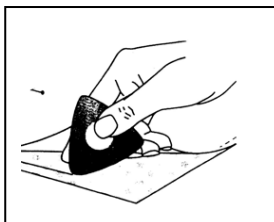
c. How can you avoid danger to yourself or to others when using this equipment?

Look at the example to help you.

(2, 4 marks)



d. Name the **two** small marking equipment in the picture. Name and draw **one** other marking tool.



Name _____ (2, 2 marks)

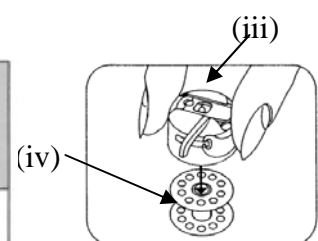
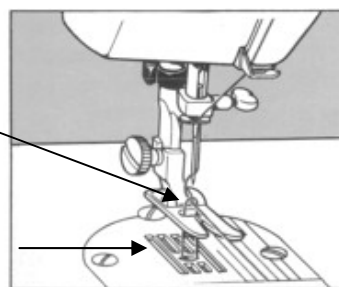
e. Name the parts of the sewing machine in the diagrams.

(i) _____

(ii) _____ (i)

(iii) _____

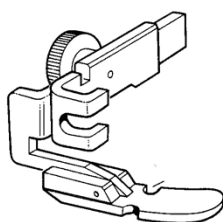
(iv) _____ (ii)




(4 marks)

f. This is a z _____ foot. It is a sewing machine attachment.

(1 mark)




Why is this attachment important?



(2 marks)

Another attachment is the b _____ hole foot. (1 mark)

3a. Look at the following pictures and name the fibres obtained from each source.



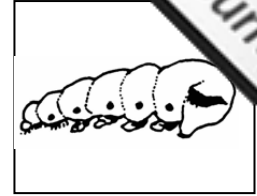
Name W _ _ _ _



C _ _ _ _ _



L _ _ _ _ _



S _ _ _ _

Fill in **one** property of each fibre, using the following words:

shiny warm strong cool

Property _ _ _ _ _

(4, 4 marks)

b. Denim is not colourfast.




Describe an experiment to find out if fabrics are colourfast.

- (i) _ _ _ _ _
 (ii) _ _ _ _ _
 (iii) _ _ _ _ _
 (iv) _ _ _ _ _



(4 marks)

c. Denim is a twill weave fabric. Draw and name **two** other types of weaves.



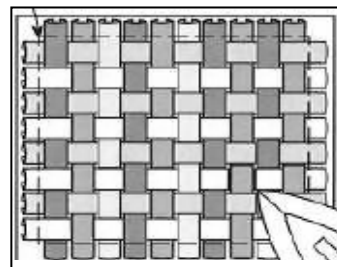
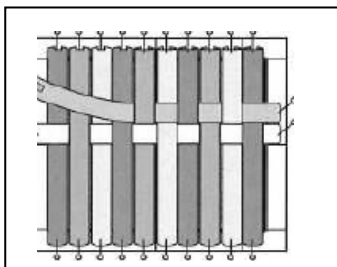
Name: Twill weave _ _ _ _ _

(1, 2, 1, 2 marks)

d. Leftover fabrics can be recycled.

In the diagrams below three different coloured fabrics were made into a cushion.

Name **two** other projects you can make using this method.



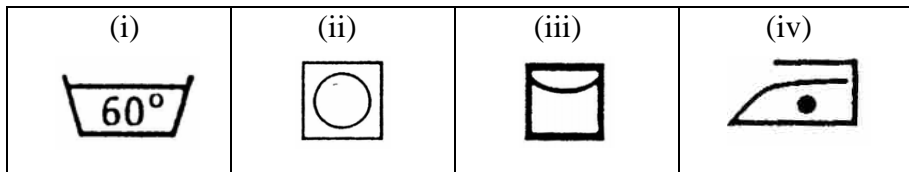
- (i) _ _ _ _ _ (ii) _ _ _ _ _ (2 marks)

e. Woven fabrics fray but are firm.

Knitted fabrics do not f _ _ _ _ but they s _ _ _ _ _ (2 marks)

g. Look at these care label symbols.

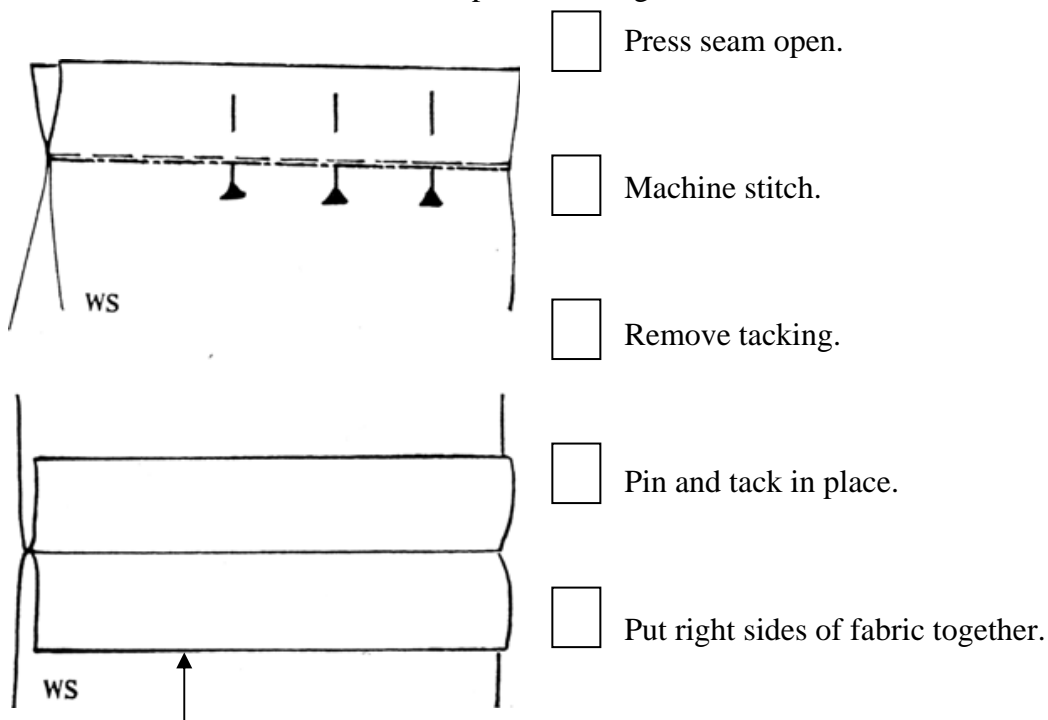
Give the meaning of each symbol.



(i) _____ (ii) _____ (iii) _____ (iv) _____ (4 marks)

4a. Name the seam in the picture below. _____ (1 mark)

b. Number, in the correct order, the steps for making the seam.



(5 marks)

c. On the same diagram, draw **one** method of neatening the seam.

Name the method. _____

(1, 1 marks)

d. Name and draw **one** other way of neatening a seam.

Name _____



(1, 2 marks)

5.




This bag is made from white fabric and decorated with flowers. The flowers can be made in several ways. They can be cut from coloured fabrics and stitched to the bag with embroidery stitches. (*Appliqué*)

- a. In the picture draw **three** embroidery stitches which you can use to stitch the flowers to the bag.

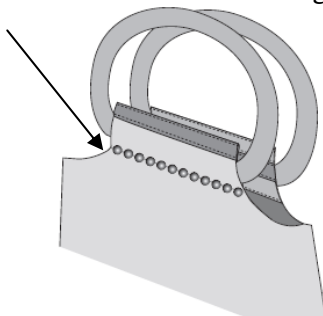
Name the stitches used.

- (i) _____
 (ii) _____
 (iii) _____

(3, 3 marks)



- b. The bag is decorated with a string of beads below the handles.



Name **two** other things you can use to decorate the bag.

- (i) _____
 (ii) _____

(2 marks)

- c. Make a list of small tools you would need to make the bag.

- (i) _____ (ii) _____ (iii) _____
 (iv) _____ (v) _____

(5 marks)

- d. Suggest a fabric suitable for making the flowers. _____

(1 mark)

- e. Give a reason for your choice.

 _____ (2 marks)


- f. Name another way of making the flowers instead of appliqué.

Example: Embroidery

(1 mark)

- g. Draw another bag you would like to make for yourself.

How would you decorate the bag?



(3, 2 marks)

- h. List **two** consumer rights you have when purchasing (*buying*) a bag.

(2 marks)