

SECONDARY SCHOOL ANNUAL EXAMINATIONS 2003

Educational Assessment Unit – Education Division

FORM 1


TEXTILES STUDIES

TIME: 1h 30min

Name: _____

Class: _____

1. Look at this picture and answer the following.



- a. Name **three** items found in the bedroom that are made from fabric. Choose a fabric property to match each item.

insulating, warm, non-slip, lightweight

(i) curtain → insulating (*keeps out the cold*)

(ii) _____ → _____

(iii) _____ → _____

(iv) _____ → _____ (3, 3 marks)

- b. Using the picture of the elephant (separate sheet), create a wall-hanging for the room.

On the picture:

(i) Draw **five** embroidery stitches you would use to work this design. (5 marks)

(ii) Name each stitch used. (5 marks)

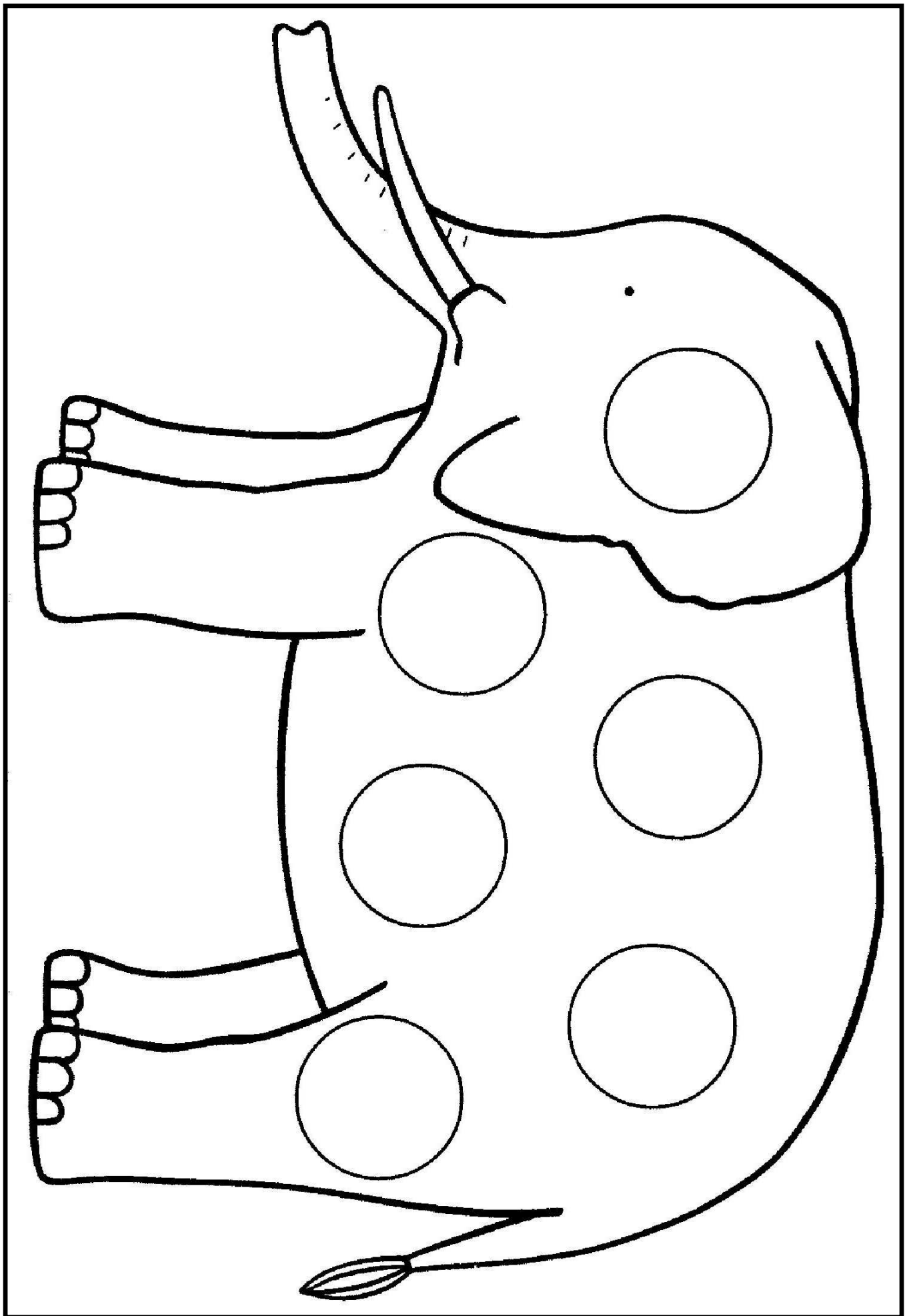
(iii) Suggest a fabric suitable for the background and **two** fabrics suitable for the design (*elephant*). (1, 2 marks)

(iv) Name the colours a) of the background
 b) of the fabrics (1, 2 marks)

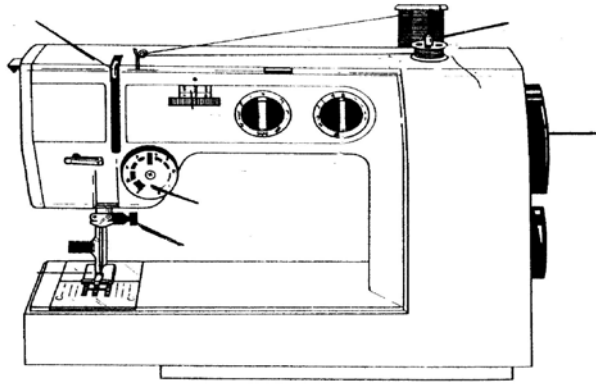
(v) List **two** things you can add to the picture to make it more interesting.
example: sequins

● _____ ● _____ (2 marks)

- c. Using the same design (*elephant*), show how you can decorate the bedspread /quilt to match the wall hanging. (*use the diagram in question 1a*) (3 marks)



- 2a. Label these parts on the sewing machine.
tension disc, presser foot, take-up lever, balance wheel, thread holder (*spool pin*)



(5 marks)

- b. Fill in these sentences with the following words:
thread, needle, disc, reel, material.

- (i) The balance wheel moves the _____ up and down.
- (ii) The tension _____ tightens or loosens the thread.
- (iii) The thread holder holds the _____.
- (iv) The take-up lever brings the thread from the _____.
- (v) The presser foot holds the _____ in place.


(5 marks)

- c. Write **five** points about the care of a sewing machine.

- (i) _____
- (ii) _____
- (iii) _____
- (iv) _____
- (v) _____

(5 marks)

- d. This soft toy was made to put on the bed. It is made from brushed cotton.



- (i) Give **one** property of this fabric.

- (ii) Name the materials needed to make the soft toy.
a) stuffing b) f _____ c) th _____
- (iii) Name the seam used to sew the soft toy.
Name of seam. _____

(1 mark)

(2 marks)

(1 mark)

(iv) Explain, with the help of diagrams, how to work the seam.

(2, 3 marks)

(v) How would you wash and dry this soft toy when it is dirty?

- ---
- ---
- ---

(3 marks)

(vi) Number the order of making up the soft toy. *The first one has been done for you.*

☐ Machine front to back body leaving an opening.

☐ Attach eyes.

☐ Attach ears to head.

☒ 1 Cut out fabric.

☐ Tack pieces (*front and back*)

☐ Stuff toy and sew up opening.

(5 marks)

3. Blue jeans are not colour fast. They cannot be washed with other garments.

a. Describe an experiment to find out if a fabric is colourfast.

- ---
- ---
- ---
- ---

(4 marks)

b. A consumer needs to be careful when buying clothes. Complete these sentences about shopping for clothes.

buying, pay, label, damage, receipt.

(i) Make sure you are always given a _____ when you _____ .

(ii) Check the care _____ before _____ .

(iii) See that there is no _____ in the garment. (5 marks)

c. Name **two** fasteners commonly used on jeans.

(i) _____

(ii) _____

(2 marks)

- d. Blue is a primary colour.
 (i) Name the other **two** primary colours.
 ● _____ ● _____ (2 marks)
 (ii) Blue mixed with _____ gives us green. (1 mark)
 (iii) Green is a _____ colour. (1 mark)
 (iv) Tea leaves can be used to colour fabric. Name **two** other natural dyes.
 ● _____ ● _____ (2 marks)

- e. List **five** important tools found in the Needlework box.
 Give the use of each tool.

Name	Use
(i) _____	_____
(ii) _____	_____
(iii) _____	_____
(v) _____	_____

(5, 5 marks)

- f. Temporary stitches are removed after machining. Name and draw **two** temporary stitches.
 (i) _____ (ii) _____
 (2, 2marks)

- g. Draw these permanent stitches.
 (i) zig-zag
 (ii) three step zig-zag
 (iii) hemming stitch (3 marks)

Permanent stitches are I _____ in the garment. (1 mark)

- 4a. Sketch a woollen top (front and back) to be worn with a pair of jeans.

Front	Back

(2 marks)

- b. Give the ironing temperature and symbol for ironing wool.

--	--

(1, 1 mark)

- c. Wool is a natural fibre.
 Name **two** other natural fibres

• _____

• _____

(2 marks)