

2 Read carefully and answer by writing *True* or *False*.

- a) A virus is a program which may harm a computer system.
- b) A virus scanner is used to create new viruses.
- c) A diskette cannot have a virus.
- d) You can be infected by a virus if you sit in front of an infected computer for more than one hour.
- e) Viruses can be transmitted by downloading programs from the internet.

<i>True or False</i>

1
1
1
1
1

3 Elena is doing some research on the Mnajdra Temples.

She produces a document with a **title**, a **picture** and **two paragraphs of text**, as shown in the picture below.

Mnajdra Temples

<http://www.heritagemalta.org>

Mnajdra lies tucked in a hollow in the cliffs on Malta’s southern coast. The site is probably the most atmospheric of all Malta’s temples. It lies in an isolated position on a rugged stretch of coast overlooking the isle of Fifla and just 600m from another principle temple site, Hagar Qim. The surrounding area is designated a Heritage Park and is typical of rugged Mediterranean garrigue landscape. Barren in summer, the landscape is transformed in spring by flowering herbs and shrubs.

Mnajdra is a complex site consisting of three temples overlooking an oval forecourt. The first and oldest temple is a simple trefoil of the Ggantija phase (3600-3100 BC). The small rubble walls are a modern reconstruction but the small uprights, with their pitted decoration, are original.

a) Elena produces the title using **special text effects**. What is this feature called?



2

b) **Tick (✓)** the correct phrase:

i. The paragraph **alignment** used by Elena for the **first paragraph** is:

- | | | | |
|--------------------------|--------------------------|--------------------------|--------------------------|
| Align Left | Centre | Align Right | Justify |
| <input type="checkbox"/> | <input type="checkbox"/> | <input type="checkbox"/> | <input type="checkbox"/> |

1

ii. The paragraph **alignment** used by Elena for the **second paragraph** is:

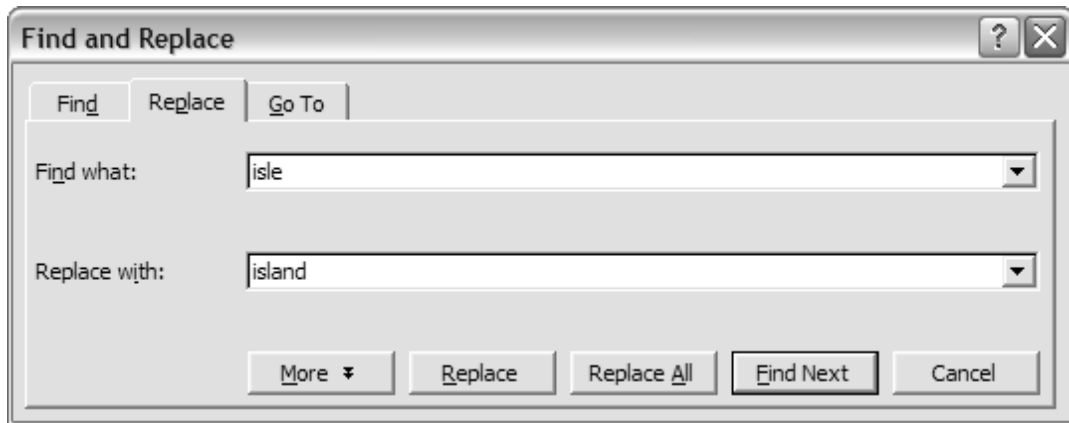
- | | | | |
|--------------------------|--------------------------|--------------------------|--------------------------|
| Align Left | Centre | Align Right | Justify |
| <input type="checkbox"/> | <input type="checkbox"/> | <input type="checkbox"/> | <input type="checkbox"/> |

1

c) Write the **URL** of the website from where Elena found this information.

2

d) Elena uses a feature called **Find and Replace** as shown below.

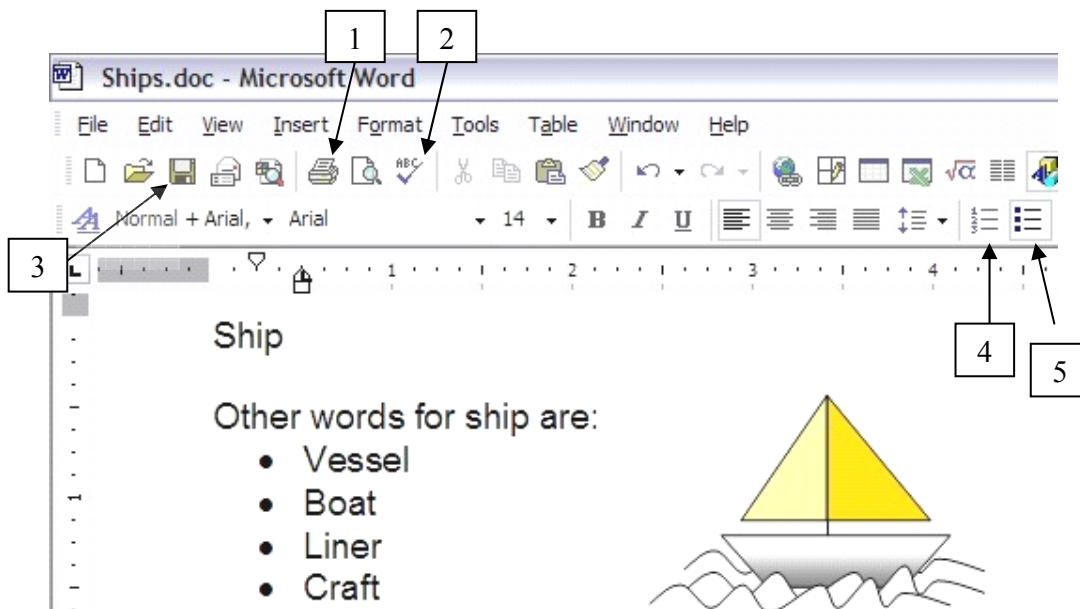


- i. What text is she trying to find?
- ii. Which button does she need to click to start the search?
- iii. What happens when she clicks on the **Replace All** button?

	2
	2

4

4 Look carefully at the following picture. The numbers are used to label tool buttons.



a) Write the number in the box to show which button is used to complete the task.

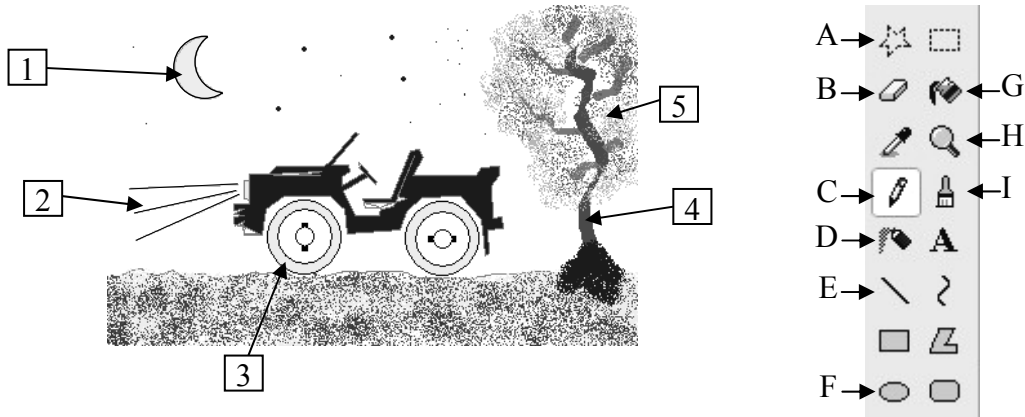
- i. To **save** the document to disk.
- ii. To **print** the document.
- iii. To **check the spelling**.
- iv. To change the bulleted list into a **numbered list**.

	1
	1
	2
	2

- b) Look carefully at the picture and complete the following:
- The file **name** of the above document is _____.
 - Two** words found in the **bulleted** list are _____ and _____.
 - The **name of the font** used is _____ and the **font size** is _____.
 - To print the document select the word _____ from the **Menu bar**, then select _____.

2
2
2
2

5 a) Anna decides to draw a car using her computer. The picture is shown below.



Complete the following by writing the **letter** which corresponds to the tool.

- Anna fills the moon shown by arrow 1 using tool ...
- Anna draws the light rays shown by arrow 2 using tool ...
- Anna draws the wheel shown by arrow 3 using tool ...
- Anna draws the tree trunk shown by arrow 4 using tool ...
- Anna draws the leaves shown by arrow 5 using tool ...

<i>Tool</i>

1
1
1
2
2

b) Anna transforms the picture in four ways. Use the following words to show what Anna did to transform the picture. Write your answer in the appropriate box.

<i>Rotate by 90°</i>	<i>Flip horizontal</i>	<i>Skew</i>	<i>Stretch</i>
i. <input style="width: 100%;" type="text"/>			ii. <input style="width: 100%;" type="text"/>
↓	iii. <input style="width: 100%;" type="text"/>	↓	iv. <input style="width: 100%;" type="text"/>
↓	↓	↓	↓

4

- 6 Carol is collecting information about Tourists who visited Mnajdra Temples. The following spreadsheet shows her findings.

	A	B	C	D	E	F	G
1	Tourists visiting Mnajdra Temples						
2							
3		<i>January</i>	<i>February</i>	<i>March</i>		Total	Max
4	Italy	35	35	33		103	35
5	France	40	45	47		132	47
6	Spain	16	23	26		65	26
7	Greece	13	14	15		42	
8	Germany	36	47	55		138	
9	UK	22	24	23		69	
10	Japan	15	3	6		24	
11							
12	Total	177	191	205			
13	Minimum	13					
14	Maximum	40					
15	Average	25.29	27.29	29.29			

- a) From the above picture, **copy and write down** :
- the **total number** of tourists who came from Italy. 2
 - the **maximum number** of tourists who visited in January. 2
- b) **On the above picture**, fill in the **values** that should appear in the cell **C13** and **D13**. 2
- c) On the above picture, fill in the **values** that should appear in the cells **from G7 to G10**. 4
- d) Complete the following sentence:
 The maximum number of tourists came from the country of _____ . 2

e) Carol entered the formula =SUM(B4:B10) in cell B12 to calculate the total number of tourists who visited in January. She copied and pasted the formula in cell C12.

i. Write the formula that should appear in cell C12:

2

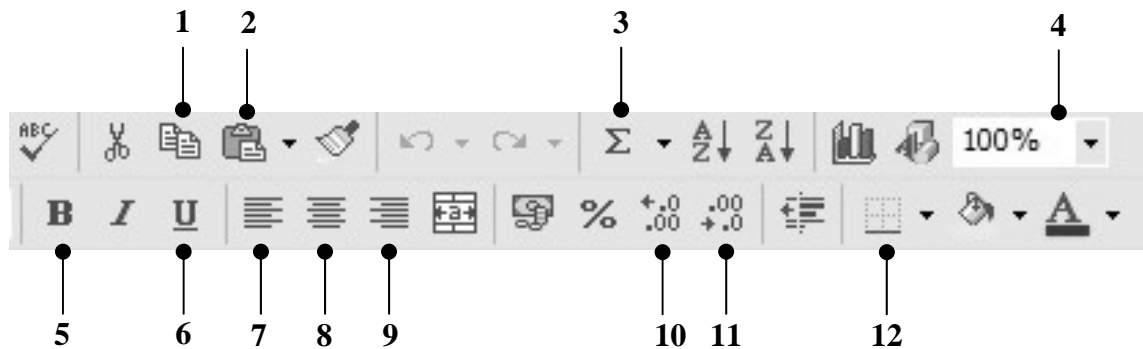
ii. Write the formula that is in cell B13 to calculate the **Minimum** number of tourists who visited during **January**:

4

iii. Write the formula that is in cell D15 to calculate the **Average** number of tourists who visited during **March**:

4

f) Carol used some of the tools that appear in the toolbars.



Write the number of the tool button that Carol has to click if she wants to:

- i. **Copy** a formula.
- ii. Align to the **left** the contents of a cell.
- iii. **Centre** a title in a cell.
- iv. Change the number 25.29 in cell B15 to 25.3
- v. Insert a function such as SUM.
- vi. **Underline** the label in a cell.
- vii. Add **borders** around cells.
- viii. **Zoom** to 75%.

<i>Tool</i>	

1
1
1
1
1
1
1
1
1

7 **Underline** the correct statement for each of the following:

a) What does **WWW** stand for?

- i. World Wild West
- ii. World Wide Web
- iii. Web Wide World

1

b) Which one of the following is a **browser**?

- i. Internet Explorer
- ii. Yahoo Mail
- iii. MSN

1

c) Which one of the following is an **e-mail address**?

- i. <http://skola.gov.mt>
- ii. helpdesk@skola.gov.mt
- iii. www.kidz.com

1

d) A **search engine** is used ...

- i. To chat with someone on the internet.
- ii. To log on to a network.
- iii. To find websites with information about a particular topic.

1

e) The term **WAN** stands for

- i. Wide Area Network
- ii. Wide Area Netting
- iii. World Area Network

1

f) To logon to a network of computers you must enter your ...

- i. name and ID Card number.
- ii. username and password.
- iii. email address.

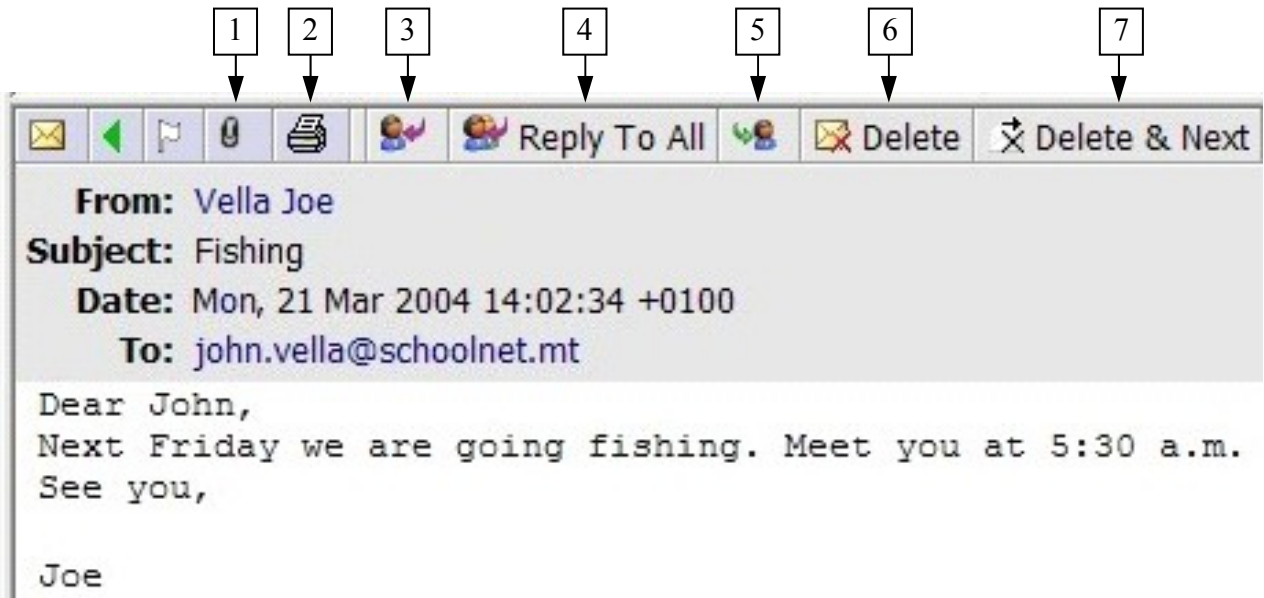
1

8 a) John opened his mailbox. Look carefully at the picture below and answer the following:



- | | | | |
|------|--|----------------------|---|
| i. | How many emails are there in the Inbox ? | <input type="text"/> | 2 |
| ii. | How many emails has John sent ? | <input type="text"/> | 1 |
| iii. | How many deleted emails are there in the mail bin ? | <input type="text"/> | 2 |

b) Look carefully at the following picture. Some tool buttons are numbered.



Write the number of the button that John has to click if he wants to:

- | | | | |
|------|--------------------------------------|----------------------|---|
| i. | Print the email | <input type="text"/> | 1 |
| ii. | Delete the received message | <input type="text"/> | 2 |
| iii. | Reply to the received message | <input type="text"/> | 2 |

END of EXAMINATION PAPER