

AREA SECONDARY ANNUAL EXAMINATIONS 2005
Educational Assessment Unit – Education Division

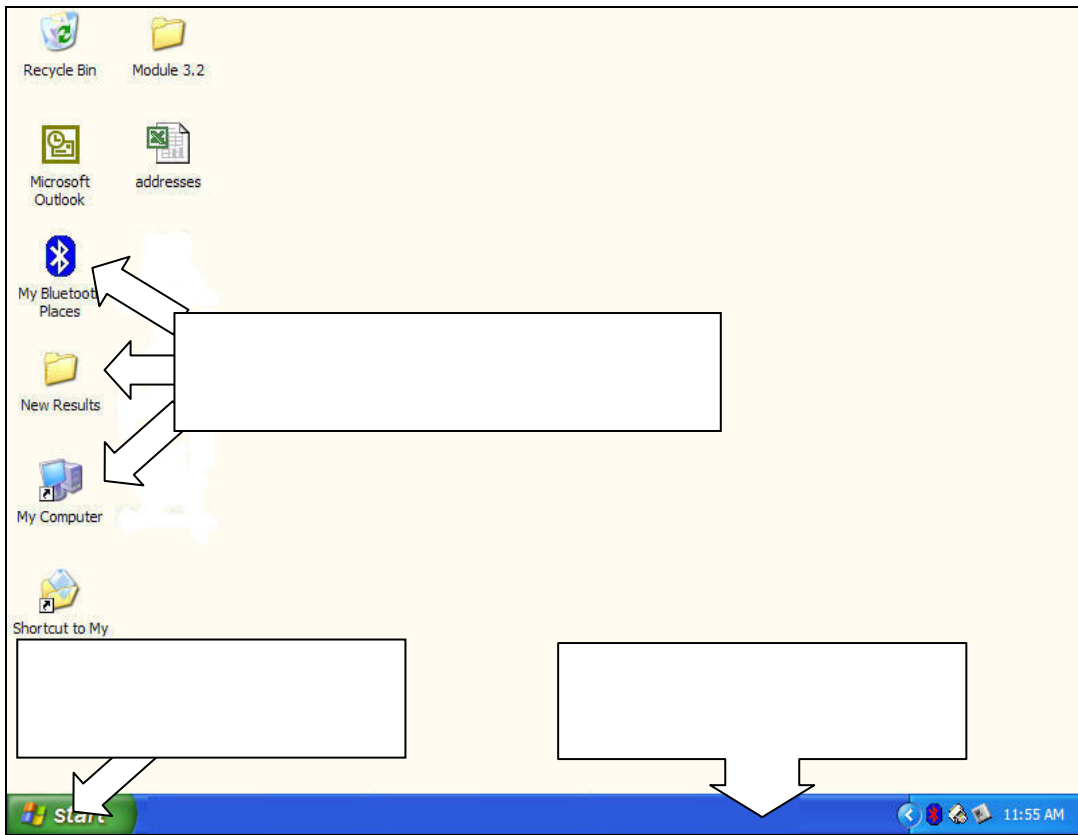
FORM 1 **INFORMATION AND COMMUNICATIONS TECHNOLOGY** **TIME: 1 h 30 min**

Name: _____ **Class:** _____

Answer ALL questions.

1 a) Simon is doing a project using a computer. Label the desktop below using the following three words:

Task Bar	Icons	Start button
-----------------	--------------	---------------------



3

b) Name the following icons:

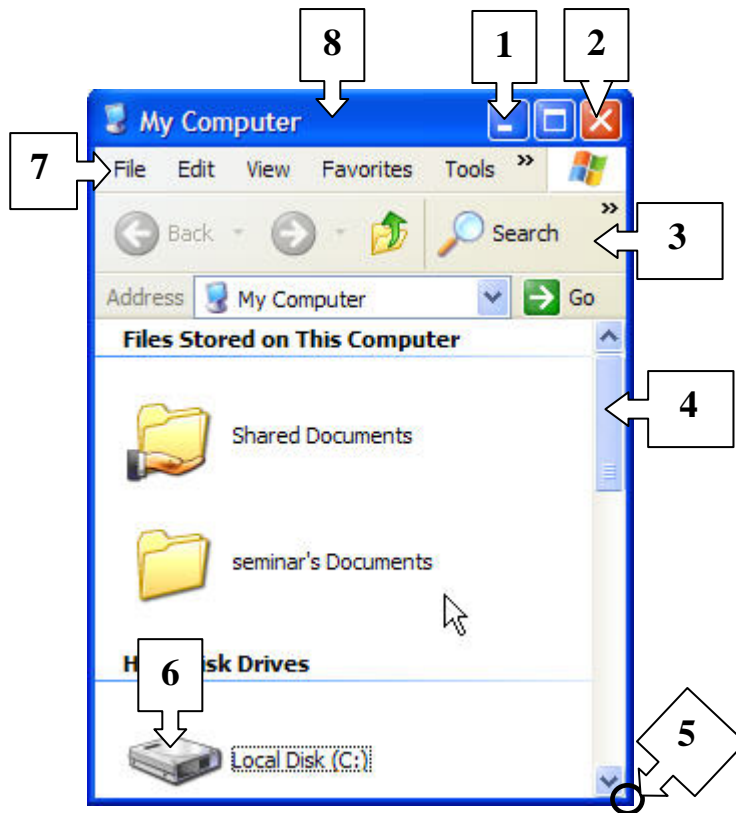








4



c Look at the diagram above and match the numbers to the words below.

Title Bar	Scroll Bar	Tool Bar	Resizing Corner
Hard Disk	Menu	Close	Minimize

1	
2	
3	
4	

5	
6	
7	
8	

8

2 a) Write down 2 advantages why Simon chooses to use a Wordprocessor and not a typewriter:

i. _____

1

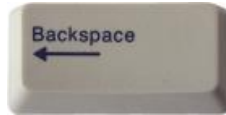
ii. _____

1

b) This question is about the keyboard.




1



2



3



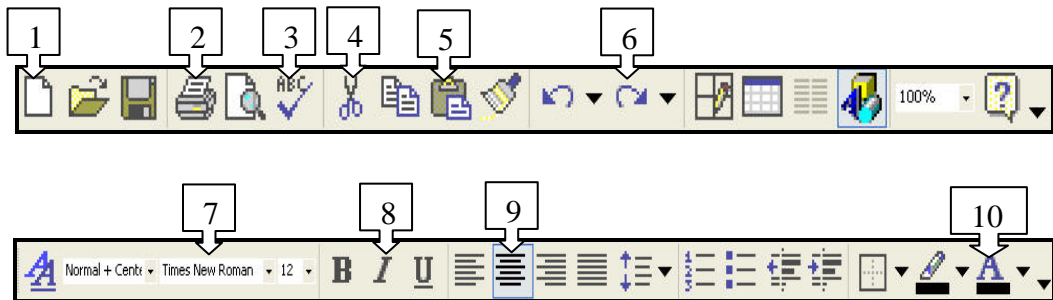
4

Write the numbers of the keys above to show which key Simon needs to press to:

- i. Start a new **paragraph**
- ii. Type a **Capital** letter **once**
- iii. **Delete** a letter
- iv. Type **all** letters in **Capital**

1
1
1
1

c) Match the number of the icon to its use in the boxes below:



1	Font Colour	
2	Spell Check	
3	Font Type	
4	New	

5	Redo	
6	Italics	
7	Cut	

8	Print	
9	Paste	
10	Center	

10

d) Simon created the title below using one of the tools in Word.



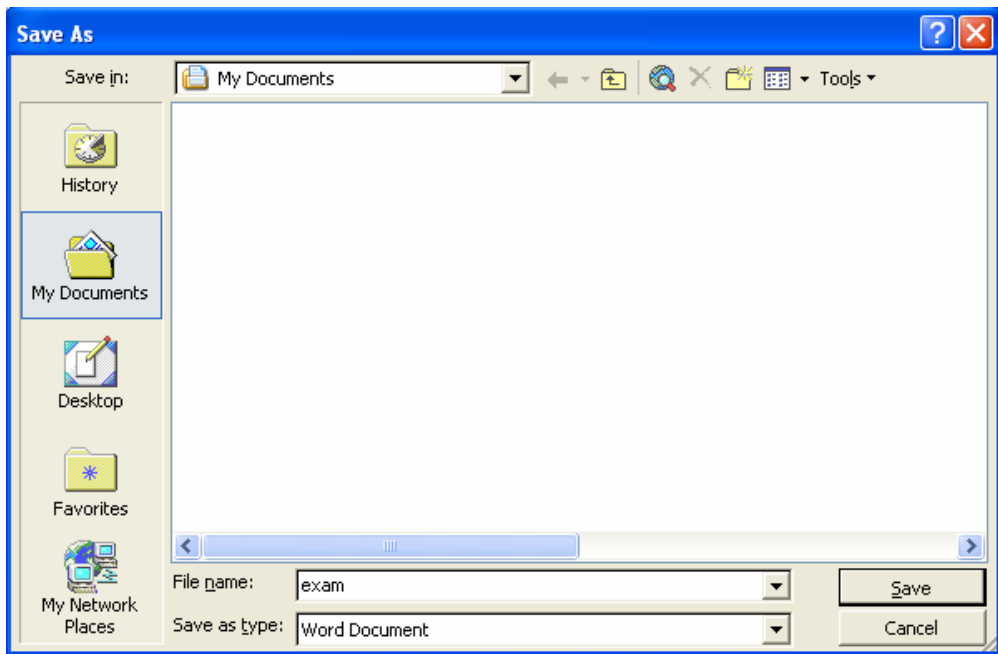
- i. Which tool did he use to create this object? _____
- ii. Draw a circle round the place from where Simon can **resize** this object.
- iii. Which of the following **pointers** shown below appears when **moving the object** shown above? Underline the correct answer.



2
1
1


e) Answer the following questions using the dialog box below:

- i What is the **name** given to the document? _____ 1
- ii In which **folder** is the file going to be saved? _____ 1
- iii What **type of file** is being used? _____ 2



f) i Tick the Landscape view:



ii  Before you print, you click on this icon. What is its name? _____ 1

3 Choose the correct answer by making a tick in the correct box :

a) To keep a football league classification you use:

- i A Paint program
- ii A Word Processor
- iii A Spreadsheet
- iv A Browser

b) Tick the symbol you have to use to start a formula in a spreadsheet.

- i +
- ii -
- iii /
- iv =

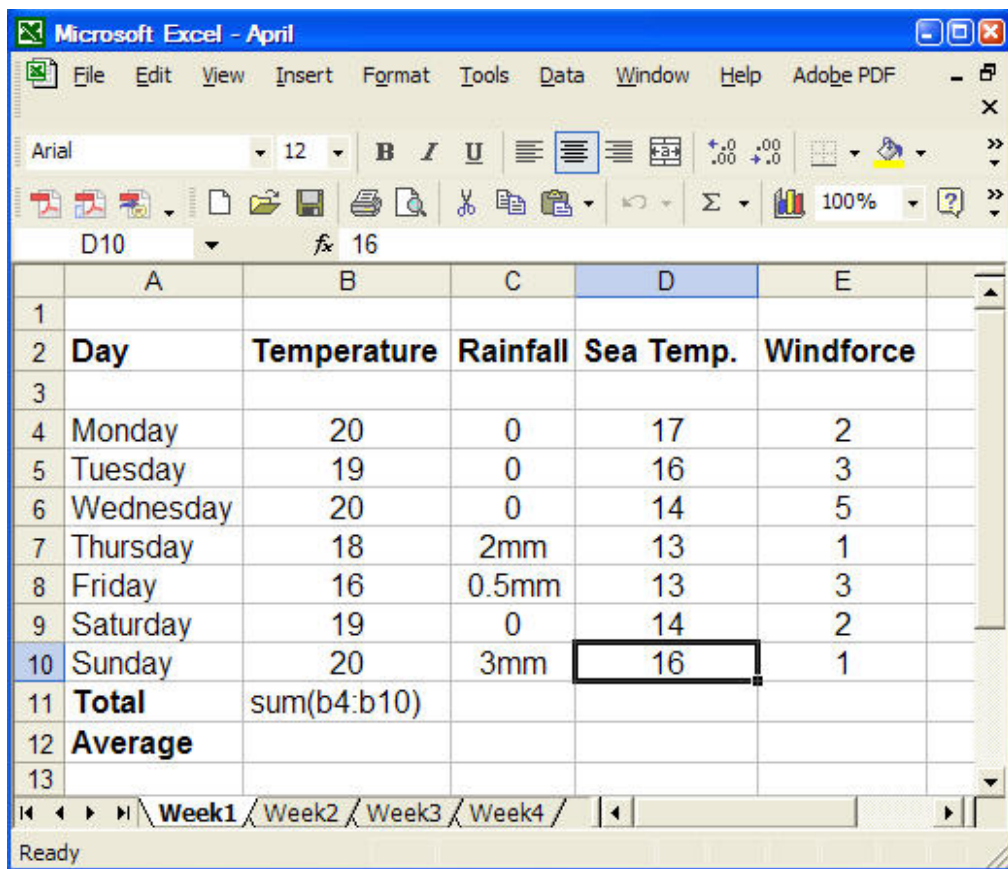
1

c) If I press the **CTRL** button and **click** on different cells I will be:

- i Erasing all cells
- ii Selecting the cells
- iii Copying the cells
- iv Moving the cells

1

4 a) This question is about spreadsheets.



- i What is the name of this **workbook**?
- ii What is the name of the **active worksheet**?
- iii How many **worksheets** are there?
- iv Which is the **active cell**?
- v What **type of data** is there in cell D4?
- vi The formula in cell **B11** has a mistake. Write down the correct formula:

1

1

1

1

1

2

- vii Write the **symbol used for a division:** _____
- viii On which **column** must I **click** to **insert a column** between C and D? _____
- ix If I print the above worksheet, will the **gridlines be printed?** Tick 'Yes' or 'No'. Yes No

1
1
1

b) Draw a line to match the following tools with their name

- i  Borders and gridlines
- ii  Format Painter
- iii  Fill colour

1
1
1

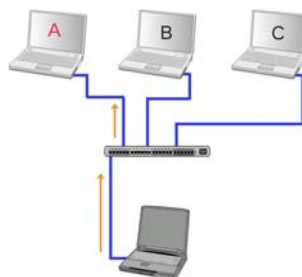
5 a) Tick whether these statements are True (T) or False (F)

- i The internet is a LAN.
- ii ISP stands for Internet Service Provider.
- iii A modem is used to connect to the internet.
- iv You can send E-Mails using the Internet.
- v We use a search engine to search for sites.
- vi We use a wordprocessor to browse the internet.
- vii This is an E-Mail address: <http://skola.gov.mt>.
- viii To use the internet you must have a username and a password.
- ix The first site that you see on the browser is called Home Page.
- x Websites can be printed.

T	F

1
1
1
1
1
1
1
1
1
1

b) The following diagram shows a type of network. Tick the correct answer.

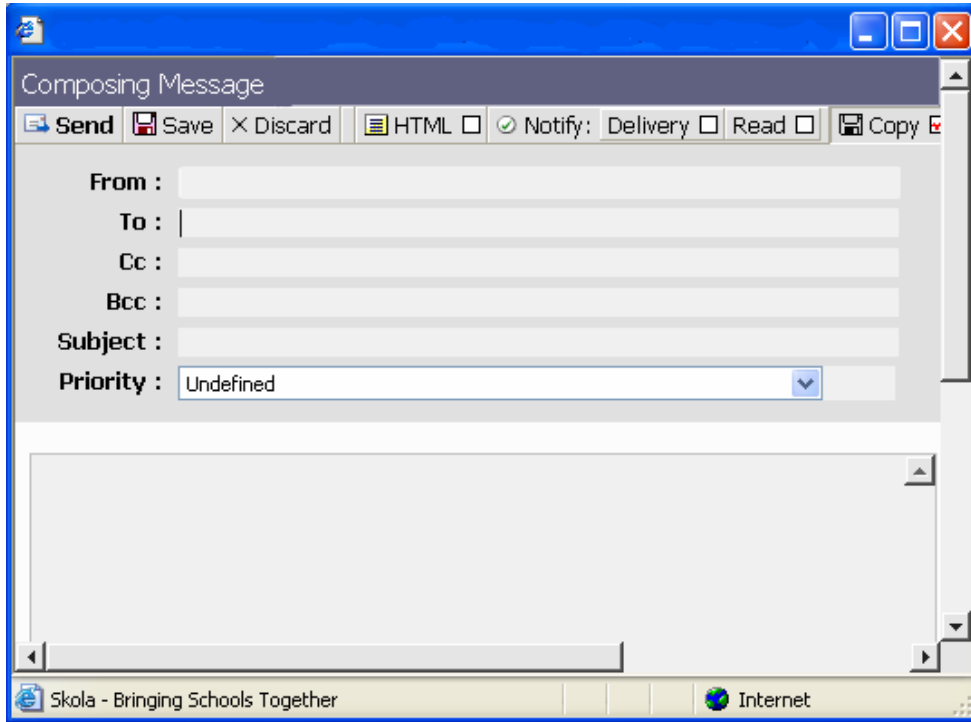


LAN WAN

2

6 a) This question is about e-mail.

James sent an e-mail to frank@schoolnet.gov.mt and a copy to mark@schoolnet.gov.mt. The subject was “Birthday”. He wrote “Hope to see you”.



- i Fill in the e-mail window shown above with the details given.
- ii Draw an arrow to show the button James **clicked to send** the e-mail

4
1

b) Fill in the blanks using the words below:

Messages	password	Browser	websites	Modem
WAN	username	ISP	Search engine	e-mail

The internet is a _____ around the world. It connects thousand of computers. You need to have an account with an _____ to be able to use the internet. Users are given a _____ and a _____. Besides you need to have a _____ to connect through the telephone system and a program called a _____ to communicate.

Over the internet one can view millions of _____ and to search for them we use a specialised site called a _____. To send a _____ to your friend in another country through the internet, you can use an _____.

10

7

Use the picture below, answer the following questions



i What is the address of this site?

2

ii Give an example of a hyperlink from the above picture:

1

iii Draw an arrow on the Homepage icon.

1

iv Underline the correct answer from the words below to show which one was used to find this site.

e-mail Search engine Browser

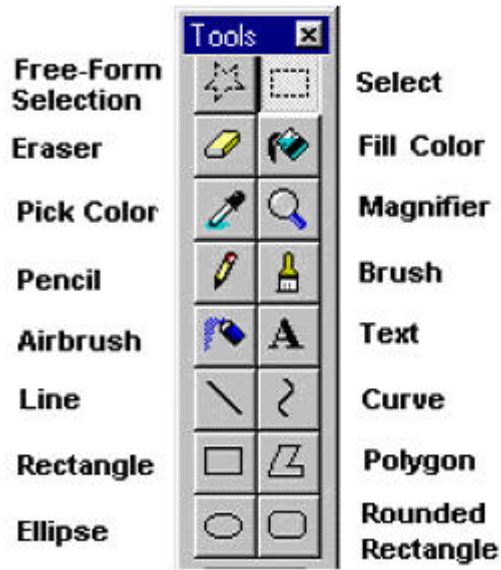
1

v What is the program used to view web pages called? Underline the correct answer from the words below.

Office Outlook express Browser

1

8 The following are some effects created using different Paint tools. Using the labeled toolbox, write the name of the tool used for each effect.



A	
C	
E	
G	
I	

B	
D	
F	
H	Good Luck
J	