

**SECONDARY SCHOOLS
ANNUAL EXAMINATION 2002
Educational Assessment Unit – Education Division**

FORM 4

GEOGRAPHY GENERAL

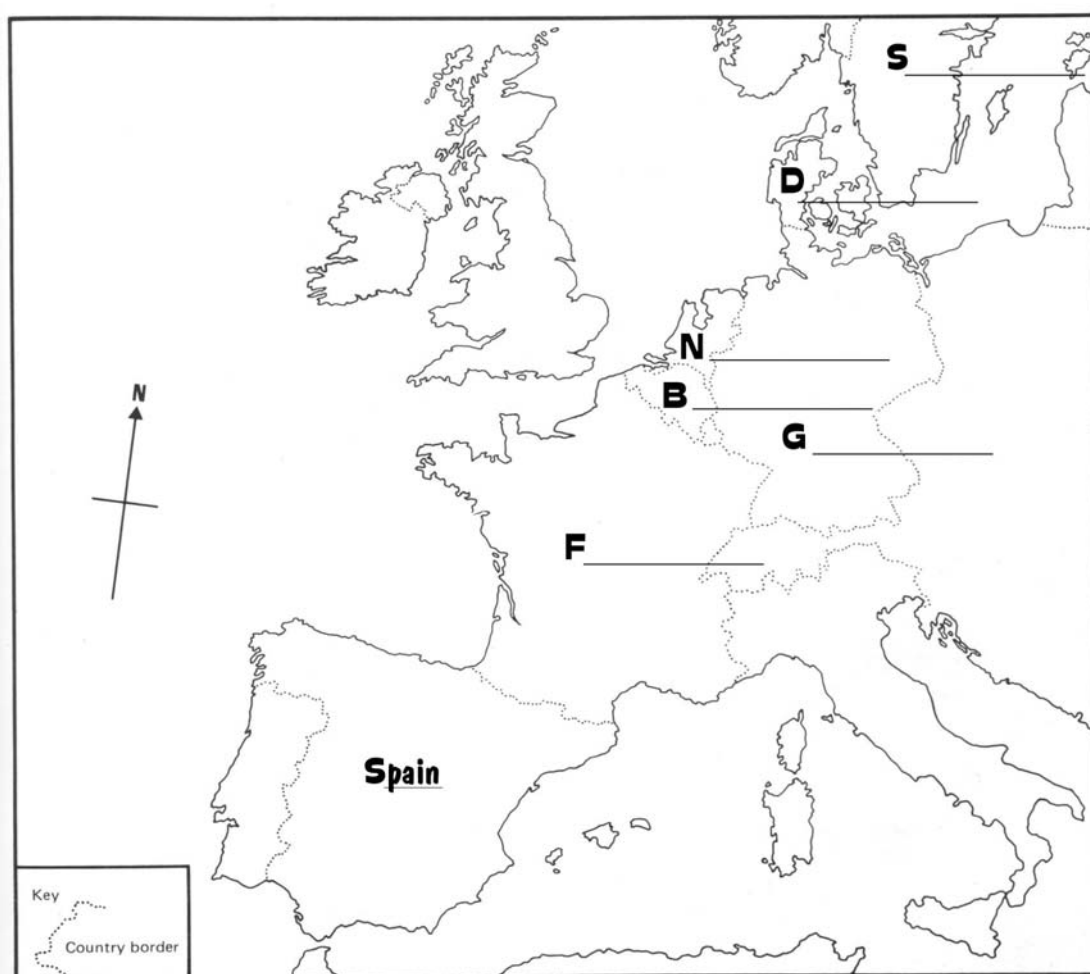
Time 1hr 30mins

Name: _____

Class: _____

ANSWER ALL QUESTIONS

1. Study carefully the map.



(a) Circle the correct answer.

- (i) The map shows part of (Europe, Australia, North America).
- (ii) The sea between England and the rest of Europe is called (Mediterranean, North, Adriatic) Sea.
- (iii) The ocean west of the British Isles is called (Atlantic, Indian, Pacific) Ocean.

(3 marks)

- (b) On the map itself, write down the names of the six countries marked by the initial letter. Example S = Spain.

(6 marks)

- (c) Fill in the table below by writing two causes and two effects of sea pollution.

Sea Pollution	
Causes	Effects
1.	1.
2.	2.

(4 marks)

- (d) Continue the following:

- (i) Millions of people live close to the shore of seas such as the Mediterranean Sea and the North Sea because

(4 marks)

- (ii) Solving the problem of sea pollution is difficult because

(4 marks)



2. Use the following words to complete the following sentences.

drought
India

erosion
mixed

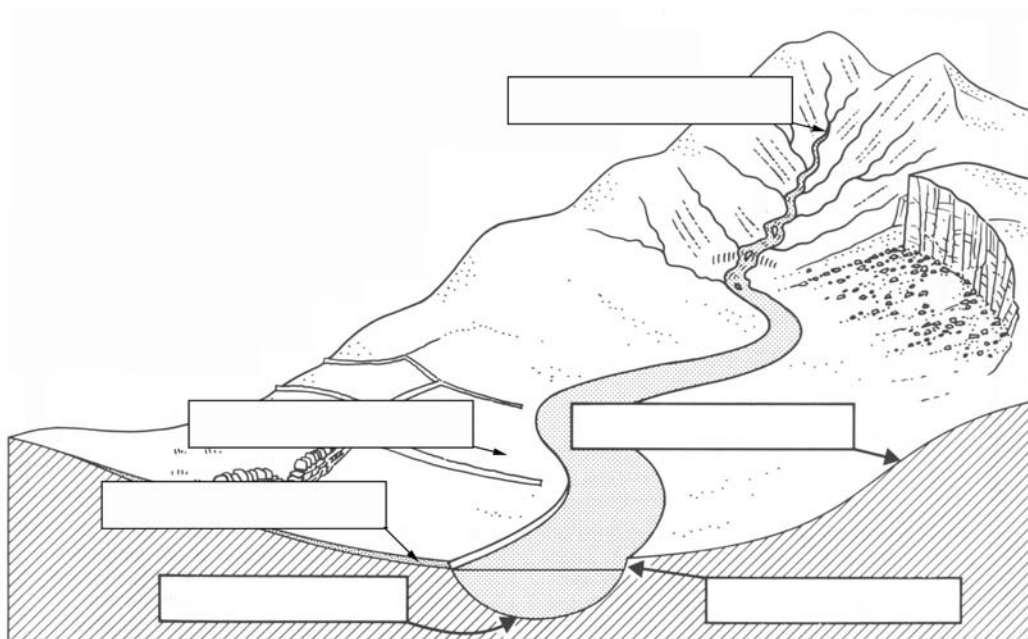
California
farming

subsistence
soil

- (a) Agriculture or _____ is the growing of crops and rearing animals.
- (b) Soil _____ is the removal of soil by wind and rain.
- (c) _____ farming is when crops and animals are found in the same area.
- (d) Ganges Valley is found in _____ .
- (e) Farming is influenced by a number of physical factors such as climate and _____ .
- (f) _____ means that the temperatures are high and with little or no rain.
- (g) _____ is when farmers produce crops for their own needs.
- (h) San Joaquin Valley is found in _____ in the U.S.A. .

(16 marks)

3. Refer to the drawing of the river valley.



(a) Use a blue pencil to shade the river channel.

(1 mark)

(b) Put the following labels in the correct place on the drawing itself.

river bed
alluvium

river bank
flood plain

valley side
river source

(12 marks)

(c) Briefly explain the meaning of:

(i) River meander

(ii) Alluvium

(iii) Flood Plain

(12 marks)

4. Refer to the map of the world.



- a. Write the correct name next to each number in column B on the table below.
Choose from:

Sahara desert
Europe

Himalayan mountains
Bangladesh

Amazon Basin
Antarctica

(6marks)

A	B	C	D
Map No.	Name of region	Population Density	Description
1			
2			
3			
4			
5			
6			

- b. In column C of the table write whether each of the six regions has dense or sparse population.

(6 marks)


- c. In column D write down why each region has a dense or sparse population.

(12 marks)

5. Answer only TWO from 5a, 5b and 5c.

Answer these questions in the form of a short paragraph.

- a. (i) What are endangered species?
(ii) Name four animals that are endangered.
(iii) Give at least three reasons why some animals have become endangered.



(7 marks)

- b. (i) What is the southernmost continent called?
(ii) Name four animals that live in this continent.
(iii) Briefly describe the scenery and the climate of this continent.



(7 marks)

- c. (i) What are renewable resources?
(ii) Name four renewable sources of energy.
(iii) What are the advantages of using these sources of energy.



(7 marks)

End of Exam