

# SECONDARY SCHOOLS ANNUAL EXAMINATIONS 2001

Educational Assessment Unit – Education Division

**FORM 3**

**GEOGRAPHY**

**TIME:1h 30min**

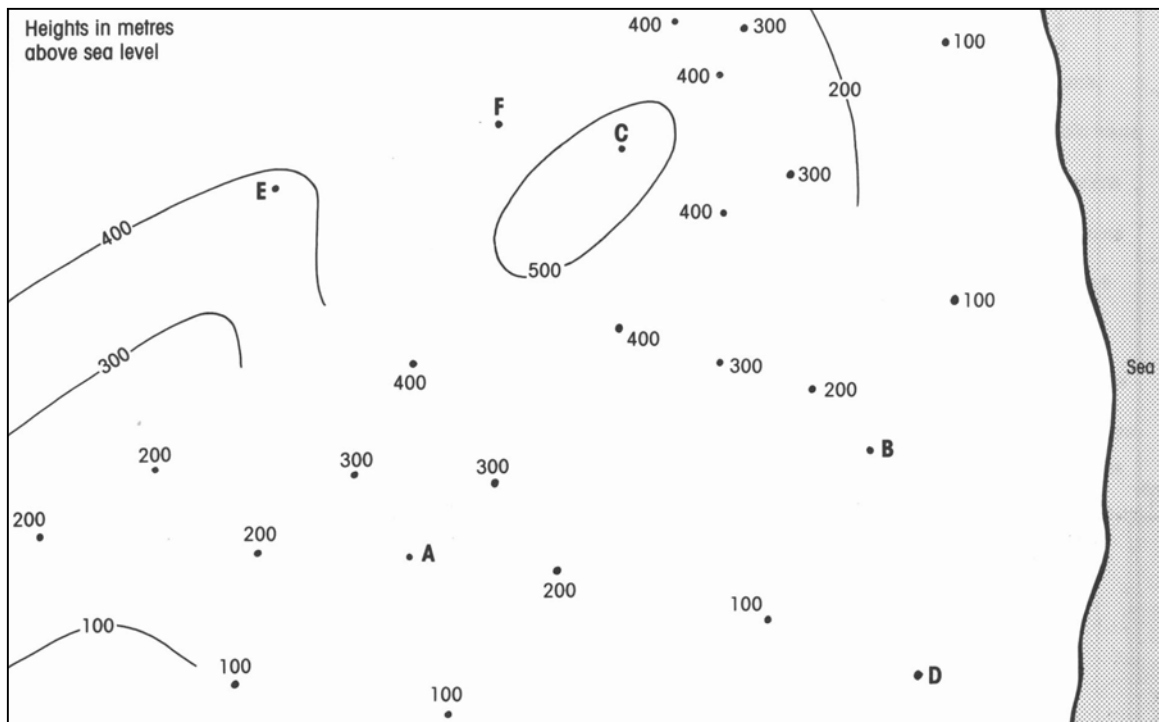
## Answer all questions

1. Refer to the map below and then answer the following questions.

- In pencil join up all the places that are 100 metres above sea level.
- Join up all the places that are 200 metres above sea level.
- Join up all the places that are 300 metres above sea level
- Join up all the places that are 400 metres above sea level. (4)
- What are these lines called? \_\_\_\_\_ (1)
- Write in the heights of places A,B,C,D,E and F. Choose from: 50m, 470m, 220m, 110m, 390m, 520m.

A= \_\_\_\_\_ D= \_\_\_\_\_  
B= \_\_\_\_\_ E= \_\_\_\_\_  
C= \_\_\_\_\_ F= \_\_\_\_\_ (6)

- On the map itself write the following labels:  
*Hill Top*      *Valley*      *Steep Slope*      *Gentle Slope* (8)



2. Write a sentence to explain each of the following:

*Evaporation:* \_\_\_\_\_

\_\_\_\_\_

*Water cycle:* \_\_\_\_\_

\_\_\_\_\_

*Settlement:* \_\_\_\_\_

\_\_\_\_\_

*Central Business District:* \_\_\_\_\_

\_\_\_\_\_


(12)

3. In the space provided below draw a diagram to show a:

*Dispersed Settlement*

*Nucleated Settlement*

*Linear Settlement*



(3)

4. Write **True** or **False** next to each other

a. Lines of latitude show how far north or south a place is. \_\_\_\_\_

b. Lines of latitude and longitudes are measured in degrees. \_\_\_\_\_

c. Lines of longitude are drawn from the North to the South Pole. \_\_\_\_\_

d. The Greenwich Meridian is a line of latitude. \_\_\_\_\_

e. The North Pole is found at 90° South of the Equator. \_\_\_\_\_

f. The Equator is the longest line of latitude. \_\_\_\_\_

(12)

5. Write down these words in their proper column

*Sea*            *Desert*            *Cars*            *Factories*            *Beach*  
*Aeroplane*    *Settlement*        *River*            *Lake*                *Shop*

| Physical (natural) environment | Human environment |
|--------------------------------|-------------------|
|                                |                   |
|                                |                   |
|                                |                   |
|                                |                   |
|                                |                   |
|                                |                   |
|                                |                   |

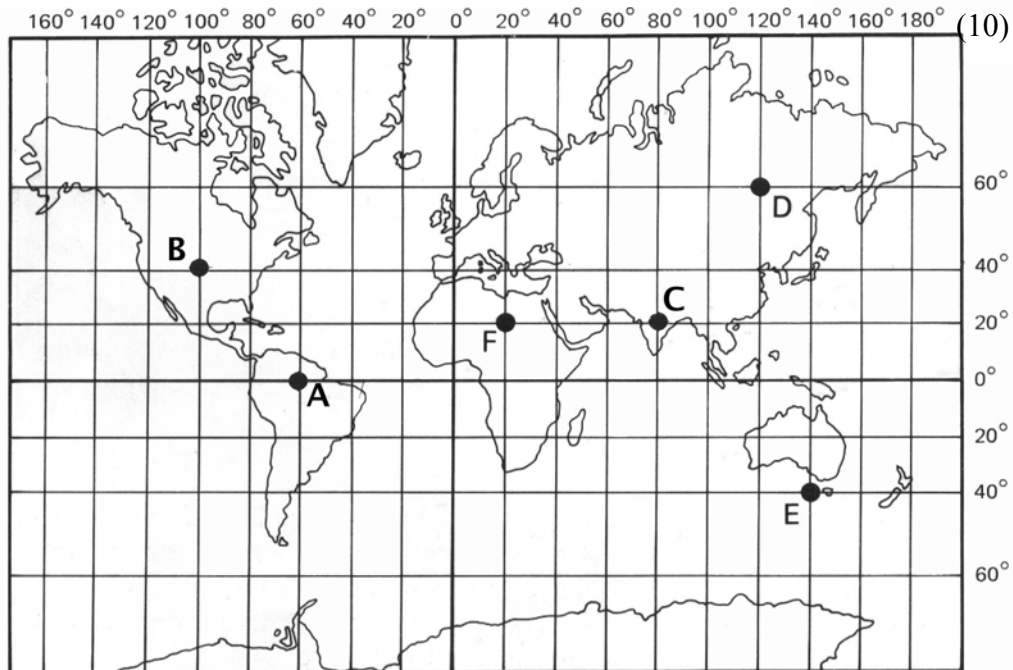
(10)

6. On the map of the world

a. Label the:                    *Equator*                    *Greenwich Meridian*  
   *Line of Latitude*        *Line of Longitude*                    (8)

b. Give the positions of places A, B, C, D, E using latitude and longitude.

| <i>Place</i> | <i>Latitude</i> | <i>Longitude</i> |
|--------------|-----------------|------------------|
| A            |                 |                  |
| B            |                 |                  |
| C            |                 |                  |
| D            |                 |                  |
| E            |                 |                  |



(10)

- 7 a. Match the best type of transport with each journey. Tick (X) in only one box for each journey.

| <i>Journey</i>                    | <i>Road</i> | <i>Sea</i> | <i>Air</i> |
|-----------------------------------|-------------|------------|------------|
| Import oil from Libya             |             |            |            |
| Short business holiday to England |             |            |            |
| Go to School                      |             |            |            |
| Get flowers from Holland          |             |            |            |
| Import cars from Japan            |             |            |            |

(10)

7. b. Choose any two journeys and explain your choice.

- i) \_\_\_\_\_  
 \_\_\_\_\_
- ii) \_\_\_\_\_  
 \_\_\_\_\_

(6)

7. Match the following sentences

1. Clouds are made up

|  |
|--|
|  |
|--|

occurs when moist air rises over mountains.

2. Relief rainfall

|  |
|--|
|  |
|--|

of tiny drops of moisture called cloud droplets.

3. When warm air meets cold air

|  |
|--|
|  |
|--|

is used to measure wind strength.

4. The Beaufort scale

|  |
|--|
|  |
|--|

Frontal Rainfall usually occurs.

5. Meteorology is the

|  |
|--|
|  |
|--|

study of the weather.

(10)