

**SECONDARY SCHOOLS ANNUAL EXAMINATIONS**  
**Educational Assessment Unit - Education Division (Malta)**  
**2001**

**Form 1**

**GEOGRAPHY**

**Time: 1 hour 30 min.**

**Name** \_\_\_\_\_

**Class** \_\_\_\_\_

**N. B.** Answer all questions. Try to use good English and clear handwriting.

1. Fill in the blanks with the names given of each of the five Maltese land shapes below:

Marfa

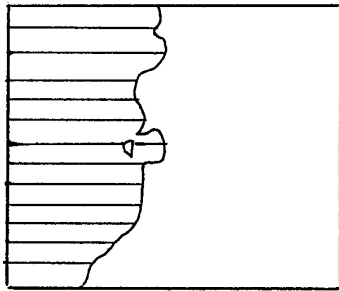
Comino Island

Marsaxlokk Bay

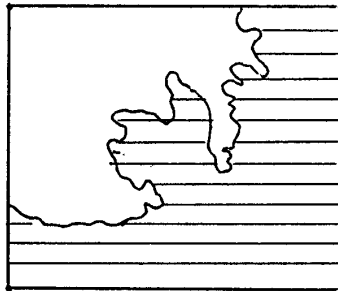
Marsamxett and Grand Harbours

Dwejra (Gozo)

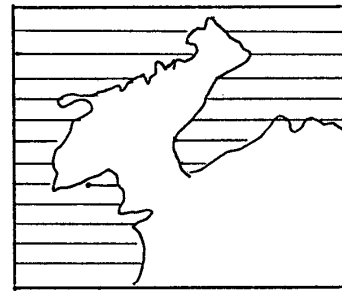
(10 marks)



a \_\_\_\_\_



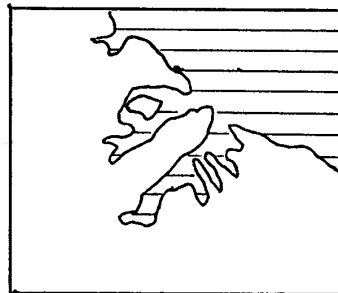
b \_\_\_\_\_



c \_\_\_\_\_



d \_\_\_\_\_




e \_\_\_\_\_

2. In the space given, draw a **PLAN** (how they look from above) of the following thing

A round table with 4 rectangular table-mats on it; a large plate on each one of the table-mats; 4 small cups near the table-mat; and 4 chairs near the table (10 marks)

Draw your plan of the table in the space below



3. Write the word PLAN or MAP correctly after each of the following: (10 marks)

- a. A drawing from above of a kitchen: \_\_\_\_\_
- b. A drawing of a house made by an architect : \_\_\_\_\_
- c. The drawing from above of a street showing pavements and important buildings:  
\_\_\_\_\_
- d. The drawing found on a page of an atlas: \_\_\_\_\_
- e. The drawing from above of the shape of Australia: \_\_\_\_\_

4. Name five people (or occupations) who may need to use a map: (10 marks)

\_\_\_\_\_

\_\_\_\_\_

Question 5



5. Study the relief map of Malta given showing the 50 metres and 150 metres contours, then answer the following: (10 marks)

a. Name **FOUR** towns or villages that are on the lowest land (between the coast and 50 metres height).

\_\_\_\_\_

b. Name **FOUR** towns or villages that are on middle height (between 50 metres and 150 metres contours).

\_\_\_\_\_

c. Name **TWO** towns or villages that are on high land in Malta (higher than 150 metres).

\_\_\_\_\_

6. a) What is **Sea Malta**? \_\_\_\_\_

\_\_\_\_\_ (5 marks)

6. b) Fill in the blanks with the right words. Use **ONLY TEN** out of the twelve given:

**ROTTERDAM, ZABBAR, GENOA, OIL-TANKERS, RO-RO, FREIGHT, FREE-PORT, TRAWLERS, YACHTS, QORMI, CRUISE-LINERS, CARGO-SHIPS**

- i) The name of one Sea Malta ship \_\_\_\_\_
- ii) Large boats used for fishing very far out \_\_\_\_\_
- iii) Large ships which bring goods or export products. \_\_\_\_\_
- iv) Large ships which carry passengers as tourists \_\_\_\_\_
- v) Large ships which carry petroleum \_\_\_\_\_
- vi) A system by which large ships carry container trucks \_\_\_\_\_
- vii) A ship's cargo is called is also called so. \_\_\_\_\_
- viii) A large Mediterranean port to which Sea Malta works. \_\_\_\_\_
- ix) A large port outside the Mediterranean. \_\_\_\_\_
- x) A port in Malta which very large and modern cranes. \_\_\_\_\_

(10 marks)

7. a. Match by putting the correct letter in the space given:

A	Mgarr is situated in		is linear.
B	Siggiewi is		is a hamlet.
C	The shape of Sannat		the North-West of Malta.
D	Misrah Suffara		is now a very modern town.
E	Sliema		a nucleated village.

(5 x 2 marks=10 marks)

b) Name two Maltese villages which start with the prefix '**HAL**'

\_\_\_\_\_ (2 marks)

c) Why is this prefix '**HAL**' used?

\_\_\_\_\_ (3 marks)

8. Write **TRUE** or **FALSE** correctly near each statement:

(10 marks)

- a. Malta meteorological Office is at Luqa. \_\_\_\_\_
- b. The Met. Office receives information from all over the Mediterranean region. \_\_\_\_\_
- c. Meteorologists are professional weather forecasters. \_\_\_\_\_
- d. The weather forecast tells us the weather conditions beforehand. \_\_\_\_\_
- e. We can watch weather reports on TV stations in Malta \_\_\_\_\_
- f. There are only building instruments at the Met. Station. \_\_\_\_\_
- g. The anemometer measures the amount of rain that falls. \_\_\_\_\_
- h. June, July and August are usually very rainy in Malta. \_\_\_\_\_
- i. Air pressure is measured with a barometer. \_\_\_\_\_
- j. Rain is expected if air pressure is very high. \_\_\_\_\_

9. On a foolscap, write about 10 sentences on ONE of the following topics:

(10 marks)

