

SECONDARY SCHOOLS ANNUAL EXAMINATIONS 2000
Educational Assessment Unit – Education Division

FORM 1	GEOGRAPHY	Time: 1hr 30mins
---------------	------------------	-------------------------

NAME: _____ **CLASS:** _____

Work out ALL questions. All answers should be written on this paper.

A. Write True or False after each sentence.

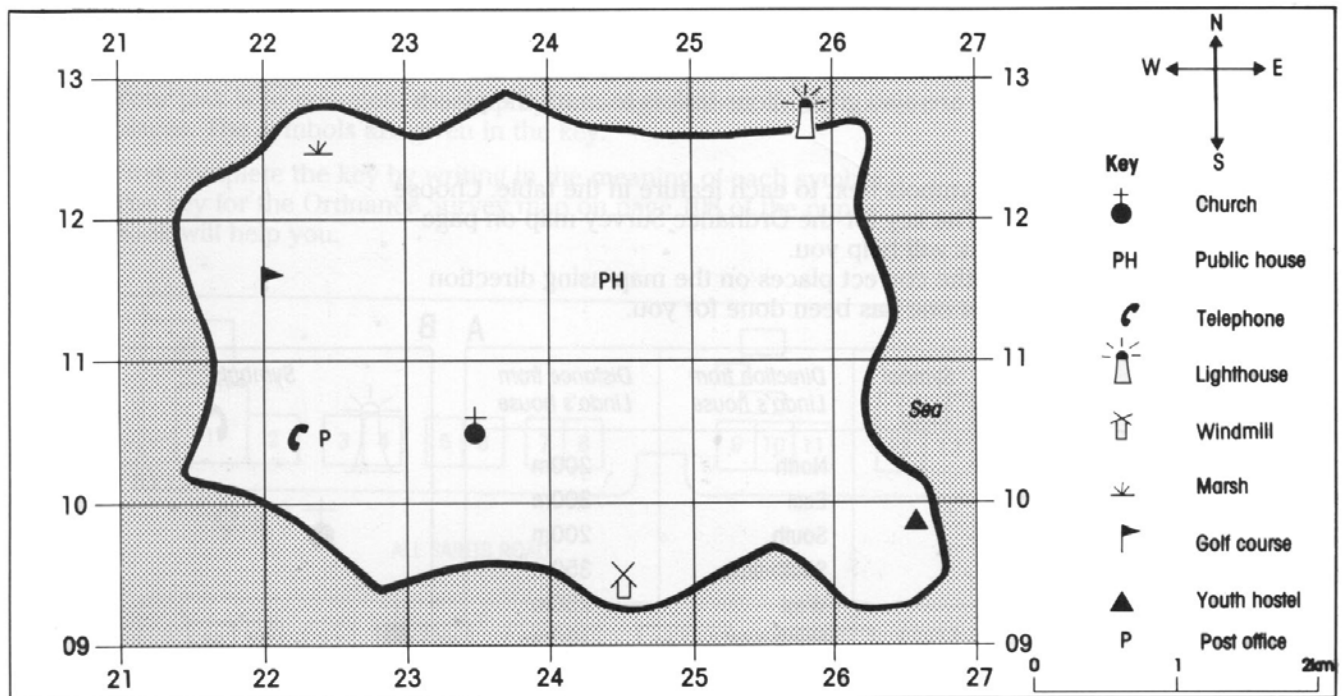
1. Siggiewi is a nucleated village, since the Parish Church is found nearly in the centre with many houses around it. _____
 2. A linear-shaped village is a place close to the sea with a lot of houses around a hotel. _____
 3. People living in an isolated farmhouse will usually have a lot of noise coming from traffic. _____
 4. People living in a large town are called urban dwellers. _____
 5. In a small village you usually find a hospital. _____
 6. If you live in a village you are a rural dweller. _____
- (12)

B. Answer the questions by using the following words

A Maltese Cab A cargo ship A bus An aeroplane

1. Which mode of transport is the fastest? _____
 2. Which mode of transport will be used to carry a container full of shirts and jeans from Malta to England? _____
 3. Which mode of transport is the responsibility of the Public Transport Authority? _____
 4. Three German tourists wish to see as much as possible of the city of Valletta. Which mode of transport would they use? _____
- (12)

C. Study carefully the map below.



1. Write True or False

- The windmill is further south than the church.
- The church is further west than the telephone.
- The windmill is south east of the public house.
- The windmill is south east of the church.
- The lighthouse is more than 2 km from the church.

_____ (5)

2. Put the following in the correct place.

telephone marsh public house windmill lighthouse

- The _____ is in grid square 2411.
- The _____ is in grid square 2409.
- The _____ is in grid square 2212.
- The _____ is in grid square 2210.
- The _____ is in grid square 2512.

(5)

3. Give the following distances in kilometres.

- The public house to the windmill is _____ km.
- The post office to the youth hostel is _____ km.
- The lighthouse to the windmill is _____ km.

(15)

D. Match the following.


1. Roundabout	<input type="text"/>	White lines on roads crossed by pedestrians.
2. Zebra-Crossing	<input type="text"/>	Carry passengers as tourists.
3. Sub-way	<input type="text"/>	A circular feature at cross roads.
4. Air Malta	<input type="text"/>	Carry large quantities of oil.
5. Cruise liners	<input type="text"/>	Is the Maltese national airline
6. Oil tankers	<input type="text"/>	An underground passage-way.

(12)

E. Fill in.

This special wooden box where we place weather instruments is called _____. (5)

Now write a short description about this box, and say why it is used.

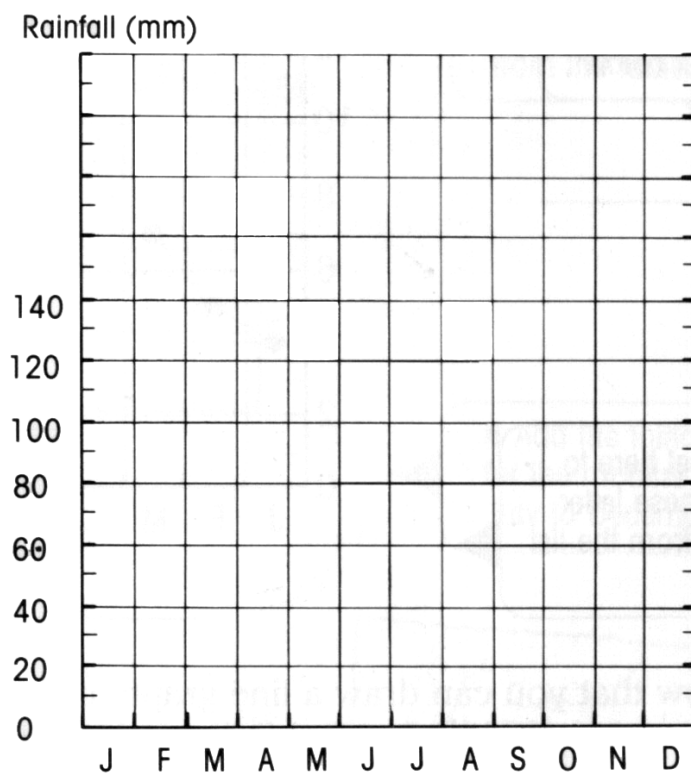


(10)

F. Use the figures below to draw a rainfall graph (bar- graph) on the outline provided below.

Rainfall Information

<i>Months</i>	J	F	M	A	M	J	J	A	S	O	N	D
<i>Rainfall mm</i>	50	70	30	20	20	0	0	0	80	150	200	115



(12)

G. Answer the following questions using the graph you have drawn in E.

1. Which month had the highest rainfall ?

2. Which months were without rain?

3. What was the total rainfall?

4. How much rain fell in the month of September?

(12)