



UNIVERSITY OF CAMBRIDGE INTERNATIONAL EXAMINATIONS
General Certificate of Education Ordinary Level

CANDIDATE
NAME

CENTRE
NUMBER

--	--	--	--	--

CANDIDATE
NUMBER

--	--	--	--

GEOGRAPHY

2217/23

Paper 2

May/June 2013

2 hours 15 minutes

Candidates answer on the Question Paper.

Additional Materials: Ruler
 Calculator
 Protractor
 Plain paper

1:50 000 Survey Map Extract is enclosed with this question paper.

READ THESE INSTRUCTIONS FIRST

Write your Centre number, candidate number and name in the spaces provided.
Write in dark blue or black pen.
You may use a soft pencil for any diagrams, graphs or rough working.
Do not use staples, paper clips, highlighters, glue or correction fluid.
DO NOT WRITE ON ANY BARCODES.

Section A

Answer **all** questions.

Section B

Answer **one** question.

The Insert contains Photograph A for Question 4, Fig. 7 and Table 7 for Question 7 and Photographs B and C and Table 11 for Question 8.
The Survey Map Extract and the Insert are **not** required by the Examiner.
Sketch maps and diagrams should be drawn whenever they serve to illustrate an answer.

At the end of the examination, fasten all your work securely together.
The number of marks is given in brackets [] at the end of each question or part question.

For Examiner's Use

Section A

Q1

Q2

Q3

Q4

Q5

Q6

Section B

Q7

Q8

Total

This document consists of **25** printed pages, **3** blank pages and **1** Insert.



Section A

Answer **all** questions in this section.

For
Examiner's
Use

1 The 1:50 000 map is of Mukore, Zimbabwe.

(a) Study the area of the map shown in Fig. 1.

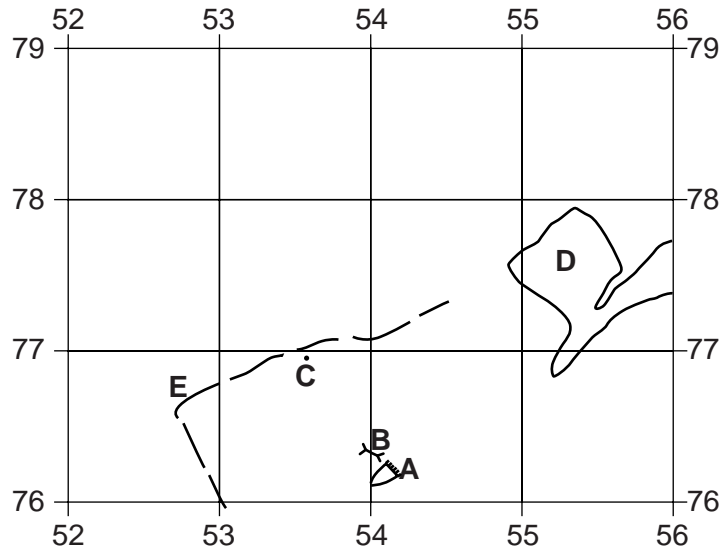


Fig. 1

- (i) Identify the feature at **A**.
..... [1]
- (ii) Identify the feature at **B**.
..... [1]
- (iii) What is the height at spot height **C**?
..... [1]
- (iv) What is the land use at **D**?
..... [1]
- (v) What type of road is at **E**?
..... [1]
- (vi) Draw on Fig. 1, the position of the main river. [1]

(vii) Describe the relief of the area shown in Fig. 1.

*For
Examiner's
Use*

.....

.....

.....

.....

.....

.....

.....

.....

.....

.....

.....

.....

.....

.....

.....

.....

.....

.....

[5]

(b) (i) Give the bearing from grid north of the reservoir at 505714 from the reservoir at 509707. Circle the correct answer.

030° 120° 150° 330°

[1]

(ii) Measure the distance between these two reservoirs, to the nearest kilometre.

..... [1]

(c) Give the six-figure grid reference of the derelict building, west of the main river, near the centre of the map.

..... [1]

(d) Study the main river shown on the map.

(i) State the direction of flow of the main river. Give **one** piece of evidence to support your answer.

Direction of flow

Evidence

..... [2]

(ii) Describe the other features of the river.

.....
.....
.....
.....
.....
.....
.....
.....
.....
.....
..... [4]

[Total: 20 marks]

BLANK PAGE

TURN OVER FOR QUESTION 2

2 Study Fig. 2, which shows population growth rates for Poland and Germany, two countries in Europe.

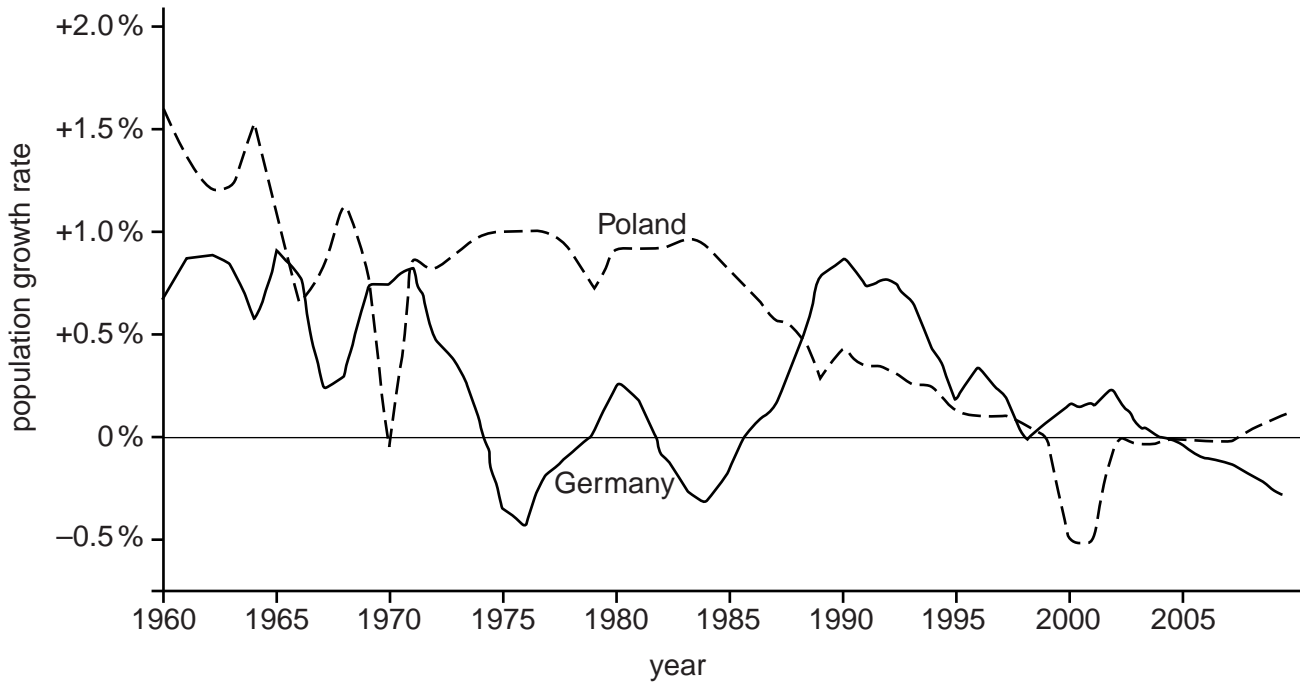


Fig. 2

(a) Which of the two countries had the largest population growth rate and in which year was this?

Country

Year

[1]

(b) Describe the changes in population growth rate in Poland, between 1970 and 1990. Refer to data in your answer.

.....
.....
.....
.....
.....
.....
.....
.....
.....
.....
.....
.....
.....
.....

[4]

(c) (i) State a year when Poland experienced a decrease in total population.

.....[1]

(ii) Poland and Germany are neighbouring countries. Suggest why the population of Poland may have decreased in the year you have chosen in (c)(i).

.....
.....
.....
.....[2]

[Total: 8 marks]

For
Examiner's
Use

3 Study Fig. 3, which shows a coastal area.

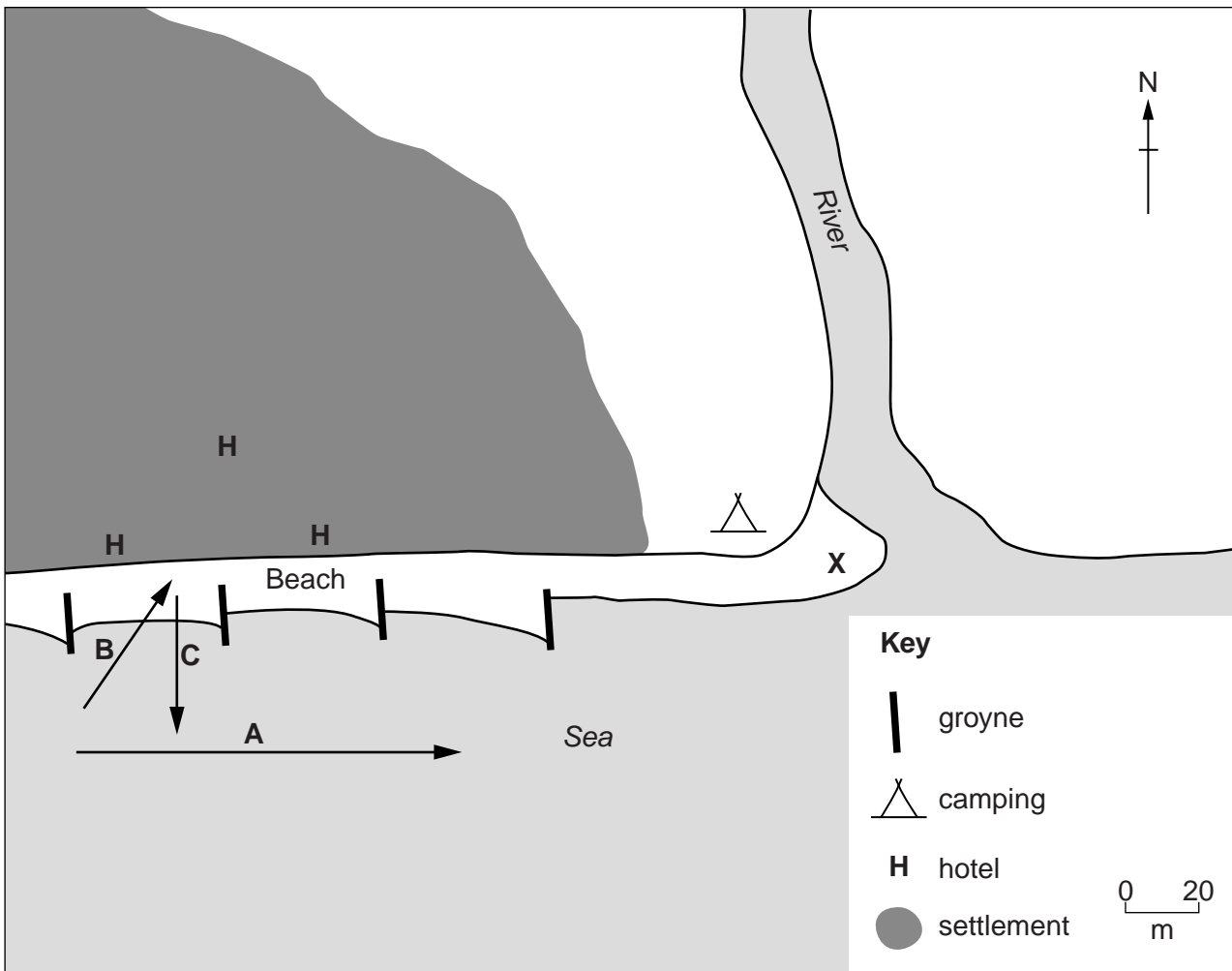


Fig. 3

(a) Match arrows A, B and C to the labels given below.

swash	
backwash	
longshore drift	

[2]

(b) Suggest why people living in this area want to protect the beach from erosion.

.....

.....

.....

.....

[3]

(c) Describe the changes that may occur at area X as a result of longshore drift. You may annotate Fig. 3 to illustrate your answer.

*For
Examiner's
Use*

.....

.....

.....

.....

.....

.....

..... [3]

[Total: 8 marks]

4 Study Photograph A (Insert), which shows a rural location in Zimbabwe.

(a) Describe the relief of the area shown in Photograph A.

.....
.....
.....
.....
.....
..... [3]

(b) (i) Describe the vegetation of the area shown in Photograph A.

.....
.....
.....
.....
.....
..... [3]

(ii) How has human activity affected the vegetation?

.....
.....
.....
..... [2]

[Total: 8 marks]

5 Study Fig. 4, which shows the climate of Jeddah, Saudi Arabia.

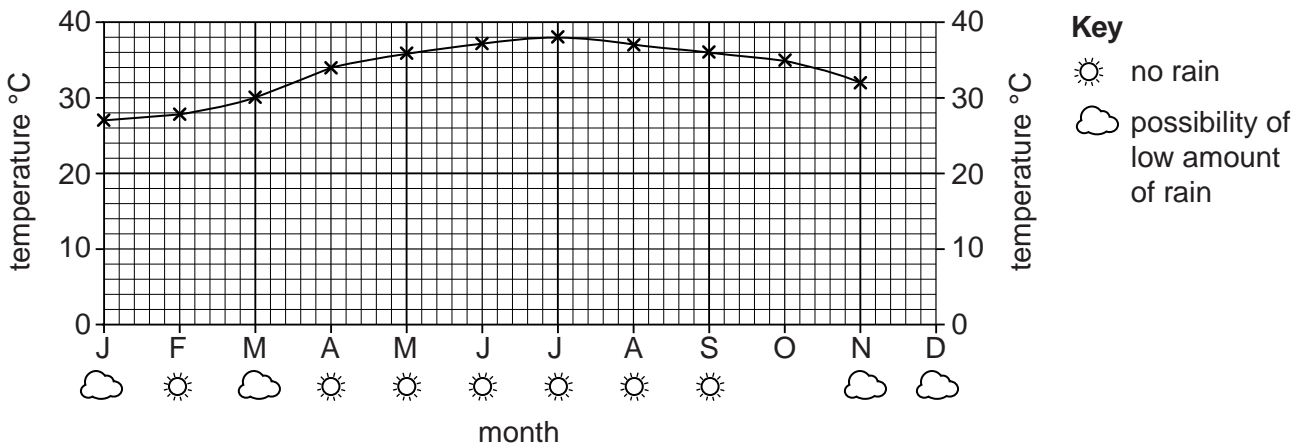


Fig. 4

(a) (i) Complete Fig. 4 to show:

- an average temperature of 29°C in December;
- no rain in October.

[2]

(ii) Jeddah is in the northern hemisphere. How can you tell this from the temperature graph in Fig. 4?

.....
[1]

(b) Study Fig. 5, which shows demand for and supply of water in Saudi Arabia.

For
Examiner's
Use

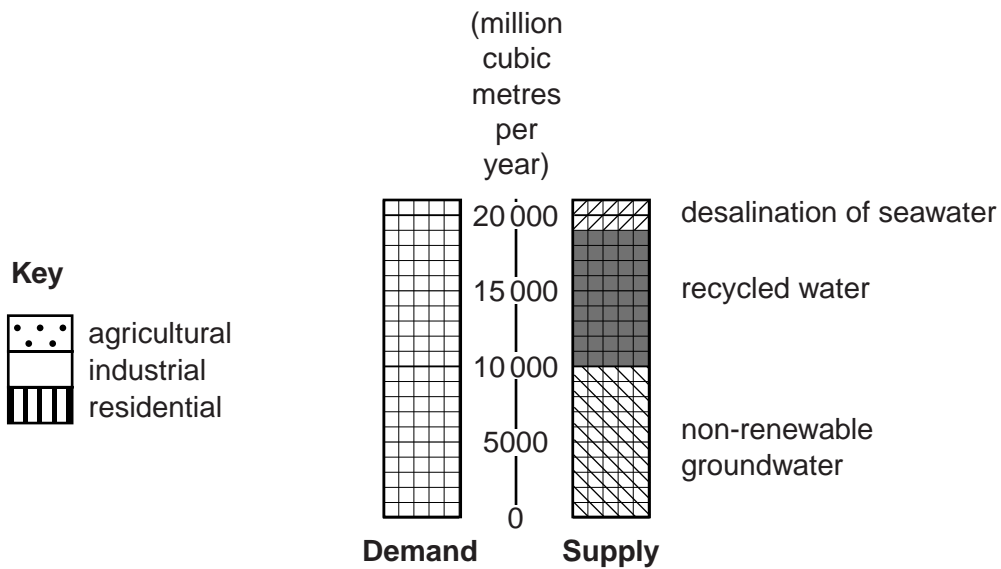


Fig. 5

(i) Use the data in Table 1 to complete Fig. 5. Use the key provided.

Table 1

Type of Demand	Amount (million cubic metres per year)
Agricultural	18 500
Industrial	500
Residential	2 000

[2]

(ii) How many million cubic metres per year come from recycled water?

..... [1]

(iii) Suggest why Saudi Arabia's groundwater supply is likely to run out.

.....

 [2]

[Total: 8 marks]

6 Study Fig. 6, which shows information about renting 2 bedroomed holiday apartments in northern Spain in June.

For
Examiner's
Use

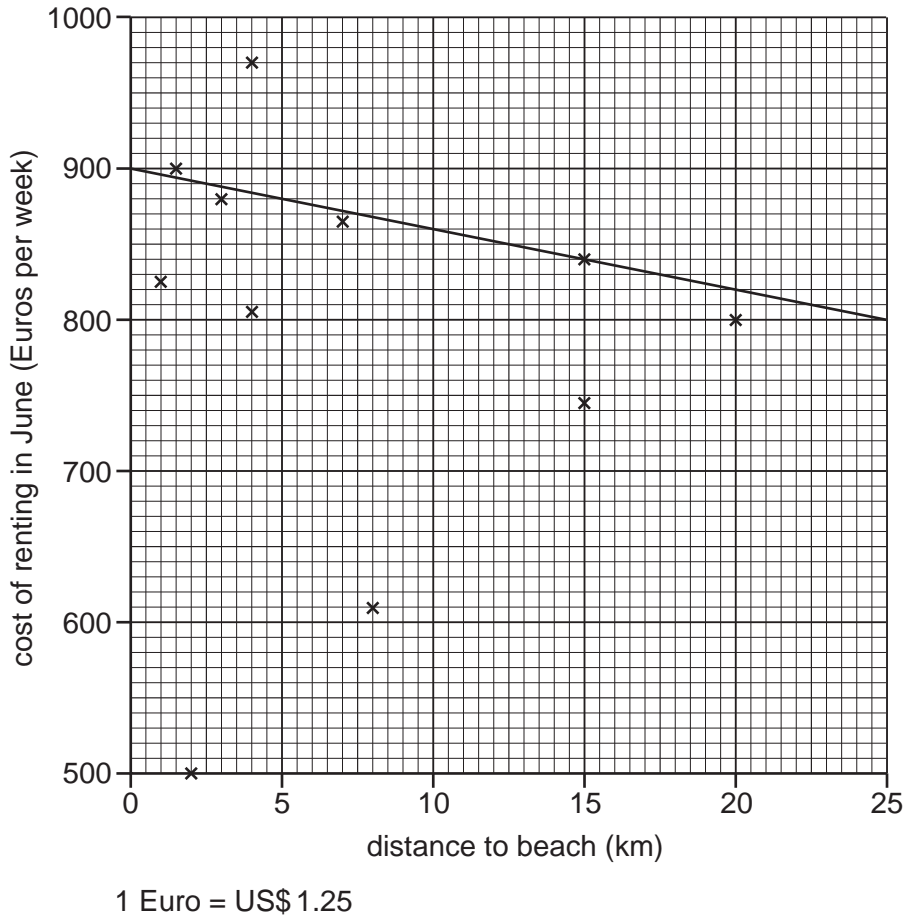


Fig. 6

(a) (i) Name the type of graph used in Fig. 6.

..... [1]

(ii) A suggested line of best fit is shown on the graph. Does the line suggest a:

- positive relationship;
- negative relationship;
- no relationship?

Circle the correct answer. [1]

(iii) Do you agree with the position of the line of best fit? Give a reason for your answer.

.....
 [1]

(b) A property 3 km from the beach costs 820 Euros per week in June. Use this information to complete Fig. 6. [1]

(c) Study the climate data in Table 2.

For
Examiner's
Use

Table 2

	J	F	M	A	M	J	J	A	S	O	N	D
Sunshine hours per day	3	3	4	3	5	6	5	5	4	4	2	2
Max temperature (°C)	12	13	15	16	19	22	25	25	24	20	16	13
Days with rain	15	15	15	17	16	12	11	11	11	15	15	14
Rainfall (mm)	80	80	65	100	50	40	60	75	60	95	160	80

(i) Suggest why June is a popular month for holidays in northern Spain.

.....

.....

.....

.....

.....

.....

.....

.....

.....

..... [3]

(ii) In which month is holiday renting likely to be cheapest?
Circle the correct answer.

May July November

[1]

[Total: 8 marks]

Section B

Answer **one** question in this section.

7 A class of students were studying traffic flow at a busy road junction near their school. A sketch map of the road junction is shown in Fig. 7 (Insert).

The students wanted to investigate the following hypotheses:

Hypothesis 1: *Traffic flow changes during the day.*

Hypothesis 2: *Traffic congestion occurs at all sites going towards and away from the road junction.*

The students chose eight sites to do traffic surveys. These are shown on Fig. 7.

They agreed to do four separate counts lasting one hour at the following times:

- 08.00 to 09.00
- 11.00 to 12.00
- 14.00 to 15.00
- 17.00 to 18.00

(a) (i) Describe how the students would organise the traffic survey. Refer to their planning and recording.

.....
.....
.....
.....
.....
.....
.....
.....
..... [4]

(ii) Suggest **three** difficulties which the students might have had when doing their traffic survey.

1

.....

2

.....

3

..... [3]

(b) The results of the students' traffic survey at site 3 are shown in Table 3, below.

For
Examiner's
Use

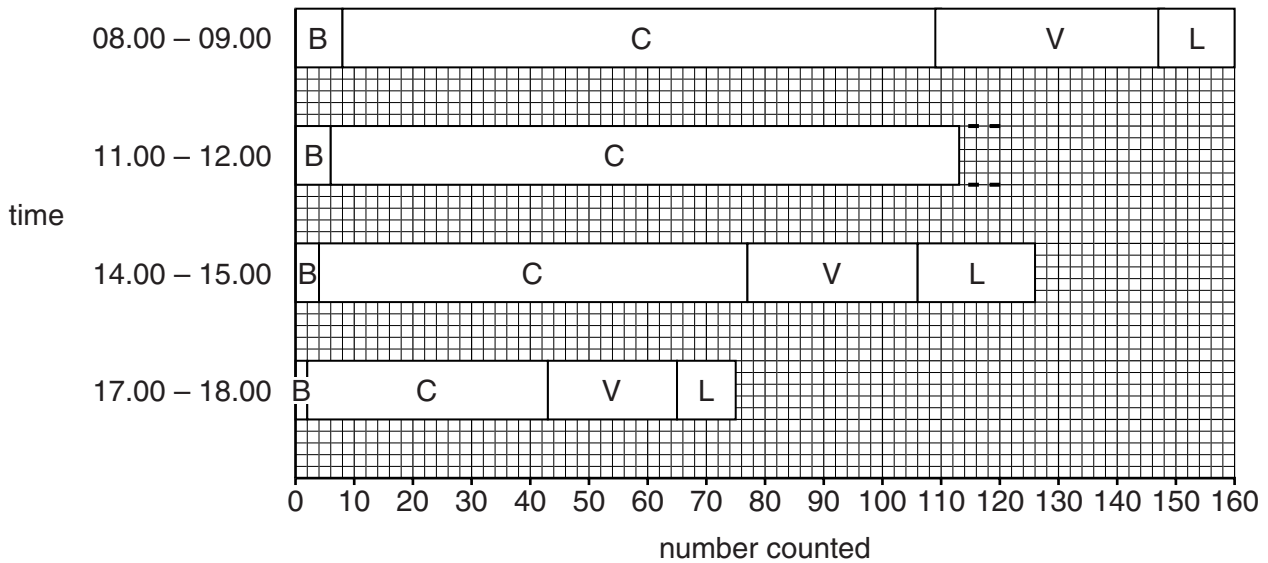
Table 3

Traffic survey results for site 3

Time of survey	bikes / motor bikes	cars	vans / minibuses	lorries / buses	Total vehicles
08.00 to 09.00	8	101	38	13	160
11.00 to 12.00	6	107	27	18	
14.00 to 15.00	4	73	29	20	126
17.00 to 18.00	2	41	22	10	75

- (i) Complete Table 3 by calculating the total number of vehicles counted between 11.00 and 12.00. [1]
- (ii) Use the data in Table 3 to complete the divided bar graph for the traffic survey results between 11.00 and 12.00 on Fig. 8 below. [2]

Results of student traffic survey



Key

- B bikes/motorbikes
- C cars
- V vans/minibuses
- L lorries/buses

Fig. 8

- (iii) Which **one** of the following types of graph would also be suitable to show the traffic survey results between 11.00 and 12.00?

Circle your answer below.

pie chart line graph scatter graph [1]

- (iv) What conclusion would the students at site 3 make about **Hypothesis 1: Traffic flow changes during the day?**

Support your decision with evidence from Table 3 and Fig. 8.

.....

.....

.....

.....

.....

.....

.....

.....

.....

..... [4]

- (v) Suggest how traffic flows between 08.00 and 09.00 might be different at site 7 from those at site 3 which are shown in Table 3. Look at Fig. 7 (Insert) to help you to answer.

Number of vehicles

.....

.....

Type of vehicles

.....

..... [2]

- (c) To test **Hypothesis 2: Traffic congestion occurs at all sites going towards and away from the road junction** the students used their results to calculate an index of traffic flow for each site. The index is shown in Table 4 below.

Table 4**Index of traffic flow**

vehicle type	number of points allocated*
bike / motor bike	0.5
car	1.0
van / minibus	2.0
lorry / bus	3.0

*more points were allocated to vehicles causing more congestion

The results of using this index between 08.00 and 09.00 at site 3 are shown in Table 5 below.

Table 5**Index of traffic flow for site 3 between 08.00 and 09.00**

vehicle type	bikes / motor bikes	cars	vans / minibuses	lorries / buses
number counted	8	101	38	13
points	0.5	1.0	2.0	3.0
Index score	4	101	76	39

Total index score between 08.00 and 09.00 at site 3 = **220**

- (i) Calculate the index scores for site 3 between 11.00 and 12.00 in Table 6 below. [2]

Table 6**Index score of traffic flow for site 3 between 11.00 and 12.00**

vehicle type	bikes / motor bikes	cars	vans / minibuses	lorries / buses
number counted	6	107	27	18
points	0.5	1.0	2.0	3.0
Index score		107	54	

Total index score between 11.00 and 12.00 at site 3 = **218**

(ii) The results of the index of traffic flow for all 8 survey sites are shown in Table 7 (Insert).

For
Examiner's
Use

The students decided to show their results in a line graph, Fig. 9 below. Use the data in Table 7 to complete the line for site 1. [2]

Index of traffic flow at survey sites

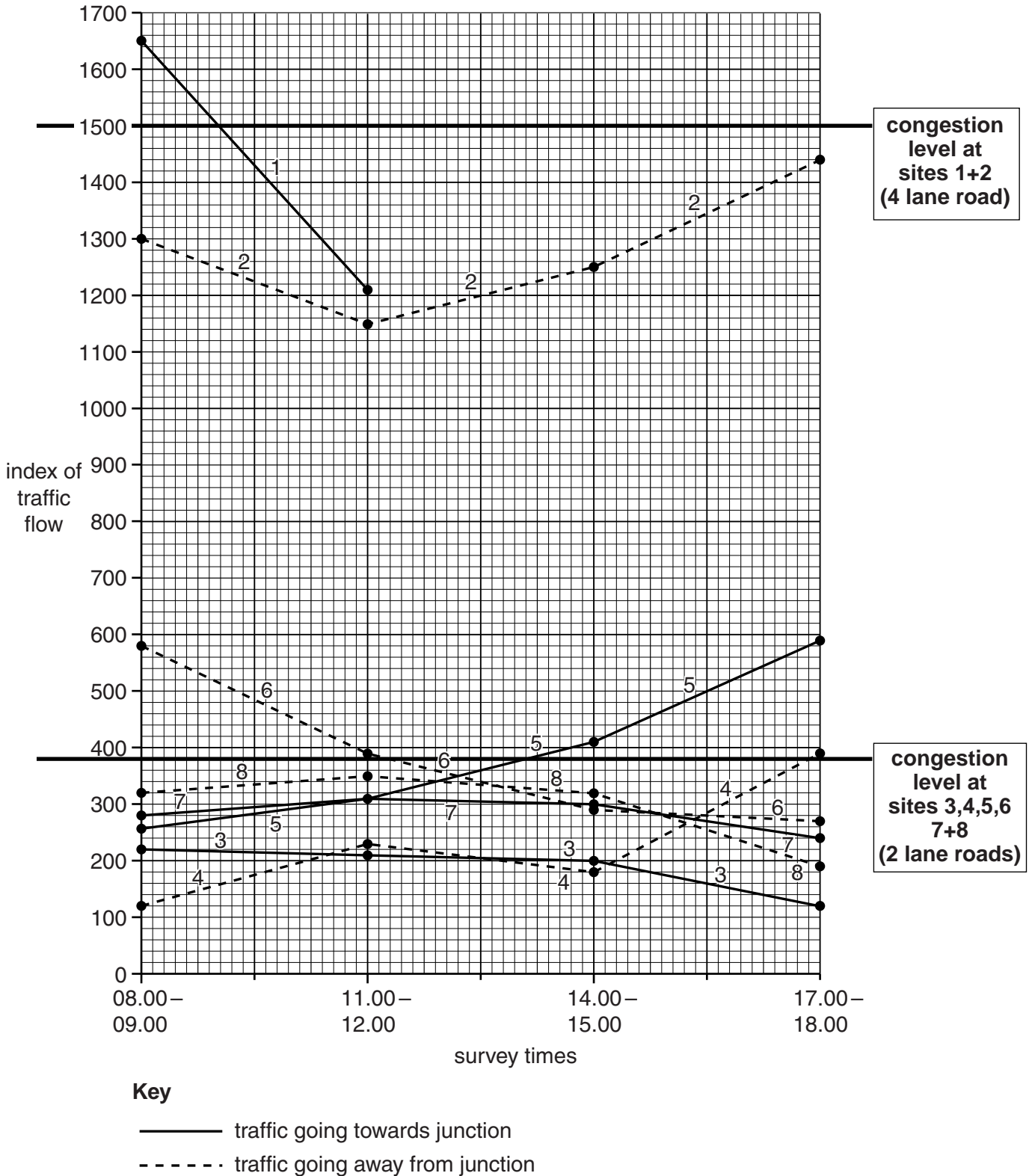


Fig. 9

- (iii) Fig. 9 shows the level above which traffic flow is classified as congested. Congestion level indicates the traffic flow index above which traffic delays occur.

What conclusion would the students make about **Hypothesis 2**: *Traffic congestion occurs at all sites going towards and away from the road junction*? Use data from Fig. 9 to support your answer.

.....

.....

.....

.....

.....

.....

.....

.....

.....

..... [4]

- (d) There is a plan to build a new shopping area at the location shown on Fig. 7 (Insert). Give **two** effects this development might have on traffic at sites 5 and 6.

1

.....

2

.....

..... [2]

- (e) Suggest **three** ways to reduce traffic congestion in urban areas.

1

.....

2

.....

3

.....

..... [3]

[Total: 30 marks]

8 Two groups of students were investigating the characteristics of a local river which flowed for 15 km from its source to the sea. They wanted to investigate possible reasons for changes in velocity (speed of flow) downstream. They carried out their fieldwork at five sites along the course of the river.

They decided to test the following hypotheses:

Hypothesis 1: *Velocity increases as the river bed slopes more steeply.*

Hypothesis 2: *Velocity increases as the wetted perimeter of the river channel increases.*

(a) Before they began the fieldwork their teacher spoke to them about safety in and around the river. Suggest **two** pieces of advice their teacher could have given them.

1

.....

2

..... [2]

(b) First the students used a floating object to measure velocity over a distance of 10 metres. The results from Group A at site 1 are shown in Fig. 10 below.

River recording sheet

Study site: 1	Group A
Measuring velocity	
Time for a floating object to travel 10 metres:	
Test 1	48 seconds
Test 2	71 seconds
Test 3	59 seconds
Test 4	61 seconds
Test 5	43 seconds

Fig. 10

(i) Name **three** different pieces of equipment the group would use to carry out their fieldwork at this site.

1

2

3 [3]

- (ii) Calculate the average velocity at site 1 using the results shown in Fig. 10.
Show your working and your answer in the box below.

[3] For
Examiner's
Use

Study site: 1	Group A
Average (mean) length of time to float 10 metres =	
Average velocity = $\frac{\text{distance}}{\text{average time}}$	
Average velocity = _____ metres per second	

- (iii) When they had completed their measurements at site 1 the two groups compared their results. These results are shown in Table 8 below.

Table 8

Times for a floating object to travel 10 metres at Site 1

	Group A	Group B
Test 1	48 seconds	38 seconds
Test 2	71 seconds	27 seconds
Test 3	59 seconds	49 seconds
Test 4	61 seconds	29 seconds
Test 5	43 seconds	31 seconds

Suggest **two** reasons why the results obtained by the two groups were different.

- 1
-
- 2
- [2]

- (iv) At each site the students also measured the downstream slope (gradient) of the river bed using a clinometer and ranging poles. Photograph B (Insert) shows the measurement being taken.

Describe how the students measured the downstream slope.

.....

.....

.....

.....

.....

.....

..... [3]

- (v) The downstream slope and average velocity results which group B obtained at the five sampling sites are shown in Table 9 below.

Table 9
Results of group B

site	gradient (degrees)	average velocity (m/s)
nearest source		
1	8	0.29
2	6	0.43
3	5	0.37
4	3	0.46
5		
nearest mouth	1	0.47

What conclusion would the students have made about **Hypothesis 1: Velocity increases as the river bed slopes more steeply?**

Use evidence from Table 9 to support the conclusion.

.....

.....

.....

.....

.....

.....

..... [3]

(c) To investigate **Hypothesis 2: Velocity increases as the wetted perimeter of the river channel increases** the students needed to measure the width of the river channel and the depth of the river at each site.

(i) Complete Fig. 11 below to identify the **two** different pieces of equipment used to measure the width of the river. [2]

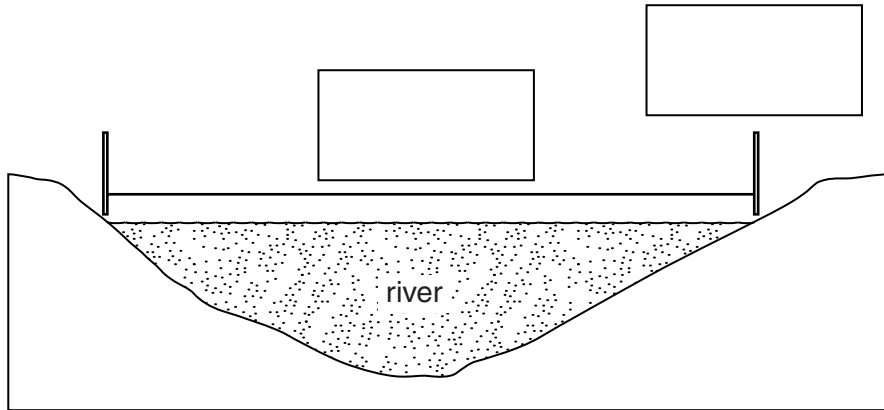


Fig. 11

(ii) The students measured the depth of the river every 0.5 m across the channel. Their results for site 1 are shown in Table 10, below.

Table 10
Results for site 1

Distance across channel (m)	0.5	1.0	1.5	2.0	2.5	3.0
Depth of river (m)	0.18	0.20	0.25	0.40	0.30	0.20

Use these results to complete Fig. 12 below, the cross-section of the channel at site 1. [2]

Cross-section of channel at site 1

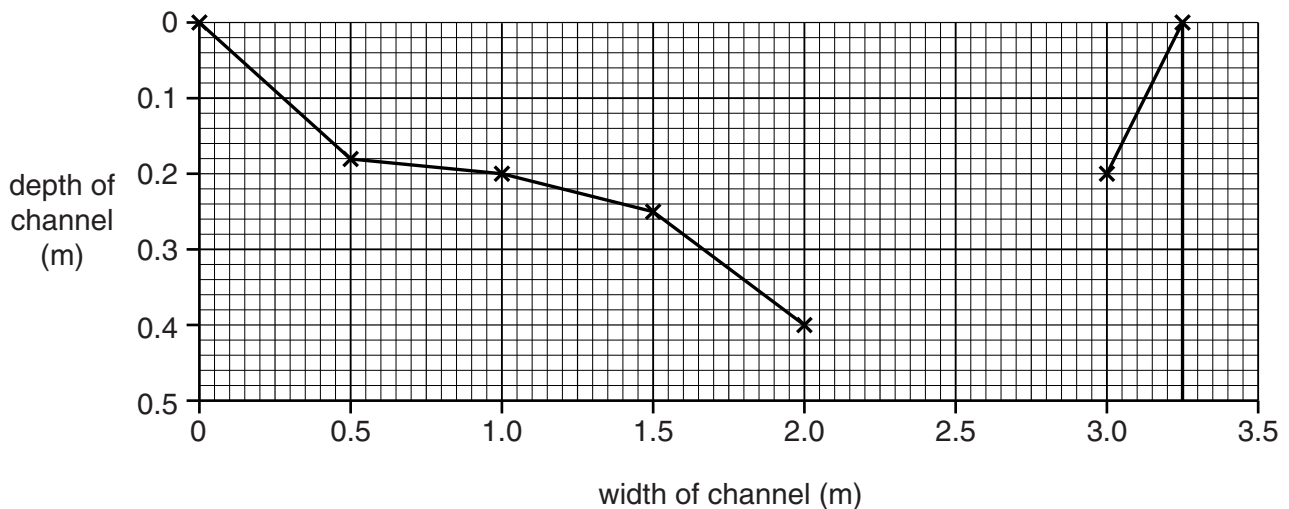


Fig. 12

- (iii) Photograph C (Insert) shows how students measured the wetted perimeter of a river. The wetted perimeter is the part of the channel cross-section which the river touches.

For
Examiner's
Use

Their method is described in Fig. 13, below, which is part of a student's fieldwork notebook.

Extract from fieldwork notebook

Measuring the wetted perimeter

The tape measure was placed along the bed of the river, starting and finishing at water level on both banks.

To make the method more accurate a student walked along it to cross the river.

Fig. 13

The students' results are shown in Table 11 (Insert). Use these results to complete Fig. 14 below by plotting the result for site 1. [1]

Scatter graph of length of wetted perimeter and average velocity

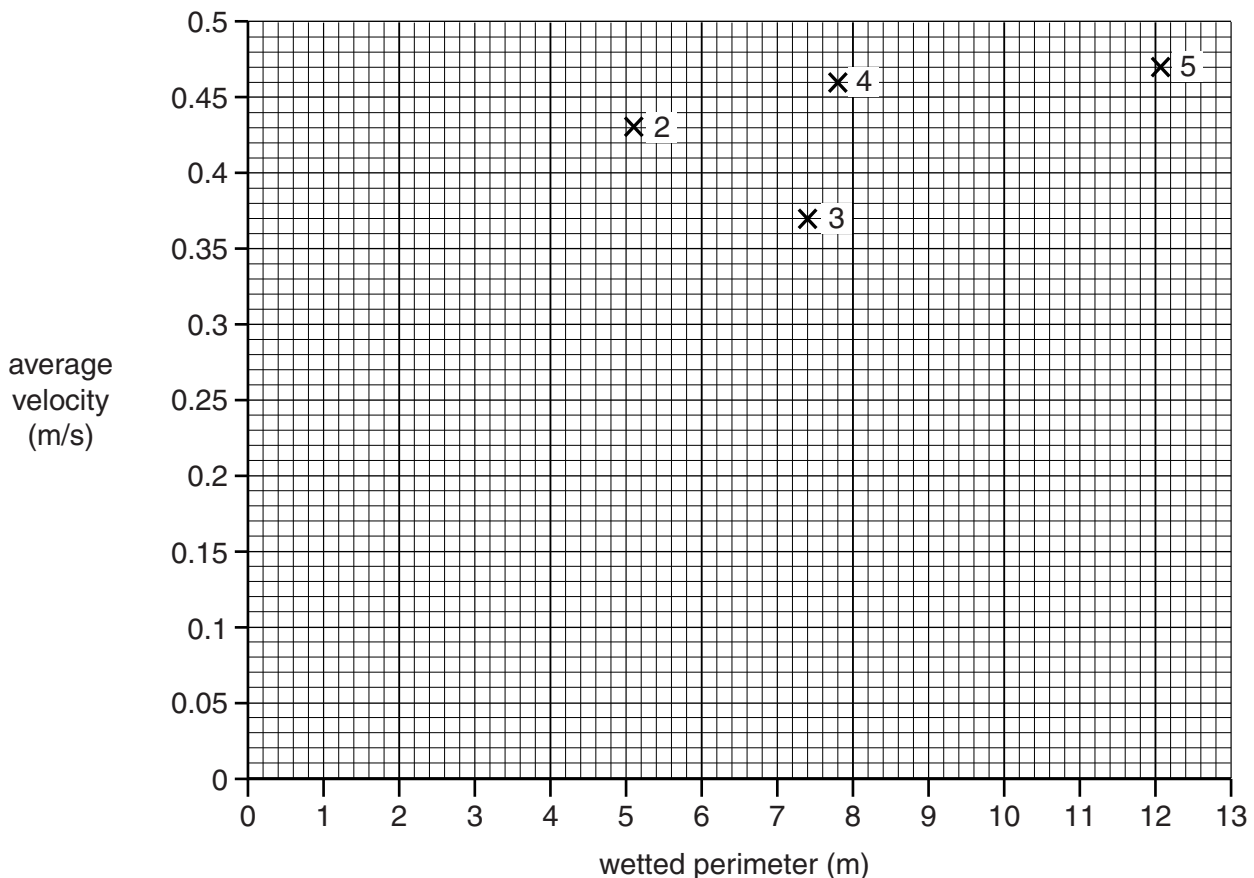


Fig. 14

(iv) Do their results support **Hypothesis 2: Velocity increases as the wetted perimeter of the river channel increases?** Support your conclusion with evidence from Table 11 and Fig. 14.

.....
.....
.....
.....
.....
.....
.....[3]

(v) Suggest **two** disadvantages of their method for measuring the wetted perimeter in a large river.

1

.....

2

.....[2]

(d) To extend their fieldwork the students investigated the impact of people on the river. State **one** impact people may have on a river. Describe how the impact could be investigated.

Impact of people

.....
.....

Investigation

.....
.....
.....
.....
.....
.....
.....[4]

[Total: 30 marks]

BLANK PAGE

Copyright Acknowledgements:

Question 2 Figure 2 © http://www.google.co.uk/publicdata/explore?ds=d5bncppjof8f9_&met_y=sp_pop_grow
Question 4 Photograph A James Harper © UCLES.
Question 8 Photograph B © www.georesources.co.uk/darentfte2.
Question 8 Photograph C © Anne Vaughan; www.rgs.org/OurWork/Schools/Fieldwork+and+local+learning/Fieldwork+techniques/Rivers.
Map Extract © Government of Zimbabwe

Permission to reproduce items where third-party owned material protected by copyright is included has been sought and cleared where possible. Every reasonable effort has been made by the publisher (UCLES) to trace copyright holders, but if any items requiring clearance have unwittingly been included, the publisher will be pleased to make amends at the earliest possible opportunity.

University of Cambridge International Examinations is part of the Cambridge Assessment Group. Cambridge Assessment is the brand name of University of Cambridge Local Examinations Syndicate (UCLES), which is itself a department of the University of Cambridge.