



UNIVERSITY OF CAMBRIDGE INTERNATIONAL EXAMINATIONS
General Certificate of Education Ordinary Level

GEOGRAPHY

2217/23

Paper 2

October/November 2012

INSERT

2 hours 15 minutes

READ THESE INSTRUCTIONS FIRST

This Insert contains Photograph A for Question 4, Figs 8, 9 and 10 and Table 3 for Question 7, and Figs 13 and 17 and Table 6 for Question 8.

The Insert is **not** required by the Examiner.

This document consists of **7** printed pages and **1** blank page.

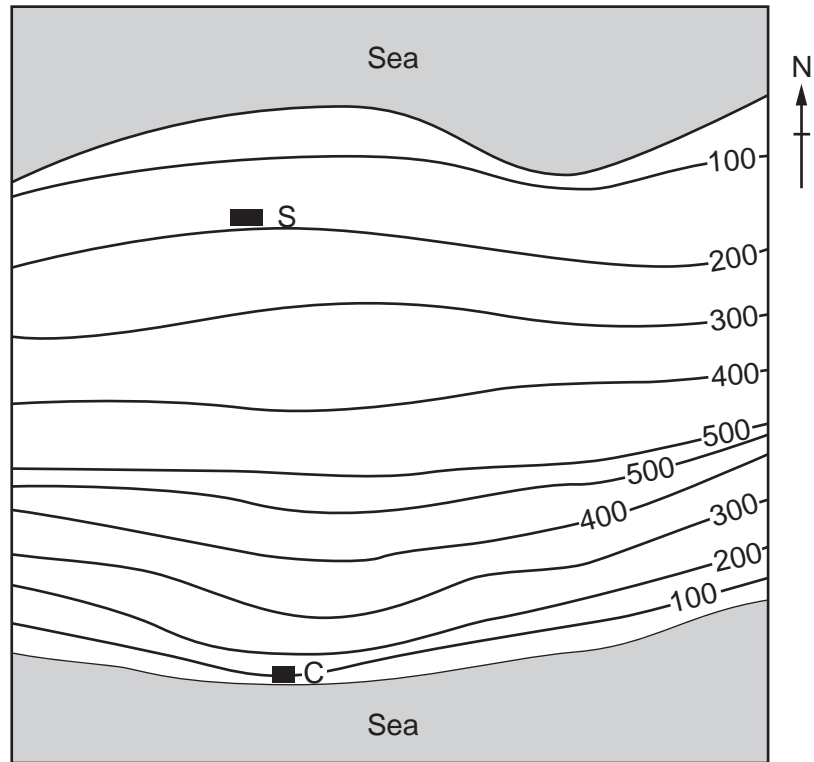


Photograph A for Question 4



Fig. 8 for Question 7

Sketch map to show location of school and coastguard station



Key

— 200 —

contour lines
(metres)

■ S

school

■ C

coastguard station

0 10 20 30 40
km

Fig. 9 for Question 7

Rain gauge

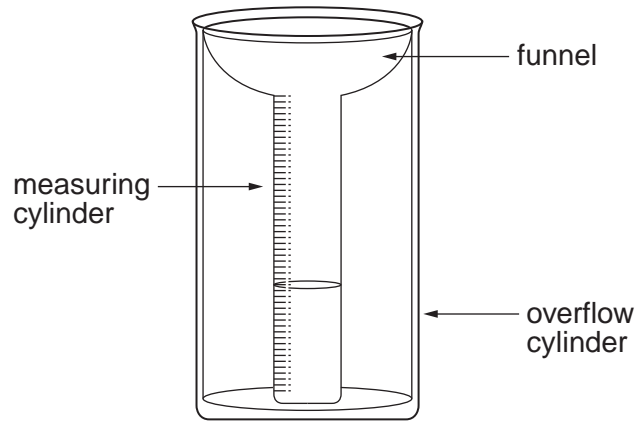


Fig. 10 for Question 7

Wind vane




Table 3 for Question 7

Weather data from coastguard station

Date	Time measurements taken	Rainfall (mm)	Wind direction
Monday 11th	09.00	6	South
Tuesday 12th	09.00	7	South west
Wednesday 13th	09.00	8	South
Thursday 14th	09.00	10	South west
Friday 15th	09.00	4	South east
Saturday 16th	09.00	8	South west
Sunday 17th	09.00	4	North west
Monday 18th	09.00	2	North
Tuesday 19th	09.00	5	North east
Wednesday 20th	09.00	1	North
Thursday 21st	09.00	3	North west
Friday 22nd	09.00	1	North
Saturday 23rd	09.00	2	North west
Sunday 24th	09.00	9	South west
Monday 25th	09.00	15	South
Tuesday 26th	09.00	13	South
Average daily rainfall		6.1	

Fig. 13 for Question 8

Sketch map to show location of survey sites

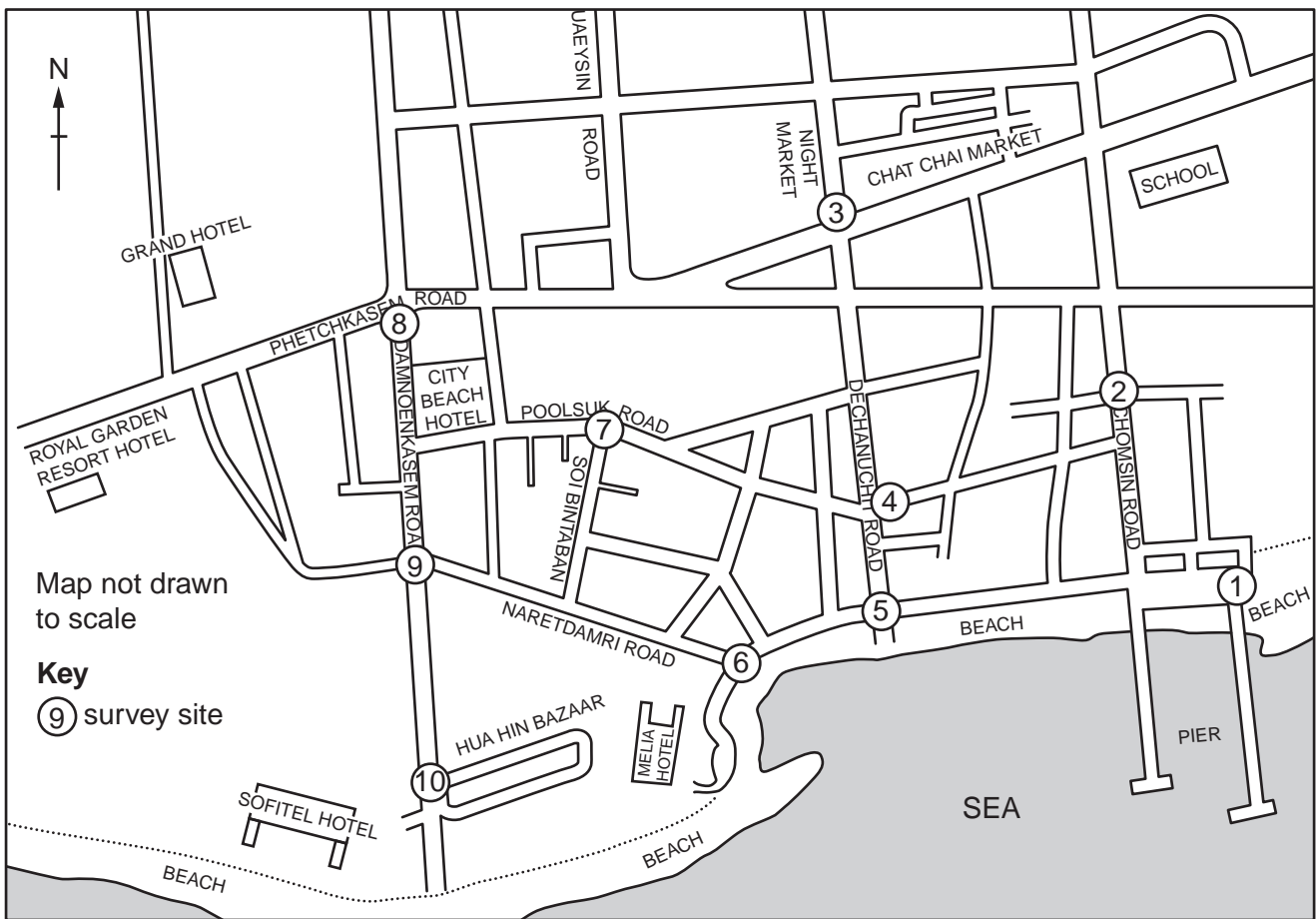


Table 6 for Question 8

Results of environmental quality survey

Survey site	1	2	3	4	5	6	7	8	9	10
Percentage of shops used mainly by tourists	12.5	22.2	44.4	50.0	60.0	85.7	66.7	61.1	83.3	92.3
Environmental score	12	15	13	16	18	25	23	20	22	26

Fig. 17 for Question 8

Local people questionnaire

We are doing a tourism survey as part of our Geography coursework. Please will you answer the following questions?

1 Do you live in Hua Hin?

Yes

No

(Finish interview if 'No')

2 Overall do you think tourism has an economic benefit in Hua Hin?

Yes

No

3 What do you think is the main benefit of tourism in Hua Hin?

Choose **one** of the following.

More job opportunities

Improved standard of living

Improved infrastructure e.g. airport, roads

Greater range of goods in shops

More modern services

Thank you for your time.

