



UNIVERSITY OF CAMBRIDGE INTERNATIONAL EXAMINATIONS  
General Certificate of Education Ordinary Level

---

**GEOGRAPHY**

**2217/11**

Paper 1

**May/June 2010**

INSERT

**1 hour 45 minutes**

---

**READ THESE INSTRUCTIONS FIRST**

This Insert contains Photographs A and B for Question 2, Photographs C and D for Question 3 and Photographs E, F and Fig. 8 for Question 5.

---

This document consists of **5** printed pages and **3** blank pages.



Photograph A for Question 2



Photograph B for Question 2





Photograph C for Question 3



Photograph D for Question 3





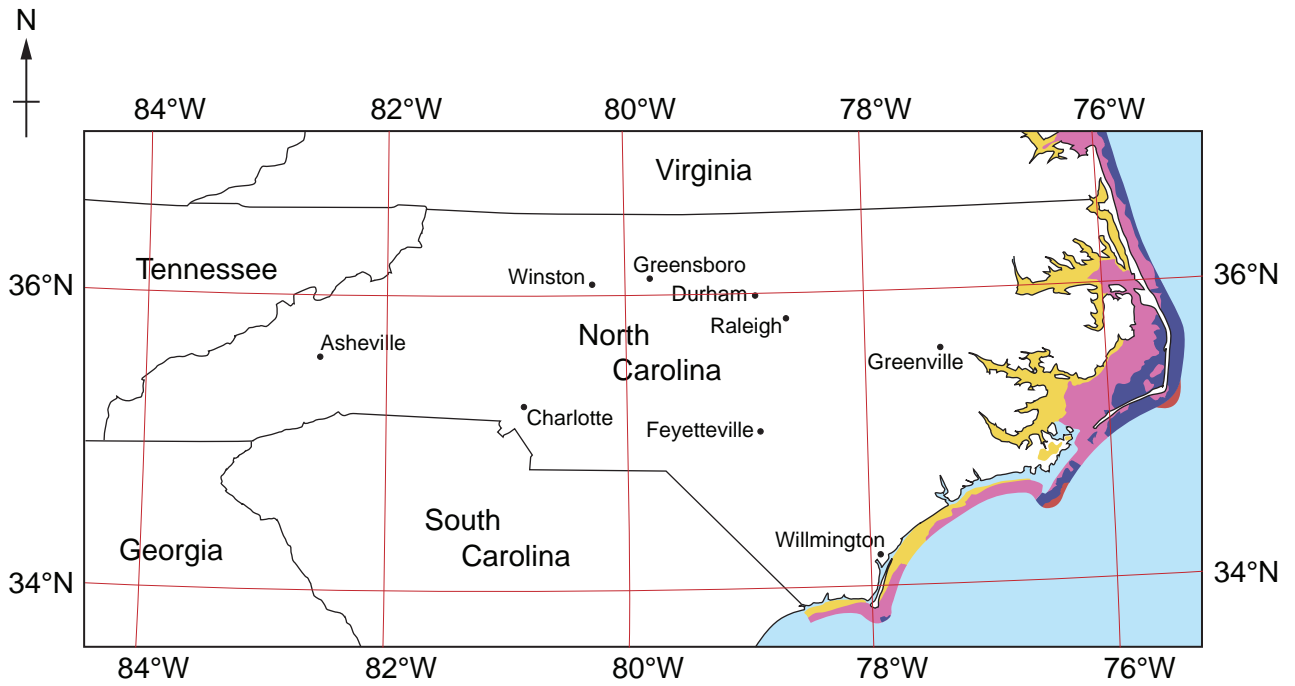
Photograph E for Question 5







Photograph F for Question 5

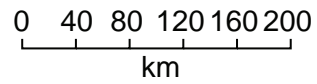


Fig. 8 for Question 5



**Key**

	wind power potential
	fair
	good
	excellent
	outstanding







---

*Copyright Acknowledgements:*

Permission to reproduce items where third-party owned material protected by copyright is included has been sought and cleared where possible. Every reasonable effort has been made by the publisher (UCLES) to trace copyright holders, but if any items requiring clearance have unwittingly been included, the publisher will be pleased to make amends at the earliest possible opportunity.

University of Cambridge International Examinations is part of the Cambridge Assessment Group. Cambridge Assessment is the brand name of University of Cambridge Local Examinations Syndicate (UCLES), which is itself a department of the University of Cambridge.