



UNIVERSITY OF CAMBRIDGE INTERNATIONAL EXAMINATIONS
General Certificate of Education Ordinary Level

GEOGRAPHY

2217/02

Paper 2

May/June 2007

INSERT

2 hours 15 minutes

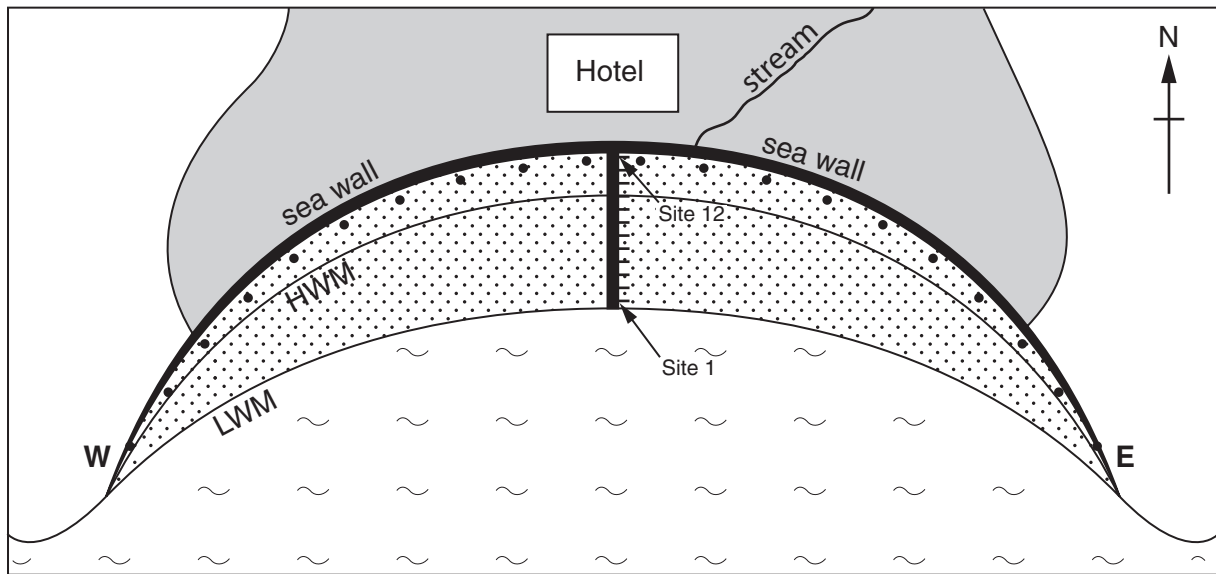
READ THESE INSTRUCTIONS FIRST




This Insert contains Fig. 9 for Question 7.

This document consists of **2** printed pages.



Sketch map of the local beach and the investigation sites



- Key**
- point for observing 'other material'
 -  urban area
 -  local beach
 - HWM high water mark
 - LWM low water mark
 -  beach material transect line

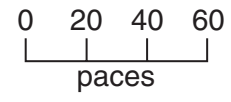


Fig. 9 for Question 7