



UNIVERSITY OF CAMBRIDGE INTERNATIONAL EXAMINATIONS
General Certificate of Education Ordinary Level

CANDIDATE
NAME

CENTRE
NUMBER

--	--	--	--	--

CANDIDATE
NUMBER

--	--	--	--



ENVIRONMENTAL MANAGEMENT

5014/01

Paper 1

October/November 2009

2 hour 15 minutes

Candidates answer on the Question Paper.

Additional Materials: Ruler
 Protractor

READ THESE INSTRUCTIONS FIRST

Write your Centre number, candidate number and name on all the work you hand in.
Write in dark blue or black pen.
You may use a soft pencil for any diagrams, graphs or rough working.
Do not use staples, paper clips, highlighters, glue or correction fluid.
DO NOT WRITE IN ANY BARCODES.

Answer **all** questions.
All questions in Section A carry 10 marks.
Both questions in Section B carry 40 marks.

At the end of the examination, fasten all your work securely together.
The number of marks is given in brackets [] at the end of each question or part question.

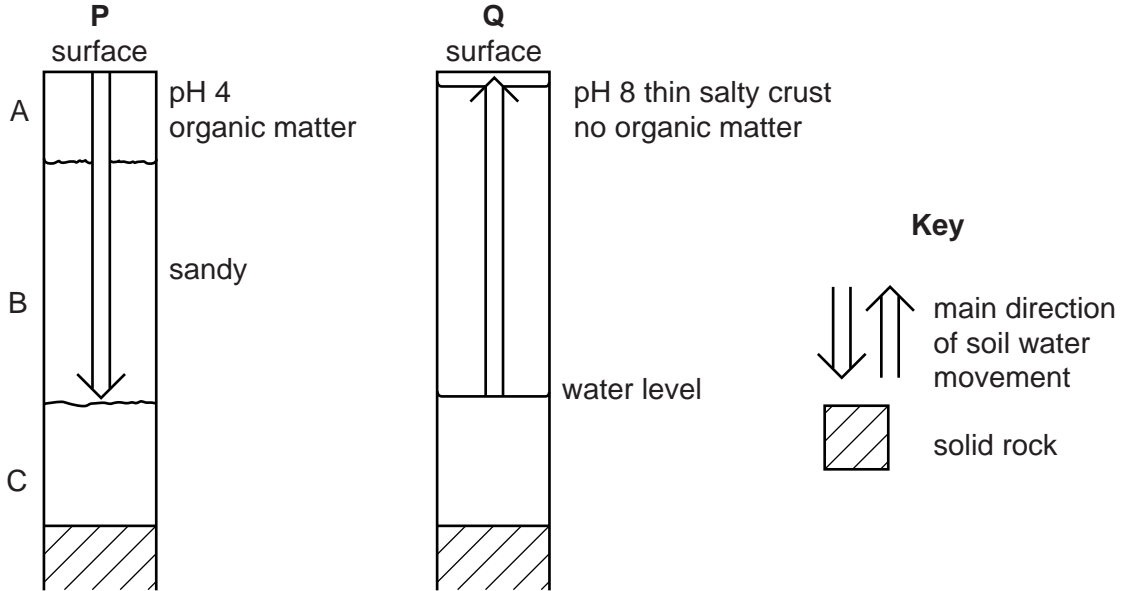
For Examiner's Use	
1	
2	
3	
4	
5	
6	
Total	

This document consists of **22** printed pages and **2** blank pages.



Section A

1 (a) Look at the soil diagrams, **P** and **Q**, showing soils from different parts of the world.



(i) Which soil is the most acidic? [1]

(ii) On profile **Q** shade the part of the soil which has no air content. [1]

(iii) Which soil is in an area with a desert climate? Explain your answer.
.....
..... [1]

(b) Explain how human activity causes salination (salinization) of soils.
.....
.....
.....
.....
.....
..... [4]

(c) Why is soil **P** likely to cause problems for crop farmers?

.....

.....

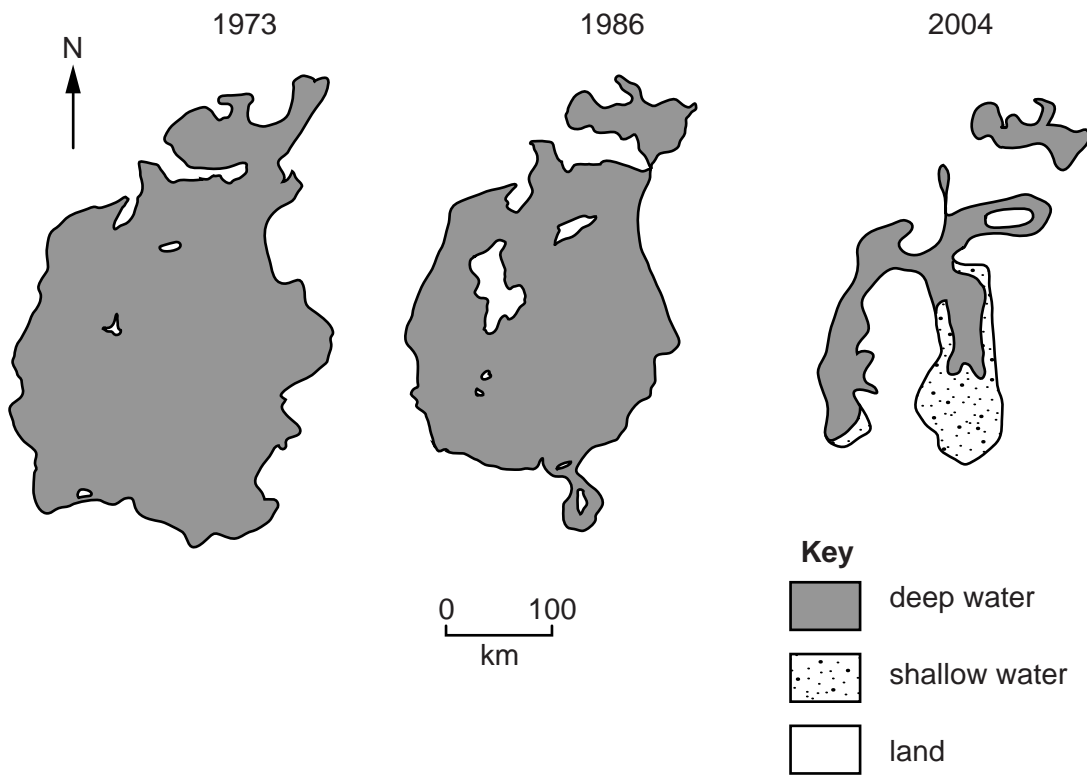
.....

.....

.....

..... [3]

2 (a) Look at the maps showing the size of the Aral Sea, an area of freshwater in Asia, in 1973, 1986 and 2004.



(i) Describe the changes which have taken place since 1973.

.....

.....

.....

.....

.....

..... [3]

(ii) Suggest possible reasons for the changes.

.....
.....
.....
.....
..... [3]

(b) (i) What is El Nino?

.....
.....
.....
.....

(ii) Why does it alter rainfall amounts in Peru and other areas of the world?

.....
.....
.....
..... [4]

3 (a) (i) Name an instrument used to measure atmospheric pressure.

..... [1]

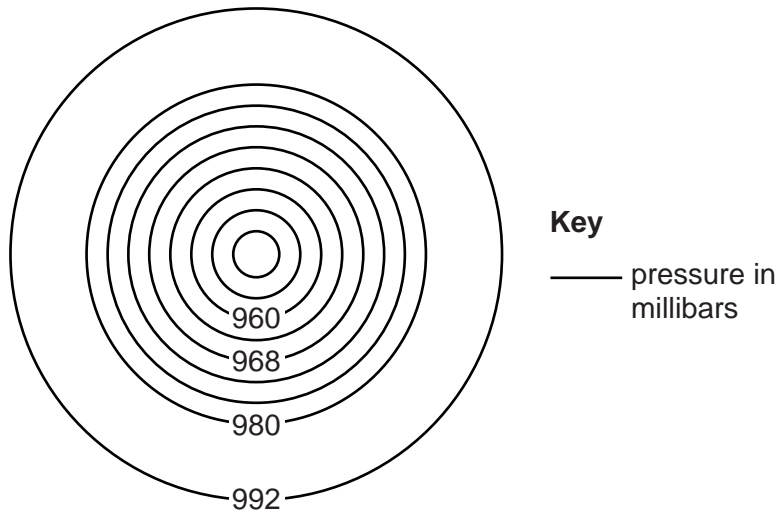
(ii) Read the description of part of an instrument which measures atmospheric pressure:

“It contains a collapsible metal box which is partly evacuated of air. When pressure rises, the top of the box bends in”.

Explain why a change in air pressure causes this change.

..... [1]

(b) (i) The diagram shows isobar lines in a pressure system known as a cyclone.



On the diagram, shade the area with the lowest pressure. [1]

(ii) Complete the diagram by drawing in the isobar lines between 980 and 992 mb. [1]

(iii) Does the diagram show that the winds will be weak or strong? Explain your answer.

.....
..... [1]

(iv) What features of a cyclone cause damage?
..... [2]

(v) Explain how improved weather forecasting can reduce the impact of a cyclone.
.....
.....
.....
.....
..... [3]

4 (a) (i) Look at the photograph, which shows an oil refinery in an area of natural beauty.

For
Examiner's
Use



State two features of the oil refinery which people could consider to be ugly.

.....
..... [2]

(ii) For what **other** reasons could people object to the construction of an oil refinery at this location?

.....
.....
.....
.....
..... [3]

(b) Many tourists visit this area. Suggest one reason why they come.

.....
..... [1]

(c) Suggest why the Government and Local Authorities allowed an oil refinery to be built in this coastal area, even though it is important for tourism.

*For
Examiner's
Use*

.....

.....

.....

.....

.....

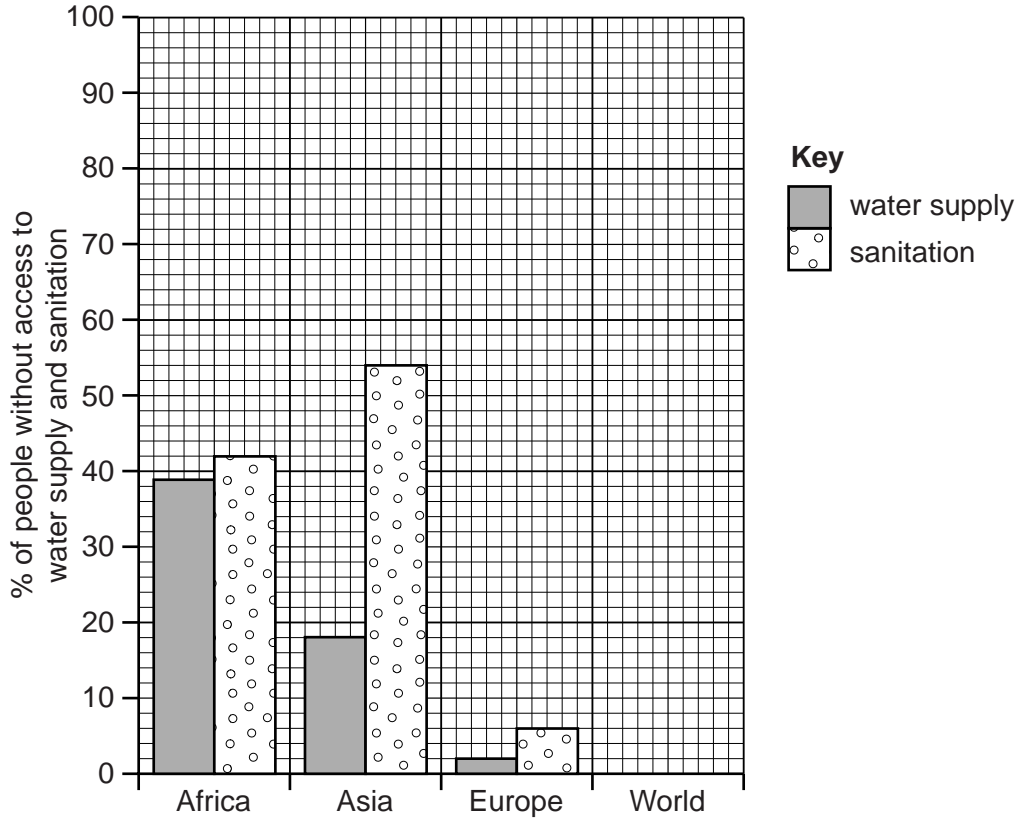
.....

..... [4]

Section B

For
Examiner's
Use

- 5 (a) The graph shows percentages of people **without** access to water supply and sanitation in three continents.



- (i) Average percentages for the World
 without water supply 18
 without sanitation 40

Add the percentages for the World to the graph.

[2]

- (ii) Compare the percentages for the World with those for each continent.

Africa

.....

Asia

.....

Europe

.....

[3]

(iii) State one reason why more people in the world have access to water supply than to sanitation.

.....
.....
..... [2]

(b) (i) If people do not have access to a piped water supply, from where do they obtain their drinking water? Name one source.

..... [1]

(ii) How safe, for drinking, is the water from this source? Explain your answer.

.....
.....
..... [2]

(c) One method for a country to increase supplies of clean water is desalination (extracting fresh water from sea water).

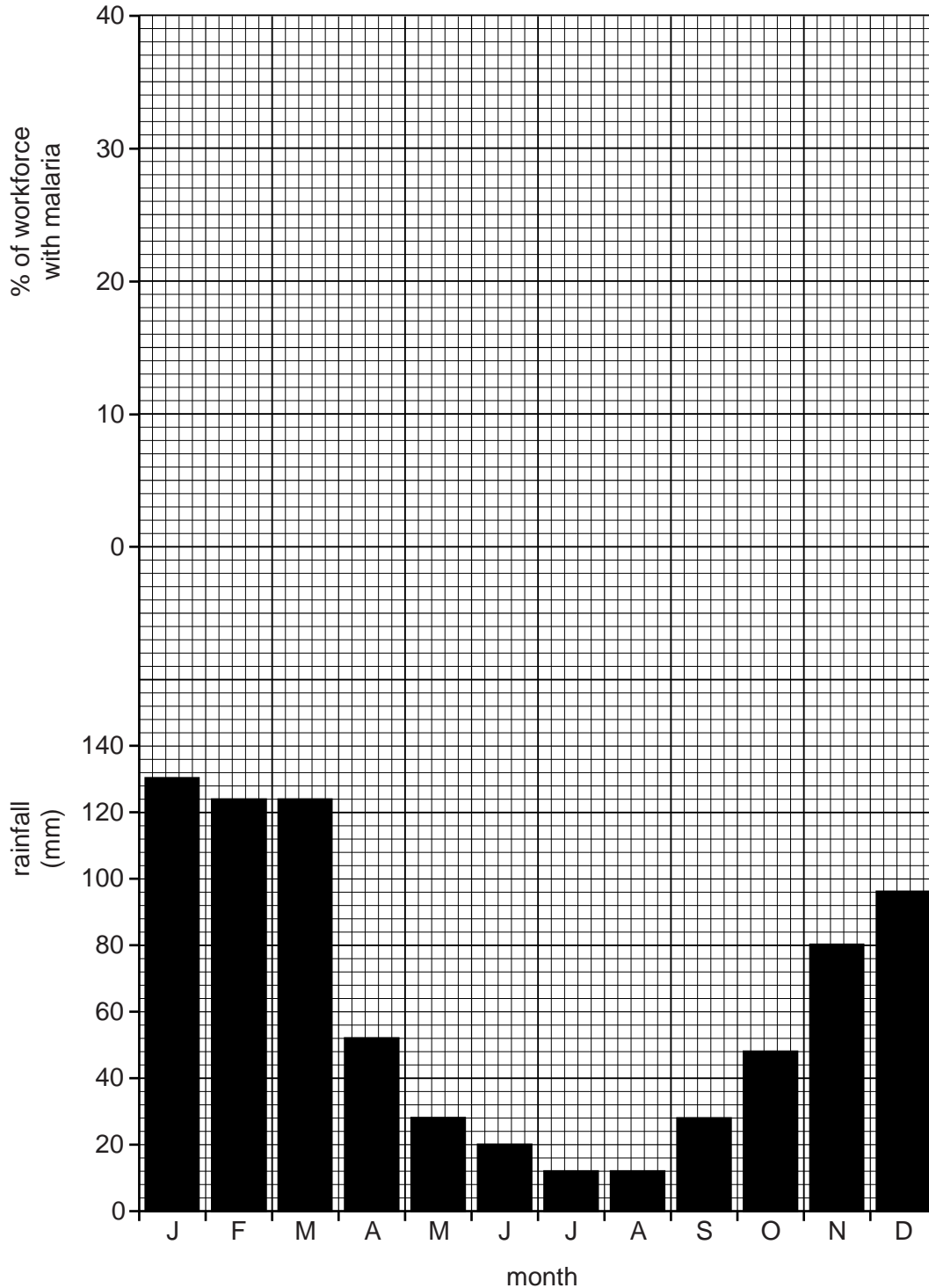
Why is desalination widely used in some Middle Eastern countries, especially Saudi Arabia, UAE and Kuwait, but rarely used elsewhere?

.....
.....
.....
.....
..... [3]

(d) Over three million people in the world die each year from water-related diseases. Malaria is the largest killer.

For
Examiner's
Use

(i) The graph shows rainfall for Maputo, the capital of Mozambique. It is located 25° south of the Equator in Africa.



The percentage of the workforce with malaria at a factory in Maputo varied during the year.

Percentage of workforce with malaria											
J	F	M	A	M	J	J	A	S	O	N	D
6	17	19	22	25	13	11	8	11	8	5	4

Draw a line graph above the rainfall graph to show these percentages for Maputo. [3]

(ii) When is the wet season in Maputo? [1]

(iii) At what time of year are there most cases of malaria among the workforce? [1]

(iv) How and why does the pattern of rainfall during the year affect the percentage of workers with malaria? Explain as fully as you can. [3]

(e) Information about malaria

Deaths per 100,000 people with malaria

	1900	1925	1950	1975	2000
In the world	200	170	50	20	25
In Africa	220	210	180	120	160

- * 500 million cases a year world-wide
- * 2–3 million people die from it every year
- * At least 1 million deaths are in Africa
- * Over 2 billion people (1 in 3 in the world) are at risk
- * Most sufferers contract malaria two or three times a year

(i) Describe how the information shows that malaria is a more serious problem in Africa than in the rest of the world. [3]

(ii) Malaria is an important factor keeping people and countries in Africa poor. State two ways it does this.

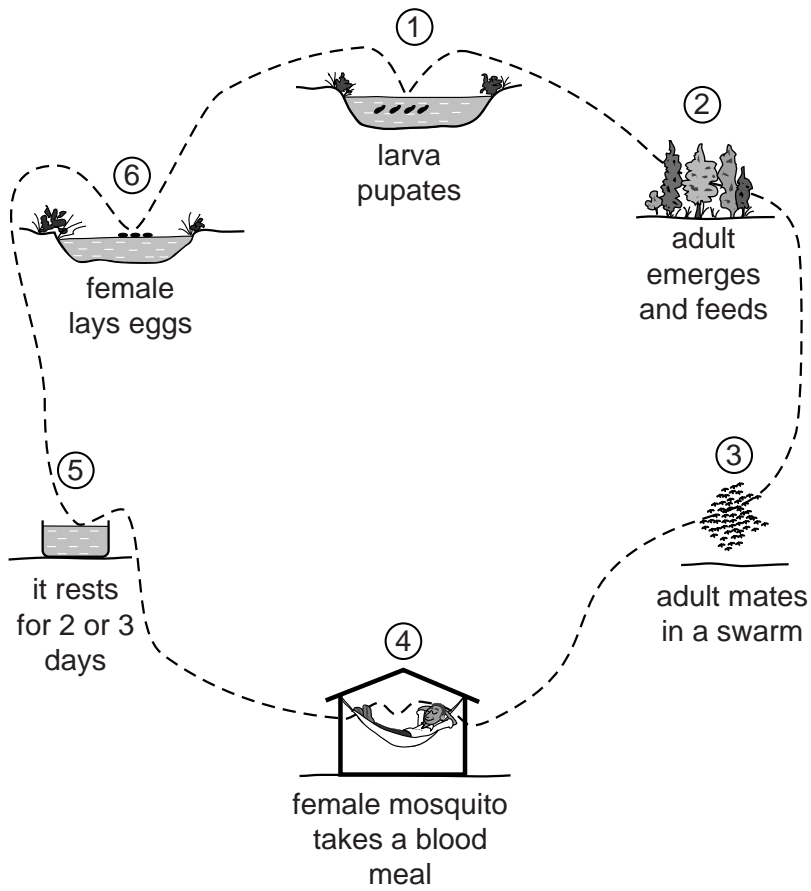
.....

.....

.....

..... [2]

(f) The diagram shows how the female mosquito spreads malaria.



(i) Why is malaria a water-bred disease?

.....

..... [1]

(ii) Details about the two early methods of controlling malaria are given below.

Method 1 – Use of cheap medicines, especially chloroquine

Problem: so widely used to treat tropical fevers that mosquitoes have developed resistance to it.

Method 2 – Spraying the pesticide DDT on the breeding grounds; only small amounts needed to be used, yet it was highly effective in killing mosquitoes

Problem: its careless use killed many fish as well as beneficial insects and birds. It has such a bad name that many African governments are now afraid to use it.

For each method, name the stage in the diagram which it was trying to control.

Method 1

Method 2 [2]


(iii) For as long as they were effective, both methods were suitable for use in poor African countries. Explain why.

.....
.....
.....
..... [2]

(iv) Methods for improved malaria control in Africa are available.

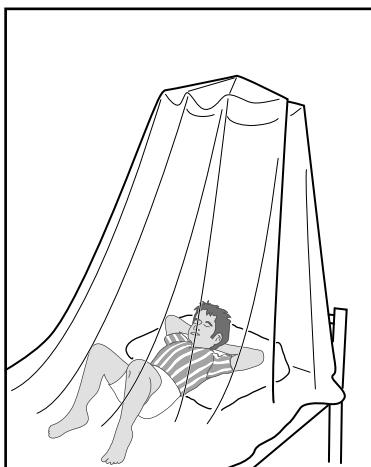
For
Examiner's
Use

A



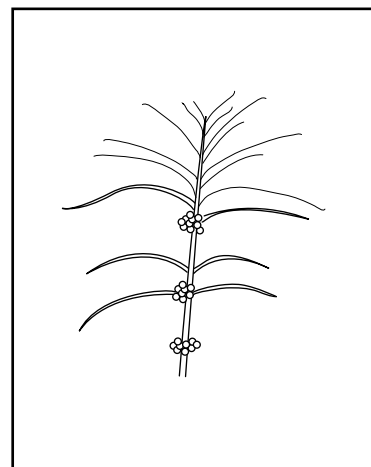
Spraying the inside and outside of huts with DDT.

B



Sleeping under mosquito nets treated with insecticide; these are re-treated with insecticide every six months.

C



Use the drug artemisia, made from a Chinese herb – it cures 90% of patients within 3 days at a cost of up to US\$10 per person; acting quickly reduces the chance of drug resistance developing. It is in short supply.

Describe how these methods are improvements upon the two early methods already named.

.....

.....

.....

.....

.....

.....

..... [3]

(g) Read the newspaper reports below.

For
Examiner's
Use

A From South Africa

DDT can work

In 1996 the South African government, under pressure from environmental groups both at home and abroad, abandoned the use of DDT. The number of cases of malaria jumped from around 10,000 per year to more than 60,000 by 2000.

When the government re-introduced DDT spraying in the middle of 2000, the results were dramatic. By the middle of 2001, the number of cases of malaria was cut in half, and deaths from it fell from 432 to 146.

B From Kenya

Project to distribute free ITNs hailed as a great success

In 2003 Kenya's Ministry of Health began the distribution of 13.5m ITNs (insecticide treated nets). The cost was kept low by government subsidies. Even so, 3.4m had to be given away free to the poorest, unable to afford even subsidised nets.

Partly funded by the WHO (World Health Organisation), this campaign was better supported by education than previous ones. In the past, nets that were given away free were re-sold, or used for fishing, or thrown away instead of being re-treated when the insecticide wore off.

Four years later, early results show that childhood deaths from malaria have fallen by almost 50%. Three hospitals along the malaria-prone coast reported a 57% drop in malaria admissions by 2006.

(i) Describe the evidence which shows that the improved malaria control methods can work.

.....
.....
.....
..... [2]

(ii) Suggest reasons why many African countries are slow to use these new methods.

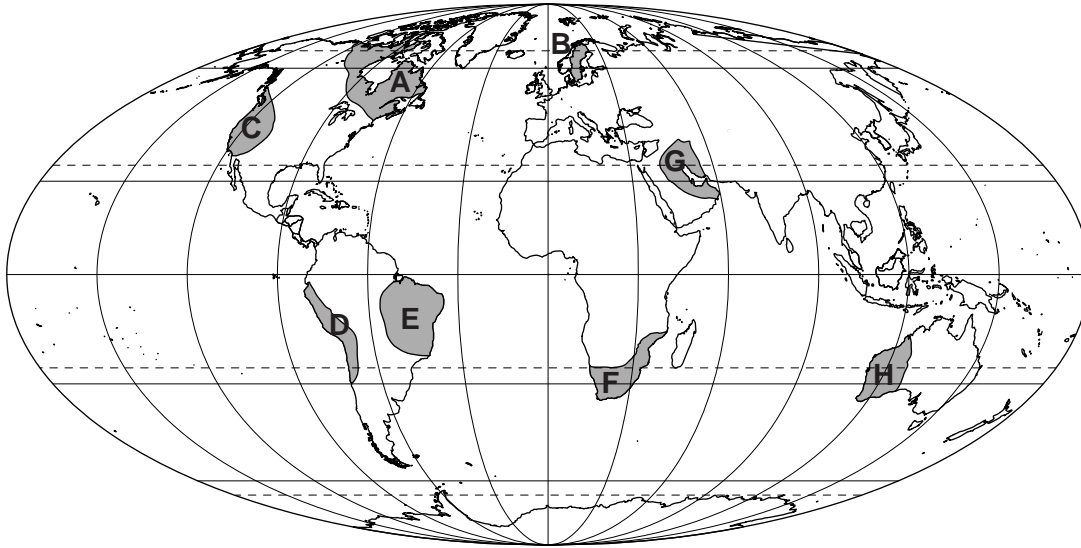
.....
.....
.....
.....
.....
.....
.....
..... [4]

[Total: 40 marks]

6 Some parts of the Earth's surface are mineral-rich.

For
Examiner's
Use

Some mineral-rich regions



Key
 mineral-rich

(a) (i) Minerals from these regions include oil, copper, tin, diamonds, gold, iron-ore, nickel and uranium.

Name two of the regions shown on the map. From the list, name one mineral mined in the region.

Letter Name of region Mineral

Letter Name of region Mineral [4]

(ii) Most of the minerals in the list have more than one use; sometimes their uses are very different. Elaborate on this statement by choosing one mineral and naming some of its uses.

.....

 [2]

(iii) Explain why some parts of the Earth's surface are mineral-rich while others are mineral-poor.

.....

.....

.....

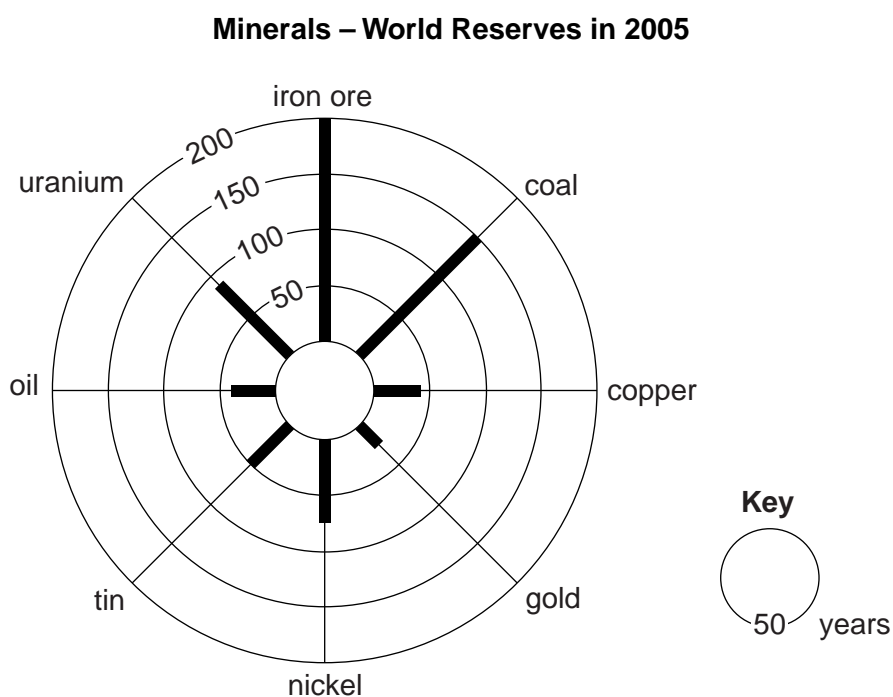
.....

.....

.....

..... [3]

(b) The diagram shows how long the known reserves of eight minerals are expected to last.



(i) How many years are reserves of nickel expected to last?

..... [1]

(ii) Explain why all these minerals will eventually run out.

.....

.....

.....

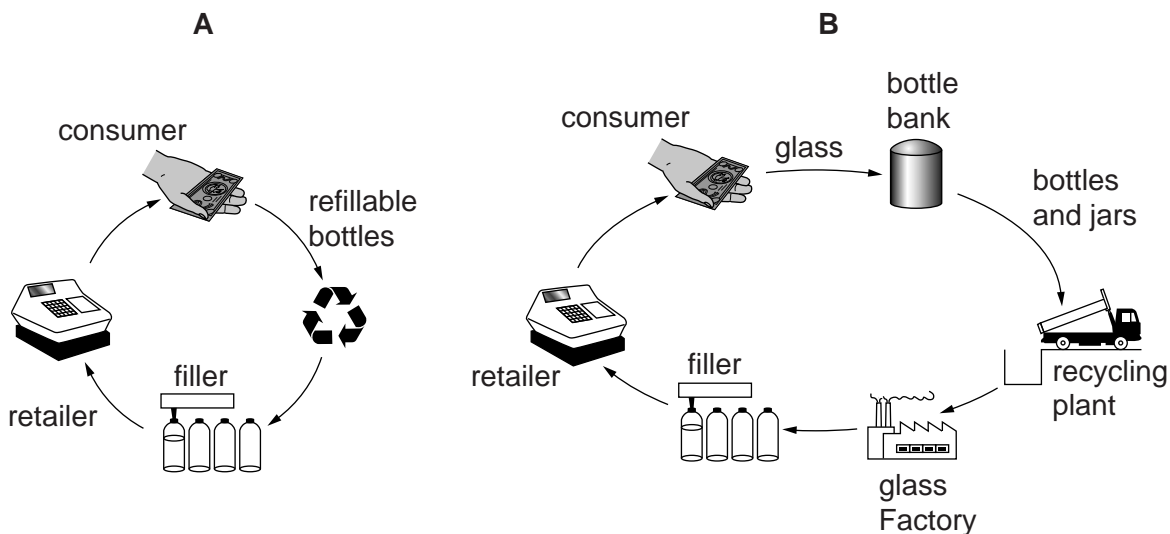
.....

.....

..... [3]

(c) Two ways to extend the length of time before natural resources run out are shown in the flow diagrams below.

For
Examiner's
Use



(i) Describe how each one increases the number of years before natural resources run out.

.....

.....

.....

.....

(ii) Which one is better for the environment? Explain your choice.

.....

.....

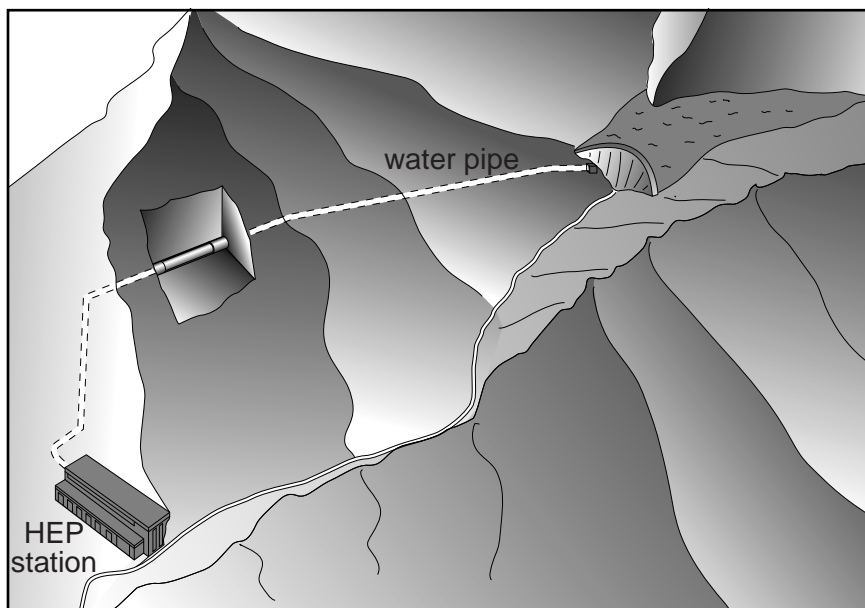
.....

..... [4]

- (d) Another way of extending the life of natural resources is to develop and use alternatives. Hydro-electric power (HEP) is an example of an alternative energy source.

For
Examiner's
Use

Hydro-electric power station in the Alps



- (i) Why is this a good location for generating hydro-electric power?

.....
.....
.....
..... [2]

- (ii) Explain what people have done to enable energy to be generated here.

.....
.....
.....
..... [3]

- (iii) In a location like this, the cost of making electricity from HEP is almost the same as that from oil. State two advantages of HEP over oil for generating electricity.

.....
.....
..... [2]

(iv) Oil provides 40% of world energy, compared with only 6% from HEP. Why is the difference so great?

.....

.....

.....

.....

.....

.....

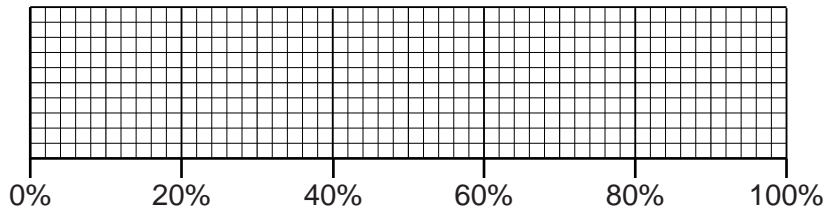
..... [3]

(e) Production of biofuels from crops such as sugar cane, palm oil and corn (maize) is increasing. The fuel from them can be used as alternatives to petrol and diesel in cars and trucks.

Biofuel production in 2005
(percentage of world total)

Brazil	41
USA	39
EU (European Union)	16
China	3
India	1

Complete a divided bar graph to show biofuel production in 2005.



[3]

(f) Some information about biofuel production in Brazil and the USA is given below.

For
Examiner's
Use

	Brazil (from sugar cane)	USA (from corn)
Average cost of production of ethanol, compared with petrol (petrol = 1.0)	0.4	0.7
Fossil fuel input (transport and processing) needed for making ethanol (%)	11	70
Carbon dioxide reduction compared with oil (%)	90	20
Ethanol output from one hectare of land (equivalent litres of petrol)	3,000 – 6,000	1,500 – 3,000

(i) Which crop makes cheaper ethanol?

..... [1]

(ii) Give one reason why it is cheaper.

.....
..... [1]

(iii) In which one of the two countries is the environmental impact from ethanol lower? Explain your choice.

.....
.....
.....
.....
..... [3]

Copyright Acknowledgements:

Permission to reproduce items where third-party owned material protected by copyright is included has been sought and cleared where possible. Every reasonable effort has been made by the publisher (UCLES) to trace copyright holders, but if any items requiring clearance have unwittingly been included, the publisher will be pleased to make amends at the earliest possible opportunity.

University of Cambridge International Examinations is part of the Cambridge Assessment Group. Cambridge Assessment is the brand name of University of Cambridge Local Examinations Syndicate (UCLES), which is itself a department of the University of Cambridge.