

$$\textcircled{1} \quad V = 10000 e^{-pt}$$

i) when $t=0$

$$V = 10,000(1)$$

Ans = \$10,000 ← must have \$.

ii) when $t=12$, $V=4000$

$$4000 = 10000 e^{-12p}$$

$$0.4 = e^{-12p}$$

$$\ln 0.4 = \ln e^{-12p}$$

$$-0.91629 = -12p$$

$$p = 0.076357$$

$$\therefore V = 10,000 e^{-0.076357t}$$

when $t=18$

$$V = 10,000 e^{(-0.076357)(18)}$$

$$= 2529.847$$

Ans \approx \$2529.85

(ii) when $V=1000$

$$1000 = 10,000 e^{-0.076357t}$$

$$\ln 0.1 = \ln e^{-0.076357t}$$

$$-2.30258 = -0.076357t$$

$$t = 30.155$$

\approx 30 (nearest month)

Ans : The age of the motorcycle is 30 months.

$$2x^2 - 4x + 3 = 0$$

$$x^2 - 2x + \frac{3}{2} = 0$$

$$\alpha + \beta = 2$$

$$\alpha\beta = \frac{3}{2}$$

$$\text{Sum of new roots} \\ = (\alpha^2 + 2) + (\beta^2 + 2)$$

$$= \alpha^2 + \beta^2 + 4$$

$$= 1 + 4$$

$$\text{Prod of new roots} \\ = (\alpha^2 + 2)(\beta^2 + 2)$$

$$= \alpha^2\beta^2 + 2\alpha^2 + 2\beta^2 + 4$$

$$= \left(\frac{3}{2}\right)^2 + 2(\alpha^2 + \beta^2) + 4$$

$$= \frac{9}{4} + 2(1) + 4$$

$$= \frac{33}{4}$$

$$\therefore x^2 - 5x + \frac{33}{4} = 0$$

$$\underline{\text{Ans}} \quad 4x^2 - 20x + 33 = 0$$

$$(\alpha + \beta)^2 = \alpha^2 + 2\alpha\beta + \beta^2$$

$$(2)^2 = \alpha^2 + \beta^2 + 2\left(\frac{3}{2}\right)$$

$$\alpha^2 + \beta^2 = 1$$

3i) L.H.S

$$= \tan A + \cot A$$

$$= \frac{\sin A}{\cos A} + \frac{\cos A}{\sin A}$$

$$= \frac{\sin^2 A + \cos^2 A}{\sin A \cos A}$$

$$= \frac{1}{\frac{\sin 2A}{2}} *$$

$$= \frac{2}{\sin 2A}$$

$$= 2 \operatorname{cosec} 2A$$

= R.H.S (proven).

$$\sin 2A = 2 \sin A \cos A$$

$$\sin A \cos A = \frac{\sin 2A}{2} *$$

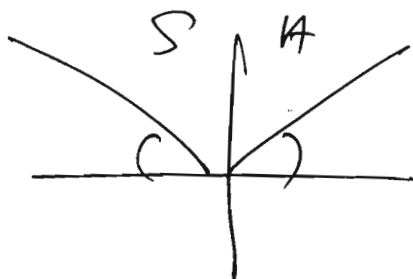
$$\tan A + \cot A = 3$$

$$2 \operatorname{cosec} 2A = 3$$

$$\operatorname{cosec} 2A = \frac{3}{2}$$

$$\sin 2A = \frac{2}{3}$$

$$\text{Reference } \angle = 41.81^\circ$$



$$0^\circ < A < 360^\circ$$

$$0^\circ < 2A < 720^\circ$$

$$2A = 41.81^\circ, 138.19^\circ, \\ 401.81^\circ, 498.19^\circ$$

$$A = 20.9^\circ, 69.1^\circ, 200.9^\circ \text{ or } 249.1^\circ$$

Ans

$$4 \text{ii)} \quad 2 + \log_3(3x-7) = \log_3(2x-3)$$

$$\log_3(2x-3) - \log_3(3x-7) = 2$$

$$\log_3\left(\frac{2x-3}{3x-7}\right) = 2$$

$$\frac{2x-3}{3x-7} = 3^2$$

$$2x-3 = 9(3x-7)$$

$$2x-3 = 27x-63$$

$$60 = 25x$$

$$x = 2.4$$

Ans

$$\text{ii)} \quad 3 \log_5 y - \log_4 5 = 2$$

$$3 \log_5 y - \frac{\log_5 5}{\log_5 4} = 2$$

$$3 \log_5 y - \frac{1}{\log_5 4} = 2$$

$$\text{Let } \log_5 y = a$$

$$3a - \frac{1}{a} = 2$$

$$3a^2 - 2a - 1 = 0$$

$$(3a+1)(a-1) = 0$$

$$a = -\frac{1}{3} \quad \text{or} \quad a = 1$$

$$\log_5 y = -\frac{1}{3} \quad \text{or} \quad \log_5 y = 1$$

$$y = 5^{-\frac{1}{3}} \quad \text{or} \quad y = 5^1$$

Ans

$$y = 0.585 \quad \text{or} \quad y = 5$$

$$\begin{aligned}
 \textcircled{5} \text{ i) } f(x) &= 2(x^2 - 3x + 1)(x+1)(x-2) \\
 &= 2(x^2 - 3x + 1)(x^2 - x - 2) \\
 &= 2(x^4 - \cancel{x^3} - 2x^2 - \cancel{3x^3} + 3x^2 + 6x + \cancel{x^2} - \cancel{x^2}) \\
 &= 2(x^4 - 4x^3 + 2x^2 + 5x - 2)
 \end{aligned}$$

Test Ans $f(x) = 2x^4 - 8x^3 + 4x^2 + 10x - 4$

whether

$$f(-1) = 0$$

and

$$f(2) = 0.$$

Can't be botched

ii) $f(x) = 0$

~~$(x+1)(x+1)$~~

$$2(x+1)(x-2)(x^2 - 3x + 1) = 0$$

$$x = -1, x = 2 \quad \vee \quad x^2 - 3x + 1 = 0$$

$$x = \frac{-(-3) \pm \sqrt{(-3)^2 - 4(1)(1)}}{2(1)}$$

$$= \frac{3 \pm \sqrt{5}}{2}$$

$$= \frac{3 + \sqrt{5}}{2} \quad \vee \quad \frac{3 - \sqrt{5}}{2}$$

~~$x = -1, x = 2, x = \frac{3 + \sqrt{5}}{2}, x = \frac{3 - \sqrt{5}}{2}$~~

~~$x = -1, x = 2, x = \frac{3 + \sqrt{5}}{2}, x = \frac{3 - \sqrt{5}}{2}$~~

Ans 4 real roots.

iii) $f\left(\frac{1}{2}\right) = 2\left(\frac{1}{2}\right)^4 - 8\left(\frac{1}{2}\right)^3 + 4\left(\frac{1}{2}\right)^2 + 10\left(\frac{1}{2}\right) - 4$

$$= \frac{1}{8} - 1 + 1 + 5 - 4$$

Ans $= \frac{1}{8} \neq 0 \Rightarrow \frac{1}{8}$

(i) $AE = CE$ (tangents to circles)

$EO = EO$ (common line)

$AO = CO$ (Radii of circle)

$\therefore \triangle AEO$ and $\triangle CEO$ are congruent. (SSS)

State the reason.

(ii) $DB^2 = AD^2 + AB^2$

222 waste of time

$\hat{EAO} = \hat{DAB}$ (common \angle)

$\hat{AOE} = \frac{1}{2} \hat{AOC}$ ($OAEC$ is a kite as A and C are tangents)

$\hat{DBA} = \frac{1}{2} \hat{AOC}$ (\angle at centre = $2 \times$ \angle at circumference)

$\therefore \hat{AOE} = \hat{DBA}$ (from ① & ②)

$\hat{AEO} = \hat{ADB}$ (\angle sum of \triangle s)

$\therefore \triangle AEO$ and $\triangle ADB$ are similar

Since $\frac{OA}{AB} = \frac{1}{2}$ (similar)

$\therefore \frac{AE}{AD} = \frac{1}{2}$

$AE = \frac{1}{2} AD$

$\therefore E$ is the midpoint of AD . (proven)

7) $f(x) = 4\cos 2x - 2$

Ans i) 4

Ans ii) 180°

iii) When $\cos 2x = -1$ $0^\circ \leq 2x \leq 360^\circ$

$$2x = 180^\circ$$

$$x = 90^\circ$$

$$y = 4(-1) - 2$$

$$= -6$$

Ans Co-ordinate of the min pt is $(90^\circ, -6)$

iv) When $y = 0$

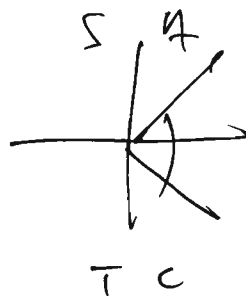
$$4\cos 2x - 2 = 0$$

$$\cos 2x = \frac{1}{2}$$

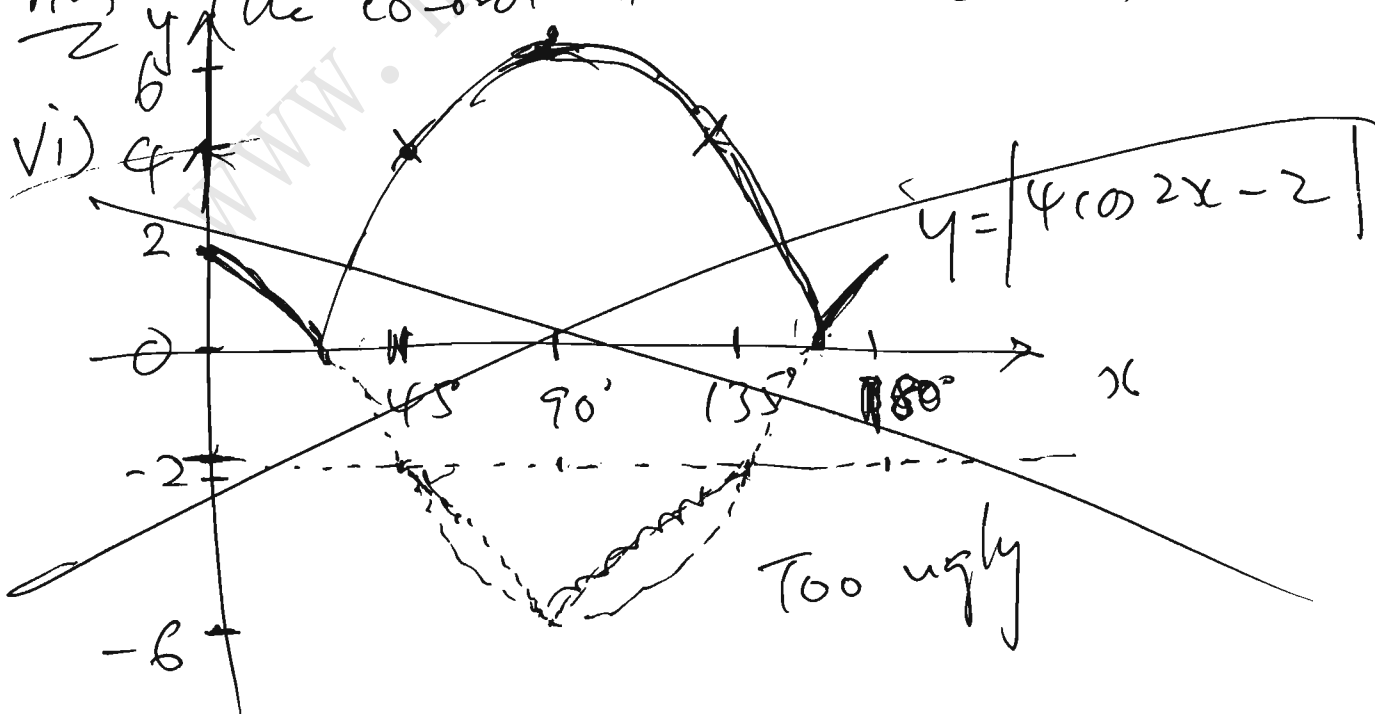
\Rightarrow Basic $\Delta = 60^\circ$

$$2x = 60^\circ, 300^\circ$$

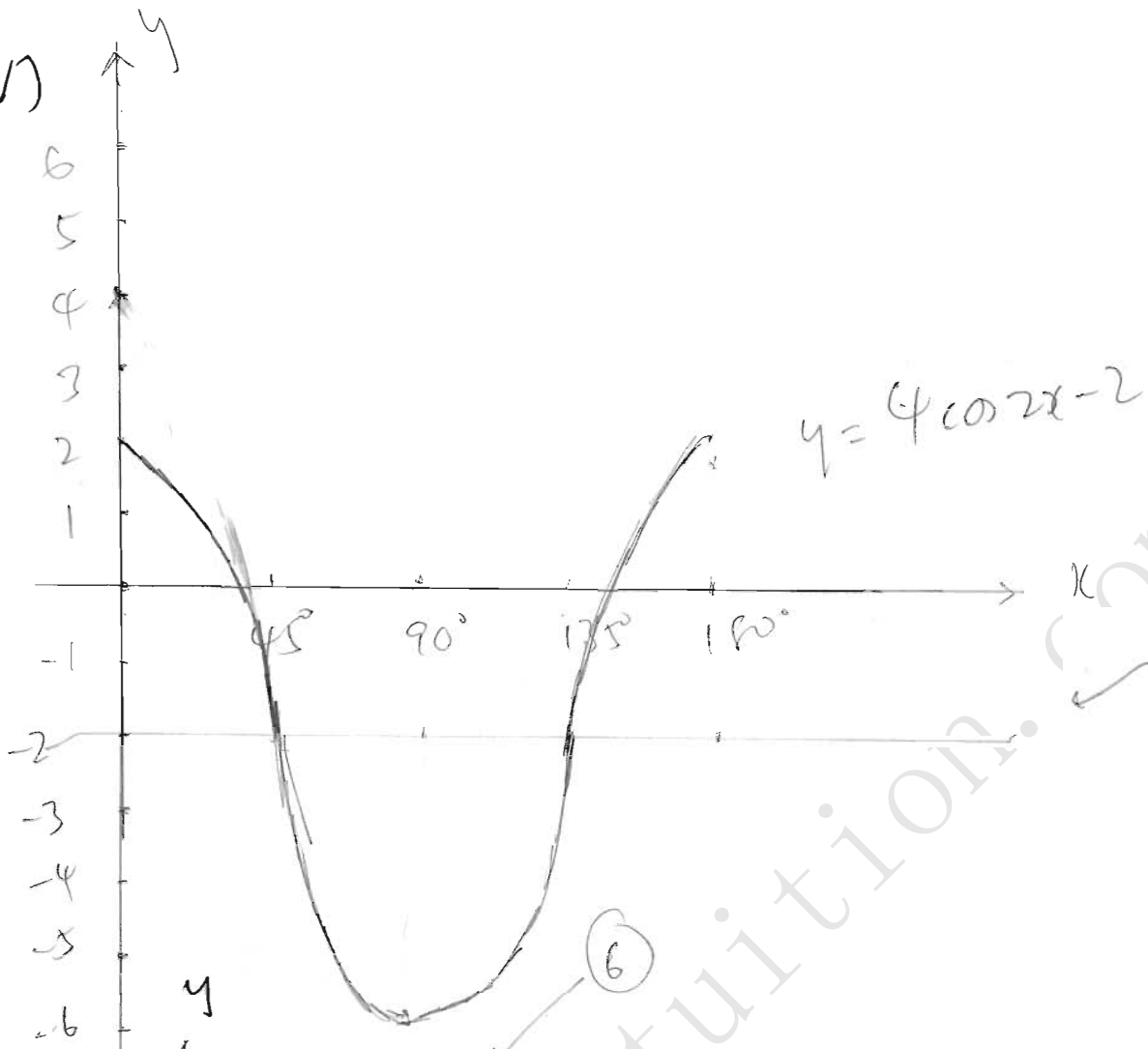
$$x = 30^\circ \text{ or } 150^\circ$$



Ans v) The co-ordinates are $(30^\circ, 0)$ and $(150^\circ, 0)$

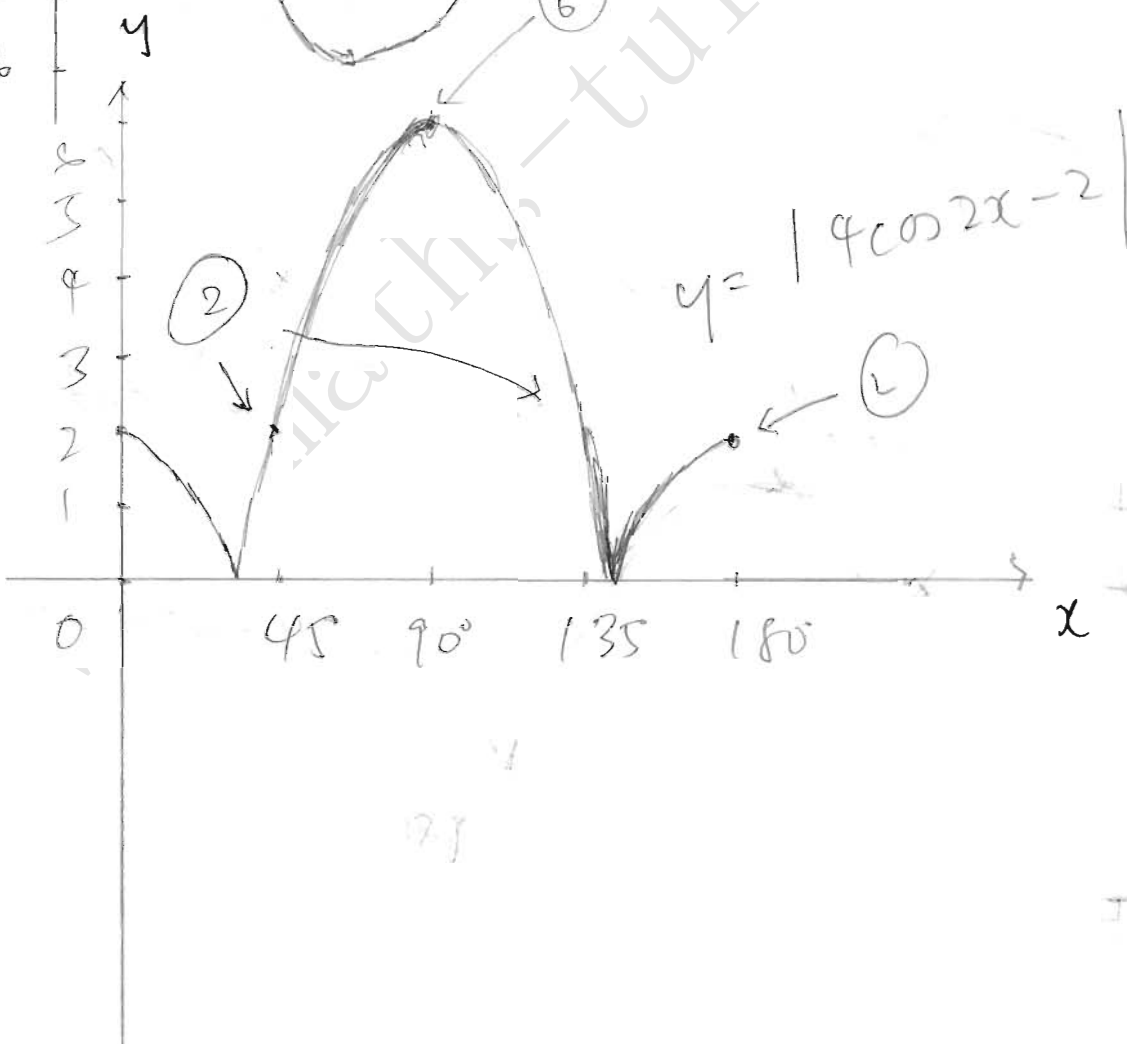


7v)



Must not
away

vi)



$$f) y = x^3 - ax + b$$

$$\frac{dy}{dx} = 3x^2 - a$$

$$\text{At } (2, 0), \frac{dy}{dx} = 0$$

$$0 = 3(2)^2 - a$$

$$a = 12$$

$$y = x^3 - 12x + b$$

$$\text{At } (2, 0)$$

$$0 = 8 - 24 + b$$

$$b = 16$$

$$\underline{\text{Ans}} : a = 12, b = 16$$

$$y = x^3 - 12x + 16$$

$$\frac{dy}{dx} = 3x^2 - 12$$

$$\text{When } \frac{dy}{dx} = 0$$

$$3x^2 - 12 = 0$$

$$x^2 - 4 = 0$$

$$(x+2)(x-2) = 0$$

$$x = -2 \text{ or } x = 2$$

$$\therefore x = -2$$

$$y = (-2)^3 - 12(-2) + 16$$

$$= -8 + 24 + 16$$

$$y = 32 \quad (\text{Proof of max not asked for})$$

\therefore co-ordinates of max pt are $(-2, 32)$.

8.iii) Area of shaded region

$$= \int_0^2 (x^3 - 12x + 16) dx$$

$$= \left[\frac{x^4}{4} - 6x^2 + 16x \right]_0^2$$

$$= \left[\frac{2^4}{4} - 6(2)^2 + 16(2) \right] - (0 - 0 + 0)$$

$$= 4 - 24 + 32$$

Ans = 12 unit²

9.ii)

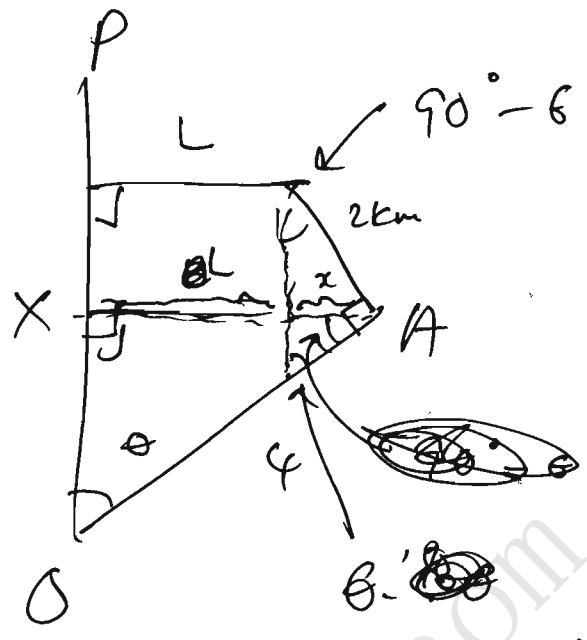
$$\frac{L+x}{4} = \sin \theta$$

$$L = 4 \sin \theta - x$$

$$\sin(90^\circ - \theta) = \frac{x}{2}$$

$$2 \cos \theta = x$$

$$\therefore L = 4 \sin \theta - 2 \cos \theta \text{ (shown)}$$



(corresponding θ)

$$ii) 4 \sin \theta - 2 \cos \theta = R \sin(\theta - \alpha)$$

$$\tan \alpha = \frac{2}{4}$$

$$\alpha = 26.565^\circ$$

$$R = \sqrt{4^2 + 2^2} = \sqrt{20}$$

$$\therefore L = \sqrt{20} \sin(\theta - 26.565^\circ)$$

cannot use 26.6°

$$iii) L = 3 \quad \sqrt{20} \sin(\theta - 26.565^\circ) = 3$$

$$\sin(\theta - 26.565^\circ) = \frac{3}{\sqrt{20}}$$

$$\theta - 26.565^\circ = 42.130^\circ$$

$$\theta = 68.695^\circ$$

$$\theta = 68.7^\circ$$

Ans

10

$$\frac{dy}{dx} = \frac{6}{(2x-1)^2}$$

At P (2, 9)

$$\frac{dy}{dx} = \frac{6}{3^2} = \frac{2}{3}$$

Gradient of normal = $-\frac{3}{2}$

Eqⁿ of normal $\Rightarrow y = mx + c$

$$y = -\frac{3}{2}x + c$$

At (2, 9)

$$9 = -\frac{3}{2}(2) + c$$

$$c = 12$$

$$\therefore y = -\frac{3}{2}x + 12$$

When $x = 0$, $y = 12$ Q (0, 12)

$$\text{When } y = 0 \Rightarrow -\frac{3}{2}x + 12 = 0$$

$$\frac{3}{2}x = 12$$

$$x = 8 \Rightarrow R(8, 0)$$

$$\text{Midpt of QR} = \left(\frac{0+8}{2}, \frac{12+0}{2} \right)$$

Ans

ii)

$$\frac{dy}{dx} = 6(2x-1)^{-2} = (4, 6)$$
$$y = \frac{6(2x-1)^{-1}}{(-1)(2)} + c$$

$$= \frac{-3}{2x-1} + c$$

$$= \frac{3}{1-2x} + c$$

At (2, 9)

$$9 = \frac{3}{1-2} + c$$
$$c = 10$$

$$\therefore y = \frac{3}{1-2x} + 10$$

CANNOT leave

$$\text{as } \frac{-3}{2x-1}$$

$$(0 \text{ iii}) \quad \frac{dx}{dt} = 0.03$$

$$\frac{dy}{dx} = \frac{6}{(2x-1)^2}$$

$$\text{At } (2, 9)$$

$$\begin{aligned} \frac{dy}{dx} &= \frac{6}{3^2} \\ &= \frac{2}{3} \end{aligned}$$

$$\frac{dy}{dt} = \frac{dy}{dx} \times \frac{dx}{dt}$$

$$= (0.03) \times \frac{2}{3}$$

$$\frac{dy}{dt} = 0.02$$

~~Rate:~~

The y-co-ordinate is increasing at 0.02 units/s.

(11)

$$OP = \sqrt{(8-0)^2 + (6-0)^2}$$

$$= \sqrt{64+36}$$

Equation of $C_1 \Rightarrow x^2 + y^2 = 10^2$

$$x^2 + y^2 = 100$$

(i) $\vec{OP} = 2\vec{OQ}$

$$\begin{pmatrix} 8 \\ 6 \end{pmatrix} = 2\vec{OQ}$$

$$\vec{OQ} = \begin{pmatrix} 4 \\ 3 \end{pmatrix}$$

$$Q = (4, -3)$$

$$|\vec{OQ}| = \sqrt{4^2 + (-3)^2}$$

Ans: $(x-4)^2 + (y+3)^2 = 5^2$

$$x^2 - 8x + 16 + y^2 + 6y + 9 = 25$$

Ans $x^2 + y^2 - 8x + 6y = 0$

iii) Gradient of ~~AB~~ OP = $\frac{-6-0}{8-0}$

$$= -\frac{3}{4}$$

Gradient of AB = $\frac{4}{3}$

Eqⁿ of AB $\Rightarrow y = \frac{4}{3}x + c$

A = (4, -3)

$$-3 = \frac{16}{3} + c$$

$$c = -\frac{25}{3}$$

$$y = \frac{4}{3}x - \frac{25}{3} \Rightarrow 3y = 4x - 25$$

(1)

(2)

Sub (2) into (1).

$$x^2 + \left(\frac{4}{3}x - \frac{25}{3}\right)^2 = 100$$

$$9x^2 + (4x^2 - 100x + 625) = 900$$

~~$$13x^2 - 100x - 275 = 0$$~~

$$13x^2 - 100x - 275 = 0$$

$$x^2 + \left(\frac{4x - 25}{3}\right)^2 = 100$$

$$x^2 + \frac{16x^2 - 200x + 625}{9} = 100$$

$$9x^2 + 16x^2 - 200x + 625 = 900$$

$$25x^2 - 200x - 275 = 0$$

$$x^2 - 8x - 11 = 0$$

$$x = \frac{-b \pm \sqrt{b^2 - 4ac}}{2a}$$

$$= \frac{8 \pm \sqrt{64 - 4(1)(-11)}}{2(1)}$$

$$= \frac{8 + \sqrt{108}}{2} \quad \text{or} \quad \frac{8 - \sqrt{108}}{2}$$

$$= \frac{8 + 6\sqrt{3}}{2} \quad \text{or} \quad \frac{8 - 6\sqrt{3}}{2}$$

$$= 4 + 3\sqrt{3} \quad \text{or} \quad 4 - 3\sqrt{3}$$

$$\begin{array}{l} 2 \overline{) 108} \\ 2 \overline{) 54} \\ 3 \overline{) 27} \\ 3 \overline{) 9} \\ \end{array}$$

Ans