


SENIOR CERTIFICATE EXAMINATION



FEBRUARY / MARCH

2007

TRAVEL AND TOURISM

SG

935-2/0 E

TRAVEL AND TOURISM SG

17 pages



935 2 0E

SG

X05



COPYRIGHT RESERVED
APPROVED BY UMALUSI



GAUTENG DEPARTMENT OF EDUCATION

SENIOR CERTIFICATE EXAMINATION

TRAVEL AND TOURISM SG

TIME: 3 hours

MARKS: 150

INSTRUCTIONS:

- Answer ALL the questions.
- Where multiple-choice questions are asked, write down only the question number and the chosen answer, e.g. 1.1.6 D.
- Number your answers in accordance with the numbering of the questions.
- Leave a line after each answer.
- A pocket calculator may be used for calculations.

SECTION A**RECALL OF LEARNED KNOWLEDGE****QUESTION 1****MULTIPLE-CHOICE QUESTIONS**

1.1 Choose the correct answer from the options given. Write down only the question number and letter e.g. 1.1.6 – D.

1.1.1 The Minister of Environmental Affairs and Tourism is _____ .

- A. Valli Moosa
- B. Martinus van Schalkwyk
- C. Pallo Jordan
- D. Amos Masondo

(1)

1.1.2 The airline term for **passenger** is _____ .

- A. Pax
- B. Traveller
- C. Tourer
- D. Tourist

(1)

1.1.3 Cash from another country is known as _____ .

- A. foreign currency
- B. ready money
- C. money on hand
- D. spending money

(1)

- 1.1.4 The unit of currency used in Germany is the _____ .
- A. Rand
B. German mark
C. Euro
D. Pound (1)

- 1.1.5 You are going to New York to work as an *au pair* and have saved R7 500 for expenses in your first month. At an exchange rate of R6,60 to the dollar, how much will this be in US Dollar?
- A. \$1 136,36
B. \$1 200,00
C. \$1 234,67
D. \$1 206,66 (1)
(5)

**QUESTION 2
REGIONAL TOURIST MARKETS**

- 2.1 Name the capital cities of the following SADC countries.
- 2.1.1 Zimbabwe (1)
2.1.2 Botswana (1)
2.1.3 Malawi (1)
2.1.4 Zambia (1)
2.1.5 Mauritius (1)
- 2.2 Write the following abbreviations and technological terms out in words.
- 2.2.1 GDS (1)
2.2.2 CRS (1)
2.2.3 IATA (1)
(8)

**QUESTION 3
INTERNATIONAL TOURIST DESTINATIONS AND ECO-TOURISM**

- 3.1 Match the international icon in Column A to the country in Column B.

COLUMN A		COLUMN B	
INTERNATIONAL ICON		COUNTRY	
3.1.1	Taj Mahal	A.	Australia
3.1.2	Mount Fuji	B.	Egypt
3.1.3	Sydney Opera House	C.	Tanzania
3.1.4	Pyramids and the Sphinx	D.	India
3.1.5	Golden Gate Bridge	E.	Japan
		F.	South Africa
		G.	United States of America

(5)

- 3.2 Name TWO world heritage sites in the Western Cape. (2)
- 3.3 What do you understand by the term **unspoilt**? (1)
- 3.4 Name the other province that also boasts two World Heritage Sites. Name any one of the two sites. (2)
- 3.5 Give another term for an **internship**. (1)
- 3.6 A person who flies an aircraft is known as the _____ . (1)
- 3.7 State whether the following statements are TRUE or FALSE.
- 3.7.1 A guesthouse is accommodation found in a game reserve. (1)
- 3.7.2 A supervisor is someone who supervises employees. (1)
- 3.7.3 A smile is not important in the tourism industry. (1)
- 3.7.4 The elephant is not part of the **dangerous six**. (1)
- 3.7.5 A passport is a pass that allows you to board an aircraft (aeroplane). (1)
- (17)

TOTAL FOR SECTION A: [30]

SECTION B
APPLICATION OF SKILLS

QUESTION 4
TOUR BUDGETS AND BASIC ITINERARIES

- 4.1 Copy the table below into your answer book. Use the tour itinerary in Addendum A to complete the tour itinerary for days 2 and 3.

Day	Morning activity	Afternoon activity	Evening activity	Accommodation
2				Mobile Camp
3				Safari Tents

(6)

- 4.2 Copy the table below into your answer book and use it to complete an accommodation budget for days 8, 9 and 10 for two couples sharing. Show all your calculations. Use Addendum A (tour itinerary) and Addendum B (Into Africa) to complete the table.

(8)

Accommodation costs for two couples Calculations		
Days 8 and 9		
Day 10		
Total costs		

- 4.3 Use Addendum C (British Airways) to answer the following questions.

4.3.1 Calculate the cost if one couple flies economy class back from Victoria Falls to Johannesburg. Show all your calculations.

(3)

4.3.2 State the flight number and the arrival time of their flight.

(2)
(19)

QUESTION 5
TIMETABLES AND TOURIST MAPS

- 5.1 Refer to Addendum D (Botswana) and answer the following questions.

5.1.1 Which country borders Botswana on the west?

(1)

5.1.2 Name the famous National Park in the north west of Botswana near the Falls.

(1)

5.1.3 Name the National Park bordering Namibia.

(1)

5.1.4 Is the Caprivi Strip part of Botswana? If not, in which country is it situated?

(2)

5.1.5 How long will it take tourists to travel from Gaborone to Francistown by bus?

(1)

5.1.6 According to the given times if you travel by aeroplane from Gaborone, which town would be the farthest away?

(1)

- 5.2 Study Addendum E (The Blue Train) and answer the questions that follow.
- 5.2.1 Explain in your own words what is meant by **high season**, and give an appropriate example. (2)
- 5.2.2 Give full arrival and departure details of the trip from Cape Town to Port Elizabeth. (3)
- 5.2.3 Which items are excluded from the rates? (3)
- 5.2.4 How many hours is the north-bound journey from Cape Town to Pretoria? (1)
- 5.2.5 Determine the cost of **two** one way De Luxe Double suites from Pretoria to Cape Town on 13 February. (2)
(18)

QUESTION 6
ECO-TOURISM

- 6.1 Eco-tourism is a dynamic interaction between four strategic role players or stakeholders. Each of them has a very important role to play in the whole nature conservation plan. In essay format, name and discuss the four strategic role players and their separate, yet interdependent roles in a successful ecotourism plan. (15)
- 6.2 Match **Column A** to **Column B**. In your answer book, write down only the question number and the letter of your answer of choice e.g. 6.2.8 – L.

Column A		Column B	
6.2.1	Ais-Ais Richtersveld Transfrontier Park	A.	Mozambique / South Africa / Zimbabwe
6.2.2	Limpopo Transfrontier Park	B.	Meeting the need of the current generation without compromising the needs of the future generation.
6.2.3	Kgalagadi Transfrontier Park	C.	Namibia / South Africa
6.2.4	Sustainable tourism	D.	Include all living species in an area
6.2.5	Maloti Drakensberg Transfrontier Park	E.	Water
6.2.6	Biodiversity	F.	Trees
6.2.7	Non-renewable resources	G.	Mozambique / Swaziland
		H.	Botswana / South Africa
		I.	Variety of life in an area
		J.	Lesotho / South Africa
		K.	Botswana / South Africa / Zimbabwe

(7)
(22)

QUESTION 7
SERVICE EXCELLENCE / INTERPRETATION OF STATISTICS

- 7.1 Study the extract below taken from *Responsible Tourism Guide* and answer the questions that follow.

Imvelo-awards	Mpumalanga	Winner: Best Practice by Micro-Enterprise
Shangana Cultural Village		
<p>Shangana Cultural Village was developed to celebrate and conserve the Shangaan culture and to provide a stage for local performers to use their musical, dance and theatrical talents to earn a living.</p> <p>Shangana can host up to 220 guests, who can visit the Marula Market, which sells locally-made arts and crafts; tour the living village where they can learn about Shangaan customs and traditional medicines; or join an evening festival where actors and dancers tell the story of the Shangaan nation over a traditional feast.</p> <p>Shangana is situated on the edge of the Bushbuckridge community – home to almost one million people, of whom 80% are estimated to be unemployed. Shangana has created 34 permanent and 70 part-time jobs, most of which give value to cultural skills such as performing and producing traditional art. A rigorous training programme has enabled members of local communities to fill 80% of management positions in the organisation, right up to General Manager's level.</p> <p>By sourcing goods and services from local businesses, Shangana supports 20 small and micro-enterprises involved in building, maintenance, supply of fruit and vegetables and curio production. Shangana provides these businesses with technical assistance, raw materials and feedback about what tourists are looking for. The Cultural Village has created over 200 jobs, directly and indirectly.</p> <p>Decision-making at Shangana is effected through consultation, and all staff members are encouraged to voice their ideas and concerns. This has created a climate of confidence and personal growth for the working people.</p> <p>To secure greater involvement from local communities, Shangana has offered the village's property to the Land Claims Commission to ensure restitution of the rights of the community that was once displaced from the land. The staff and management of Shangana plan to lease the property back from the community.</p> <p>Staff of Shangana currently share 10% of the profits of the company, and a trust is being created that will allow staff to become shareholders. Once the land restitution claim is finalised, it is hoped that both staff and local communities will become shareholders of Shangana.</p>		

- 7.1.1 The local community is favoured by involvement. Discuss any TWO opportunities that Shangana offers the local community. (4)
- 7.1.2 Shangana also delivers services to small business. Explain the services referred to. (3)
- 7.1.3 Name any FIVE important roles of an employee at Shangana to ensure service excellence. (5)

- 7.2 Study the graph (Addendum F) and answer the questions that follow.
- 7.2.1 Since 1994, visitor arrivals to South Africa have increased dramatically. Why do you think this has happened? (2)
- 7.2.2 State a reason why visitor arrivals decreased in 2001. (1)
- 7.2.3 Name the extremely important summit that took place in South Africa in 2002 that caused a sudden increase in visitor arrivals. (1)
- 7.2.4 State the percentage of visitor arrivals from the rest of Africa. (1)
- 7.2.5 Rank the visitor arrivals from 2001 to 2003 in descending order. (3)
- 7.2.6 From the information on the graph, what would you predict about the future of South African tourism? (1)
- (21)**

QUESTION 8
GLOBAL PERSPECTIVES

- 8.1 Identify the popular international tourist destinations in Questions 8.1.1 and 8.1.2. Explain why each is such a popular tourist attraction.
- 8.1.1 Theme park in the USA (3)
- 8.1.2 The smallest independent state in Rome, Italy (3)
- (6)**

QUESTION 9
CURRENCY CONVERSION AND TECHNOLOGY

- 9.1 Name any TWO forms of foreign currency, except cash, that are available for tourists to take money out of the country. (2)
- 9.2 Which country uses the following currency codes?
- 9.2.1 ZAR (1)
- 9.2.2 GBP (1)
- 9.2.3 BWP (1)

- 9.3 Study the table below and answer the questions that follow. Show all your calculations. Answers must be correct to two decimal places. Indicate all the currencies clearly.

COUNTRY	VALUE IN SOUTH AFRICAN RAND
France	R7.25
Zimbabwe	R0.08
Japan	R0.55
Botswana	R1.80

- 9.3.1 Roland wants to visit his sister in France. He receives 500 Euro from her to purchase a ticket. What is the cost of the ticket in South African rand? (2)
- 9.3.2 Roland has saved R2 000 for his visit and wants to convert it into Yen. How many Yen would he receive? (2)
- 9.4 Who normally uses a **GDS**? (1)
- 9.5 Name the TWO booking systems used by British Airways and SAA respectively. (2)
- 9.6 Explain in your own words, the difference between a **GDS** and a **CRS**. (4)
- (16)**

QUESTION 10
TIME ZONES

Study the time zone map (Addendum G) and answer the following questions. Show all your calculations. Clearly indicate the date and time.

- 10.1 On which line of longitude do we find the international date line? (1)
- 10.2 If it is 15:00 in Cape Town on 3 June, what will the time be in the following places?
- 10.2.1 Mumbai (2)
- 10.2.2 Los Angeles (3)
- 10.3 It is New Year's Day in Tokyo at 05:00. Mr Lee Wong would like to wish his business partner in Durban a prosperous New Year.
- 10.3.1 What would the time be in Durban if he phones him at 05:00 from Tokyo? (2)
- 10.3.2 If Mr Wong would like to wish his business partner at 12:01 South African time, on which day and at what time should he phone him from Tokyo? (2)
- (10)**

QUESTION 11

Carefully study the advertisement below and answer the questions that follow.

Do you have a passion for travel? Looking for an exciting career?**Flight Centre International Travel Consultant**

Your extensive international travel experience and ability to convert your enthusiasm for travel into sales, whilst offering advice that comes first-hand and exceeds any brochure descriptions, will give you the opportunity to join the BEST TRAVEL COMPANY to work for in SA!

Send your CV detailing at least 2 years full-time work experience ideally in a sales and or retail role with your matric exemption certificate to E-mail hr@flightcentre.co.za.

- 11.1 Give the title of the job. (1)
- 11.2 What documents would an applicant need to submit to apply for the position? (2)
- 11.3 Should an application be successful, mention the next logical step in the process? (1)
- 11.4 Name specific skills the applicant should have. (3)
- 11.5 The applicant needs a specific technological piece of equipment in order to apply for the position. What would it be? (1)
- (8)

TOTAL FOR SECTION B: [120]

TOTAL: 150

ADDENDUM A

Read the itinerary below of two couples visiting Botswana. They will use double rooms for accommodation.

HEMINGWAY'S BOTSWANA The explorers' ultimate overland safari

DAY 1: Central Kalahari

The safari commences in Maun – gateway to the famous wildlife areas of Botswana. Upon arrival, a representative will assist with formalities and boarding the charter flight to Deception Valley Lodge, where you will meet your safari guide who will remain with you throughout the safari. The lodge is situated in a private concession, on the edge of the Central Kalahari Game Reserve. Enjoy a night drive and encounter some of the fascinating nocturnally active birds and animals.

DAY 2: Central Kalahari

Travel to the Central Kalahari Game Reserve and meet the camp staff. The day is spent exploring the semi-desert environment of the Central Kalahari on an extensive game drive and enjoy a traditional dinner in the campsite where you will spend the night at the fully serviced pre-erected mobile camp.

DAY 3: Okavango Delta

Fly by light aircraft into the heart of the Okavango Delta and explore this natural wonder by powerboat. After lunch, enjoy a nature walk guided by a resident naturalist. Spend the night at the superb Nxabega Okavango Safari Camp in luxurious elevated, East African style safari tents with en-suite facilities.

DAYS 4 & 5: Moremi Wildlife Reserve

After an early game drive and breakfast, fly by charter aircraft to the Khwai region of the Moremi Wildlife Reserve, often said to be one of Africa's most beautiful areas. After arrival at the pre-erected mobile camp, enjoy two days of game-viewing in this magnificent area.

DAYS 6 & 7: Savute, Chobe National Park

After breakfast, continue overland to Savute, world renowned for its large concentration of game and a strong and stable population of predators. Spend two nights at Savute Elephant Camp, a deluxe 24-bedded lodge overlooking the dry Savute Channel.

DAYS 8 & 9: Northern Chobe National Park

After breakfast, proceed to the northern Chobe region which provides excellent game drives and birding. Enjoy a boat cruise on the Chobe River and spend two nights at the fully serviced lodge.

DAY 10: Victoria Falls

Travel to Victoria Falls by road and enjoy a guided tour of the spectacular falls. The rest of the day is at leisure. Enjoy a Traditional Dance Show, delicious farewell dinner and overnight at the gracious Victoria Falls Safari Lodge with beautiful grounds.

DAY 11: Victoria Falls

The safari terminates after breakfast. A transfer is included from the hotel to the Victoria Falls Airport.

ADDENDUM B

Chobe Marina Lodge



BOTSWANA (FI)

	Single	Double
--	--------	--------

Standard room	R2 060	R1 375
---------------	--------	--------

Validity Period 01/04/04 – 30/06/04

Rates quoted per person per night



Victoria Falls Safari Lodge



VICTORIA FALLS (B&B)

	Single	Double
--	--------	--------

Standard room	R1 055	R660
---------------	--------	------

Validity Period 01/04/04 – 30/06/04

Rates quoted per person per night



Chobe Marina Lodge



Victoria Falls Safari Lodge



ADDENDUM C

BRITISH AIRWAYS

**FROM JOHANNESBURG
TO CAPE TOWN (JNB - CPT)**

12345 - -	0630	0840	BA 6-441	B737
12345 - -	0700	0910	BA 6-401	B737
1234567	0730	0940	BA 6-405	B737
1234567	0930	1140	BA 6-411	B737
1234567	1030	1240	BA 6-409	B737
1234567	1245	1455	BA 6-417	B737
1234567	1400	1610	BA 6-419	B737
12345 -7	1500	1710	BA 6-425	B737
1234567	1545	1755	BA 6-427	B737
1234567	1700	1910	BA 6-429	B737
12345 - -	1730	1940	BA 6-413	B737
1234567	1800	2010	BA 6-431	B737
12345 -7	1845	2055	BA 6-407	B737

TO DURBAN (JNB - DUR)

12345 - -	0645	0755	BA 6-201	B737
-----6-	0730	0840	BA 6-213	B737
12345 -7	0900	1010	BA 6-203	B737
1234567	1110	1220	BA 6-211	B737
12345-7	1400	1510	BA 6-209	B737
12345 - -	1515	1625	BA 6-207	B737
-----67	1545	1655	BA 6-219	B737
12345 -7	1630	1740	BA 6-229	B737
-----5 - -	1730	1840	BA 6-215	B737
1234 - -7	1800	1910	BA 6-221	B737

TO PORT ELIZABETH (JNB - PLZ)

12345 - -	0630	0810	BA 6-231	B737
1234567	1110	1250	BA 6-241	B737
1234567	1600	1740	BA 6-237	B737
12345-7	1815	1955	BA 6-239	B737

TO HARARE (JNB - HRE)

1234567	1230	1405	BA 6-267	B737
---------	------	------	----------	------

TO VIC. FALLS (JNB - VFA)

1234567	1125	1300	BA 6-285	B737
---------	------	------	----------	------

TO WINDHOEK (JNB - WDH)

1234567	1200	1355	BA 6-275	B737
---------	------	------	----------	------

Effective 28 March 2004

LIVINGSTONE (JNB-LVI)

--3-5--	1055	1230	BA 6-291	B737
-----7	0950	1135	BA 6-293	B737

**FROM CAPE TOWN
TO JOHANNESBURG (CPT - JNB)**

12345 - -	0645	0845	BA 6-400	B737
12345 - -	0710	0910	BA 6-424	B737
1234567	0730	0930	BA 6-428	B737
1234567	0910	1110	BA 6-406	B737
1234567	1000	1200	BA 6-410	B737
1234567	1100	1300	BA 6-436	B737
1234567	1245	1445	BA 6-414	B737
1234567	1400	1600	BA 6-416	B737
12345 - -	1500	1700	BA 6-412	B737
1234567	1600	1800	BA 6-418	B737
12345 -7	1700	1900	BA 6-422	B737
1234567	1800	2000	BA 6-426	B737
-----7	1845	2045	BA 6-438	B737
12345 - -	1945	2145	BA 6-420	B737

TO DURBAN (CPT - DUR)

12345 - -	0630	0825	BA 6-301	B737
1 2 3 4 5 6 -	0925	1120	BA 6-303	B737
-----7	1100	1255	BA 6-305	B737
-----7	1800	1955	BA 6-307	B737
12345 - -	1830	2025	BA 6-313	B737

FROM DURBAN**TO CAPE TOWN (DUR - CPT)**

12345 - -	0630	0835	BA 6-300	B737
123456 -	1200	1405	BA 6-304	B737
-----7	1400	1605	BA 6-302	B737
12345 -7	1815	2020	BA 6-306	B737

FROM DURBAN**TO JOHANNESBURG (DUR-JNB)**

12345 - -	0645	0755	BA 6-200	B737
12345 - -	0830	0940	BA 6-202	B737
123456 -	0910	1020	BA 6-204	B737
-----6-	1015	1125	BA 6-224	B737
12345-7	1130	1240	BA 6-216	B737
12345 -7	1300	1410	BA 6-214	B737
-----6 -	1500	1610	BA 6-212	B737
12345 -7	1600	1710	BA 6-218	B737
1234567	1730	1840	BA 6-220	B737
-----5 - -	1915	2025	BA 6-222	B737

**FROM PORT ELIZABETH
TO JOHANNESBURG (PLZ - JNB)**

12345 - -	0630	0805	BA 6-232	B737
1234567	0845	1020	BA 6-238	B737
1234567	1320	1455	BA 6-242	B737
12345 -7	1815	1950	BA 6-236	B737

**FROM HARARE
TO JOHANNESBURG (HRE - JNB)**

1234567	1450	1630	BA 6-268	B737
---------	------	------	----------	------

**FROM WINDHOEK
TO JOHANNESBURG (WDH - JNB)**

1234567	1500	1650	BA 6-274	B737
---------	------	------	----------	------

**FROM VICTORIA FALLS
TO JOHANNESBURG (VFA - JNB)**

1234567	1350	1530	BA 6-282	B737
---------	------	------	----------	------

Effective 28 March 2004

**FROM LIVINGSTONE
TO JOHANNESBURG (LVI-JNB)**

--3-5-7	1305	1445	BA 6-292	B737
---------	------	------	----------	------

ALL FLIGHTS OPERATED BY
COMAIR LIMITED / ALL
TIMES ARE GIVEN AS
LOCAL TIMES.

INTERNATIONAL/REGIONAL AIRFARES

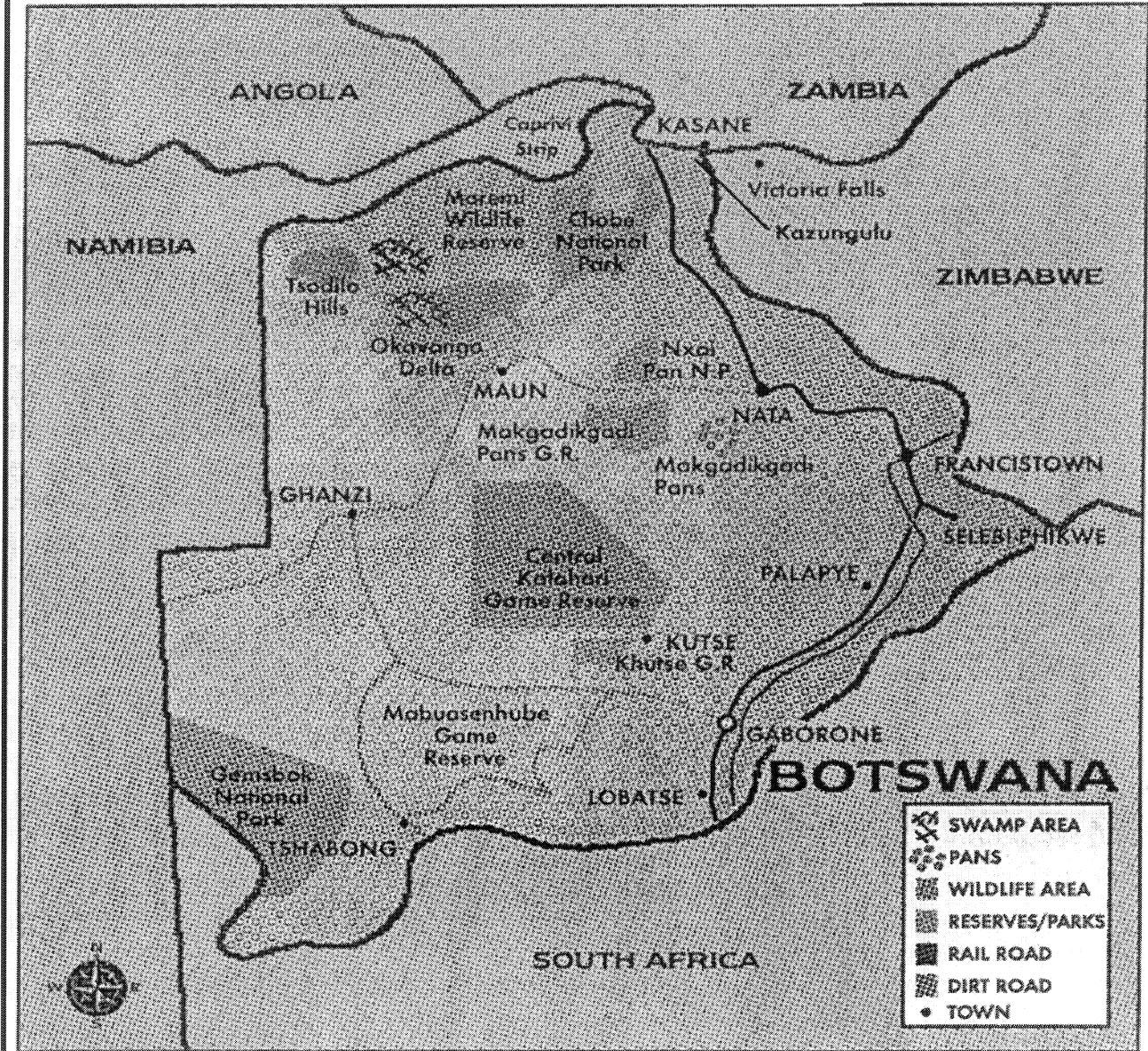
Effective 19 January 2004

Eff. 28 Mar '04

FARE	JNB TO VFA		JNB TO HRE		JNB TO WDH		JNB TO LVI	
	O/w	Rtn	O/w	Rtn	O/w	Rtn	O/w	Rtn
J	2430	4420	2120	4240	2300	4200	2430	4420
Y	2100	4100	2050	4000	1950	3500	2100	4100
B	1900	3800	1900	3800	N/A	N/A	1900	3800
H	N/A	N/A	N/A	2770 high	N/A	N/A	N/A	N/A
	N/A	N/A	N/A	2520 low	N/A	N/A	N/A	N/A
YEE6M	N/A	N/A	N/A	N/A	N/A	2800	N/A	N/A
YEE1M	N/A	N/A	N/A	N/A	N/A	2450	N/A	N/A
YEE45	N/A	2860 high	N/A	2860 high	N/A	N/A	N/A	2860 high
	N/A	2620 low	N/A	2620 low	N/A	N/A	N/A	2620 low
HXOWV/HX6MV	960	1770	N/A	N/A	N/A	N/A	960	1770
K	N/A	1930 high	N/A	1930 high	N/A	N/A	N/A	1930 high
	N/A	1770 low	N/A	1770 low	N/A	N/A	N/A	1770 low
BPEX	N/A	N/A	N/A	N/A	N/A	2200	N/A	N/A
BCD3M (Senior Citizen Fare)	N/A	N/A	N/A	N/A	1400	2200	N/A	N/A
BZZ6M (Youth Fare)	N/A	N/A	N/A	N/A	1400	2200	N/A	N/A
BSD6M (Student Fare)	N/A	N/A	N/A	N/A	1400	2200	N/A	N/A

ADDENDUM D

BOTSWANA



● **JOURNEY TIMES**

Approximate journey times from Gaborone (in hours and minutes) to other major cities and towns in Botswana.

	Air	Road	Rail
Francistown	0.50	5.00	6.35
Selebi-Phikwe	1.00	4.30	-
Orapa	-	5.00	-
Lobatse	0.20	0.45	1.50
Maun	1.30	12.00	-
Kasane	2.50	13.30	-
Tshabong	2.00	15.00	-
Ghanzi	1.25	-	-

● **ACCOMMODATION**

Air Holidays

DECEPTION VALLEY LODGE
 Tel: (012) 346-6864 E-mail: res@deceptionvalley.co.za
 Fax: (012) 460-2466 info@deceptionvalley.co.za
 Cell: 083-271-9590 www.deceptionvalley.co.za

BOTSWANA SAFARIS UNDER CANVAS
 • 7 Days Okavango Delta & Moremi from P4895
 • 12 Days Okavango Delta, Savate, Chobe, Vic Falls from R8250
 • 14 Days Botswana Overland, JNB to JNB, from R6750
 Tel: (031) 563 9774 E-mail: karibu@karibu.co.za

ADDENDUM E

THE BLUE TRAIN

PRETORIA TO CAPE TOWN

Departure: 08:50 Arrival: 12:00

5, 14, 26
4, 9, 13, 18, 23, 27
8, 19
2, 12, 16, 26
10, 24
-
2, 7, 16, 21, 26, 30
6, 11, 16, 20, 25, 30
3, 10, 20
1, 6, 11, 15, 20, 25, 29
3, 8, 12, 17, 22, 26
1, 6, 13, 17



JANUARY

FEBRUARY

MARCH

APRIL

MAY

JUNE

JULY

AUGUST

SEPTEMBER

OCTOBER

NOVEMBER

DECEMBER

CAPE TOWN TO PRETORIA

Departure: 11:00 Arrival: 13:45

2, 7, 16, 28
6, 11, 16, 20, 25
1, 10, 26
5, 14, 19, 28
12, 26
-
5, 9, 19, 23, 28
2, 9, 13, 18, 23, 27
1, 6, 13, 22
4, 8, 13, 18, 22, 27
1, 5, 10, 15, 19, 24, 29
3, 8, 15, 20

RATES PER SUITE - ONE WAY

	HIGH SEASON	LOW SEASON
Luxury Double (P)	R20 430.00	R17 365.00
Luxury Single (P)	R15 200.00	R12 900.00
De Luxe Double (K)	R18 300.00	R15 560.00
De Luxe Single (K)	R13 520.00	R11 500.00

GARDEN ROUTE

CAPE TOWN TO PORT ELIZABETH

Depart: Sunday 14:00

Arrive: Tuesday 09:30



GARDEN ROUTE

PORT ELIZABETH TO CAPE TOWN

Depart: Tuesday 15:30

Arrive: Thursday 11:00

21 MARCH 23

RATES PER SUITE - ONE WAY

	HIGH SEASON	LOW SEASON
Luxury Double (P)	R23 500.00	R19 975.00
Luxury Single (P)	R17 820.00	R15 160.00
De Luxe Double (K)	R21 660.00	R18 515.00
De Luxe Single (K)	R16 280.00	R13 920.00

High Season: 1 January to 30 April & 1 October to 31 December Low Season: 1 May to 30 September

• Rates are per suite, inclusive of all meals, drinks and off-train excursions. (Excluding French Champagne, Caviar and Telephone)

SPECTACULAR ROUTES

PRETORIA - CAPE TOWN - PRETORIA

The route between Pretoria and Cape Town is a 27-hour journey through some of the most diverse and spectacular scenery the sub-continent has to offer. Southbound off-train excursions include the diamond town of Kimberley, explore the Big Hole and the Diamond Museum. Northbound, visit the small town of Matjiesfontein, which includes the famous Lord Milner Hotel and the Old Car Museum.

GARDEN ROUTE

The Blue Train takes you on a 2-night and 1 1/2-days journey between Cape Town and Port Elizabeth over the majestic Outeniqua Pass, stopping at Oudtshoorn for a memorable off-train excursion, explore the Cango Caves and an Ostrich farm, ending at a local restaurant which prides itself on serving typical South African cuisine.

TAILOR MADE CHARTERS

Why not charter The Blue Train for strategic meetings, product launches, VIP cocktail parties, VIP breakfasts, lunches and dinners, weddings and more. You can also book a charter with a difference such as a Golfing or Safari charter. Traverse along the Victoria Falls route where The Blue Train offers a window to view nature situated to the north of South Africa's borders. The route winds its way to the awesome 'Smoke that Thunders'. Or make your way through the unique beauty of the Olifants Valley to the Game Reserves and other attractions of Mpumalanga. Charters are not limited to the charter options or the routes mentioned above. Charters are dependant on rail networks' compatibility with The Blue Train's technology.

YOU CAN ALSO VISIT THE BLUE TRAIN OFFICE AT JHB AIRPORT, INTERNATIONAL ARRIVAL HALL, TERMINAL 2 OR CALL (011) 978-3110/3113 (OPEN 7 DAYS A WEEK 06h30 - 23h00)



THE BLUE TRAIN

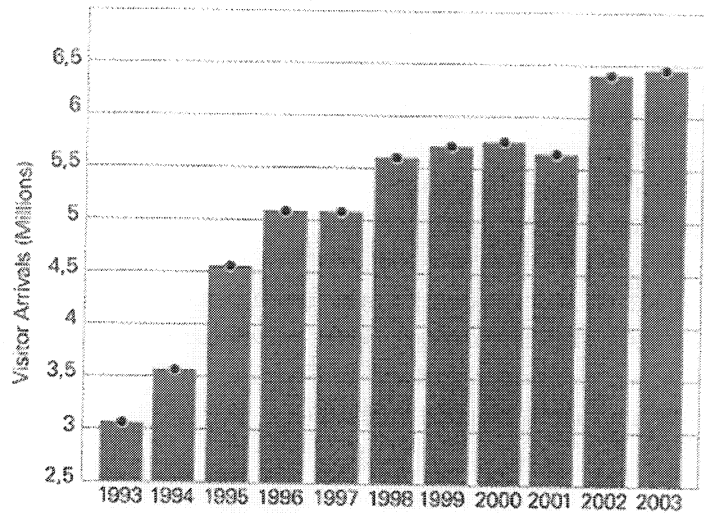
A WINDOW TO THE SOUL OF SOUTH AFRICA

FOR RESERVATION ENQUIRIES, TEL: 012-334-8459 /8460 (PRETORIA) OR 021-449-2672 (CAPE TOWN), FAX: 012-334-8464/8081 OR 021-449-3338, BLUETRAIN@TRANSNET.CO.ZA, WWW.BLUETRAIN.CO.ZA

ADDENDUM F

Tourism will become one of our biggest job creators

- Tourism Arrivals in 2003: **6,5 million**
- International tourist spend in South Africa in 2003: **R53,9bn**
- Local tourist spend in South Africa in 2003: **R47bn**
- Tourism employment in 2003: **512 000 people**
- South Africa ranked **30th** of top destinations worldwide
- South African Tourism marketing spend: **R400m**



Overall Visitor Arrivals To South Africa

ADDENDUM G

