



REPUBLIC OF SOUTH AFRICA
REPUBLIEK VAN SUID-AFRIKA

DEPARTMENT OF EDUCATION
DEPARTEMENT VAN ONDERWYS

SENIOR CERTIFICATE EXAMINATION/SENIORSERTIFIKAAT-EKSAMEN
MATHEMATICS SG/WISKUNDE SG
PAPER II/VRAESTEL II
MARCH/MAART 2005

DIAGRAM SHEET/DIAGRAMVEL

INSTRUCTION

This diagram sheet must be handed in with your answer book. Please ensure that your details are complete.

INSTRUKSIE

Hierdie diagramvel moet saam met jou antwoordeboek ingelewer word. Maak asseblief seker dat jou besonderhede volledig ingevul is.

**EXAMINATION NUMBER
EKSAMENNUMMER**

--	--	--	--	--	--	--	--	--	--	--	--	--	--	--	--	--	--	--	--

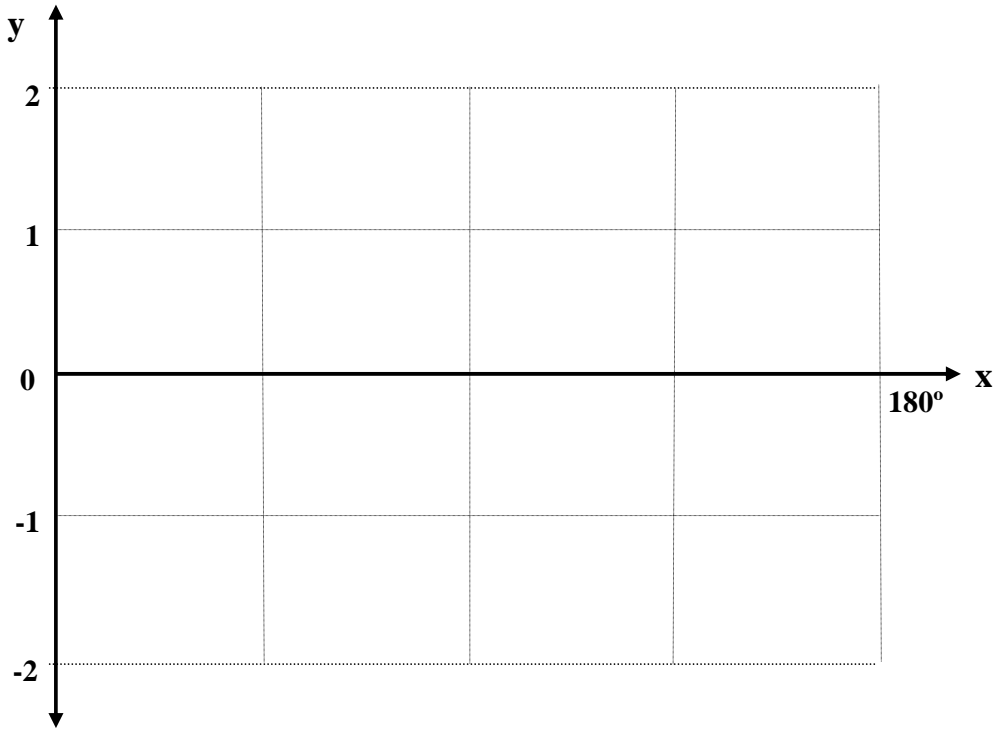
**CENTRE NUMBER
SENTRUMNUMMER**

--	--	--	--	--	--	--	--	--	--	--	--	--	--	--	--	--	--	--	--

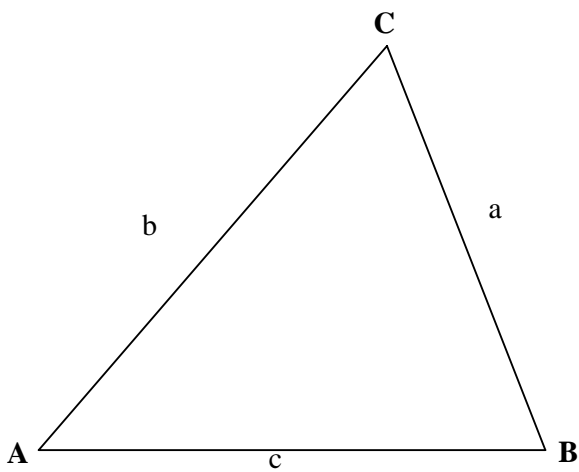
EXAMINATION NUMBER
EKSAMENNOMMER

--	--	--	--	--	--	--	--	--	--	--	--	--	--	--	--	--	--	--	--	--

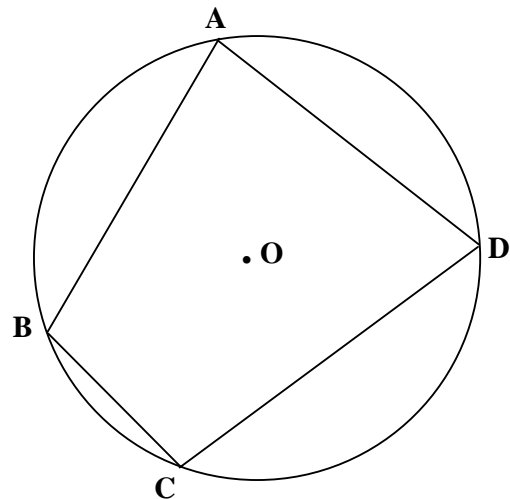
QUESTION 4.1/VRAAG 4.1



QUESTION 6.1/VRAAG 6.1



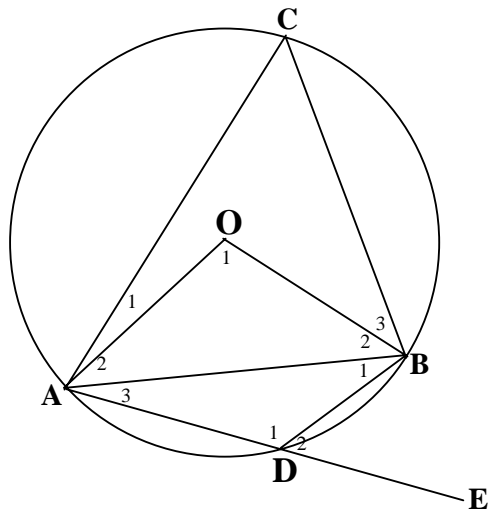
QUESTION 7.1/VRAAG 7.1



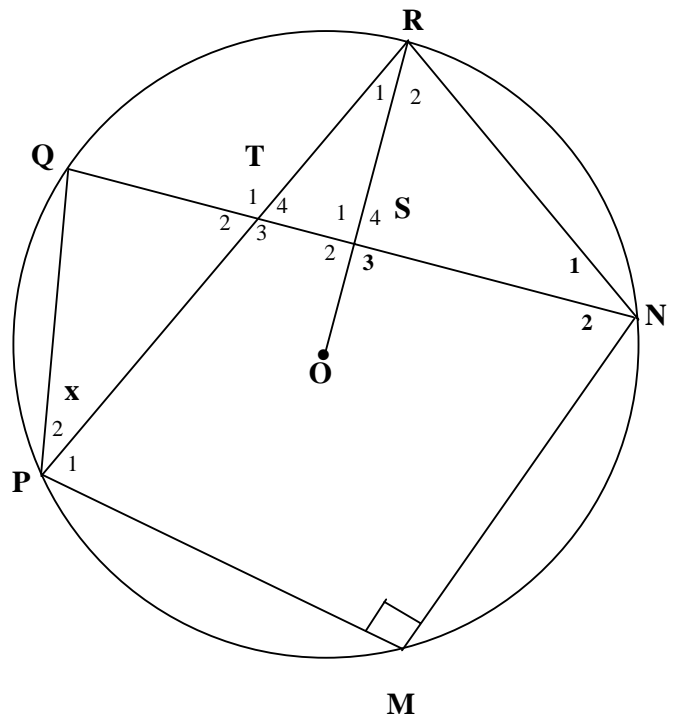
EXAMINATION NUMBER
EKSAMENNOMMER

--	--	--	--	--	--	--	--	--	--	--	--	--	--	--	--	--	--	--	--	--

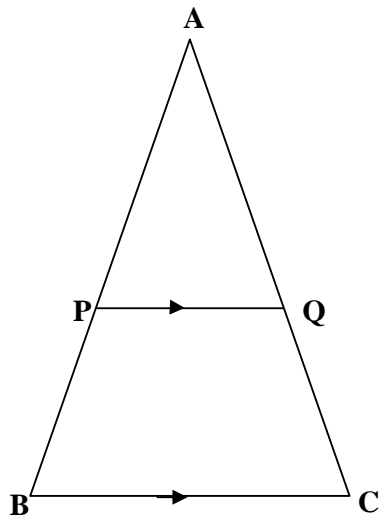
QUESTION 7.2/VRAAG 7.2



QUESTION 7.3/VRAAG 7.3



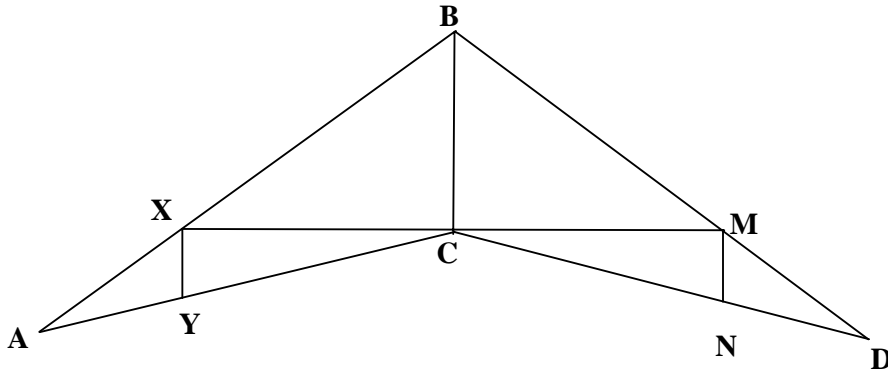
QUESTION 8.1/VRAAG 8.1



**EXAMINATION NUMBER
EKSAMENNOMMER**

--	--	--	--	--	--	--	--	--	--	--	--	--	--	--	--	--	--	--	--	--

QUESTION 8.2/VRAAG 8.2



QUESTION 9/VRAAG 9

