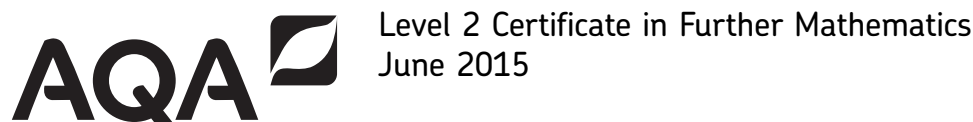


Centre Number						Candidate Number				
Surname										
Other Names										
Candidate Signature										

For Examiner's Use	
Examiner's Initials	
Pages	Mark
3	
4 – 5	
6 – 7	
8 – 9	
10 – 11	
12 – 13	
14 – 15	
16 – 17	
18 – 19	
20 – 21	
22 – 23	
24 – 25	
26 – 27	
28	
TOTAL	




Further Mathematics

8360/2

Level 2

Paper 2 Calculator

Friday 19 June 2015 9.00 am to 11.00 am

<p>For this paper you must have:</p> <ul style="list-style-type: none"> • a calculator • mathematical instruments. 	
---	--

Time allowed

- 2 hours

Instructions

- Use black ink or black ball-point pen. Draw diagrams in pencil.
- Fill in the boxes at the top of this page.
- Answer **all** questions.
- You must answer the questions in the spaces provided. Do not write outside the box around each page or on blank pages.
- Do all rough work in this book. Cross through any work that you do not want to be marked.
- In all calculations, show clearly how you work out your answer.

Information

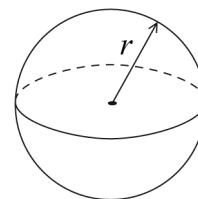
- The marks for questions are shown in brackets.
- The maximum mark for this paper is 105.
- You may ask for more answer paper, graph paper and tracing paper. These must be tagged securely to this answer book.
- The use of a calculator is expected but calculators with a facility for symbolic algebra must **not** be used.



Formulae Sheet

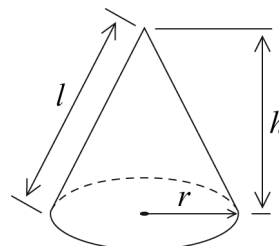
Volume of sphere $= \frac{4}{3}\pi r^3$

Surface area of sphere $= 4\pi r^2$



Volume of cone $= \frac{1}{3}\pi r^2 h$

Curved surface area of cone $= \pi r l$



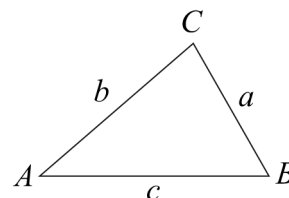
In any triangle ABC

Area of triangle $= \frac{1}{2}ab \sin C$

Sine rule $\frac{a}{\sin A} = \frac{b}{\sin B} = \frac{c}{\sin C}$

Cosine rule $a^2 = b^2 + c^2 - 2bc \cos A$

$$\cos A = \frac{b^2 + c^2 - a^2}{2bc}$$



The Quadratic Equation

The solutions of $ax^2 + bx + c = 0$, where $a \neq 0$, are given by

$$x = \frac{-b \pm \sqrt{(b^2 - 4ac)}}{2a}$$

Trigonometric Identities

$$\tan \theta \equiv \frac{\sin \theta}{\cos \theta} \quad \sin^2 \theta + \cos^2 \theta \equiv 1$$



Answer **all** questions in the spaces provided.

1 A circle, centre (0, 0), has circumference 12π

Work out the equation of the circle.

[2 marks]

.....

.....

.....

.....

Answer

2 $a : b : c = 5 : 3 : 2$

Work out $4a - c : 3b$
Give your answer in its simplest form.

[2 marks]

.....

.....

.....

.....

.....

.....

Answer :



3 The distance between the points $(2, 5p)$ and $(2, -10)$ is 30 units.

Work out the **two** possible values of p .

[3 marks]

.....

.....

.....

.....

.....

.....

.....

.....

Answer..... and



4 The first term of a sequence is $1 - a$

The term-to-term rule of a sequence is

add $2a$ then multiply by 3

4 (a) Show that the second term is $3 + 3a$

[1 mark]

.....
.....
.....
.....

4 (b) The third term is 16

Work out the value of a .

[3 marks]

.....
.....
.....
.....
.....
.....
.....
.....
.....

Answer

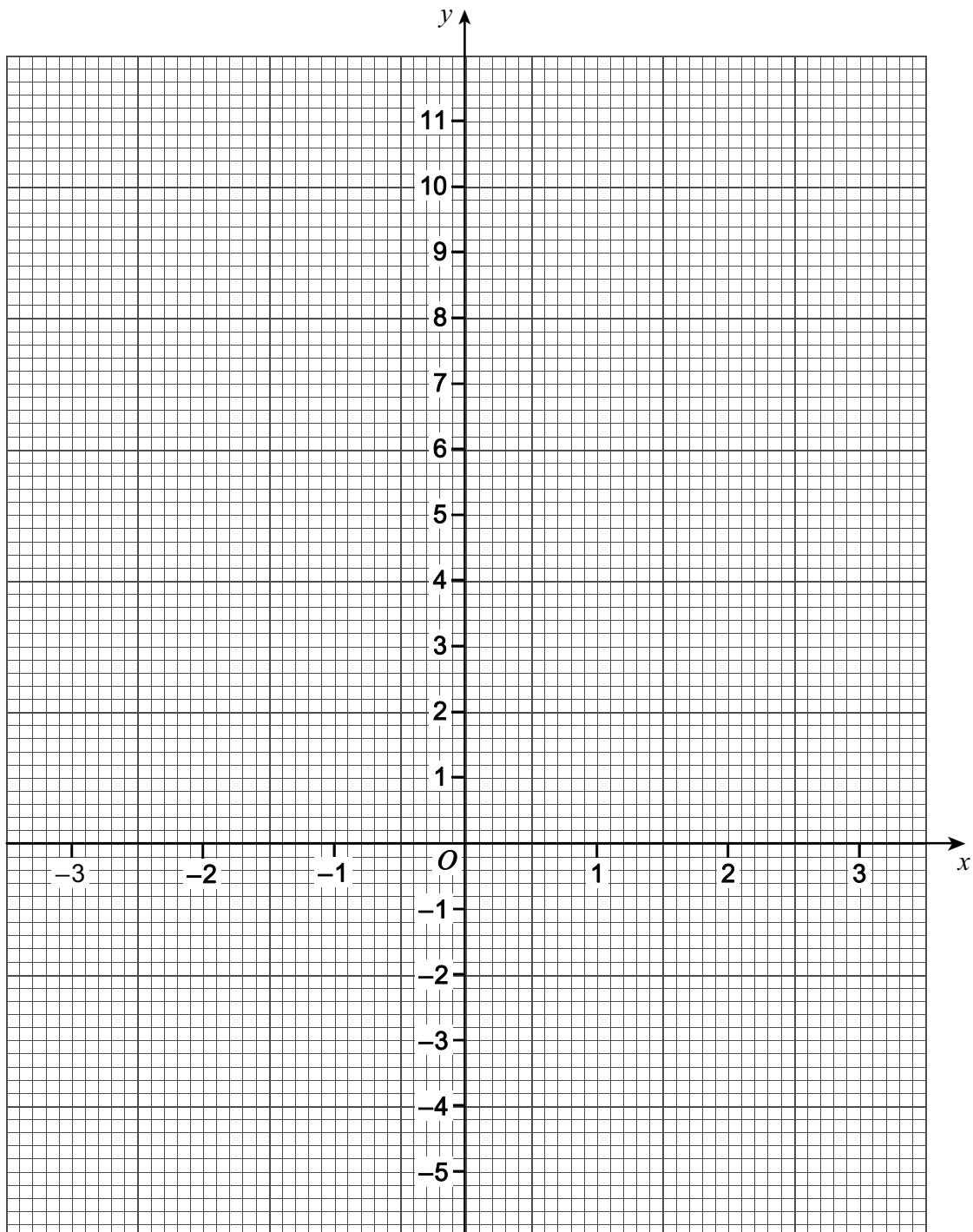


5

A straight line L

is parallel to the straight line $y = 1 - 2x$
passes through $(3, -1)$

On the grid below, draw the straight line L for values of x from -3 to 3 .

[4 marks]

6 Write $\frac{15x^8 - 18x^7}{3x^2}$ in the form $ax^n - nx^a$ where a and n are integers.

[2 marks]

.....

.....

.....

.....

.....

7 $y = \frac{2}{3}x^6 - 8x^3$

Work out the rate of change of y with respect to x when $x = -1$

[3 marks]

.....

.....

.....

.....

.....

.....

.....

Answer



8 (a) $f(x) = x^4$
The domain of $f(x)$ is $x \geq 2$

Work out the range of $f(x)$.

[1 mark]

.....

Answer

8 (b) $g(x) = x^2 - 1$
The domain of $g(x)$ is $-2 \leq x \leq 3$

Work out the range of $g(x)$.

[2 marks]

.....
.....
.....
.....

Answer

8 (c) $h(x) = 5x - 3$
The **range** of $h(x)$ is $-2 < h(x) < 1$

Work out the domain of $h(x)$.

[2 marks]

.....
.....
.....
.....
.....
.....

Answer



9 (a) Solve $6(2y - 3) - 10 = 2y$

[3 marks]

.....

.....

.....

.....

.....

$$y = \text{.....}$$

9 (b) Solve $\frac{\sqrt{w+4}}{2} = 6$

[3 marks]

.....

.....

.....

.....

$$w = \text{.....}$$

9 (c) Solve $3m^{\frac{1}{5}} + 9 = 0$

[2 marks]

.....

.....

.....

.....

.....

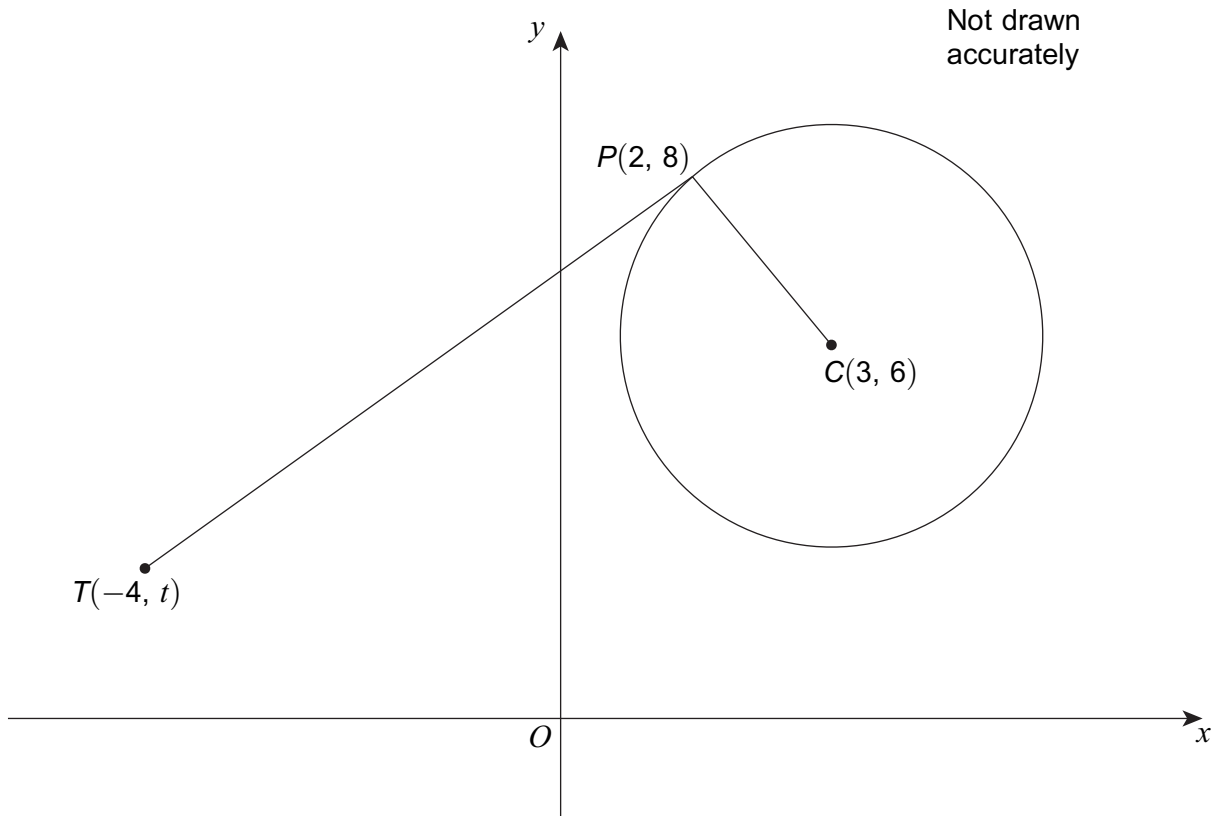
$$m = \text{.....}$$

Turn over ►



10

The diagram shows a circle, centre C .
 TP is a tangent to the circle at P .



Work out the value of t .

[4 marks]

.....

.....

.....

.....

.....

.....

.....

.....

.....

.....

.....

Answer



11 (a) Expand and simplify $(3w + 2y)(w - 4y)$

[3 marks]

.....

.....

.....

.....

.....

Answer

11 (b) Expand and simplify $\frac{3}{x^2} \left(\frac{x}{3} + 3x^2 - 1 \right)$

[3 marks]

.....

.....

.....

.....

.....

Answer


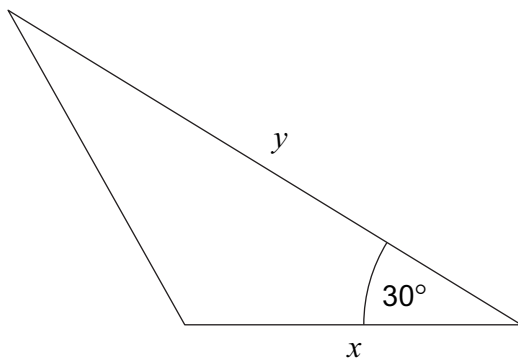
Turn over ►



12

The area of the triangle is equal to the area of the square.
All dimensions are in centimetres.

Not drawn
accurately



Write y in terms of x .

[2 marks]

.....

.....

.....

.....

.....

.....

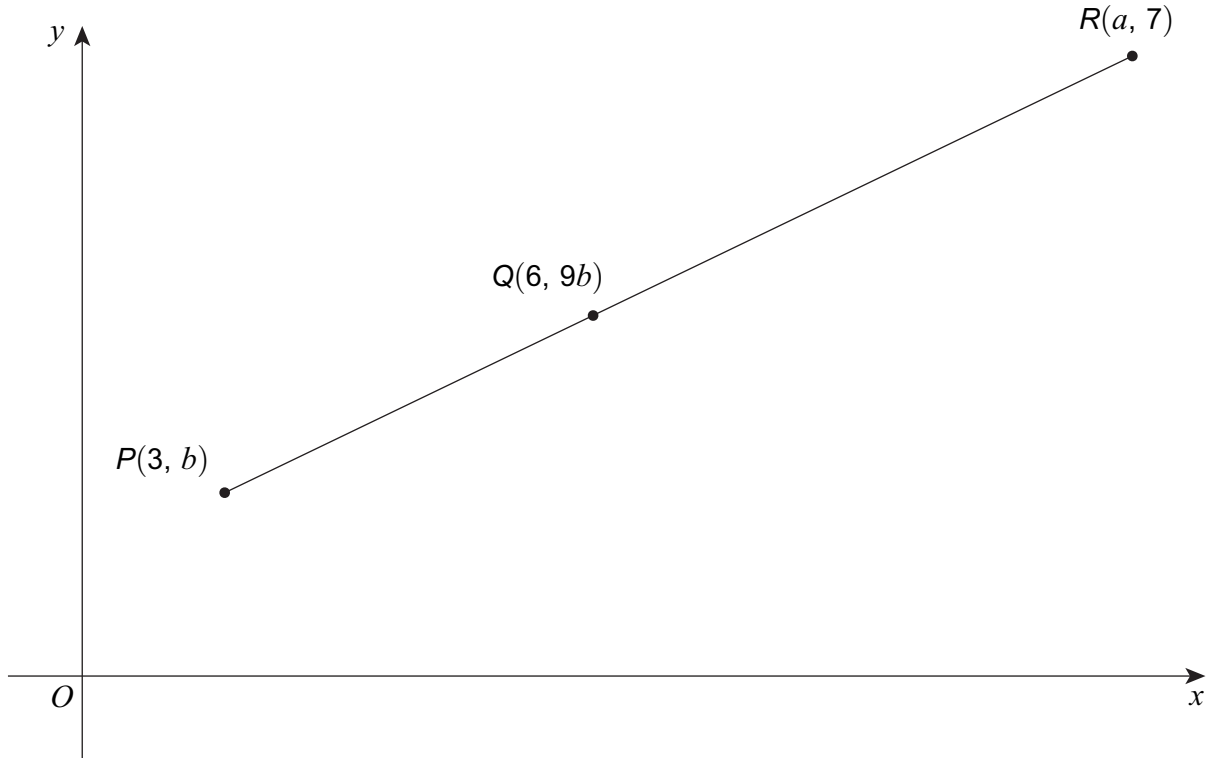
Answer



14

PQR is a straight line.
 $PQ:QR$ is $2:3$

Not drawn
accurately



14 (a)

Show that $a = 10.5$

[2 marks]

.....

.....

.....

.....

.....

.....



14 (b) Work out the value of b .

[3 marks]

.....

.....

.....

.....

.....

.....

.....

.....

.....

.....

Answer

15 Use algebra to prove that the value of $\frac{8c^2 + 16}{3c^2 + 6} + \frac{1}{3}$ is an integer for all values of c .

[3 marks]

.....

.....

.....

.....

.....

.....

.....

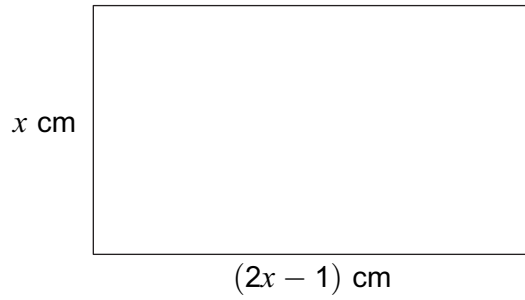
.....

.....

.....



16 The diagram shows a rectangle with area 9 cm^2



Not drawn
accurately

Set up and solve an equation to work out the value of x .
Give your answer to 3 significant figures.

[5 marks]

.....

.....

.....

.....

.....

.....

.....

.....

.....

.....

.....

.....

.....

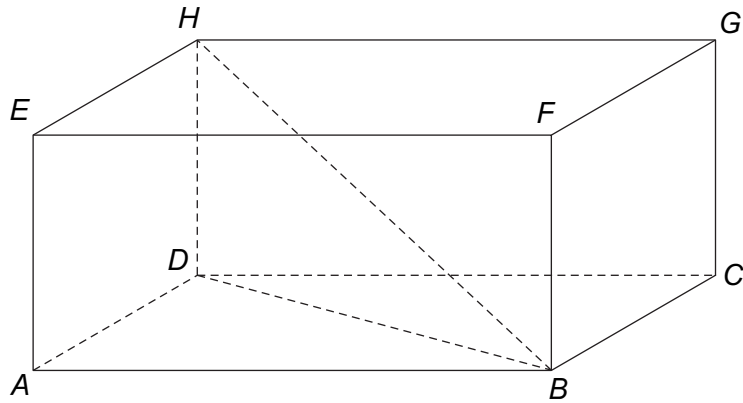
.....

.....

$x =$



17 *ABCDEFGH* is a cuboid.



$HB = 34$ cm
 $HD = 16$ cm
 $AD = 18$ cm

17 (a) Work out the length of AB .

[3 marks]

.....

.....

.....

.....

.....

.....

.....

Answer..... cm

17 (b) Work out the angle between HB and $ABCD$.

[2 marks]

.....

.....

.....

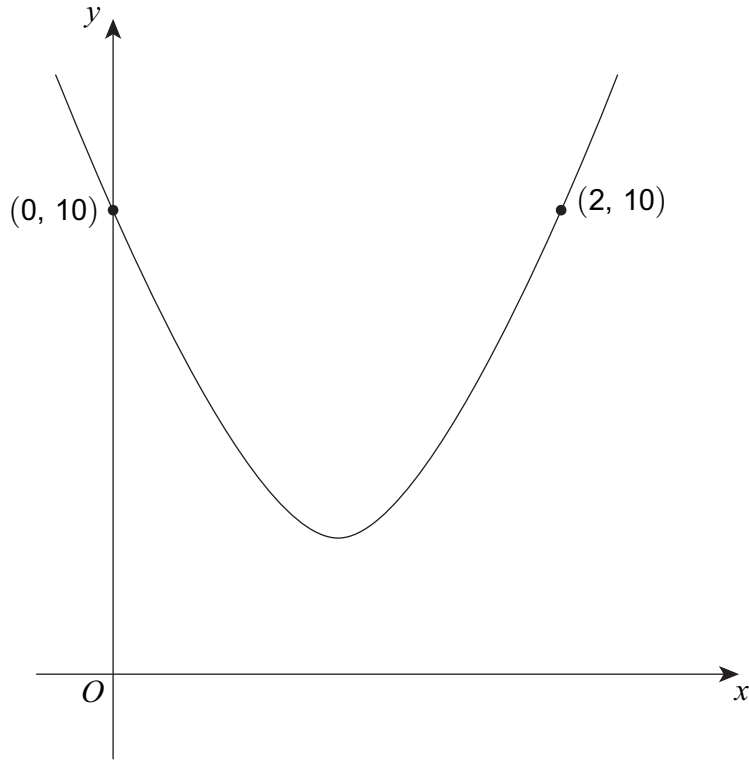
Answer..... degrees



18

The sketch shows the quadratic curve $y = 4(x - a)^2 + b$
The curve passes through $(0, 10)$ and $(2, 10)$

Not drawn
accurately



18 (a)

Give reasons why the value of a is 1.

[2 marks]

.....

.....

.....

.....

.....



18 (b) Work out the value of b .

[2 marks]

.....
.....
.....
.....

Answer

18 (c) Write the equation of the curve in the form $y = px^2 + qx + r$

[2 marks]

.....
.....
.....
.....

Answer

19 Use the factor theorem to show that $(x - 3)$ is **not** a factor of $x^3 - 10x - 3$

[2 marks]

.....
.....
.....



20 (a) The transformation matrix **P** represents a 90° anti-clockwise rotation about the origin.

Describe fully the **single** transformation represented by the matrix \mathbf{P}^3

[2 marks]

.....

.....

.....

20 (b) The transformation matrix **Q** is $\begin{pmatrix} 1 & 0 \\ 0 & -1 \end{pmatrix}$

The transformation matrix **R** is $\begin{pmatrix} -1 & 0 \\ 0 & 1 \end{pmatrix}$

Describe fully the **single** transformation represented by the matrix **QR**.

[2 marks]

.....

.....

.....



21

A cubic curve has

a maximum point at $A (-4, 10)$


a minimum point at $B (2, -26)$

The tangent to the curve at A and the normal to the curve at B intersect at point C .

Work out the area of triangle ABC .

You may sketch a diagram to help you.

[3 marks]



.....

.....

.....

.....

.....

.....

Answer.....square units

7

Turn over ►



22 A quadratic sequence starts

302 600 894 1184

22 (a) Work out an expression for the n th term.

[3 marks]

.....

.....

.....

.....

.....

.....

.....

.....

.....

.....

.....

.....

.....

.....

.....

.....

.....

.....

.....

.....

.....

.....

Answer

22 (b) A term in the sequence has value 0

Find the position of this term.

[2 marks]

.....

.....

.....

.....

.....

Answer



23

The continuous curve $y = f(x)$ has exactly **two** stationary points.

P is a maximum point when $x = a$

Q is a stationary point of inflection when $x = b$

$a < b$

Which of these is correct?

Tick **one** box only.

[1 mark]

When $a < x < b$, $\frac{dy}{dx}$ is positive

and

when $x > b$, $\frac{dy}{dx}$ is positive

When $a < x < b$, $\frac{dy}{dx}$ is positive

and

when $x > b$, $\frac{dy}{dx}$ is negative

When $a < x < b$, $\frac{dy}{dx}$ is negative

and

when $x > b$, $\frac{dy}{dx}$ is positive

When $a < x < b$, $\frac{dy}{dx}$ is negative

and

when $x > b$, $\frac{dy}{dx}$ is negative



24

$a^2 < 4$ and $a + 2b = 8$

Work out the range of possible values of b .
Give your answer as an inequality.

[4 marks]

.....

.....

.....

.....

.....

.....

.....

.....

.....

.....

.....

.....

.....

.....

.....

Answer



25

Work out the values of x between 0° and 360° for which

$$25 \cos^2 x = 9$$

Give your answers to 1 decimal place.

[4 marks]

.....

.....

.....

.....

.....

Answer

8

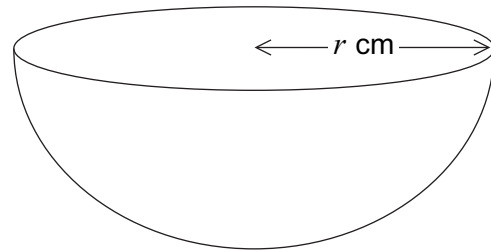
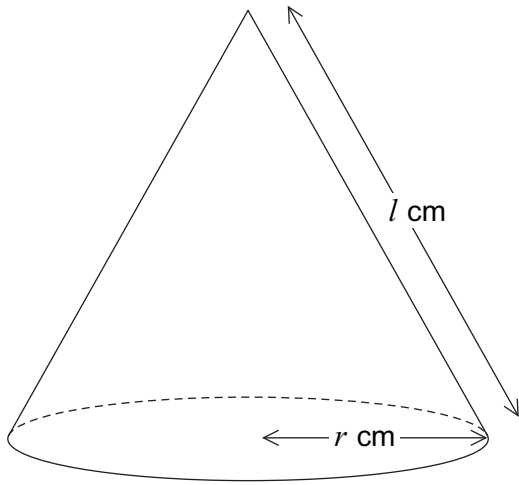
Turn over ►



26

A cone has base radius r cm and slant height l cm

A hemisphere has radius r cm



26 (a)

The curved surface area of the cone equals the curved surface area of the hemisphere.

Show that $l = 2r$

[1 mark]

.....

.....

.....



27 Work out the values of a when

$$2^{a^2} = 8^a \times 16$$

Do **not** use trial and improvement.
You **must** show your working.

[4 marks]

.....

.....

.....

.....

.....

.....

.....

.....

.....

.....

.....

.....

.....

.....

.....

Answer

END OF QUESTIONS

