



# Key skills Information and communication technology Level 1 Test Paper

## YOU NEED

- This test paper
- An answer sheet

You may use a bilingual dictionary

---

Do NOT open this paper until you are told to do so by the supervisor

**THERE ARE 40 QUESTIONS IN THIS TEST**

**Total marks available: 40**

**Try to answer ALL the questions**

**YOU HAVE 1 HOUR TO FINISH THE TEST**

---

## INSTRUCTIONS

- Make sure your personal details are entered correctly on the answer sheet
  - Read each question carefully
  - Follow the instructions on how to complete the answer sheet
  - At the end of the test, hand the test paper, your answer sheet and all notes to the supervisor
- 

**REMEMBER: YOU HAVE 1 HOUR TO FINISH THE TEST**


---

## INSTRUCTIONS TO CENTRES

**This paper must not be photocopied**

Questions 1 to 6 are about this letter.

**The Old Bakery**  
**The Old Court House**  
**Laylock**  
**LA2 5NM**



13 June 2007

Mr F Coles

Dear Mr Coles

Thank you for your interest in our organisation and in our breadmaking processes.

The Old Bakery believes that:

- the food we eat affects our health
- the way we produce our food both influences and reflects the quality of our society.

We put our principles into practice in various ways.

1. Hands-on baking courses for amateurs and professionals
2. Training that uses breadmaking for team development
3. Pressure on the bread industry to return to natural methods

If you would like further details about any of our breadmaking courses or our team development programmes, please do not hesitate to write to me at the address above. Thousands of individuals have enjoyed the stress-relieving benefits that only breadmaking can give.

Yours sincerely

***J Brown***

J Brown  
Customer Relations Manager

Labels: P points to the top left corner; Q points to the image; R points to the bulleted list; S points to the numbered list; T points to the paragraph about further details; U points to the signature block.

1 To move the image at Q to the position shown at P, the user should

- A cut and paste
- B copy and paste
- C crop the image
- D find and replace

- 2 The font style of the lines of text at **U** is
- A bold
  - B italic
  - C underlined
  - D italic underlined
- 3 The text at **R** is presented
- A as a table
  - B centre aligned
  - C as a bulleted list
  - D as a numbered list
- 4 The standard element of information missing from this letter is the
- A receiver's name
  - B sender's address
  - C date of the letter
  - D receiver's address
- 5 To make the space between the text and the edge of the page, as shown at **T**, narrower the user should
- A increase the left margin
  - B increase the right margin
  - C decrease the left margin
  - D decrease the right margin
- 6 If the line of text at **S** is deleted, the line beneath it will automatically become number 1 because it is in a
- A table
  - B footer
  - C bulleted list
  - D numbered list

Questions 7 to 12 are about this spreadsheet. Formulas are used to calculate values in columns F and H and rows 10 and 11.

|    | A  | B             | C             | D             | E             | F           | G            | H         |
|----|--|---------------|---------------|---------------|---------------|-------------|--------------|-----------|
| 1  | Inflight soft drinks sales – Week ending 11 March 2007 |               |               |               |               |             |              |           |
| 2  | Drink  | Sales         |               |               |               | Total Sales | Price        | Income    |
| 3  |  | Flight GR5067 | Flight GR8060 | Flight GR9031 | Flight GR9047 |             |              |           |
| 4  | Orange juice   | 142           | 183           | 122           | 201           | 648         | £1.10        | £712.80   |
| 5  | Apple juice  | 222           | 163           | 189           | 243           | 817         | £1.10        | £898.70   |
| 6  | Still water  | 232           | 275           | 242           | 267           | 1,016       | £1.50        | £1,524.00 |
| 7  | Sparkling water  | 201           | 149           | 169           | 192           | 711         | £1.50        | £1,066.50 |
| 8  | Tea  | 111           | 123           | 86            | 99            | 419         | £1.20        | £502.80   |
| 9  | Coffee   | 188           | 186           | 142           | 139           | 655         | £1.20        | £786.00   |
| 10 |  |               |               |               |               |             | <b>Total</b> | £5,490.80 |
| 11 | <b>Maximum</b>   | 232           | 275           | 242           | 267           |             |              |           |

7 A correct formula in cell **F4** to calculate the sales of orange juice on all flights is

- A =B4+C4+E4
- B =SUM(B4:F4)
- C =SUM(B4:E4)
- D =SUM(B4:D4)

8 To display the text in cell **A7** on a single line, the user should

- A increase the height of row 7
- B decrease the height of row 8
- C increase the width of column A
- D decrease the width of column B

9 **Income** is **Total Sales** multiplied by **Price**. The formula in cell **H6** is

- A =H6\*H10
- B =F6\*G9
- C =F6\*H6
- D =F6\*G6

10 The data in cell range B4:B9 is

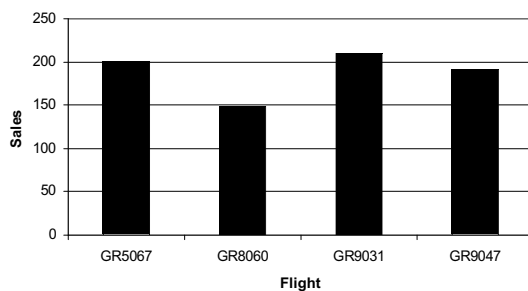
- A text
- B date
- C number
- D currency

11 To check that all the data has been entered correctly into this spreadsheet, the user should

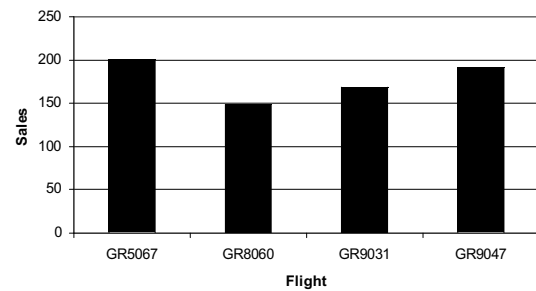
- A use print preview
- B use a spell checker
- C proof read the data
- D save the file frequently

12 The chart that shows the sales for sparkling water on each flight is

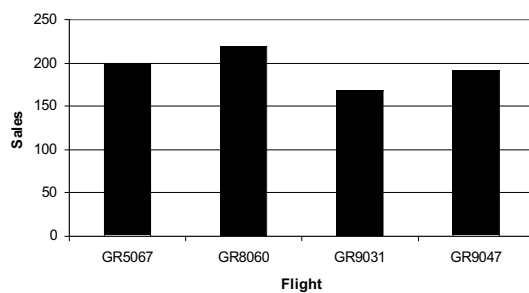
A



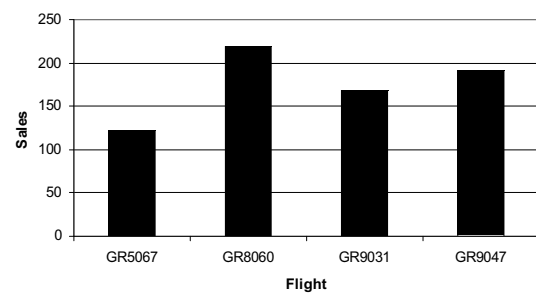
B



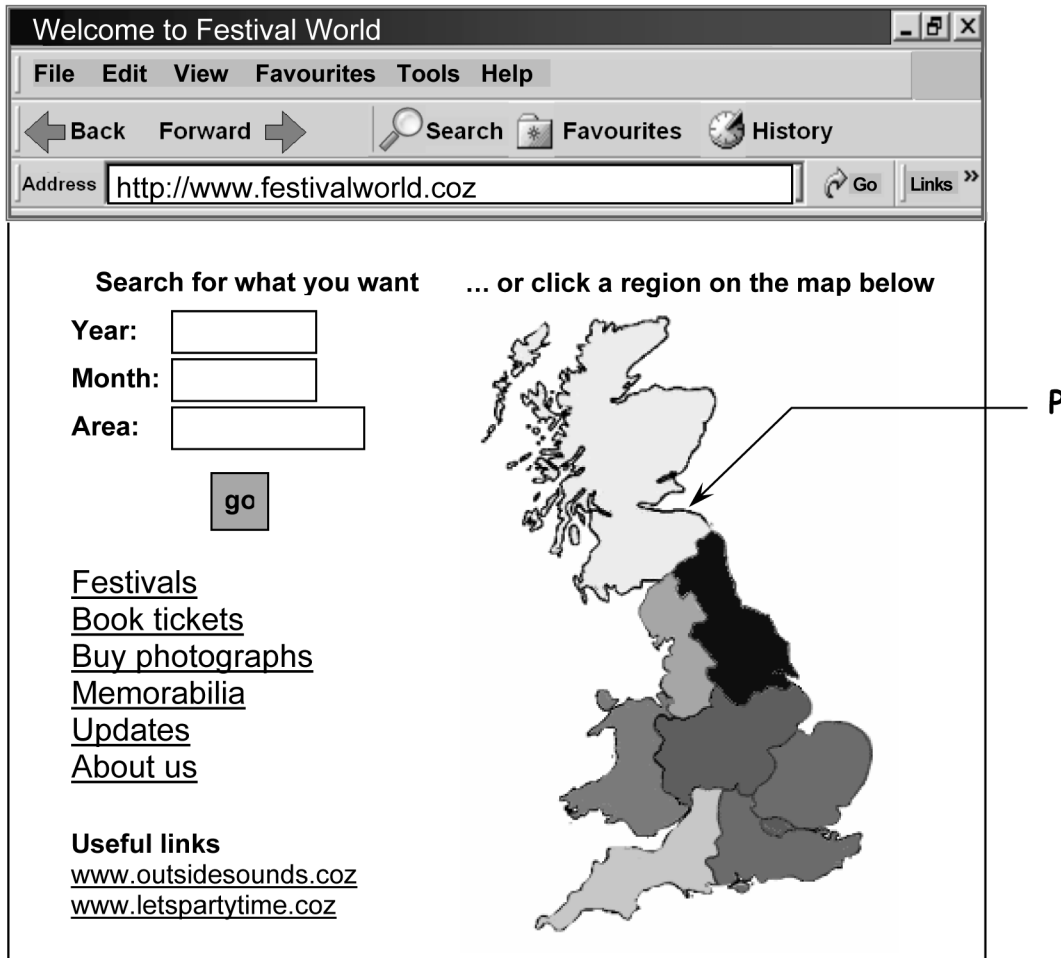
C



D



Questions 13 to 16 are about this web page.



13 The address of this website is

- A Welcome to Festival World
- B [www.outsidesounds.coz](http://www.outsidesounds.coz)
- C [www.letspartytime.coz](http://www.letspartytime.coz)
- D [www.festivalworld.coz](http://www.festivalworld.coz)

14 Clicking on any region on the map at P displays another web page. The regions on the map are

- A passwords
- B wildcards
- C hotspots
- D bullets

- 15 To use the internet to find more websites about music festivals, the user should use
- A a telephone directory
  - B music magazines
  - C a search engine
  - D a DVD
- 16 Festival World sells tickets via this website only. This disadvantages those who do not
- A go to music festivals regularly
  - B have access to the internet
  - C have their own website
  - D live in Great Britain

**Please go on to the next page**

Questions 17 to 22 are about this database.

| Car Registration | Make     | Model  | Price   | Engine Size | Colour | Year | Mileage |
|------------------|----------|--------|---------|-------------|--------|------|---------|
| V119DEF          | Vauxhall | Corsa  | £5,499  | 1,000       | Green  | 2002 | 35,000  |
| V198FRC          | Vauxhall | Astra  | £5,999  | 1,600       | Blue   | 2002 | 19,000  |
| V253HYT          | VW       | Passat | £11,995 | 1,800       | Silver | 2002 | 55,000  |
| T268BCF          | VW       | Polo   | £4,495  | 1,000       | Red    | 2001 | 66,000  |
| V345FVG          | Ford     | Fiesta | £4,499  | 1,300       | White  | 2002 | 39,000  |
| V376JNH          | Vauxhall | Astra  | £6,999  | 1,600       | Blue   | 2002 | 21,000  |
| V473FDF          | Ford     | Fiesta | £5,999  | 1,800       | Red    | 2002 | 54,000  |
| V685JVG          | Ford     | Fiesta | £6,499  | 1,600       | Blue   | 2002 | 120,000 |
| V937MFD          | VW       | Passat | £11,995 | 1,800       | Green  | 2001 | 27,000  |

- 17 The price of the white Ford Fiesta is
- A £4,495
  - B £4,499
  - C £5,999
  - D £6,499
- 18 The search criterion to find the records for Vauxhall cars only is
- A Make ="Vauxhall"
  - B Model ="Vauxhall"
  - C Make ="Vauxhall cars"
  - D Model ="Vauxhall Astra and Corsa"
- 19 The search criterion to find all cars priced under £6,000 is
- A Price <£6,000
  - B Price >£6,000
  - C Price =£6,000
  - D Price ="priced under £6,000"
- 20 To remove all details of the mileage of each car from the database, the user should
- A insert a new field
  - B delete the Mileage field
  - C add a new record to the database
  - D delete all records with a mileage in them



- 21 To list the cars in A to Z order of the colour, the user should sort
- A ascending on Colour
  - B descending on Colour
  - C ascending on Car Registration
  - D descending on Car Registration
- 22 Access to this database file can be restricted by using a
- A wildcard
  - B password
  - C backup file
  - D copyright symbol

**Please go on to the next page**

Questions 23 to 28 are about this document.

P → Save Your 25% Campaign page 3 of 12

**Top 10 energy saving measures**

Q → To get you kick started on your drive to "Save Your 25%" here are our top 10 energy saving measures. They say you have to speculate to accumulate and, by following the top 10 energy saving measures below, you are guaranteed a great return on your investment, both financially and environmentally.


These energy saving measures could help you shave at least £300 off your nnuual energy bill and enable you to reduce your carbon dioxide emissions by two tonnes. You do not have to implement them all at once. Try phasing them into your lifestyle and family life. Here's how you do it.

R →

|   |                                   |
|---|-----------------------------------|
| Do not leave appliances on standby.     | Buy energy-saving appliances.     |
| Install at least 3 energy-saving bulbs. | Turn your thermostat down by 1°C. |
| Only boil as much water as needed.      | Wash your laundry at 30°C.        |
| Insulate your loft.                     | Install cavity wall insulation.   |
| Do not use the car for short journeys.  | Upgrade your boiler.              |

S →

**Generate your own energy**

 Small scale, building-integrated wind turbines suitable for urban locations are currently being developed and will be available to install in homes and other buildings within the next few years.

23 The line of text at P was entered on page 1 and appears automatically on every page because it is

- A in a cell
- B in a table
- C in a header
- D fully justified

24 The paragraphs at Q are presented with inconsistent

- A fonts
- B alignment
- C line spacing
- D font styles

25 The text 'nnual' at R should be the word 'annual'. This error can be found automatically with software by using

- A print preview
- B a spell checker
- C find and replace
- D an online calendar

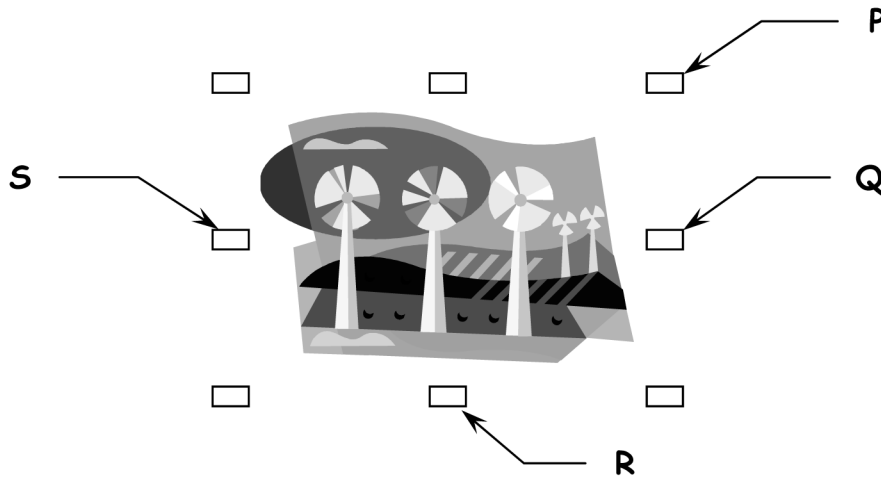
26 The way to position the lines of text as shown at **S** is to use

- A a left tab
- B a right tab
- C a centre tab
- D right alignment

27 The page setup for this document includes landscape orientation. This means that the layout

- A is short and wide
- B is tall and narrow
- C has wide margins
- D has page numbering

28 To make the image below wider and taller, the user should use the handle at



- A P
- B Q
- C R
- D S

Questions 29 to 34 are about this spreadsheet. Formulas are used to calculate values in columns D and F.

|    | A                                      | B              | C              | D          | E                | F          |
|----|--|----------------|----------------|------------|------------------|------------|
| 1  | Promotional Gifts Order Number: 956023 |                |                |            |                  |            |
| 2  | Item                                   | Number in Pack | Pack Price     | Item Price | Quantity Ordered | Amount Due |
| 3  | Mug                                    | 250            | £330.00        | £1.32      | 3                | £990.00    |
| 4  | Ruler                                  | 500            | £325.00        | £0.65      | 2                | £650.00    |
| 5  | Pen                                    | 500            | £195.95        | £0.39      | 2                | £391.90    |
| 6  | Pencil                                 | 500            | £130.00        | £0.26      | 2                | £260.00    |
| 7  | Torch                                  | 25             | £396.25        | £15.85     | 4                | £1,585.00  |
| 8  | Desk Set                               | 100            | £365.50        | £3.66      | 3                | £1,096.50  |
| 9  | Radio                                  | 25             | £103.50        | £4.14      | 2                | £207.00    |
| 10 | Yo-Yo                                  | 100            | £236.00        | £2.36      | 5                | £1,180.00  |
| 11 |  |                |                |            | <b>Total</b>     | £6,360.40  |
| 12 |  |                | <b>Lowest</b>  | £0.26      |                  |            |
| 13 |  |                | <b>Highest</b> | £15.85     |                  |            |

29 The **Number in Pack** for the radio should be 50. To correct this error, the user should

- A delete row 9
- B format cell B9
- C amend the data in cell B9
- D enter a new formula in cell B9

30 To include the details of the colour of each item, the user should insert a

- A cell
- B row
- C field
- D column

31 The correct formula to find the lowest item price is

- A =MIN(C3:C10)
- B =MIN(D3:D10)
- C =MAX(C3:C10)
- D =MAX(D3:D10)


32 Amount Due is Pack Price multiplied by Quantity Ordered. If the value in cell E3 is changed, the other values that will change automatically are in cells

- A C3, D3
- B D3, F3
- C F3, F11
- D D12, F3, F11

33 The information in cell range D3:D10 is horizontally aligned

- A left
- B right
- C centre
- D fully justified

34 The chart below displays data from the spreadsheet as a



- A table
- B pie chart
- C bar chart
- D line graph

Questions 35 to 40 are general questions.

- 35 A suitable way to present rapidly changing information, such as actual flight arrival and departure times, to a wide audience is by using
- A a DVD
  - B a web page
  - C a printed timetable
  - D monthly newsletters
- 36 Every instance of a particular word in a document can be changed automatically with software by using
- A print preview
  - B copy and paste
  - C a spell checker
  - D find and replace
- 37 The © symbol on a document means that the document is
- A copied
  - B correct
  - C current
  - D protected by copyright
- 38 Making frequent backup files helps make sure that, if a file is damaged
- A physical stress is reduced
  - B virus infection is less likely
  - C loss of data is kept to a minimum
  - D information is entered accurately into files
- 39 A potential human physical problem for those who use computer screens for long periods without taking breaks is
- A eye strain
  - B disk failure
  - C loss of data
  - D a computer virus

- 40 A computer virus can cause
- A vandalism
  - B loss of data
  - C trailing cables
  - D Repetitive Strain Injury (RSI)

**End of Test**

**BLANK PAGE**