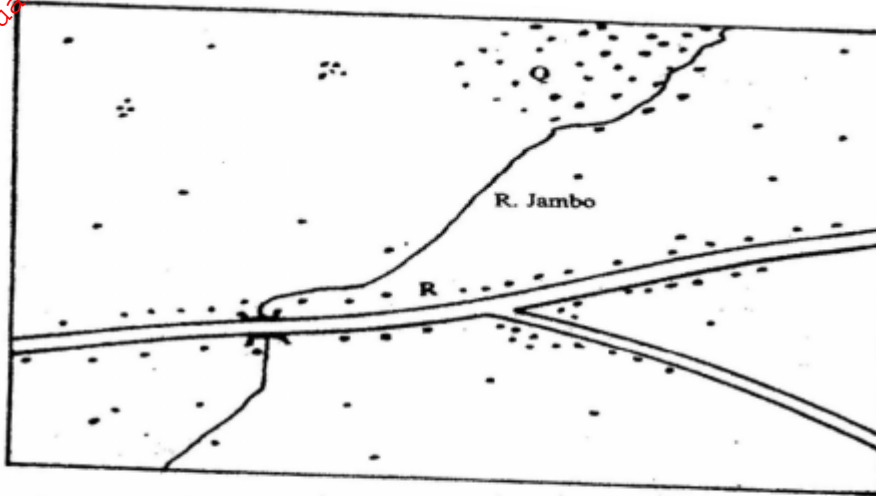


GEOGRAPHY PAPER 2 2005

Answer all questions in section A. In section B answers question 6 and any other two questions

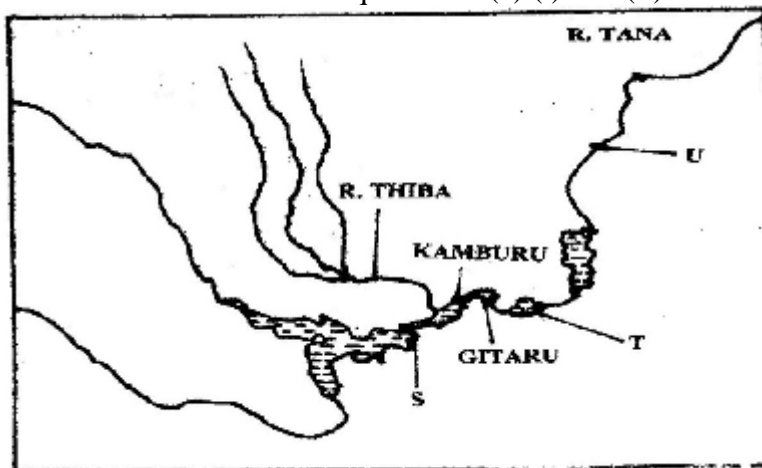
SECTION A

1. (a) Name the two types of human settlements (2 mks)
 Use the sketch map below to answer questions (b)



KEY	
	Settlements
	Road
	River

- (b) Identify the settlement pattern marked Q and R (2 mks)
2. (a) State three characteristics of Jua Kali industries in Kenya (3 mks)
 (b) Give three problems facing the Jua Kali Industries in Kenya (3 mks)
3. The Sketch map below shows Hydro- Electric Power (H.E.P) stations along the River Tana. Use it to answer questions (a) (i) and (ii)



Name _____

- (i) The H.E.P station marked S and T (2 mks)
 - (ii) The proposed H.E.P station marked U (1 mk)
 - (b) Apart from water. Give two renewable sources of industries energy (2mks)
4. State four ways in which drought affects the agricultural sector in Kenya (4 mks)
5. (a) Give three conditions that are necessary for bee keeping (4 mks)
- (b) State three reasons why the government of Kenya is encouraging bee keeping in the country (3 mks)

SECTION B

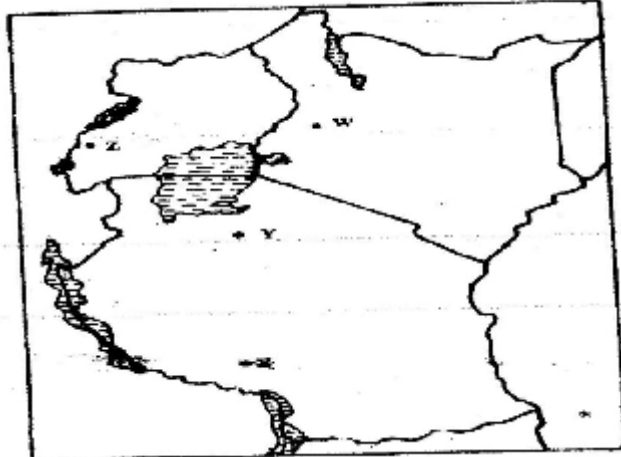
Answer question 6 and any other two questions in this section

6. The table below shows the approximation of four districts in central province in 1999. Use it to answer question (a)

POPULATION FOR DISTRICTS IN CENTRAL PROVINCE

DISTRICT	POPULATION
Murang'a	350,000
Maragua	390,000
Nyandarua	470,000
Thika	650,000
Total	1,860,000

- (a) (i) Suggest two possible reasons why the population of Thika is higher than that of Murang'a (2mks)
- (ii) Using a radius of 5 cm, draw a pie chart to represent the data above(9mks)
- (iii) A part from pie charts, name two other statistical methods that can be used to represent the data in the table. (2mks)
- b) i) Give three advantages of using a pie chart to represent data (3mks)
- ii) State three reasons why it is necessary for a country to carry our population census. (3mks)
- c) Explain how the following factors have led to the population increase in Kenya.
- i) Early marriages (2mks)
 - ii) Improved medical facilities (2 mks)
 - iii) Cultural beliefs (2mks)
7. Use the map of East Africa below to answer question (a) (i)



- a) i) Identify the mineral mined in the areas marked W,Z ,X and Z (4mks)
Name: _____
- i) Three methods of mining (3mks)
- ii) Two sea ports through which some of the minerals mined in East Africa are exported. (2mks)
- b) State five factors that influence the exploitation of minerals (5mks)
- c) Explain four ways in which soda ash contributes to the economy of Kenya (8mks)
- d) state three ways in which mining derelicts can be reclaimed (3mks)
- 8a) i) Name two provinces in Kenya where wheat is grown on large scale(2mks)
- ii) Explain four physical conditions that favour wheat growing in Kenya (8mks)
- b) Compare wheat farming in Canada and / Kenya under the following
- i) Storage (2mks)
- ii) Transportation (2mks)
- iii) Marketing (2mks)
- c) i) Explain three climate problems that affect wheat farming in Canada(6mks)
- ii) Give three uses of wheat (2mks)
9. a) i) Define international trade (2mks)
- ii) Name three major imports from Europe to Kenya (3mks)
- b) State four factors that influence external trade in Kenya (4mks)
- c) Explain four ways through which Kenya will benefit the renewed East Africa Cooperation (8mks)
- d) Explain four negative effects of international trade (8mks)