

JUNIOR LYCEUM ANNUAL EXAMINATIONS 2002
Educational Assessment Unit – Education Division

FORM 1

GEOGRAPHY

Time 1hr 30mins

NAME: _____

CLASS: _____

Work out ALL questions. All answers should be written on this paper.

1. Study the map extract of Mtarfa on scale 1:2 500. Now answer the following.

(a) The Cart Ruts are to the _____ of Ix-Xaghra l-Hawlija.
(2 marks)

(b) The Pond is to the _____ of the Chapel.
(2 marks)

(c) Name one historical attraction found in the area shown by the map.

(2 marks)

(d) What is the distance along the road between the Bridge and the Pond.
_____ metres
(2 marks)

(e) What can we find at the following grid squares:

(i) 4120 _____

(ii) 4222 _____

(iii) 4224 _____

(iv) 4122 _____

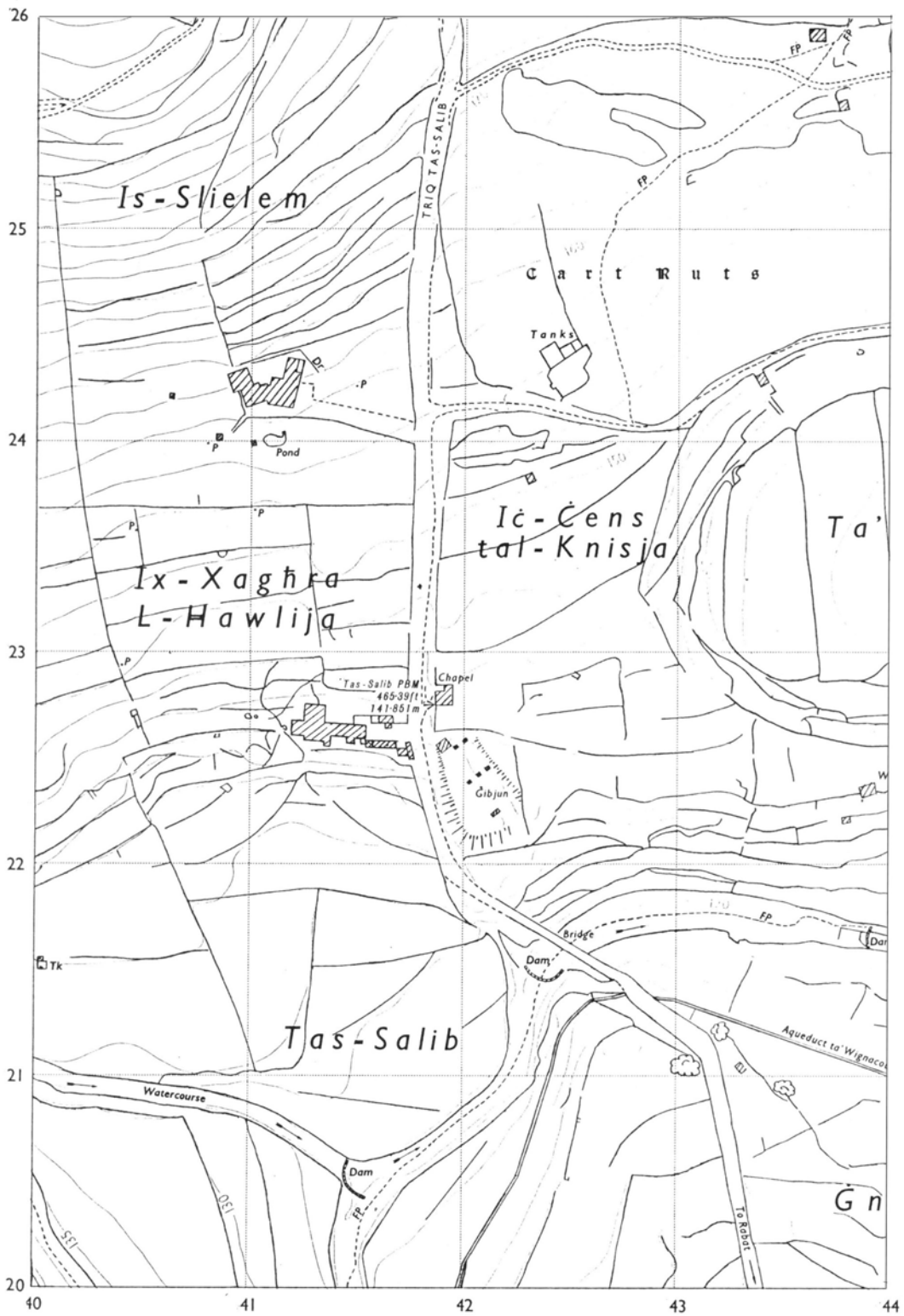
(v) 4321 _____ **(5 marks)**

(f) On the map itself draw a

- (i) a quarry at grid square 4020
 - (ii) a factory at grid square 4224
 - (iii) a letter **X** at a place which is 130 metres above sea level.
- (6 marks)**

(g) The Planning Authority was against the building of a factory in grid square 4224. Why do you think so?

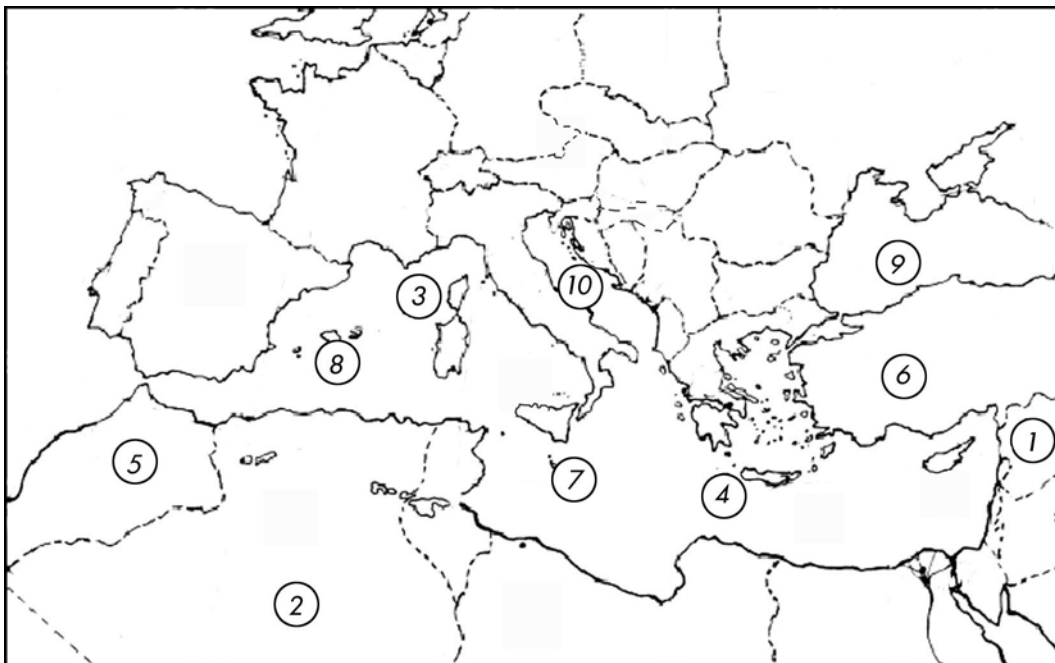
(2 marks)



2. Refer to the map of the Mediterranean. Now fill in the table below.

Continent	1		2	
Island	3		4	
Countries	5		6	
Archipelago	7		8	
Seas	9		10	

(10 marks)



3. Answer the following question on tourism in Malta.

(a) Where do most tourists to Malta come from?

(b) What is the approximate number of tourists who visit Malta every year?

(c) Why do you think most tourists visit Malta in summer?

(d) Give one other reason why tourists come to Malta even during winter.

(e) Give one reason why tourism is important for the Maltese economy.


(5 marks)

4. (a) Fill in the blanks with the correct answer.

- (i) Meteorologists are expert people who study the _____ .
- (ii) _____ is how hot or cold the air is.
- (iii) Our earth receives its heat from the _____ .
- (iv) We measure temperature with a _____ .
- (v) Many weather instruments are placed in a box called _____ .
- (vi) The instrument used to measure the amount of rain that falls every day is called the _____ .
- (vii) Rainfall is measured in _____ .

(14 marks)

(b) Write three sentences about the box shown in the picture.




(6 marks)

(c) Use the figures below to draw a temperature graph on the outline provided below.

Malta – Mean Average Monthly Temperature

Months	J	F	M	A	M	J	J	A	S	O	N	D
Temperature °C	14	13	14	17	21	24	28	27	24	21	16	13



(14 marks)

5. Answer these questions about the rocks of the Maltese Islands.

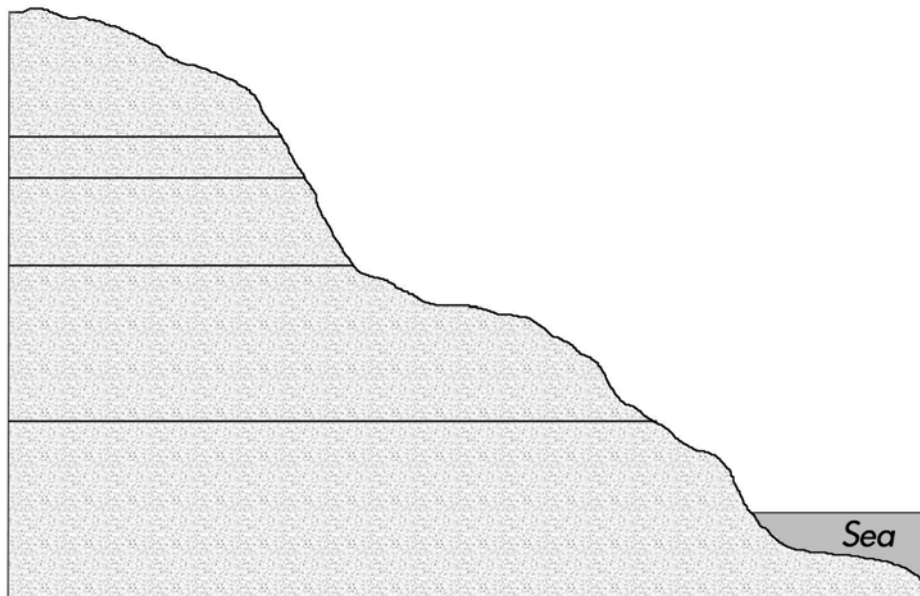
(a) What is geology?

(b) Why is the water table important?

(c) How do fossils form over the span of time?

(6 marks)

6. On the outline drawing below name the five layers of rocks of Malta. Give the English terms.



(10 marks)

7. Refer to the photo and answer the following questions.



a. What type of fishing boat is seen in the photo?

(1 mark)

b. Name another type of fishing boat besides the one shown in the photo above.

(1 mark)

c. Why do you think that the fishing boat shown above is not suitable for staying at sea for more than a day?

(2 marks)

d. The photo shows two piles of nets. These are used to catch fish. Name another way how fish can be caught by local fishermen.

(2 marks)

8. Write in detail about **one** of the following topics:

a. Fish-farming

b. Types of farming systems in the Maltese Islands.

(8 marks)

End of Paper