

JUNIOR LYCEUMS FINAL EXAMINATIONS 2001

Education Assessment Unit - Education Division

FORM I

GEOGRAPHY GENERAL

Time: 1hr. 30mins

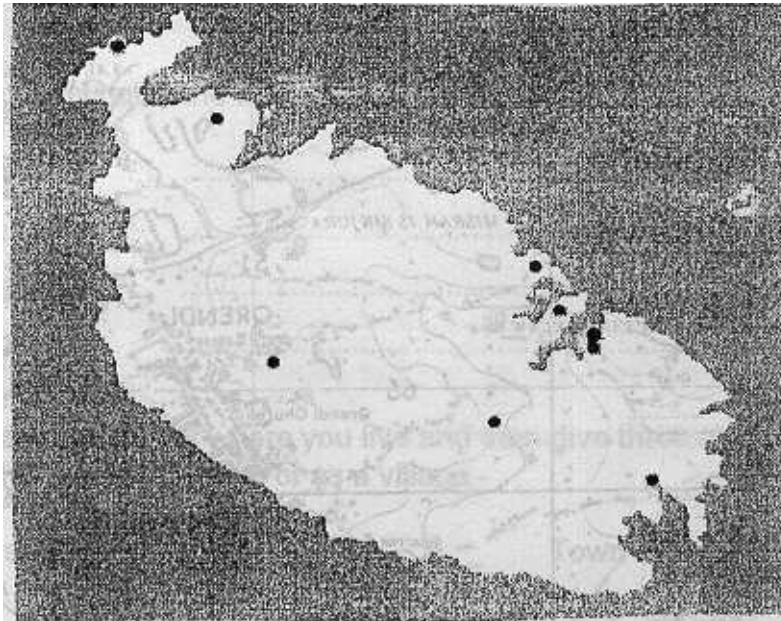
NAME - _____

CLASS _____

Read carefully the instructions given. Then work out all the exercises using good English.

A. Nine places are marked by dots on the given map of Malta. Fill in the blanks with the relevant names chosen from the following list of places :

**Mellieħa, Valletta, Rabat, Hal-Luqa,
Vittoriosa, Cospicua, Sliema, Ċirkewwa, Marsaxlokk**



1. Name the settlement to the south east of Valletta. _____
2. Name the location to the north west of Mellieħa. _____
3. Name the settlement to the south of Sliema. _____
4. Name the settlement to the south east of Mellieħa. _____
5. Name the settlement which lies exactly to the north of Cospicua. _____
6. Name three settlements which have a coastal location - _____

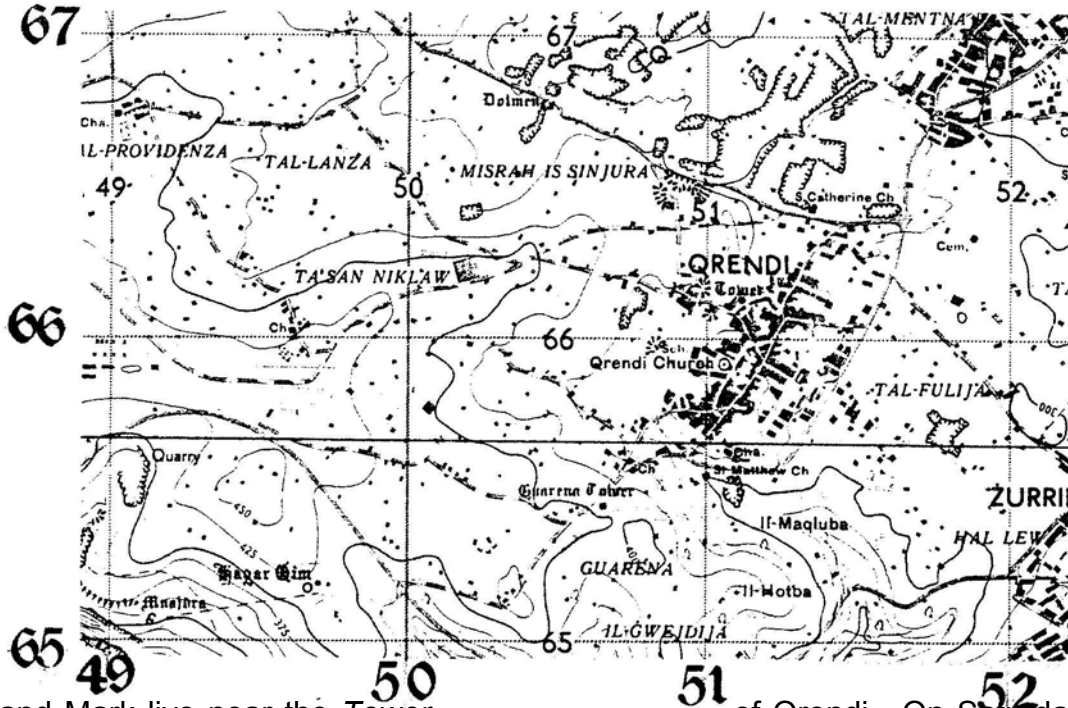
8 marks

B (i) Draw the following map symbols using a pencil or pencil colours -

1. Secondary road	
2. Well	
3. Quarry	
4. Lighthouse	
5. Main Road	

5 marks

B (ii) Refer to the given OS Map and then fill in the blanks with the corresponding 4 figure Grid References of the places printed in Italics.



Janice and Mark live near the *Tower* _____ of Qrendi. On Saturday, together with their parents, they like to explore special places of historical or geographical importance. They have visited the *Temples of Hagar Qim* _____ and the *Dolmen* _____ on the way to Rabat. Janice above all likes to visit *Il- Maqluba* _____ for she likes looking down at all the different trees and plants. Mark prefers to walk up to the *Chapel at Ta' San Niklaw* _____ in order to set off his pigeons free.

10 marks

B (iii) Mark has taken his favourite pigeon called 'Tweety' to the Chapel at Ta' San Niklaw. Calculate the straight distance that the pigeon 'Tweety' has to fly from outside this chapel to reach Mark's home near the Tower of Qrendi. The scale is 1:25000.

5 marks

.....

C (i) Name one traffic facility or traffic sign that can be used to solve each of the following problems -

- 1. Pedestrians find it difficult to cross a busy _____ road.
- 2. Traffic congestion along a narrow road. _____
- 3. Frequent car accidents at cross-roads. _____
- 4. Parking in the wrong place. _____
- 5. Noise from cars near a hospital. _____

10 marks

C (ii) Explain what is the use of the following sea crafts -

- 1. Trawlers
- 2. Cargo ships
- 3. Cruise liners
- 4. Oil tankers

8 marks

D Name the settlement where you live and then give three reasons why you would classify this place as a town or as a village -

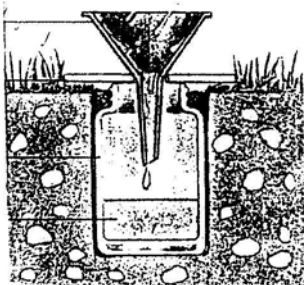
Name of settlement _____ Town or Village _____

1 mark

Reasons -

- 1.....2.....
-
- 3.....9 marks

E (i) Name the following weather instrument -



_____ 2 marks

E (ii) Write a paragraph to describe this instrument and to explain how it is used.

.....

.....

.....

.....

.....

.....

.....8 marks

F. Fill in the blanks with the relevant type of rock found in Malta -

1. The _____ layer is an impermeable type of rock.
2. The _____ is the hardest rock found in Malta.
3. The _____ breaks down into red soil called Terra Rossa.
4. The _____ layer is rather thin everywhere and easily crumbles into golden sands.
5. The _____ is used as a building stone.
6. In high places where there are all the five layers of rock one can find the _____ on top.
7. In the past the _____ was used for the making of pottery.
8. The _____ was the first layer of rock to be formed under the sea.

16 marks

G. Fill in the blanks of the following Farming System -

Input		Throughput		Output	
Nature's Inputs		Farmer's Inputs		Farmer's Output	Market :
1 _____	+	1 _____	=	1 _____	1. Local or for 2 _____
2 _____		2 _____		2 _____	
3 _____		3 _____			

18 marks