



2012-GP

Test Paper Code: GP

Time: 3 Hours

Maximum Marks: 300

INSTRUCTIONS

1. This question-cum-answer booklet has **58** pages and has **66** questions. Please ensure that the copy of the question-cum-answer booklet you have received contains all the questions.
2. Write your **Registration Number, Name and the name of the Test Centre** in the appropriate space provided on the right side.
3. Write the answers to the objective questions in the **Answer Table for Objective Questions**, provided on Page Number **GP-iii**. Do not write anything else on this page.
4. Each objective question has **4 choices** for its answer: (A), (B), (C) and (D). Only **ONE** of them is the correct answer. There will be **negative marking** for wrong answers to objective questions. The following marking scheme for objective questions shall be used:
 - (a) For each correct answer, you will be awarded **3 (Three)** marks.
 - (b) For each wrong answer, you will be awarded **-1 (Negative one)** mark.
 - (c) Multiple answers to a question will be treated as a wrong answer.
 - (d) For each un-attempted question, you will be awarded **0 (Zero)** mark.
 - (e) Negative marks for objective part(s) will be carried over to total marks.
5. Answer the subjective question only in the space provided after each question.
6. Do not write more than one answer for the same question. In case you attempt a subjective question more than once, please cancel the answer(s) you consider wrong. Otherwise, the answer appearing last only will be evaluated.
7. All answers must be written in blue/black/blue-black ink only. Sketch pen, pencil or ink of any other colour should not be used.
8. All rough work should be done in the space provided and scored out finally.
9. No supplementary sheets will be provided to the candidates.
10. **Clip board, log tables, slide rule, calculator, cellular phone and electronic gadgets in any form are NOT allowed.**
11. The question-cum-answer booklet must be returned in its entirety to the Invigilator before leaving the examination hall. Do not remove any page from this booklet.
12. Refer to special instructions/useful data on the reverse.

Sections Attempted (Select any TWO sections and indicate below with a tickmark ✓)

Geology	Physics	Mathematics

READ INSTRUCTIONS ON THE SIDE OF THIS PAGE CAREFULLY

REGISTRATION NUMBER

--	--	--	--	--	--	--

Name:

Name:

Test Centre:

Test Centre:

Do not write your Registration Number or Name anywhere else in this question-cum-answer booklet.

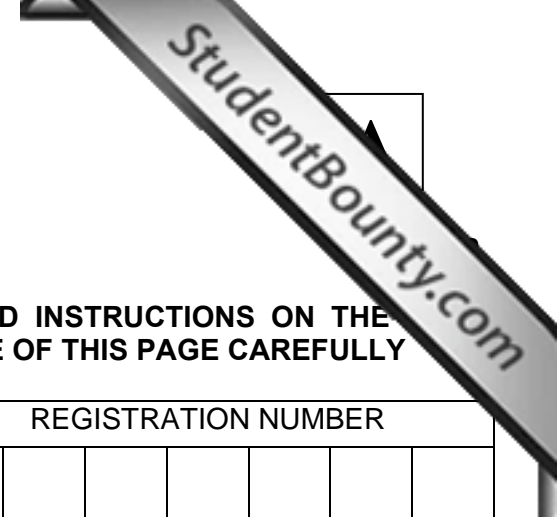
Do not write your Registration Number or Name anywhere else in this question-cum-answer booklet.
--

I have read all the instructions and shall abide by them.

I have read all the instructions and shall abide by them.
..... Signature of the Candidate

I have verified the information filled by the Candidate above.

I have verified the information filled by the Candidate above.
..... Signature of the Invigilator



Special Instructions/ Useful Data

1. \mathbb{R} denotes the set of real numbers.
2. \mathbb{C} denotes the set of complex numbers.
3. \mathbb{N} denotes the set of natural numbers.

IMPORTANT NOTE FOR CANDIDATES

- Select any ***TWO*** Sections among the three listed below.
- **Geology Section** :
Q. Nos. 1-15 (Objective Questions) and Q. Nos. 16-22 (Subjective Questions).
- **Physics Section** :
Q. Nos. 23-37 (Objective Questions) and Q. Nos. 38-44 (Subjective Questions).
- **Mathematics Section** :
Q. Nos. 45-59 (Objective Questions) and Q. Nos. 60-66 (Subjective Questions).
- Attempt objective and subjective questions of the selected ***TWO*** sections.
- Indicate which two sections you have attempted in the box on the front page.
- Objective questions carry ***three*** marks each and subjective questions carry ***fifteen*** marks each.
- Write the answers to the objective questions of the selected 2 sections in the **Answer Table for Objective Questions** provided on page X only.

GEOLOGY SECTION OBJECTIVE QUESTIONS

- Q.1 Which one of the following landforms results exclusively from glacial melt waters?
- (A) Roches moutonneés
(B) Eskers
(C) Hanging valleys
(D) Cirques
- Q.2 Wind-laid dust deposits consisting largely of silt are known as
- (A) dunes (B) playas (C) pediments (D) loess
- Q.3 Coarse sediments accumulating at the inner-side of loops of meandering rivers are called
- (A) point bars (B) spits (C) barrier islands (D) bay barriers
- Q.4 Match the minerals in Group I with their respective polymorphs in Group II.

Group I**Group II**

- | | |
|----------------|----------------|
| P. Sillimanite | 1. Calcite |
| Q. Tridymite | 2. Pyrite |
| R. Aragonite | 3. Kyanite |
| S. Troilite | 4. Crisobalite |
- (A) P-3, Q-4, R-1, S-2
(B) P-3, Q-1, R-2, S-4
(C) P-4, Q-2, R-3, S-1
(D) P-1, Q-2, R-4, S-3

Q.5 Match the geological units in Group I with the appropriate parts of the geological time scale in Group II.

Group IGroup II

- | | |
|------------------------|---------------------------------|
| P. Siwalik Supergroup | 1. Permian-Jurassic |
| Q. Cuddapah Supergroup | 2. Cretaceous-Tertiary boundary |
| R. Gondwana Supergroup | 3. Proterozoic |
| S. Deccan Trap | 4. Miocene-Pleistocene |
- (A) P-1, Q-2, R-4, S-3
 (B) P-2, Q-1, R-3, S-4
 (C) P-4, Q-3, R-2, S-1
 (D) P-4, Q-3, R-1, S-2

Q.6 Match the time boundaries in Group I with the corresponding ages in Group II.

Group IGroup II

- | | |
|----------------------------------|--------------------------|
| P. Archaean-Proterozoic boundary | 1. ~ 550 Ma |
| Q. Cretaceous-Tertiary boundary | 2. ~ 66.5 Ma |
| R. Precambrian-Cambrian boundary | 3. ~ 10 ⁴ Yrs |
| S. Pleistocene-Holocene boundary | 4. ~ 2500 Ma |
- (A) P-4, Q-2, R-1, S-3
 (B) P-1, Q-2, R-3, S-4
 (C) P-1, Q-2, R-4, S-3
 (D) P-4, Q-1, R-3, S-2

Q.7 Diamond-bearing conglomerates are found along the contact between

- (A) Bababudan Group and Chitradurga Group
 (B) Chari Formation and Katrol Formation
 (C) Rewa Group and Bhandar Group
 (D) Surma Group and Tipam Group

Q.8 The Q-A-P-F double triangle in the IUGS classification scheme for the entire range of igneous rocks should be used when the volume of the ultramafic mineral component in the rock is

- (A) > 90% (B) < 90% (C) > 66% (D) < 66%

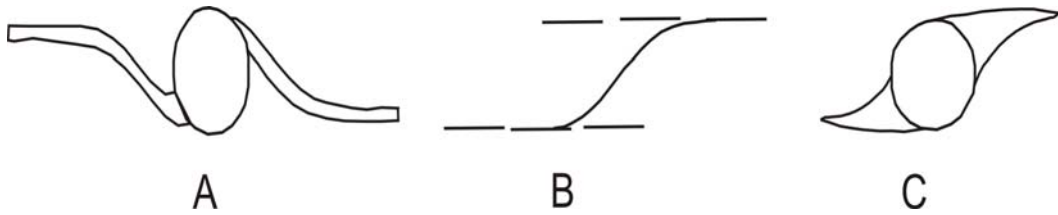
Q.9 A highly porous lithology

- (A) always has high permeability
 (B) always has low permeability
 (C) may or may not have high permeability
 (D) always has water inside the pore space

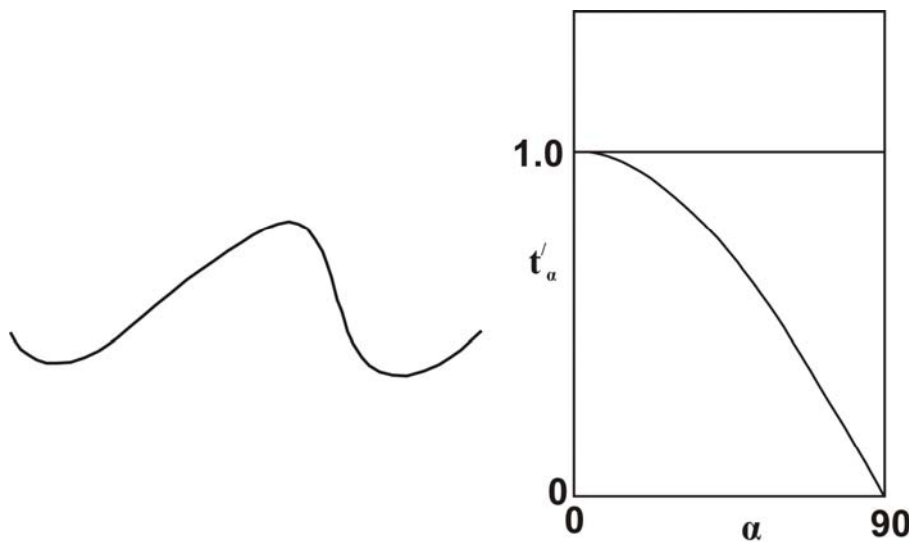
- Q.10 In rocks of which metamorphic facies would you expect to find micro-diamonds?
(A) amphibolite (B) granulite (C) greenschist (D) eclogite
- Q.11 In Bombay High, oil mainly occurs in limestone horizons of _____ age.
(A) Cretaceous (B) Palaeocene (C) Miocene (D) Pliocene
- Q.12 A circle of 12 *cm* diameter becomes an ellipse with a major axis of 36 *cm* after constant area homogeneous deformation. What is the length of its minor axis in *cm*?
(A) 2 (B) 4 (C) 6 (D) 8
- Q.13 The sense of ductile shear should be interpreted from rock sections cut
(A) parallel to the main foliation and parallel to the stretching lineation
(B) perpendicular to the main foliation and perpendicular to the stretching lineation
(C) perpendicular to the stretching lineation and parallel to the main foliation
(D) perpendicular to the main foliation and parallel to the stretching lineation
- Q.14 About 80% of the coal reserves of India are in the
(A) Godavari valley (B) Wardha valley (C) Damodar valley (D) Mahanadi valley
- Q.15 In India, Tertiary coal is mainly found in the state of
(A) Kerala (B) Jammu & Kashmir
(C) Bihar (D) Uttar Pradesh

GEOLOGY SECTION SUBJECTIVE QUESTIONS

- Q.16 (a) (i) Define **extension** (e), **stretch** (s) and **quadratic elongation** (λ). (ii) Calculate these parameters for a line that was initially 5 m long and has a final length of 10 m. (6)
- (b) (i) The figure below is a plan view of three ductile shear sense indicators. Name each and identify the sense of shear (dextral or sinistral) in each case.



- (ii) In the fold arc given in figure A below, mark **one** crest point, **one** trough point and **one** point of inflection. Assume that its dip isogons are parallel to the axial trace. Name the fold according to Ramsay's classification scheme. Where do such folds plot in the given graph of t'_α (ratio of thickness measured at a location on the fold limb to thickness measured at the hinge of the fold) versus α (limb inclination) in figure B below? How is a *flattened parallel fold* designated in Ramsay's scheme, and in which field would it plot in figure B below?



A

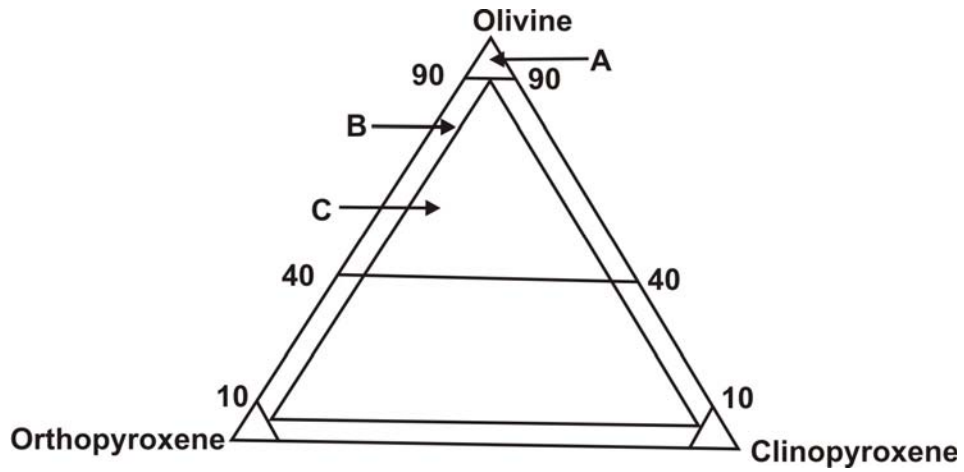
B

(9)

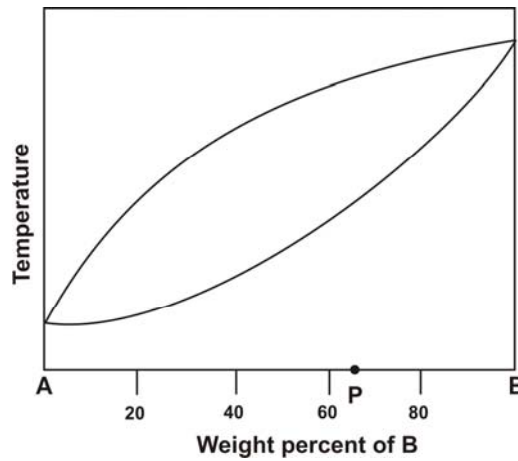
A

StudentBounty.com

Q.17 (a) (i) In the following triangle for the classification of ultramafic rocks, name the rocks **A**, **B** and **C**.



(ii) In the given binary diagram of compounds 'A' and 'B', a solid of composition 'P' is progressively heated. What will be the composition of the first melt formed, and why?



(6)

(b) (i) Under what conditions are an arkose and a quartz arenite expected to form?

(ii) What is 'dedolomitization'? What causes it?

(9)

A

StudentBounty.com

- Q.18 (a) (i) What is the 'Principle of Uniformitarianism'? What are its merits and demerits?
(ii) What characterizes a litho-unit as a 'Formation'? (9)
- (b) Arrange the following stratigraphic units in order of decreasing age:
(i) Talchir Boulder Beds, Dihing Group, Bhuj Formation, Vaikrita Group, Older Metamorphic Group;
(ii) Peninsular Gneissic Complex, Chitradurga Group, Bababudan Group, Sargur Schist (6)

A

StudentBounty.com

- Q. 19 (a) On what physical principle is the concept of isostasy based? Using Pratt's hypothesis, explain why continents are elevated with respect to oceans.
- (b) The P-wave and S-wave velocities (V_p and V_s , respectively) within the Earth are given by the following expressions:

$$V_p = \sqrt{\frac{K + \frac{4\mu}{3}}{\rho}} \quad \text{and} \quad V_s = \sqrt{\frac{\mu}{\rho}}$$

Based on the above, explain



- (i) why V_p and V_s increase with depth in the same compositional layer;
- (ii) why S-waves do not pass through the outer core.

(6)

A

StudentBounty.com

- Q.20 (a) The reaction sets given below have relevance for the genesis of a particular category of copper deposits.

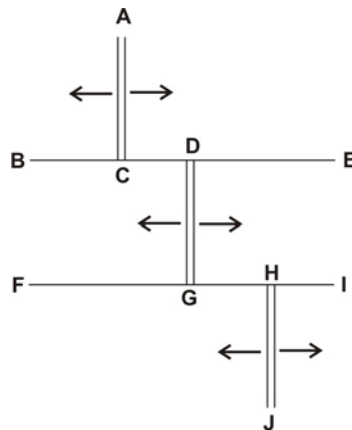


- (i) What is the role of the reactions in Set-A for the formation and exploration of these copper deposits? (ii) What is the importance of the reactions in Set-B for the generation of these copper deposits? (9)
- (b) Which geophysical methods are best suited for the exploration of economic deposits of (i) chromite and (ii) magnetite, and why? (6)

A

StudentBounty.com

Q.21 (a)

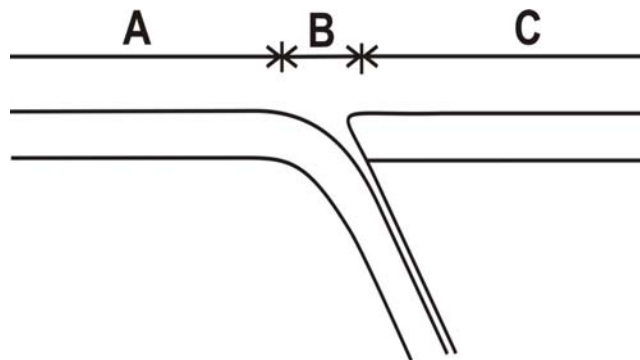


The above figure is a plan view showing a segment of the boundary zone between two plates. The arrows represent the velocity of movement across parts of the boundary. BE and FI are fault scarps that apparently displace the segments AC, DG and HJ.

What type of plate boundary is represented by the segments AC, DG and HJ, and why? What *other* type of motion occurs along the plate boundary in this figure, and in which segments? Which parts of the fault scarps BE and FI experience no earthquakes and why?

(9)

(b)



The figure above is a cross-section through a subduction zone, with the plate to the left subducting below the plate to the right. In which zones (A, B or C) are the trench and volcanic arc located? Which of these zones would be characterized by the highest and the lowest heat flow, and why?

(6)

A

StudentBounty.com

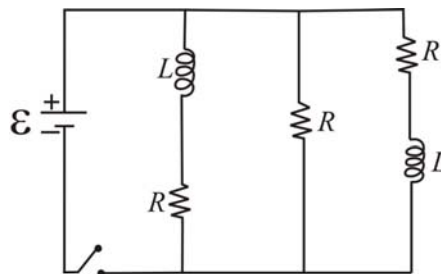
- Q.22 (a) Minerals **A**, **B** and **C** are all anhydrous silicates composed of Na, Al, Si and O. **A** and **C** are framework silicates, while **B** is a chain silicate. **A** is triclinic, **B** is monoclinic and **C** is hexagonal.
- (i) Identify **A**, **B** and **C** and write their chemical formulae.
- (ii) Write down a set of optical properties by which **A**, **B** and **C** can be distinguished in thin section. (9)
- (b) (i) Give 3 ways in which the form $\{100\}$ in the isometric system differs from the form $\{100\}$ in the tetragonal system. (ii) How does the position of aluminium in the crystal structure of grossular garnet ($\text{Ca}_3\text{Al}_2\text{Si}_3\text{O}_{12}$) differ from that in the crystal structure of anorthite ($\text{CaAl}_2\text{Si}_2\text{O}_8$)? (6)

A

StudentBounty.com

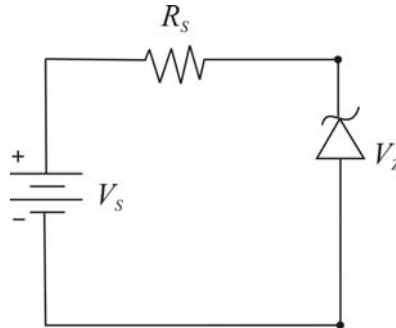
PHYSICS SECTION OBJECTIVE QUESTIONS

- Q.23 The surface of a metal is illuminated alternately with light waves of energies $E_1 = 4.0 \text{ eV}$ and $E_2 = 2.5 \text{ eV}$. The ratio of maximum velocities of the photoelectrons emitted in two cases is 2.0. The work function W of the metal in eV is
- (A) 0.5 (B) 1.5 (C) 2.0 (D) 2.5
- Q.24 A satellite moves in an elliptical orbit around the earth. The minimum and the maximum distances of the satellite from the surface of the earth are $6.3 \times 10^5 \text{ m}$ and $3.63 \times 10^6 \text{ m}$, respectively. The radius of the earth is $6.37 \times 10^6 \text{ m}$. The ratio of speed of the satellite at apogee to its speed at perigee is
- (A) 0.3 (B) 0.35 (C) 0.6 (D) 0.7
- Q.25 The dispersion relation for surface waves propagating in a fluid is given as: $\omega^2 = \alpha k + \beta k^3$, where α and β are constants with appropriate units. The phase velocity V_p becomes equal to the group velocity V_g at $k = k_0$. The value of k_0 is
- (A) $\sqrt{\alpha/2\beta}$ (B) $\sqrt{2\alpha/\beta}$ (C) $\sqrt{\alpha/\beta}$ (D) $\sqrt{3\alpha/\beta}$
- Q.26 The degree of polarization $P = (I_{\max} - I_{\min}) / (I_{\max} + I_{\min})$ of a mixture of unpolarized light and linearly polarized light is 0.2. The ratio of intensity I_p of the polarized component and the intensity I_u of the unpolarized component of this light is
- (A) 0.55 (B) 0.5 (C) 0.3 (D) 0.25
- Q.27 The circuit given below contains three identical resistors with resistance R , two identical inductors with inductance L and an ideal battery with emf \mathcal{E} . If i_1 and i_2 are values of the battery current just after the switch is closed and long after the switch is closed respectively, the ratio i_1 / i_2 is

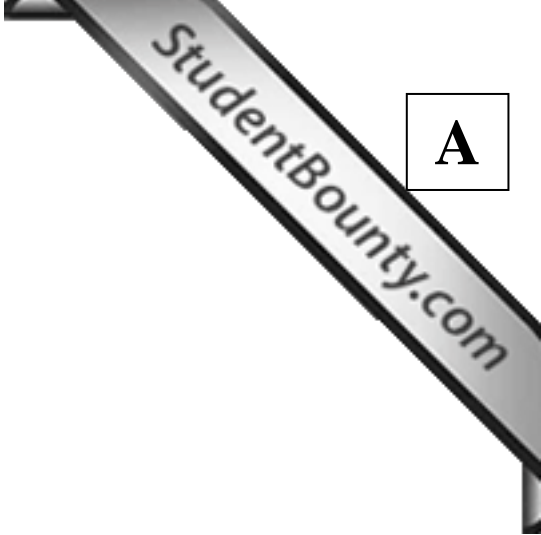


- (A) 1/3 (B) 2/3 (C) 2 (D) 3

- Q.35 The Zener diode, as shown in the figure below, has Zener voltage $V_z = 15\text{ V}$ and power rating of 0.5 W . If $V_s = 40\text{ V}$, the minimum value of R_s in Ω that prevents the Zener diode from being destroyed is



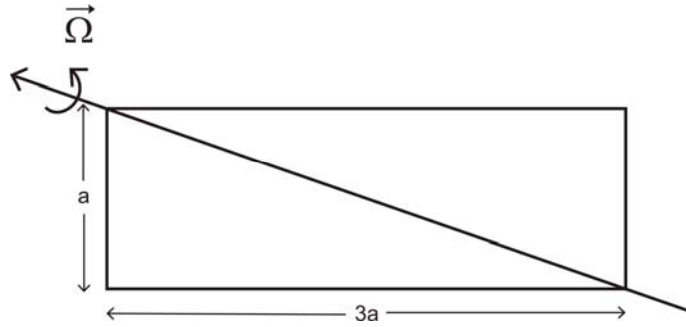
- (A) 750 (B) 1050 (C) 540 (D) 250
- Q.36 The electric field of an electromagnetic wave is $\vec{E}(\vec{r}, t) = \sqrt{2}E_0\hat{z}\cos(x - y - \omega t)$. If c stands for the velocity of the wave, the magnetic field $\vec{B}(\vec{r}, t)$ is
- (A) $\vec{B}(\vec{r}, t) = -\frac{1}{c\sqrt{2}}(\hat{x} + \hat{y})E_0\cos(x - y - \omega t)$
- (B) $\vec{B}(\vec{r}, t) = \frac{1}{c}(\hat{x} - \hat{y})E_0\cos(x - y - \omega t)$
- (C) $\vec{B}(\vec{r}, t) = -\frac{1}{c}(\hat{x} + \hat{y})E_0\cos(x - y - \omega t)$
- (D) $\vec{B}(\vec{r}, t) = \frac{1}{c\sqrt{2}}(\hat{x} - \hat{y})E_0\cos(x - y - \omega t)$
- Q.37 X-rays are diffracted from a set of planes with Miller indices (111) in a NaCl crystal at Bragg angle of 30° . If the lattice constant of the crystal is 5.65 \AA , the wavelength λ of the X-rays is
- (A) 3.25 \AA (B) 1.26 \AA (C) 6.23 \AA (D) 2.62 \AA



Space for rough work

PHYSICS SECTION SUBJECTIVE QUESTIONS

- Q.38 (a) A uniform rectangular plate of length $3a$ and width a has mass M . Ignoring gravity, determine the magnitude and direction of the torque $\vec{\tau}$ required to rotate the plate with uniform angular velocity $\vec{\Omega}$ in counter clock-wise direction about the diagonal shown below.



(9)

- (b) A smaller rectangular plate of length $3a/2$ and width $a/2$ is now cut from the plate shown above. Find the torque $\vec{\tau}'$ to rotate the new plate along the diagonal with the same angular velocity $\vec{\Omega}$.

(6)

A

StudentBounty.com

Q.39 The stream function $\Psi(x, y)$ of a two-dimensional flow is given by $\Psi(x, y) = 7x^2 - by^2$.

- (a) Find the value of b for which the flow field is irrotational. Determine the velocity potential $\Theta(x, y)$ corresponding to the irrotational flow. (9)
- (b) Show that lines of constant $\Psi(x, y)$ are orthogonal to lines of constant $\Theta(x, y)$. (6)

A

StudentBounty.com

Q.40 The motion of a one-dimensional damped oscillator is described by the differential equation: $\ddot{x} + 2\beta\dot{x} + \omega_0^2 x = 0$, where ω_0 is the natural angular frequency of the oscillator and β is the damping parameter. The oscillator is given an initial velocity V_0 at time $t = 0$.

(a) Find an expression for the displacement $x(t)$ of the oscillator. (6)

(b) If $V_0 = 0.13 \text{ m/sec}$, $\omega_0 = 13 \text{ sec}^{-1}$ and $\beta = 5 \text{ sec}^{-1}$,

(i) find the value of the 'amplitude' A_0 of the damped oscillatory motion at $t = 0$,

(ii) calculate the time t_1 at which the displacement first reaches its maximum X_1 ,

(iii) compute the maximum displacement X_1 .

[Use data: $\tan^{-1}(2.4) \approx 1.176$, $e^{-0.49} \approx 0.613$ and $\sin(1.176) \approx 0.923$]

(9)

A

StudentBounty.com

Q.41 The convex surface of a plano-convex lens of glass with radius of curvature $R = 0.5 \text{ m}$ is placed on a flat glass plate, and illuminated from above with a monochromatic light of wavelength λ . The radius of the 30th dark, after the central spot, in the reflected light is r . Watching this ring, the lens is moved vertically upward by a distance $h = 5 \times 10^{-6} \text{ m}$. The new radius r' of the ring is 10^{-3} m smaller than the old radius r .

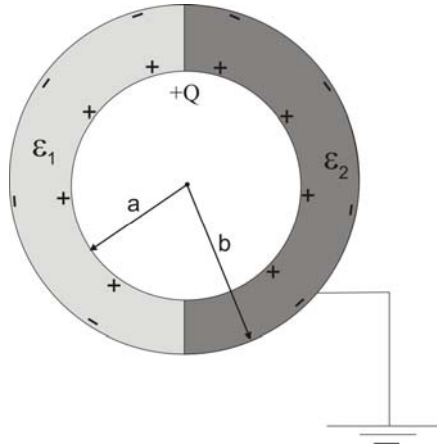
(a) Determine both the radii r and r' . (9)

(b) Compute the wavelength λ of the light used to form the rings. (6)

A

StudentBounty.com

- Q.42 One half of the region between two thin concentric metallic spherical shells of radii a and b ($b > a$) is filled with a dielectric of permittivity ϵ_1 and the other half is filled with another dielectric of permittivity ϵ_2 . A charge $+Q$ is placed on the inner shell and the outer shell is grounded (see the figure below). Find the capacitance C of the system.

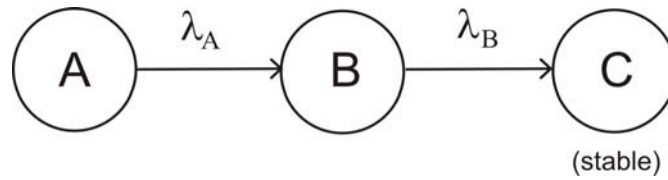


(15)

A

StudentBounty.com

- Q.43 Nuclei of type A are being produced at a constant rate Q in a nuclear reaction. The unstable nuclei A decay to stable nuclei of type C through intermediate unstable nuclei of type B, as shown in the figure. If λ_A and λ_B are the decay constants of the nuclei A and B respectively, calculate the activity of the sample at time τ after the reaction process has started.

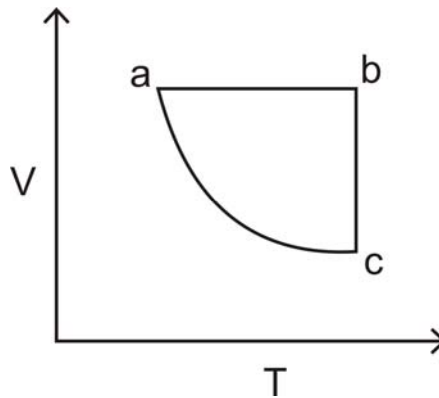


(15)

A

StudentBounty.com

- Q.44 (a) A Carnot engine operating between two temperatures 727°C and 27°C is supplied heat energy at the rate of 500 Joule/cycle . Sixty percent of the work output is used to drive a refrigerator, which rejects heat to the surrounding at 27°C . If the refrigerator removes 1050 Joule of heat per cycle from the low temperature reservoir, determine the temperature of the reservoir. (6)
- (b) A system compressed along an adiabatic path $a \rightarrow c$ (see the figure below), requires 1000 Joule . Compressing the system along $b \rightarrow c$ requires 1500 Joule but 600 Joule of heat flows out of the system. Calculate (i) the change in the internal energy of the system for the path $a \rightarrow b$, and (ii) the total work done in the cycle $a \rightarrow b \rightarrow c \rightarrow a$.



(9)

A

StudentBounty.com

MATHEMATICS SECTION OBJECTIVE QUESTIONS

- Q.45 If a function $f : [0, 1] \rightarrow \mathbb{R}$ is continuously differentiable, then there exists a continuous function $g : [0, 1] \rightarrow \mathbb{R}$ such that
- (A) $g(x) = g(0) + \int_0^x f(t) dt$
- (B) $f(x) = g(0) + \int_0^x g(t) dt$
- (C) $f(x) = f(0) + \int_0^x g(t) dt$
- (D) $g(x) = f(0) + \int_0^x f(t) dt$
- Q.46 Which of the following functions $f : \mathbb{C} \rightarrow \mathbb{C}$ is analytic?
- (A) $f(z) = \operatorname{Re} z$
- (B) $f(z) = z^2 + \frac{\sin z}{2}$
- (C) $f(z) = \bar{z}$
- (D) $f(z) = 1 + i \operatorname{Im} z$
- Q.47 Let \mathbb{Q} denote the set of all rational numbers. Then
- (A) \mathbb{Q} is an open set in \mathbb{R}
- (B) \mathbb{Q} is a closed set in \mathbb{R}
- (C) The set of all limit points of \mathbb{Q} is \mathbb{R}
- (D) \mathbb{Q} is complete
- Q.48 Let A be an $m \times n$ real matrix and $x = [x_1 \ x_2 \ \dots \ x_n]^T$. The system $Ax = 0$ has
- (A) no solution
- (B) infinitely many solutions if m is less than n
- (C) infinitely many solutions if rank of A is n
- (D) unique solution if rank of A is $\frac{n}{2}$
- Q.49 Let the function $f : \mathbb{R} \rightarrow \mathbb{R}$ be defined by $f(x) = x^3 - 15x^2 + 40$. The minimum value of f on $[-1, 7]$ is
- (A) 24
- (B) 40
- (C) -400
- (D) -352

- Q.50 The radius of convergence of the series $1 + \frac{1}{2} \frac{x^2}{3} + \frac{1.3}{2.4} \frac{x^4}{5} + \frac{1.3.5}{2.4.6} \frac{x^6}{7} + \dots$ is
- (A) $1/2$ (B) 1 (C) $3/8$ (D) $\sqrt{2}$
- Q.51 The value of $\lim_{n \rightarrow \infty} \sqrt{n^2 + n} - n$ is
- (A) $\sqrt{2} - 1$ (B) ∞ (C) 1 (D) $1/2$
- Q.52 Let $C[0,1]$ be the set of all real valued continuous functions on $[0,1]$. Which one of the following subsets of $C[0,1]$ is linearly dependent?
- (A) $\{1, \cos t, \sin t\}$ (B) $\{\tan^2 t, \cos^2 t, \sin^2 t\}$
 (C) $\{1, \cos^2 t, \sin^2 t\}$ (D) $\{\tan t, \cos t, \sin t\}$
- Q.53 The differential equation, for which $c^2 x^2 + y^2 = c^2$ is the general solution, is
- (A) $\frac{dy}{dx} = xy$ (B) $\frac{dy}{dx} = \frac{xy}{x^2 - 1}$
 (C) $\frac{dy}{dx} = \frac{x^2 - 1}{xy}$ (D) $\frac{dy}{dx} = xy(x^2 - 1)$
- Q.54 Which of the following is an exact differential equation?
- (A) $2xydx + y^2dy = 0$ (B) $2xydx - y^2dy = 0$
 (C) $2xydx + x^2dy = 0$ (D) $2xydx - x^2dy = 0$
- Q.55 If Δ and ∇ respectively stand for the forward and backward difference operators, then which of the following is true?
- (A) $\Delta\nabla = 1$ (B) $\nabla\Delta = 1$
 (C) $(1 + \Delta)(1 + \nabla) = 1$ (D) $(1 + \Delta)(1 - \nabla) = 1$
- Q.56 If the interval of differencing h is equal to 1, the factorial representation of the polynomial $x^3 - x$ is
- (A) $x^{(3)} + 3x^{(2)}$ (B) $x^{(3)} - x^{(2)}$
 (C) $x^{(3)} + x^{(2)}$ (D) $x^{(3)} + 3x^{(2)} - 2$

Q.57 The curl of $\vec{v} = xyz(x\hat{i} + y\hat{j} + z\hat{k})$ is

- (A) $x(z^2 - y^2)\hat{i} + y(x^2 - z^2)\hat{j} + z(y^2 - x^2)\hat{k}$
- (B) $x(z^2 - y^2)\hat{i} - y(x^2 - z^2)\hat{j} + z(y^2 - x^2)\hat{k}$
- (C) $y^2z^2\hat{i} + x^2z^2\hat{j} + x^2y^2\hat{k}$
- (D) $y^2z^2\hat{i} - x^2z^2\hat{j} + x^2y^2\hat{k}$

Q.58 A ball is drawn from a box containing 8 red balls, 6 white balls and 4 blue balls. What is the probability that it is not red?

- (A) $\frac{1}{8}$
- (B) $\frac{1}{18}$
- (C) $\frac{4}{9}$
- (D) $\frac{5}{9}$

Q.59 A population consists of the four numbers 1, 4, 6, 9. Consider all possible samples of size two which can be drawn with replacement from this population. Then the standard deviation of the population is

- (A) 8.5
- (B) 8.15
- (C) 7.5
- (D) 5.0

Space for rough work

MATHEMATICS SECTION SUBJECTIVE QUESTIONS

- Q.60 (a) Let \mathcal{P} be the vector space of all polynomials with real coefficients of degree less than or equal to three. Find the matrix representation of the linear transformation

$D: \mathcal{P} \rightarrow \mathcal{P}$ defined as $Dp(x) = \frac{dp(x)}{dx}$ with respect to the basis $\{1, x, x^2, x^3\}$ of \mathcal{P} .

Determine all eigenvalues and eigenvectors of the matrix representation of D so obtained.

(9)

- (b) Determine $g(x_1, x_2, x_3, x_4)$ where

$$\begin{vmatrix} 1 & 1 & 1 & 1 \\ x_1 & x_2 & x_3 & x_4 \\ x_1^2 & x_2^2 & x_3^2 & x_4^2 \\ x_1^3 & x_2^3 & x_3^3 & x_4^3 \end{vmatrix} = (x_4 - x_3)(x_4 - x_2)g(x_1, x_2, x_3, x_4).$$

(6)

A

StudentBounty.com

Q.61 (a) If f has a finite third derivative f''' in $[a, b]$ and if

$$f(a) = f'(a) = f(b) = f'(b) = 0,$$

prove that $f'''(c) = 0$ for some c in (a, b) .

(6)

(b) Suppose $\vec{v} = y\hat{i} - x\hat{j} + \hat{k}$. Let S be $x^2 + y^2 + z^2 = 4$, $x \geq 0$, $y \geq 0$ and let \hat{n} denote the outer unit normal to S . Compute $\iint_S \vec{v} \cdot \hat{n} d\sigma$.

(9)

A

StudentBounty.com

Q.62 (a) Determine all the poles and their residues of $f(z) = \frac{1}{z^2 + z + 1}$. (6)

(b) Find the Laurent series of $\frac{1}{(z-1)(z-2)}$ with center 0 for

(i) the annulus $1 < |z| < 2$ and (ii) the region $|z| > 2$. (9)

A

StudentBounty.com

- Q.63 (a) Using Green's theorem in the plane, evaluate $\oint_C y^2 dx + (y^3 + 2x) dy$, where C is the boundary of the region R in the first quadrant bounded by the curves $y^2 = x$ and $x^2 = y$. (9)
- (b) Show that the function $f: \mathbb{R} \rightarrow \mathbb{R}$, defined by $f(x) = (x+4)^3$, is not uniformly continuous. (6)

A

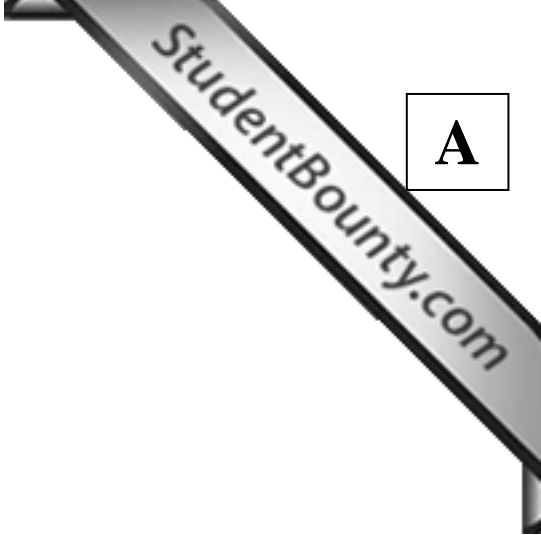
StudentBounty.com

Q.64 (a) Solve the differential equation $\frac{dy}{dx} = (x + y)^2$. (8)

(b) Solve the following initial value problem

$$\frac{d^2y}{dx^2} + 2\frac{dy}{dx} + 4y = 0, \quad y(0) = 1, \quad y'(0) = 1. \quad (9)$$

A



Q.65 (a) Using Newton-Raphson method find the approximate value of the root of the equation $x^3 + x^2 - 1 = 0$ upto the second iteration x_2 , assuming the initial approximation x_0 as 1. (6)

(b) Solve the following system of equations

$$4x_1 - x_2 + 3x_3 = 2$$

$$2x_1 + 5x_2 - x_3 = 1$$

$$x_1 + 2x_2 + 5x_3 = 4$$

by using Gauss-Seidel method upto two iterations starting with the initial solution

$$x_1^{(0)} = x_2^{(0)} = x_3^{(0)} = 0.$$

(9)

A

StudentBounty.com

Q.66 (a) If X and Y are independent random variables having density functions

$$f_1(x) = \begin{cases} e^{-x}, & x \geq 0 \\ 0, & x < 0 \end{cases} \quad \text{and} \quad f_2(y) = \begin{cases} 4e^{-4y}, & y \geq 0 \\ 0, & y < 0 \end{cases}$$

respectively, then find the density function of their sum $U = X + Y$.

(9)

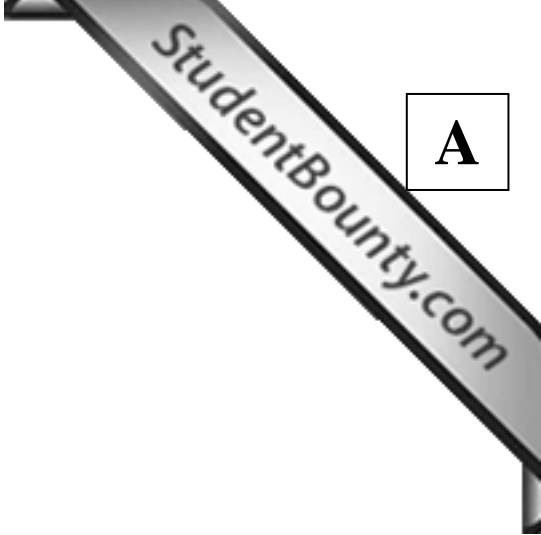
(b) Find the characteristic function of a random variable X having density function

$$f(x) = \begin{cases} \frac{1}{2a}, & |x| \leq a \\ 0, & \text{otherwise.} \end{cases}$$

(6)

A

StudentBounty.com



Space for rough work

Space for rough work

Space for rough work

Space for rough work

Space for rough work

Answer Table for Objective Questions

Write the Code of your chosen answer only in the 'Answer' column against each Question Number. Do not write anything else on this page.

Question Number	Answer	Do not write in this column	Question Number	Answer	Do not write in this column												
GEOLOGY SECTION			MATHEMATICS SECTION														
01			45														
02			46														
03			47														
04			48														
05			49														
06			50														
07			51														
08			52														
09			53														
10			54														
11			55														
12			56														
13			57														
14			58														
15			59														
PHYSICS SECTION			FOR EVALUATION ONLY														
23			<table border="1" style="width: 100%;"> <tr> <td>Correct</td> <td></td> <td>Marks</td> <td>(+)</td> </tr> <tr> <td>Incorrect</td> <td></td> <td>Marks</td> <td>(-)</td> </tr> <tr> <td colspan="3" style="text-align: center;">Total Marks in Q. 1-15</td> <td>()</td> </tr> </table>			Correct		Marks	(+)	Incorrect		Marks	(-)	Total Marks in Q. 1-15			()
Correct		Marks				(+)											
Incorrect		Marks				(-)											
Total Marks in Q. 1-15			()														
24																	
25																	
26			<table border="1" style="width: 100%;"> <tr> <td>Correct</td> <td></td> <td>Marks</td> <td>(+)</td> </tr> <tr> <td>Incorrect</td> <td></td> <td>Marks</td> <td>(-)</td> </tr> <tr> <td colspan="3" style="text-align: center;">Total Marks in Q. Nos. 23-37</td> <td>()</td> </tr> </table>			Correct		Marks	(+)	Incorrect		Marks	(-)	Total Marks in Q. Nos. 23-37			()
Correct		Marks				(+)											
Incorrect		Marks				(-)											
Total Marks in Q. Nos. 23-37			()														
27																	
28																	
29			<table border="1" style="width: 100%;"> <tr> <td>Correct</td> <td></td> <td>Marks</td> <td>(+)</td> </tr> <tr> <td>Incorrect</td> <td></td> <td>Marks</td> <td>(-)</td> </tr> <tr> <td colspan="3" style="text-align: center;">Total Marks in Q. Nos. 45-59</td> <td>()</td> </tr> </table>			Correct		Marks	(+)	Incorrect		Marks	(-)	Total Marks in Q. Nos. 45-59			()
Correct		Marks				(+)											
Incorrect		Marks				(-)											
Total Marks in Q. Nos. 45-59			()														
30																	
31																	
32																	
33																	
34																	
35																	
36																	
37																	

GEOLOGY SECTION			PHYSICS SECTION			MATHEMATICS SECTION		
Q. No.	Marks	Signature	Q. No.	Marks	Signature	Q. No.	Marks	Signature
1-15 (Objective)			23-37 (Objective)			45-59 (Objective)		
Candidates should answer both Objective and Subjective portions of the two Sections selected on the front page i.e. Geology+Physics, Physics+Mathematics, Geology+Mathematics								
16			38			60		
17			39			61		
18			40			62		
19			41			63		
20			42			64		
21			43			65		
22			44			66		
Total (Subjective)			Total (Subjective)			Total (Subjective)		

Total (Objective Part)	:	
Total (Subjective Part)	:	
Grand Total	:	
Total Marks (in words)	:	
Signature of Examiner(s)	:	
Signature of Head Examiner(s)	:	
Signature of Scrutinizer	:	
Signature of Chief Scrutinizer	:	
Signature of Coordinating Head Examiner	:	