



Coimisiún na Scrúduithe Stáit
State Examinations Commission

Leaving Certificate Applied, 2010

Social Education

(100 marks)

Wednesday, 9 June 2010

Afternoon, 2.00 pm to 4.00 pm

General Directions

1. Write your EXAMINATION NUMBER in this space:

2. WRITE ALL ANSWERS INTO THIS ANSWER BOOK.

THERE ARE THREE SECTIONS IN THIS EXAMINATION:

Section A: **Aural**

All questions must be answered.

Section B: **Short Answer**

Candidates must answer 10 questions.

Section C: **Long Answer**

There are **four** questions, Question C1, Question C2, Question C3, and Question C4. Candidates must answer **Question C1** and any **two** other questions.

<i>For the Superintendent only</i>	<i>For the Examiner only</i>	
Centre Stamp	1. Total of end of page totals.	
	2. Aggregate total of all disallowed questions.	
	3. Total mark awarded (1 minus 2).	
	4. Bonus mark for answering through Irish.	
	5. Total mark awarded if Irish Bonus. (3 + 4)	
	6. Credit.	
Note: The mark in row 3 must equal the mark in the Total box on the script.		

Section A - Aural test

(35 marks)

You will hear a recording of a report.
There are **two** parts to this report.

- 1st playing: You will hear the entire report.
- 2nd playing: You will hear only Part 1. You will be given time to answer Questions 1 to 5.
- 3rd playing: You will hear only Part 2. You will be given time to answer Questions 6 to 9.
- 4th playing: You will hear the entire report. You should then answer Question 10 which will be spoken on the recording.

This space may be used for notes.

ANSWER ALL QUESTIONS

When you have heard Part 1 for the second time, you will have time to answer Questions 1 to 5. Your answers should be based on the information given on the recording.

1. (a) Who is the abuser? (1 mark)

(b) List **two** types of abuse that Barry has experienced. (2 marks)

1. _____ 2. _____

2. (a) What happened to Barry in the summer of 2006? (1 mark)

(b) How did Barry react to what happened? (2 marks)

3. (a) Who did Barry get to record his injuries? (1 mark)

(b) What was her reaction? (2 marks)

4. (a) What did the social worker suggest Barry should do? (1 mark)

(b) Why did he not take this option? (2 marks)

5. (a) What did Barry apply for in the District Court? (1 mark)

(b) Why did the court clerk think that Barry was the respondent? (1 mark)

(c) List **two** reasons why Barry returned to the family home after leaving in 2008. (2 marks)

1. _____

2. _____

When you have heard Part 2 for the second time, you will have time to answer Questions 6 to 9. Your answers should be based on the information given on the recording.

6. The majority of recorded incidents of domestic violence are of men against women. (1 mark)

True False (tick ✓ the correct answer)

7. (a) Why did Mary Cleary set up AMEN? (2 marks)

(b) List **two** services provided by AMEN. (2 marks)

1. _____

2. _____

8. (a) From which sections of society do male victims of domestic abuse come? (2 marks)

(b) What can cause feelings of isolation and depression? (2 marks)

9. (a) In most instances the courts determine that children are better off with which parent? (1 mark)

(b) Why do so many male victims feel that the only option for them is to put up with the abuse or leave the family home? (2 marks)

(c) List **three** pieces of advice that this report gives to male victims of domestic abuse. (3 marks)

1. _____

2. _____

3. _____

When you have heard the recording for the third time answer Question 10 which will be spoken in the recording. Your answers may be based on the information given in the recording and/or your own knowledge.

10. This question will be read out in the recording. Please answer in the space below. (4 marks)

This space may be used to write the question.

Please answer in the space below.

1. _____

2. _____

Section B – Multiple Choice Questions

(20 Marks)

YOU MUST ATTEMPT 10 OF THE 15 QUESTIONS

Each question carries 2 marks.

Tick ✓ the correct box in each question.

1. In 2009 Barak Obama was awarded which of the following?



Pulitzer Prize

Duke of Edinburgh Award

Nobel Peace Prize

2. Women in Ireland are entitled by law to information about abortion.

True

False

3. People who are suicidal should contact which of the following for help and support?



Pavee Point



Samaritans



Well Woman Centre

4. In order to apply for full planning permission the applicant must submit which of the following lists of items?

Application

Fee

House and site plans

Application

Fee

Inventory of contents

Application

Projected costs

House and site plans

5. A person who has been elected to the European Parliament is called an



MP

TD

MEP

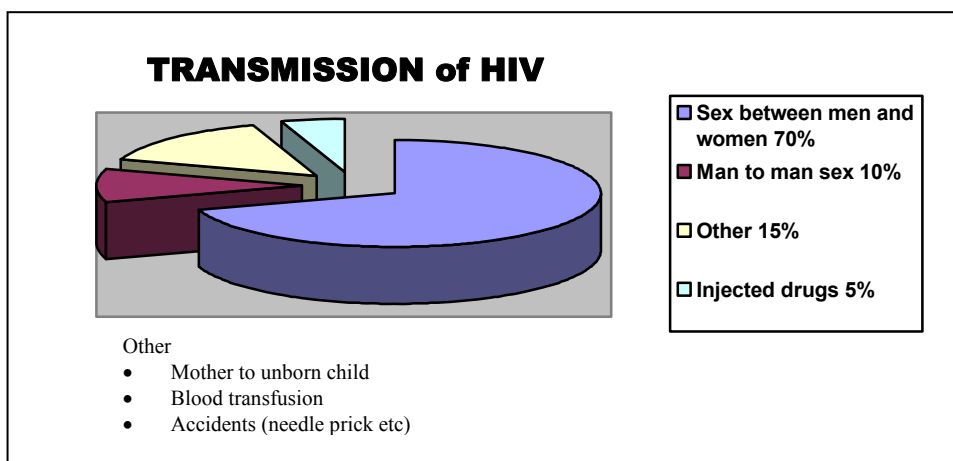
6. A customer who buys goods on hire purchase

- Receives the goods from the shop when the final payment is made
- Owens the item from the first payment and continues to pay for the goods in instalments
- Has use of the item but does not officially own it until the last instalment is paid

7. The most recent referendum in Ireland was held to decide on the

- Maastricht Treaty Lisbon Treaty Treaty of Rome

8. Based on the information in the chart which of the following statements is true?



- People may still get HIV from blood transfusions
- Drug users no longer get HIV
- An infected mother cannot give HIV to her unborn child

9. NAMA (National Asset Management Agency) is an agency set up by the Irish government to

- Regulate the Irish banking system
- Acquire assets from those involved in criminal activities
- Manage assets transferred from banks

10. St. Vincent de Paul is an organisation that helps people



- Living in poverty in Ireland
- Living in poverty in developing countries
- By providing medical care for people with disabilities

11. The Dáil and Seanad meet in



The Mansion House Leinster House Áras an Uachtaráin

12. Which of the following insurances is compulsory?

PRSI VHI Life Assurance

13. In Ireland it is compulsory to take part in a census. Failure to do so can result in

CENSUS OF IRELAND, 1926
(Ten Examples of the mode of filling up this Table are given on the other side.)

FORM A.

MEMBERS of this FAMILY and their VISITORS, BOARDERS, SERVANTS, &c. who slept or abode in this House on the 24th day of April 1926.

REL.	RELATION to Head of Family.	RELIGIOUS PROFESSION.	EDUCATION.	AGE.	SEX.	RANK, PROFESSION, OR OCCUPATION.	REMARKS.
Head	James J. O'Connell	Catholic	Read & Write	50	M	Farmer	Owner
Wife	Mary J. O'Connell	Catholic	Read & Write	48	F	Farmer's Wife	Owner
Daughter	Elizabeth O'Connell	Catholic	Read & Write	23	F	Farmer's Daughter	Not Married

A fine A prison sentence Loss of voting rights

14. In order to maintain a well balanced diet a person should avoid eating all fats.



True False

15. In banking APR (average percentage rate) refers to

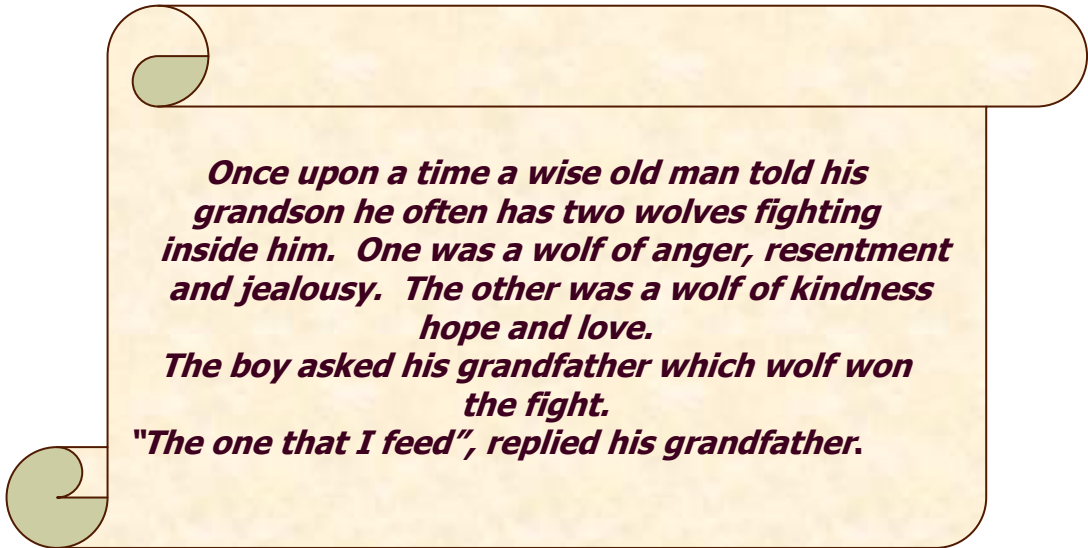
- The annual payment rate
- The actual payment required each month
- The rate of interest payable

ATTEMPT THREE QUESTIONS.

You **must** answer **Question C1** and any **two** Questions from C2, C3 and C4.

Question C1: Social and Health Education (15 marks)

1.



(a) Describe **two** ways that a person might deal positively with feelings of anger and resentment. (2 marks)

- 1. _____

- 2. _____

(b) In order to avoid confusion or conflict, outline **two** things which are important for effective communication. (2 marks)

- 1. _____

- 2. _____

2.



Select **one** food group from the food pyramid. (tick ✓ your choice)

1 2 3 4 5

(a) How many servings from this food group should an adult eat each day in order to maintain a healthy diet? (1 mark)

(b) Name **one** food group and explain why this food group is important for a healthy diet. (2 marks)

Name of food group: _____

Why it is important: _____

3.



(a) Drugs are categorised as opiates, depressants, stimulants, sedatives and hallucinogens. Select **one** category and give an example. (1 mark)

Category: _____ Example: _____

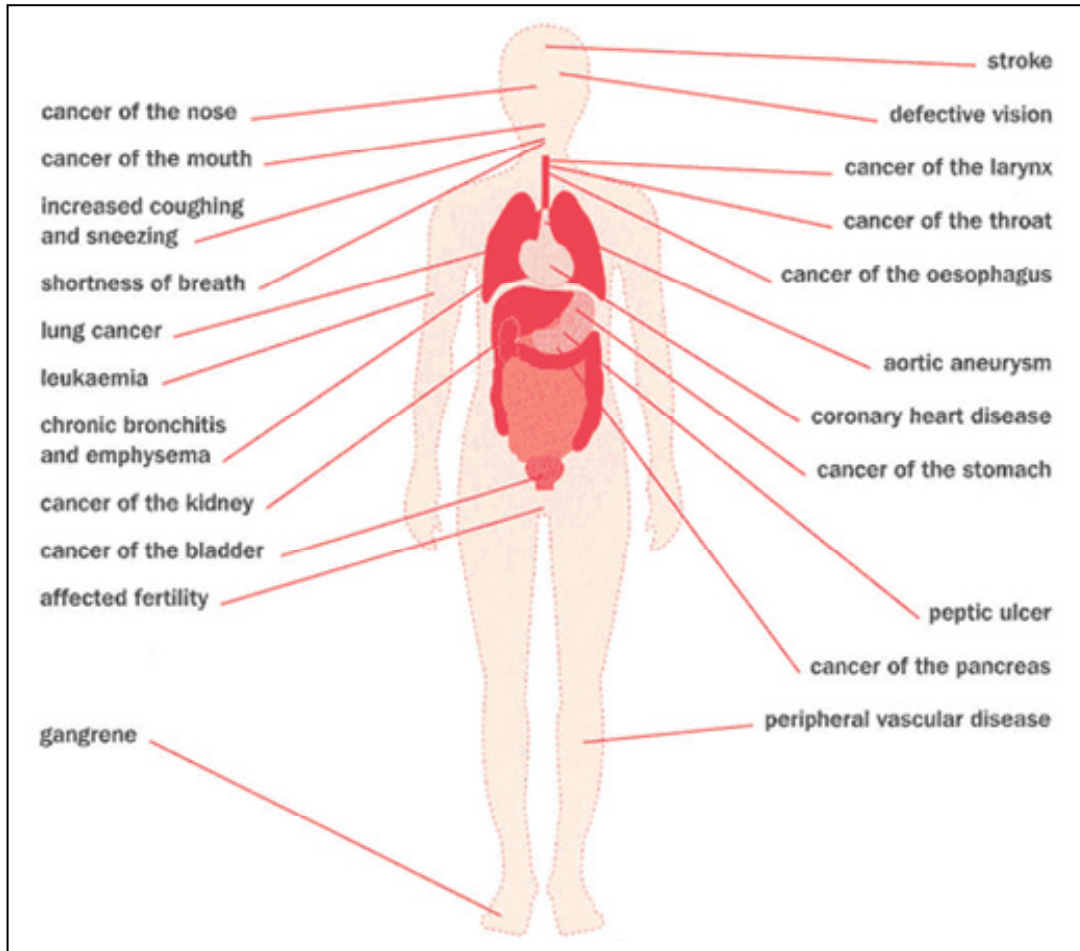
(b) State **two** other facts specific to this drug. (2 marks)

1. _____

2. _____

4.

The effects of smoking



Smoking causes many health problems. Outline **two** laws which the government has put in place in recent years to encourage people to stop smoking. (2 marks)

1. _____

2. _____

5. List **one** way that a parent/guardian could ensure a safe environment for a three year old child in each of the following. (3 marks)

- Living Room: _____

- Bathroom: _____

- Kitchen: _____

YOU MUST ANSWER **TWO** QUESTIONS FROM THE FOLLOWING THREE QUESTIONS

Question C2: My Community (15 marks)

1. *The parish of Kilnasoolagh contains 1319 inhabitants and comprises of 5116 acres. The land is of excellent quality and mostly under tillage and the state of agriculture has of late been much improved chiefly through the exertions of the local landlord. The river which separates the parish is navigable for boats of 50 tons, sea manure is here landed and corn is occasionally sent hence to Limerick. At Dromoland is a large school, with a garden and apartments for the master, entirely supported by Lady O'Brien. Also a female school. In these schools about 110 children are educated. There is also a small private school in the parish.*

Extract from *The Parliamentary Gazetteer of Ireland, 1845*

- (a) Name **one** way the people of the area made a living. Select evidence from the extract to support your answer. (2 marks)

Evidence: _____

- (b) Other than historical documents, describe **two** other methods you could use to find out about your community in the past. (2 marks)

1. _____

2. _____

- (c) A talk is being arranged for your class about 'life in my local area in the past'. Outline **two** topics that you would like them to talk about. (2 marks)

1. _____

2. _____

2.



Round Tower Again Under Attack.

Despite the ravages of time and the efforts of the Vikings, Roundstone Tower has survived for over a thousand years. This historical site is now under threat again if a planning application for a development of shops and offices gets the go ahead from the local authority.

Outline **two** arguments against this planning application that the community could make to the local authority. (2 marks)

1. _____

2. _____



3. (a) There are those who support the development of shops and offices for the area. List **two** benefits that such a development might bring to your area. (2 marks)

1. _____

2. _____

(b) Is the economic activity at this development primary, secondary or service? (1 mark)

4. Select **one** of these organisations. (tick ✓ your choice)



Briefly describe the work that this organisation does to protect your community. (2 marks)

5. It can be difficult to obtain planning permission for individual houses in rural areas. Do you think this policy should continue? State **two** reasons for your answer. (2 marks)

Continue policy Change policy (tick ✓ your choice)

1. _____

2. _____

Question C3: Contemporary Issues (15 marks)

1.

Gloria's Story

Gloria lives in Mathare Valley, Nairobi, Kenya, one of the largest and most dangerous slums in the world.

Her morning routine is like anyone else's living in the slums but there is one profound difference. Gloria is only six years old. She looks after her younger brother and sister on her own. Everyday, Gloria wakes up early, washes yesterday's dishes and sweeps her small tin hut. She then takes her three year old brother by the hand. Lifting her 18-month old sister onto her back, they all go to the Baruka Health Centre in the heart of Mathare slum. Gloria and her siblings are given breakfast and lunch at the Baruka Health Centre. They are looked after for most of the day by the staff. Before dark, they return to their tiny hut and unroll the mattress they share



Gloria with her brother and sister outside their home

to sleep for the night. When it rains in Nairobi the narrow paths in the slums turn into stinking streams. It's no wonder that children like Gloria are constantly ill. For small children like Gloria, her brother and baby sister, good food and nutrition are crucial. It helps them to grow up healthy and survive the many

diseases that are rife in the slums. To see the children here, living in absolute squalor, is heartbreaking – playing beside the rubbish dumps or on the sewage filled pathways. There is no clean water and not enough food to live on. Gloria has been caring for her brother and sister since her mother was taken to hospital six months ago. She hasn't seen her mother since and doesn't even know if she is still alive. Like thousands of children in Nairobi's slums who become the carers for their families, Gloria has many fears. Will she see her mother again? How will she keep her brother and sister safe? And how will she get food for all of them?

(a) Name **one** human right that these children are being denied. (1 mark)

(b) Why is this human right important? (1 mark)

2. Name **one** document that lists the human rights to which people are entitled. (1 mark)

3. (a) Name **one** organisation that works in the developing world. (1 mark)

Organisation: _____

(b) Give an example of development work or an example of emergency work done by this organisation. (2 marks)

Emergency work: Development work: (tick ✓ your choice)

Example: _____

(c) Gloria’s story raises awareness about the plight of children in the slums of Nairobi. Describe **one** other method which an individual or an organisation could use to raise awareness about an issue. (1 mark)

4. (a) These are the main political parties in Ireland. Select **two** and name the leader of each. (2 marks)



Political party: _____ Leader: _____

Political party: _____ Leader: _____

(b) Voting in Ireland is by secret ballot. Why is this a good idea? (2 marks)

5.

(a) Research is classified as either primary or secondary. Identify **one** type of primary research and **one** type of secondary research from the examples given in the box above. (2 marks)

Primary research: _____ Secondary research: _____

(b) Name **one** type of research that you have used to complete your Contemporary Issues task. State **one** advantage and **one** disadvantage of this method of research. (2 marks)

Research method : _____

Advantage: _____

Disadvantage: _____


Question C4: Taking Charge (15 marks)

1.

MABS HAVING BUSIEST YEAR

(a) MABS is the Money Advice and Budgeting Service. Why do you think that 2009 was their busiest year ever? (1 mark)

(b) Select **one** of the forms of credit listed below and explain how it works. (2 marks)



The most common forms of credit debt are

- credit card debt
- bank overdraft debt
- credit sales agreement

Credit card Bank overdraft Credit sales agreement (tick ✓ your choice)

2.

The Path to Money Management and Dealing with Debt

Step 1
Assess your Situation

Step 2
Make a Budget

Step 3
Deal with Debt

Step 4
Make Payments

(a) Budgeting is one of the main steps on the path to money management and dealing with debt. List **two** reasons why it is important to deal with debt. (2 marks)

1. _____

2. _____

(b) A budget includes details of how a person is spending his/her money. What else should be included in a budget? (1 mark)

3.



Credit Unions offer members the chance to have control over their own finances by making their own savings work for them.

(a) Outline **two** ways that credit unions are different from other financial institutions. (2 marks)

1. _____

2. _____

(b) How do members qualify to get a loan from the Credit Union? (1 mark)

4. When getting a loan a customer will come across these terms. Explain **one**. (2 marks)

Cost of Credit

Cooling-off Period

Term: _____

Explain: _____

5.

The number of people illegally evicted from their homes rose steadily last year. In total, there were 141 completed illegal evictions and 533 threatened illegal evictions over the course of the year. An illegal eviction is where tenants are physically removed from their home. It is absolutely unlawful to lock tenants out of a rented property with or without their belongings. Landlords who have a grievance with their tenants have a legal route to resolve disputes through the Private Residential Tenancies Board (PRTB).

(a) Why is it 'absolutely unlawful to lock a tenant out of a rented property'? (1 mark)

(b) Landlords who have a grievance with their tenants can contact the PRTB. Name an organisation which provides help to tenants who are experiencing difficulties with their landlords. (1 mark)

(c) List **two** reasons why a landlord could legally terminate a tenancy agreement. (2 marks)

1. _____

2. _____

Blank Page

Blank Page

Blank Page

For the Examiner only

Mark

Section A		
Section B		
Section C	C1	
	C2	
	C3	
	C4	
TOTAL	