



Coimisiún na Scrúduithe Stáit State Examinations Commission

Leaving Certificate Applied 2004

Social Education

(100 marks)

Wednesday, 9th June, 2004

Afternoon 2.00 pm to 4.00 pm

General Directions

1. Write your EXAMINATION NUMBER in this space:

2. WRITE ALL ANSWERS INTO THIS ANSWER BOOK.

THERE ARE THREE SECTIONS IN THIS EXAMINATION

Section A: **Aural**

All questions must be answered.

Section B: **Short Answer**

Candidates must answer 10 questions.

Section C: **Written**

Candidates must answer question C1 and any two other questions.

<i>For the Superintendent only</i>	<i>For the Examiner only</i>	
<div style="border: 1px solid black; width: 100%; height: 100%; display: flex; align-items: center; justify-content: center;"> Centre Stamp </div>	1. Total of end of page totals.	
	2. Aggregate total of all disallowed questions.	
	3. Total mark awarded (1 minus 2)	
	4. Bonus mark for answering through Irish (if applicable)	
	5. Total mark awarded if Irish Bonus. (3 + 4)	
	6. Credit.	
	Note: The mark in row 3 must equal the mark in the Total box on the script.	

ANSWER ALL QUESTIONS

When you have heard Part 1 for the second time, you will have time to answer questions 1 to 5. Your answers should be based on the information given on the tape.

1. How many children are engaged in child labour worldwide? _____ (1 mark)

2. List **three** of the most hazardous forms of child labour. (3 marks)

1. _____

2. _____

3. _____

3. Outline **two** reasons why employers employ children. (2 marks)

1. _____

2. _____

4. Give **one** possible reason for the widespread adult unemployment in India. (2 marks)

5. (a) Why do poor people turn to local moneylenders? (2 marks)

(b) What is 'bonded labour'? (3 marks)

(c) Give **two** reasons why so many families fall back into bonded labour. (3 marks)

When you have heard Part 2 for the second time, you will have time to answer questions 6 to 9. Your answers should be based on the information given on the tape.

6. (a) Name the Irish development organisation involved in the ‘*School is the best place to work*’ campaign. (1 mark)

- (b) What is the aim of this campaign? (2 marks)

7. State **two** reasons, **other** than poverty, why children do not attend school. (2 marks)

1.

2.

8. What needs to be done with existing child labour laws? (2 marks)

9. List **three** things that we in the First World can do to end child labour. (6 marks)

1.

2.

3.

When you have heard the entire report for the third time, answer question 10 which will be spoken on the tape.

10. This question will be read out on the tape recording. Please answer in the space below. (6 marks)

Section B – Short Answer Questions


(20 marks)

YOU MUST ATTEMPT 10 OF THE 15 QUESTIONS

Each question carries 2 marks.

Tick ✓ the correct box in each question.

1. In order to have a healthy balanced diet how many servings from the meat, fish and alternatives group should a person eat each day?



6 4 2

2. A Laser card is used with a

Current Account Deposit Account Fixed Term Account

3. Applications for planning permission should be made to

The Institute of Architects
The Local Authority
An Bord Pleanála

4. Some Sexually Transmitted Infections can lead to infertility.

True False

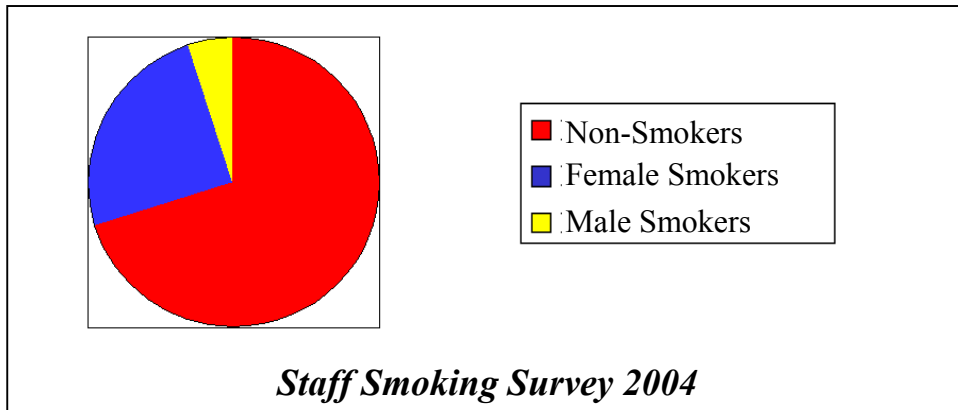
5. A referendum is held in Ireland to

Change the Constitution Elect the President Pass the Budget

6. People applying for planning permission are required to place a notice in the newspaper.

True False

7. According to the information on the pie chart which of the following statements is correct?



The majority of the staff smokes.

More women than men smoke.

Smokers account for 25% of the staff.

8. Which of the following is a voluntary organisation that assists the needy in your area?



Amnesty International Dept. of Social and Family Affairs St. Vincent de Paul

9. The unequal treatment of people based on gender is

Ageism Sexism Racism

10. A conviction for the use of cannabis can hinder your ability to travel abroad.

True False


11. What is the recommended maximum intake of alcohol units for a fully-grown man per week?

28 21 14

12. The fluid that the foetus develops in is called

Amniotic Fluid Foetal Fluid Ovarian Fluid

13. Which of the following is a recommended immunisation for children?



MMR CJD ADD

14. Which of the following statements is an opinion?

Nicotine is an addictive substance.

Cannabis should be legalized.

Heroin comes from the opium poppy.

15. Profits made by the Credit Union are divided amongst its members.



True False

ATTEMPT THREE QUESTIONS.

You **must** answer **Question C1** and any **two** Questions from C2, C3 and C4.

Question C1: Social and Health Education (15 marks)

1.



(a) The five main categories of drugs are sedatives, hallucinogens, depressants, opiates and stimulants. Select **two** categories and give an example of each. (2 marks)

Category	Example

(b) In the case of each example given, describe **one** effect and **one** risk involved in taking it. (4 marks)

Example: _____

Effect: _____

Risk: _____

Example: _____

Effect: _____

Risk: _____

(c) “Drug users hurt only themselves”. Explain whether you agree or disagree with this statement. (2 marks)

2.

Conflict Wall

Fight	Go Along With The Gang	Walk Away	Talk It Out	
	Shout Them Down	Stand Up For Yourself	Apologise	Ignore It
Say Nothing	Stay Calm	Speak Clearly And Slowly	Look Them In The Eye	
	Be Confident	Stare Them Down	A Good Slap Always Works	Argue

(a) Describe how a young person might deal in an assertive way with a conflict situation.

(2 marks)

(b) What do you think Mahatma Gandhi is trying to tell us about resolving conflict? (2 marks)



'The Trouble with an Eye for an Eye is that it leaves the whole world blind.'
Mahatma Gandhi

3. Parents are responsible for the physical, social and mental well being of their children. Under the following headings list **one** task involved in taking care of a three-year-old child.

(3 marks)

Physical _____

Social _____

Mental _____

YOU MUST ANSWER **TWO** QUESTIONS FROM THE FOLLOWING THREE QUESTIONS

Question C2: My Community (15 marks)

1. Examine the Ordnance Survey map and keys. Answer the following questions based on the information on the map.



Eolas Turasóireachta
Tourist Information

Láithreán carbhán (idirthurais) Caravan site (transit)	Ionad eolais turasóireachta (ar oscailt ar feadh na bliana) Tourist Information centre (regular opening)
Brú An Oige / Neamhspleách Hostel An Oige / Independent	Ionad eolais turasóireachta (ar oscailt le linn an tséasúir) Tourist Information centre (restricted opening)
Ionad pairceála Parking	Ionad dearctha Viewpoint
Láithreán picnic Picnic site	An Taisce National Trust
Teilefón Poiblí Public Telephone	Tearmann Dúlra Nature Reserve
Láithreán campála Camping site	Gailchúrsa, machaire gailt Golf Course or Links

Gnéithe uisci
Water features

Loch Lake	Bádóireacht Boating activities
Canáil, canáil (thirim) Canal, Canal (dry)	Líne bharr láin High Water Mark
Abhainn nó sruthán River or Stream	Líne lag trá Low Water Mark
Teach Solais in úsáid / as úsáid Lighthouse in use / disuse	Trá Beach

Ordnance Survey Ireland, Discovery Series Ordnance Survey Office, Phoenix Park, Dublin.

(a) Name **two** types of accommodation available to tourists in this area. (2 marks)

1. _____
2. _____

(b) Mention **three** other amenities that would attract tourists to this area. (3 marks)

1. _____
2. _____
3. _____

2.



Select **one** type of information gathering method from the above. Outline **two** specific pieces of advice you would give to someone using this method. (2 marks)

Method: _____

1. _____

2. _____

3.

WIND FARM ROW FINALLY ENDS

The Express Times

The proposed plans to build a generating plant are finally set to go ahead despite the controversy over the proposal. The minister for the Marine Frank Fahy T.D. has welcomed the programme saying, "Today heralds the dawning of a new age of clean, green energy." The Renewable Energy Information Office has strongly defended wind power as a clean, green source of electricity. They state that Ireland's exposure to the Atlantic winds means that electricity can be generated here more cheaply than any other country in Europe. Wind farms can provide a useful source of income for farmers, whether they construct the wind farms or let their land for this purpose. The Concerned Residents Group claims the wind farm would devalue property, destroy the scenery and cause noise. The wind turbines look



like enormous airplane propellers mounted on tall metal poles and once the blade is mounted the turbines reach a height of 80 meters (260 feet). They claim erecting turbines in this area would cause a problem for tourism. The group also claims that the visibility of wind turbines will reduce the value of property locally and goes on to say that the noise caused by them will render the property unsaleable. The Council upheld initial objections to the farm but the appeal made by developers to An Bord Pleanála are now

allowing the plans to go ahead. According to the Irish Wind Energy Association Ireland now imports 86% of our energy needs. As we can produce our own energy from wind power this would help to reduce our reliance on the importation of fossil fuels. Burning fossil fuels gives rise to pollution problems. The EU has set targets for the reduction of this pollution. If the government does not meet its renewable energy targets by 2005 it runs the risk of picking up an EU penalty in the form of a huge fine. Increased wind energy development is government national policy. The government must increase the amount of electricity it generates from wind and other renewable sources. This will reduce the amount of greenhouse gas emissions and help Ireland to meet its commitments under the Kyoto Protocol.

Mary Murphy

- (a) In relation to **one** group mentioned in the article, who will be affected by this issue, state why they might support or oppose this project. (2 marks)

Group: _____

- (b) Why do you think that it is important to produce more ‘*clean, green sources of electricity*’? (2 marks)

- (c) Describe **one** way that your household might reduce the amount of CO₂ and greenhouse gas emissions in your local area. (2 marks)

- (d) From your knowledge of events in Ireland over the past year, give details of **one other** objection people might have to wind farms. (2 marks)

AIDS Report

AIDS World-wide

In the past 20 years 58 million people have been infected with HIV. 21.8 million have died. In 2000 three million died due to HIV/AIDS and most of these, 95%, are in developing countries. Unlike people in the West, many of these will die - due to a poor health service and the high cost of drugs.

The causes of poverty are also made worse by AIDS; for example, illiteracy increases as children cannot continue their schooling and the education systems lose teachers more rapidly than they can be replaced.

So what can be done?

- Government overseas aid must target those most in need.
- Drugs and other treatments should be made available free of charge.
- Education programmes to prevent AIDS should be provided to groups who are free of the disease but are most at risk.

AIDS in Ireland

The first case of AIDS was reported in Ireland in 1983. Today 2645 people are known to have HIV.

719 of these have gone on to develop full-blown AIDS. 350 new people contract HIV each year. 125 of these are among heterosexuals who now make up the highest number of new cases. 16 young people aged 10-19 contracted the HIV virus last year.

Alliance Sexual Health Center, conducted research among school leavers and young adults. They discovered that:

- Where they had been sexually active without the use of contraception the major worry was fear of pregnancy. Less than half were concerned about the risks of HIV.
- Most 15-17 year olds knew how AIDS is transmitted and prevented, but there was a lot of incorrect information among this group.

A growing concern for young people is the link between alcohol abuse and the unsafe sex practiced as a result which puts them at risk.

1. Name an organisation working to prevent AIDS and reduce the suffering of AIDS victims. (1 mark)

2. Outline **two** reasons why so many people in developing countries who become infected with HIV/AIDS die. (2 marks)

1. _____

2. _____

3. (a) List **two** effects of AIDS on a person's health. (2 marks)

(b) Mention **two** ways that people might protect themselves from getting AIDS. (2 marks)

4. Research suggests that many young people in Ireland are not concerned about the risk of HIV. Give **two** reasons why you think this is the case. (4 marks)

1. _____

2. _____

5. Is AIDS/HIV a social, economic, political or cultural issue? Explain your answer. (2 marks)

6. What action could you take at local, national or global level to affect the issue of AIDS? (2 marks)

Question C4: Taking Charge (15 marks)

1. Give **three** pieces of information about **one** of the following types of rented accommodation. (3 marks)



Accommodation: _____

1. _____

2. _____

3. _____

2. State whether the following statements are true or false. (4 marks)

1. A lease can be an oral or a written agreement.

2. A tenant is always entitled to a return of their deposit.

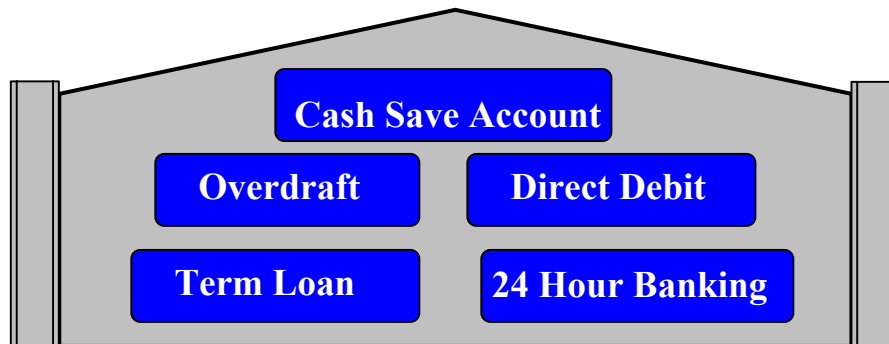
3. A tenant is liable for the outstanding rent if s/he leaves before the lease is up. _____
4. A landlord must provide the tenant with a rent book.

3. When living away from home careful budgeting is essential. Give **two** reasons. (4 marks)

1. _____

2. _____

4. Banks offer a wide variety of accounts and services to their customers. These include:



Select **two** of the above and explain how each works. (4 marks)

1. Account/Service: _____

How it works: _____

2. Account/Service: _____

How it works: _____

Blank Page

Blank Page

For the Examiner only

Mark

Section A		
Section B		
Section C	C1	
	C2	
	C3	
	C4	
TOTAL		