



# Leaving Certificate Applied 2009

## Vocational Specialism Craft and Design Course

Written Examination (40% of total marks)

**Date : Thursday 11th June**  
**Afternoon: 2.00 - 3.30.**

Write your **examination number** in this space →

### Instructions

This paper contains eight questions.  
Attempt any four questions.

For the Superintendent only	For the Examiner only	
<div style="border: 1px solid black; width: 80%; margin: auto; padding: 20px;"> <p>Centre Stamp</p> </div>	Question 1	
	Question 2	
	Question 3	
	Question 4	
	Question 5	
	Question 6	
	Question 7	
	Question 8	
	Total	
	Minus total for disallowed questions	
<b>Grand Total</b>		

# Fashion and Textiles

## Question 1 (40 marks)

Answer (a), (b) and (c).



(a) Most students complain about wearing a school uniform, so here is your chance to design a uniform that you believe students would look good in. Sketch a uniform design that you would like to wear.

A large empty rectangular box with a black border, intended for the student to sketch their own uniform design.

**(b)** Describe your design under the following headings:

Colour

---

---

---

---

Style

---

---

---

---

Fabric

---

---

---

---

**(c)** List 3 reasons why you think your design makes a suitable uniform.

1. \_\_\_\_\_

---

2. \_\_\_\_\_

---

3. \_\_\_\_\_


---

# Fashion and Textiles

## Question 2 (40 marks)

Answer (a), (b) and (c).

- (a) Repeating a motif to create a pattern is an effective method of creating a new design. Describe how the designer of this packaging achieved this. Use the following headings.



Colour \_\_\_\_\_

---

---

---

Scale \_\_\_\_\_

---

---

---

Layout \_\_\_\_\_

---

---

---





**(b)** List two important factors in designing a logo.

---


---

---

---

---

**(c)** Design a logo for a fish shop.



# Graphic Communication and Print

## Question 4 (40 marks)

Answer **(a)**, **(b)** and **(c)**.

**(a)** Can you suggest a title for the print illustrated below?



---

---

---

**(b)** Describe the steps involved in making a lino print.

---

---

---

---

---

---

---

---

---

---






# 3-Dimensional Studies

Question 5 (40 marks)

Answer (a), (b) and (c).



(a) The lighting illustrated above is constructed entirely from recycled materials, what are the advantages of recycling materials? Give reasons for your answer.

---

---

---

---


---

---

---

---

**(b)** Design a sculpture from recycled materials for your school yard inspired by nature.



**(c)** Describe the area where you will display your piece.

---

---

---

---

# 3-Dimensional Studies

## Question 6 (40 marks)

Answer (a), (b) and (c).

(a) Describe the piece of jewellery illustrated below under the following headings.



Materials

---

---

---

Function

---

---

---

Texture

---

---

---

**(b)** Give two reasons why people wear jewellery.

---


---

---

---

---

**(c)** Design a piece of jewellery in the box provided.



Describe your design under the following headings:

Materials

---

---

Function

---

---

# Lens-based Studies

## Question 7 (40 marks)

Answer **(a)**, **(b)** and **(c)**.

**(a)** In preparation for your school trip you must take passport photographs of your class. List the materials and equipment you would need.

---

---

---

---

---

---


---


---

---

---

**(b)** Make a sketch of how you would arrange the equipment in your classroom.





1



2



3

**(c)** Compare the student portraits under the following headings:

Colour

1 \_\_\_\_\_

\_\_\_\_\_

2 \_\_\_\_\_

\_\_\_\_\_

3 \_\_\_\_\_

\_\_\_\_\_

Personality

1 \_\_\_\_\_

\_\_\_\_\_

2 \_\_\_\_\_

\_\_\_\_\_

3 \_\_\_\_\_

\_\_\_\_\_

Uniform

1 \_\_\_\_\_

2 \_\_\_\_\_

3 \_\_\_\_\_

# Lens-based Studies

## Question 8 (40 marks)

Answer **(a)**, **(b)** and **(c)**.

**(a)** Camera phones are now very popular. List three advantages of a camera phone.

---

---

---

---

---

---

---

---

---

---

**(b)** Explain the following features on a camera phone.

MP3 player \_\_\_\_\_

---

---

---

---

---

---

---

---

5.0 MP camera \_\_\_\_\_

---

---

---

---

---

---

---

---





BLANK PAGE

BLANK PAGE

BLANK PAGE