



Coimisiún na Scrúduithe Stáit
State Examinations Commission

Leaving Certificate Applied 2005

Vocational Specialism
 Craft and Design Course

Written examination (40% of total marks)

Date: Thursday, 16th June, 2005

Afternoon, 2.00 - 3.30

Write your **examination number** in this space →

Instructions

This paper contains eight questions.
 Attempt any four questions.

For the Superintendent only	For the Examiner only	
Centre Stamp	Question 1	
	Question 2	
	Question 3	
	Question 4	
	Question 5	
	Question 6	
	Question 7	
	Question 8	
	Total	

Fashion and Textiles

Question 1 (40 marks)

Answer (a), (b), and (c)




(a) Why do we wear hats? Give three reasons.

Reason 1 _____

Reason 2 _____


Reason 3 _____

(b)

Peppers	Spring Onions	Tomatoes
		

Design a **hat** based on one of the images of peppers, spring onions and tomatoes on page 2.

Sketch your design in the box below.



(C) List the materials and equipment you would use to make the hat you have designed.

Fashion and Textiles

Question 2 (40 marks)

Answer (a), (b), and (c)

Futuristic designs, like the two below, could be used to inspire fashion of the future.



(a) Which is your favourite? Give two reasons.

Reason 1

Reason 2

(b) Compare the two designs under the following headings:

Shapes	
Decoration	
Colour	
Texture	

(c) Suggest a design for an outdoor jacket inspired by either design.

(c)	
Give one reason for your choice of shape in your design.	
Give one reason for your choice of colour in your design.	

Graphic Communication and Print

Question 3 (40 marks)

Answer (a), (b), and (c)

The lettering used in a film title can suggest the theme of the film itself.



- (a) How does the title of 'SHREK' suggest what the film is about?
Use the following headings to help you answer.


Colour

Size

Shape

Lettering

(b) Design a title for a film about a sea monster named 'The BLOB'.
Sketch your design on the graph paper below.



(c)

Give one reason for your choice of shape in your design.

Give one reason for your choice of colour in your design.

Graphic Communication and Print

Question 4 (40 marks)

Answer (a), (b), and (c)

Sandwich boards are used for advertising on streets and roadsides.

- (a) In your opinion what are the three most important factors in the design of a sandwich board advertisement.

Factor 1

Factor 2

Factor 3

Shape

Factor 3

Lettering

(b) Discuss the design of the sandwich board advertisement illustrated below.



(c) How would you improve this design?
Use sketches to help explain your answer.

3 Dimensional Studies

Question 5 (40 marks)

Answer (a), (b), and (c)

Consoles for video games should be easy to use and safe for players of all ages.

(a) Make a sketch of your favourite console





Factor 1

Factor 2

(b) Discuss its design features, including its ease of use and safety features.

Factor 3

(c) Explain the function of the symbols illustrated below.


Symbol 1	Symbol 2
 <hr/> <hr/> <hr/> <hr/> <hr/>	 <hr/> <hr/> <hr/> <hr/> <hr/>
Symbol 3	Symbol 4
 <hr/> <hr/> <hr/> <hr/> <hr/>	 <hr/> <hr/> <hr/> <hr/> <hr/>

3 Dimensional Studies

Question 6 (40 marks)



Answer (a), (b), and (c)

The two pieces of public sculpture below are on display in a town in Ireland.




(a) Which sculpture do you prefer, say why?

(b) What are the important factors when choosing a location for a piece of sculpture?
Use sketches to illustrate your answer.

Camera 1	Camera 2
	

(c) Public sculpture is often sprayed with graffiti. Do you think graffiti is vandalism or art?
Give reasons for your answer.


--

Lens-based Studies


Question 7 (40 marks)

Answer (a), (b), and (c)

With the arrival of digital photography, the dark room has become a thing of the past.

(a) Explain three differences between digital photography and traditional photography.

(b) Use sketches to help explain your answer



(c) Describe the differences between the two cameras illustrated below.
Use sketches to help you with your answer.

Camera 1



Camera 2



Blank area for sketches or additional notes.

Lens-based Studies

Question 8 (40 marks)

Answer (a), (b), and (c)

(a) Name the parts labelled on the video recorder illustrated below.



(b) Explain the function of each of the labelled parts.

- (c) In your opinion what are the most important elements in making a music video?
Use sketches to help you with your answer.

Blank space for writing a response to the question.	Blank space for sketches to help with the answer.
---	---


Use sketches to help you answer. (5)
In your opinion what are the most important elements in making a music video?

Lens-based Studies

Question 8 (40 marks)

Answer (a), (b), and (c)

a) Name the parts labelled on the video recorder illustrated below.



b) Explain the function of each of the labelled parts.