



Coimisiún na Scrúduithe Stáit State Examinations Commission

S68

Junior Certificate Examination, 2006

TECHNOLOGY

ORDINARY LEVEL

160 Marks

Wednesday 21 June, Afternoon 2.00 to 4.00

Centre Number

Examination Number

INSTRUCTIONS

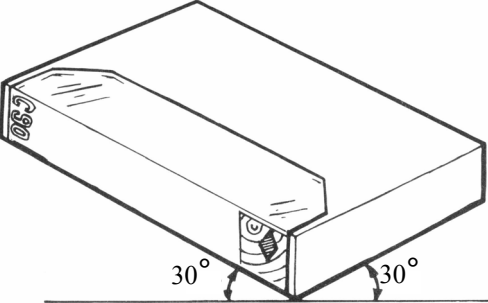


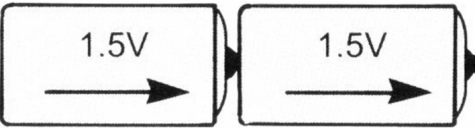

1. Answer Section A and any two questions from Section B.
2. Write your answers in the spaces provided or tick the appropriate box.
3. Hand up this paper at the end of the examination.


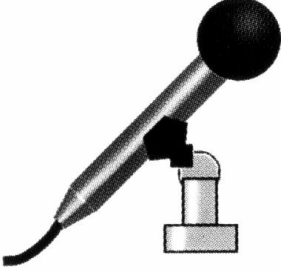
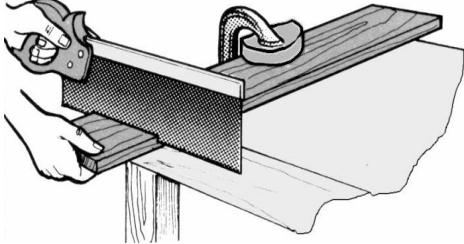
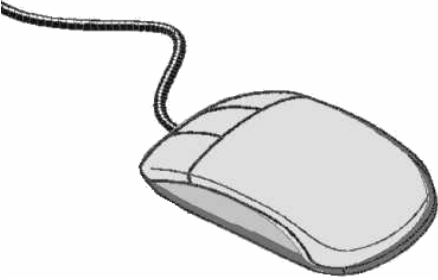

1.	Total of end of page totals	
2.	Aggregate total of all disallowed question(s)	
3.	Total mark awarded (1 minus 2)	
4.	Bonus mark for answering through Irish (if applicable)	
5.	Total mark awarded if Irish Bonus (3+4)	
	Note: The mark in row 3 (or row 5 if an Irish bonus is awarded) must equal the mark in the Total Mark box on the script	


For Examiner	
Total Mark	<input type="text"/>
Question	Mark
Section A	
Section B Q1	
Section B Q2	
Section B Q3	
Section B Q4	
Total	
Grade	

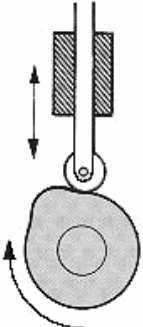
MAKE SURE TO WRITE YOUR EXAMINATION NUMBER IN THE
BOX PROVIDED ON THIS PAGE

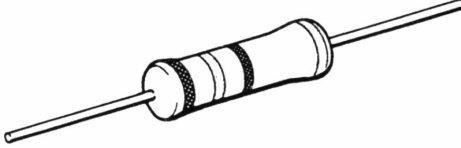
SECTION A – 80 MARKS ANSWER ANY SIXTEEN QUESTIONS IN THIS SECTION

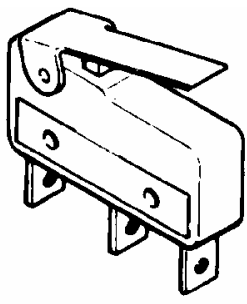
<p>1.</p> 	<p>This drawing is a(n):</p>	<p>Plan view</p>	
		<p>Perspective view</p>	
		<p>Isometric view</p>	
<p>2.</p> 	<p>An alloy is:</p>	<p>A mixture of plastic and metal</p>	
		<p>A mixture of two or more metals</p>	
		<p>A pure metal</p>	
<p>3.</p> 	<p>The capacity of a DVD is measured in:</p>	<p>Bytes</p>	
		<p>Kilobytes</p>	
		<p>Gigabytes</p>	
<p>4.</p> 	<p>The total voltage of this battery is:</p>	<p>1.5 volts</p>	
		<p>3 Volts</p>	
		<p>4.5 Volts</p>	
<p>5.</p> 	<p>John Logie Baird invented the first:</p>	<p>Radio</p>	
		<p>Television</p>	
		<p>Tape recorder</p>	

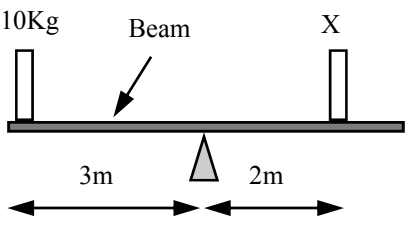
<p>6.</p> 	<p>When the coil spring is pressed in the direction of the arrows it will:</p>	<p>Bend</p>	
		<p>Shear</p>	
		<p>Compress</p>	
<p>7.</p> 	<p>A microphone Converts:</p>	<p>Sound into electricity</p>	
		<p>Electricity into sound</p>	
		<p>Sound into heat</p>	
<p>8.</p> 	<p>The saw in use here is a:</p>	<p>Hacksaw</p>	
		<p>Tenon saw</p>	
		<p>Coping saw</p>	
<p>9.</p> 	<p>A computer mouse is:</p>	<p>An output device</p>	
		<p>A storage device</p>	
		<p>An input device</p>	
<p>10.</p> 	<p>A motor cycle helmet is a:</p>	<p>Shell structure</p>	
		<p>A frame structure</p>	
		<p>A tensile structure</p>	

11. 	This is a:	Simple gear train	
		Compound gear train	
		Bevel gear system	

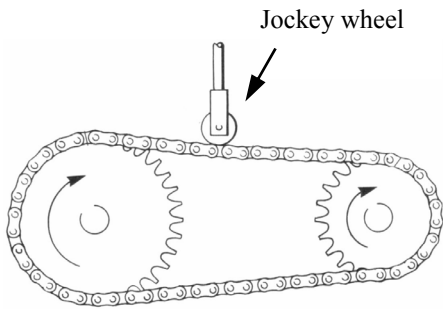
12. 	This mechanism uses a:	Cam and follower	
		Ratchet and pawl	
		Chain and sprocket	

13. 	Resistance is measured in:	Amps	
		Farads	
		Ohms	

14. 	This is a:	Toggle switch	
		Micro-switch	
		Rocker switch	

15. 	When the beam is in equilibrium (balanced) the mass at X is:	15Kg	
		30Kg	
		10Kg	

16.


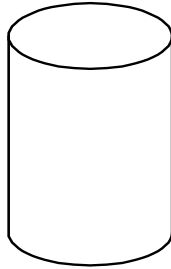


A chain and sprocket mechanism and jockey wheel are shown. Explain what the jockey wheel is used for.

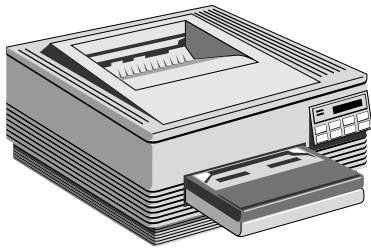
Function of the jockey wheel: _____

17.

Draw a development of this open top container in the space opposite.



18.



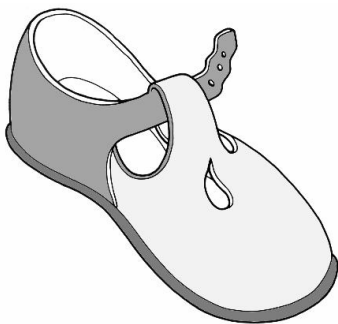
A computer printer is:

Software

Hardware

Shareware

19.



Leather is a:

Synthetic fabric

Natural fabric

Combined natural and synthetic fabric.

20.



Drinks cans are made from:

Steel

Copper

Aluminium

SECTION B – 80 MARKS
ANSWER ANY TWO QUESTIONS FROM THIS SECTION

40 Marks

1.

(a) A milk carton holder is shown. The milk carton is inserted into the holder which is then gripped by the handle. 10 Marks

(i) Suggest a suitable material from which the milk carton holder could be made.

Suitable material: _____

(ii) List three reasons for selecting this material.

1. _____

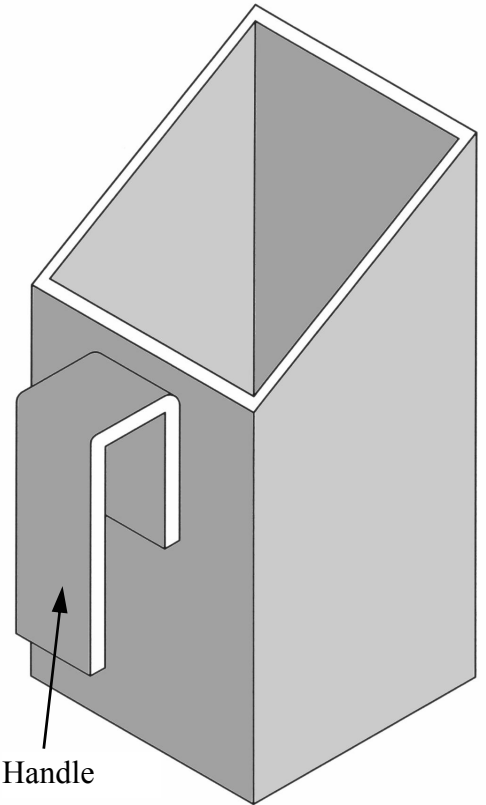
2. _____

3. _____

(iii) Suggest two methods of fixing the handle to the holder.

Method 1: _____

Method 2: _____



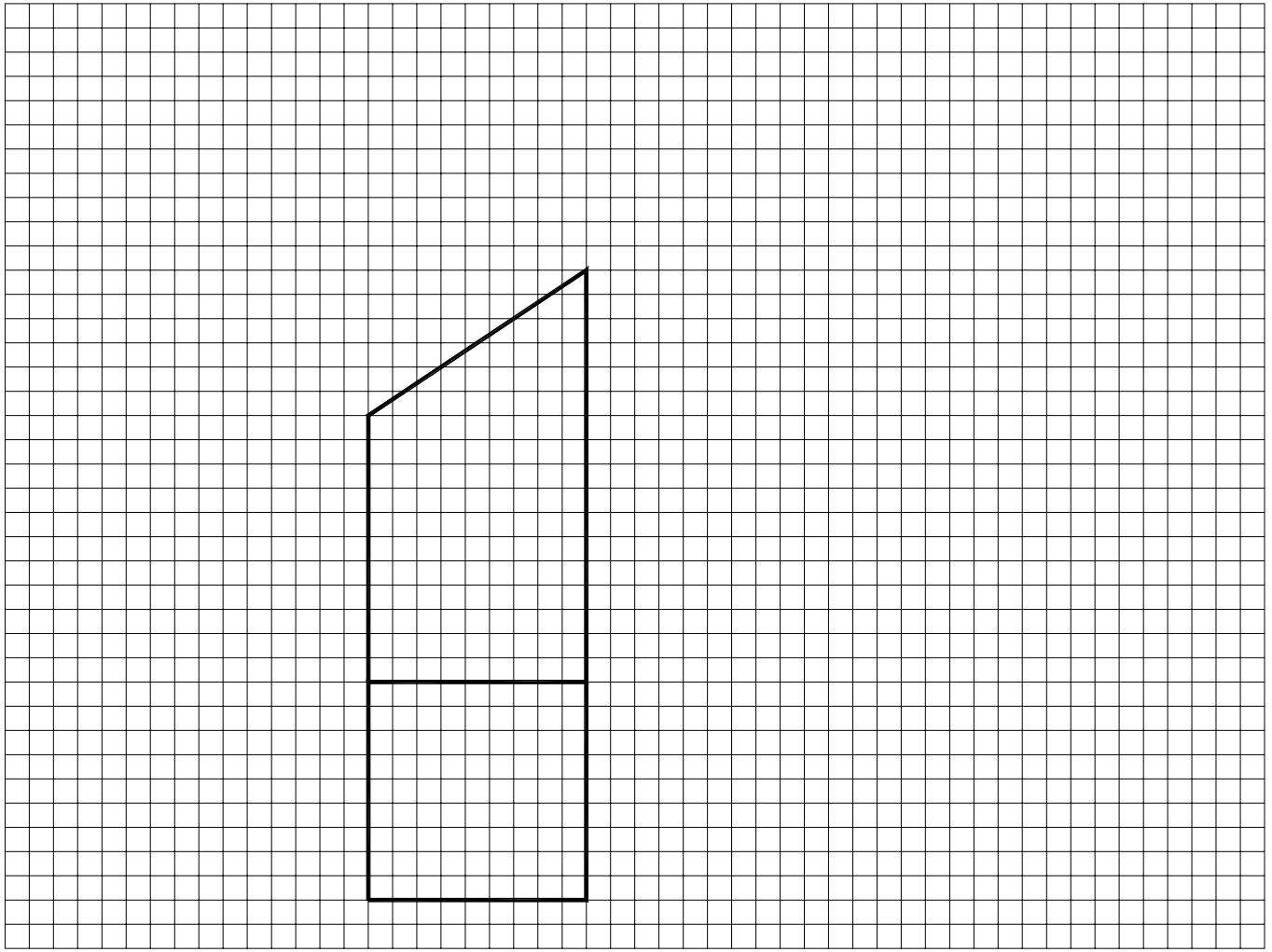
Milk carton holder

(b) Name two hand tools that you would use in the manufacture of the holder and make a sketch of each of the tools in the space provided. 10 Marks

Name of tool	Sketch

(c) The development of one side and the base of the milk carton holder is shown below. Complete this development showing the other three sides. (Omit the handle) .

12 Marks



(d) The wooden base shown is to be attached to the milk carton holder. Name a suitable wood for the base. Describe three steps in the manufacture of the base.

8 Marks

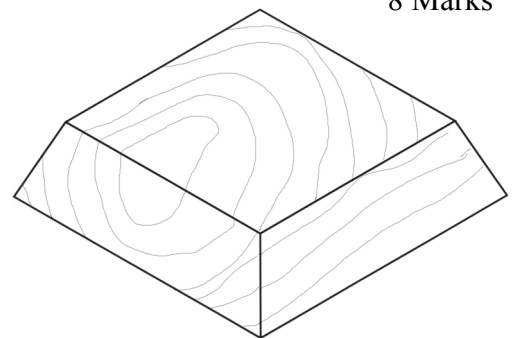
Suitable wood: _____

Manufacturing steps:

Step 1: _____

Step 2: _____

Step 3: _____



Wooden base

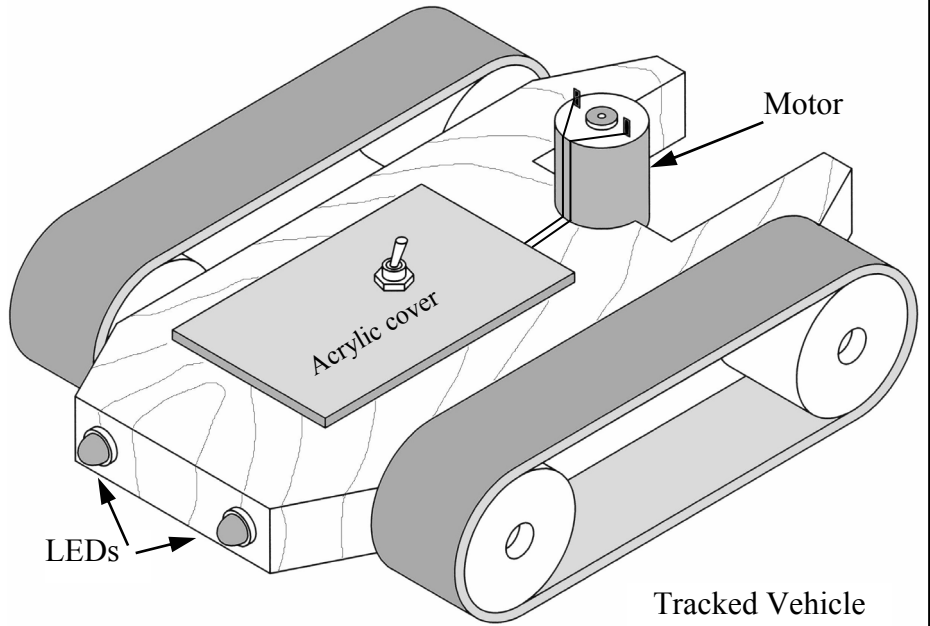
(a) A drawing of a model vehicle is shown. The body of the vehicle is made from wood. The switch activates the motor and the two flashing LEDs on the front of the vehicle.

10 Marks

(i) Name a suitable material for the tracks.

Answer: _____

(ii) In the box below draw the symbol for a LED.



(iii) In order to contain a battery, a rectangular hole is required in the body. Describe three stages in the making of the rectangular hole.

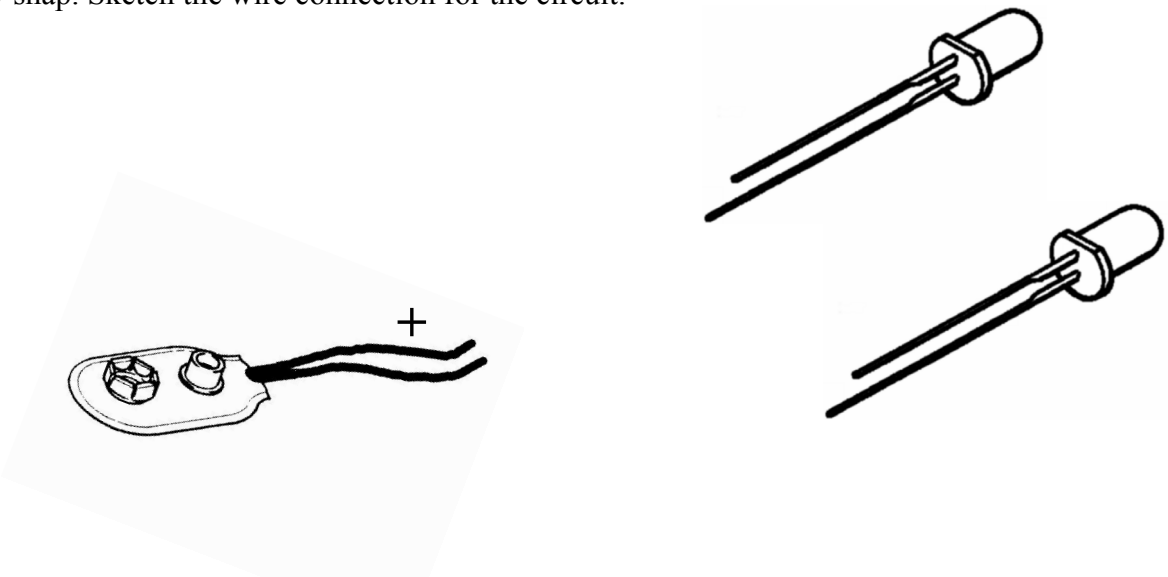
Stage 1: _____

Stage 2: _____

Stage 3: _____

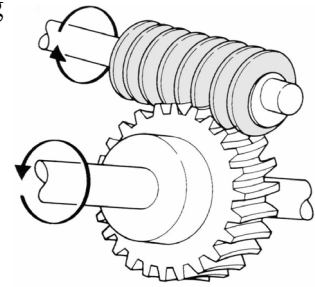
(b) The two LEDs are to be connected in parallel and then to the battery snap. Sketch the wire connection for the circuit.

6 Marks



8 Marks

(c) The motor must be connected to the rear axle of the model vehicle using a worm drive mechanism. Give three reasons for using this mechanism.



Reasons for selection:

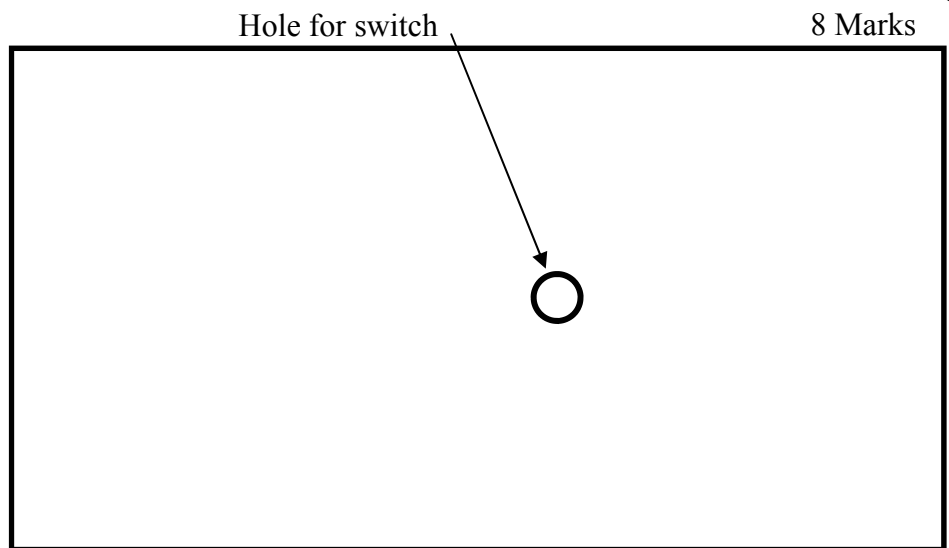
Reason 1: _____

Reason 2: _____

Reason 3: _____

8 Marks

(d) A logo for the vehicle is to be placed on the acrylic cover. The plan of the acrylic cover is shown. Draw your design for a logo on this plan. Use shading where appropriate.



Plan of acrylic cover

8 Marks

(e) List four precautions that the manufacturer of the vehicle must take to ensure that it is safe for young children.

1. _____

2. _____

3. _____

4. _____

(a) A bookend made from sheet metal is shown.

12 Marks


(i) Name a suitable metal for the bookend.

Metal: _____

(ii) Identify one safety hazard in this design.

Safety hazard: _____

(iii) A number of bookends are to be made from a piece of sheet metal measuring 200mm x 130mm. How many bookends can be made from a sheet measuring 1300mm x 400mm?



Bookend

Show on the sheet below the rectangular cutting pattern that you would use to make bookends.

Show rectangular cutting pattern here →



(b) In the space opposite, make a sketch of a design for a bookend from a material other than metal.

8 Marks

Name the material you have chosen.

Material: _____

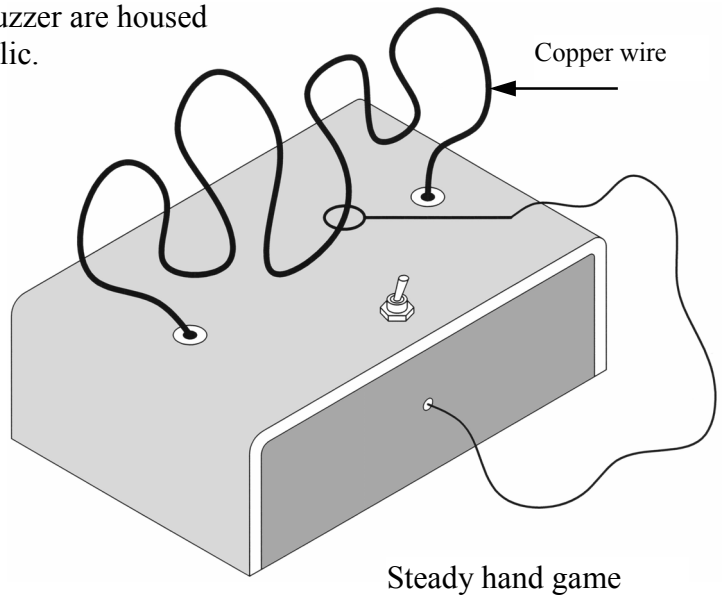


(c) A steady hand game for teaching children hand and eye co-ordination is shown. The battery and buzzer are housed inside the box. The box is made from acrylic. 12 Marks

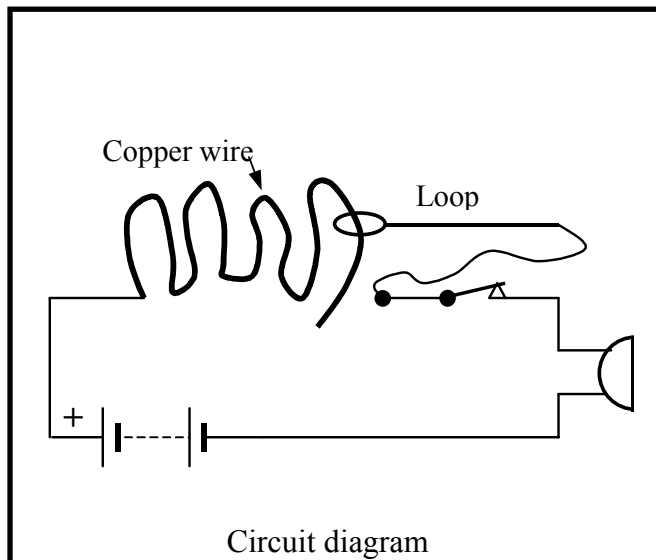
(i) A number of holes are drilled in the acrylic box. State two precautions that you would take when drilling these holes.

1. _____

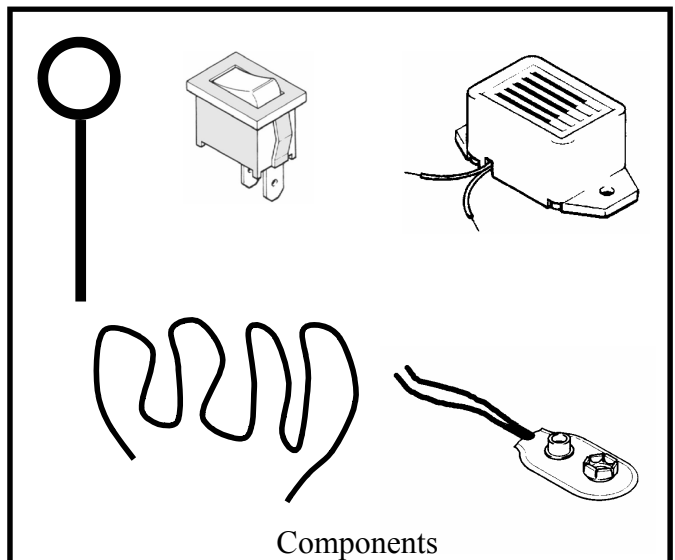
2. _____



(ii) The circuit diagram for this game is shown below on the left. The components used are shown on the right. Using the circuit diagram as a guide, show how the components on the right are joined together to make the game.



Circuit diagram



Components

(d) When the loop touches the copper wire in the steady hand game a buzzer sounds. 8 Marks

(i) Name the two types of energy in this energy conversion:

Answer: From _____ to _____

(ii) The switch in the steady hand game circuit is a SPST switch. What does SPST stand for?

Answer: _____

(iii) Which of the following metals is the best conductor of electricity?

(i) Aluminium, (ii) Steel, (iii) Copper.

Answer: _____

- (a) List three ways in which technology has influenced the methods of constructing buildings.

9 Marks

1. _____
2. _____
3. _____



- (b) List three ways in which technology can help to make the elderly feel safer in their homes.

9 Marks

1. _____
2. _____
3. _____


- (c) (i) List three technological developments that have influenced the movie industry in recent years.

14 Marks

1. _____
2. _____
3. _____

- (ii) There have been many developments in communications since Bell invented the first telephone. List three recent developments.

1. _____
2. _____
3. _____



Alexander Graham Bell


- (d) Henry Ford introduced the idea of manufacturing cars on an assembly line. Name two other products which are manufactured on an assembly line and identify two advantages of this type of production.

8 Marks

Product 1: _____ Product 2: _____

Advantage 1: _____

Advantage 2: _____



Henry Ford