



**Coimisiún na Scrúduithe Stáit**  
*State Examinations Commission*

**JUNIOR CERTIFICATE  
EXAMINATION**

**2011**

**MARKING SCHEMES**

**MATHEMATICS  
HIGHER LEVEL**





**Coimisiún na Scrúduithe Stáit**  
*State Examinations Commission*

# **JUNIOR CERTIFICATE EXAMINATION**

**2011**

**MARKING SCHEME**

**MATHEMATICS  
HIGHER LEVEL  
PAPER 1**

**MARKING SCHEME**  
**JUNIOR CERTIFICATE EXAMINATION 2011**  
**MATHEMATICS -HIGHER LEVEL- PAPER 1**

GENERAL GUIDELINES FOR EXAMINERS

1. Penalties of three types are applied to candidates' work as follows:

- Blunders - mathematical errors/omissions (-3)
- Slips- numerical errors (-1)
- Misreadings (provided task is not oversimplified) (-1).

Frequently occurring errors to which these penalties must be applied are listed in the scheme. They are labelled: B1, B2, B3,..., S1, S2,..., M1, M2,...etc. These lists are not exhaustive.

2. When awarding attempt marks, e.g. Att(3), note that
  - any *correct, relevant* step in a part of a question merits at least the attempt mark for that part
  - if deductions result in a mark which is lower than the attempt mark, then the attempt mark must be awarded
  - a mark between zero and the attempt mark is never awarded.
3. Worthless work is awarded zero marks. Some examples of such work are listed in the scheme and they are labelled as W1, W2,...etc.
4. The phrase "hit or miss" means that partial marks are not awarded – the candidate receives all of the relevant marks or none.
5. The phrase "and stops" means that no more work is shown by the candidate.
6. Special notes relating to the marking of a particular part of a question are indicated by an asterisk. These notes immediately follow the box containing the relevant solution.
7. The sample solutions for each question are not intended to be exhaustive lists – there may be other correct solutions.
8. Unless otherwise indicated in the scheme, accept the best of two or more attempts – even when attempts have been cancelled.
9. The *same* error in the *same* section of a question is penalised *once* only.
10. Particular cases, verifications and answers derived from diagrams (unless requested) qualify for attempt marks at most.
11. A serious blunder, omission or misreading results in the attempt mark at most.
12. Do not penalise the use of a comma for a decimal point, e.g. €5·50 may be written as €5,50.


## QUESTION 1

Part (a)	10 marks	Att 3
Part (b)	20 marks	Att 3,3
Part (c)	20 marks	Att 2,2,2,2

Part (a) 10 marks Att 3

Peter and Anne share a lotto prize in the ratio  $3\frac{1}{2}$  to  $2\frac{1}{2}$ .

Peter's share is €35 000.

 What is the total prize fund?

(a) 10 marks Att 3

**I**

$$3\frac{1}{2} : 2\frac{1}{2}$$

$$3\frac{1}{2} + 2\frac{1}{2}$$

$$= 6$$

$$€35,000 \div 3\frac{1}{2}$$

$$€10,000 \times 6 \quad \text{or} \quad €10,000 \times 2\frac{1}{2} = €25,000$$
$$€35,000 + €25,000$$

The total prize fund = €60,000

**II**

$$3\frac{1}{2} : 2\frac{1}{2}$$

$$7 : 5$$

$$€35,000 \div 7 = €5,000$$

$$7 + 5 = 12$$

$$€5,000 \times 12 \quad \text{or} \quad €5,000 \times 5 = €25,000$$
$$€35,000 + €25,000$$

The total prize fund = €60,000

\* Other methods may be used

\* €10,000 is 4 marks; €25,000 is 7 marks; €20,416.67 is 4 marks (B3 & B4 with work)

*Blunders (-3)*

B1 Correct answer no work shown. 

B2 Fails to finish - stops at €10,000 × 6, or €5,000 × 12 or €35,000 + €25,000 or equivalent

B3 Incorrect divisor

B4 Incorrect multiplier

B5 Decimal error

*Slips (-1)*

S1 Numerical errors to a maximum of -3

*Misreadings (-1)*

M1 Incorrect digit which does not oversimplify the question

*Attempts (3 marks)*

A1  $3\frac{1}{2} + 2\frac{1}{2}$  and stops

A2 6 or 5,000 or 25,000 or 10,000 or 12 with no work shown

A3 Any relevant step

*Worthless (0)*

W1 Incorrect answer no work shown, but note A2

W2 Work of no merit

**Part (b)****20 (10,10) marks****Att (3,3)**

(i) The diameters of Venus and Saturn are  $1.21 \times 10^4$  km and  $1.21 \times 10^5$  km .  
 ✍ What is the difference between the diameters of the two planets?  
 Give your answer in the form of  $a \times 10^n$  where  $n \in \mathbb{Z}$  and  $1 \leq a < 10$ .

(ii) ✍ Write  $\frac{\sqrt{3} \times 27}{3^2}$  in the form of  $3^n$  where  $n \in \mathbb{Q}$ .

**(b) (i)****10marks****Att3**

**I**

$1.21 \times 10,000$		
12,100	<b>3m</b>	
		$\updownarrow$ Interchangeable
$1.21 \times 100,000$		
121,000	<b>4m</b>	
$121,000 - 12,100$		
108,900	<b>7m</b>	
Difference: $1.089 \times 10^5$	<b>10m</b>	

**II**

$(1.21 \times 10^5) - (1.21 \times 10^4)$		
108,900	<b>7m</b>	
$1.089 \times 10^5$	<b>10m</b>	

\* One correct calculation 3 marks, two correct calculations 4 marks, subtraction 7 marks, conversion 10 marks

\* 108,900 **only** is B1 and B5

*Blunders (-3)*

- B1 Correct answer no work shown. ✍
- B2 Reversed subtraction
- B3 Index error
- B4 Misplaced decimal
- B5 Answer not given in required form

*Slips (-1)*

- S1 Numerical errors to a maximum of -3

*Misreadings (-1)*

- M1 Incorrect digit provided it doesn't oversimplify the question

*Attempts (3 marks)*

- A1 10,000 or 100,000 or 12,100 or 121,000
- A2 Digits 1089 with incorrectly placed decimal or index without work
- A3 Any relevant step

*Worthless (0)*

- W1 Incorrect answer, no work shown
- W2  $1.21 \times 10^1$  or  $1.21 \times 10^9$
- W3 Work of no merit

(b) (ii)

10 marks

Att3

**I**

$$\frac{\sqrt{3} \times 27}{3^2}$$

$$(3^{1/2} \times 3^3) \div 3^2$$
$$3^{7/2} \div 3^2$$
$$3^{3/2}$$

**II**

$$\frac{1.732050808 \times 27}{9}$$

$$\frac{46.7653718}{9}$$

$$5.196152423 \quad \mathbf{3m}$$

$$5.196152423 = 3^{3/2} \quad \mathbf{10m}$$

\* Accept  $3^{1.5}$  or  $3^{1\frac{1}{2}}$  for full marks.

*Blunders (-3)*

- B1 Correct answer no work shown. ✍
- B2 Each index error
- B3 Incorrect operation
- B4 Fails to finish

*Slips (-1)*

- S1 Numerical error to a maximum of -3

*Misreadings (-1)*

- M1 Misreads a digit provided it doesn't oversimplify

*Attempts (3 marks)*

- A1  $27 = 3^3$
- A2  $\sqrt{3} = 3^{1/2}$
- A3 1.732
- A4  $3^2 = 9$
- A5  $\sqrt{\quad} = \text{power of } 1/2$
- A6 5.196152423
- A7  $3\sqrt{3}$
- A6 Some relevant step

*Worthless (0)*

- W1 Incorrect answer with no work
- W2 Work of no merit



- (i) ✎ By rounding to the nearest whole number estimate the value of

$$\frac{\sqrt{(7 \cdot 17)^2 + 14 \cdot 59}}{8 \cdot 29 - 1 \cdot 64 \times 2 \cdot 23}$$

Then evaluate  $\frac{\sqrt{(7 \cdot 17)^2 + 14 \cdot 59}}{8 \cdot 29 - 1 \cdot 64 \times 2 \cdot 23}$ , correct to one decimal place.

- (ii) Úna and Conor were travelling to South Africa.  
They bought 5760 rand in the bank.  
The bank charged them €630, which included a 5% service charge.

✎ What was the value of the euro in rand (the exchange rate) on that day?

(c) (i) Estimate

5 marks

Att2

$$\frac{\sqrt{(7 \cdot 17)^2 + 14 \cdot 59}}{8 \cdot 29 - 1 \cdot 64 \times 2 \cdot 23}$$

$$\frac{\sqrt{7^2 + 15}}{8 - 2 \times 2}$$

$$\frac{\sqrt{49 + 15}}{8 - 4}$$

$$\frac{\sqrt{64}}{4}$$

$$\frac{8}{4}$$

$$= 2$$

*Blunders (-3)*

- B1 Correct answer no work shown. ✎  
B2 Precedent error (*i.e.* incorrect order)  
B3 Mishandles square root  
B4 Incorrect squaring  
B5 Incorrect use of indices  
B6 Decimal error  
B7 Mathematical error  
B8 Calculates first, then rounds (*i.e.* 1.8, rounded to 2)

*Slips (-1)*

- S1 Numerical errors to a maximum of -3  
S2 Incorrect rounding to a max of -3 if it affects answer

*Misreadings (-1)*

- M1 Misreads a digit, provided it doesn't oversimplify the question

*Attempts (2 marks)*

A1 Some correct rounding

A2 Any correct step without rounding

*Worthless (0)*

W1 1·8 without work

W2 Work of no merit

**(c) (i) Evaluate**

**5 marks**

**Att 2**

$$\frac{\sqrt{(7 \cdot 17)^2 + 14 \cdot 59}}{8 \cdot 29 - 1 \cdot 64 \times 2 \cdot 23}$$
$$\frac{\sqrt{51 \cdot 4089 + 14 \cdot 59}}{8 \cdot 29 - 3 \cdot 6572}$$
$$\frac{\sqrt{65 \cdot 9989}}{4 \cdot 6328}$$
$$\frac{8 \cdot 123970704}{4 \cdot 6328}$$
$$1 \cdot 7535 = 1 \cdot 8$$

*Blunders (-3)*

B1 Apply once in (c) (i). Correct answer with no work shown. ✎

B2 Mishandles square root

B3 Incorrect squaring

B4 Precedent error

B5 Incorrect use of indices

B6 Decimal error

*Slips (-1)*

S1 Numerical error to a maximum of -3

S2 Incorrect or no rounding, apply once if it affects final answer

*Misreadings (-1)*

M1 Misreads a digit, provided it doesn't oversimplify the question

*Attempts (2 marks)*

A1 Any relevant step *e.g. squaring, multiplying, square root etc.*

*Worthless (0)*

W1 Incorrect answer no work shown

W2 Work of no merit

(c) (ii)

10 (5,5) marks

Att 2,2

**I**

$$105\% = €630$$

$$1\% = €630 \div 105$$

$$1\% = €6$$

$$100\% = €600 \quad \mathbf{5m}$$

$$€600 = 5760 \text{ rand}$$

$$€1 = 5760 \div 600$$

$$€1 = 9.6 \text{ rand} \quad \mathbf{5m}$$

Value of euro in rand: €1 = 9.6 rand

**II**

$$5760 \text{ rand} \times 105\%$$

$$= 6048 \text{ rand} \quad \mathbf{5m}$$

$$€630 = 6048 \text{ rand}$$

$$€1 = 6048 \div 630$$

$$€1 = 9.6 \text{ rand} \quad \mathbf{5m}$$

\* Accept final answer €1 = 9.6 rand with some work for 10 marks

\* Two parts in marking this question; dealing with the 5% and the conversion in any order. 5 marks each (but note first \*)

*Blunders (-3)*

B1 Correct answer no work shown. ✍

B2 Incorrect operation

B3 Inverted division

B4 Decimal error

*Slips (-1)*

S1 Numerical error to a maximum of -3

*Misreadings (-1)*

M1 Misreads a digit provided it doesn't oversimplify the question

*Attempts (2,2 marks)*

A1 105% or 100% + 5%

A2 105% = €630 and stops

A3 Any relevant step

*Worthless (0)*


W1 Incorrect answer no work shown

W2 Work of no merit

## QUESTION 2

<b>Part (a)</b>	<b>10 marks</b>	<b>Att 3</b>
<b>Part (b)</b>	<b>25 marks</b>	<b>Att 3,3,2</b>
<b>Part (c)</b>	<b>15 marks</b>	<b>Att 2,2,2</b>
<b>Part (a)</b>	<b>10 marks</b>	<b>Att 3</b>

A computer salesperson is paid an annual salary of €30 000.  
He is also paid a commission of 4% on sales.  
Last year the salesperson earned €38 000.

 Calculate the value of the sales.

**(a)** **10 marks** **Att 3**

**I**

$$€38,000 - €30,000 = €8000$$

$$\text{Commission of } 4\% = €8000$$

$$1\% = €8,000 \div 4$$

$$1\% = €2,000$$

$$100\% = \text{Sales} = €200,000$$

**II**

$$€30,000 + 4\% \text{ of Sales} = €38,000$$

$$€30,000 + \cdot 04 \text{ Sales} = €38,000$$


$$\cdot 04 \text{ Sales} = €38,000 - €30,000$$

$$\cdot 04 \text{ Sales} = €8,000$$

$$\text{Sales} = €8,000 \div \cdot 04$$

$$\text{Sales} = €200,000$$

*Blunders (-3)*

- B1 Correct answer no work shown. 
- B2 Decimal error
- B3 Percentage error
- B4 Incorrect transposition
- B5 Mathematical error
- B6 Expresses % as an incorrect fraction and continues
- B7 In Method I, stops at €2,000
- B8 Fails to finish

*Slips (-1)*

- S1 Numerical errors to a maximum of -3

*Misreadings (-1)*

- M1 Incorrect figure if it doesn't oversimplify the question e.g. uses €36,000

*Attempts (3 marks)*

- A1 Indicates some knowledge of percentages e.g.  $4\% = 4/100$  or  $\cdot 04$
- A2 Subtraction involving €38,000 and €30,000 or €8,000 mentioned without work
- A3 Any relevant step

*Worthless (0)*

- W1 Incorrect answer no work shown
- W2 Adds €30,000 and €38,000
- W3 Adds or subtracts 4 and €30,000 or 4 and €38,000
- W4 Work of no merit

**Part (b)****25 (10,10,5) marks****Att 3,3,2****Aoife is single and earned €40 000 last year. Aoife's tax credits are listed below.**

Single Person Tax Credit	€1830
PAYE Tax Credit	€1830
Rent Allowance Tax Credit	€400
Trade Union Payment Tax Credit	€70

**(i)** ✎ Calculate Aoife's total tax credits.

The standard rate cut-off point for a single person was €36 400.

The standard rate of income tax was 20% and the higher rate was 41%.

**(ii)** ✎ Calculate the tax paid by Aoife on her income.

Aoife also had to pay a 2% income levy on her gross income.

**(iii)** ✎ Calculate Aoife's net income after all deductions had been made.**(b) (i)****10 marks****Att 3**

$$€1,830 + €1,830 + €400 + €70 = \quad \mathbf{7m}$$

$$\text{Total tax credits} = €4,130 \quad \mathbf{10m}$$

*Blunders (-3)*

- B1 Correct answer no work shown. ✎  
 B2 Omits one tax credit  
 B3 Addition indicated but fails to complete

*Slips (-1)*

- S1 Numerical error to a maximum of -3

*Misreadings (-1)*

- M1 Incorrect number written e.g. €1,380 etc. provided it doesn't oversimplify the question

*Attempts (3 marks)*

- A1 Adds two numbers together from list  
 A2 Any relevant step

*Worthless (0)*

- W1 Incorrect answer no work shown  
 W2 Work of no merit

(b) (ii)

10 marks

Att 3

$€40,000 - €36,400 = €3,600$	3m	
$€36,400 \times 20\% = €7,280$	3m	
		↕ Interchangeable
$€3,600 \times 41\% = €1,476$	4m	
$€7,280 + €1,476 = €8,756$	7m	
$€8,756 - €4,130$	7m	
The tax paid = €4,626	10m	

\* Accept candidate's tax credit figure from (b)(i)

\* If candidate gets 41% of €36,400 (€14,924) and 20% of €3,600 (€720) **and** continues correctly, this is one blunder (Total tax €15,644 minus tax credits €4,130 = €11,514 is worth 7 marks)

*Blunders (-3)*

- B1 Correct answer no work shown. ✍
- B2 Decimal error
- B3 Percentage error
- B4 20% of an incorrect figure but note \*2
- B5 41% of an incorrect figure but note \*2
- B6 Mishandles tax credits
- B7 Mathematical error
- B8 Fails to finish

*Slips (-1)*

- S1 Numerical error to a maximum of -3

*Misreadings (-1)*

- M1 Uses 21%
- M2 Uses 40% or 42%

*Attempts (3 marks)*

- A1 Finds 20% or 41% of any number and stops
- A2 Writes 20% as 20/100, 1/5 or ·2 without any further work of merit
- A3 Writes 41% as 41/100 or 0·41 without any further work of merit
- A4 Some knowledge of tax paid e.g. writes tax paid = total tax – tax credits
- A5 €7,280 **or** €1,476 with or without work
- A6 Any relevant step

*Worthless (0)*

- W1 Incorrect answer no work shown, but note A2, A3 and A5
- W2 Work of no merit

**(b) (iii)**

**5 marks**

**Att 2**

$$\begin{aligned}\text{€}40,000 \times 2\% &= \text{€}800 \\ \text{€}4,626 + \text{€}800 &= \text{€} 5,426 \\ \text{€}40,000 - \text{€} 5,426 \\ \text{Net income} &= \text{€}34,574\end{aligned}$$

\* Accept candidate's "tax paid" figure from (b) (ii)

*Blunders (-3)*

- B1 Correct answer no work shown. ✍
- B2 Decimal error
- B3 Percentage error
- B4 Finds 2% of incorrect figure and continues
- B5 Mathematical error
- B6 Fails to finish
- B7 Ignores "tax paid" figure when calculating net income

*Slips (-1)*

- S1 Numerical errors to a maximum of -3

*Attempts (2 marks)*

- A1 Finds 2% of any number and stops
- A2  $2\% = \cdot 02$  or  $2/100$  or  $1/50$
- A3 Demonstrates some knowledge of net income *e.g.* Net income = Gross – Tax
- A4 Demonstrates some knowledge of income levy *e.g.* Levy = Gross  $\times$  %
- A5 Any relevant step

*Worthless (0)*

- W1 Incorrect answer no work shown, but note A2
- W2 Work of no merit

**Part (c)****15 (5,5,5) marks****Att 2,2,2**

$U$  is the universal set and  $P$  and  $Q$  are two subsets of  $U$ .

$\#U = 30$ ,  $\#P = 16$  and  $\#Q = 6$ .

(i) ✍ Find with the aid of a Venn diagram the minimum value of  $\#(P \cup Q)'$ .

(ii) ✍ Find with the aid of a Venn diagram the maximum value of  $\#(P \cup Q)'$ .

$\#U = u$ ,  $\#P = p$ ,  $\#Q = q$  and  $\#(P \cup Q)' = x$ .

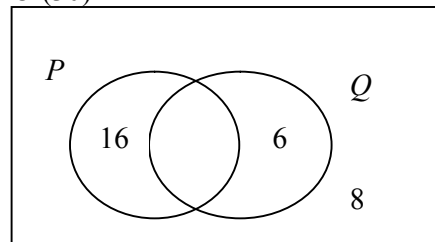
(iii) ✍ Show with the aid of a Venn diagram, that if  $p > q$  and  $x$  is a maximum, then  $u = p + x$ .

**(c) (i)****5 marks****Att 2**

$$16 + 6 = 22$$

$$30 - 22 = 8$$

$U(30)$



Minimum value of  $\#(P \cup Q)' = 8$

\* Accept correct Venn diagram for full marks

\* Ignore notation

*Blunders (-3)*

B1 Correct answer no work shown. ✍

B2 Incorrect operation

B3 Venn diagram correct but no minimum included or stated

*Slips (-1)*

S1 Correct value of 8 for minimum with work and no Venn diagram or incorrect Venn diagram

*Attempts (2 marks)*

A1 Venn diagram

A2  $16 + 6$  and stops

A3  $30 - 6$  or  $30 - 16$  and stops

A4 Any relevant step

*Worthless (0)*

W1 Incorrect answer no work shown

W2 Work of no merit



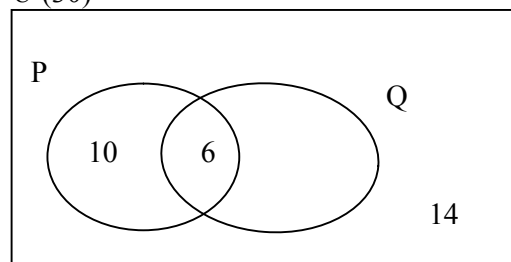
(c) (ii)

5 marks

Att 2

$$16 - 6 = 10$$
$$30 - 16 = 14$$

$U(30)$



Maximum value of  $\#(P \cup Q)' = 14$

- \* Accept correct Venn diagram for full marks
- \* Ignore notation

*Blunders (-3)*

- B1 Correct answer no work shown. ✍
- B2 Incorrect operation
- B3 Venn diagram correct but no maximum included or stated

*Slips (-1)*

- S1 Correct value of 14 for maximum with work and no Venn diagram or incorrect Venn diagram

*Attempts (2 marks)*

- A1 Venn diagram
- A2  $16 - 6$
- A3 Any relevant step

*Worthless (0)*

- W1 Incorrect answer no work shown
- W2 Work of no merit

(c) (iii)

5 marks

Att 2

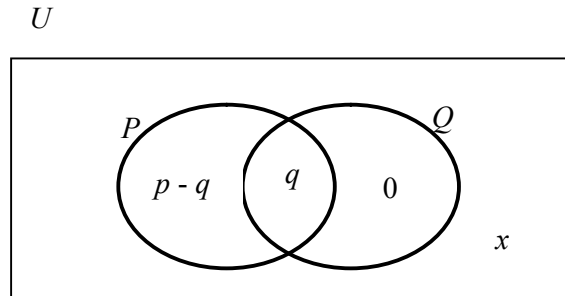
0 in Q only for  $x$  to be a maximum

$$u = p - q + q + x$$

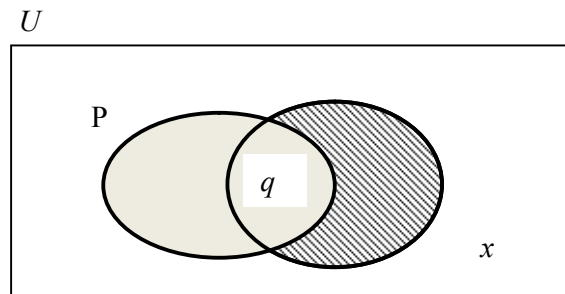
$$u = p + x$$

Venn diagram to give:  $u = p + x$

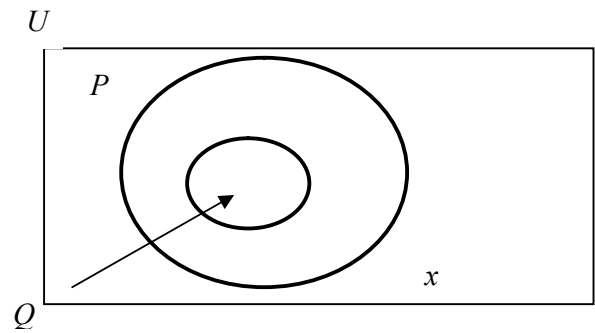
I



II



III



\* Accept correct Venn diagram for full marks **with conclusion**  $u = p + x$

\* Ignore notation

*Blunders (-3)*

B1 Omits term from equation

B2 Fails to finish

B3 #  $Q/P \neq 0$

B4 #  $P/Q \neq p - q$

B5 #  $(P \cap Q) \neq q$

*Slips (-1)*

S1  $u = p - q + q + x \rightarrow u = p + x$  only. No Venn diagram.

S2 No conclusion

*Attempts (2 marks)*

A1 Venn diagram

A2  $p - q$

A3 Any relevant step

*Worthless (0)*

W1 Incorrect answer no work shown

W2  $u = p + x$  only (Given)

W3 No work of merit

### QUESTION 3

<b>Part (a)</b>	<b>10 marks</b>	<b>Att 3</b>
<b>Part (b)</b>	<b>20 marks</b>	<b>Att 3,3</b>
<b>Part (c)</b>	<b>20 marks</b>	<b>Att 2,2,2,2</b>

**Part (a)** **10 marks** **Att 3**

$\pencil$  Given that  $t^2 - s = r$ , express  $t$  in terms of  $r$  and  $s$ .

**(a)** **10 marks** **Att 3**

$t^2 - s = r$	<b>Given</b>
$t^2 = r + s$	<b>7m</b>
$t = \sqrt{r + s}$	<b>10m</b>

- \* Two steps in this question, transposition and square root
- \*  $t - s = r$  and continues correctly to get  $t = r + s$  is worth 6 marks - Misread and B2.
- \* Finds  $s$  correctly in terms of  $t$  and  $r$  is 6 marks - Misread and B2. ( $s = t^2 - r$ )

*Blunders (-3)*

- B1 Correct answer no work shown.  $\pencil$
- B2 Mishandles or fails to get square root
- B3 Incorrect operation *e.g.* May attempt to square everything
- B4 Transposition error

*Misreadings (-1)*

- M1 Note \*2 and \*3
- M2  $t^2 + s = r$  and continues correctly to get  $t = \sqrt{r - s}$

*Attempts (3 marks)*

- A1 Effort at square root
- A2  $t^2 - s = r$  (with or without = 0)
- A3 Any relevant step

*Worthless (0)*

- W1 Incorrect answer no work shown
- W2 Work of no merit

**Part (b)** **20 (10,10) marks** **Att (3,3)**

**(i)**  $\pencil$  Divide  $3x^2 + 5x - 28$  by  $x + 4$ .

**(ii)**  $\pencil$  Solve the equation  $\frac{4x+2}{5} - \frac{6-x}{3} = -5$ .

(b) (i)

10 marks

Att3

**I**  
 $3x^2 + 5x - 28 \div x + 4$

$$\frac{(3x-7)(x+4)}{x+4}$$

$$= 3x - 7$$

**II**  
 $3x^2 + 5x - 28 \div x + 4$   
 $3x^2 + 12x - 7x - 28 \div x + 4$   
 $3x(x+4) + 7(x+4) \div x + 4$   
 $(3x-7)(x+4) \div x + 4$   
 $= 3x - 7$

**III**  
Division to give answer  $3x - 7$

$$\begin{array}{r} 3x - 7 \\ x + 4 \overline{) 3x^2 + 5x - 28} \\ \underline{3x^2 + 12x} \phantom{- 28} \\ -7x - 28 \\ \underline{-7x - 28} \\ 0 \end{array}$$

\*  $(3x+7)(x-4)$  and continues is one blunder (B4), will also incur B5 or B6.  
All other attempts to factorise apply B2, B3 and/or B4.

*Blunders (-3)*

- B1 Correct answer no work shown. ✍
- B2 Incorrect factors of  $3x^2$  in method **I**
- B3 Incorrect factors of  $-28$  in method **I**
- B4 Incorrect factors leading to an incorrect middle term in method **I**
- B5 Fails to finish *i.e.* no cancellation in method **I**
- B6 Incorrect cancellation
- B7 Mathematical error, once if consistent

*Slips (-1)*

- S1 Numerical errors to a maximum of  $-3$

*Attempts (3 marks)*

- A1 Some effort at factorising
- A2 Sets up division
- A3 Multiplies instead of dividing, with at least one correct term
- A4 Finds guide number ( $-84$ ) in method **II** and stops
- A5 Quadratic with some correct substitution
- A6 Sets up quadratic and identifies  $a, b$  or  $c$
- A7 Uses quadratic formula and stops at correct roots ( $x = -4$  and  $x = 7/3$ )
- A8 Any relevant step

*Worthless (0)*

- W1 Incorrect answer no work shown
- W2 ( ) ( )
- W3 Work of no merit

(b) (ii)

10 marks

Att3

**I**

$$\frac{4x+2}{5} - \frac{6-x}{3} = -5$$

$$\frac{3(4x+2) - 5(6-x)}{15} = -5$$

$$3(4x+2) - 5(6-x) = 15(-5)$$

$$12x + 6 - 30 + 5x = -75$$

$$17x - 24 = -75$$

$$17x = -75 + 24$$

$$17x = -51$$

$$x = -51 \div 17$$

$$x = -3$$

**II**

$$\frac{4x+2}{5} - \frac{6-x}{3} = -5$$

$$\frac{(4x+2)(3)(5) - (6-x)(3)(5)}{5 \cdot 3} = -5(3)(5)$$

$$3(4x+2) - 5(6-x) = 15(-5)$$

$$12x + 6 - 30 + 5x = -75$$

$$17x - 24 = -75$$

$$17x = -75 + 24$$

$$17x = -51$$

$$x = -51 \div 17$$

$$x = -3$$

**III**

$$\frac{4x+2}{5} - \frac{6-x}{3} = -5$$

$$3(4x+2) - 5(6-x) = (5)(3)(-5)$$

$$12x + 6 - 30 + 5x = -75$$

$$17x - 24 = -75$$

$$17x = -75 + 24$$

$$17x = -51$$

$$x = -51 \div 17$$

$$x = -3$$

\*  $x = -3$ , by trial and error or similar, **fully verified** merits 10 marks

*Blunders (-3)*

- B1 Correct answer no work shown. ✍
- B2 Distribution error, once if consistent
- B3 Incorrect common denominator or mishandles denominator
- B4 Transposition error, once if consistent
- B5 Mathematical error
- B6 Mishandles numerator
- B7 Combines unlike terms and continues

*Slips (-1)*

S1 Numerical errors to a maximum of  $-3$

*Attempts (3 marks)*

A1 Common denominator and stops

A2 Oversimplified but some correct work

A3 Cross multiplies

A4 Any relevant step

*Worthless (0)*

W1 Incorrect answer no work shown

W2 Adds or subtracts terms incorrectly *e.g.*  $5 + 3$ , or  $4x + 2 \pm 6 - x$  etc.

W3 Work of no merit



**Part (c)****20 (5,5,5,5) marks****Att 2,2,2,2**

A car park can accommodate cars and mini-buses.

On a particular day there were  $x$  cars and  $y$  mini-buses in the car park, giving a total of 520 vehicles.

The parking area for a car is  $7 \text{ m}^2$  and the parking area for a mini-bus is  $12 \text{ m}^2$ .

On that day a total area of  $3840 \text{ m}^2$  was occupied by cars and mini-buses.

(i) Write down two equations to represent the above information.

(ii) Solve these equations to find the number of cars and the number of mini-buses in the car park on that day.

There is a flat rate charge per day for parking.

The flat rate for mini-buses is 3 times that for cars. On that day €3000 was taken in.

(iii) What is the flat rate for cars?

**(c) (i)****10 (5,5) marks****Att 2,2**

$$\begin{array}{rcl} x + y & = & 520 \quad \mathbf{5m} \\ 7x + 12y & = & 3840 \quad \mathbf{5m} \end{array}$$

- \* Two equations to mark in (c) (i)
- \* Each equation is marked separately
- \* Each equation is worth 5 marks, attempt 2
- \* Answer is sufficient for full marks (No ✍ in question)

*Blunders (-3)*

B1 Incorrect term

*Attempts (2,2 marks)*

A1  $x$  or  $y$  or  $7x$  or  $12y$

A2 Effort at creating an equation equal to 520 or 3,840

A3 Any relevant step

**(c) (ii)****5 marks****Att 2**

$$\begin{array}{rcl} \mathbf{I} & & \\ x + y & = & 520 \quad (-7) \\ 7x + 12y & = & 3840 \\ -7x - 7y & = & -3640 \\ \hline 7x + 12y & = & 3840 \\ 5y & = & 200 \\ y & = & 200 \div 5 \\ y & = & 40 \end{array}$$

$$\begin{array}{rcl} x + y & = & 520 \\ x + 40 & = & 520 \\ x & = & 520 - 40 \\ x & = & 480 \\ x = 480 & \text{and} & y = 40. \end{array}$$

**II**

$$x + y = 520 \quad (-12)$$

$$7x + 12y = 3840$$

$$-12x - 12y = -6240$$

$$\underline{7x + 12y = 3840}$$

$$-5x = -2400$$

$$5x = 2400$$

$$x = 2400 \div 5$$

$$x = 480$$

$$480 + y = 520$$

$$y = 520 - 480$$

$$y = 40$$

$$x = 480 \quad \text{and} \quad y = 40.$$

**III**

$$x = 520 - y$$

$$7(520 - y) + 12y = 3840$$

$$3640 - 7y + 12y = 3840$$

$$-7y + 12y = 3840 - 3640$$

$$5y = 200$$

$$y = 200 \div 5$$

$$y = 40$$

$$x + y = 520$$

$$x + 40 = 520$$

$$x = 520 - 40$$

$$x = 480$$

$$x = 480 \quad \text{and} \quad y = 40.$$

**IV**

$$y = 520 - x$$

$$7x + 12(520 - x) = 3840$$

$$7x + 6240 - 12x = 3840$$

$$7x - 12x = 3840 - 6240$$

$$-5x = -2400$$

$$5x = 2400$$

$$x = 2400 \div 5$$

$$x = 480$$

$$480 + y = 520$$

$$y = 520 - 480$$

$$y = 40$$

$$x = 480 \quad \text{and} \quad y = 40$$

- \*1 Equations may be also solved by substituting  $y = \frac{3840 - 7x}{12}$  or  $x = \frac{3840 - 12y}{7}$
- \*2 Accept candidate's equations from (c) (i) provided oversimplification does not occur
- \*3 Apply only one blunder in establishing the first equation in terms of  $x$  only or the first equation in terms of  $y$  only.
- \*4 Finding the second variable is subject to a maximum deduction of 3 marks
- \*5 Correct values of  $x$  and  $y$  without algebraic work, **both verified in both equations** merits full marks
- \*6 Correct values of  $x$  and  $y$  without algebraic work **not verified or not fully verified in both equations** merits attempt mark only

*Blunders (-3)*

- B1 Finds one variable only
- B2 Distribution error
- B3 Mathematical error
- B4 Incorrect substitution when finding second variable, but note M1
- B5 Transposition error in solving first variable
- B6 Transposition error in solving second variable
- B7 Error(s) in establishing the first equation in terms of  $x$  ( $-5x = -2400$ ) only or the first equation in terms of  $y$  ( $-5y = -200$ ) only through elimination by cancellation **I** and **II**
- B8 Error(s) in establishing the first equation in terms of  $x$  ( $-5x = -2400$ ) only or the first equation in terms of  $y$  ( $5y = 200$ ) only through elimination by substitution **III** and **IV**

*Slips (-1)*

- S1 Numerical errors to a max of -3

*Misreadings (-1)*

- M1 Misreads digits, providing it doesn't oversimplify

*Attempts (2 marks)*

- A1 Any correct manipulation of either given equation and stops
- A2 Some correct partial substitution and stops
- A3 Any relevant step

*Worthless (0)*

- W1 Incorrect answer, no work shown
- W2 Trial and error, but see \*5 and \*6 above
- W3 Work of no merit

(c) (iii)

5 marks

Att 2

$$3x : x$$

$$480x + 3x(40) = 3,000$$

$$480x + 120x = 3,000$$

$$600x = 3,000$$

$$x = 3,000 \div 600$$

$$x = 5$$

$$\text{Flat rate for cars} = \text{€}5$$

\* Accept candidate's answers from (c) (ii)

*Blunders (-3)*

B1 Correct answer no work shown. ✍

B2 Mathematical error

B3 Uses ratio Buses: Cars 1:3, but note M1

*Slips (-1)*

S1 Numerical errors to a maximum of -3

*Misreadings (-1)*

M1 Misreads values for buses and cars (*i.e.* uses 40 cars and 480 buses – note B3)

*Attempts (2 marks)*

A1 States ratio 3:1 and stops

A2 Some correct partial substitution and stops

A3  $3000 \div 4$  or 750 or  $3 + 1$

A4 Some relevant step *e.g.* divides 3,000

*Worthless (0)*

W1 Incorrect answer no work shown

W2 Trial and error with incorrect value(s)

W3 Work of no merit

## QUESTION 4

<b>Part (a)</b>	<b>10 marks</b>	<b>Att 3</b>
<b>Part (b)</b>	<b>20 marks</b>	<b>Att 2,3,2</b>
<b>Part (c)</b>	<b>20 marks</b>	<b>Att 2,2,2,2</b>

**Part (a)** **10 marks** **Att 3**

Graph on the number line the solution set of  
 $-2x + 1 > -7, x \in \mathbb{N}$ .

**(a)** **10 marks** **Att 3**

**I**


$$-2x + 1 > -7$$

$$-2x > -7 - 1$$

$$-2x > -8$$

$$2x < 8$$

$$x < 4$$

$$x \in \{1, 2, 3\}$$


**II**


$$-2x + 1 > -7$$

$$1 + 7 > 2x$$

$$8 > 2x$$

$$4 > x$$

$$x < 4$$

$$x \in \{1, 2, 3\}$$


- \* Accept  $x \in \{0, 1, 2, 3\}$  plotted
- \* Graph must be based on candidate's inequality

*Blunders (-3)*

- B1 Correct answer no work shown.
- B2 Mishandles inequality
- B3 Fails to graph
- B4 Transposition error
- B5 Mathematical error
- B6  $x \in \mathbb{R}$  indicated
- B7  $2x + 1 > -7$  solved to get  $x > -4$  with correct graph

*Slips (-1)*

S1 Numerical errors to a max of -3

S2 Includes 4 on graph

S3 Each incorrect or missing number to a maximum of 3

*Misreadings (-1)*

M1 Includes equals in inequality

*Attempts (3 marks)*

A1 Tests any value in inequality and stops

A2 Draws any number line

A3 Any relevant step

*Worthless (0)*

W1 List given with no correct value

W2 Work of no merit

**Part (b)**

**20 (5,10,5) marks**

**Att 2,3,2**

(i) Factorise  $x^2 - 1$ .

(ii) ✍ Factorise fully  $ax - 3 - a + 3x$ .

(iii) Factorise  $6x^2 + x - 35$

**(b) (i)**

**5 marks**

**Att 2**

$x^2 - 1 =$	<b>Given</b>
$x^2 - 1^2 =$	<b>2m</b>
$(x - 1)(x + 1)$	<b>5m</b>

- \* Answer is sufficient for full marks (No ✍ in question)
- \* Accept also (with or without brackets) for full marks any of the following:  
( $x - 1$ ) and ( $x + 1$ ) [The word 'and' is written down]  
( $x - 1$ ) or ( $x + 1$ ) [The word 'or' is written down]  
( $x - 1$ ), ( $x + 1$ ) [a comma is used]
- \* Quadratic equation method is subject to slips and blunders

*Blunders (-3)*

- B1 Incorrect factors of  $x^2$
- B2 Incorrect factors of  $-1$
- B3  $(1 - x)(1 + x)$
- B4 Answer left as roots  $x = \pm 1$

*Slips (-1)*

- S1  $(x - 1) + (x + 1)$
- S2  $(x - 1) - (x + 1)$

*Attempts (2 marks)*

- A1  $x^2 - 1^2$
- A2 Correct factors of  $x^2$  only
- A3 Correct factors of 1 or  $-1$  only
- A4  $\pm x$  or  $\pm 1$
- A5  $x^2 - 1 = x \times x - 1 \times 1$
- A6 Difference of two squares mentioned
- A7  $\sqrt{1}$
- A8  $\sqrt{x^2}$
- A9 Correct quadratic formula with some correct substitution

*Worthless (0)*

- W1 Combines terms incorrectly and stops e.g.  $-1 x^2$
- W2 Work of no merit

(b) (ii)

10 marks

Att 3

**I**

$$\begin{array}{ll} ax - 3 - a + 3x & \text{Given} \\ ax - a + 3x - 3 & \text{3m} \\ a(x - 1) + 3(x - 1) & \text{7m} \\ (a + 3)(x - 1) & \text{10m} \end{array}$$

**II**

$$\begin{array}{ll} ax - 3 - a + 3x & \text{Given} \\ ax + 3x - a - 3 & \text{3m} \\ x(a + 3) - 1(a + 3) & \text{7m} \\ (a + 3)(x - 1) & \text{10m} \end{array}$$

- \* Accept also (with or without brackets) for full marks any of the following with work
- $(a + 3)$  and  $(x - 1)$  [The word 'and' is written down]
  - $(a + 3)$  or  $(x - 1)$  [The word 'or' is written down]
  - $(a + 3), (x - 1)$  [A comma is used]

*Blunders (-3)*

- B1 Correct answer no work shown. ✍
- B2 Failure to complete last step e.g. stops at  $a(x - 1) + 3(x - 1)$
- B3 Error in factorising any pair of terms, apply once if consistent
- B4 Incorrect last step e.g.  $3a(x - 1)$  or  $(a + 3)(-1x)$
- B5 Incorrect common factor and continues e.g.  $x(a + 3) + 1(-a - 3)$ . B4 will also apply.

*Slips (-1)*

- S1  $(a + 3) + (x - 1)$
- S2  $(a + 3) - (x - 1)$

*Attempts (3 marks)*

- A1 Pairing off matching terms, or indication of common factors and stops
- A2 Correctly factorises any pair and stops
- A3 Any relevant step

*Worthless (0)*

- W1 ( ) ( )
- W2 Pairing of terms with nothing in common e.g.  $ax - 3$  and no further work of merit
- W3 Work of no merit



(b) (iii)

5 marks

Att 2

**I**

$$6x^2 + x - 35$$

$$(2x + 5)(3x - 7)$$

**II**

$$6x^2 + x - 35$$

$$6x^2 - 14x + 15x - 35$$

$$2x(3x - 7) + 5(3x - 7)$$

$$(2x + 5)(3x - 7)$$

**III**

$$6x^2 + x - 35$$

$$6x^2 + 15x - 14x - 35$$

$$3x(2x + 5) - 7x(2x + 7)$$

$$(2x + 5)(3x - 7)$$

- \* Answer is sufficient for full marks (No  $\cancel{=}$  in question)
- \* Quadratic may be used to solve  $6x^2 + x - 35 = 0 \rightarrow x = -\frac{5}{2}, x = \frac{7}{3}$  and continues
- \* Accept also (with or without bracket) for full marks any of the following
  - $(2x + 5)$  and  $(3x - 7)$  [The word 'and' is written down]
  - $(2x + 5)$  or  $(3x - 7)$  [The word 'or' is written down]
  - $(2x + 5), (3x - 7)$  [A comma is used]

*Blunders (-3)*

- B1 Incorrect factors of  $6x^2$
- B2 Incorrect factors of  $-35$
- B3 Factors leading to an incorrect middle term
- B4 Substitution error in quadratic
- B5 Uses quadratic to get roots and stops

*Slips (-1)*

S1  $(2x + 5) + (3x - 7)$

S2  $(2x + 5) - (3x - 7)$

*Attempts (2 marks)*

- A1 Some correct factors
- A2 Identifies  $a, b$  or  $c$  for quadratic
- A3 Quadratic with some correct substitution
- A4 Any correct relevant step

*Worthless (0)*

- W1 Incorrect answer no work shown but note attempts
- W2  $(\quad)(\quad)$
- W3 Quadratic formula only
- W4 Work of no merit

**Part (c)**

**20 (5,5,5,5) marks**

**Att 2,2,2,2**

The new Lansdowne Road stadium has seating capacity for 200 journalists.

It was decided initially that this seating would be in  $x$  rows of equal value.

**(i)** Write, in terms of  $x$ , the number of seats per row required to accommodate the 200 journalists.

During the construction it was decided to have 3 fewer rows to accommodate the 200 journalists.

**(ii)** Write, in terms of  $x$ , the number of seats per row now required.

It was found that 15 extra seats per row were required compared to the initial plan.

**(iii)** ✍ Write an equation using the above information and solve for  $x$ .

**(c) (i)**

**5 marks**

**Att 2**

$$\frac{200}{x}$$

\* Answer is sufficient for full marks (No ✍ in question)

*Misreadings (-1)*

M1 Uses letter other than  $x$

*Blunders (-3)*

B1 Inversion

*Attempts (2 marks)*

A1 Effort at forming expression using 200 and  $x$

*Worthless (0)*

W1  $x$  only or 200 or similar

**(c) (ii)**

**5 marks**

**Att 2**

$$\frac{200}{x-3}$$

\* Answer is sufficient for full marks (No ✍ in question)

*Misreadings (-1)*

M1 Uses letter other than  $x$  if not penalised already

*Blunders (-3)*

B1 Inversion, but do not penalise if already blundered in (c) (i)

B2  $\frac{200}{x+3}$

B3  $\frac{200}{x} \pm 3$  (Linear in (c) (iii) and subject to further penalty there)

*Attempts (2 marks)*

A1 Forms an incorrect expression with at least two of the following  $x$ , 3, 200

(c) (iii)

10 (5,5) marks

Att 2,2

<b>Establish equation</b>	
$\frac{200}{x-3} - \frac{200}{x} = 15$	<b>2m</b>
$\frac{200x - 200(x-3)}{x(x-3)} = 15x(x-3)$	<b>2m</b>
$200x - 200x + 600 = 15x^2 - 45x$	<b>2m</b>
$600 = 15x^2 - 45x$	<b>5m</b>
$15x^2 - 45x - 600 = 0$	
$x^2 - 3x - 40 = 0$	
<b>Solve</b>	
$(x-8)(x+5) = 0$	<b>2m</b>
$\rightarrow 8 \text{ and } -5$	<b>4m</b>
Solution: $x = 8$	<b>5m</b>

\* Mark in two parts: 5 marks for **equation** and 5 marks for **solving**

\* Accept candidate's expressions from (c) (i) and (ii). Linear merits Att 2,2 at most

*Blunders (-3)*

- B1 Correct answer no work shown. ✍
- B2 Distribution error - apply each time but once if consistent
- B3 Transposition error - apply each time but once if consistent
- B4 Mathematical error in forming equation e.g. line 1
- B5 Incorrect factors
- B6 Correct factors and stops, will also incur S2
- B7 Error in quadratic formula
- B8 Each error in grouping terms or fails to group
- B9 Error in establishing equation e.g. line 1

*Slips (-1)*

- S1 Numerical errors to a maximum of 3
- S2 Stops at  $x = 8$ ,  $x = -5$  or concludes  $x = -5$

*Attempts (2,2 marks)*

- A1 Linear equation merits attempt marks at most
- A2 Trial and error merits attempt at most
- A3 Any correct relevant step

*Worthless (0)*

- W1 Incorrect answer no work shown
- W2 ( ) ( )
- W3 Substitution of any number other than 8 or -5

## QUESTION 5

<b>Part (a)</b>	<b>10 marks</b>	<b>Att 3</b>
<b>Part (b)</b>	<b>20 marks</b>	<b>Att 3,3</b>
<b>Part (c)</b>	<b>20 marks</b>	<b>Att 2,3,2</b>

**Part (a)** **10 marks** **Att 3**

✍ Given that  $f(x) = 3x - 4$  and that  $f(k) = 11$ , find the value of  $k$ .

**(a)** **10 marks** **Att 3**

$3k - 4 = 11$	<b>3m</b>
$3k = 11 + 4$ or 15	<b>4m</b>
$k = 15 \div 3$	<b>7m</b>
$k = 5$	<b>10m</b>

\* Ignore notation (e.g.  $x = 5$  or answer = 5 for full marks)

\*  $k = 5$  fully verified = 10 marks

*Blunders (-3)*

B1 Correct answer no work shown. ✍

B2 Transposition error

B3  $3k - 4 = 0$  and continues correctly

B4 Incorrect operation

*Slips (-1)*

S1 Numerical error to a maximum of 3

*Attempts (3 marks)*

A1 Fills in  $k$  and stops

A2 Attempt to divide by 3

A3 Tests values e.g.  $k = 11$  to get answer of 29

A4 Any relevant step

*Worthless (0)*

W1 Incorrect answer with no work shown

**Part (b)** **20 (10,10) marks** **Att 3,3**

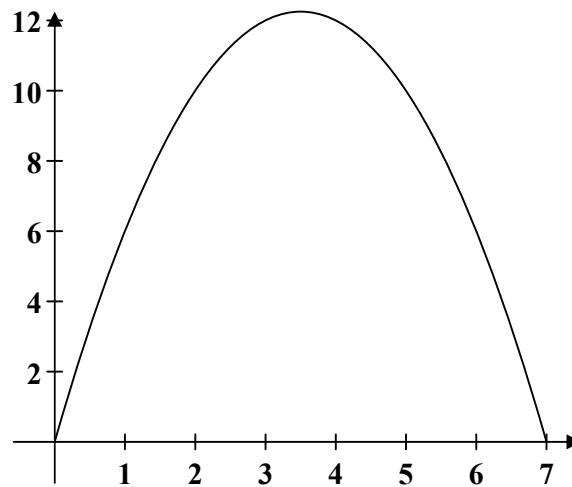
Let  $f$  be the function  $f: x \rightarrow 7x - x^2$ .

✍ Draw the graph of  $f$  for  $0 \leq x \leq 7$ ,  $x \in \mathbb{R}$ .

(b) Function  $f$

20 (10,10) marks

Att 3,3



$x$	0	1	2	3	4	5	6	7
$7x$	0	7	14	21	28	35	42	49
$-x^2$	0	-1	-4	-9	-16	-25	-36	-49

$x$	0	1	2	3	4	5	6	7
$f(x)$	0	6	10	12	12	10	6	0
$f(x)$	0	6	10	12	12	10	6	0

or

or

$f: x \rightarrow 7x - x^2.$
$f: x \rightarrow 7(0) - 0^2 = 0 - 0 = 0$
$f: x \rightarrow 7(1) - 1^2 = 7 - 1 = 6$
$f: x \rightarrow 7(2) - 2^2 = 14 - 4 = 10$
$f: x \rightarrow 7(3) - 3^2 = 21 - 9 = 12$
$f: x \rightarrow 7(4) - 4^2 = 28 - 16 = 12$
$f: x \rightarrow 7(5) - 5^2 = 35 - 25 = 10$
$f: x \rightarrow 7(6) - 6^2 = 42 - 36 = 6$
$f: x \rightarrow 7(7) - 7^2 = 49 - 49 = 0$
(0,0) (1,6) (2, 10) (3, 12) (4,12) (5, 10) (6, 6) (7,10)

- \* Table is worth 10 marks, graph is worth 10 marks
- \* Middle lines of table do not have to be shown
- \* Candidates may choose not to use a table
- \* Points might not be listed, mark on position on graph
- \* Graph constitutes work in this question ✍

*Blunders (-3)*

- B1 Error in calculating  $7x$ , once if consistent
- B2 Error in calculating  $-x^2$ , once if consistent, but note A1
- B3 Error in calculating last line of table, once if consistent
- B4 Each incorrect point without work
- B5 Point plotted incorrectly, once if consistent
- B6 Each missing point
- B7 Axes scaled incorrectly, once only
- B8 Reversed axes
- B9 No curve between (3,12) and (4,12) on graph
- B10 Points not joined, most probably incurs B9 also

*Slips (-1)*

- S1 Numerical error to a maximum of  $-3$

*Attempts (3,3 marks)*

- A1 Error leading to a linear graph
- A2 Some correct substitution
- A3 Draws axes, with some indication of scaling

**Part (c)**

**20 (5,10,5) marks**

**Att2,3,2**

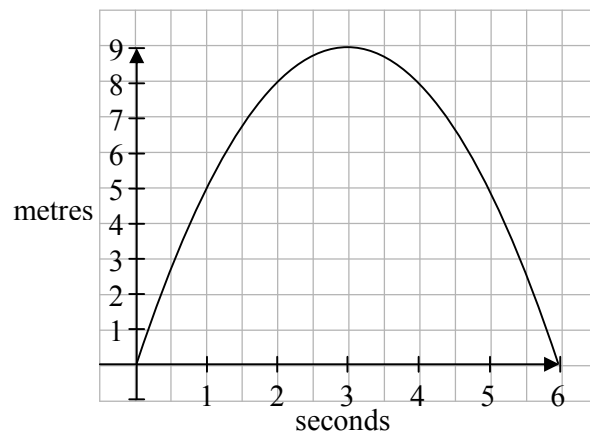
The formula for the height,  $y$  metres, of a golf ball above ground level  $x$  seconds after it is hit, is given by  $7x - x^2$ .

Use your graph from part (b):

- (i) ✍ to find the maximum height reached by the golf ball
- (ii) ✍ to estimate the number of seconds the golf ball was more than 2 metres above the ground.

The graph below represents the flight of another golf ball.

The flight of the golf ball is given by the formula  $ax - x^2, x \in \mathbb{R}$ .



- (iii) ✍ Find the value of  $a$ .

(c) (i)

5 marks

Att 2

Maximum height  $\rightarrow$  12.25 m

\* Accept answer consistent with candidate's graph, tolerance  $\pm \cdot 2$

*Blunders (-3)*

- B1 Correct answer no indication on graph. ✗
- B2 Maximum indicated on graph but no value given
- B3 Outside of tolerance
- B4 States  $x$  co-ordinate of maximum point
- B5 Fails to use graph

*Slips (-1)*

- S1 Accept maximum as point if  $y$  value is correct *i.e.* (3.5, 12.25)

*Attempts (2 marks)*

- A1 Reads maximum from table
- A2 Some relevant substitution in effort to find maximum
- A3 Uses graph of (c) (iii) to find maximum of 9
- A4  $x = 3.5$  indicated on graph

*Worthless (0)*

- W1 Incorrect answer no work, but note attempts

(c) (ii)

10 marks

Att 3

More than 2 metres above the ground  $\rightarrow 6.7 - 0.3 = 6.4$  secs

\* Accept values from candidate's graph with a tolerance of  $\pm \cdot 2$

*Blunders (-3)*

- B1 No subtraction
- B2 Value(s) not consistent with candidate's graph
- B3 No indication on graph
- B4 Indication on graph but no value given each time. B1 also applies
- B5 Outside of tolerance, each time
- B6  $\cdot 3 - 6.7 = -6.4$  or candidate's equivalent

*Slips (-1)*

- S1 Numerical error

*Attempts (3 marks)*

- A1 Correctly solves  $f(x) = 2$  by formula; graph not used
- A2  $f(2)$  found (answer = 10, or candidate's equivalent)
- A3 Uses graph of (c) (iii) to find answer ( $5.7 - \cdot 3 = 5.4$ )

*Worthless (0)*

- W1 Incorrect answer, no work shown

(c) (i)

5 marks

Att 2

Fills in any of the following points (1,5) (2,8) (3,9) (4, 8) (5, 5) (6,0)  
or any other correct points to solve equation  $ax - x^2 = y$

**I**

*e.g.* (1, 5)

$$a(1) - (1)^2 = 5$$

$$a - 1 = 5$$

$$a = 5 + 1$$

Value of  $a = 6$

**II**

$$ax - x^2 = y$$

$$x(a - x) = y$$

Fill in *e.g.* (1, 5)

$$1(a - 1) = 5$$

$$a - 1 = 5$$

$$a = 5 + 1$$

Value of  $a = 6$

*Blunders (-3)*

- B1 Correct answer no work shown. ✍
- B2 Co-ordinates reversed when substituting
- B3 Incorrect squaring
- B4 Transposition error
- B5 Substitutes for a instead of x
- B6 Fails to finish
- B7 Incorrect factors

*Slips (-1)*

- S1 Numerical error to a maximum of -3

*Attempts (2 marks)*

- A1 Some relevant substitution
- A2  $ax - x^2 = f(x)$  or  $ax - x^2 = y$
- A3 Writes down any point on the curve
- A4 Attempt to factorise

*Worthless (0)*

- W1 Incorrect answer no work shown
- W2 No work of merit



## QUESTION 6

<b>Part (a)</b>	<b>10 marks</b>	<b>Att 3</b>
<b>Part (b)</b>	<b>20 marks</b>	<b>Att 3,2,2</b>
<b>Part (c)</b>	<b>20 marks</b>	<b>Att 3,2,2</b>

**Part (a)** **10 marks** **Att 3**

✍ When  $a = \frac{1}{4}$ , find the value of  $\frac{a+5}{3} - \frac{a+4}{2}$ .

**(a)** **10 marks** **Att 3**

**I**

$$\frac{a+5}{3} - \frac{a+4}{2}$$

$$\frac{\frac{1}{4}+5}{3} - \frac{\frac{1}{4}+4}{2}$$

$$\frac{5\frac{1}{4}}{3} - \frac{4\frac{1}{4}}{2}$$

$$1\frac{3}{4} - 2\frac{1}{8}$$

$$= \frac{-3}{8}$$

**II**

$$\frac{a+5}{3} - \frac{a+4}{2}$$

$$\frac{2(a+5) - 3(a+4)}{6}$$

$$\frac{2a+10-3a-12}{6}$$

$$\frac{-a-2}{6}$$

$$a = \frac{1}{4}$$

$$\frac{-\frac{1}{4}-2}{6}$$

$$\frac{-2\frac{1}{4}}{6}$$

$$= -\frac{3}{8}$$

\* Accept answer in decimal format (-.375) or equivalent fraction

*Blunders (-3)*

- B1 Correct answer no work shown. ✍
- B2 Incorrect denominator
- B3 Mishandles denominator
- B4 Mishandles numerator
- B5 Mathematical error
- B6 Distribution error, once if consistent
- B7 Fails to combine like terms (if it affects final answer)
- B8 Combines unlike terms
- B9 Incomplete step (e.g.  $-2\frac{1}{4}/6$  or similar)

*Slips (-1)*

- S1 Numerical errors to a maximum of  $-3$

*Attempts (3 marks)*

- A1 Some correct substitution
- A2 No denominator used
- A3 Any correct relevant step

*Worthless (0)*

- W1 Incorrect answer no work shown
- W2 No work of merit

Part (b)

20 (10,5,5) marks

Att 3,2,2

(i) ✍ Express in its simplest form:

$$\frac{4}{x-1} - \frac{5}{x+2}$$

(ii) ✍ Hence, or otherwise, solve the equation:

$$\frac{4}{x-1} - \frac{5}{x+2} = \frac{3}{2}$$

giving your answers correct to one decimal place.

(b)(i)

10 marks

Att 3

$$\frac{4(x+2) - 5(x-1)}{(x-1)(x+2)}$$

$$\frac{4x+8-5x+5}{(x-1)(x+2)}$$

$$\frac{-x+13}{(x-1)(x+2)}$$

\* Accept common denominator as  $(x-1)(x+2)$ . Penalise incorrect multiplication in (b) (ii)

*Blunders (-3)*

- B1 Correct answer no work shown. ✍
- B2 Incorrect denominator
- B3 Mishandles denominator
- B4 Mishandles numerator
- B5 Mathematical error
- B6 Distribution error, once if consistent
- B7 Fails to combine like terms
- B8 Combines unlike terms
- B9 Reads as  $\frac{4}{x-1} + \frac{5}{x+2}$ . Continue to apply slips and blunders

*Slips (-1)*

- S1 Numerical errors to a maximum of -3

*Attempts (3 marks)*

- A1 Identifies common denominator and stops
- A2 No denominator used
- A3 Oversimplification
- A4 Any relevant step

*Worthless (0)*

- W1 Incorrect answer no work shown

- W2 Adds or subtracts numerators and denominators e.g.  $\frac{9}{2x+1}$  or  $\frac{1}{1}$  or  $-\frac{1}{2x+1}$  etc

(b)(ii)

10 (5,5) marks

Att 2,2

$$\frac{-x+13}{(x-1)(x+2)} = \frac{3}{2}$$

$$2(-x+13) = 3(x-1)(x+2)$$

$$-2x+26 = (3x-3)(x+2)$$

$$-2x+26 = 3x^2+3x-6$$

$$3x^2+5x-32=0$$

Equation 5m

$$\frac{-5 \pm \sqrt{25-4(3)(-32)}}{2(3)}$$

$$\frac{-5 \pm \sqrt{25+384}}{6}$$

$$\frac{-5 \pm \sqrt{409}}{6}$$

$$\frac{-5 \pm 20.22374842}{6}$$

$$\frac{-25.22374842}{6} \quad \text{and} \quad \frac{15.22374842}{6}$$

$$x = -4.2$$

$$\text{and } x = 2.5$$

Solve 5m

\* Mark in two parts: 5 marks for **equation** and 5 marks for **solving**

\* Accept candidate's expressions from (b) (i). Linear merits Att 2,2 at most

*Blunders (-3)*

B1 Correct answer no work shown.  $\neq$

B2 Distribution error - apply each time but once if consistent

B3 Transposition error - apply each time but once if consistent

B4 Mathematical error in forming equation

B5 Incorrect denominator

B6 Mishandles denominator

B7 Mishandles numerator

B8 Fails to combine like terms

B9 Combines unlike terms

B10 Error in quadratic formula

B11 Error in application of quadratic formula

B12 Finds only one solution

*Slips (-1)*

S1 Numerical errors to a maximum of -3

S2 Fails to round or rounds incorrectly

*Attempts (2,2 marks)*

A1 Linear equation merits attempt marks at most

A2 Quadratic formula with some correct substitution

A3 Trial and error of correct solution(s) merits attempt at most

A4 Any relevant step

*Worthless (0)*

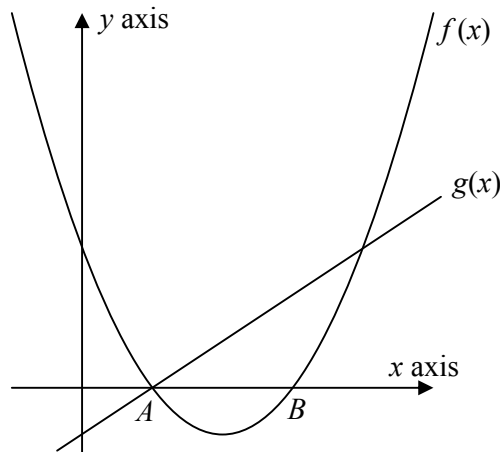
W1 Incorrect answer no work shown

W2 ( ) ( )

W3 Substitution of any number other than 2.5 and -4.2 or equivalent

W4 No work of merit

The diagram below shows part of the graphs of the functions  
 $f(x) = x^2 - 4x + 3$  and  $g(x) = x + k$ .



The graph of  $f(x)$  cuts the  $x$  axis at  $A$  and  $B$ .  
 The graphs of  $f(x)$  and  $g(x)$  intersect at  $A$ .

- (i) ✍ Find the coordinates of  $A$  and the coordinates of  $B$ .
- (ii) ✍ Find the value of  $k$ .
- (iii) ✍ Verify that  $f(x)$  and  $g(x)$  intersect also at the point  $(4, 3)$ .

(c) (i)

10 marks

Att3

Solve $x^2 - 4x + 3 = 0$	<b>3m</b>
$(x - 1)(x - 3) = 0$	<b>4m</b>
$x = 1, x = 3$	<b>7m</b>
$(1, 0)$ and $(3, 0)$	<b>9m</b>
→ $A(1, 0)$ $B(3, 0)$	<b>10m</b>

\* If trial and error is used, must be fully verified for 10 marks

*Blunders (-3)*

- B1 Correct answer no work shown. ✍
- B2 Incorrect factors of  $x^2$
- B3 Incorrect factors of  $+3$
- B4 Factors leading to an incorrect middle term
- B5 Fails to find roots
- B6 Fails to list coordinates with  $y = 0$  included
- B7 Uses quadratic and stops at roots
- B8  $(0,1)$  and  $(0,3)$  Reversed co-ordinates.

*Slips (-1)*

- S1 Fails to specify **A** or **B** or incorrectly names **A** and **B**, apply once.
- S2 After solving  $x = 1, x = 3$  only states one point *i.e.*  $(1,0)$  or  $(3,0)$ . May also incur S1.

*Attempts (3 marks)*

- A1 Some correct factors
- A2 Identifies  $a$ ,  $b$  or  $c$  for quadratic
- A3 Quadratic with some correct substitution
- A4 Finds where graph cuts  $y$  axis (0,3)
- A5  $f(x) = 0$  or  $g(x) = 0$  or  $(x, 0)$
- A6 Substitution of 0,1 or 3
- A7 Any correct relevant step
- A8 Uses graph to read answer

*Worthless (0)*

- W1 Incorrect answer no work shown

**(c) (ii)**

**5 marks**

**Att 2**

$g(1) = 1 + k = 0$	<b>2m</b>
$\rightarrow k = -1$	<b>5m</b>

\* Accept (4,3) or candidate's A co-ordinate from (c) (i)

*Blunders (-3)*

- B1 Correct answer no work shown. ✍
- B2 Fails to let  $g(x) = 0$
- B3 Fails to let  $x = 1$  (or candidate's equivalent value)
- B4 Transposition error

*Attempts (2 marks)*

- A1 Substitutes  $x = 1$  (or candidate's equivalent) and stops
- A2  $g(x) = 0$
- A3 Any relevant step

*Worthless (0)*

- W1 Incorrect answer no work shown

(c) (iii)

5 marks

Att 2

Solve	<b>I</b> $x^2 - 4x + 3 = x - 1$ $x^2 - 4x + 3 - x + 1 = 0$ $x^2 - 5x + 4 = 0$ $(x - 4)(x - 1) = 0$ $x = 1$ and $x = 4$	<b>2m</b>
	$x^2 - 4x + 3 = y$ or $x - 1 = y$ $(4)^2 - 4(4) + 3 = y$ $4 - 1 = y$ $16 - 16 + 3 = 3 = y$ $3 = y$ → point (4, 3)	<b>5m</b>
	<b>II</b> Substitute $x = 4$ into $f(x) = x^2 - 4x + 3$ and $g(x) = x - 1$	
	$f(x) = x^2 - 4x + 3$ $f(x) = (4)^2 - 4(4) + 3$ $f(x) = 16 - 16 + 3$ $f(x) = 3$ (4,3)	<b>2m</b>
	$g(x) = x - 1$ $g(x) = 4 - 1$ $g(x) = 3$ (4,3)	<b>4m</b>
	(4,3) on both lines → point of intersection	<b>5m</b>

\* Accept  $g(x) = x + k$ , based on candidate's  $k$  value from (c) (ii)

*Blunders (-3)*

- B1 Fails to equate  $f(x)$  and  $g(x)$  in method **I**
- B2 Incorrect squaring
- B3 Transposition error
- B4 Does not substitute into second function
- B5 Fills in  $x = 1$
- B6 Fails to finish

*Slips (-1)*

- S1 Does not conclude in method **II**
- S2 Numerical errors to a maximum of 3

*Attempts (2 marks)*

- A1 Some relevant substitution
- A2 Linear equation attempt at most in Method I

*Worthless (0)*

- W1 Incorrect answer no work shown
- W2  $x - 1 = 0$
- W3  $x^2 - 4x + 3 = 0$
- W4 Work of no merit

## **BONUS MARKS FOR ANSWERING THROUGH IRISH**

Bonus marks are applied separately to each paper as follows:

If the mark achieved is 225 or less, the bonus is 5% of the mark obtained, rounded *down*.  
**(e.g. 198 marks  $\times$  5% = 9.9  $\Rightarrow$  bonus = 9 marks.)**

If the mark awarded is above 225, the following table applies:

Bunmharc (Marks obtained)	Marc Bónais (Bonus Mark)	Bunmharc (Marks obtained)	Marc Bónais (Bonus Mark)
226	11	261 – 266	5
227 – 233	10	267 – 273	4
234 – 240	9	274 – 280	3
241 – 246	8	281 – 286	2
247 – 253	7	287 – 293	1
254 – 260	6	294 – 300	0





**Coimisiún na Scrúduithe Stáit**  
*State Examinations Commission*

# **JUNIOR CERTIFICATE EXAMINATION**

**2011**

**MARKING SCHEME**

**MATHEMATICS  
HIGHER LEVEL  
PAPER 2**

**MARKING SCHEME**  
**JUNIOR CERTIFICATE EXAMINATION 2011**  
**MATHEMATICS -HIGHER LEVEL - PAPER 2**

**GENERAL GUIDELINES FOR EXAMINERS**

1. Penalties of three types are applied to candidates' work as follows:
  - Blunders - mathematical errors/omissions (-3)
  - Slips- numerical errors (-1)
  - Misreadings (provided task is not oversimplified) (-1).

Frequently occurring errors to which these penalties must be applied are listed in the scheme. They are labelled: B1, B2, B3,..., S1, S2,..., M1, M2,...etc. These lists are not exhaustive.

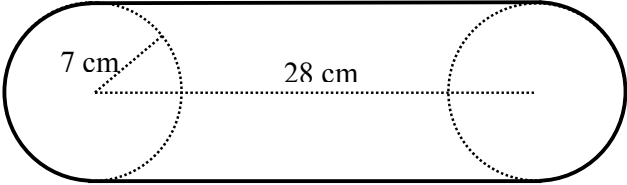
2. When awarding attempt marks, e.g. Att(3), note that
  - any *correct, relevant* step in a part of a question merits at least the attempt mark for that part
  - if deductions result in a mark which is lower than the attempt mark, then the attempt mark must be awarded
  - a mark between zero and the attempt mark is never awarded.
3. Worthless work is awarded zero marks. Some examples of such work are listed in the scheme and they are labelled as W1, W2,...etc.
4. The phrase "hit or miss" means that partial marks are not awarded – the candidate receives all of the relevant marks or none.
5. The phrase "and stops" means that no more work is shown by the candidate.
6. Special notes relating to the marking of a particular part of a question are indicated by an asterisk. These notes immediately follow the box containing the relevant solution.
7. The sample solutions for each question are not intended to be exhaustive lists – there may be other correct solutions.
8. Unless otherwise indicated in the scheme, accept the best of two or more attempts – even when attempts have been cancelled.
9. The *same* error in the *same* section of a question is penalised *once* only.
10. Particular cases, verifications and answers derived from diagrams (unless requested) qualify for attempt marks at most.
11. A serious blunder, omission or misreading results in the attempt mark at most.
12. Do not penalise the use of a comma for a decimal point, e.g. €5.50 may be written as €5,50.

## QUESTION 1

<b>Part (a)</b>	<b>10 marks</b>	<b>Att 3</b>
<b>Part (b)</b>	20 (10,5,5)marks	Att (3,2,2)
<b>Part (c)</b>	20 (5,5,10) marks	Att (2,2,3)

**Part (a)** **10 marks** **Att 3**

The diagram shows two pulley wheels of equal size, connected by a drive belt. The radius of each wheel is 7 cm and the distance between the centres is 28 cm.



Calculate the length of the belt.  
Give your answer correct to the nearest whole number.

**(a)** **10 marks** **Att 3**

Semicircular lengths	=	$2\pi r$	=	$14\pi$	Step 1
Straight lengths	=	$2(28)$	or	56	Step 2
Total length	=	$14\pi + 56$			
	=	99.98			
	=	100 cm			Step 3

### *Blunders (-3)*

- B1 Correct answer without work shown ()
- B2 Incorrect relevant formula
- B3 Incorrect substitution into correct formula
- B4 Incorrect  $r$
- B5 Failure to add
- B6 Value of  $\pi$  which affects the accuracy of the answer

### *Slips (-1)*

- S1 Arithmetic slips to a maximum of (-3)
- S2 Answer not rounded or incorrectly rounded

### *Attempts (3 marks)*

- A1 Correct perimeter formula -  $2\pi r + 2l$
- A2 Correct formula with some correct substitution
- A3 Any relevant use of 28

### *Worthless (0)*

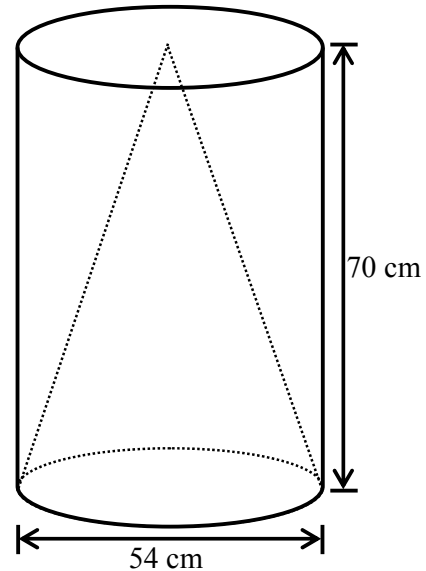
- W1 Area of rectangle and/or disc

**Part (b)****20 (10,5,5) marks****Att (3,2,2)**

The diagram shows a solid cylinder of diameter 54 cm and of height 70 cm.

A cone, of the same diameter and height as the cylinder, is cut from inside the cylinder.

- (i) ✍ Calculate the volume of the cylinder.  
Give your answer in terms of  $\pi$ .
- (ii) ✍ Calculate the volume of the cone.  
Give your answer in terms of  $\pi$ .
- (iii) ✍ What fraction of the cylinder remains after the cone is removed?

**(b) (i)****10 marks****Att 3**

Volume of cylinder	=	$\pi r^2 h$
	=	$\pi(27)^2(70)$
	=	$51030\pi \text{ cm}^3$

*Blunders (-3)*

- B1 Correct answer without work shown (✍)
- B2 Incorrect relevant formula
- B3 Incorrect substitution into correct formula
- B4 Incorrect  $r$
- B5 Incorrect  $h$
- B6 Incorrect squaring

*Slips (-1)*

- S1 Arithmetic slips to a maximum of (-3)
- S2 Answer not in terms of  $\pi$

*Attempts (3 marks)*

- A1  $r = 27$
- A2 Indication that radius length is half diameter length
- A3 Correct formula with some correct substitution

*Worthless (0)*

- W1 Surface area formula for cylinder

**(b) (ii)**

**5 marks**

**Att 2**

$$\begin{aligned}\text{Volume of cone} &= \frac{1}{3}\pi r^2 h \\ &= \frac{1}{3}\pi(27)^2(70) \\ &= 17010\pi \text{ cm}^3\end{aligned}$$

**or**

$$\begin{aligned}\text{Volume of cone} &= \frac{1}{3}(51030\pi) \\ &= 17010\pi \text{ cm}^3\end{aligned}$$

\* Accept candidate's answer from (b) (i)

*Blunders (-3)*

- B1 Correct answer without work shown ( $\neq$ )
- B2 Incorrect relevant formula
- B3 Incorrect substitution into correct formula
- B4 Incorrect  $r$
- B5 Incorrect  $h$
- B6 Incorrect squaring

*Slips (-1)*

- S1 Arithmetic slips to a maximum of (-3)
- S2 Answer not in terms of  $\pi$

*Attempts (2 marks)*

- A1  $r = 27$
- A2 Indication that radius length is half diameter length
- A3 Indication that volume of the cone is  $\frac{1}{3}$  (volume of the cylinder)
- A4 Correct formula with some correct substitution

*Worthless (0)*

- W1 Surface area formula for cone

**(b) (iii)**

**5 marks**

**Att 2**

$$\begin{aligned}\text{Remainder} &= 51030\pi - 17010\pi \\ &= 34020\pi \\ \text{Fraction} &= \frac{34020\pi}{51030\pi} \\ &= \frac{34020}{51030} \quad \text{or} \quad \frac{2}{3}\end{aligned}$$

**or**

$$1 - \frac{1}{3} = \frac{2}{3}$$

\* Accept candidate's answer from (b) (i) and (ii)

*Blunders (-3)*

B1 Correct answer without work shown (~~✗~~)

B2  $\frac{\text{Volume of cone}}{\text{Volume of cylinder}}$

*Slips (-1)*

S1 Arithmetic slips to a maximum of (-3)

S2  $\pi$  not cancelled

S3 Decimal answer

*Attempts (2 marks)*

A1 Effort at Remainder

**Part (c)****20 (5,5,10) marks****Att (2,2,3)**

The diagram, not to scale, represents a shot-put zone in an athletics stadium.  
The area of  $CDE$  is a quarter of the area of a disc of centre  $C$  and of radius 100 m.

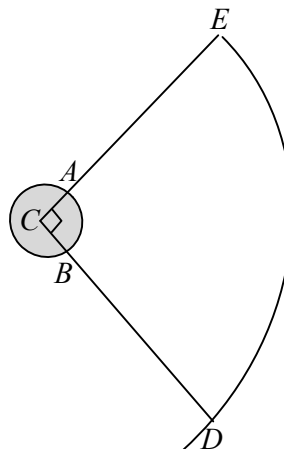
- (i) ✍ Calculate the area of  $CDE$ ,  
correct to two decimal places.

The shot-put zone consists of a throwing zone  
and a landing zone.  
The throwing zone (shaded) is a disc of centre  $C$   
and of radius 1 m.

- (ii) ✍ Calculate the area of the throwing zone,  
correct to two decimal places.

The landing zone is the unshaded area  $ABDE$ ,  
which is part of  $CDE$ .

- (iii) ✍ Calculate the total area of the shot-put zone,  
correct to two decimal places.

**(c) (i)****5 marks****Att 2**

$$\begin{aligned}
 \text{Area of } CDE &= \frac{1}{4}\pi r^2 &= \frac{1}{4}\pi(100)^2 \\
 & &= 2500\pi \\
 & &= 7853.9816 \\
 & &= 7853.98 \text{ m}^2
 \end{aligned}$$

\* Value of  $\pi$  used, other than value of  $\pi$  from calculator, giving an answer in the range 7850 - 7857.14 incurs -1

*Blunders (-3)*

- B1 Correct answer without work shown (✍)
- B2 Incorrect relevant formula
- B3 Incorrect substitution into correct formula
- B4 Value of  $\pi$  which affects the accuracy of the answer
- B5 Answer in terms of  $\pi$
- B6 Incorrect  $r$
- B7 Incorrect squaring

*Slips (-1)*

- S1 Arithmetic slips to a maximum of (-3)
- S2 Answer not rounded or incorrectly rounded

*Attempts (2 marks)*

- A1 Correct formula with some correct substitution

*Worthless (0)*

- W1 Length formula

(c) (ii)

5 marks

Att 2

Area of throwing zone	=	$\pi r^2$	=	$\pi(1)^2$
			=	$1\pi$
			=	$3\cdot 1416$
			=	$3\cdot 14 \text{ m}^2$

*Blunders (-3)*

- B1 Correct answer without work shown (✍)
- B2 Incorrect relevant formula
- B3 Incorrect substitution into correct formula
- B4 Value of  $\pi$  which affects the accuracy of the answer
- B5 Answer in terms of  $\pi$
- B6 Incorrect  $r$
- B7 Incorrect squaring

*Slips (-1)*

- S1 Arithmetic slips to a maximum of (-3)
- S2 Answer not rounded or incorrectly rounded

*Attempts (2 marks)*

- A1 Correct formula with some correct substitution

*Worthless (0)*

- W1 Length formula

(c) (iii)

10 marks

Att 3

Area of the shot-put zone	=	$\frac{3}{4}$ ( Area of throwing zone) + Area <i>CDE</i>
$\frac{3}{4}$ ( Area of throwing zone)	=	$\frac{3}{4}$ (3·14) = 2·355
Area of shot-put zone	=	2·355 + 7853·98
	=	7856·335
	=	7856·34
	<b>or</b>	
$\frac{3}{4}$ ( Area of throwing zone)	=	$0\cdot 75\pi$
Area of shot put zone	=	$0\cdot 75\pi + 2500\pi = 2500\cdot 75\pi$
	=	7856·337828
	=	7856·34 m <sup>2</sup>



**or**

$$\begin{aligned}\frac{1}{4}(\text{Area of throwing zone}) &= \frac{1}{4}(3 \cdot 14) = 0.785 \\ \text{Area of shot put zone} &= 7853.98 + 3 \cdot 14 - 0.785 \\ &= 7856.335 \\ &= 7856.34\end{aligned}$$

**or**

$$\begin{aligned}\frac{1}{4}(\text{Area of throwing zone}) &= 0.25\pi \\ \text{Area of shot put zone} &= 2500\pi + 1\pi - 0.25\pi = 2500.75\pi \\ &= 7856.337828 \\ &= 7856.34 \text{ m}^2\end{aligned}$$

\* Accept candidate's answers from (c) (i) and (ii)

*Blunders (-3)*

- B1 Correct answer without work shown (✍)
- B2 Area  $CDE - \frac{1}{4}$  (Area of throwing zone)
- B3 Area  $CDE +$  Area of throwing zone
- B4 Value of  $\pi$  which affects the accuracy of the answer
- B5 Answer in terms of  $\pi$

*Slips (-1)*

- S1 Arithmetic slips to a maximum of (-3)
- S2 Answer not rounded or incorrectly rounded

*Attempts (3 marks)*

- A1 Indication of  $\frac{3}{4}$  or  $\frac{1}{4}$  of area of throwing zone
- A2 Correct formula with some correct substitution

## QUESTION 2

<b>Part (a)</b>	<b>10 marks</b>	<b>Att 3</b>
<b>Part (b)</b>	<b>20 (5,10,5) marks</b>	<b>Att (2,3,2)</b>
<b>Part (c)</b>	<b>20 (10,10) marks</b>	<b>Att (3,3)</b>

**Part (a)** **10 marks** **Att 3**

$X(-3, 1)$  and  $Y(4, -2)$  are two points.

- $\not\approx$  Find the length of the line segment  $[XY]$ .  
Give your answer in surd form.

**(a)** **10 marks** **Att 3**

$$\begin{aligned} |XY| &= \sqrt{(x_2 - x_1)^2 + (y_2 - y_1)^2} \\ &= \sqrt{(4 - (-3))^2 + (-2 - 1)^2} && \text{Step 1} \\ &= \sqrt{(7)^2 + (-3)^2} && \text{Step 2} \\ &= \sqrt{49 + 9} \\ &= \sqrt{58} && \text{Step 3} \end{aligned}$$

### *Blunders (-3)*

- B1 Correct answer without work shown ( $\not\approx$ )
- B2 Incorrect relevant formula
- B3 Both  $x$  and  $y$  switched in substitution
- B4 Incorrect squaring
- B5 Error in signs
- B6 Answer not in surd form

### *Slips (-1)*

- S1 Arithmetic slips to a maximum of (-3)
- S2 One incorrect substitution for  $x$  or  $y$

### *Attempts (3 marks)*

- A1 Correct formula with some correct substitution
- A2 Attempt at difference of  $x$  values and/or difference of  $y$  values

### *Worthless (0)*

- W1 Incorrect formula with or without substitution

**Part (b)**

**20 (5,10,5) marks**

**Att (2,3,2)**

The diagram shows the gable end of a house.  
The total height is 7 m.  
The height to roof level is 4 m, i.e.  $|AE| = 4$  m.  
 $A$  is the point  $(1, 0)$ .  
 $B$  is the point  $(9, 0)$ .

(i) Write down the coordinates of the points  $C$ ,  $D$  and  $E$ .

(ii) ✎ Find the slope of the rafter  $[ED]$ .

(iii) ✎ Find the area of the gable.

**(b) (i)**

**5 marks**

**Att 2**

$C$ is the point $(9, 4)$	$D$ is the point $(5, 7)$	$E$ is the point $(1, 4)$ .
---------------------------	---------------------------	-----------------------------

*Blunders (-3)*

B1 Each incorrect point

B2 Both  $x$  and  $y$  switched

*Attempts (2 marks)*

A1 One correct  $x$  or  $y$  value

*Worthless (0)*

W1 No correct  $x$  or  $y$  value

**(b) (ii)**

**10 marks**

**Att 3**

Slope [ED]	=	$\frac{y_2 - y_1}{x_2 - x_1}$	<b>or</b>	Slope	=	$\tan \angle DEC$
	=	$\frac{7 - 4}{5 - 1}$			=	$\frac{\text{opposite}}{\text{adjacent}}$
	=	$\frac{3}{4}$			=	$\frac{3}{4}$

\* Accept candidate's answers from (b) (i)

*Blunders (-3)*

- B1 Correct answer without work shown ( $\not\approx$ )
- B2 Incorrect relevant formula
- B3 Both  $x$  and  $y$  switched in substitution
- B4 Correct substitution but answer not simplified
- B5 Incorrect tan ratio

*Slips (-1)*

- S1 Arithmetic slips to a maximum of (-3)
- S2 One incorrect substitution for  $x$  or  $y$

*Attempts (3 marks)*

- A1 Correct formula with some correct substitution
- A2 Attempt at difference of  $x$  values and/or difference of  $y$  values

*Worthless (0)*

- W1 Incorrect formula with or without substitution

**(b) (iii)**

**5 marks**

**Att 2**

$$\text{Area } ABCE = 4 \times 8 = 32$$

$$\text{Area } CDE = \frac{1}{2}(8 \times 3) = 12$$

$$\begin{aligned} \text{Area of gable} &= 32 + 12 \\ &= 44 \text{ m}^2 \end{aligned}$$

**or**

$$\text{Area of large rectangle} = 8 \times 7 = 56$$

$$\text{Area of two missing triangles} = 2 \left( \frac{1}{2} \right) (4 \times 3) = 12$$

$$\begin{aligned} \text{Area of gable} &= 56 - 12 \\ &= 44 \text{ m}^2 \end{aligned}$$

\* Accept candidate's answers from (b) (i)

\* Accept area of triangle for full marks

*Blunders (-3)*

B1 Correct answer without work shown (✍)

B2 Incorrect relevant formula

B3 Incorrect substitution into correct formula

B4 Incorrect perpendicular height

B5 Incorrect base

B6 Incorrect length

B7 Incorrect width

B8 Area of rectangle only

*Slips (-1)*

S1 Arithmetic slips to a maximum of (-3)

*Attempts (2 marks)*

A1 Correct triangle area formula with some correct substitution

A2 Correct rectangle area formula with or without substitution

*Worthless (0)*

W1 Perimeter formula

**Part (c)****20 (10,10) marks****Att (3,3)**

The line  $k$  passes through the point  $P(3, 2)$ .  
 $k$  is perpendicular to the line  $l: 2x + 3y = -1$ .

- (i) ✍ Find the equation of  $k$ .  
 (ii) ✍ Find the coordinates of the image of  $P$  by an axial symmetry in  $l$ .

**(c) (i)****10 marks****Att 3**

$$\text{Slope of } l = -\frac{2}{3} \quad \text{Step 1}$$

$$\therefore \text{Slope of } k = \frac{3}{2} \quad \text{Step 2}$$

$$\text{Equation of } k: y - y_1 = m(x - x_1)$$

$$y - 2 = \frac{3}{2}(x - 3)$$

$$2(y - 2) = 3(x - 3)$$

$$3x - 2y - 5 = 0 \quad \text{Step 3}$$

*Blunders (-3)*

- B1 Correct answer without work shown (✍)  
 B2 Incorrect relevant formula  
 B3 Incorrect slope  
 B4 Both  $x$  and  $y$  switched in substitution

*Slips (-1)*

- S1 Arithmetic slips to a maximum of (-3)  
 S2 One incorrect substitution for  $x$  or  $y$

*Attempts (3 marks)*

- A1 Correct formula with some correct substitution  
 A2 Indication that the product of the slopes of perpendicular lines is  $-1$

*Worthless (0)*

- W1 Incorrect formula with or without substitution

(c) (ii)

10 marks

Att 3

$$\begin{aligned}2l: & 4x + 6y = -2 \\3k: & 9x - 6y = 15 \\2l + 3k: & 13x = 13 \\& \Rightarrow x = 1\end{aligned}$$

$$\begin{aligned}\text{Substitution for } x \text{ into } l: & 2(1) + 3y = -1 \\& \Rightarrow 3y = -3 \\& \Rightarrow y = -1\end{aligned}$$

The point of intersection of  $l$  and  $k$ :  $(1, -1)$

$P(3, 2) \rightarrow (1, -1)$   $x: -2, y: -3$   
The image of  $P$  by axial symmetry in  $l$  is  $(-1, -4)$

- \* Accept candidate's answer from (c) (i)
- \* Accept  $(1, -1) \in l$  and  $(1, -1) \in k$  verified in each case
- \* Blunders in simplifying  $k$  to a maximum of (-3)

*Blunders (-3)*

- B1 Correct answer without work shown (✍)
- B2 Error in transposition
- B3 Wrong translation
- B4 One co-ordinate of image only

*Slips (-1)*

- S1 Arithmetic slips to a maximum of (-3)

*Misreadings (-1)*

- M1 One value found for point of intersection and incorrectly substituted

*Attempts (3 marks)*

- A1 Correct graphical solution
- A2 Effort at translation using a point on one of the lines and  $(3, 2)$
- A3 Effort at finding the point of intersection of  $l$  and  $k$

### QUESTION 3

<b>Part (a)</b>	<b>10 marks</b>	<b>Att 3</b>
<b>Part (b)</b>	<b>20 (10,10)marks</b>	<b>Att (3,3)</b>
<b>Part (c)</b>	<b>20 (10,10)marks</b>	<b>Att (3,3)</b>

**Part (a)** **10 marks** **Att 3**

In the diagram,  $|\angle DBC| = 50^\circ$ .

Find the value of  $x$ .

**(a)** **10 marks** **Att 3**

$$\begin{aligned}
 2x + 3x + 50^\circ &= 180^\circ \\
 5x &= 130^\circ \\
 x &= 26^\circ
 \end{aligned}$$

\* Accept work on diagram

*Blunders (-3)*

- B1 Correct answer without work shown ()
- B2 Sum of angles  $\neq 180^\circ$  stated
- B3 Error in transposition

*Slips (-1)*

- S1 Arithmetic slips to a maximum of (-3)

*Attempts (3 marks)*

- A1 Indication that a straight angle =  $180^\circ$
- A2 Mention of  $5x$  or  $130^\circ$

*Worthless (0)*


- W1 Diagram from examination either partially or fully drawn
- W2  $2x = 50^\circ$
- W3  $3x = 90^\circ$



**Part (b)**

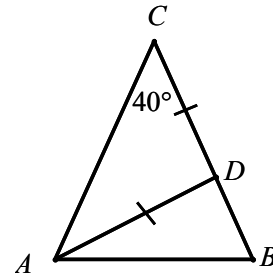
**20 (10,10) marks**

**Att (3,3)**

(i)  Prove that if two sides of a triangle are equal in measure, then the angles opposite these sides are equal in measure.

(ii) The triangle  $ABC$  is isosceles with  $|AC| = |BC|$ .  
The triangle  $ADC$  is also isosceles with  $|AD| = |CD|$ .  
 $|\angle ACB| = 40^\circ$ .

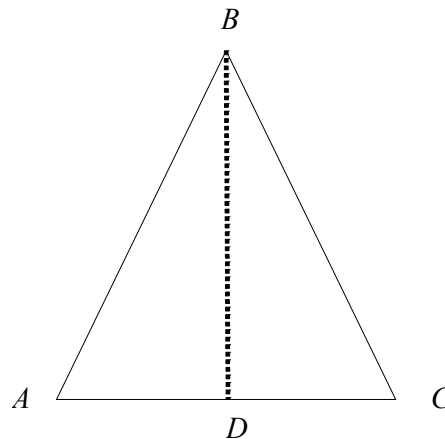
 Find  $|\angle DAB|$  and  $|\angle ADB|$ .



**(b) (i)**

**10 marks**

**Att 3**



**Given:** A triangle  $ABC$ , with  $|AB|=|BC|$

**To Prove:**  $|\angle BAC| = |\angle BCA|$

**Construction:** Draw the line segment  $[BD]$  which bisects the angle at  $B$ . Step 1

**Proof:** Consider  $\triangle BAD$  and  $\triangle BCD$ .

$|AB| = |BC|$  given

$|\angle ABD| = |\angle CBD|$  construction

$|BD| = |BD|$  common side Step 2

$\therefore \triangle BAD \equiv \triangle BCD$  S.A.S.

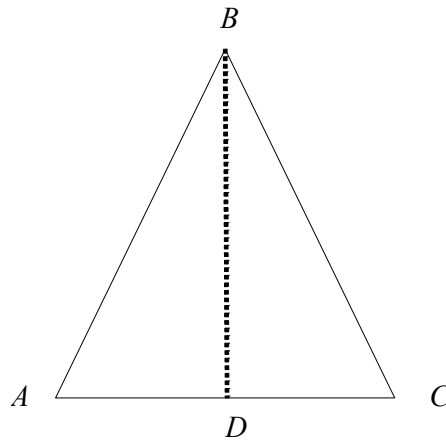
$\Rightarrow |\angle BAC| = |\angle BCA|$  (corresponding angles) Step 3

or

(b) (i)

10 marks

Att 3



**Given:** A triangle  $ABC$ , with  $|AB|=|BC|$

**To Prove:**  $|\angle BAC| = |\angle BCA|$

**Construction:** Draw the line segment  $[BD]$ , where  $D$  is the midpoint of  $[AC]$  Step 1

**Proof:** Consider  $\triangle BAD$  and  $\triangle BCD$ .

$|AB| = |BC|$  given

$|AD| = |CD|$  construction

$|BD| = |BD|$  common side Step 2

$\therefore \triangle BAD \cong \triangle BCD$  S.S.S.

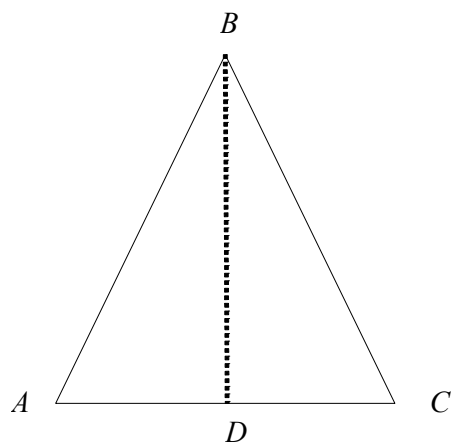
$\therefore |\angle BAC| = |\angle BCA|$  (corresponding angles) Step 3

or

(b) (i)

10 marks

Att 3



**Given:** A triangle  $ABC$ , with  $|AB|=|BC|$

**To Prove:**  $|\angle BAC| = |\angle BCA|$

**Construction:** Draw the line segment  $[BD]$ , where  $[BD] \perp [AC]$  Step 1

**Proof:** Consider  $\triangle BAD$  and  $\triangle BCD$ .

$$|AB| = |BC| \quad \text{given}$$

$$|\angle BDA| = |\angle BDC| \quad \text{both } 90^\circ$$

$$|BD| = |BD| \quad \text{common side} \quad \text{Step 2}$$

$$\therefore \triangle BAD \cong \triangle BCD \quad \text{R.H.S.}$$

$$\therefore |\angle BAC| = |\angle BCA| \quad \text{(corresponding angles)} \quad \text{Step 3}$$

\* Some steps may be indicated on diagram

*Blunders (-3)*

B1 Each step incorrect or omitted

B2 Each step incomplete

*Attempts (3 marks)*

A1  $[BD]$  shown in diagram with or without labelling

A2 Triangle drawn with equal sides indicated

*Worthless (0)*

W1 Unlabelled triangle drawn

W2 No diagram or no valid diagram

W3 Wrong theorem

(b) (ii)

10 marks

Att 3

$$\begin{aligned} |\angle CAB| &= \frac{1}{2}(180^\circ - 40^\circ) \\ &= 70^\circ \end{aligned}$$

or

$$\begin{aligned} |\angle CAD| &= 40^\circ \\ |\angle CDA| &= 100^\circ \\ |\angle ADB| &= 180^\circ - 100^\circ \\ &= 80^\circ \end{aligned}$$

$$|\angle CAD| = 40^\circ$$

$$\begin{aligned} |\angle DAB| &= 70^\circ - 40^\circ \\ &= 30^\circ \end{aligned}$$

$$|\angle DBA| = 70^\circ$$

$$\begin{aligned} |\angle DAB| &= 180^\circ - (|\angle DBA| + |\angle BDA|) \\ &= 180^\circ - (70^\circ + 80^\circ) \\ &= 30^\circ \end{aligned}$$

$$\begin{aligned} |\angle ADB| &= |\angle CAD| + |\angle ACD| \\ &= 40^\circ + 40^\circ \\ &= 80^\circ \end{aligned}$$

\* Accept work on diagram

*Blunders (-3)*

- B1 Correct answer without work shown (✍)
- B2 Second angle not found
- B3 Sum of angles in a triangle  $\neq 180^\circ$

*Slips (-1)*

- S1 Arithmetic slips to a maximum of (-3)

*Attempts (3 marks)*

- A1 Indication that the sum of the angles in a triangle =  $180^\circ$
- A2 Indication that angles opposite equal sides are equal in measure
- A3 Indication that an exterior angle is equal to the sum of the two interior opposite angles
- A4  $|\angle DAC| = 40^\circ$
- A5  $|AC| = |BC|$  indicated on diagram

*Worthless (0)*


- W1 Diagram from examination paper either partially or fully drawn
- W2  $|\angle DAB| = 40^\circ$
- W3  $|\angle ADC| = 90^\circ$

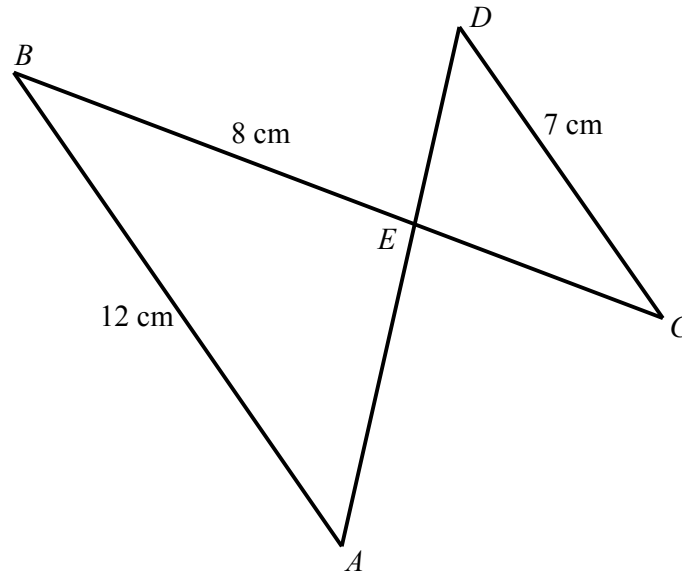
**Part (c)****20 (10,10) marks****Att (3,3)**

$AB$  is parallel to  $CD$ .  $BC$  and  $AD$  intersect at the point  $E$ .

(i)  Prove that the triangles  $ABE$  and  $CDE$  are equiangular.

$|AB| = 12$  cm,  $|BE| = 8$  cm and  $|CD| = 7$  cm.

(ii)  Find  $|EC|$  correct to one decimal place.

**(c) (i)****10 marks****Att 3**

$ \angle ABE $	=	$ \angle DCE $	(alternate angles)	Step 1
$ \angle BAE $	=	$ \angle CDE $	(alternate angles)	Step 2
$ \angle AEB $	=	$ \angle CED $	(vertically opposite angles)	
Therefore, the triangles $ABE$ and $CDE$ are equiangular.				Step 3

\* Some steps may be indicated on diagram

*Blunders (-3)*

B1 Each step incorrect or omitted

*Attempts (3 marks)*

A1 Stated that alternate angles are equal if lines are parallel

A2 Indication that the sum of the angles in a triangle =  $180^\circ$

A3 Stated that vertically opposite angles are equal

A4  $AB$  parallel to  $CD$  indicated on diagram

*Worthless (0)*

W1 Diagram from examination paper either partially or fully drawn

(c) (ii)

10 marks

Att 3

$\frac{ EC }{ BE }$	=	$\frac{ CD }{ AB }$
$\frac{ EC }{8}$	=	$\frac{7}{12}$
$ EC $	=	$\frac{8 \times 7}{12}$
$ EC $	=	4.666
	=	4.7 cm

\* Some steps may be indicated on diagram

*Blunders (-3)*

B1 Correct answer without work shown (✍)

B2  $\frac{|EC|}{|BE|} = \frac{|AB|}{|CD|}$  or similar incorrect ratio

B3 Error in transposition

*Slips (-1)*

S1 Arithmetic errors to a maximum of (-3)

S2 Answer not rounded or incorrectly rounded

*Attempts (3 marks)*

A1 One correct relevant ratio

A2 Stated that corresponding sides are proportional

*Worthless (0)*

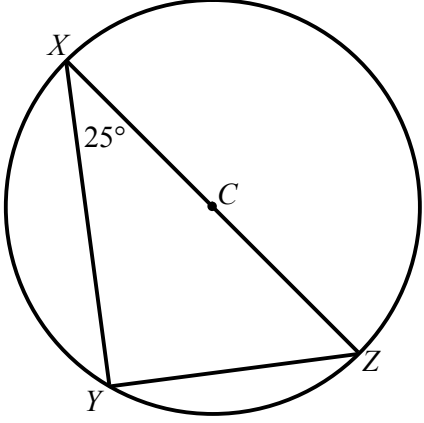
W1 Diagram from examination paper either partially or fully drawn

## QUESTION 4

<b>Part (a)</b>	<b>10 marks</b>	<b>Att 3</b>
<b>Part (b)</b>	<b>20 marks</b>	<b>Att 7</b>
<b>Part (c)</b>	<b>20 (10,10) marks</b>	<b>Att (3,3)</b>

**Part (a)** **10 marks** **Att 3**

$X, Y$  and  $Z$  are points on a circle with centre  $C$ .  
 $|\angle YXZ| = 25^\circ$ .



Find  $|\angle XZY|$ .

**(a)** **10 marks** **Att 3**

$$\begin{aligned} |\angle XZY| &= 90^\circ - 25^\circ \\ &= 65^\circ \end{aligned}$$

\* Some steps may be indicated on diagram

*Blunders (-3)*

- B1 Correct answer without work shown ()
- B2 Sum of angles in a triangle  $\neq 180^\circ$
- B3  $|\angle XYZ| \neq 90^\circ$

*Slips (-1)*


- S1 Arithmetic slips to a maximum of (-3)

*Attempts (3 marks)*

- A1 Indication that the sum of angles in a triangle =  $180^\circ$
- A2 Indication that the angle in a semi-circle =  $90^\circ$
- A3 Identification of a radius

*Worthless (0)*

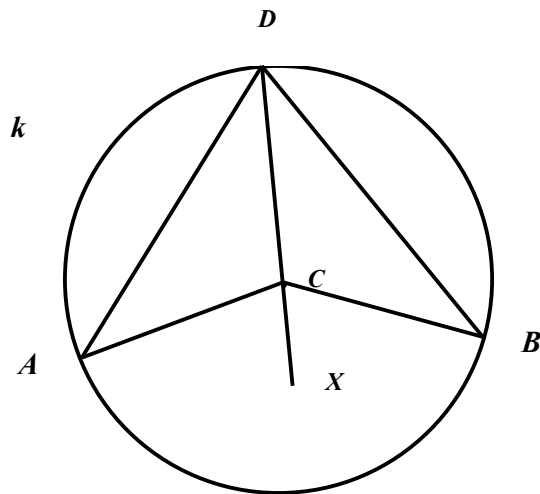
- W1  $|\angle XZY| = 25^\circ$
- W2 Diagram from examination paper either partially or fully drawn

 Prove that the measure of the angle at the centre of the circle is twice the measure of the angle at the circumference, standing on the same arc.

(b)

20 marks

Att 7



**Given:** Circle  $k$  with centre  $C$  and three points  $A$ ,  $B$  and  $D$  on  $k$ .

**To Prove:**  $|\angle ACB| = 2|\angle ADB|$

**Construction:** Join  $D$  to  $C$  and produce to  $X$ . Step 1

**Proof:**  $|AC| = |CD|$  both radius length  
 $\Rightarrow |\angle CAD| = |\angle ADC|$  Step 2

$|\angle ACX| = |\angle CAD| + |\angle ADC|$  exterior angle equals the sum of  
the two interior opposite angles  
Step 3

$\Rightarrow |\angle ACX| = 2|\angle ADC|$  Step 4

Similarly,  $|\angle BCX| = 2|\angle CDB|$  Step 5

$\therefore |\angle ACX| + |\angle BCX| = 2|\angle CDA| + 2|\angle CDB|$  Step 6

$\therefore |\angle ACB| = 2|\angle ADB|$  Step 7

\* Some steps may be indicated on diagram



*Blunders (-3)*

B1 Each step incorrect or incomplete

B2 Each step omitted

*Attempts (7 marks)*

A1 Diagram with angle at centre or angle at circumference drawn

*Worthless (0)*

W1 No diagram or no valid diagram

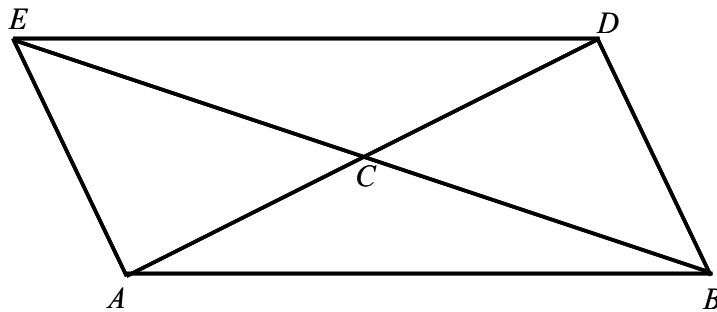
W2 Wrong theorem

Part (c)

20 (10,10) marks

Att (3,3)

The quadrilateral  $ABDE$  has diagonals  $[AD]$  and  $[BE]$  intersecting at  $C$ .  
 $C$  is the midpoint of both  $[AD]$  and  $[BE]$ .



- (i) ✎ Prove that  $\triangle ECD$  is congruent to  $\triangle ACB$ .
- (ii) ✎ Hence, prove that  $ABDE$  is a parallelogram.

(c) (i)

10 marks

Att 3

$ \angle ECD $	=	$ \angle ACB $	(vertically opposite angles)
$ CE $	=	$ BC $	(given)
$ AC $	=	$ CD $	(given)
Therefore, $\triangle ECD$ is congruent to $\triangle ACB$			S.A.S.

\* Some work may be indicated on diagram

*Blunders (-3)*

- B1 Each line in solution incorrect or omitted  
B2 Reason for congruency not given

*Misreadings (-1)*

- M1  $\triangle ACE$  is congruent to  $\triangle BCD$  proven

*Attempts (3 marks)*

- A1 Both triangles indicated or redrawn  
A2 Indication of some knowledge of congruent triangles

*Worthless (0)*

- W1 Diagram from examination paper either partially or fully drawn

(c) (ii)

10 marks

Att 3

- $\triangle ECD$  is congruent to  $\triangle ACB$   
 $\therefore |\angle CDE| = |\angle BAC| / |\angle CED| = |\angle ABC|$  (corresponding angles) Step 1  
 $\therefore ED$  is parallel to  $AB$   
 $\triangle ACE$  is congruent to  $\triangle BCD$  (S.A.S.)  
 $\therefore |\angle AEC| = |\angle CBD| / |\angle CAE| = |\angle BDC|$  (corresponding angles) Step 2  
 $\therefore AE$  is parallel to  $BD$   
 $\therefore ABDE$  is a parallelogram (two pairs of opposite sides parallel) Step 3

or

- $\triangle ECD$  is congruent to  $\triangle ACB$   
 $\therefore |ED| = |AB|$  (corresponding sides) Step 1  
and  $|\angle CDE| = |\angle BAC| / |\angle CED| = |\angle ABC|$  (corresponding angles) Step 2  
 $\therefore ED$  is parallel to  $AB$   
 $\therefore ABDE$  is a parallelogram (one pair of opposite sides equal and parallel) Step 3

or

- $\triangle ACE$  is congruent to  $\triangle BCD$  (S.A.S.)  
 $\therefore |AE| = |BD|$  (corresponding sides) Step 1  
and  $|\angle AEC| = |\angle CBD| / |\angle CAE| = |\angle BDC|$  (corresponding angles) Step 2  
 $\therefore AE$  is parallel to  $BD$   
 $\therefore ABDE$  is a parallelogram (one pair of opposite sides equal and parallel) Step 3

or

- $\triangle ECD$  is congruent to  $\triangle ACB$   
 $\therefore |ED| = |AB|$  (corresponding sides) Step 1  
 $\triangle ACE$  is congruent to  $\triangle BCD$  (S.A.S.) Step 2  
 $\therefore |AE| = |BD|$  (corresponding sides)  
 $\therefore ABDE$  is a parallelogram (two pairs of opposite sides equal) Step 3

or

- $\triangle ECD$  is congruent to  $\triangle ACB$   
 $\therefore |\angle CDE| = |\angle BAC|$  and  $|\angle CED| = |\angle ABC|$  (corresponding angles) Step 1  
 $\triangle ACE$  is congruent to  $\triangle BCD$  (S.A.S.)  
 $\therefore |\angle AEC| = |\angle CBD|$  and  $|\angle CAE| = |\angle BDC|$  (corresponding angles) Step 2  
 $\therefore |\angle CDE| + |\angle BDC| = |\angle BAC| + |\angle CAE|$   
and  $|\angle CED| + |\angle AEC| = |\angle ABC| + |\angle CBD|$   
i.e.  $|\angle BDE| = |\angle BAE|$  and  $|\angle AEB| = |\angle ABD|$   
 $\therefore ABDE$  is a parallelogram (two pairs of opposite angles equal) Step 3

\* Some steps may be indicated on diagram

*Blunders (-3)*

B1 Each step incorrect or omitted

*Attempts (3 marks)*

A1 Stated that opposite sides or opposite angles of a parallelogram are equal or opposite sides are parallel

A2 Indication that  $\triangle ACE$  is congruent to  $\triangle BCD$

A3 Indication that the diagonals of a parallelogram bisect each other

A4 Use of symmetry

*Worthless (0)*

W1 Diagram from examination paper either partially or fully drawn

## QUESTION 5

<b>Part (a)</b>	<b>10 marks</b>	<b>Att 3</b>
<b>Part (b)</b>	<b>20 (10,10)marks</b>	<b>Att (3,3)</b>
<b>Part (c)</b>	<b>20 (15,5) marks</b>	<b>Att (5,2)</b>

**Part (a)** **10 marks** **Att 3**

$ABC$  is a right angled triangle.  
 $|\angle ACB| = 60^\circ$  and  $|AC| = 10$  cm.

Calculate the length of  $[AB]$ , correct to two decimal places.

**(a)** **10 marks** **Att 3**

$\sin 60^\circ = \frac{ AB }{ AC } = \frac{ AB }{10}$ $ AB  = 10 \sin 60^\circ$ $= 8.660254$ $= 8.66$ <p style="text-align: center;"><b>or</b></p> $\frac{ AB }{\sin 60^\circ} = \frac{ AC }{\sin 90^\circ}$ $\frac{ AB }{\sin 60^\circ} = \frac{10}{\sin 90^\circ}$ $ AB  = \frac{10 \sin 60^\circ}{\sin 90^\circ}$ $= 8.660254$ $= 8.66 \text{ cm}$	<b>or</b>	$\cos 30^\circ = \frac{ AB }{ AC } = \frac{ AB }{10}$ $ AB  = 10 \cos 30^\circ$ $= 8.660254$ $= 8.66$ <p style="text-align: center;"><b>or</b></p> $\cos 60^\circ = \frac{ BC }{10}$ $ BC  = 10 \cos 60^\circ$ $= 5$ $ AC ^2 =  AB ^2 +  BC ^2$ $10^2 =  AB ^2 + 5^2$ $ AB ^2 = 100 - 25$ $= 75$ $ AB  = \sqrt{75}$ $= 8.660254$ $= 8.66 \text{ cm}$
---	-----------	--

*Blunders (-3)*

- B1 Correct answer without work shown (✍)
- B2 Incorrect ratio for sin/cos function
- B3 Incorrect ratio for Sine Rule
- B4 Error in transposition
- B5 Calculator in incorrect mode
- B6 Early rounding which affects the accuracy of the answer
- B7 Sum of angles in a triangle  $\neq 180^\circ$
- B8 Incorrect squaring
- B9 Error in Pythagoras' Theorem
- B10 Error in square root

*Slips (-1)*

- S1 Arithmetic slips to a maximum of (-3)
- S2 Answer not rounded or incorrectly rounded

*Attempts (3 marks)*

- A1  $\sin A = \frac{\text{opposite}}{\text{hypotenuse}}$  or  $\cos A = \frac{\text{adjacent}}{\text{hypotenuse}}$
- A2  $\sin 60^\circ$  or  $\cos 30^\circ$  or  $\cos 60^\circ$  or  $\sin 30^\circ$
- A3  $\frac{|AB|}{10}$  or  $\frac{|BC|}{10}$
- A4 Sine Rule with some correct substitution
- A5 Mention of  $30^\circ$
- A6 Indication that the sum of the angles in a triangle =  $180^\circ$
- A7 Effort at Pythagoras' Theorem

*Worthless (0)*

- W1  $\frac{|AB|}{60} = \frac{10}{90}$
- W2  $\frac{10}{60}$  or  $\frac{60}{10}$
- W3 Diagram from examination paper either partially or fully drawn

## Part (b)

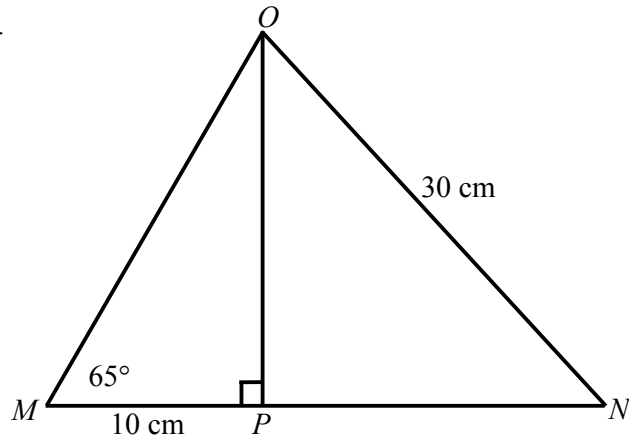
20 (10,10) marks

Att (3,3)

In the diagram  $MNO$  is a triangle with  $[OP]$  perpendicular to  $[MN]$ .  
 $|MP| = 10$  cm,  $|ON| = 30$  cm  
 and  $|\angle PMO| = 65^\circ$ .

Calculate

- (i)  $|OP|$ , correct to one decimal place
- (ii)  $|\angle MON|$ , correct to one decimal place.



## (b) (i)

10 marks

Att 3

$$\tan 65^\circ = \frac{|OP|}{|MP|} = \frac{|OP|}{10} \quad \text{or} \quad \tan 25^\circ = \frac{|MP|}{|OP|} = \frac{10}{|OP|}$$

$$\begin{aligned} |OP| &= 10 \tan 65^\circ \\ &= 21.445 \\ &= 21.4 \text{ cm} \end{aligned}$$

$$\begin{aligned} |OP| &= \frac{10}{\tan 25^\circ} \\ &= 21.445 \\ &= 21.4 \text{ cm} \end{aligned}$$

or

or

$$\begin{aligned} \frac{|OP|}{\sin 65^\circ} &= \frac{10}{\sin 25^\circ} \\ |OP| &= \frac{10 \sin 65^\circ}{\sin 25^\circ} \\ &= 21.445 \\ &= 21.4 \text{ cm} \end{aligned}$$

$$\cos 65^\circ = \frac{|MP|}{|OM|} = \frac{10}{|OM|}$$

$$\begin{aligned} |OM| &= \frac{10}{\cos 65^\circ} \\ &= 23.662 \end{aligned}$$

$$\begin{aligned} |OM|^2 &= |OP|^2 + |MP|^2 \\ 23.662^2 &= |OP|^2 + 10^2 \\ |OP|^2 &= 559.89 - 100 \\ &= 459.89 \end{aligned}$$

$$\begin{aligned} |OP| &= \sqrt{459.89} \\ &= 21.445 \\ &= 21.4 \text{ cm} \end{aligned}$$

*Blunders (-3)*

- B1 Correct answer without work shown (✍)
- B2 Incorrect ratio for tan/cos function
- B3 Incorrect ratio for Sine Rule
- B4 Error in transposition
- B5 Calculator in incorrect mode
- B6 Early rounding which affects the accuracy of the answer
- B7 Sum of angles in a triangle  $\neq 180^\circ$
- B8 Incorrect squaring
- B9 Error in Pythagoras' Theorem
- B10 Error in square root

*Slips (-1)*

- S1 Arithmetic slips to a maximum of (-3)
- S2 Answer not rounded or incorrectly rounded

*Attempts (3 marks)*

- A1  $\tan A = \frac{\text{opposite}}{\text{adjacent}}$  or  $\cos A = \frac{\text{adjacent}}{\text{hypotenuse}}$
- A2  $\tan 65^\circ$  or  $\tan 25^\circ$  or  $\cos 65^\circ$
- A3  $\frac{|OP|}{10}$  or  $\frac{10}{|OP|}$  or  $\frac{10}{|OM|}$
- A4 Sine Rule with some correct substitution
- A5 Mention of  $25^\circ$
- A6 Indication that the sum of the angles in a triangle =  $180^\circ$
- A7 Effort at Pythagoras' Theorem

*Worthless (0)*

- W1  $\frac{|OP|}{65} = \frac{10}{90}$
- W2  $\frac{10}{65}$  or  $\frac{65}{10}$
- W3 Diagram from examination paper either partially or fully drawn



(b) (ii)

10 marks

Att 3

$$\begin{aligned}
|\angle MOP| &= 180^\circ - (65^\circ + 90^\circ) = 25^\circ \\
\cos \angle NOP &= \frac{|OP|}{|ON|} = \frac{21.4}{30} \\
\therefore |\angle NOP| &= 44.49322423^\circ \\
|\angle MON| &= |\angle MOP| + |\angle NOP| \\
&= 25^\circ + 44.49322423^\circ \\
&= 69.49322423^\circ \\
&= 69.5^\circ
\end{aligned}$$

or

$$\begin{aligned}
\sin \angle PNO &= \frac{|OP|}{|ON|} = \frac{21.4}{30} \\
\therefore |\angle PNO| &= 45.50677577^\circ \\
|\angle MON| &= 180^\circ - (45.50677577^\circ + 65^\circ) \\
&= 69.49322423^\circ \\
&= 69.5^\circ
\end{aligned}$$

or

$$\begin{aligned}
\frac{\sin \angle PNO}{21.4} &= \frac{\sin 90^\circ}{30} \\
\sin \angle PNO &= \frac{21.4 \sin 90^\circ}{30} \\
|\angle PNO| &= 45.50677577^\circ \\
|\angle MON| &= 180^\circ - (45.50677577^\circ + 65^\circ) \\
&= 69.49322423^\circ \\
&= 69.5^\circ
\end{aligned}$$

or

$$30^2 = 21.4^2 + |PN|^2$$

$$900 = 457.96 + |PN|^2$$

$$442.04 = |PN|^2$$

$$|PN| = \sqrt{442.04} = 21.0247$$

$$\sin \angle NOP = \frac{|PN|}{|ON|} = \frac{21.0247}{30}$$

$$|\angle NOP| = 44.49322423^\circ$$

$$\begin{aligned}
|\angle MON| &= |\angle MOP| + |\angle NOP| \\
&= 25^\circ + 44.49322423^\circ \\
&= 69.49322423^\circ \\
&= 69.5^\circ
\end{aligned}$$

$$\frac{\sin \angle NOP}{21.0247} = \frac{\sin 90^\circ}{30}$$

$$\sin \angle NOP = \frac{21.0247 \sin 90^\circ}{30}$$

$$\begin{aligned}
|\angle NOP| &= 44.49322423^\circ \\
|\angle MON| &= |\angle MOP| + |\angle NOP| \\
&= 25^\circ + 44.49322423^\circ \\
&= 69.49322423^\circ \\
&= 69.5^\circ
\end{aligned}$$

\* Accept candidate's answer from (b) (i)

*Blunders (-3)*

- B1 Correct answer without work shown (✍)
- B2 Incorrect ratio for trigonometric function
- B3 Incorrect ratio for Sine Rule
- B4 Error in transposition
- B5 Calculator in incorrect mode
- B6 Early rounding which affects the accuracy of the answer
- B7 Failure to add/subtract
- B8 Error in Pythagoras' Theorem
- B9 Incorrect squaring
- B10 Error in square root
- B11 Sum of angles in a triangle  $\neq 180^\circ$

*Slips (-1)*

- S1 Arithmetic slips to a maximum of (-3)
- S2 Answer not rounded or incorrectly rounded

*Attempts (3 marks)*



- A1  $\cos A = \frac{\text{adjacent}}{\text{hypotenuse}}$  or  $\sin A = \frac{\text{opposite}}{\text{hypotenuse}}$
- A2 Indication that the sum of the angles in a triangle =  $180^\circ$
- A3 Effort at Pythagoras' Theorem
- A4 Sine Rule with some correct substitution
- A5 Mention of  $25^\circ$

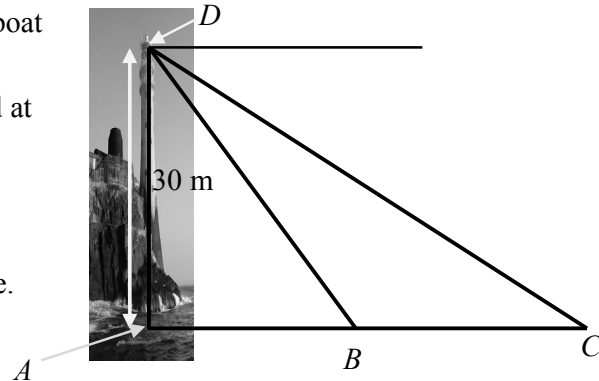
*Worthless (0)*

- W1 Diagram from examination paper either partially or fully drawn

**Part (c)****20 (15,5) marks****Att (5,2)**

A boat sails due east from the base  $A$  of a 30 m high lighthouse,  $[AD]$ .  
 At the point  $B$  the angle of depression of the boat from the top of the lighthouse is  $68^\circ$ .  
 Ten seconds later the boat is at the point  $C$  and the angle of depression is now  $33^\circ$ .

- (i)  Find  $|BC|$ , the distance the boat has travelled in this time.
- (ii)  Calculate the average speed at which the boat is sailing between  $B$  and  $C$ .  
 Give your answer in metres per second, correct to one decimal place.

**(c) (i)****15 marks****Att 5**

$$\sin 68^\circ = \frac{|AD|}{|BD|} = \frac{30}{|BD|} \quad (\text{may also use } \cos 22^\circ)$$

$$|BD| = \frac{30}{\sin 68^\circ} \quad \text{Step 1}$$

$$= 32.3560 \quad \text{Step 2}$$

$$|\angle BDC| = 68^\circ - 33^\circ = 35^\circ \quad \text{Step 3}$$

$$\frac{|BC|}{\sin \angle BDC} = \frac{|BD|}{\sin \angle BCD}$$

$$\frac{|BC|}{\sin 35^\circ} = \frac{32.3560}{\sin 33^\circ} \quad \text{Step 4}$$

$$|BC| = \frac{32.3560 \sin 35^\circ}{\sin 33^\circ}$$

$$= 34.075 \text{ m} \quad \text{Step 5}$$

$\tan 68^\circ$	=	$\frac{ AD }{ AB }$	=	$\frac{30}{ AB }$	
					<b>or</b>
$ AB $	=	$\frac{30}{\tan 68^\circ}$			Step 1
	=	$12 \cdot 1207869$			Step 2
$\tan 33^\circ$	=	$\frac{ AD }{ AC }$	=	$\frac{30}{ AC }$	
$ AC $	=	$\frac{30}{\tan 33^\circ}$			Step 3
	=	$46 \cdot 19594891$			Step 4
$ BC $	=	$46 \cdot 19594891 - 12 \cdot 1207869$			
	=	$34 \cdot 07516201 \text{ m}$			Step 5

\* Some steps may be indicated on diagram

*Blunders (-3)*

- B1 Correct answer without work shown (✍)
- B2 Each step incorrect or incomplete
- B3 Incorrect ratio for trigonometric function
- B4 Incorrect ratio for Sine Rule
- B5 Calculator in incorrect mode
- B6 Error in transposition
- B7  $|\angle ADB| = 68^\circ$
- B8  $|\angle ADC| = 33^\circ$
- B9 Sum of angles in a triangle  $\neq 180^\circ$

*Slips (-1)*

- S1 Arithmetic slips to a maximum of (-3)

*Attempts (5 marks)*

- A1  $\sin A = \frac{\text{opposite}}{\text{hypotenuse}}$  or  $\tan A = \frac{\text{opposite}}{\text{adjacent}}$  or  $\cos A = \frac{\text{adjacent}}{\text{hypotenuse}}$
- A2 Sine Rule with some correct substitution
- A3  $\sin 68^\circ$  or  $\tan 68^\circ$  or  $\tan 33^\circ$  or  $\cos 22^\circ$
- A4 Mention of  $35^\circ$  or  $22^\circ$  or  $112^\circ$  or  $57^\circ$
- A5  $\frac{30}{|BD|}$  or  $\frac{30}{|AB|}$
- A6 Indication that the sum of the angles in a triangle =  $180^\circ$
- A7  $68^\circ$  and/or  $33^\circ$  correctly indicated on diagram

*Worthless (0)*

- W1 Diagram from examination paper either partially or fully drawn
- W2  $\triangle BCD$  treated as right-angled

**(c) (ii)**

**5 marks**

**Att 2**

Average speed	=	$\frac{\text{Distance}}{\text{Time}}$
	=	$\frac{34 \cdot 075}{10}$
	=	3.4075
	=	3.4 m/sec

\* Accept candidate's answer from (c) (i)

*Blunders (-3)*

- B1 Correct answer without work shown (✍)
- B2 Incorrect relevant formula

*Slips (-1)*

- S1 Arithmetic slips to a maximum of (-3)
- S2 Answer not rounded or incorrectly rounded

*Attempts (2 marks)*


- A1 Correct formula with or without substitution

## QUESTION 6

<b>Part (a)</b>	<b>10 marks</b>	<b>Att 3</b>
<b>Part (b)</b>	<b>20 (5,10,5)marks</b>	<b>Att (2,3,2)</b>
<b>Part (c)</b>	<b>20 (5,10,5) marks</b>	<b>Att (2,3,2)</b>

**Part (a)** **10 marks** **Att 3**

The mean of 7, 2,  $x$ , 15 and 5 is 9.

 Find the value of  $x$ .

**(a)** **10 marks** **Att 3**


$$\frac{7+2+x+15+5}{5} = 9$$

$$\frac{x+29}{5} = 9$$

$$x+29 = 45$$

$$x = 16$$

*Blunders (-3)*

- B1 Correct answer without work shown ()
- B2 Incorrect denominator
- B3 Omission of a value
- B4 Error in transposition
- B5  $29x$  in numerator

*Slips (-1)*

- S1 Arithmetic slips to a maximum of (-3)

*Attempts (3 marks)*

A1 Addition of some or all of the numbers

A2 Indication of division by 5

A3 
$$\frac{7+2+x+15+5}{5}$$

A4 
$$\frac{7+2+x+15+5+9}{6}$$

**Part (b)****20 (5,10,5) marks****Att (2,3,2)**

The results obtained by 200 students in an examination are recorded in the following grouped frequency distribution.

Mark	0 – 20	20 – 40	40 – 50	50 – 60	60 – 70	70 – 80	80 – 100
Number of students	20	36	36	52	30	14	12

[Note: 20 – 40 means 20 or more but less than 40, etc.]

- (i) ✍ Draw a cumulative frequency table.
- (ii) ✍ Use your cumulative frequency table to construct the ogive.
- (iii) ✍ If 50% of the students passed, use your ogive to estimate the pass mark.

**(b) (i)****5 marks****Att 2**

Mark	< 20	< 40	< 50	< 60	< 70	< 80	< 100
Number of students	20	56	92	144	174	188	200

*Blunders (-3)*

- B1 Number omitted (sum  $\neq$  200)  
 B2 Subtraction of values

*Slips (-1)*

- S1 Arithmetic slips to a maximum of (-3)  
 S2 Each incorrect entry

*Attempts (2 marks)*

- A1 One value correctly filled into table  
 A2 Indication of addition of frequencies

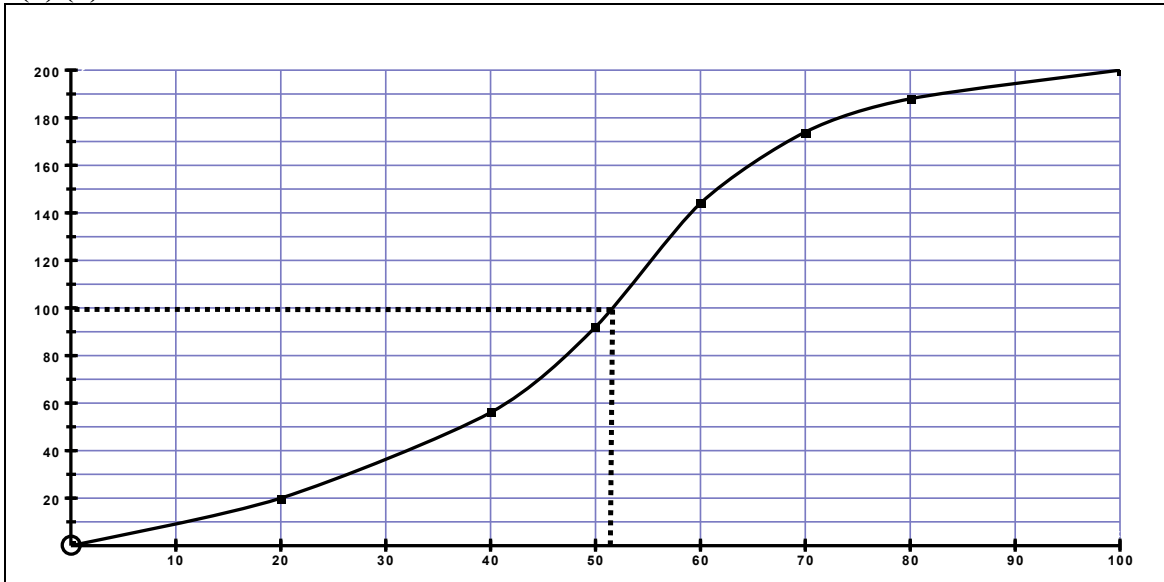
*Worthless (0)*

- W1 Table copied from examination paper

(b) (ii)

10 marks

Att 3



\* Accept candidate's perpendicular axes

*Blunders (-3)*

- B1 Scale not uniform
- B2 Points plotted but not joined
- B3 Graph not drawn from origin
- B4 Consistent error in plotting points

*Slips (-1)*

- S1 Each point incorrectly plotted
- S2 Each point omitted
- S3 Points joined with straight lines

*Attempts (3 marks)*

- A1 Graph from frequency table drawn
- A2 Scaled axes drawn

*Worthless (0)*

- W1 Unscaled axes drawn



**(b) (iii)**

**5 marks**

**Att 2**

Pass mark: 52

- \* Accept answer consistent with candidate's work in (b) (ii)
- \* Accept a tolerance of  $\pm 2$

*Blunders (-3)*

- B1 Correct answer without work shown (✍)
- B2 Line drawn from incorrect starting point on correct axis

*Slips (-1)*

- S1 Incorrect reading or no reading from graph with correct work shown

*Attempts (2 marks)*

- A1 Horizontal line from 100
- A2 Indication of use of 100
- A3 Horizontal axis used for 50%

*Worthless (0)*

- W1 Answer from trend graph

**Part (c)**

**20 (5,10,5) marks**

**Att (2,3,2)**

130 people were surveyed as they were leaving a shop to see how much they had just spent in the shop. The results are recorded in the following table.

Amount spent (€)	0 – 20	20 – 30	30 – 40	40 – 50	50 – 100
No. of people	60	10	5	25	30

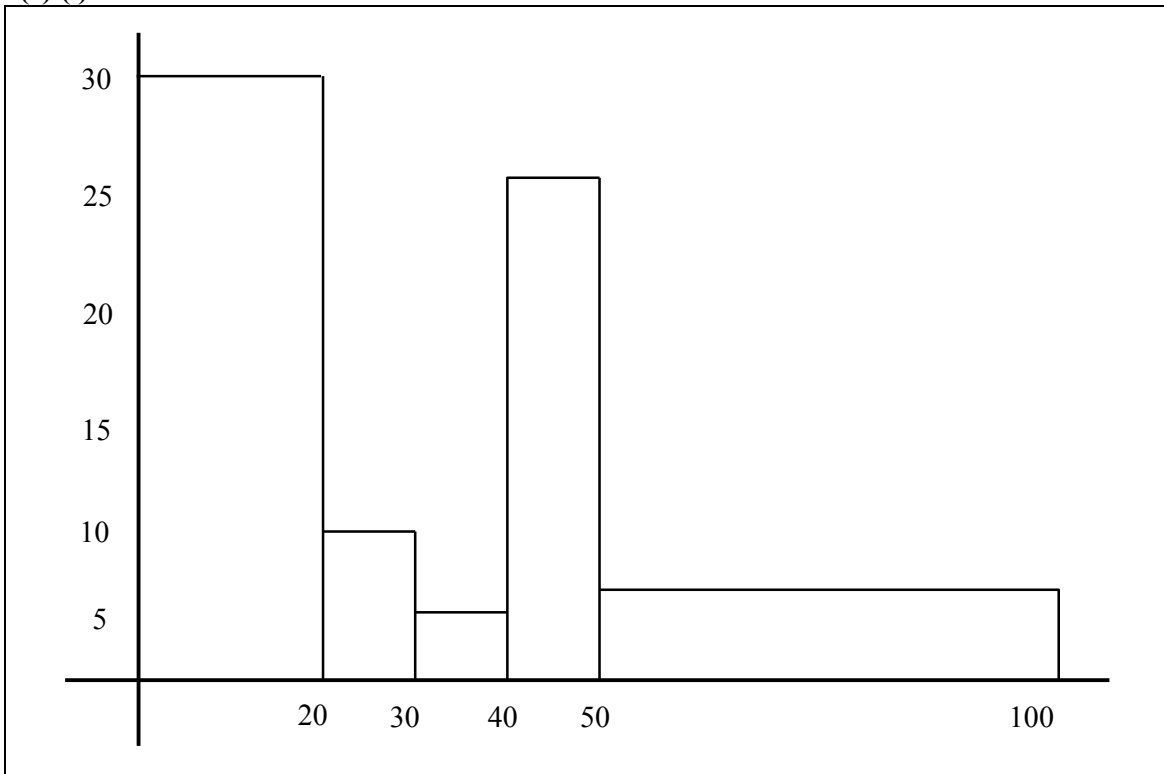
[Note: 20 – 30 means 20 or more but less than 30, etc.]

- (i) ✍ Draw a histogram to illustrate the data in the above table.
- (ii) ✍ Taking mid-interval values, calculate the mean amount of money spent in the shop. Give your answer correct to the nearest euro.
- (iii) ✍ What is the maximum number of people who could have spent less than the mean?

(c) (i)

5 marks

Att 2



\* Accept candidate's perpendicular axes

*Blunders (-3)*

- B1 Scale not uniform on each axis
- B2 Incorrect width of rectangle
- B3 Incorrect height of rectangle
- B4 Rectangle omitted

*Attempts (2 marks)*

- A1 Graph from frequency table drawn
- A2 Axes drawn

*Worthless (0)*

- W1 Table from examination paper copied

(c) (ii)

10 marks

Att 3

Mean	=	$\frac{60 \times 10 + 10 \times 25 + 5 \times 35 + 25 \times 45 + 30 \times 75}{130}$
	=	$\frac{600 + 250 + 175 + 1125 + 2250}{130}$
	=	$\frac{4400}{130}$
	=	33.846
	=	€34

*Blunders (-3)*

- B1 Correct answer without work shown (✍)
- B2 Consistent incorrect mid-interval values
- B3 Division by 5
- B4 Division by sum of mid interval values
- B5 Mid-interval values added to frequencies instead of multiplied

*Slips (-1)*

- S1 Arithmetic slips to a maximum of (-3)
- S2 Answer not rounded or incorrectly rounded

*Attempts (3 marks)*

- A1 One correct multiplication in numerator
- A2 Indication of division by 130
- A3 One correct mid-interval value
- A4 Sum of mid-interval values divided by 130 or 5

*Worthless (0)*

- W1 Sum of frequencies divided by 5

**(c) (iii)**

**5 marks**

**Att 2**

The maximum less than the mean:	$60 + 10 + 5$	$=$	$75$
---------------------------------	---------------	-----	------

\* Accept candidate's answer from (c) (ii)

*Blunders (-3)*

B1 Correct answer without work shown (~~✗~~)

B2 One value omitted

*Slips (-1)*

S1 Arithmetic slips to a maximum of (-3)

*Misreadings (-1)*

M1 Maximum greater than the mean found

*Attempts (2 marks)*

A1 One correct value