

INTERNATIONAL INDIAN SCHOOL-DAMMA
SUMMATIVE ASSESSMENT – 1 (SEPTEMBER 2020)
ENVIRONMENTAL STUDIES CLASS- IV

Time : 2 Hours

Marks:

Name: _____

Roll No: _____

Section: _____

Orals: /10

Written: /50

Total: /60

(Note: Part A & Part B to be done in the question paper. Part C to be done in the answer sheet.)

PART-A

I. Choose the correct answer: _____ ($\frac{1}{2} \times 6 = 3$)

1. Organ that helps us to taste food. _____
a) Teeth b) Tongue c) Skin
2. Habitat of snail and crab. _____
a) Aquatic b) Aerial c) Arboreal
3. Name the organisation that set up old age homes and orphanages. _____
a) RWA b) NGO c) HRD
4. A shy animal. _____
a) Snake b) Ant c) Toad
5. First and Second premolars appear at an age of _____
a) 5-6 years b) 7-9 years c) 10-12 years
6. Leader of the elephant group. _____
a) Oldest male b) Young male c) Oldest Female

(Page 1 of 6)

3

II. Fill in the blanks: (½ x 10)

1. The process of adjusting itself to its surroundings is called _____.
2. _____ work for the welfare of the women.
3. Milk teeth are also called _____ teeth.
4. Lion lives in _____.
5. Groups of gorillas are called _____.
6. _____ cut like an axe.
7. _____ animals sleep in the day and hunt at night.
8. The head or chairperson of the Corporation is known as _____.
9. _____ animals spend most of their time in air.
10. _____ is the hardest substance in the body.

III. Write True or False: (½ x 6 = 3)

1. The inner part of the tooth is hollow. _____
2. The local body that governs a big city is Panchayat. _____
3. Cats have external ears. _____
4. Fishes breathe by lungs. _____
5. The acid produced by the bacteria dissolves enamel _____
6. Aquatic animals make nest to lay eggs. _____

IV. Name the following: (1 x 6 = 6)

1. Two types of insects that live in groups. _____ , _____
2. We wear this to make crooked teeth straight. _____
3. Group of killer whales is known as _____.

4. Animal that makes shelter using its saliva. _____
5. The head of the Panchayat . _____
6. An animal that lives in holes dug by the other animals. _____

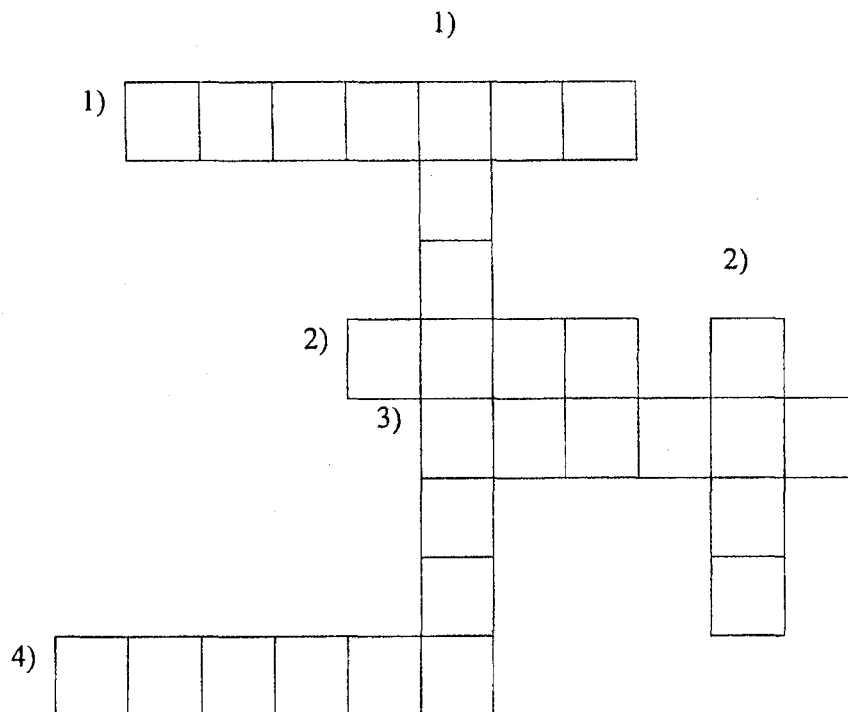
V. Solve the puzzle: _____ ($\frac{1}{2} \times 6 = 3$)

ACROSS

1. Below the enamel lies _____.
2. Fishes have _____ for swimming.
3. A public property. _____
4. Disease that attacks teeth. _____

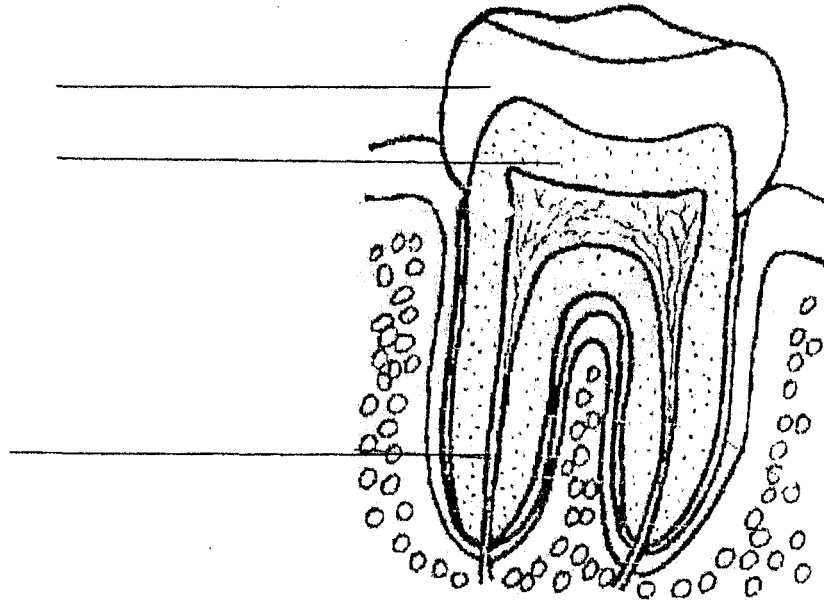
DOWN

1. Cutting teeth . _____
2. An amphibian. _____



PART B

- A. Label the diagram. ($\frac{1}{2} \times 4 = 2$)




- B. Identify the animal and its habitat. ($\frac{1}{2} \times 2 = 1$)




It is _____ M _____


Its habitat _____

C. Write any 4 public property seen in the picture. ($\frac{1}{2} \times 4 = 2$)



D. Write the group names of the following. ($\frac{1}{2} \times 2 = 1$)





PART C

I. Answer the following in one or two sentences: (1 x 5 = 5)

1. Who are Councillors?
2. What makes the mouth smell bad?
3. What does a spider use its web for?
4. What do you understand by RWAs?
5. What are the three parts of a tooth?

II. Give reasons for the following: (2 x 3 = 6)

1. Why do flesh eating animals move in group?
2. Why should we not damage plants in the park?
3. We should avoid sweets and chocolates. Why?

III. Answer ANY FOUR of the following: (2 x 4 = 8)

1. Write two tips which help to keep our teeth healthy.
2. What is public property? Give two examples.
3. What are mammals? Give two examples.
4. Write four functions of Municipal Corporation.
5. How will you take care of library as a Public Property?

IV. Answer ANY ONE of the following: (3 x 1 = 3)

1. Explain any three classifications of animals based on the habitat.
2. List three functions of Non-Governmental Organisation.

V. Draw any two types of teeth and write their names. (1 x 2 = 2)

Part C

