

Write your name here

Surname

Other names

**Pearson Edexcel**  
**International GCSE**

Centre Number

--	--	--	--	--

Candidate Number

--	--	--	--

# Pakistan Studies

## Paper 2: The Land, People and Resources of Pakistan

Thursday 17 May 2018 – Morning  
**Time: 1 hour 30 minutes**

Paper Reference

**4PA0/02**

**You do not need any other materials.**

Total Marks

### Instructions

- Use **black** ink or ball-point pen.
- **Fill in the boxes** at the top of this page with your name, centre number and candidate number.
- Answer **Question 1** and any **three** other questions.
- Answer the questions in the spaces provided – *there may be more space than you need.*

### Information

- The total mark for this paper is 60.
- The marks for **each** question are shown in brackets – *use this as a guide as to how much time to spend on each question.*

### Advice

- Read each question carefully before you start to answer it.
- Try to answer every question.
- Check your answers if you have time at the end.

Turn over ►

P55683A

©2018 Pearson Education Ltd.

1/1/1/1/1/1/1/e2



Pearson

You MUST answer this question.

Some questions must be answered with a cross in a box ☒. If you change your mind about an answer, put a line through the box ☒ and then mark your new answer with a cross ☒.

1 (a) Study Figure 1 which is an outline map of Pakistan.

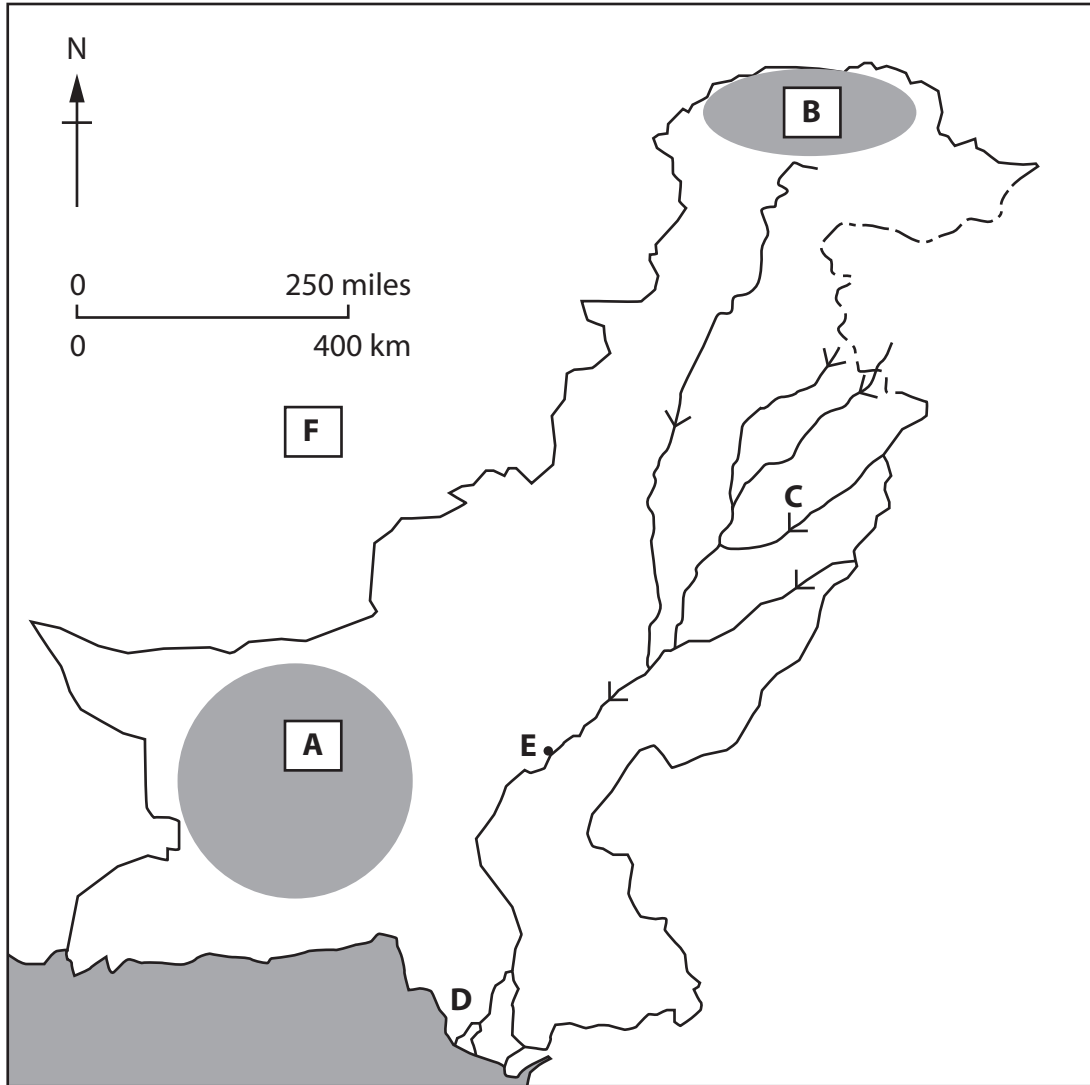


Figure 1

DO NOT WRITE IN THIS AREA

DO NOT WRITE IN THIS AREA

DO NOT WRITE IN THIS AREA



Name the following features shown on the map:

(i) the plateau at A (1)

(ii) the mountains at B (1)

(iii) river C (1)

(iv) the climate zone at D (1)

(v) the city at E (1)

(vi) the country at F. (1)

DO NOT WRITE IN THIS AREA

DO NOT WRITE IN THIS AREA

DO NOT WRITE IN THIS AREA



(b) In Pakistan, name:

(i) the rock used in the cement industry (1)

(ii) the largest province by area (1)

(iii) the most densely-populated province (1)

(iv) the largest freshwater lake (1)

(v) **one** cottage industry (1)

(vi) the most important food crop, by output (metric tons). (1)

**(Total for Question 1 = 12 marks)**



DO NOT WRITE IN THIS AREA

DO NOT WRITE IN THIS AREA

DO NOT WRITE IN THIS AREA

Answer any THREE of questions 2–8.

If you answer Question 2 put a cross in the box  .

- 2 (a) Study Figure 2 which shows the area and the number of people affected by the 2010 floods.

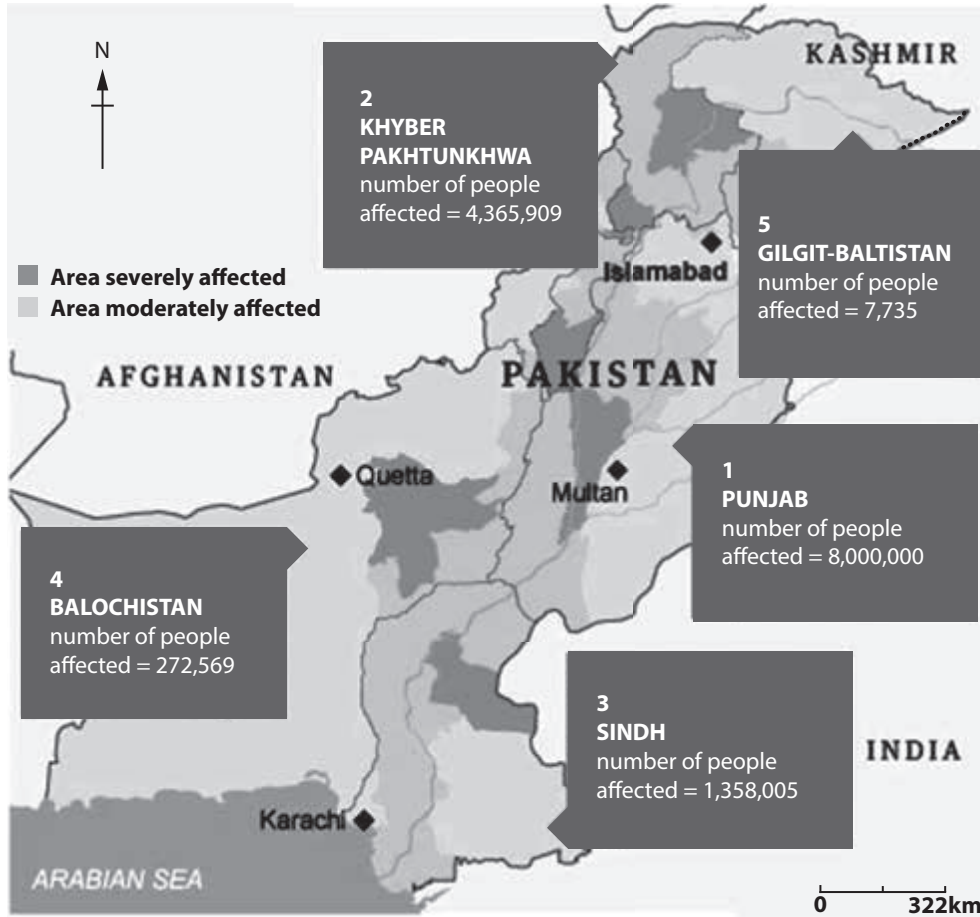


Figure 2

- (i) Identify the province with the second largest number of people affected.

(1)

Put a cross in the correct box.

- A Punjab
- B Khyber Pakhtunkhwa
- C Sindh
- D Gilgit-Baltistan

- (ii) State **two** negative impacts of flooding **not** identified in Figure 2.

(2)

1 .....

2 .....



(b) Outline the reasons for the Western disturbances.

(3)

.....

.....

.....

.....

.....

.....

(c) (i) Identify **two** factors that affect the formation of soil.

(2)

1 .....

2 .....

(ii) Describe **one** cause of soil erosion.

(2)

.....

.....

.....

.....

DO NOT WRITE IN THIS AREA

DO NOT WRITE IN THIS AREA

DO NOT WRITE IN THIS AREA



(d) Explain why it is important to reform land rights in Pakistan.

(6)

DO NOT WRITE IN THIS AREA

DO NOT WRITE IN THIS AREA

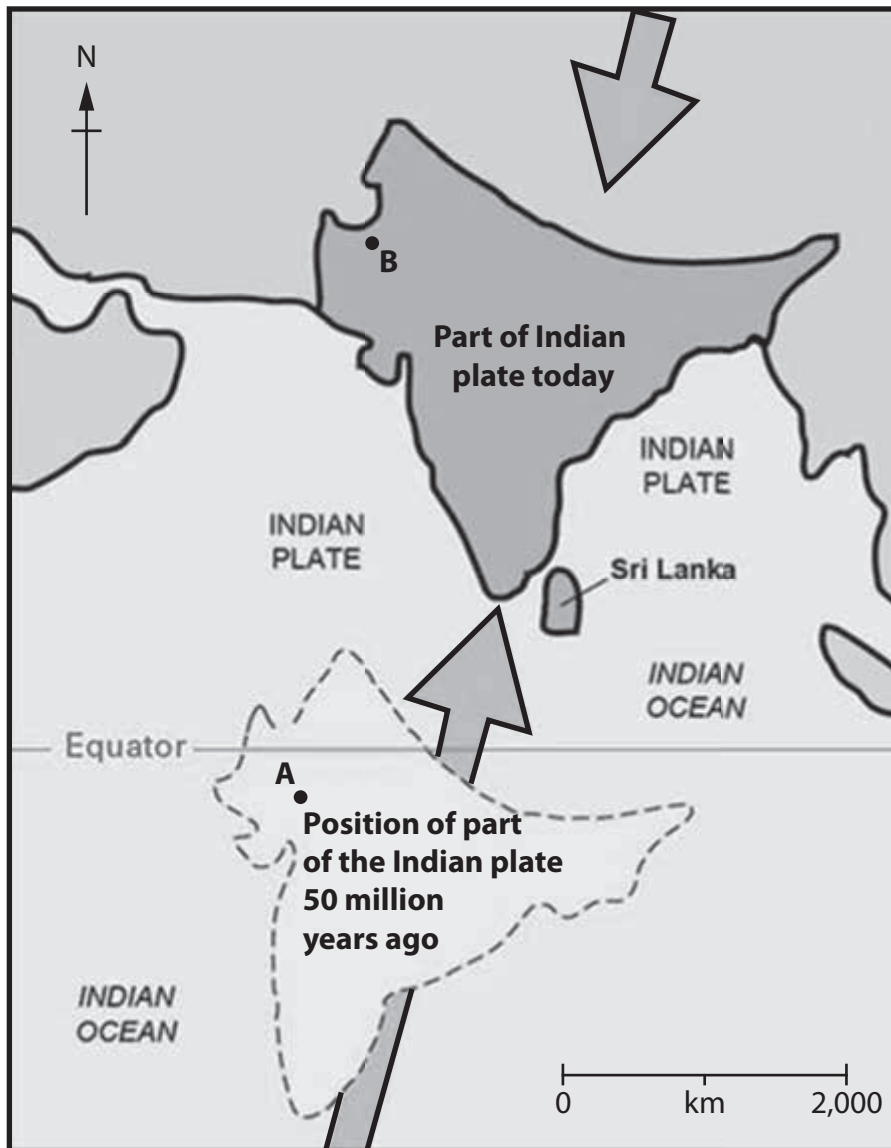
DO NOT WRITE IN THIS AREA

(Total for Question 2 = 16 marks)



If you answer Question 3 put a cross in the box  .

- 3 (a) Study Figure 3 which shows the northward movement of the Indian tectonic plate.



Key


 = direction of plate movement.

Figure 3

DO NOT WRITE IN THIS AREA

DO NOT WRITE IN THIS AREA

DO NOT WRITE IN THIS AREA





- (i) What is the approximate distance that part of the Indian plate has moved between points A and B?

(1)

Put a cross in the correct box.

- A 1100 km  
 B 2100 km  
 C 3100 km  
 D 4100 km

- (ii) Pakistan is located on the Indian plate.

Name the **two** other tectonic plates on which Pakistan is located.

(2)

1 .....

2 .....

- (b) Outline **one** reason for the frequent earthquakes in Pakistan.

(3)

.....

.....

.....

.....

.....

.....

- (c) (i) Name **two** methods of irrigation used in Pakistan.

(2)

1 .....

2 .....





If you answer Question 4 put a cross in the box  .

- 4 (a) Study Figure 4 which shows the number of international tourists visiting Pakistan each year between 2000 and 2016.

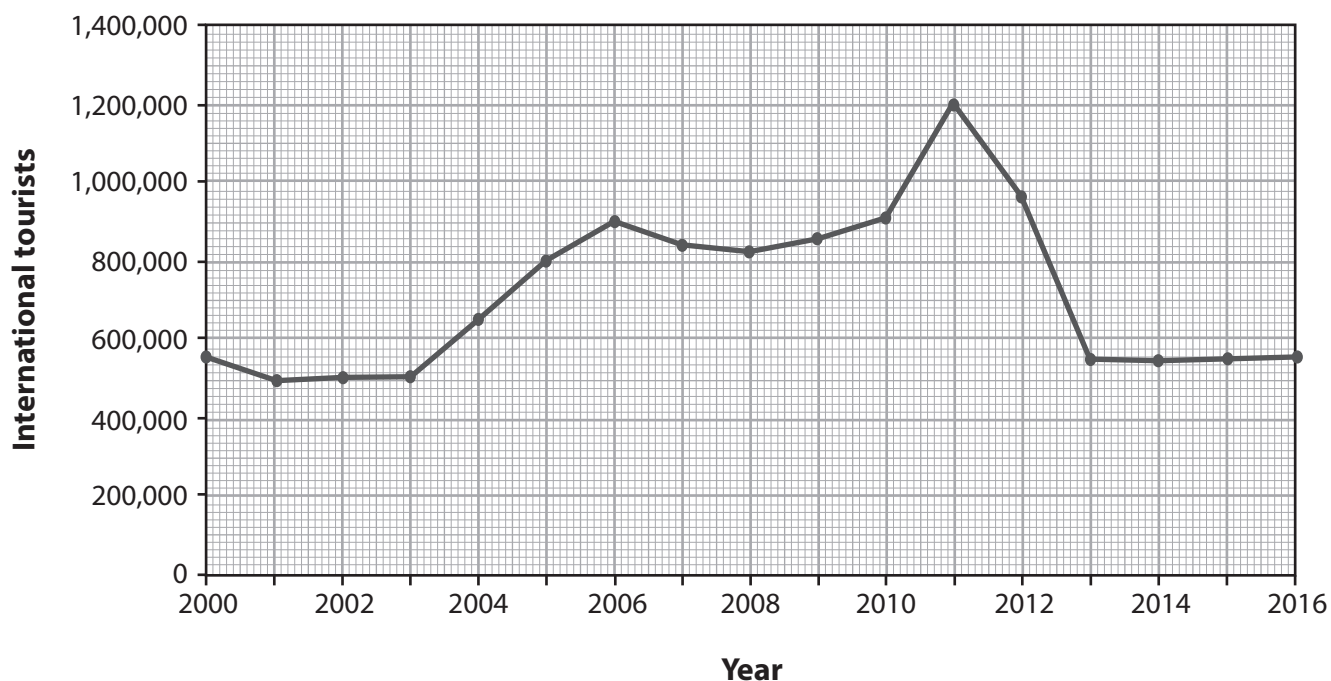


Figure 4

- (i) State the increase in the number of international tourists between 2001 and 2011.

(1)

Put a cross in the correct box.

- A 17,000  
 B 70,000  
 C 170,000  
 D 700,000

- (ii) Suggest **two** reasons why international tourist numbers have decreased since 2011.

(2)

1 .....

2 .....



(b) Outline **one** positive impact of international tourism.

(3)

.....

.....

.....

.....

.....

.....

(c) (i) Identify **two** factors influencing the density of Pakistan's rail network.

(2)

1 .....

2 .....

(ii) Describe **one** problem affecting the working of Pakistan's railway network.

(2)

.....

.....

.....

.....

DO NOT WRITE IN THIS AREA

DO NOT WRITE IN THIS AREA

DO NOT WRITE IN THIS AREA



(d) Explain the problems affecting the development of Pakistan's sea ports.

(6)

DO NOT WRITE IN THIS AREA

DO NOT WRITE IN THIS AREA

DO NOT WRITE IN THIS AREA

(Total for Question 4 = 16 marks)



P 5 5 6 8 3 A 0 1 3 2 4

If you answer Question 5 put a cross in the box  .

- 5 (a) Study Figure 5 which gives information about mortality rates of children under the age of 5 years in 1990 and 2013.

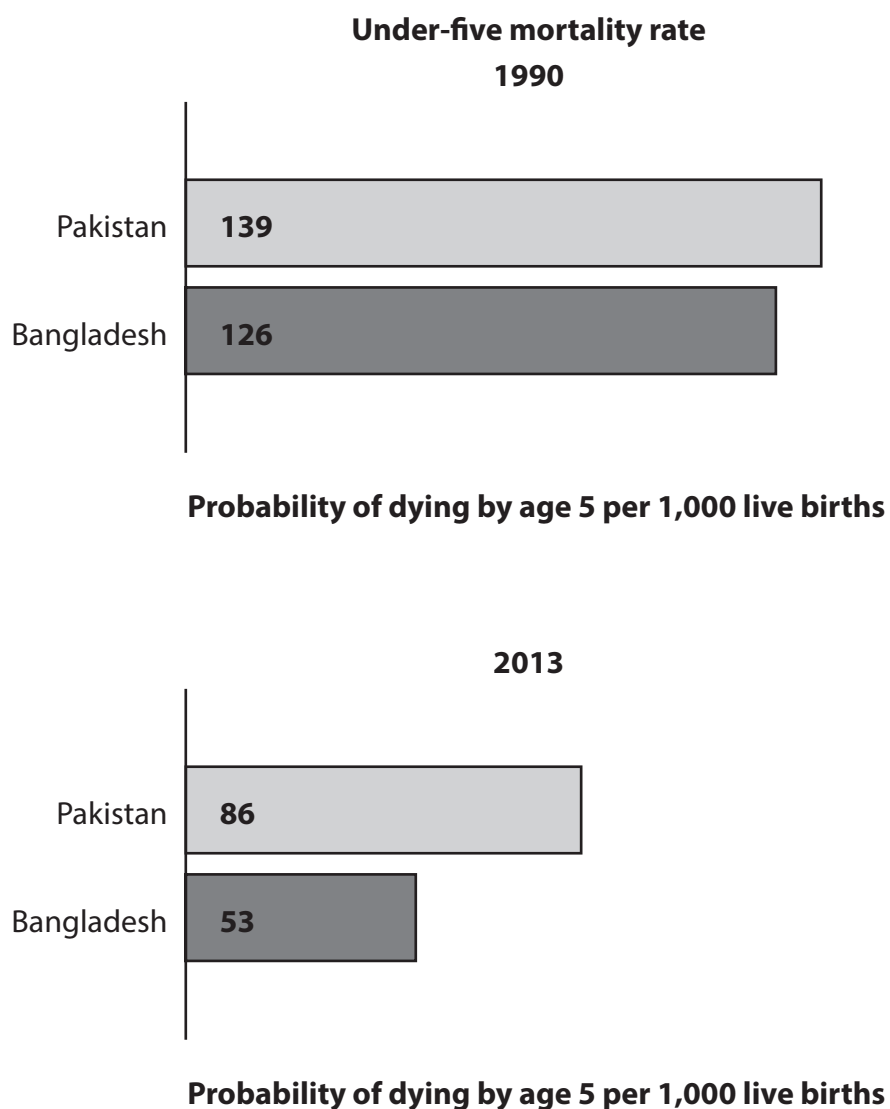


Figure 5

DO NOT WRITE IN THIS AREA

DO NOT WRITE IN THIS AREA

DO NOT WRITE IN THIS AREA



(i) What was the difference between the mortality rates for Bangladesh and Pakistan in 2013? (1)

Put a cross in the correct box.

- A 23
- B 33
- C 43
- D 53

(ii) Suggest **two** reasons for the high mortality rate in Pakistan. (2)

1 .....

2 .....

(b) Outline **one** advantage of Pakistan having a large percentage of its population aged between 20 and 40. (3)

.....

.....

.....

.....

.....

.....

(c) (i) Identify **two** problems resulting from class differences in Pakistan. (2)

1 .....

2 .....



(ii) Describe **one** factor affecting the role of women in Pakistan's society.

(2)

.....

.....

.....

(d) Explain the contributions made by international agencies to improve human welfare in Pakistan.

(6)

.....

.....

.....

.....

.....

.....

.....

.....

.....

.....

.....

.....

.....

.....

.....

.....

.....

.....

.....

.....

.....

.....

(Total for Question 5 = 16 marks)

DO NOT WRITE IN THIS AREA

DO NOT WRITE IN THIS AREA

DO NOT WRITE IN THIS AREA





If you answer Question 6 put a cross in the box  .

- 6 (a) Study Figure 6 which is an extract from a newspaper about air pollution in Pakistan.

## WORRYING LEVELS OF AIR POLLUTION IN PAKISTAN

**The major cities of Pakistan have high levels of air pollution.**

The air in Karachi has over  $88\mu\text{g}/\text{m}^3$  of air pollutants.

The World Health Organisation recommends that

$10\mu\text{g}/\text{m}^3$  is a safe particulate level.

2017

**Figure 6**

- (i) By how many times does Karachi exceed the safe  $\mu\text{g}/\text{m}^3$  particulate level?

(1)

Put a cross in the correct box.

- A** 6.8
- B** 7.8
- C** 8.8
- D** 9.8

- (ii) Name **two** types of transport that contribute to the high level of air pollution in Pakistan's cities.

(2)

1 .....

2 .....

- (b) Outline why industrial development can lead to higher levels of pollution.

(3)

.....

.....

.....

.....

.....

.....



(c) (i) Identify **two** factors influencing the location of manufacturing industries. (2)

1 .....

2 .....

(ii) Describe **one** problem resulting from the use of child labour. (2)

.....

.....

.....

.....

(d) Explain why Pakistan's present balance of trade is a major problem. (6)

.....

.....

.....

.....

.....

.....

.....

.....

.....

.....

.....

.....

.....

.....

.....

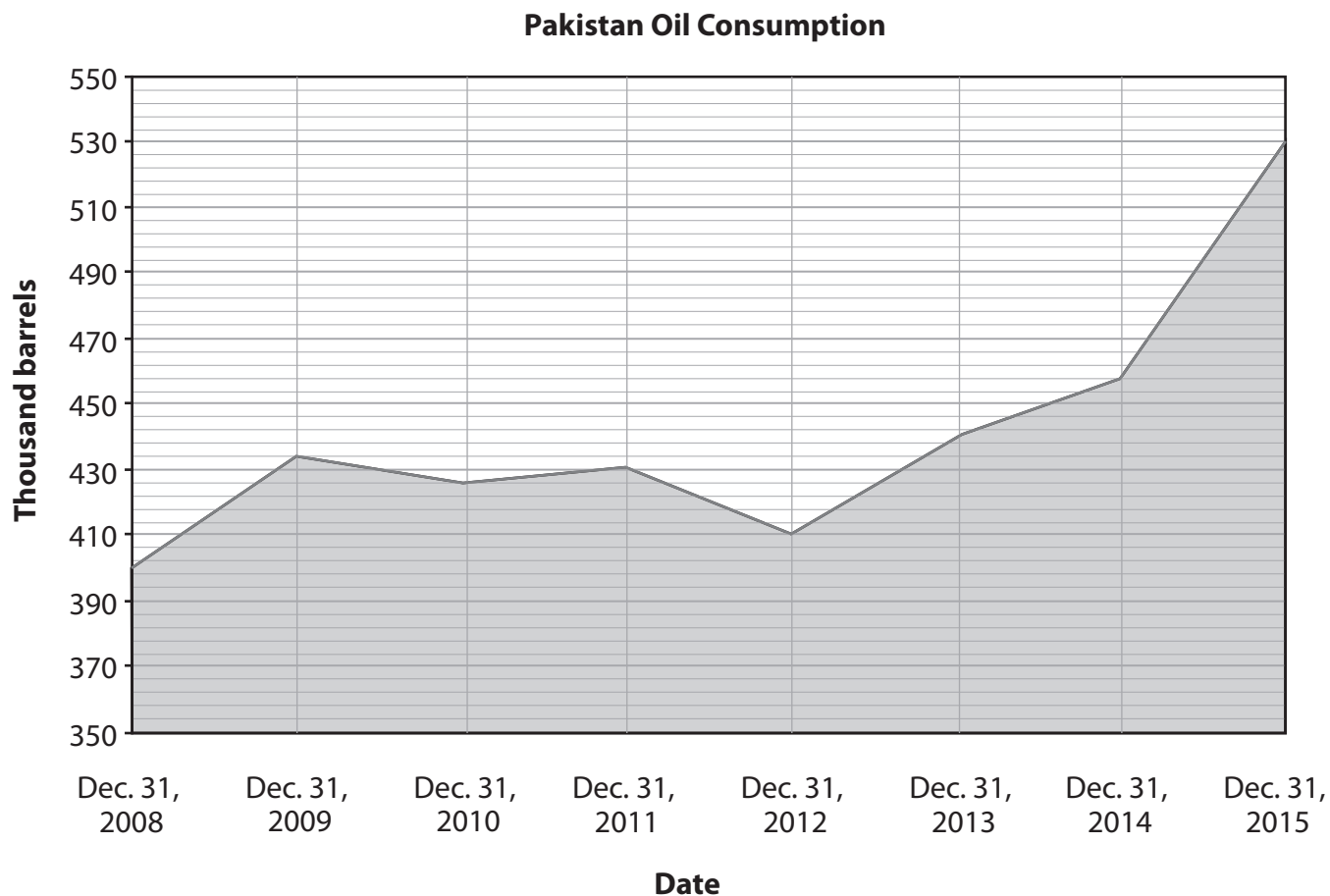
.....

(Total for Question 6 = 16 marks)



If you answer Question 7 put a cross in the box  .

- 7 (a) Study Figure 7 which shows oil consumption in Pakistan between 2008 and 2015.



**Figure 7**

- (i) By how much did oil consumption increase between Dec. 31, 2013 and Dec. 31, 2015?

(1)

Put a cross in the correct box.

- A** 50 thousand barrels
- B** 70 thousand barrels
- C** 90 thousand barrels
- D** 110 thousand barrels



(ii) Suggest **two** reasons for this increase.

(2)

- 1 .....
- 2 .....

(b) Outline **one** reason why Pakistan's energy supply is unreliable.

(3)

- .....
- .....
- .....
- .....
- .....
- .....
- .....

(c) (i) Identify **two** minerals that are economically important to Pakistan.

(2)

- 1 .....
- 2 .....

(ii) Describe **one** method of extracting mineral resources.

(2)

- .....
- .....
- .....
- .....

DO NOT WRITE IN THIS AREA

DO NOT WRITE IN THIS AREA

DO NOT WRITE IN THIS AREA





If you answer Question 8 put a cross in the box  .

- 8 (a) Study Figure 8 which shows the actual and projected percentage of Pakistan's population living in urban areas.

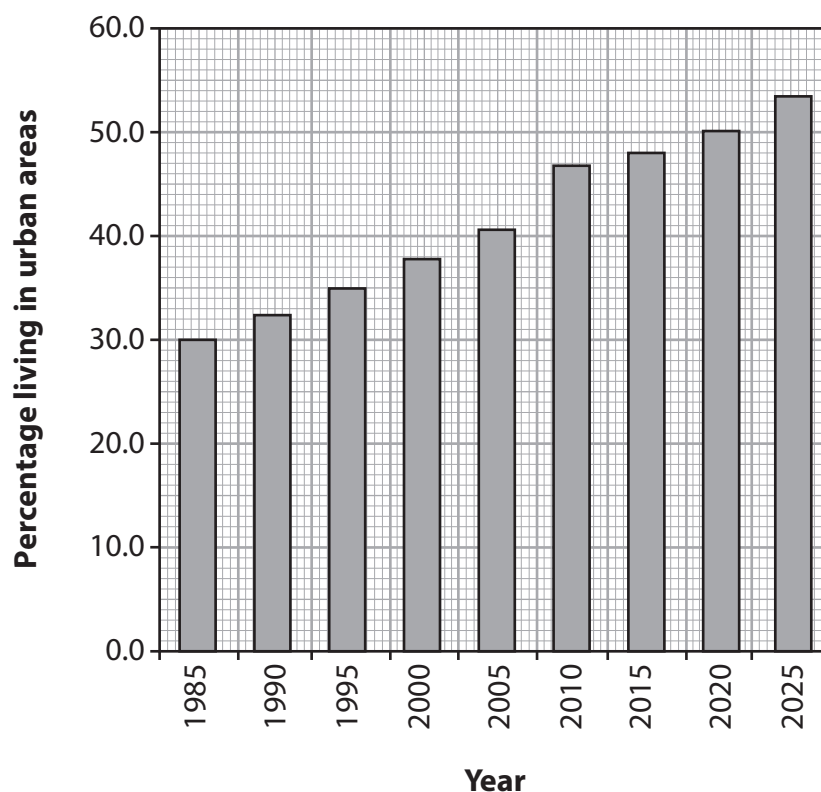


Figure 8

- (i) State the increase in the percentage of people living in urban areas between 1985 and 2015.

(1)

Put a cross in the correct box.

- A 15
- B 18
- C 20
- D 28

DO NOT WRITE IN THIS AREA

DO NOT WRITE IN THIS AREA

DO NOT WRITE IN THIS AREA



DO NOT WRITE IN THIS AREA

DO NOT WRITE IN THIS AREA

DO NOT WRITE IN THIS AREA

(ii) Suggest **two** positive impacts of rapid urbanisation.

(2)

- 1 .....
- 2 .....

(b) Outline **one** reason for migration from Pakistan to other countries.

(3)

- .....
- .....
- .....
- .....
- .....
- .....
- .....

(c) (i) Identify **two** factors that affect the population distribution of Pakistan.

(2)

- 1 .....
- 2 .....

(ii) Describe **one** reason for Pakistan's rapid population growth.

(2)

- .....
- .....
- .....
- .....



(d) Explain the problems in Pakistan caused by rapid urbanisation.

(6)

.....

.....

.....

.....

.....

.....

.....

.....

.....

.....

.....

.....

.....

.....

.....

.....

.....

.....

.....

.....

.....

**(Total for Question 8 = 16 marks)**

**TOTAL FOR PAPER: 60 MARKS**

Figure 3 - Source from: <http://weather.par.com.pk/pakistan-flood-2016/>

Figure 4 - Source from: <http://www.indexmundi.com/facts/pakistan/international-tourism>

Figure 5 - Source from: <http://www.dawn.com/news/1186172>

Figure 6 - Source from: <http://defence.pk/threads/rawalpindi-karachi-and-peshawar-in-top-ten-most-polluted-cities-in-world-who.313694/#ixzz4JliYcFlx>

Figure 7 - Source from: [https://ycharts.com/indicators/pakistan\\_oil\\_consumption](https://ycharts.com/indicators/pakistan_oil_consumption)

Figure 8 - Source from: <http://farzanaec.blogspot.co.uk/>

Every effort has been made to contact copyright holders to obtain their permission for the use of copyright material. Pearson Education Ltd. will, if notified, be happy to rectify any errors or omissions and include any such rectifications in future editions.

