

Write your name here

Surname

Other names

Edexcel

International GCSE

Centre Number

--	--	--	--	--

Candidate Number

--	--	--	--	--

Pakistan Studies

Paper 2: The Land, People and Resources of Pakistan

Friday 11 May 2012 – Morning

Time: 1 hour 30 minutes

Paper Reference

4PA0/02

You do not need any other materials.

Total Marks

Instructions

- Use **black** ink or ball-point pen.
- **Fill in the boxes** at the top of this page with your name, centre number and candidate number.
- Answer **Question 1** and any **three** other questions.
- Answer the questions in the spaces provided
– *there may be more space than you need.*

Information

- The total mark for this paper is 60.
- The marks for **each** question are shown in brackets
– *use this as a guide as to how much time to spend on each question.*

Advice

- Read each question carefully before you start to answer it.
- Write your answers neatly and in good English.
- Keep an eye on the time.
- Check your answers if you have time at the end.

Turn over ►

P39348A

©2012 Pearson Education Ltd.

1/1/1/1/



PEARSON

You MUST answer this question.

1 Study Figure 1 below, an outline map of Pakistan.

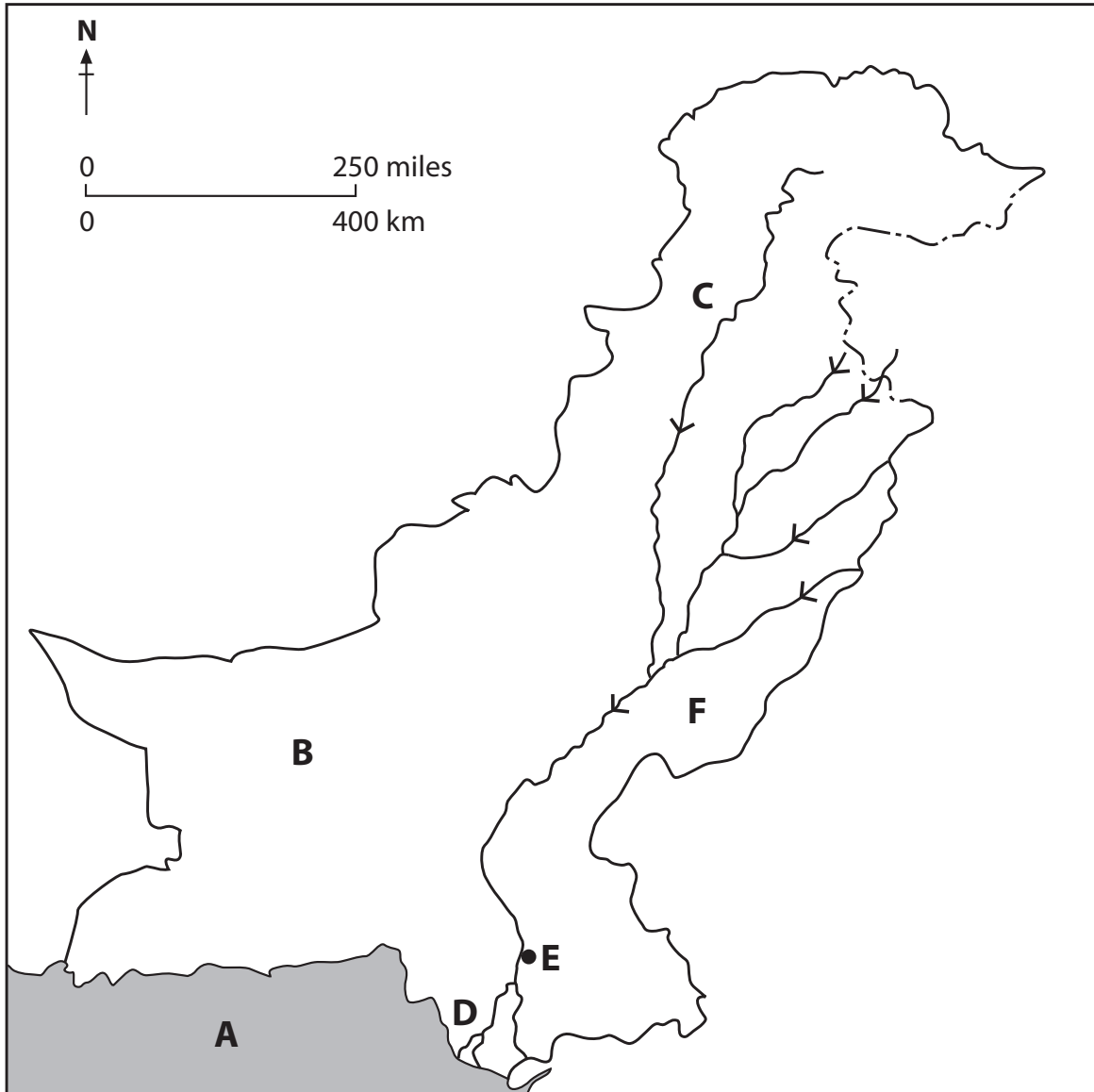


Figure 1



(a) Name the following features shown on the map:

(i) the sea at **A**.

(1)

(ii) the plateau area at **B**.

(1)

(iii) the mineral mined at **C**.

(1)

(iv) the type of vegetation found at **D**.

(1)

(v) the city located at **E**.

(1)

(vi) the main cash crop grown around **F**.

(1)



(b) (i) What is the name of the country located immediately to the south-west of Pakistan? (1)

(ii) Which is the largest province in Pakistan? (1)

(iii) Which is the most densely populated province in Pakistan? (1)

(iv) What is a **bund**? (1)

(v) Name **one** cottage industry. (1)

(vi) Which is Pakistan's largest trading partner? (1)

(Total for Question 1 = 12 marks)



Answer any THREE of questions 2–8.

If you answer Question 2 put a cross in the box .

2 (a) Study Figure 2 which shows the climatic zones of Pakistan.

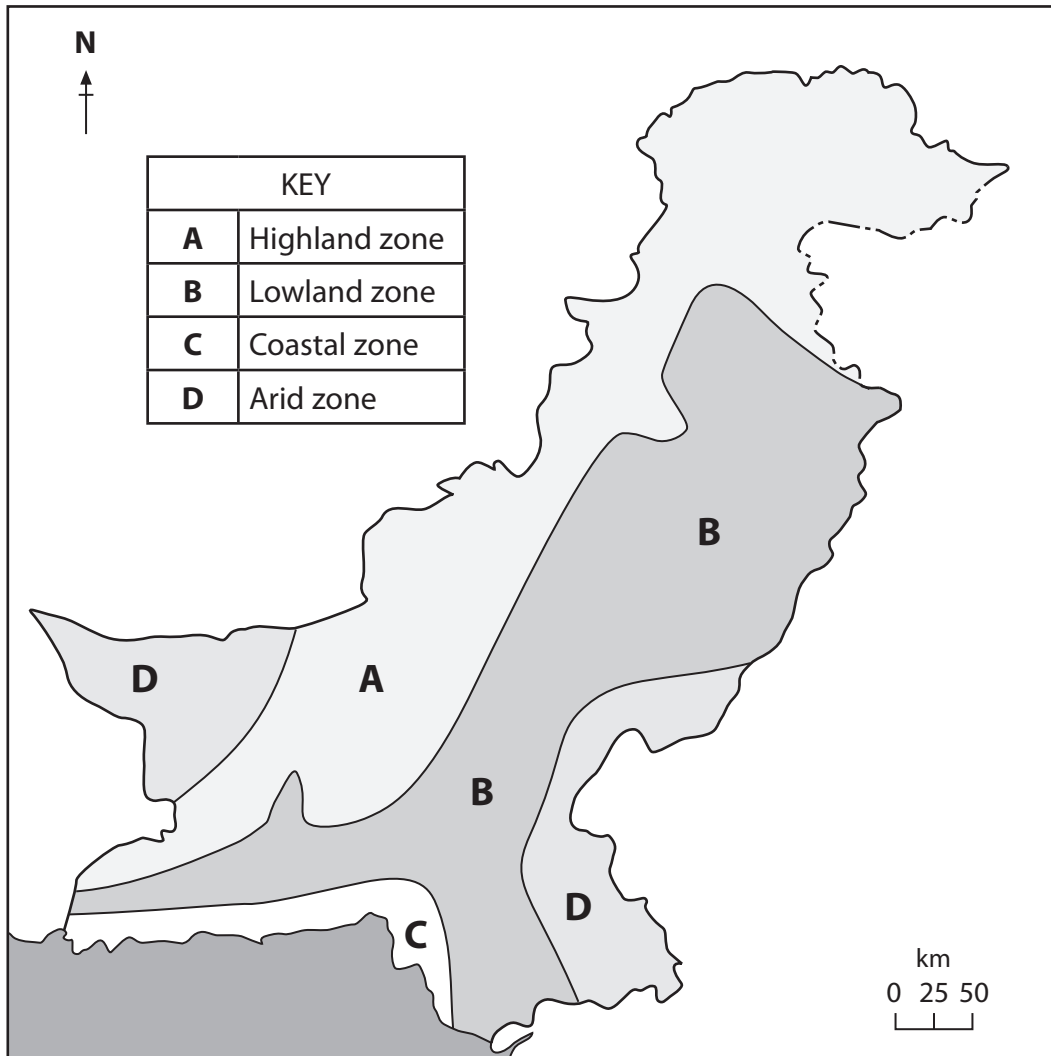


Figure 2

(i) Describe the distribution of arid climate.

(2)

.....

.....

.....

.....



(ii) Suggest reasons for the lack of precipitation in Zone **D**.

(3)

.....

.....

.....

.....

.....

.....

(b) (i) Why do so many rivers in Pakistan flood in July?

(1)

.....

(ii) Identify **two** benefits and **two** problems resulting from this flooding.

(4)

.....

.....

.....

.....

.....

.....

.....

.....

.....

.....



(c) Explain why it is so important to protect Pakistan's forests.

(6)

.....

.....

.....

.....

.....

.....

.....

.....

.....

.....

.....

.....

.....

.....

.....

.....

.....

.....

.....

.....

.....

.....

.....

.....

(Total for Question 2 = 16 marks)



If you answer Question 3 put a cross in the box ☒ .

3 (a) (i) Where in Pakistan are the most fertile soils found? (1)

.....

(ii) What makes the soils so fertile in this location? (3)

.....

.....

.....

.....

.....

.....

(b) (i) Why is irrigation so necessary in Pakistan? (2)

.....

.....

.....

.....

(ii) Describe some of the problems resulting from irrigation. (4)

.....

.....

.....

.....

.....

.....

.....

.....



(c) Examine the effects of and responses to earthquakes in Pakistan.

(6)

.....

.....

.....

.....

.....

.....

.....

.....

.....

.....

.....

.....

.....

.....

.....

.....

.....

.....

.....

.....

.....

.....

.....

(Total for Question 3 = 16 marks)



If you answer Question 4 put a cross in the box .

- 4 (a) Study Figure 3 which shows how birth and death rates in Pakistan have changed since 1941.

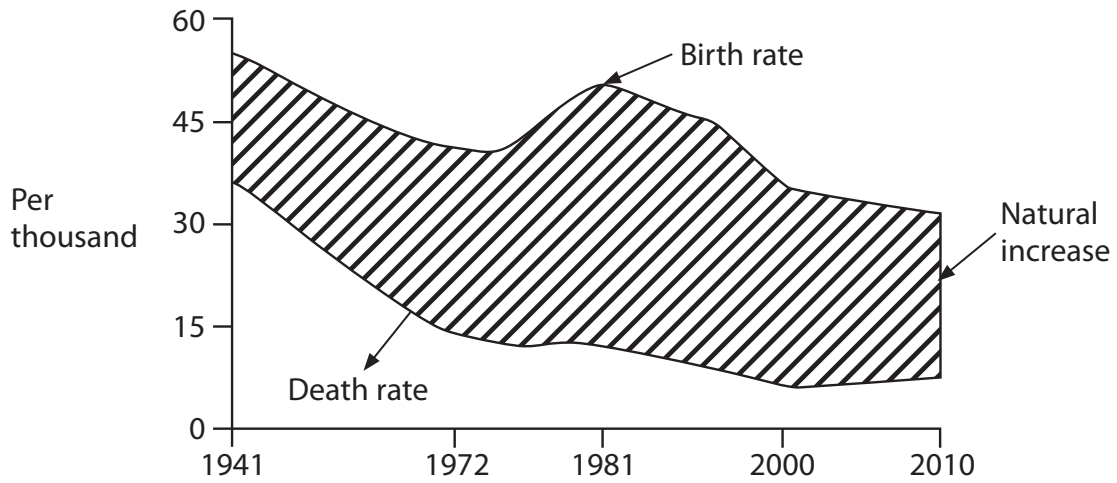


Figure 3

- (i) What was the death rate in 2010?

(1)

- (ii) What were the reasons for the change in the death rate between 1941 and 2010?

(2)



(iii) Describe how the rate of natural increase changed between 1941 and 2010.

(2)

.....

.....

.....

.....

(b) (i) What is the main type of migration taking place **within** Pakistan today?

(1)

.....

(ii) What are the impacts of this type of migration on rural areas?

(4)

.....

.....

.....

.....

.....

.....

.....

.....

.....

.....



(c) Explain how the rapid growth of Pakistan's population might be reduced.

(6)

.....

.....

.....

.....

.....

.....

.....

.....

.....

.....

.....

.....

.....

.....

.....

.....

.....

.....

.....

.....

.....

.....

(Total for Question 4 = 16 marks)



If you answer Question 5 put a cross in the box ☒ .

5 (a) (i) What is meant by the term **population density**?

(2)

.....

.....

.....

.....

(ii) Give **two** factors that cause population density to vary from place to place.

(2)

1.

.....

2.

.....

.....

(b) (i) What is meant by the term **quality of life**?

(2)

.....

.....

.....

.....



(ii) The level of literacy is one indicator of the quality of life.

Name **two** other indicators.

(2)

1.

2.

(iii) For **one** of your answers to (b)(ii), suggest why it is used as an indicator of quality of life.

(2)

.....
.....
.....

(c) Examine the benefits of reducing the illiteracy rate among the female population of Pakistan.

(6)

.....
.....
.....
.....
.....
.....
.....
.....
.....
.....
.....
.....
.....
.....
.....
.....
.....
.....
.....

(Total for Question 5 = 16 marks)



If you answer Question 6 put a cross in the box .

6 (a) (i) What is a multi-national company?

(2)

.....

.....

.....

.....

(ii) Name **one** leading multi-national company in Pakistan.

(1)

.....

(iii) Suggest **one** benefit that multi-national companies bring to Pakistan.

(1)

.....

.....

(b) (i) What is the difference between **renewable** and **non-renewable** sources of energy?

(2)

.....

.....

.....

(ii) Why is energy so important to the growth of manufacturing?

(4)

.....

.....

.....

.....

.....

.....

.....

.....

.....

.....

.....



(c) Examine the problems created by the industrialisation of Pakistan.

(6)

.....

.....

.....

.....

.....

.....

.....

.....

.....

.....

.....

.....

.....

.....

.....

.....

.....

.....

.....

.....

.....

.....

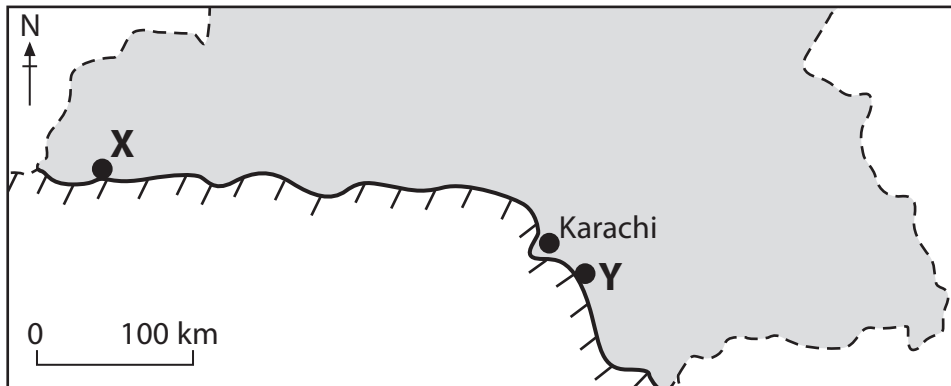
.....

(Total for Question 6 = 16 marks)



If you answer Question 7 put a cross in the box .

7 (a) Study Figure 4 which is an outline map of the coastal area of Pakistan.



Key
----- International boundary ~~~~~ Coastline

Figure 4

(i) Name the **two** new ports **X** and **Y** shown on Figure 4.

(2)

X

Y

(ii) Suggest reasons why these two ports were built.

(2)

.....
.....
.....
.....



(b) (i) What are Pakistan's main imports?

(3)

.....

.....

.....

.....

.....

.....

(ii) Invisible exports involve the provision of services such as banking, airline travel and insurance to overseas customers.

Why are these invisible exports important to Pakistan?

(3)

.....

.....

.....

.....

.....

.....



(c) Examine the limited contribution tourism makes to Pakistan's economy.

(6)

.....

.....

.....

.....

.....

.....

.....

.....

.....

.....

.....

.....

.....

.....

.....

.....

.....

.....

.....

.....

.....

.....

.....

(Total for Question 7 = 16 marks)



If you answer Question 8 put a cross in the box .

8 (a) What is meant by the term **resource management**?

(2)

.....

.....

.....

.....

(b) (i) Name **two** types of environmental pollution in Pakistan.

(2)

1.

2.

(ii) Outline the causes of the **two** types of environmental pollution you named in (b)(i).

(4)

.....

.....

.....

.....

.....

.....

.....

.....

.....

.....

(iii) Suggest **one** reason why the level of pollution in Pakistan is not being reduced.

(2)

.....

.....

.....

.....



(c) Examine how the differences in regional development in Pakistan are being reduced.

(6)

.....

.....

.....

.....

.....

.....

.....

.....

.....

.....

.....

.....

.....

.....

.....

.....

.....

.....

.....

.....

.....

.....

.....

(Total for Question 8 = 16 marks)

TOTAL FOR PAPER = 60 MARKS



BLANK PAGE



BLANK PAGE



BLANK PAGE

