

UNIVERSITY OF CAMBRIDGE INTERNATIONAL EXAMINATIONS
International General Certificate of Secondary Education

www.XtremePapers.com

0448 PAKISTAN STUDIES

0448/02

Paper 2

Due to a security breach we required all candidates in Pakistan who sat the paper for 0448/02 to attend a re-sit examination in June 2013. Candidates outside of Pakistan sat only the original paper and were not involved in a re-sit.



UNIVERSITY *of* CAMBRIDGE
International Examinations



UNIVERSITY OF CAMBRIDGE INTERNATIONAL EXAMINATIONS
International General Certificate of Secondary Education

CANDIDATE
NAME

CENTRE
NUMBER

--	--	--	--	--

CANDIDATE
NUMBER

--	--	--	--	--



PAKISTAN STUDIES

0448/02

Paper 2 The Environment of Pakistan

May/June 2013

1 hour 30 minutes

Candidates answer on the Question Paper.

Additional Materials: Insert

READ THESE INSTRUCTIONS FIRST

Write your Centre number, candidate number and name in the spaces provided.

Write in dark blue or black pen.

Do not use staples, paper clips, highlighters, glue or correction fluid.

DO NOT WRITE IN ANY BARCODES.

Answer any **three** questions.

The Insert contains Photograph A for Question 1, Photographs B, C and D for Question 3.

The Insert is **not** required by the Examiner.

The number of marks is given in brackets [] at the end of each question or part question.

This document consists of **21** printed pages and **3** blank pages.



1 (a) Study Fig. 1, which shows the rainfall of three cities in northern Pakistan.

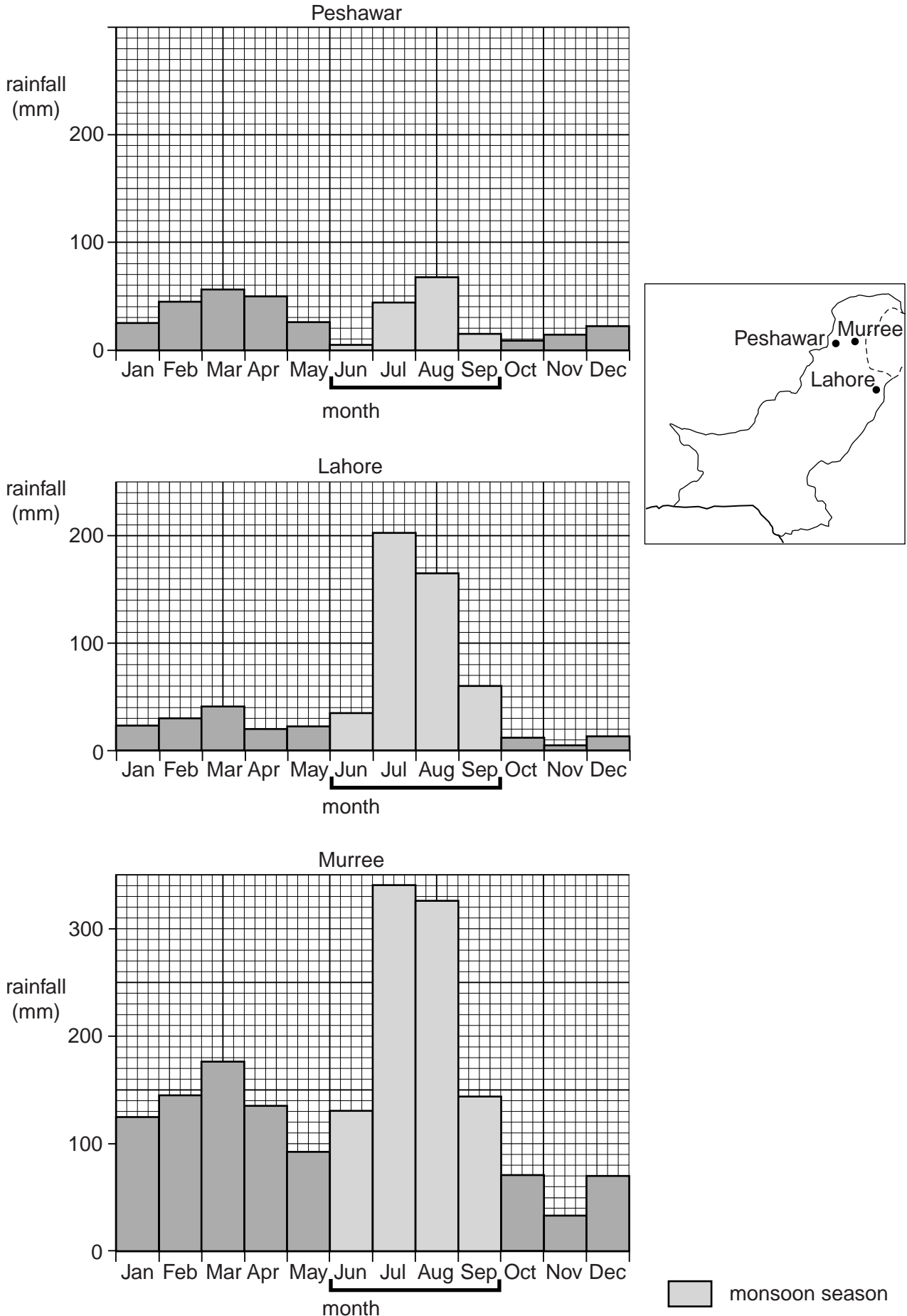


Fig. 1

(i) For each of the following cities state the maximum rainfall and the month in which it falls.

Peshawar rainfall month

Lahore rainfall month

Murree rainfall month [3]

(ii) Compare the amount and pattern of rainfall in Lahore and Peshawar **during the monsoon season**.

.....
.....
.....
.....
.....
.....
..... [3]

(iii) Explain how the monsoon winds bring rainfall to northern Pakistan.

.....
.....
.....
.....
.....
.....
.....
..... [4]

(iv) Suggest **two** reasons why Murree has a higher rainfall than Lahore and Peshawar.

reason 1
.....
reason 2
..... [2]

(c) Explain the benefits and problems of high rainfall on **either** farming **or** road travel.

Circle your choice. FARMING ROAD TRAVEL

*For
Examiner's
Use*

benefits

.....

.....

.....

.....

.....

.....

.....

.....

problems

.....

.....

.....

.....

.....

.....

.....

.....

.....

..... [6]

[Total: 25]

(b) Name **three** types of irrigation, other than perennial canals, used in Pakistan. Explain briefly how each type works.

1

.....

.....

2

.....

.....

3

.....

..... [6]

(c) Explain how a perennial supply of water can damage farmland.

.....

.....

.....

.....

.....

.....

.....

.....

.....

..... [4]

(d) Study Fig. 3, which shows the main users of water in the Punjab.

For
Examiner's
Use

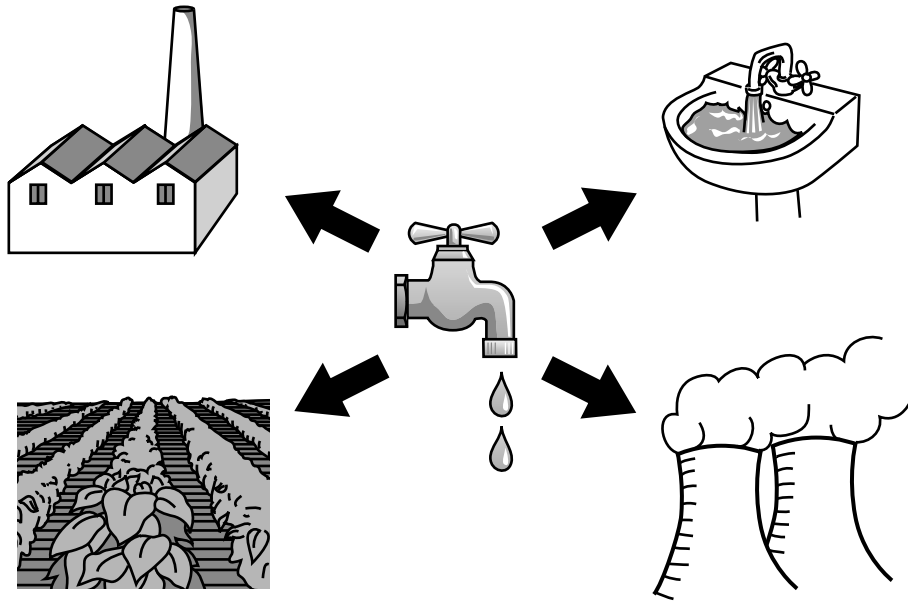


Fig. 3

Name **two** conflicting users of water supplies in the Punjab shown on Fig. 3. Explain briefly why each user thinks that they should have more water.

users 1 2

reason for user 1 needing more water

.....
.....
.....
.....
.....

reason for user 2 needing more water

.....
.....
.....
.....
.....

[5]

.....

.....

.....

.....

..... [6]

(c) Study Fig. 4, which shows sugar cane production in Pakistan.

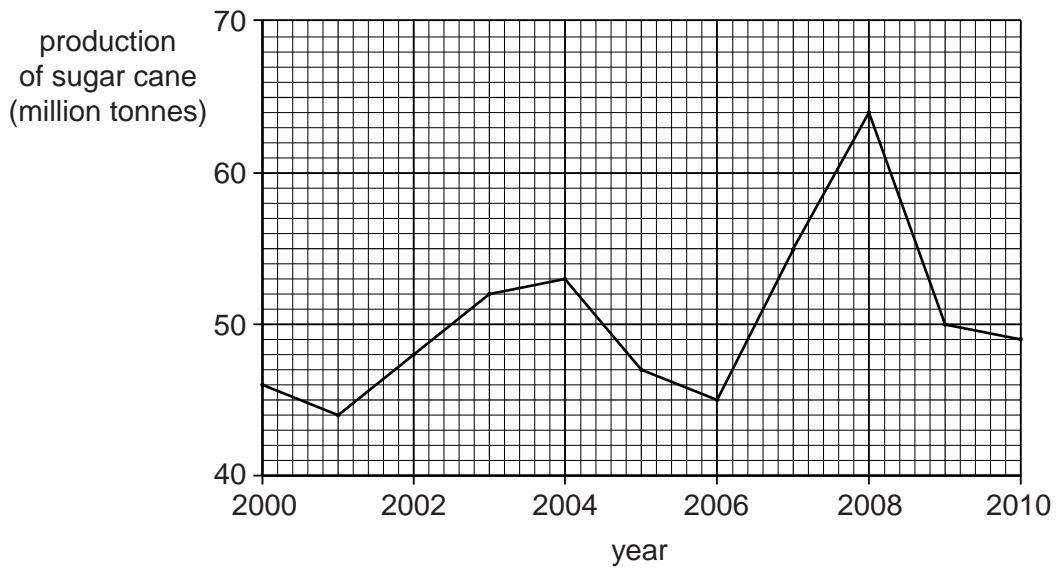


Fig. 4

(i) What was the highest annual production, and in which year did it occur?
 production year [2]

(ii) By how much did production decrease between 2008 and 2010?
 [1]

Question 4 begins on page 14.

4 (a) Study Fig. 5, which shows thermal and hydel (HEP) power stations in Pakistan.

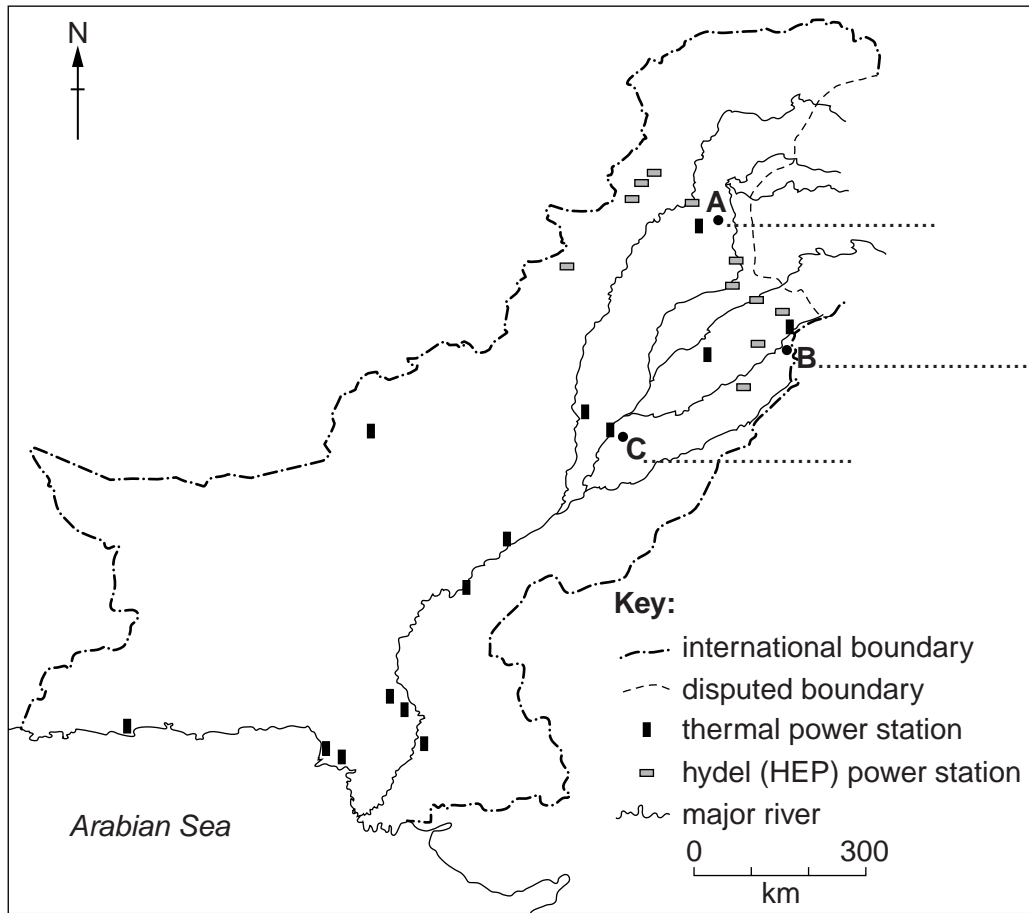


Fig. 5

(i) Name the cities **A**, **B** and **C**.

A

B

C

[3]

(c) Study Fig. 6, which shows the percentages of fuels used for electricity supply.

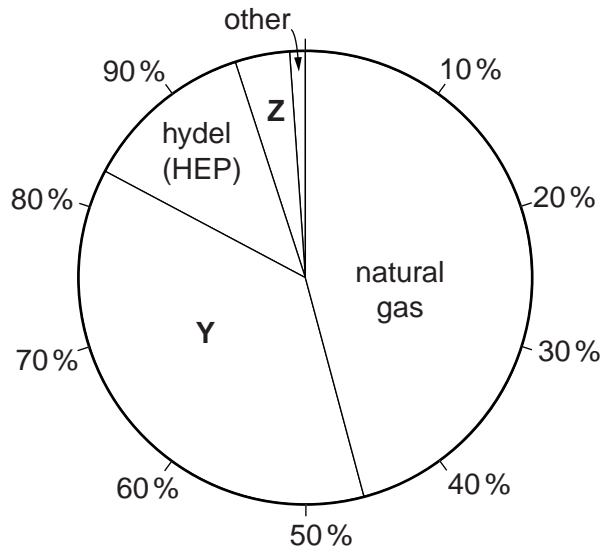


Fig. 6

(i) Use Fig. 6 to state the percentage of electricity generated from natural gas.

.....[1]

(ii) Name the **two** other fossil fuels **Y** and **Z**, and explain why each is used less than natural gas.

Y **Z**

explanation

.....
.....
.....
.....
.....
.....
.....[3]

5 (a) Study Fig. 7, which shows a population pyramid for Pakistan.

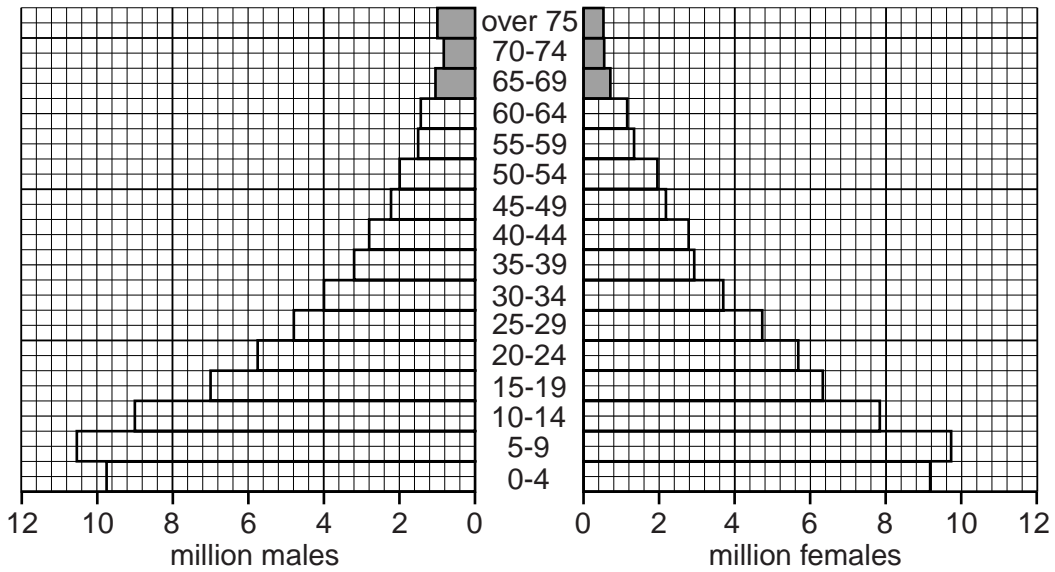


Fig. 7

(i) What is the age range of the shaded portion of the population?

..... [1]

(ii) Estimate how many people there are in this sector of the population.

4 million 5 million 6 million?

Circle the correct answer. [1]

(iii) Why is this figure likely to increase in the next 20 years?

.....

 [2]

(iv) What pressures will this increase put on the working population?

.....

 [2]

BLANK PAGE

Copyright Acknowledgements:

Photograph B for Question 3 © 1Apix/Alamy
Photograph C for Question 3 © Ref: 155384207; Jodi Jacobson / Getty Images.
Photograph D for Question 3 © Ref: AKXNDN(1); imagebroker / Alamy.

Permission to reproduce items where third-party owned material protected by copyright is included has been sought and cleared where possible. Every reasonable effort has been made by the publisher (UCLES) to trace copyright holders, but if any items requiring clearance have unwittingly been included, the publisher will be pleased to make amends at the earliest possible opportunity.

University of Cambridge International Examinations is part of the Cambridge Assessment Group. Cambridge Assessment is the brand name of University of Cambridge Local Examinations Syndicate (UCLES), which is itself a department of the University of Cambridge.