



UNIVERSITY OF CAMBRIDGE INTERNATIONAL EXAMINATIONS
International General Certificate of Secondary Education

CANDIDATE
NAME

CENTRE
NUMBER

--	--	--	--	--

CANDIDATE
NUMBER

--	--	--	--

* 8 7 3 2 3 9 2 5 2 9 *

CAMBRIDGE INTERNATIONAL MATHEMATICS

0607/05

Paper 5 (Core)

May/June 2013

1 hour

Candidates answer on the Question Paper.

Additional Materials: Graphics Calculator

READ THESE INSTRUCTIONS FIRST

Write your Centre number, candidate number and name on all the work you hand in.

Write in dark blue or black pen.

Do not use staples, paper clips, highlighters, glue or correction fluid.

You may use a pencil for any diagrams or graphs.

DO NOT WRITE IN ANY BARCODES.

Answer **all** the questions.

You must show all relevant working to gain full marks for correct methods, including sketches.

In this paper you will also be assessed on your ability to provide full reasons and communicate your mathematics clearly and precisely.

At the end of the examination, fasten all your work securely together.

The total number of marks for this paper is 24.

This document consists of **5** printed pages and **3** blank pages.



Answer **all** the questions.

For
Examiner's
Use

INVESTIGATION

DIAGONALS OF RECTANGLES

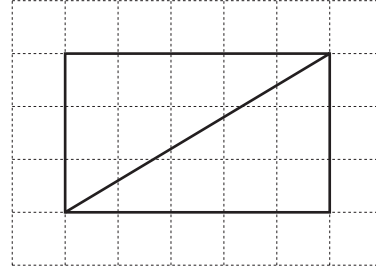
Rectangles are drawn on a grid.

The sides of each rectangle lie on gridlines and the length is greater than or equal to the width.

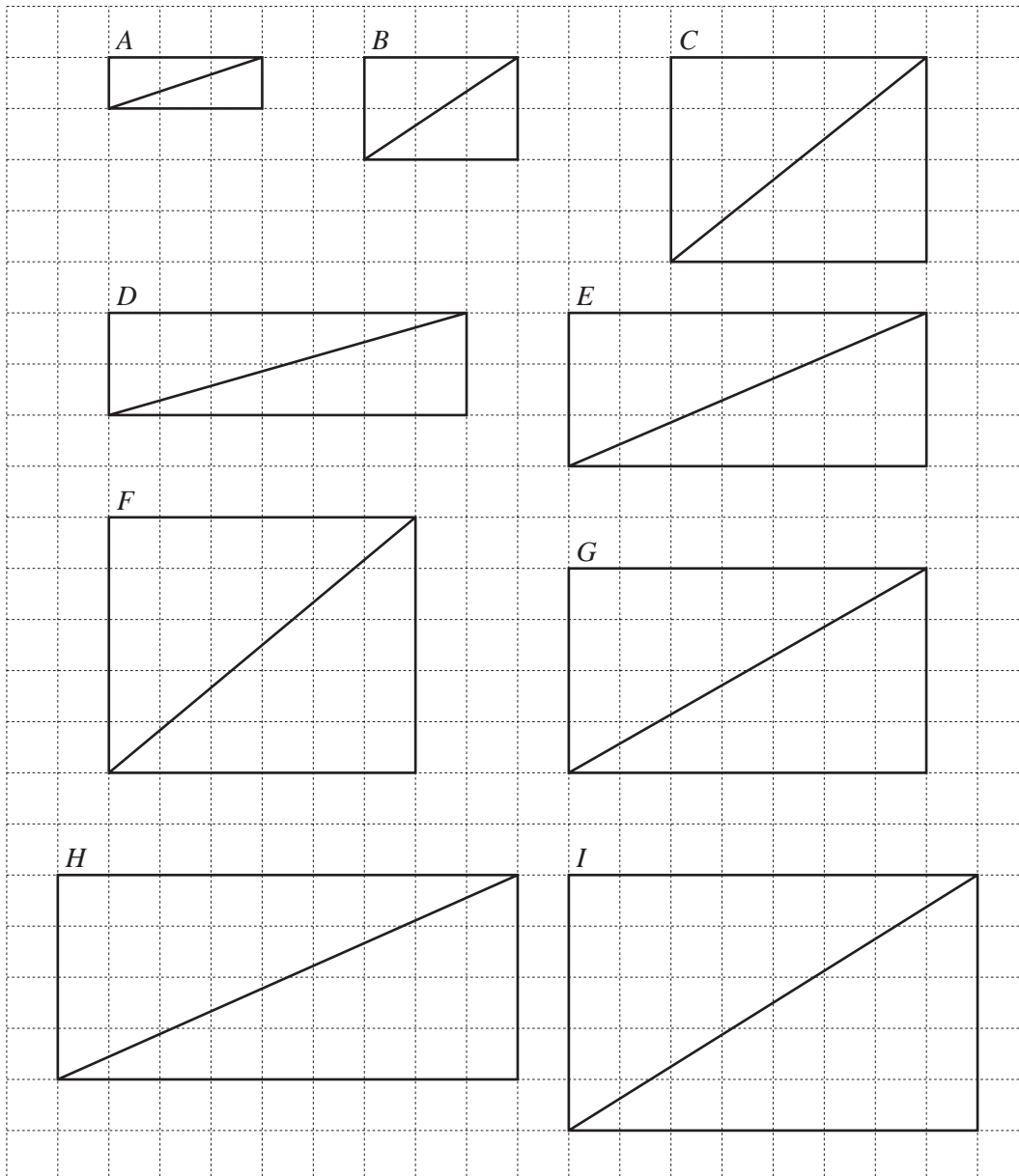
This investigation looks for a method for calculating the number of small squares through which a diagonal passes.

Example

The diagram shows a rectangle with length 5 and width 3.
Its diagonal passes through 7 small squares.



1



(a) Complete the table for the rectangles A to I .

Rectangle	Length (x)	Width (y)	Number of squares passed through (S)
<i>Example</i>	5	3	7
A			
B			
C			
D			
E			
F			
G			
H	9	4	12
I			

(b) Write down an equation connecting $x + y$ and S .

.....

(c) Use this equation to find x and y for the three rectangles where the diagonal passes through 6 squares.

$$x = \dots\dots\dots \quad y = \dots\dots\dots$$

$$x = \dots\dots\dots \quad y = \dots\dots\dots$$

$$x = \dots\dots\dots \quad y = \dots\dots\dots$$

For
Examiner's
Use

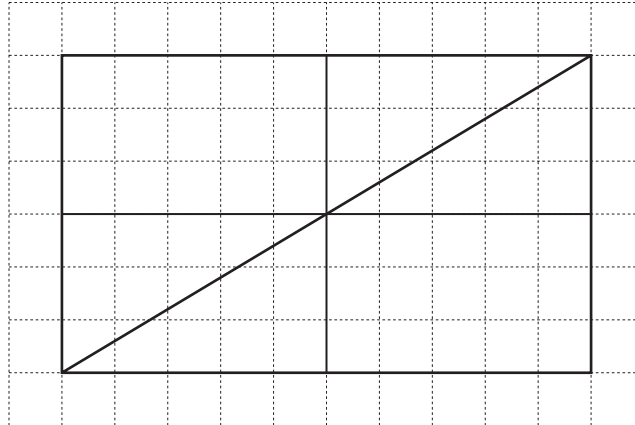
- 2 When x and y do not have a common factor, the x by y rectangle is called a basic rectangle.

In **question 1**, x and y did not have a common factor.
In this question x and y do have a common factor.

Example

The diagram below shows a large rectangle with $x = 10$ and $y = 6$.
 x and y have a common factor of **2**.

The basic 5 by 3 rectangle has a diagonal passing through 7 squares.
So the 10 by 6 rectangle has a diagonal passing through $2 \times 7 = 14$ squares.



Complete the following table.

Length (x)	Width (y)	Common factor	Dimensions of the basic rectangle	Calculation to find S
10	6	2	5 by 3	$2 \times 7 = 14$
6	2			=
8	6			=
25	15			=
13	13			=

- 3 A rectangle has an area of 18 squares.

Use **question 1** and **question 2** to find the minimum and maximum values of S .

minimum =

maximum =

- 4 The diagonal of a rectangle passes through 4 squares.

Use **question 1** and **question 2** to find the length and the width of each possible rectangle.

*For
Examiner's
Use*

BLANK PAGE

BLANK PAGE

BLANK PAGE

Permission to reproduce items where third-party owned material protected by copyright is included has been sought and cleared where possible. Every reasonable effort has been made by the publisher (UCLES) to trace copyright holders, but if any items requiring clearance have unwittingly been included, the publisher will be pleased to make amends at the earliest possible opportunity.

University of Cambridge International Examinations is part of the Cambridge Assessment Group. Cambridge Assessment is the brand name of University of Cambridge Local Examinations Syndicate (UCLES), which is itself a department of the University of Cambridge.